




ずけい た ざん 図形の足し算 ①


2つ形を足したらどんな形を作れるか考えて
 作れる形に○、作れない形に×を () に書きましょう。

①  +  =


ア ()



イ ()




ウ ()




②  +  =

ア ()



イ ()



ウ ()

