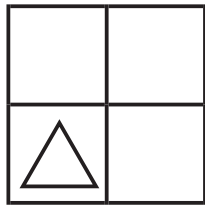
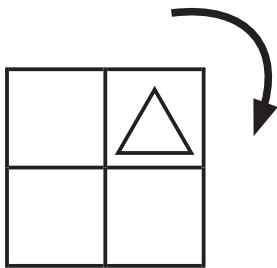
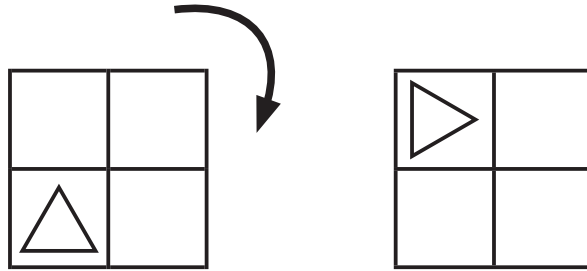


ずけい かいてんもんだい  
**図形の回転問題 C (答え)**

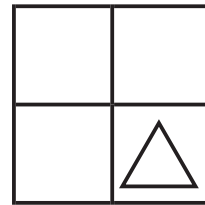
てほん おな  
 お手本と同じように図を矢印の方向に回転させます。

ずけい おむ  
 図形はどの向きになりますか？ 正しいものに○をつけましょう。

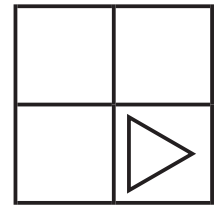
- てほん  
 お手本 -



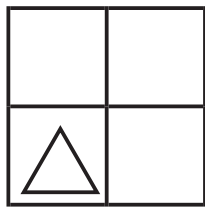
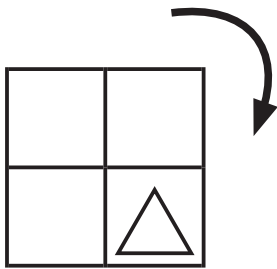
( )



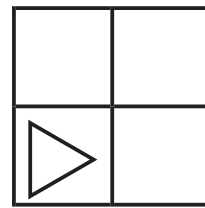
( )



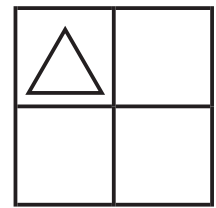
( ○ )



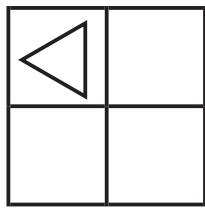
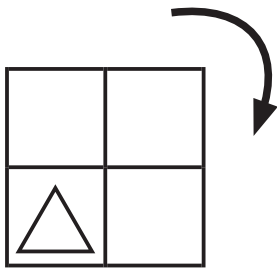
( )



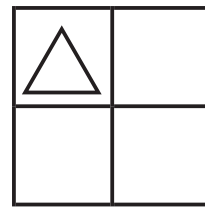
( ○ )



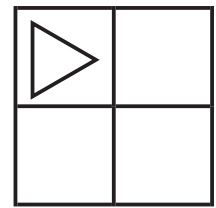
( )



( )



( )



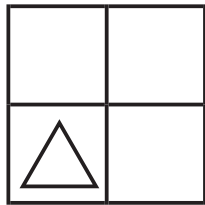
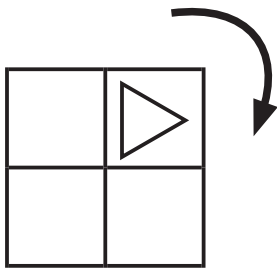
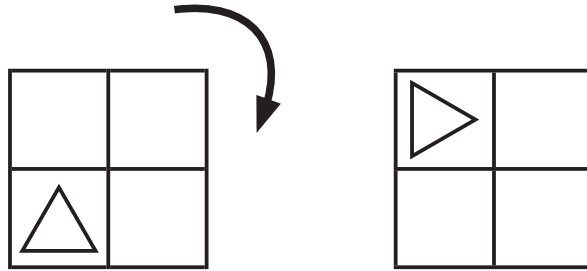
( ○ )

ずけい かいてんもんだい  
 図形の回転問題 C (答え)

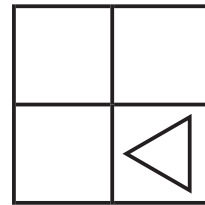
てほん おな  
 お手本と同じように図を矢印の方向に回転させます。

ずけい む  
 図形はどの向きになりますか？ 正しいものに○をつけましょう。

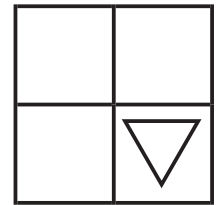
- てほん  
 お手本 -



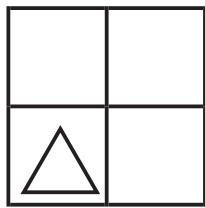
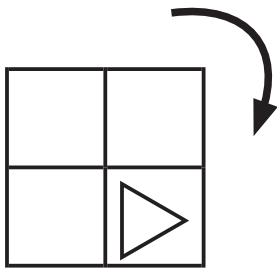
( )



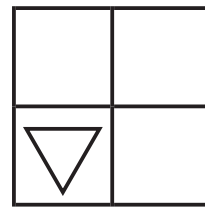
( )



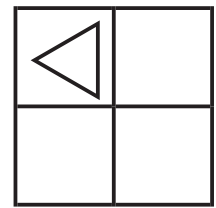
( ○ )



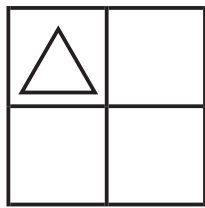
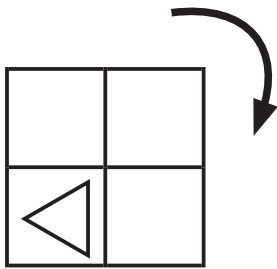
( )



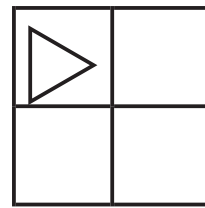
( ○ )



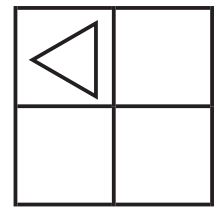
( )



( ○ )



( )



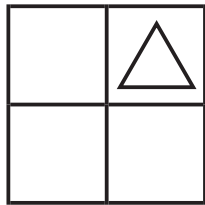
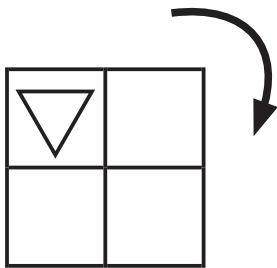
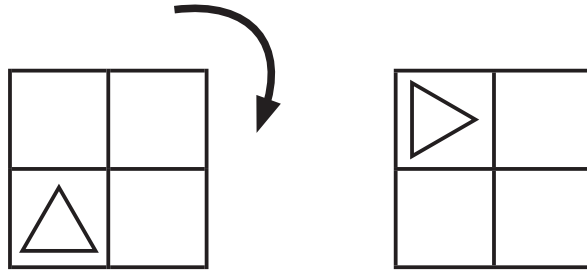
( )

ずけい かいてんもんだい  
 図形の回転問題 C (答え)

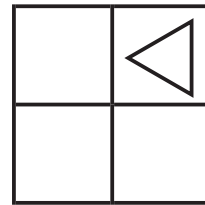
てほん おな  
 お手本と同じように図を矢印の方向に回転させます。

ずけい む  
 図形はどの向きになりますか？ 正しいものに○をつけましょう。

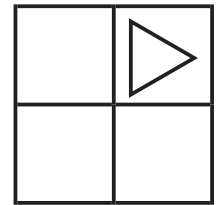
- てほん  
 お手本 -



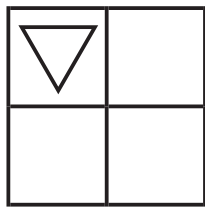
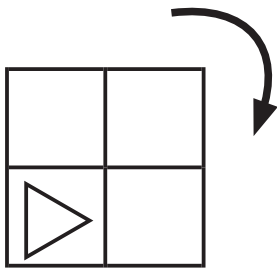
( )



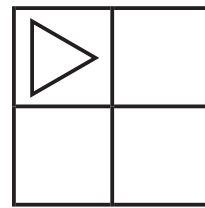
( ○ )



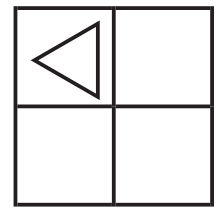
( )



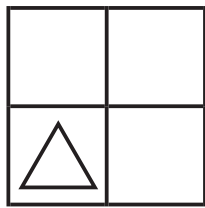
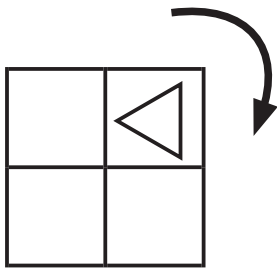
( ○ )



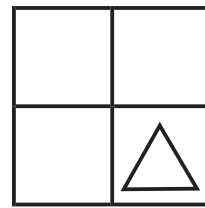
( )



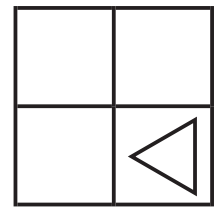
( )



( )



( ○ )



( )