
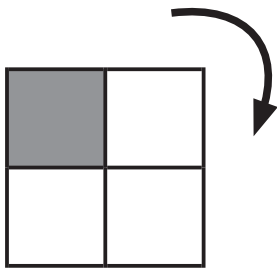
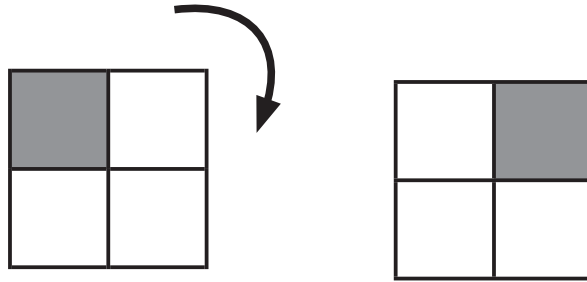


ず けい かいてんもんだい
図形の回転問題 B (答え)


てほん おな
 お手本と同じように図を矢印の方向に回転させます。

それぞれどのようになりますか？ 正しいものに○をつけましょう。


- お手本 -



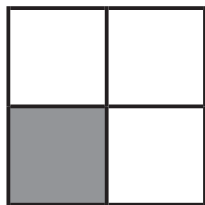
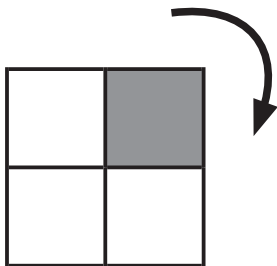
()




()




(○)



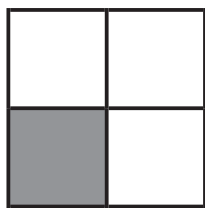
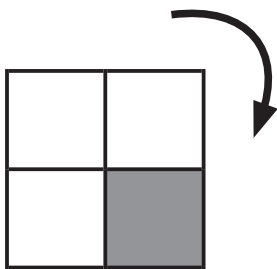
()




()




(○)



(○)



()




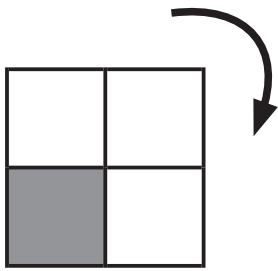
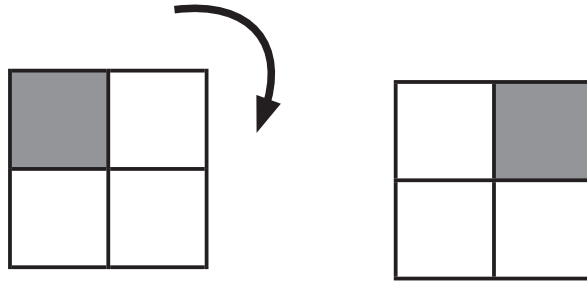
()

ずけい かいてんもんだい
 図形の回転問題 B (答え)

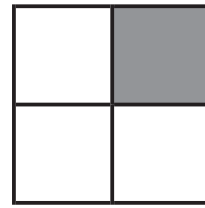
てほん おな
 お手本と同じように図を矢印の方向に回転させます。

それぞれどのようになりますか？ 正しいものに○をつけましょう。


- てほん
 お手本 -




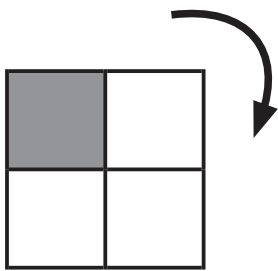
(○)




()




()




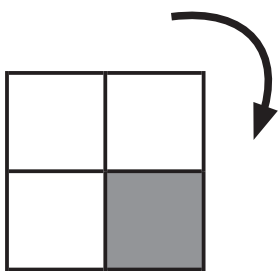
()




()




(○)



()



(○)




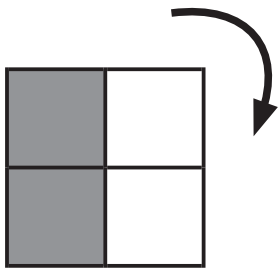
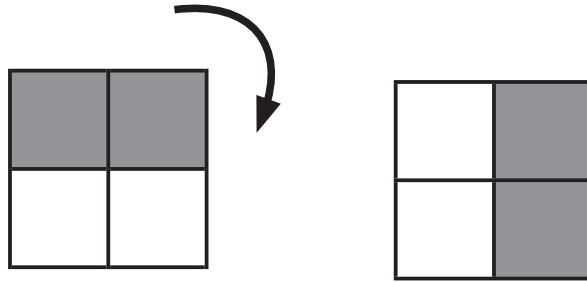
()

ずけい かいてんもんだい
 図形の回転問題 B (答え)


てほん おな ず やじるし ほうこう かいてん
 お手本と同じように図を矢印の方向に回転させます。

それぞれどのようになりますか？ 正しいものに○をつけましょう。


- お手本 -




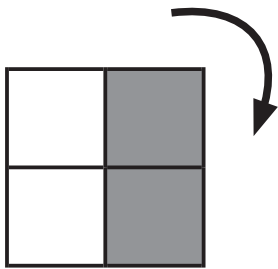
()



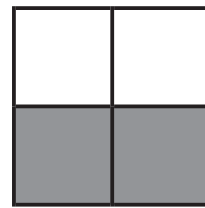
()




(○)




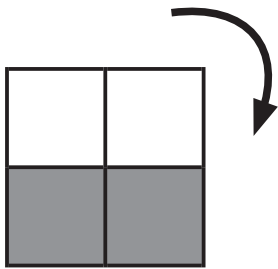
()




(○)




()



()



()



(○)