
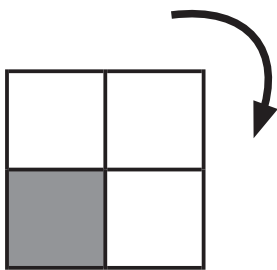
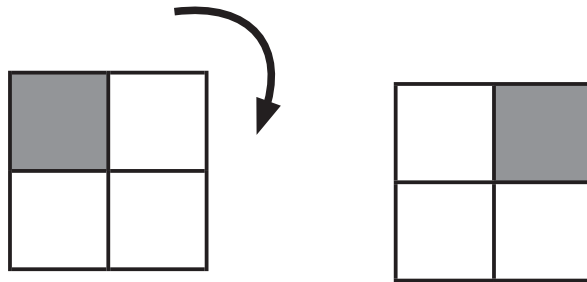


ずけい かいてんもんだい  
**図形の回転問題 B**


てほん おな ず やじるし ほうこう かいてん  
 お手本と同じように図を矢印の方向に回転させます。

それぞれどのようになりますか？ <sup>ただ</sup>正しいものに○をつけましょう。


- てほん  
 お手本 -




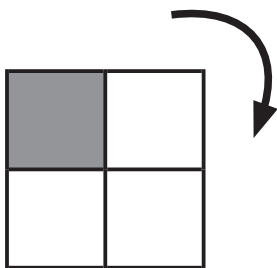
( )




( )




( )




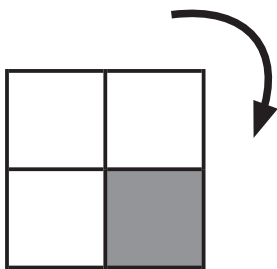
( )




( )




( )



( )



( )



( )