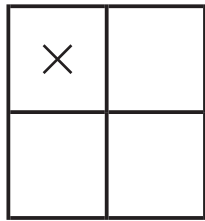
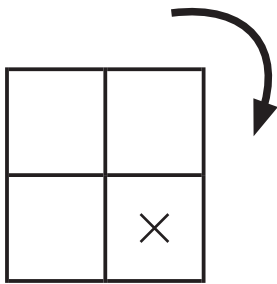
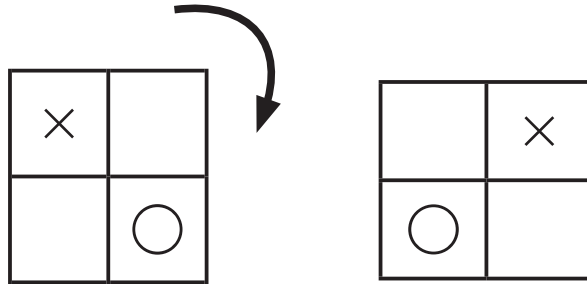


ずけい かいてんもんだい
図形の回転問題 A

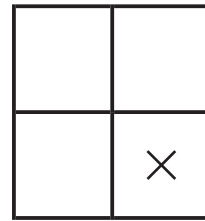
てほん おな ず やじるし ほうこう かいてん
 お手本と同じように図を矢印の方向に回転させます。

それぞれどのようになりますか？ ^{ただ}正しいものに○をつけましょう。

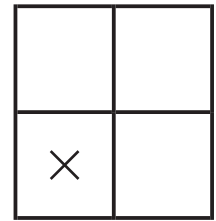
- お手本 -



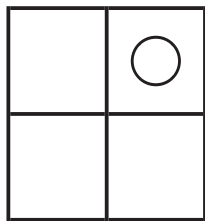
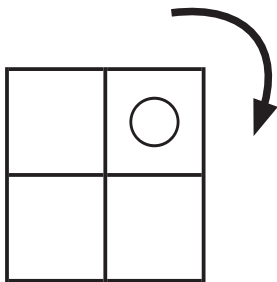
()



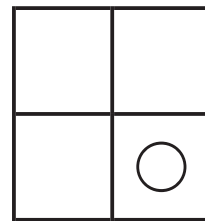
()



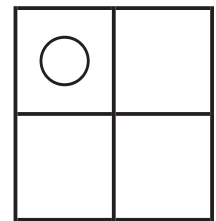
()



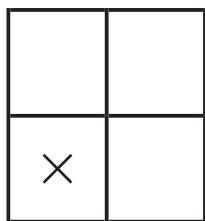
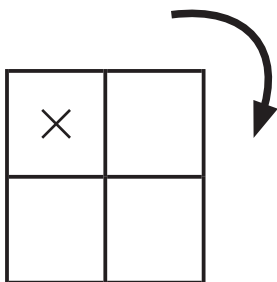
()



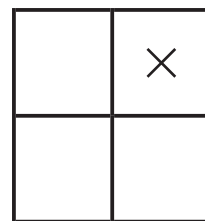
()



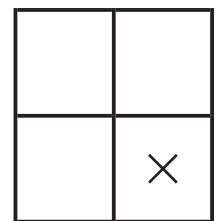
()



()



()



()