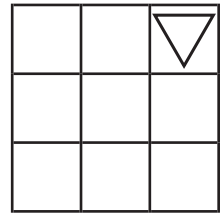
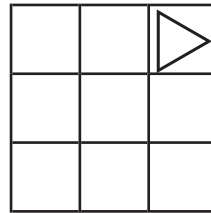
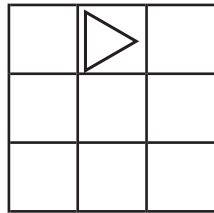
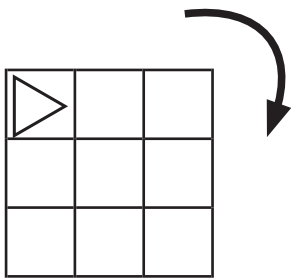
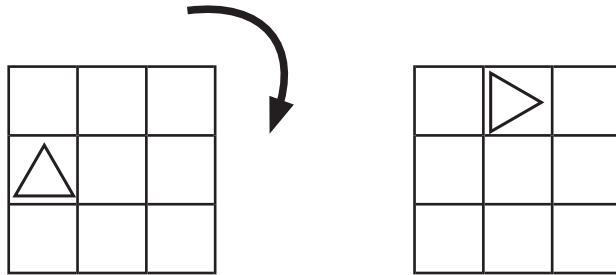


ずけい かいてんもんだい
図形の回転問題C (9ます)

てほん おな
 お手本と同じように図を矢印の方向に回転させます。

ずけい おむ
 図形はどの向きになりますか？ 正しいものに○をつけましょう。

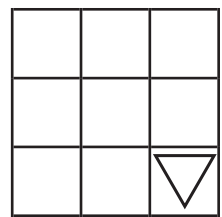
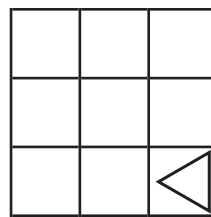
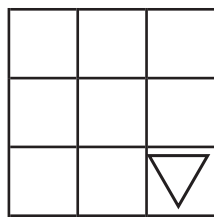
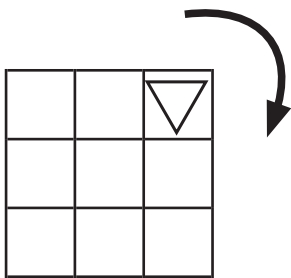
- てほん
 お手本 -



()

()

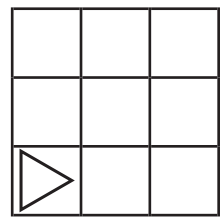
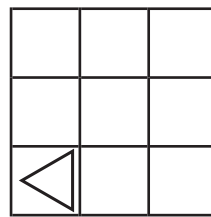
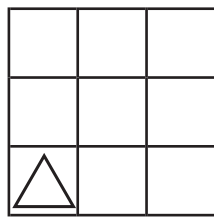
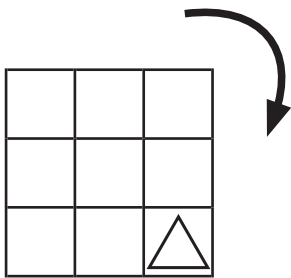
()



()

()

()



()

()

()