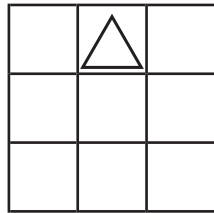
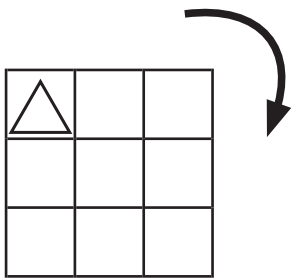
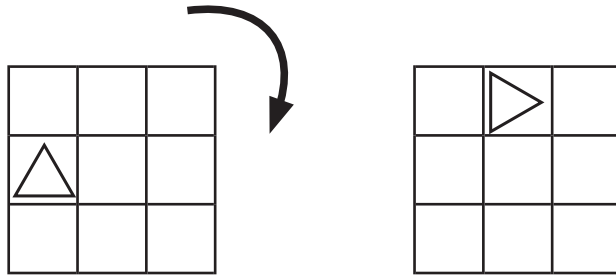


ずけい かいてんもんだい
図形の回転問題C (9ます)

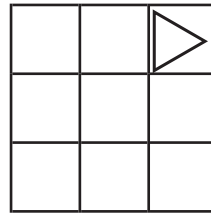
てほん おな
 お手本と同じように図を矢印の方向に回転させます。

ずけい おむ
 図形はどの向きになりますか？ 正しいものに○をつけましょう。

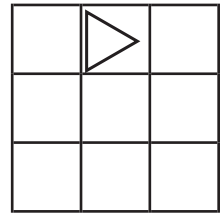
- てほん
 お手本 -



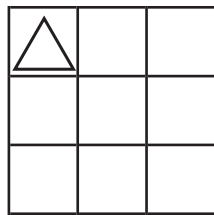
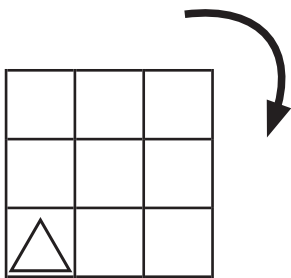
()



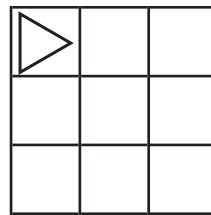
()



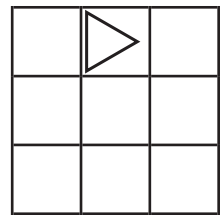
()



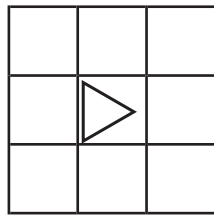
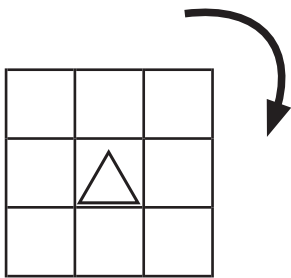
()



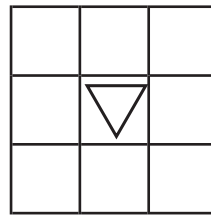
()



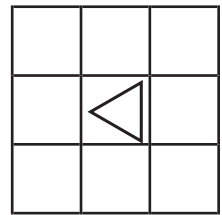
()



()



()



()