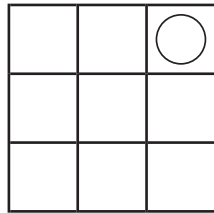
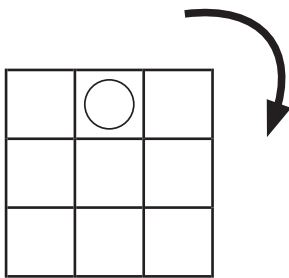
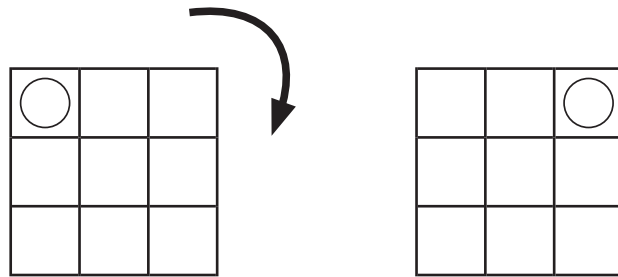


ずけい かいてんもんだい  
 図形の回転問題 A (9ます) (答え)

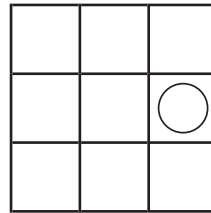
てほん おな ず やじるし ほうこう かいてん  
 お手本と同じように図を矢印の方向に回転させます。

それぞれどのようになりますか？ 正しいものに○をつけましょう。

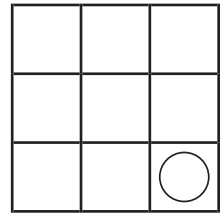
- お手本 -



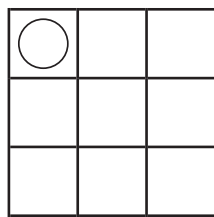
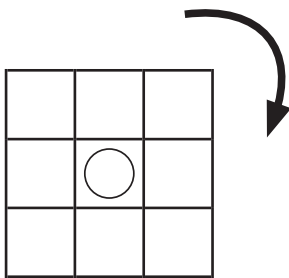
( )



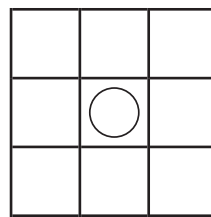
( ○ )



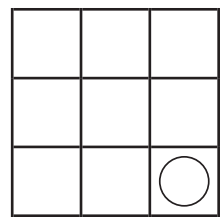
( )



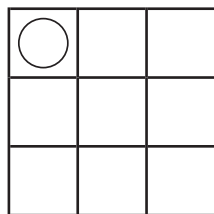
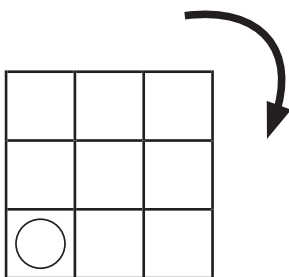
( )



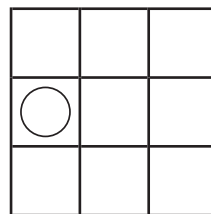
( ○ )



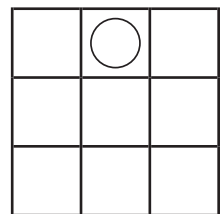
( )



( ○ )



( )



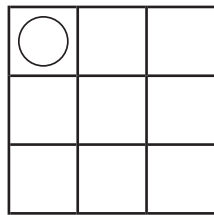
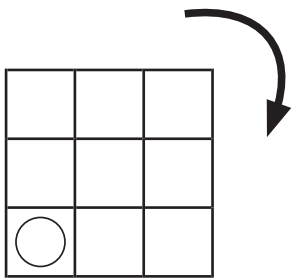
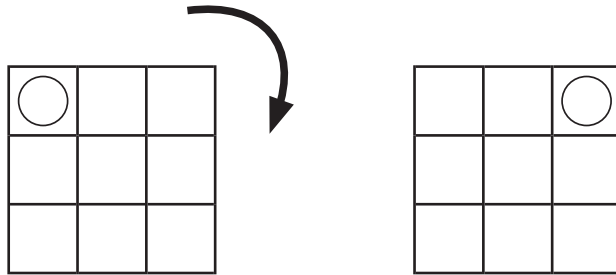
( )

ずけい かいてんもんだい  
**図形の回転問題 A (9ます) (答え)**

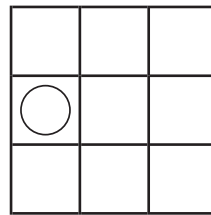
てほん おな ず やじるし ほうこう かいてん  
 お手本と同じように図を矢印の方向に回転させます。

それぞれどのようになりますか？ 正しいものに○をつけましょう。

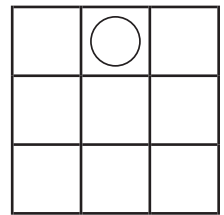
- お手本 -



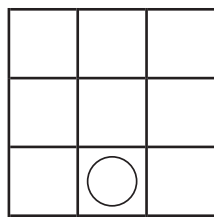
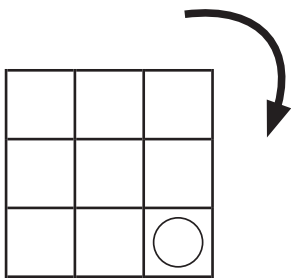
(  )



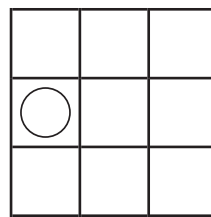
(     )



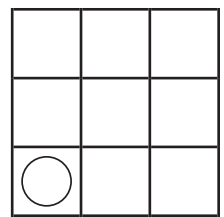
(     )



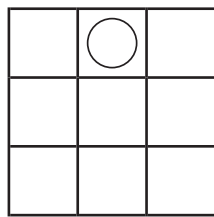
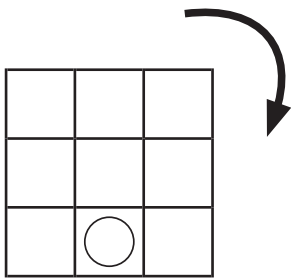
(     )



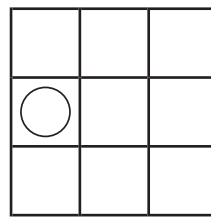
(     )



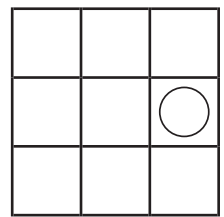
(  )



(     )



(  )



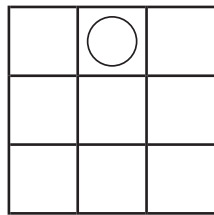
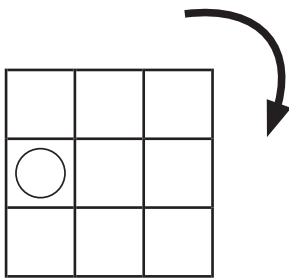
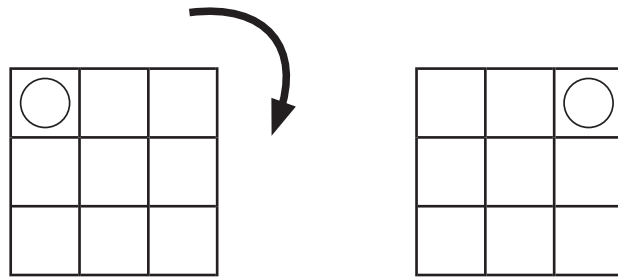
(     )

ずけい かいてんもんだい  
 図形の回転問題 A (9ます) (答え)

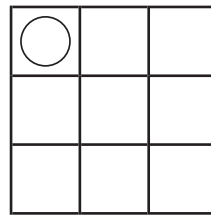
てほん おな ず やじるし ほうこう かいてん  
 お手本と同じように図を矢印の方向に回転させます。

それぞれどのようになりますか？ 正しいものに○をつけましょう。

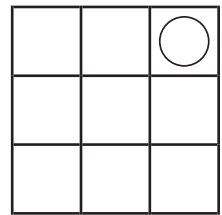
- お手本 -



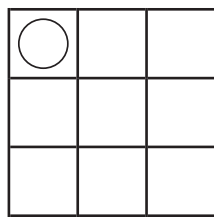
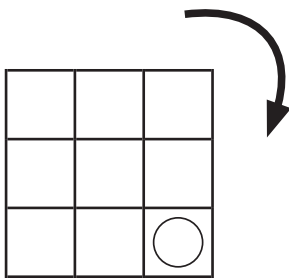
(  )



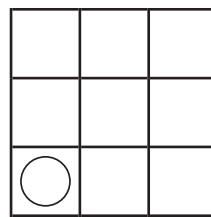
( )



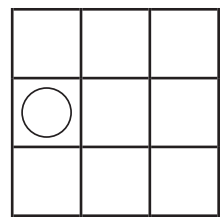
( )



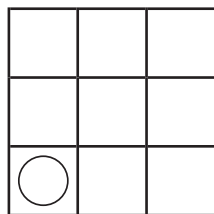
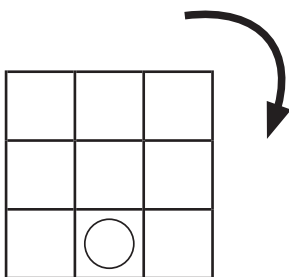
( )



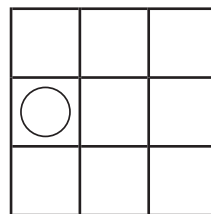
(  )



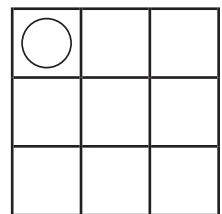
( )



( )



(  )



( )