




ひ ざん
引き算

くろまる かぞ ひ ざん
黒丸を数えて引き算 (STEP1)





くろまる かず かぞ けいざん
黒丸の数を数えながら計算しましょう。

問1

$$2 - 1 = \square$$

問2

$$3 - 1 = \square$$