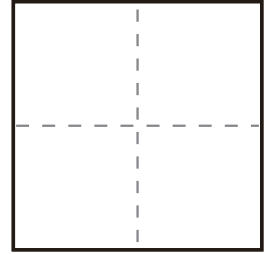
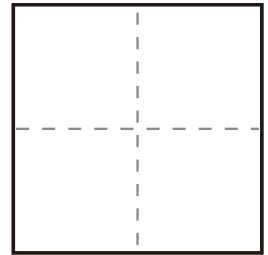


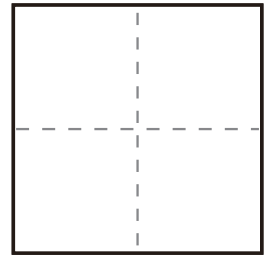
$$\textcircled{1} \quad 10 - 1 =$$



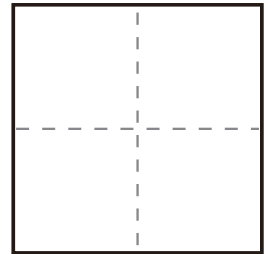
$$\textcircled{2} \quad 10 - 3 =$$



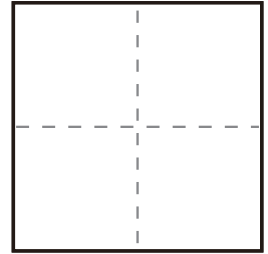
$$\textcircled{3} \quad 10 - 4 =$$



$$\textcircled{4} \quad 10 - 6 =$$



$$\textcircled{5} \quad 10 - 5 =$$



$$\textcircled{6} \quad 10 - 2 =$$

