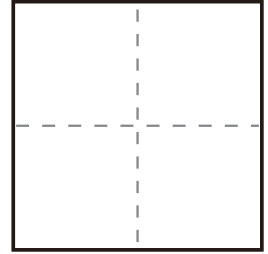
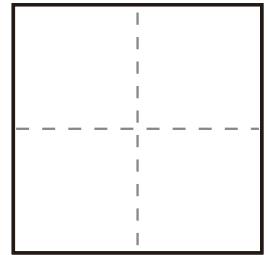


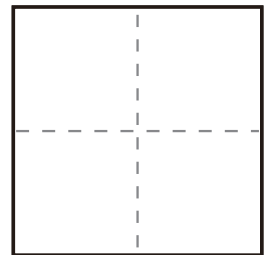
$$\textcircled{1} \quad 9 - 2 =$$



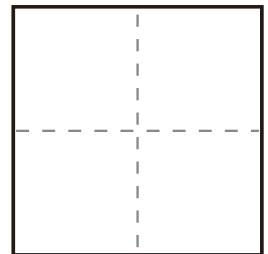
$$\textcircled{2} \quad 2 - 1 =$$



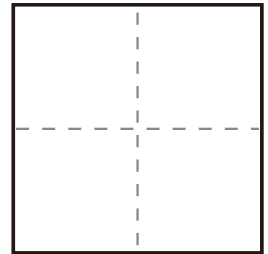
$$\textcircled{3} \quad 9 - 8 =$$



$$\textcircled{4} \quad 8 - 7 =$$



$$\textcircled{5} \quad 6 - 3 =$$



$$\textcircled{6} \quad 8 - 4 =$$

