


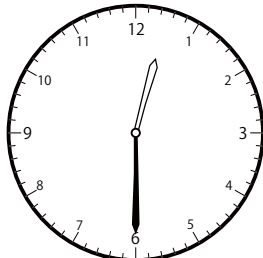
〇〇時^じ30分^{ふん}単位の時計を見つけよう【B1】

問題^{もんだい}と同じ時間^{おなじかん}の時計^{とけい}を見つけ^みて()に〇をつけましょう。


① 1時^じ30分^{ふん}の時計^{とけい}を見つけよう



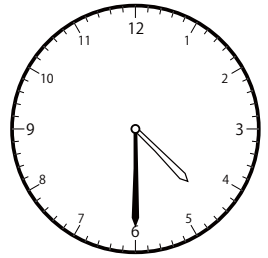
()




()



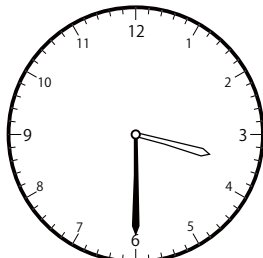
()



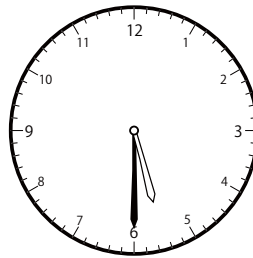
()



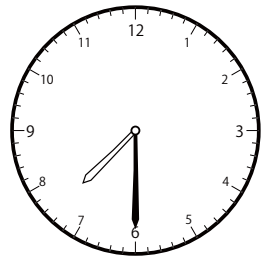
()



()

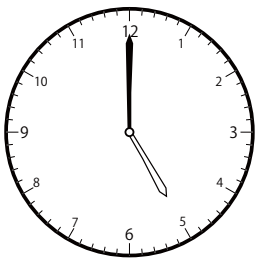


()

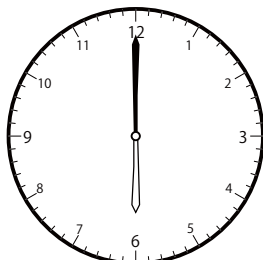


()


② 2時^じ0分^{ふん}の時計^{とけい}を見つけよう




()



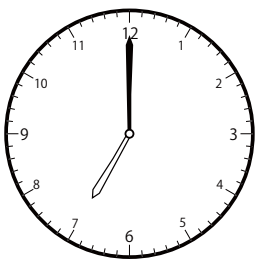
()




()



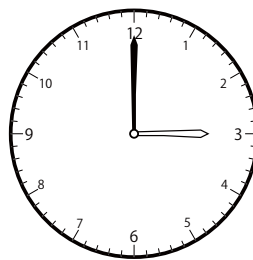
()




()



()



()

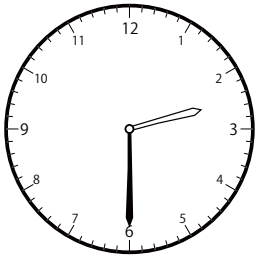


()

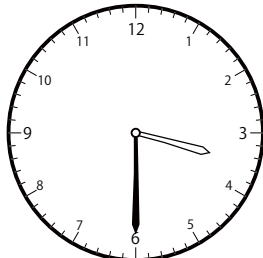
〇〇時^じ30分^{ふん}単位の^{たんい}時計^{とけい}を見つけよう【B1】

問題^{もんだい}と同じ時間^{おなじかん}の時計^{とけい}を見つけ^みて()に〇をつけましょう。


① 2時^じ30分^{ふん}の時計^{とけい}を見つけよう



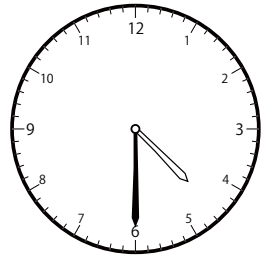
()



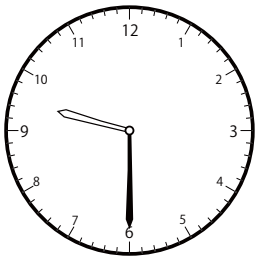
()




()



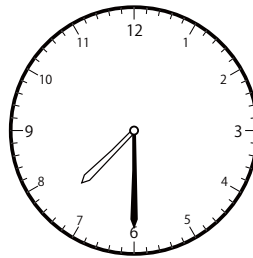
()



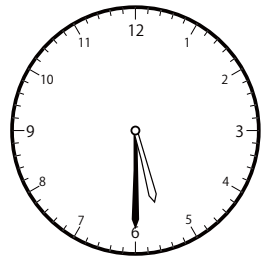
()



()

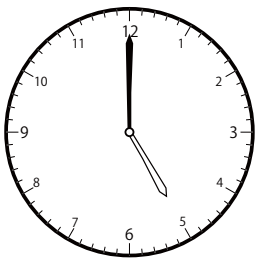


()

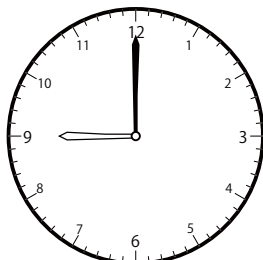


()


② 3時^じ0分^{ふん}の時計^{とけい}を見つけよう




()



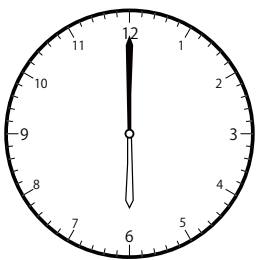
()




()



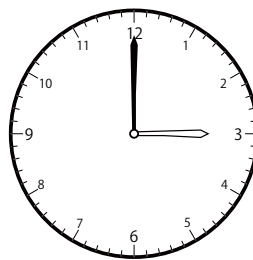
()




()



()



()

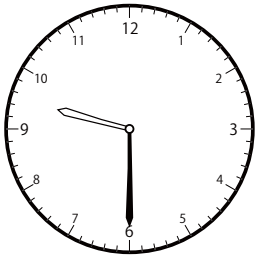


()

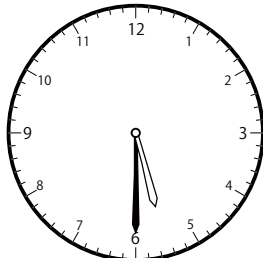
〇〇時^じ30分^{ふん}単位の時計を見つけよう【B1】

問題^{もんだい}と同じ時間^{おなじかん}の時計^{とけい}を見つけて()に〇をつけましょう。


① 3時^じ30分^{ふん}の時計^{とけい}を見つけよう



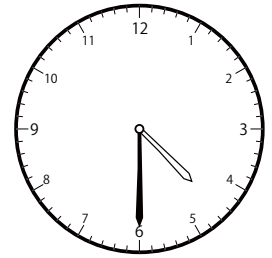
()



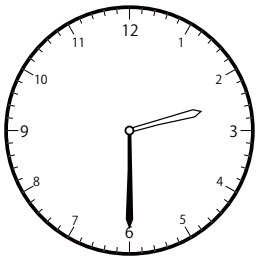
()




()




()



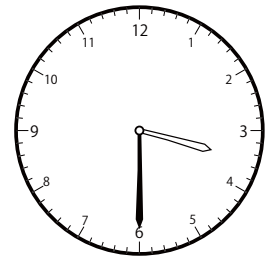
()



()

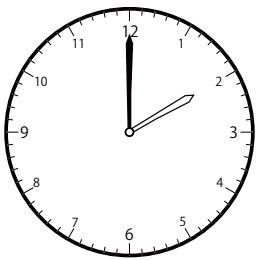


()




()

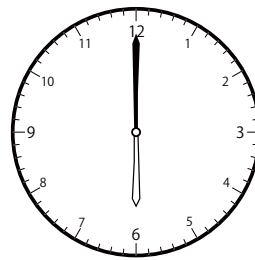
② 4時^じ0分^{ふん}の時計^{とけい}を見つけよう




()



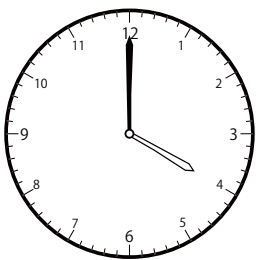
()




()




()



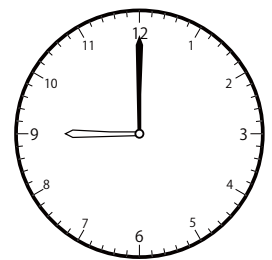
()



()



()

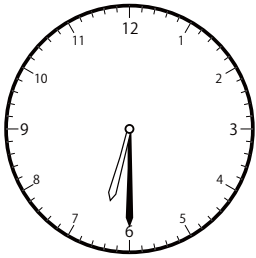


()

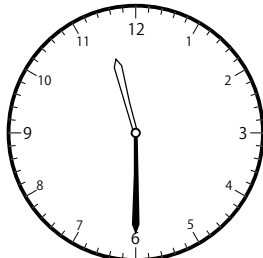
〇〇時^じ30分^{ふん}単位の^{たんい}時計^{とけい}を見つけよう【B1】

問題^{もんだい}と同じ時間^{おなじかん}の時計^{とけい}を見つけて()に〇をつけましょう。

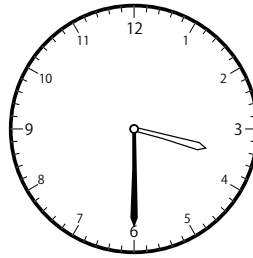
① 4時^じ30分^{ふん}の時計^{とけい}を見つけよう



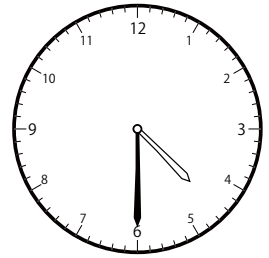
()




()



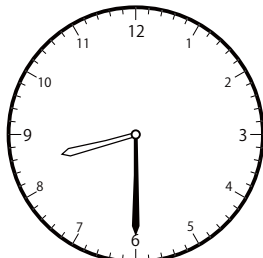
()



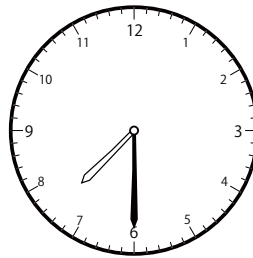
()



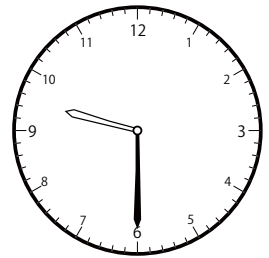
()



()

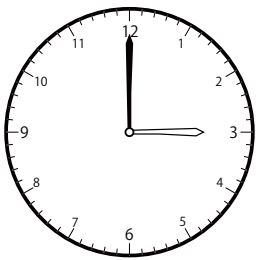


()

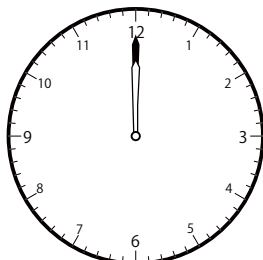


()


② 5時^じ0分^{ふん}の時計^{とけい}を見つけよう




()



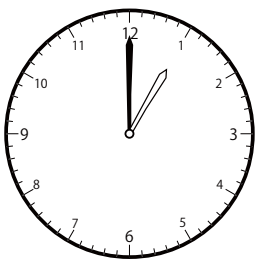
()




()



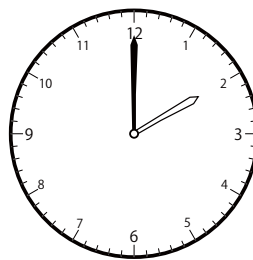
()




()



()



()




()

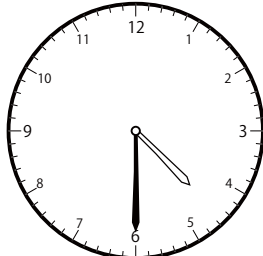
〇〇時^じ30分^{ふん}単位の^{たんい}時計^{とけい}を見つけよう【B1】

問題^{もんだい}と同じ時間^{おなじかん}の時計^{とけい}を見つけて()に〇をつけましょう。


① 5時^じ30分^{ふん}の時計^{とけい}を見つけよう




()



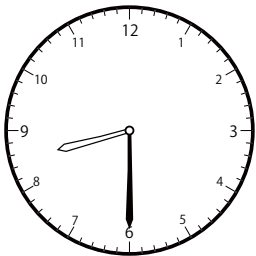
()




()



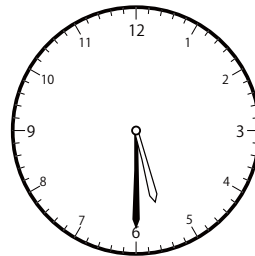
()



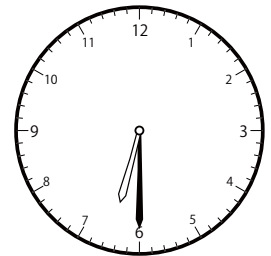
()



()

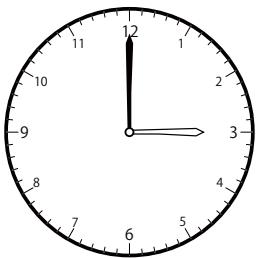


(○)




()


② 6時^じ0分^{ふん}の時計^{とけい}を見つけよう




()



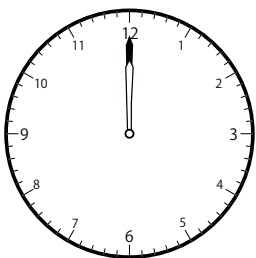
()




()



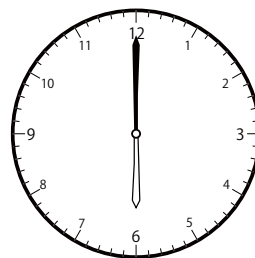
()




()



()



(○)

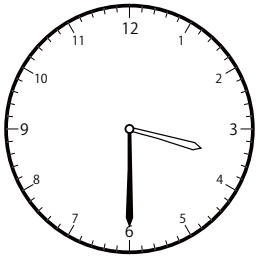


()

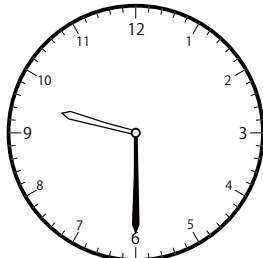
〇〇時^じ30分^{ふん}単位の^{たんい}時計^{とけい}を見つけよう【B1】

問題^{もんだい}と同じ時間^{おなじかん}の時計^{とけい}を見つけて()に〇をつけましょう。

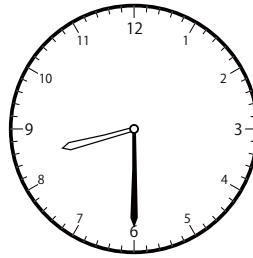
① 6時^じ30分^{ふん}の時計^{とけい}を見つけよう



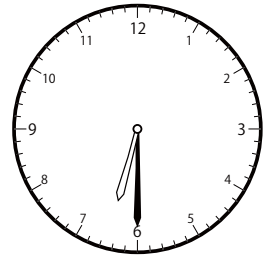
()



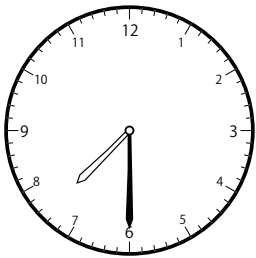
()




()



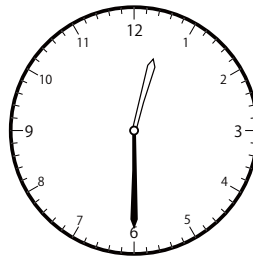
()



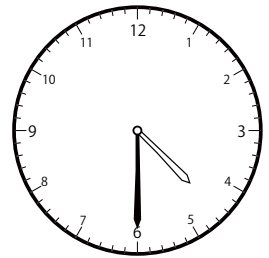
()



()




()




()


② 7時^じ0分^{ふん}の時計^{とけい}を見つけよう




()



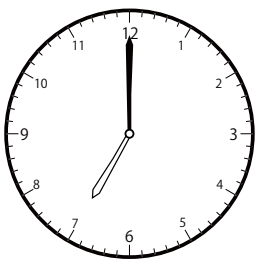
()




()



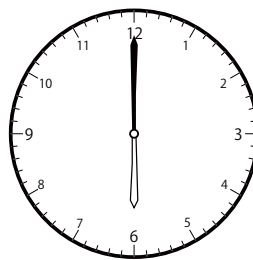
()




()



()



()

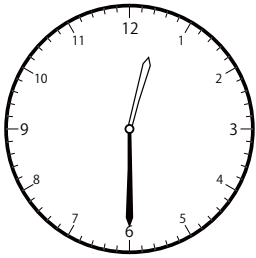


()

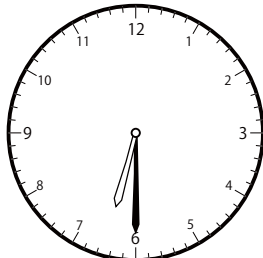
〇〇時^じ30分^{ふん}単位の^{たんい}時計^{とけい}を見つけよう【B1】

問題^{もんだい}と同じ時間^{おなじかん}の時計^{とけい}を見つけ^みて()に〇をつけましょう。

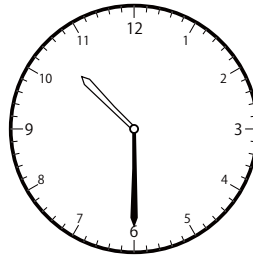
① 7時^じ30分^{ふん}の時計^{とけい}を見つけよう



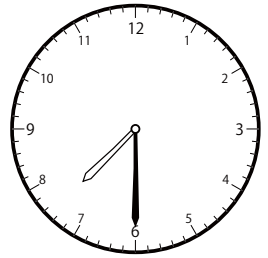
()



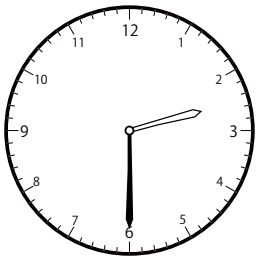
()



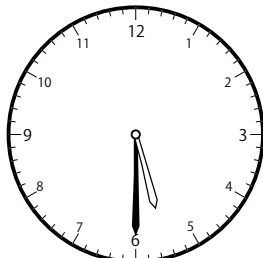
()



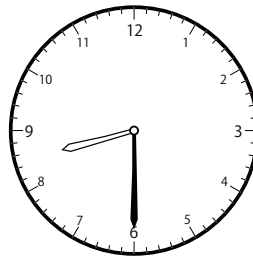
()



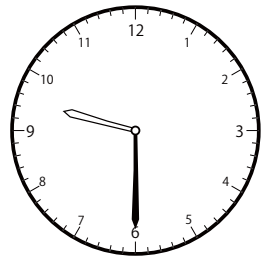
()



()




()




()


② 8時^じ0分^{ふん}の時計^{とけい}を見つけよう




()



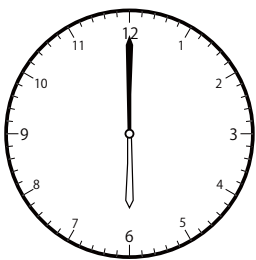
()




()



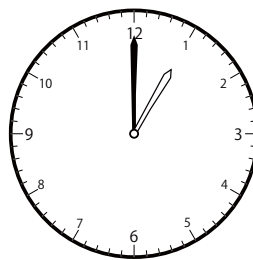
()




()



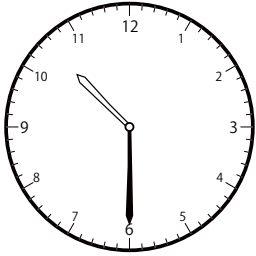
()



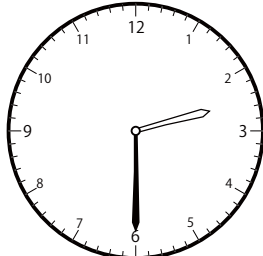
()



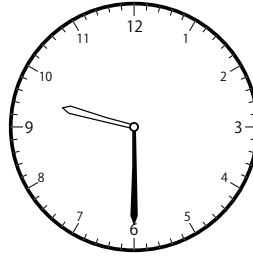
()

〇〇時^じ30分^{ふん}単位の時計を見つけよう【B1】問題^{もんだい}と同じ時間^{おなじかん}の時計^{とけい}を見つけて()に〇をつけましょう。① 8時^じ30分^{ふん}の時計^{とけい}を見つけよう

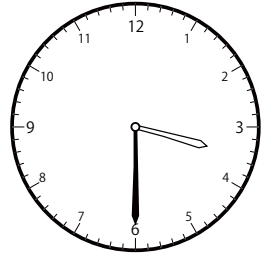
()



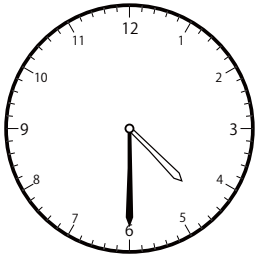
()




()




()



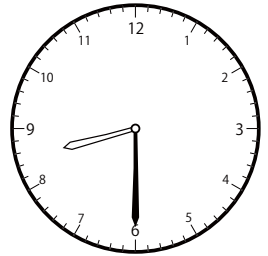
()



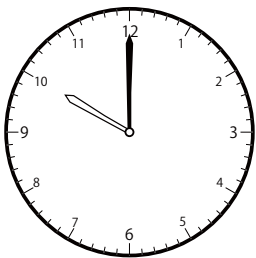
()




()



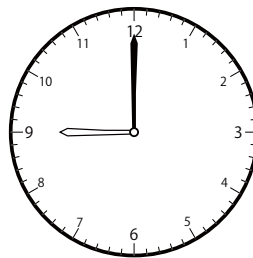
(○)

② 9時^じ0分^{ふん}の時計^{とけい}を見つけよう


()




()



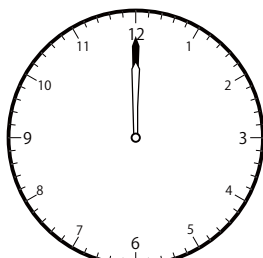
(○)




()




()



()



()

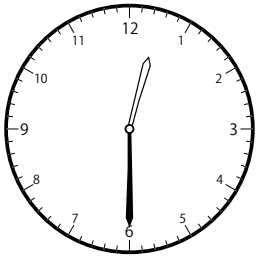


()

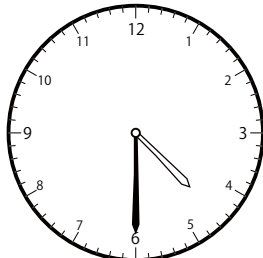
〇〇時^じ30分^{ふん}単位の^{たんい}時計^{とけい}を見つけよう【B1】

問題^{もんだい}と同じ時間^{おなじかん}の時計^{とけい}を見つけ^みて()に〇をつけましょう。

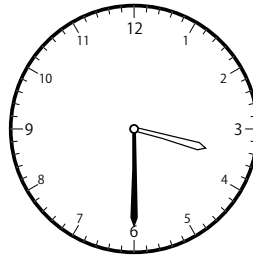
① 9時^じ30分^{ふん}の時計^{とけい}を見つけよう



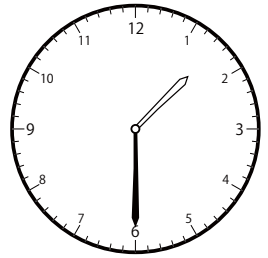
()



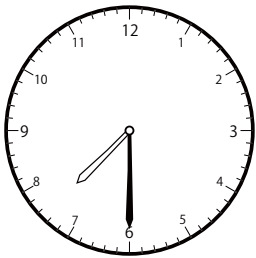
()



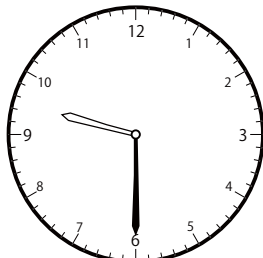
()



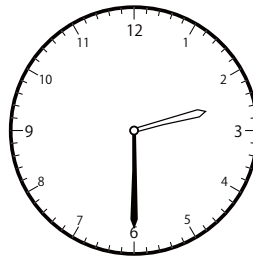
()




()



()

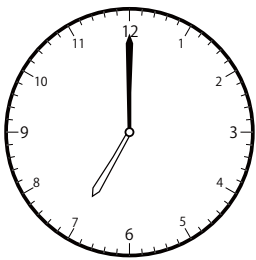


()




()


② 10時^じ0分^{ふん}の時計^{とけい}を見つけよう




()



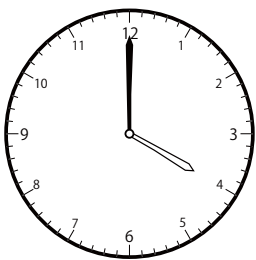
()




()



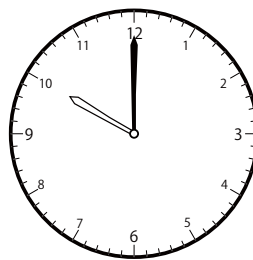
()



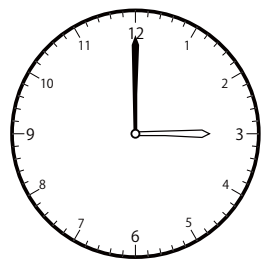
()



()



()

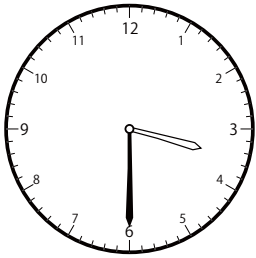


()

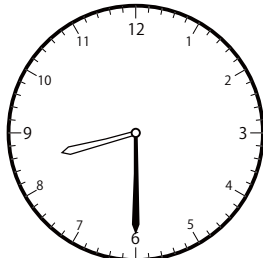
〇〇時^じ30分^{ふん}単位の時計^{とけい}を見つけよう【B1】

問題^{もんだい}と同じ時間^{おなじかん}の時計^{とけい}を見つけて()に〇をつけましょう。

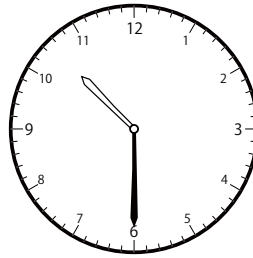
① 10時^じ30分^{ふん}の時計^{とけい}を見つけよう



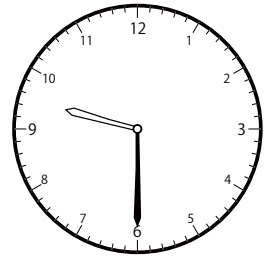
()



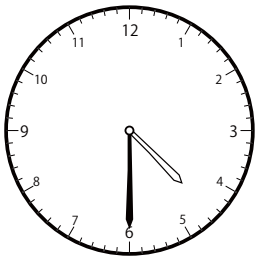
()



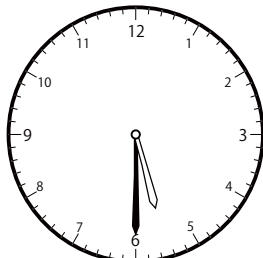
()



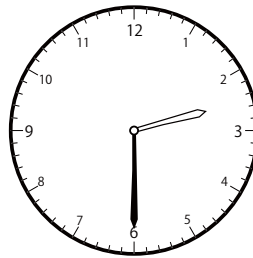
()




()



()

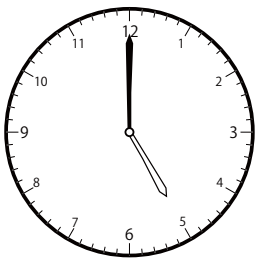


()




()


② 11時^じ0分^{ふん}の時計^{とけい}を見つけよう




()



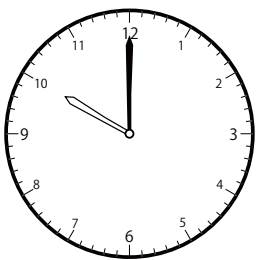
()




()



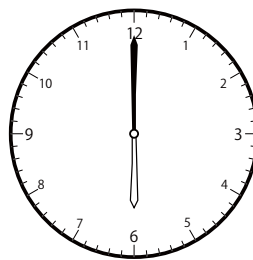
()




()



()



()

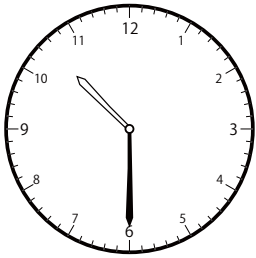


()

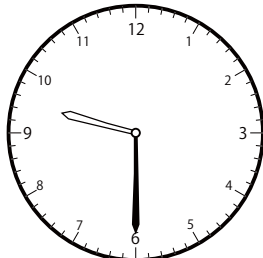
〇〇時^じ30分^{ふん}単位の時計^{とけい}を見つけよう【B1】

問題^{もんだい}と同じ時間^{おなじかん}の時計^{とけい}を見つけて()に〇をつけましょう。

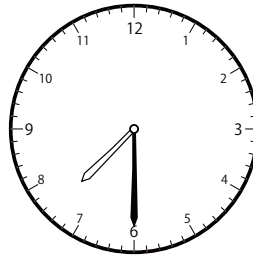
① 11時^じ30分^{ふん}の時計^{とけい}を見つけよう



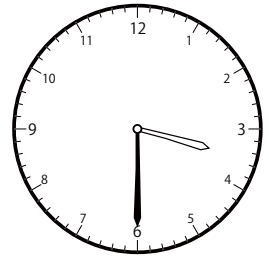
()



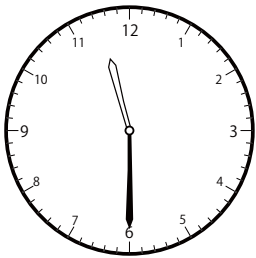
()



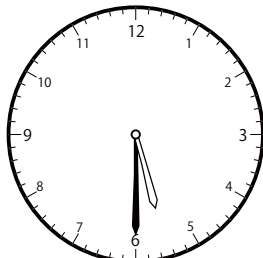
()



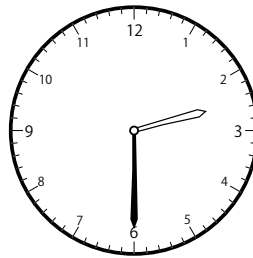
()




()



()

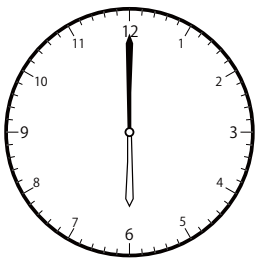


()

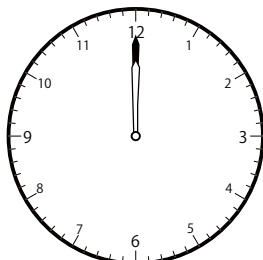


()

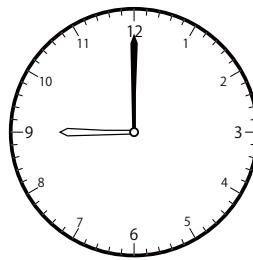
② 12時^じ0分^{ふん}の時計^{とけい}を見つけよう




()



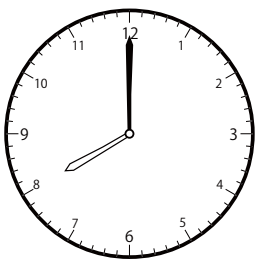
()




()



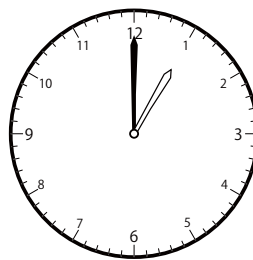
()




()



()



()

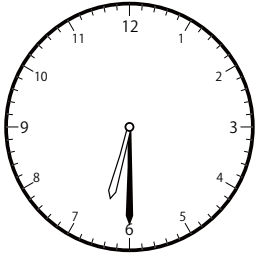


()

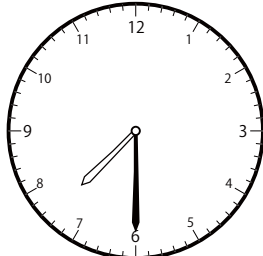
〇〇時^じ30分^{ふん}単位の^{たんい}時計^{とけい}を見つけよう【B1】

問題^{もんだい}と同じ時間^{おなじかん}の時計^{とけい}を見つけて()に〇をつけましょう。

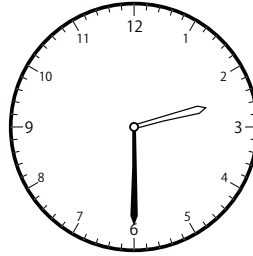
① 12時^じ30分^{ふん}の時計^{とけい}を見つけよう



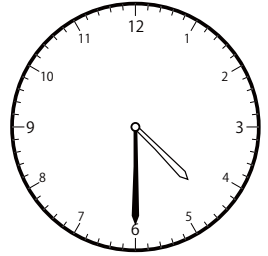
()



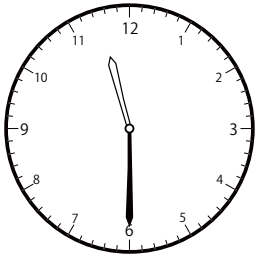
()




()




()



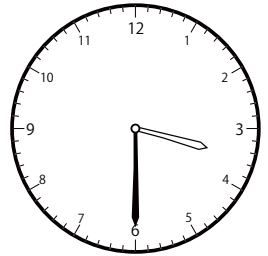
()



()

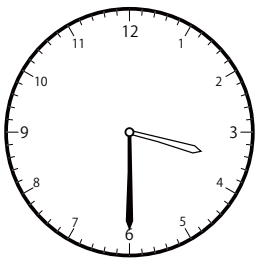


(○)




()

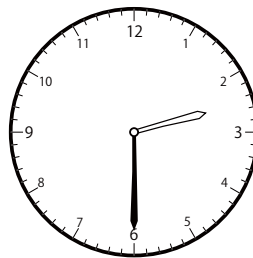
② 1時^じ30分^{ふん}の時計^{とけい}を見つけよう




()



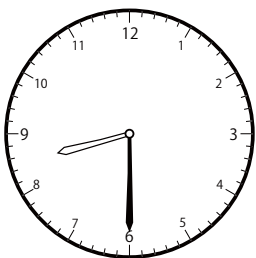
()




()



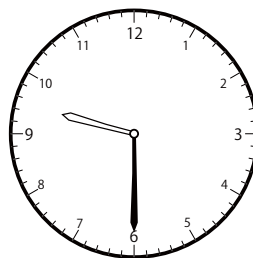
()



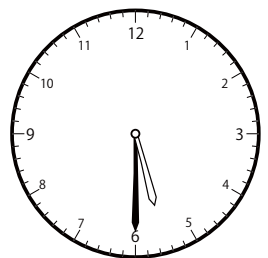
()



(○)



()




()

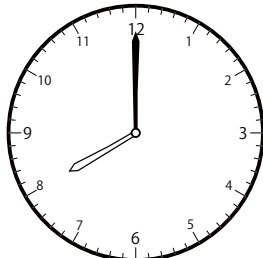
〇〇時^じ30分^{ふん}単位の^{たんい}時計^{とけい}を見つけよう【B1】

問題^{もんだい}と同じ時間^{おなじかん}の時計^{とけい}を見つけ^みて()に〇をつけましょう。

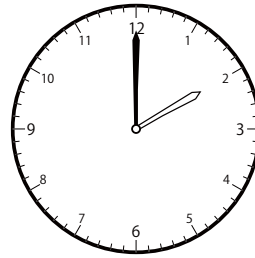
① 2時^じ0分^{ふん}の時計^{とけい}を見つけよう



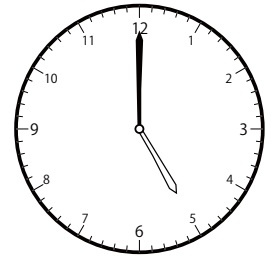
()



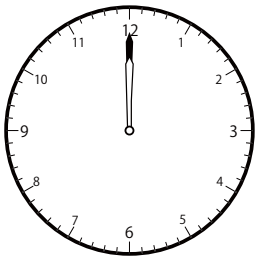
()



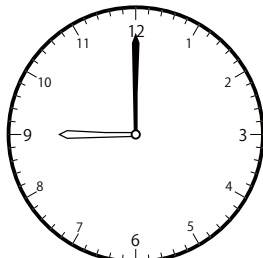
()




()




()



()

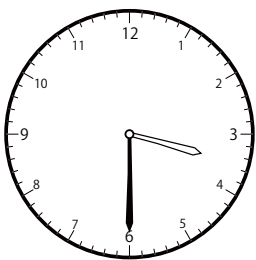


()




()

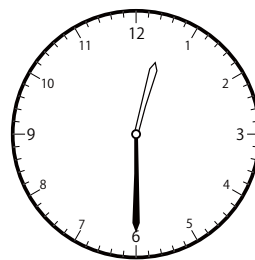
② 2時^じ30分^{ふん}の時計^{とけい}を見つけよう



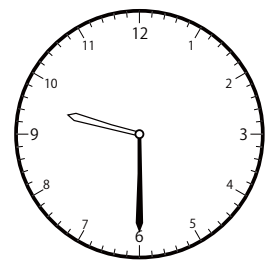
()



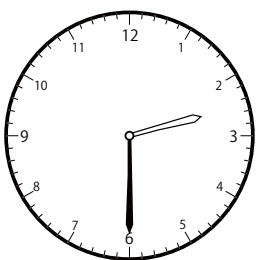
()



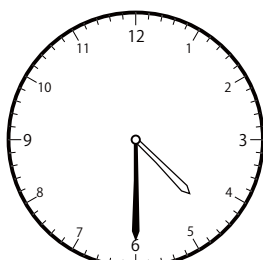
()




()



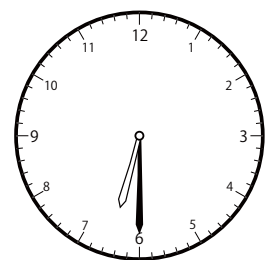
()



()




()

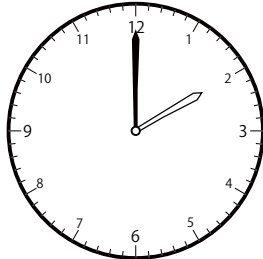


()


① 3時^じ0分^{ふん}の時計^{とけい}を見つけよう



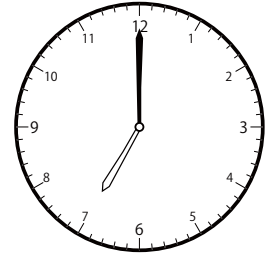
()




()



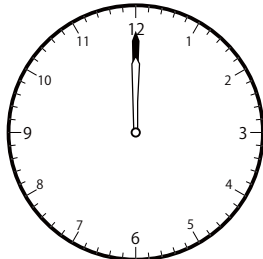
()




()



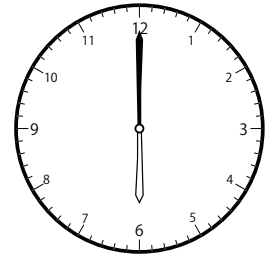
()



()




()

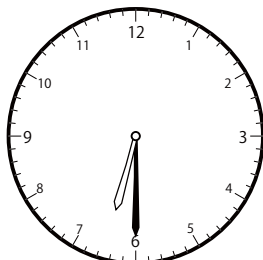


()


② 3時^じ30分^{ふん}の時計^{とけい}を見つけよう



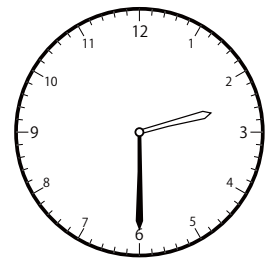
()



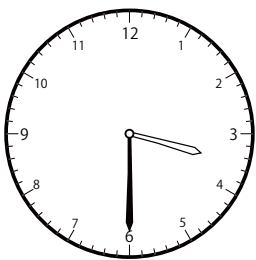
()



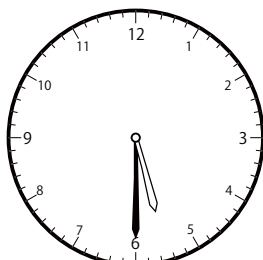
()



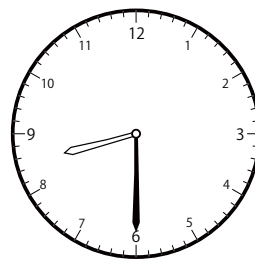
()



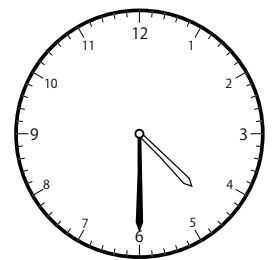
()



()



()




()


〇〇時^じ30分^{ふん}単位の^{たんい}時計^{とけい}を見つけよう【B1】

問題^{もんだい}と同じ時間^{おなじかん}の時計^{とけい}を見つけ^みて()に〇をつけましょう。


① 4時^じ0分^{ふん}の時計^{とけい}を見つけよう




()



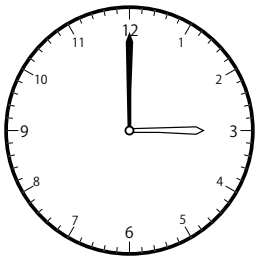
()



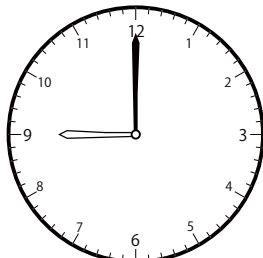
()



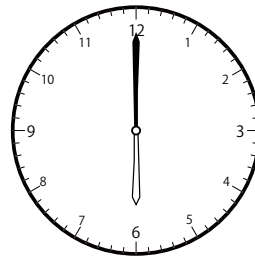
()




()



()




()




()

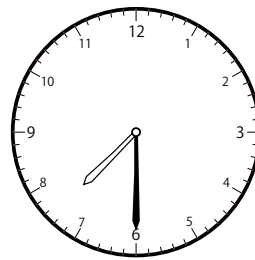
② 4時^じ30分^{ふん}の時計^{とけい}を見つけよう



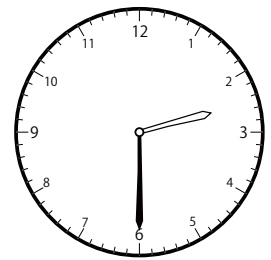
()



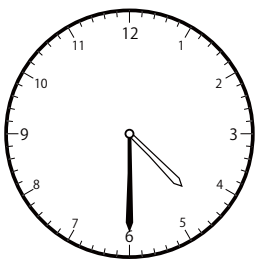
()




()



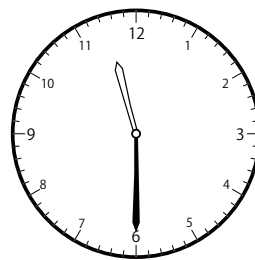
()



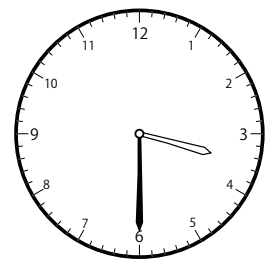
()



()



()




()


〇〇時^じ30分^{ふん}単位の^{たんい}時計^{とけい}を見つけよう【B1】

問題^{もんだい}と同じ時間^{おなじかん}の時計^{とけい}を見つけて()に〇をつけましょう。


① 5時^じ0分^{ふん}の時計^{とけい}を見つけよう



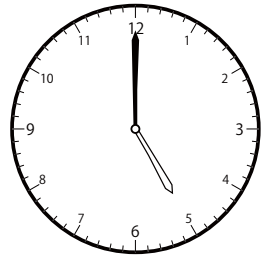
()



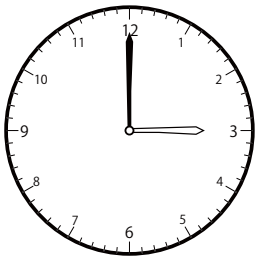
()




()




()




()



()




()




()

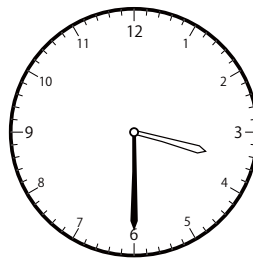
② 5時^じ30分^{ふん}の時計^{とけい}を見つけよう



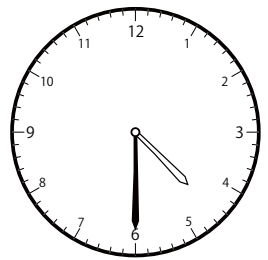
()



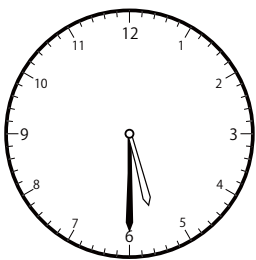
()



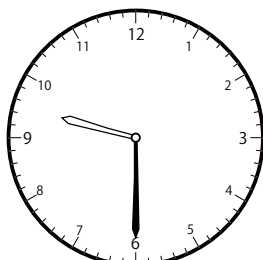
()



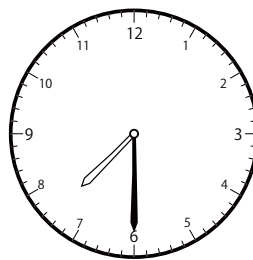
()




()



()



()




()

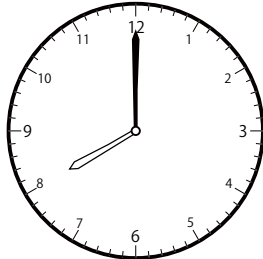
〇〇時^じ30分^{ふん}単位の^{たんい}時計^{とけい}を見つけよう【B1】

問題^{もんだい}と同じ時間^{おなじかん}の時計^{とけい}を見つけ^みて()に〇をつけましょう。

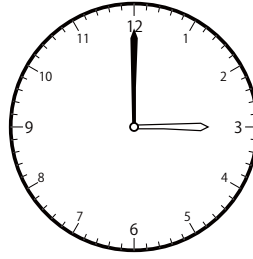
① 6時^じ0分^{ふん}の時計^{とけい}を見つけよう




()




()



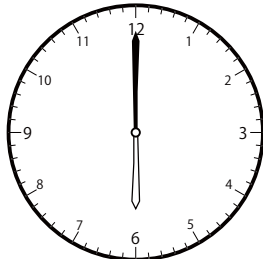
()




()




()



()

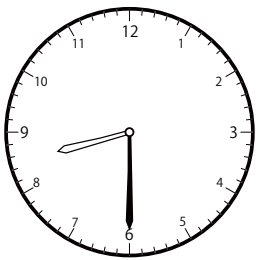


()

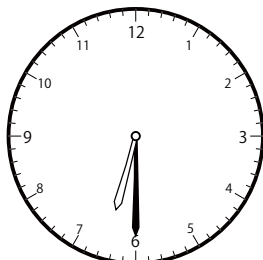


()

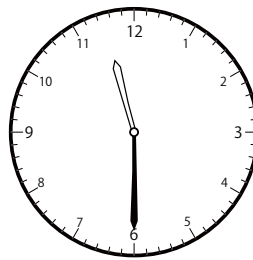
② 6時^じ30分^{ふん}の時計^{とけい}を見つけよう




()



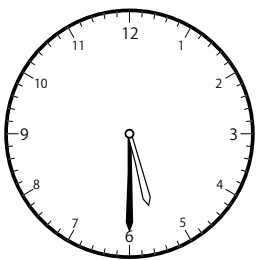
()




()



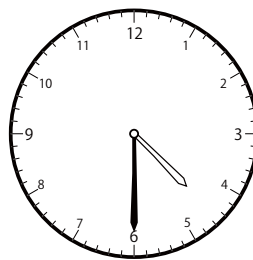
()



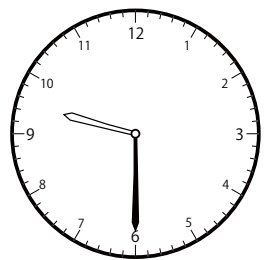
()



()



()




()

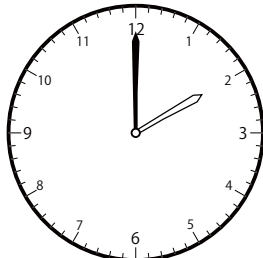
〇〇時^じ30分^{ふん}単位の^{たんい}時計^{とけい}を見つけよう【B1】

問題^{もんだい}と同じ時間^{おなじかん}の時計^{とけい}を見つけ^みて()に〇をつけましょう。

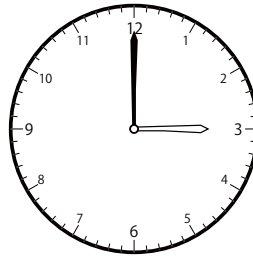
① 7時^じ0分^{ふん}の時計^{とけい}を見つけよう



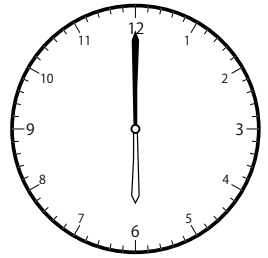
()




()




()




()



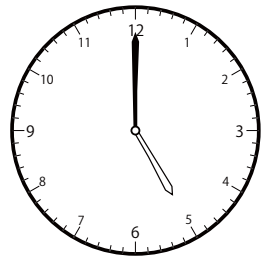
()



()

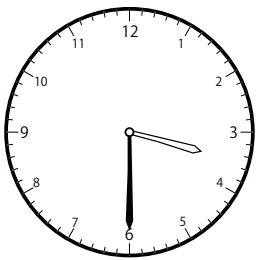


()




()

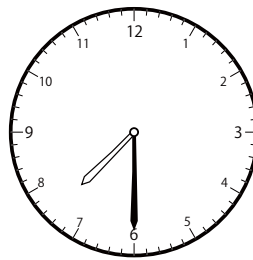
② 7時^じ30分^{ふん}の時計^{とけい}を見つけよう



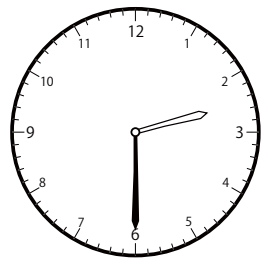
()



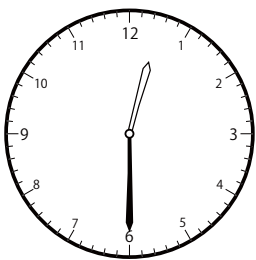
()




()



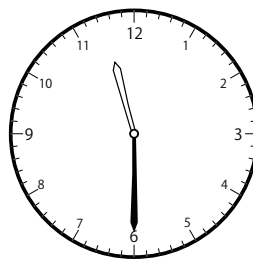
()



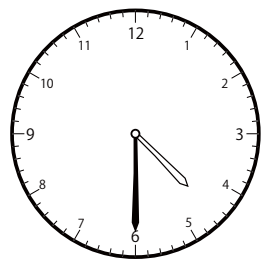
()



()



()




()

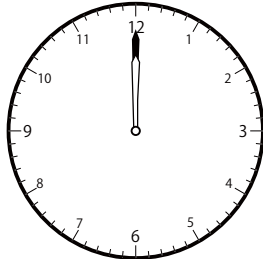
じ ふん たん い とけい み
〇〇時 30分 単位の時計を見つけよう【B1】

もんだい おな じかん とけい み
問題と同じ時間の時計を見つけて()に〇をつけましょう。


① 8時 0分の時計を見つけよう




()



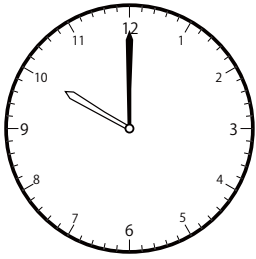
()



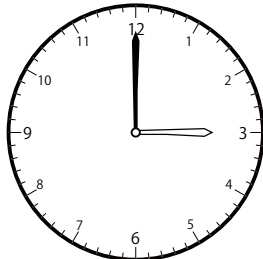
()



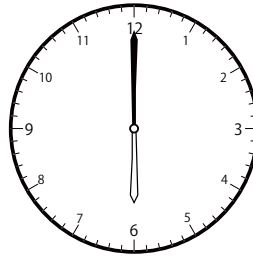
()




()



()




()

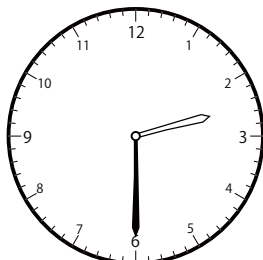


()

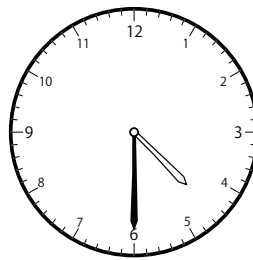
② 8時 30分の時計を見つけよう




()



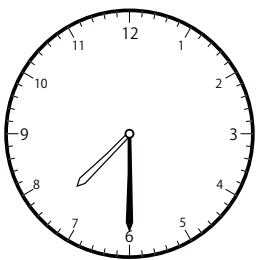
()




()



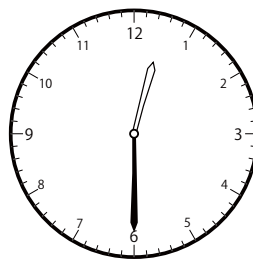
()




()



()



()

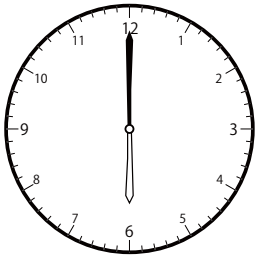


()

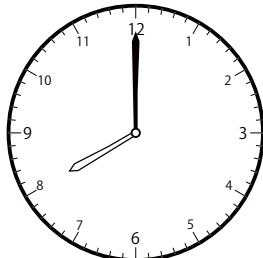
〇〇時^じ30分^{ふん}単位の時計^{とけい}を見つけよう【B1】

問題^{もんだい}と同じ時間^{おなじかん}の時計^{とけい}を見つけ^みて()に〇をつけましょう。

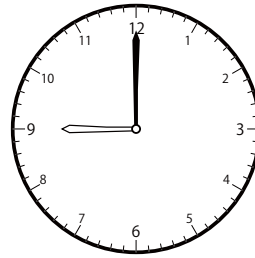
① 9時^じ0分^{ふん}の時計^{とけい}を見つけよう



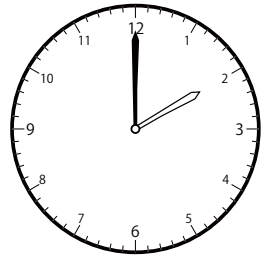
()



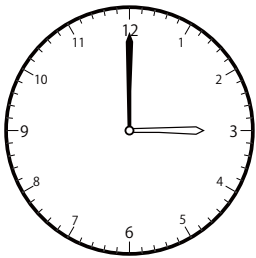
()



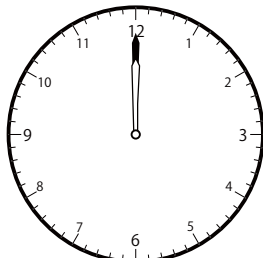
()




()



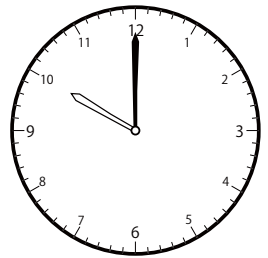
()



()

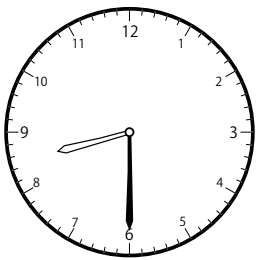


()

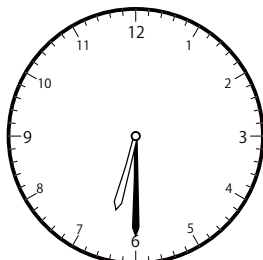


()


② 9時^じ30分^{ふん}の時計^{とけい}を見つけよう



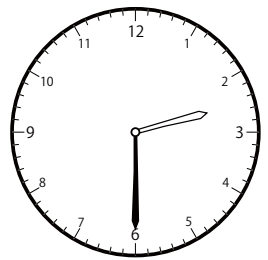
()



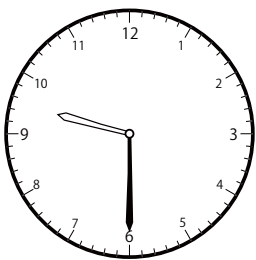
()




()



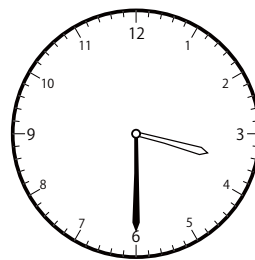
()




()



()



()




()

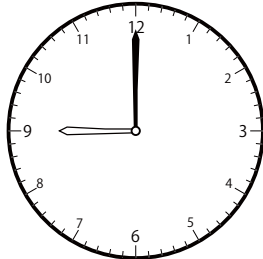
〇〇時^じ30分^{ふん}単位の^{たんい}時計^{とけい}を見つけよう【B1】

問題^{もんだい}と同じ時間^{おなじかん}の時計^{とけい}を見つけ^みて()に〇をつけましょう。

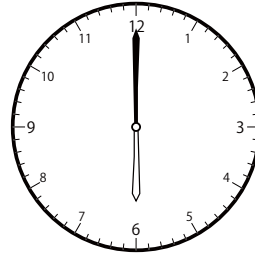
① 10時^じ 0分^{ふん}の時計^{とけい}を見つけよう



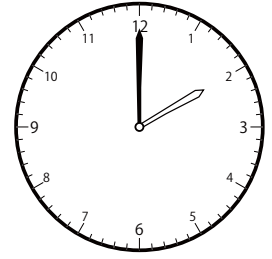
()



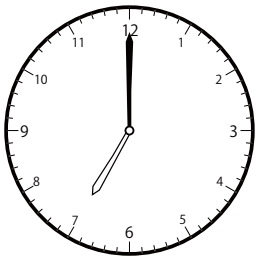
()




()




()




()



()




()

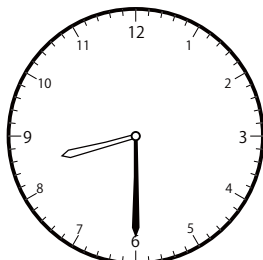


()

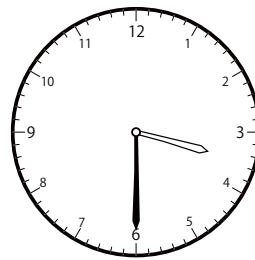
② 10時^じ 30分^{ふん}の時計^{とけい}を見つけよう




()



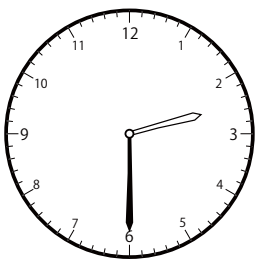
()



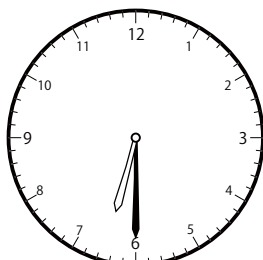
()



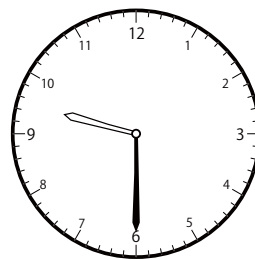
()



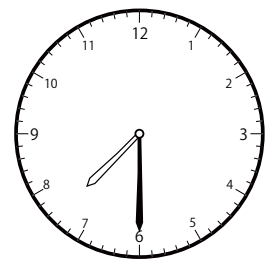
()



()



()

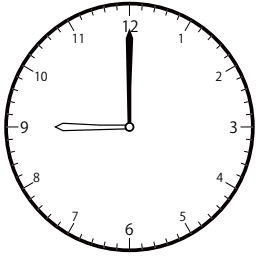


()

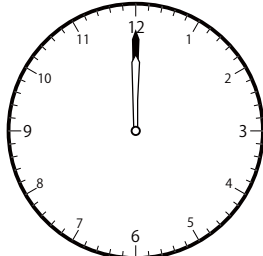
〇〇時^じ30分^{ふん}単位の^{たんい}時計^{とけい}を見つけよう【B1】

問題^{もんだい}と同じ時間^{おなじかん}の時計^{とけい}を見つけ^みて()に〇をつけましょう。


① 11時^じ0分^{ふん}の時計^{とけい}を見つけよう



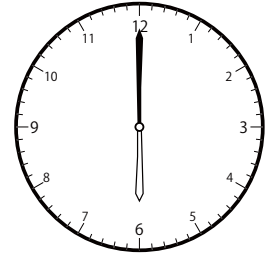
()




()




()




()




()



()

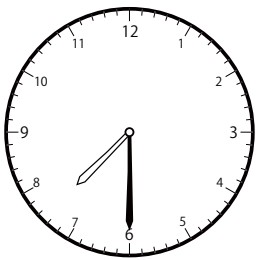


()

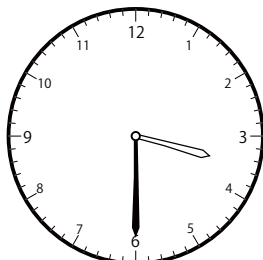


()

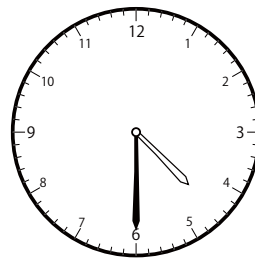
② 11時^じ30分^{ふん}の時計^{とけい}を見つけよう



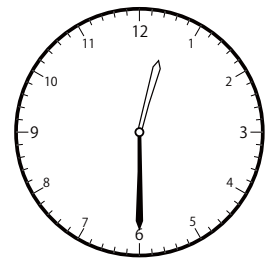
()



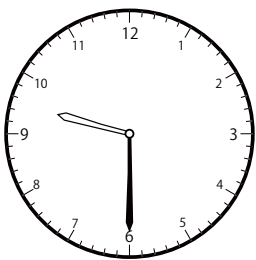
()




()



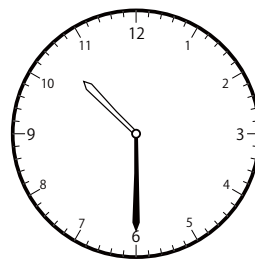
()



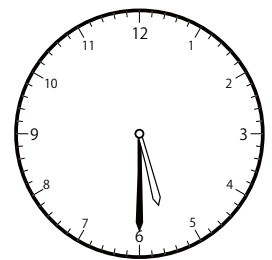
()



()



()




()

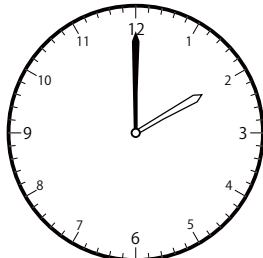
〇〇時^じ30分^{ふん}単位の時計^{とけい}を見つけよう【B1】

問題^{もんだい}と同じ時間^{おなじかん}の時計^{とけい}を見つけて()に〇をつけましょう。


① 12時^じ 0分^{ふん}の時計^{とけい}を見つけよう




()



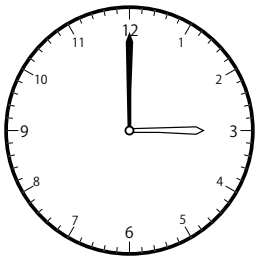
()




()




()



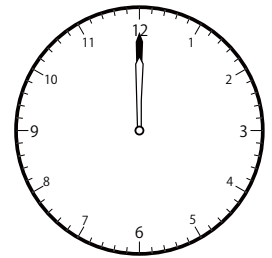
()



()




()




()

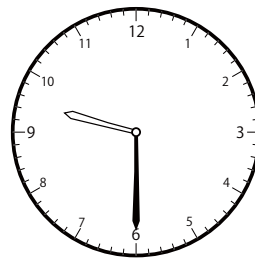
② 12時^じ 30分^{ふん}の時計^{とけい}を見つけよう



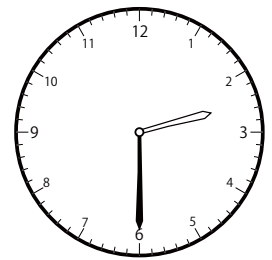
()



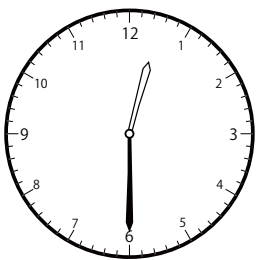
()



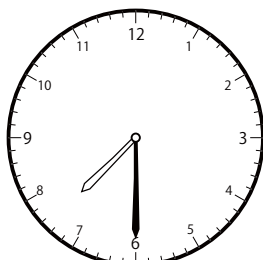
()



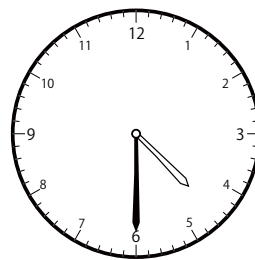
()



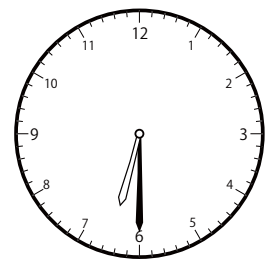
()



()



()




()

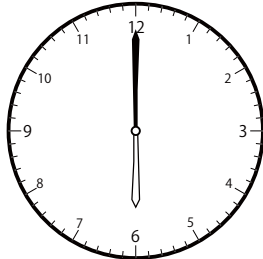
〇〇時^じ30分^{ふん}単位の^{たんい}時計^{とけい}を見つけよう【B1】

問題^{もんだい}と同じ時間^{おなじかん}の時計^{とけい}を見つけ^みて()に〇をつけましょう。


① 8時^じ0分^{ふん}の時計^{とけい}を見つけよう




()




()




()



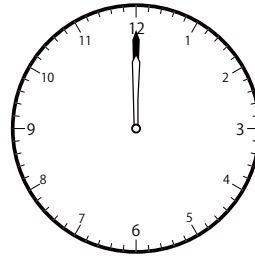
()



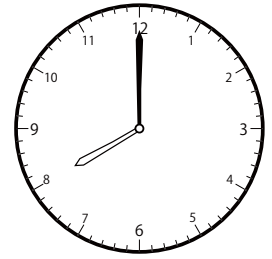
()



()

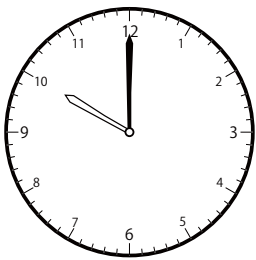


()




()


② 2時^じ0分^{ふん}の時計^{とけい}を見つけよう




()



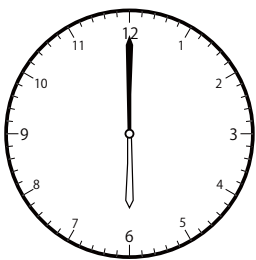
()




()



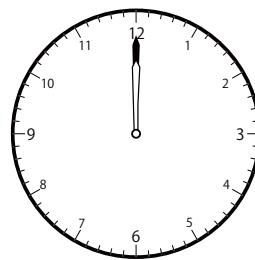
()




()



()



()

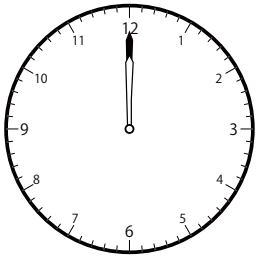


()

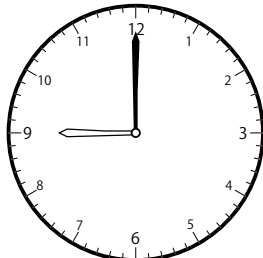
じ ふん たん い とけい み
〇〇時 30分 単位の時計を見つけよう【B1】

もんだい おな じかん とけい み
問題と同じ時間の時計を見つけて()に〇をつけましょう。


① 12時 0分の時計を見つけよう




()



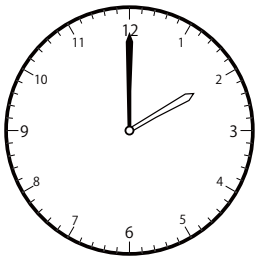
()




()



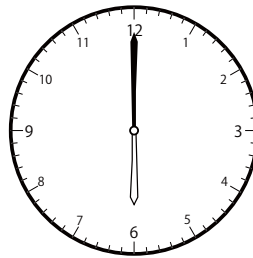
()




()



()

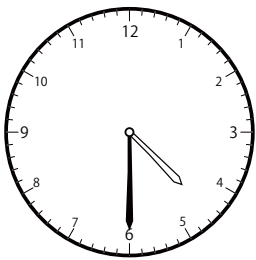


()

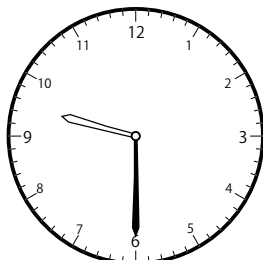


()

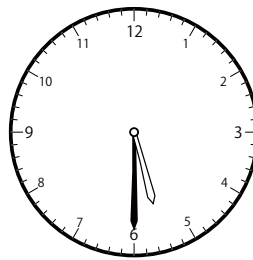
② 11時 30分の時計を見つけよう



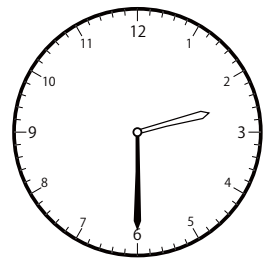
()



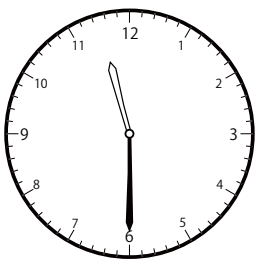
()



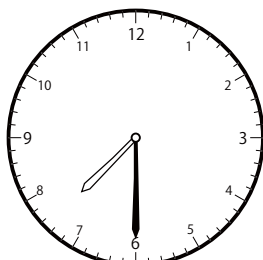
()



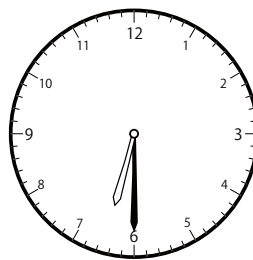
()



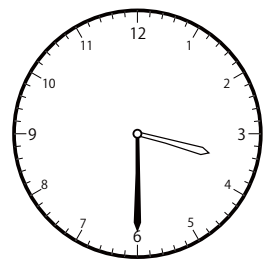
()



()



()

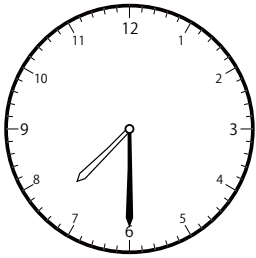


()

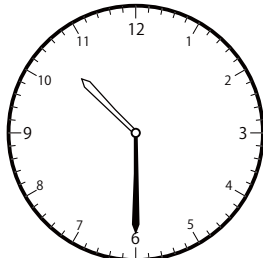
〇〇時^じ30分^{ふん}単位の時計^{とけい}を見つけよう【B1】

問題^{もんだい}と同じ時間^{おなじかん}の時計^{とけい}を見つけて()に〇をつけましょう。


① 7時^じ30分^{ふん}の時計^{とけい}を見つけよう



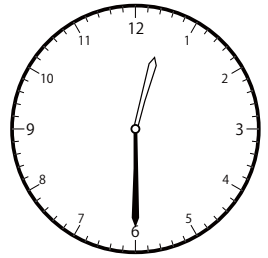
()



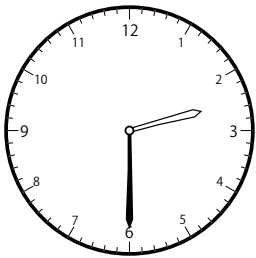
()



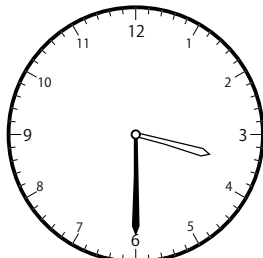
()



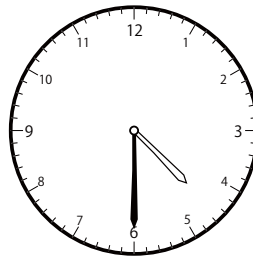
()



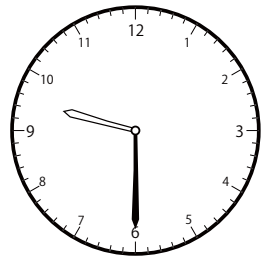
()



()

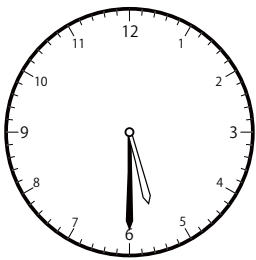


()

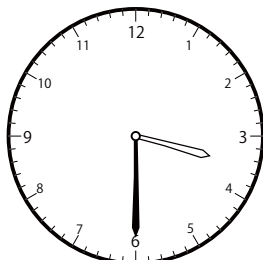


()

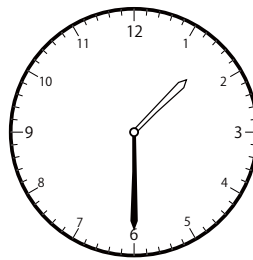
② 3時^じ30分^{ふん}の時計^{とけい}を見つけよう




()



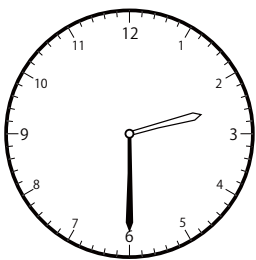
()



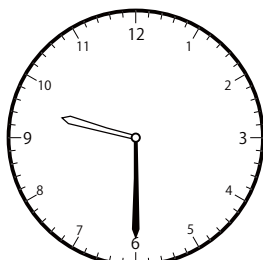
()



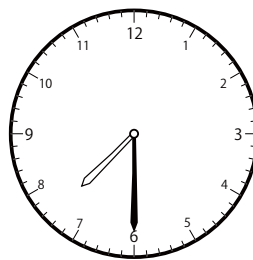
()




()



()



()

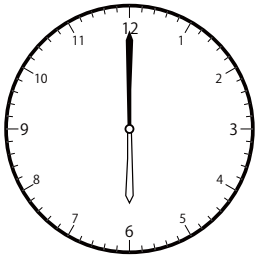


()

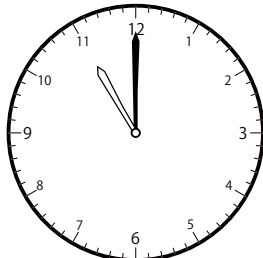
〇〇時^じ30分^{ふん}単位の時計^{とけい}を見つけよう【B1】

問題^{もんだい}と同じ時間^{おなじかん}の時計^{とけい}を見つけて()に〇をつけましょう。


① 3時^じ0分^{ふん}の時計^{とけい}を見つけよう



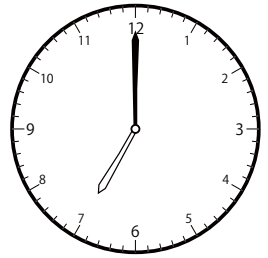
()



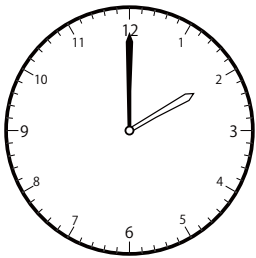
()




()




()




()



()

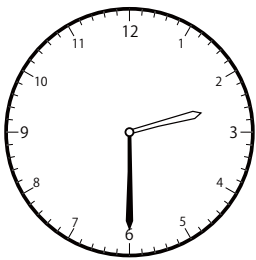


()




()

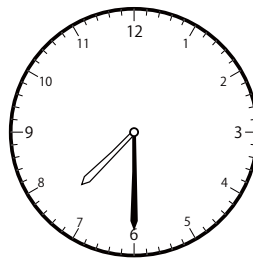
② 4時^じ30分^{ふん}の時計^{とけい}を見つけよう



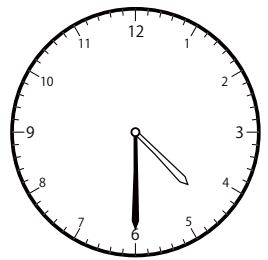
()



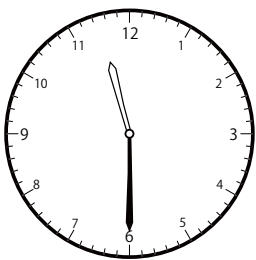
()



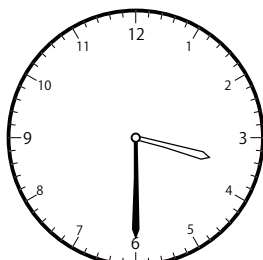
()



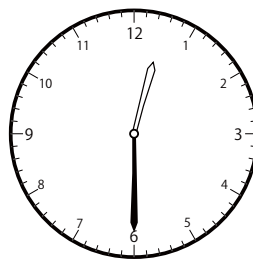
()




()



()

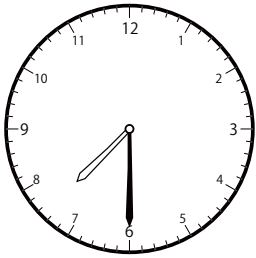


()

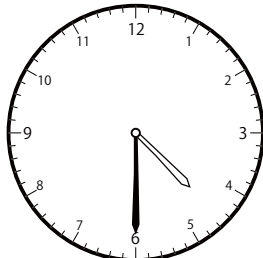


()

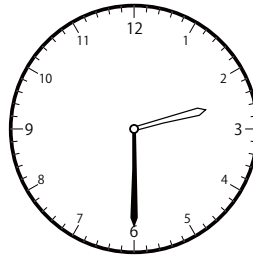
① 8時^じ30分^{ふん}の時計^{とけい}を見つけよう



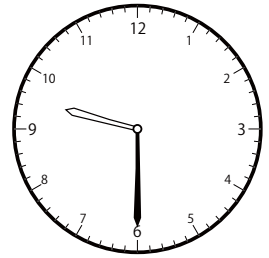
()



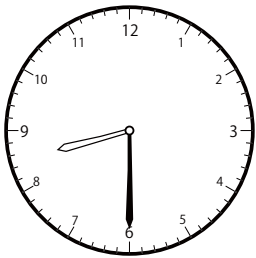
()



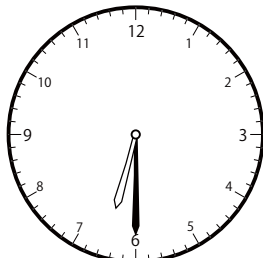
()



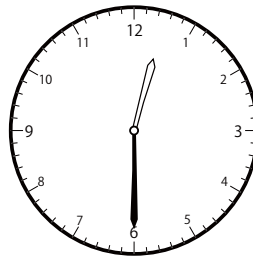
()




()



()

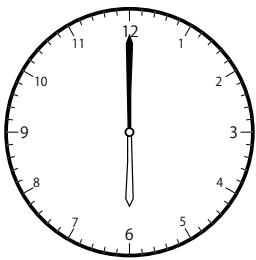


()




()


② 10時^じ0分^{ふん}の時計^{とけい}を見つけよう




()



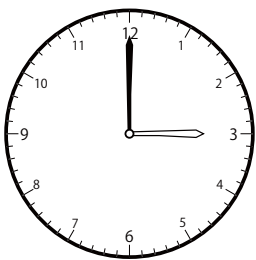
()




()



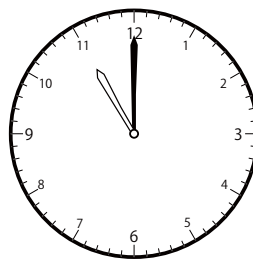
()




()



()



()




()

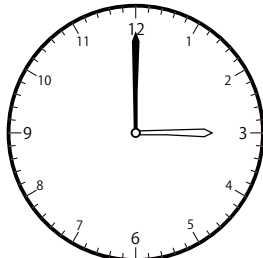
〇〇時 30分 単位の時計を見つけよう【B1】

問題と同じ時間の時計を見つけて()に〇をつけましょう。

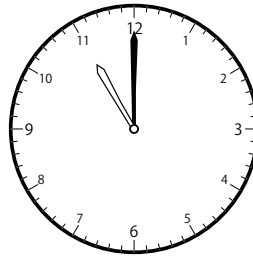
① 11時 0分の時計を見つけよう



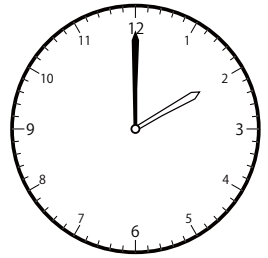
()



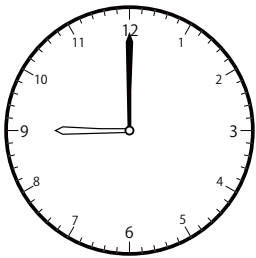
()




()




()




()



()

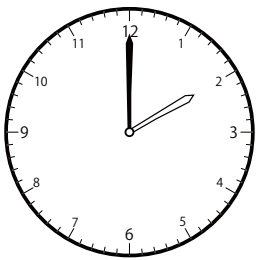


()

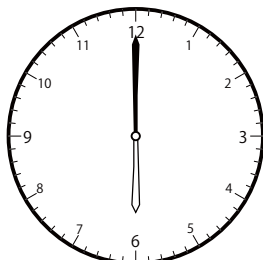


()


② 5時 0分の時計を見つけよう




()



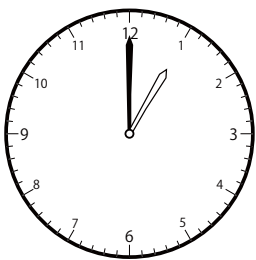
()




()



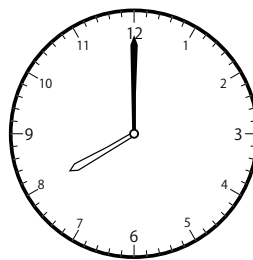
()




()



()



()

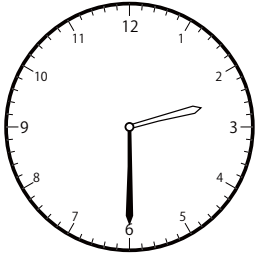


()


〇〇時^じ30分^{ふん}単位の^{たんい}時計^{とけい}を見つけよう【B1】

問題^{もんだい}と同じ時間^{おなじかん}の時計^{とけい}を見つけて()に〇をつけましょう。

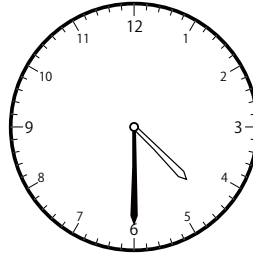
① 2時^じ30分^{ふん}の時計^{とけい}を見つけよう




()



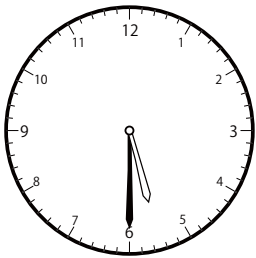
()




()



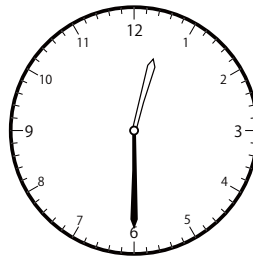
()



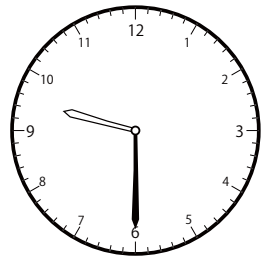
()



()

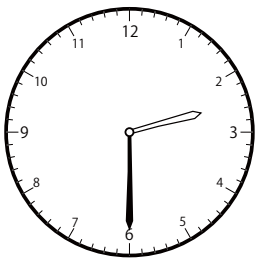


()




()

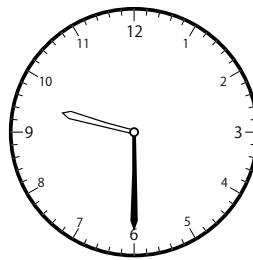
② 5時^じ30分^{ふん}の時計^{とけい}を見つけよう



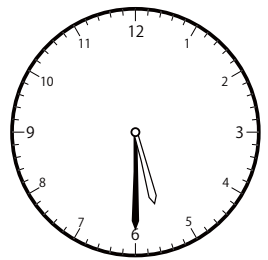
()



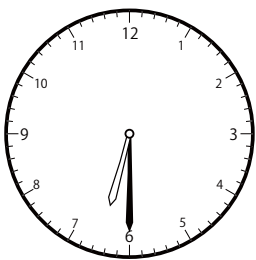
()




()



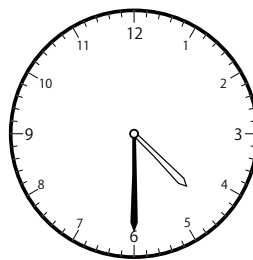
()




()



()



()

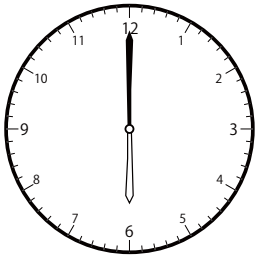


()

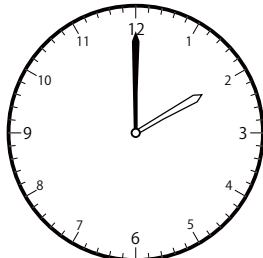
〇〇時^じ30分^{ふん}単位の^{たんい}時計^{とけい}を見つけよう【B1】

問題^{もんだい}と同じ時間^{おなじかん}の時計^{とけい}を見つけ^みて()に〇をつけましょう。

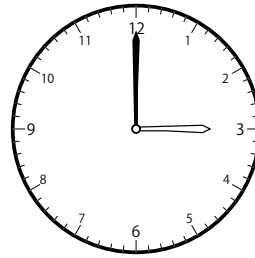
① 7時^じ0分^{ふん}の時計^{とけい}を見つけよう




()



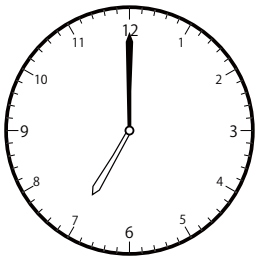
()



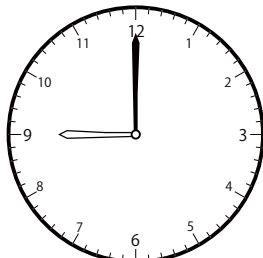
()



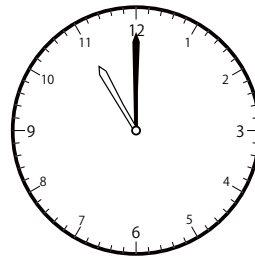
()




()



()

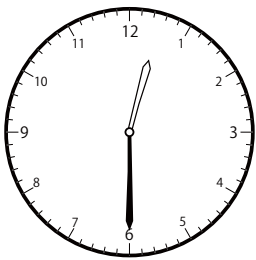


()

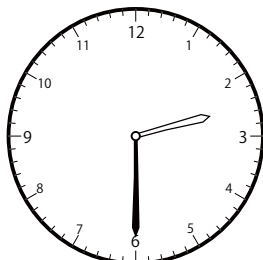


()

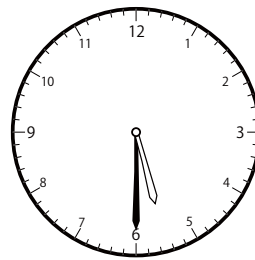
② 9時^じ30分^{ふん}の時計^{とけい}を見つけよう



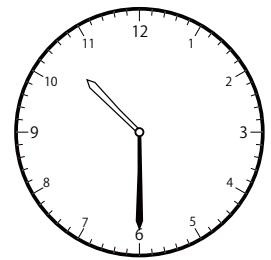
()



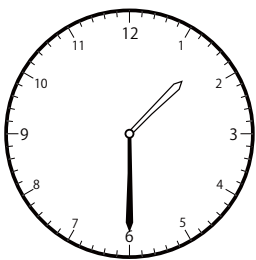
()



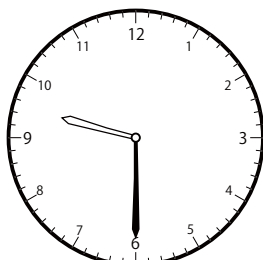
()



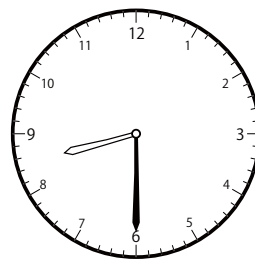
()



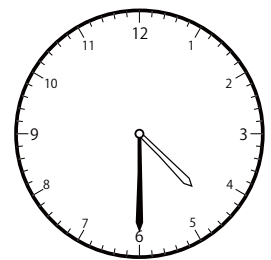
()



()



()

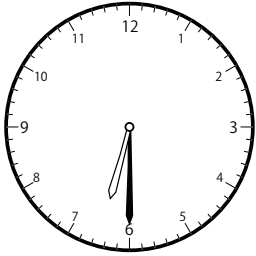


()

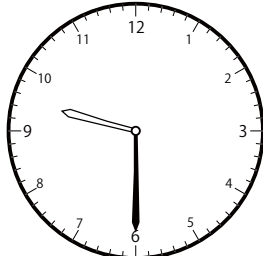
〇〇時^じ30分^{ふん}単位の^{たんい}時計^{とけい}を見つけよう【B1】

問題^{もんだい}と同じ時間^{おなじかん}の時計^{とけい}を見つけ^みて()に〇をつけましょう。


① 6時^じ30分^{ふん}の時計^{とけい}を見つけよう



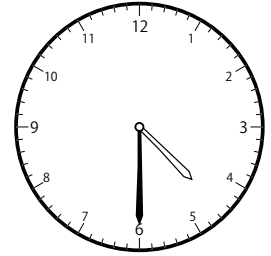
()



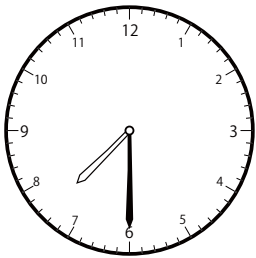
()




()



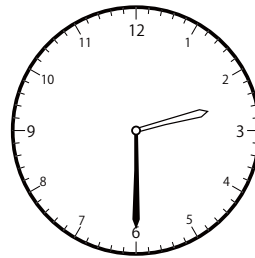
()




()



()

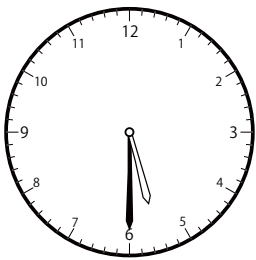


()

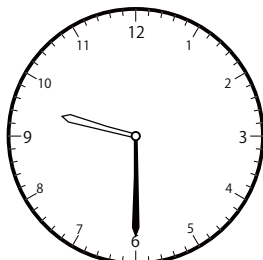


()

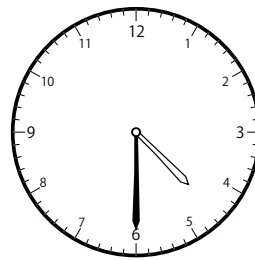
② 1時^じ30分^{ふん}の時計^{とけい}を見つけよう



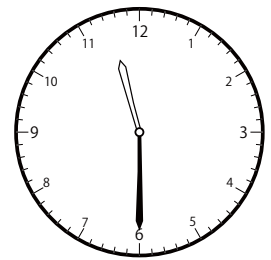
()



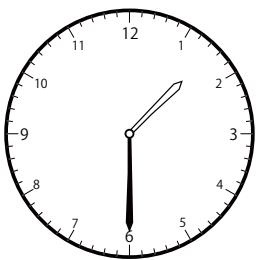
()



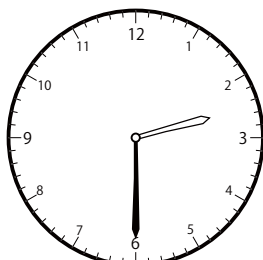
()




()



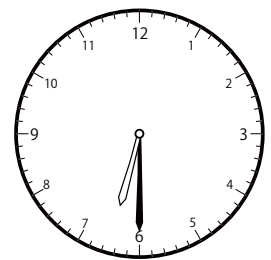
()



()



()




()

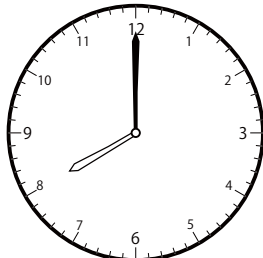
じ ふん たん い とけい み
〇〇時 30分 単位の時計を見つけよう【B1】

もんだい おなじ じかん とけい み
問題と同じ時間の時計を見つけて()に〇をつけましょう。

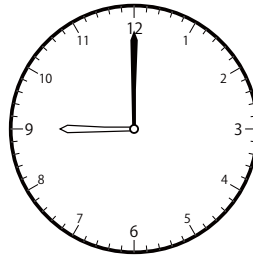
① 9時 0分の時計を見つけよう



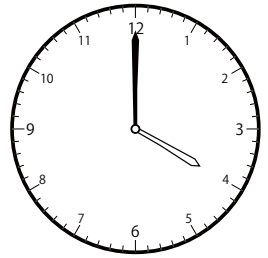
()



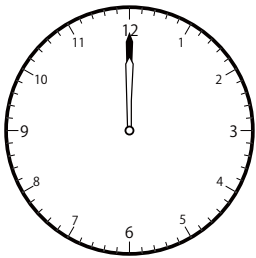
()




()



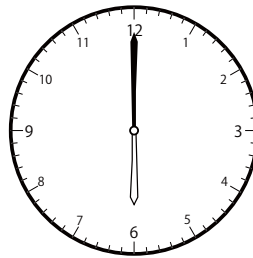
()




()



()

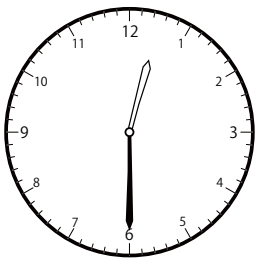


()

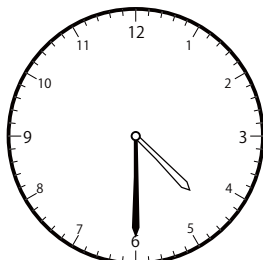


()

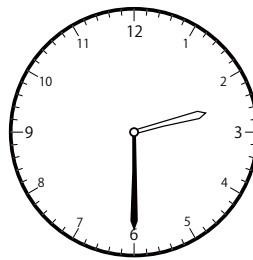
② 12時 30分の時計を見つけよう



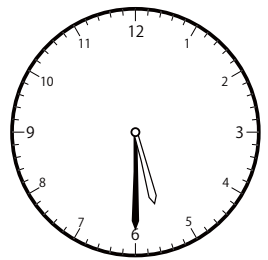
()



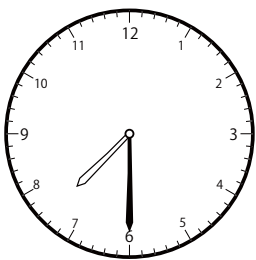
()




()



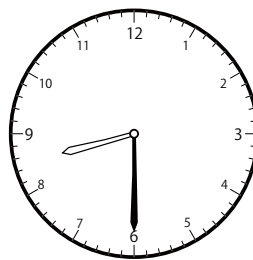
()




()



()



()




()

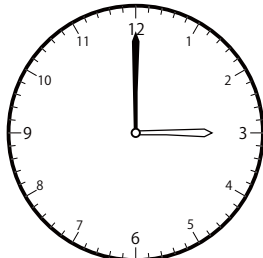
〇〇時^じ30分^{ふん}単位の^{たんい}時計^{とけい}を見つけよう【B1】

問題^{もんだい}と同じ時間^{おなじかん}の時計^{とけい}を見つけ^みて()に〇をつけましょう。


① 6時^じ0分^{ふん}の時計^{とけい}を見つけよう




()



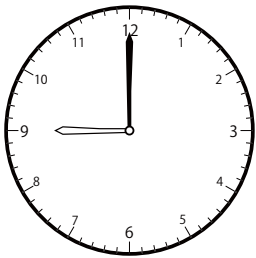
()



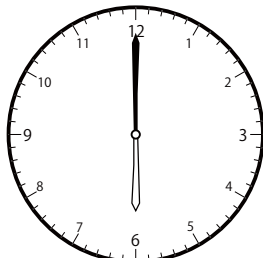
()



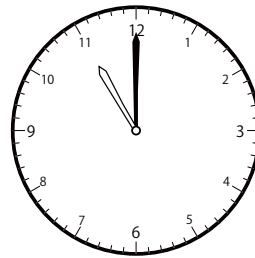
()



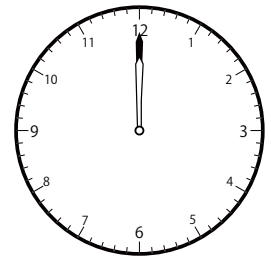
()



()




()




()

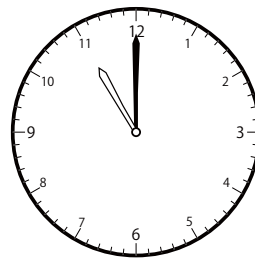
② 4時^じ0分^{ふん}の時計^{とけい}を見つけよう



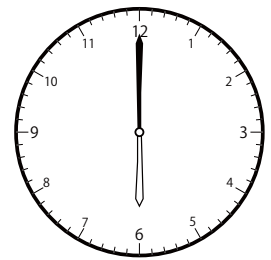
()



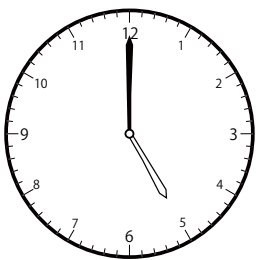
()




()



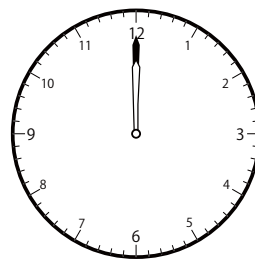
()




()



()



()




()

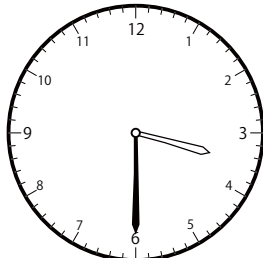
〇〇時^じ30分^{ふん}単位の^{たんい}時計^{とけい}を見つけよう【B1】

問題^{もんだい}と同じ時間^{おなじかん}の時計^{とけい}を見つけ^みて()に〇をつけましょう。

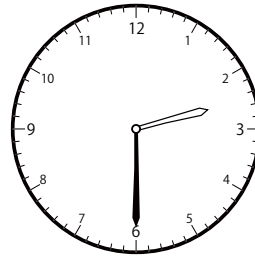
① 10時^じ30分^{ふん}の時計^{とけい}を見つけよう



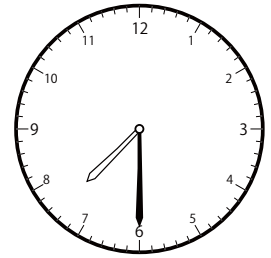
()




()




()



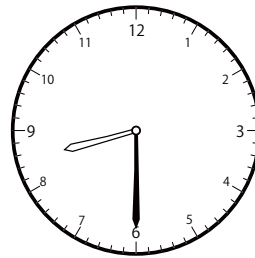
()



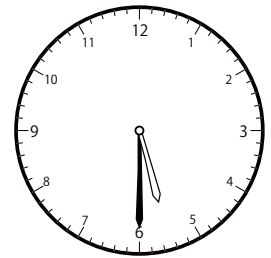
()



()

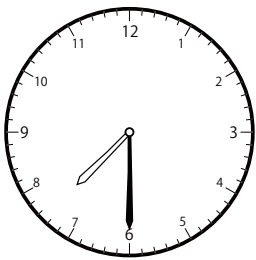


()




()

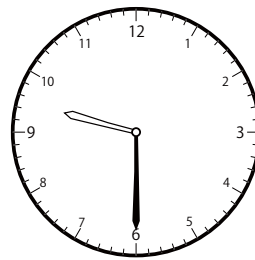
② 7時^じ30分^{ふん}の時計^{とけい}を見つけよう



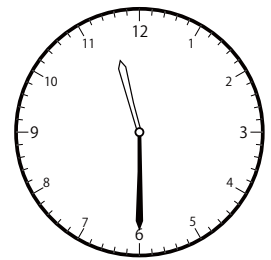
()



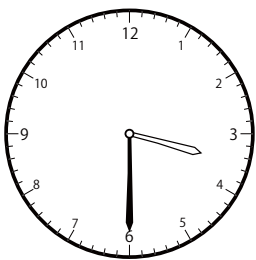
()



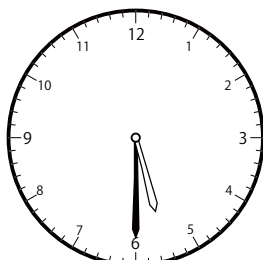
()



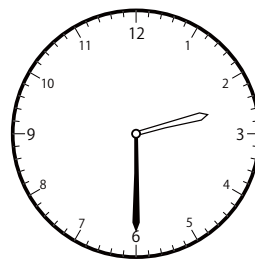
()



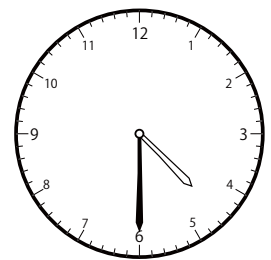
()



()



()




()

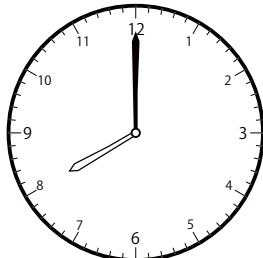
じ ふん たん い とけい み
〇〇時 30分 単位の時計を見つけよう【B1】

もんだい おな じかん とけい み
問題と同じ時間の時計を見つけて()に〇をつけましょう。


① 10時 0分の時計を見つけよう



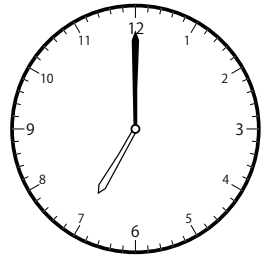
()



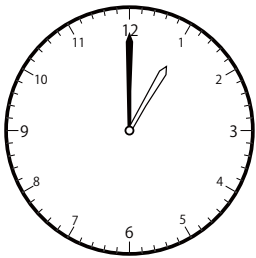
()



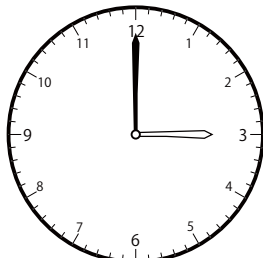
()




()




()



()

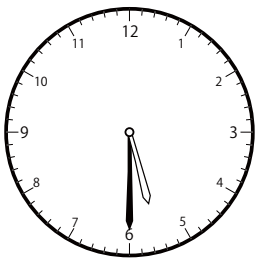


(○)




()

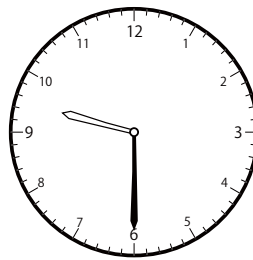
② 10時 30分の時計を見つけよう




()



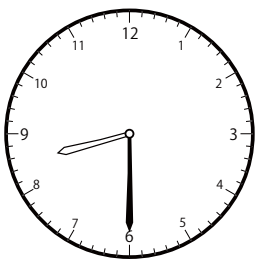
(○)



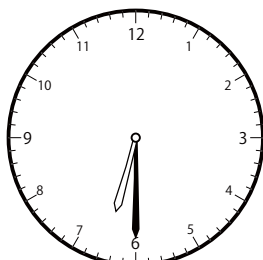
()



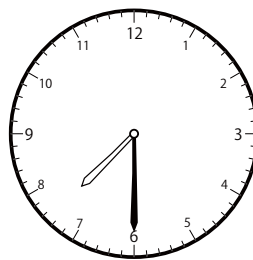
()




()



()



()

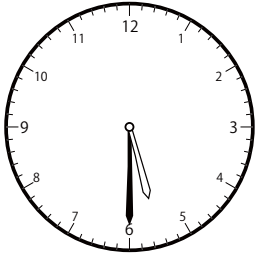


()

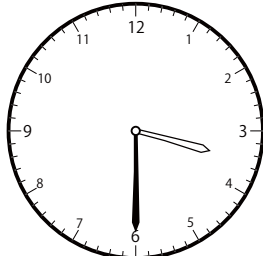
〇〇時^じ30分^{ふん}単位の^{たんい}時計^{とけい}を見つけよう【B1】

問題^{もんだい}と同じ時間^{おなじかん}の時計^{とけい}を見つけ^みて()に〇をつけましょう。


① 11時^じ30分^{ふん}の時計^{とけい}を見つけよう



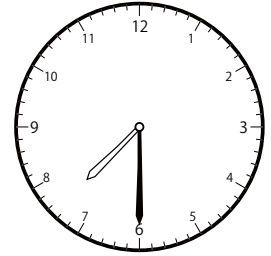
()



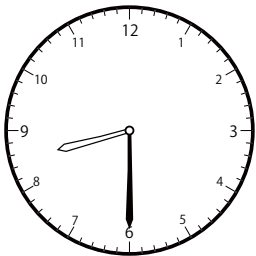
()




()




()



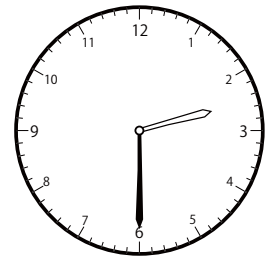
()



()

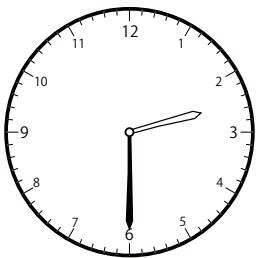


()




()

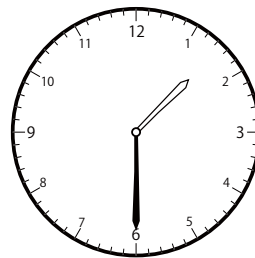
② 12時^じ30分^{ふん}の時計^{とけい}を見つけよう



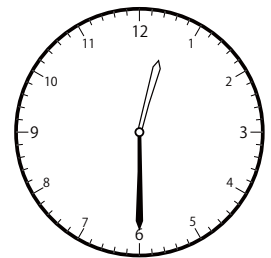
()



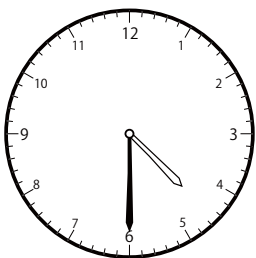
()



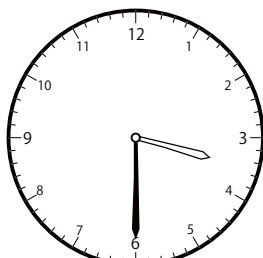
()



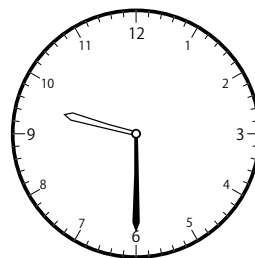
()



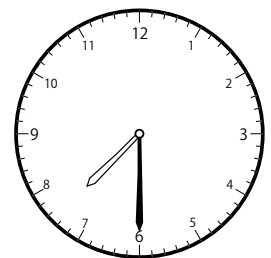
()



()

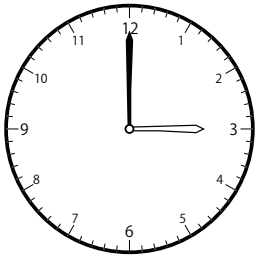


()

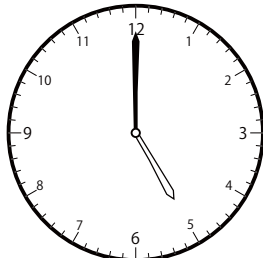


()

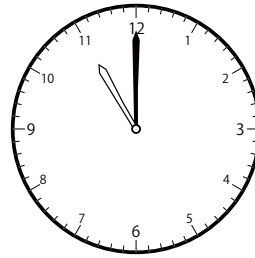
① 3時^じ0分^{ふん}の時計^{とけい}を見つけよう




()



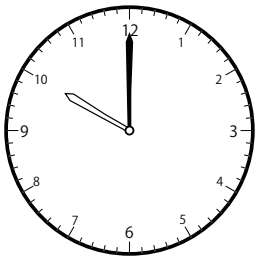
()




()




()




()



()




()




()

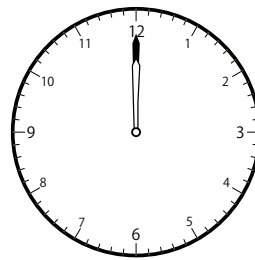
② 9時^じ0分^{ふん}の時計^{とけい}を見つけよう




()



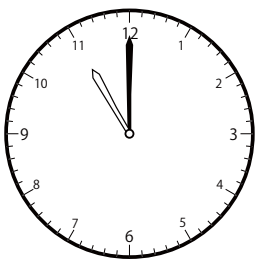
()




()



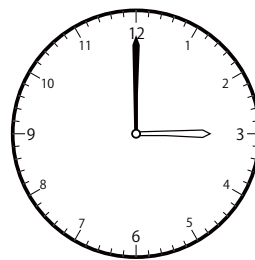
()



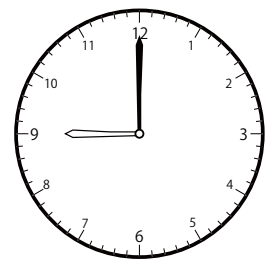
()



()



()




()

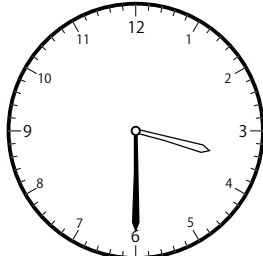
〇〇時^じ30分^{ふん}単位の時計^{とけい}を見つけよう【B1】

問題^{もんだい}と同じ時間^{おなじかん}の時計^{とけい}を見つけて()に〇をつけましょう。

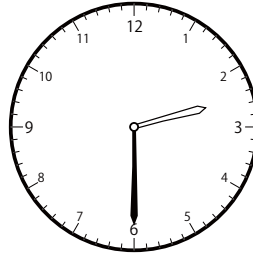
① 4時^じ30分^{ふん}の時計^{とけい}を見つけよう




()



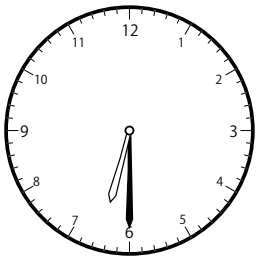
()



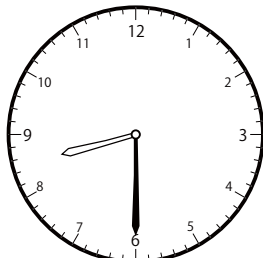
()



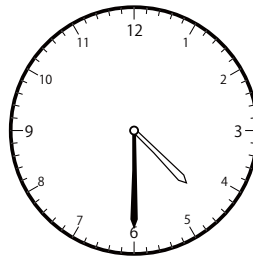
()



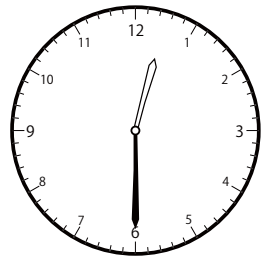
()



()




()




()


② 11時^じ0分^{ふん}の時計^{とけい}を見つけよう



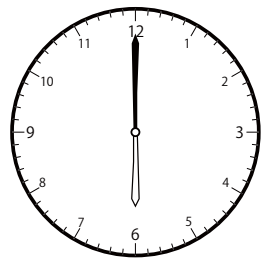
()



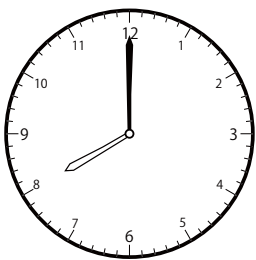
()




()



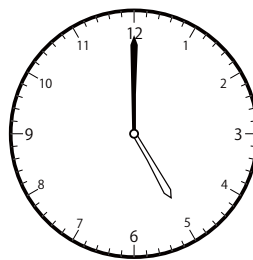
()



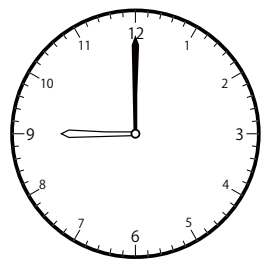
()



()



()




()

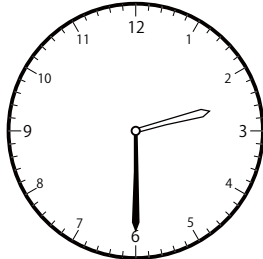
〇〇時^じ30分^{ふん}単位の^{たんい}時計^{とけい}を見つけよう【B1】

問題^{もんだい}と同じ時間^{おなじかん}の時計^{とけい}を見つけ^みて()に〇をつけましょう。

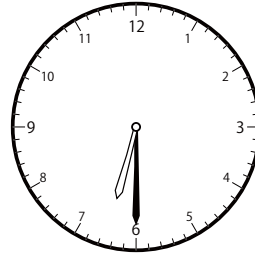
① 3時^じ30分^{ふん}の時計^{とけい}を見つけよう




()



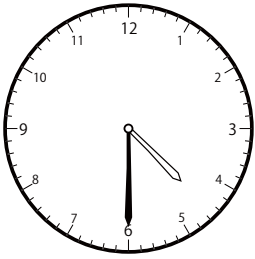
()



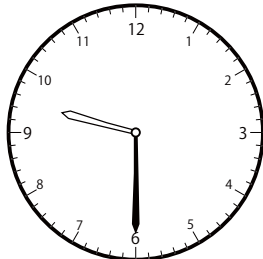
()



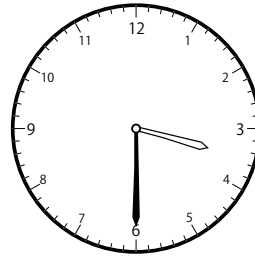
()



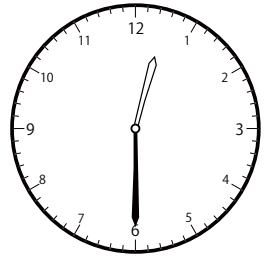
()



()

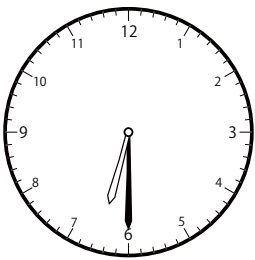


()

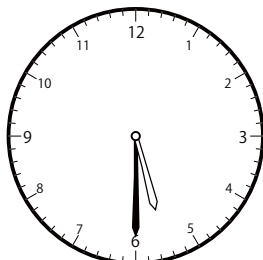


()

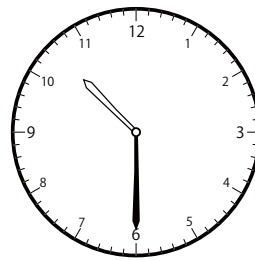
② 6時^じ30分^{ふん}の時計^{とけい}を見つけよう



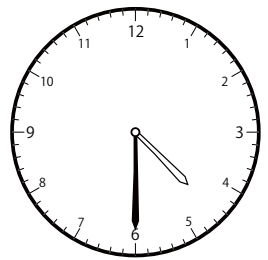
()



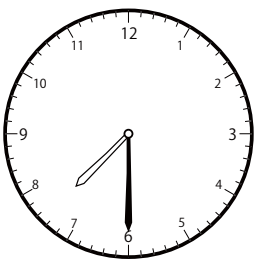
()




()




()



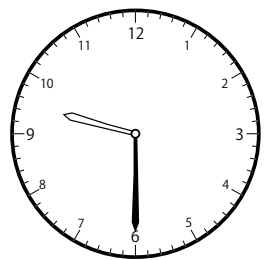
()



()



()

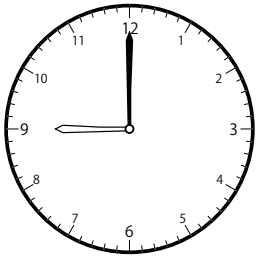


()

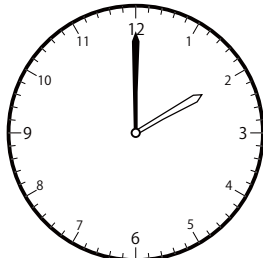
〇〇時^じ30分^{ふん}単位の^{たんい}時計^{とけい}を見つけよう【B1】

問題^{もんだい}と同じ時間^{おなじかん}の時計^{とけい}を見つけ^みて()に〇をつけましょう。

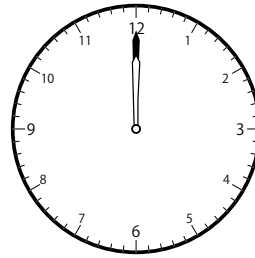
① 12時^じ 0分^{ふん}の時計^{とけい}を見つけよう




()



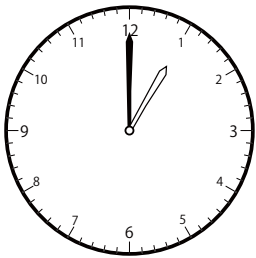
()




()



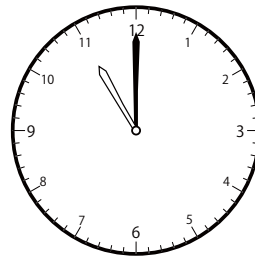
()




()



()




()




()


② 2時^じ 0分^{ふん}の時計^{とけい}を見つけよう



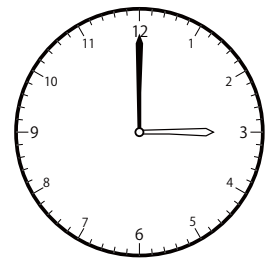
()



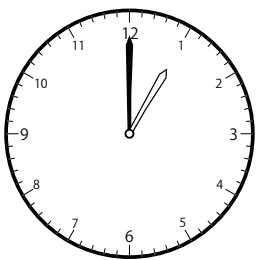
()




()




()




()



()

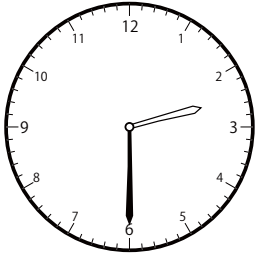


()

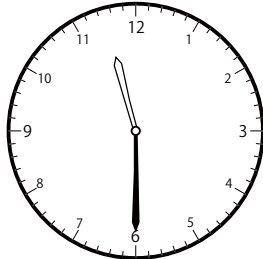


()

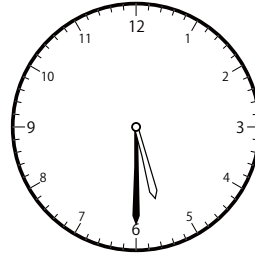
① 5時^じ30分^{ふん}の時計^{とけい}を見つけよう



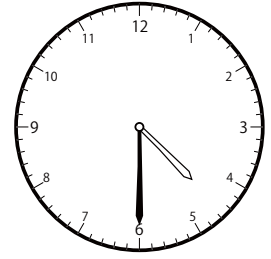
()



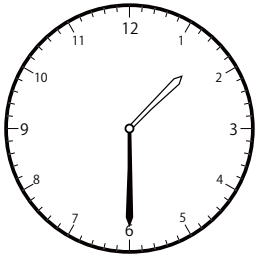
()



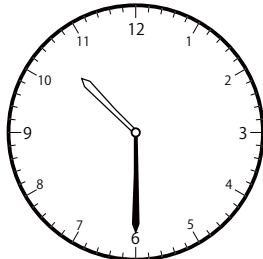
()



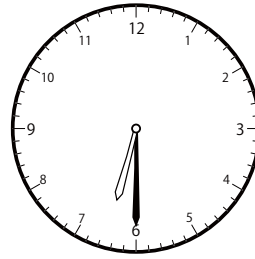
()



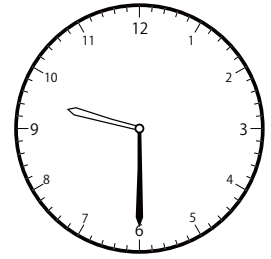
()



()

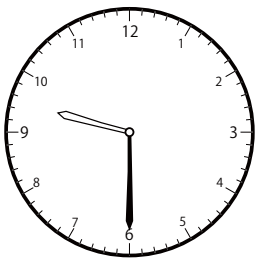


()

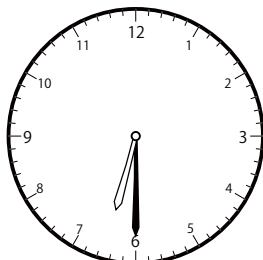


()

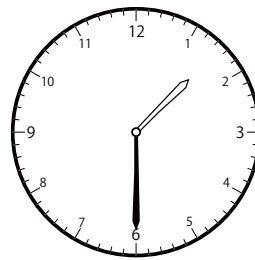
② 1時^じ30分^{ふん}の時計^{とけい}を見つけよう



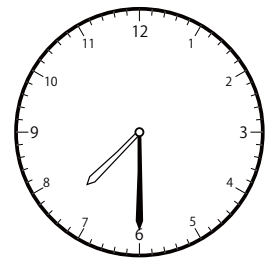
()



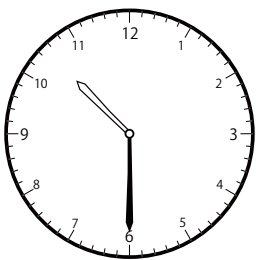
()




()




()



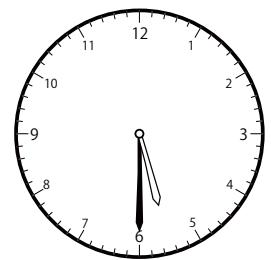
()



()



()

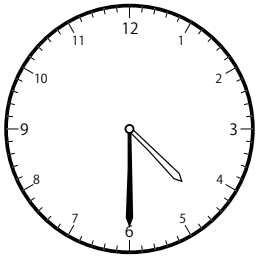


()

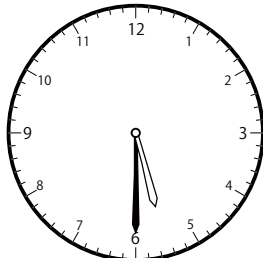
〇〇時^じ30分^{ふん}単位の^{たんい}時計^{とけい}を見つけよう【B1】

問題^{もんだい}と同じ時間^{おなじかん}の時計^{とけい}を見つけて()に〇をつけましょう。

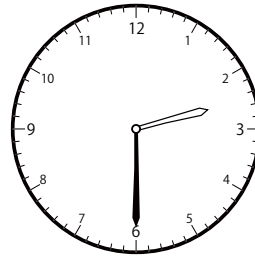
① 8時^じ30分^{ふん}の時計^{とけい}を見つけよう



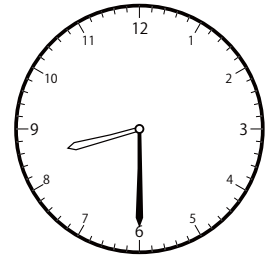
()



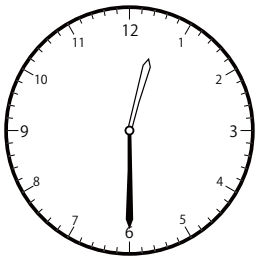
()




()



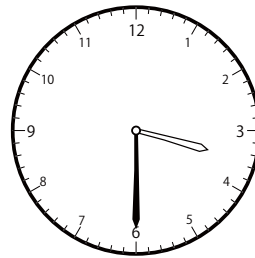
()




()



()

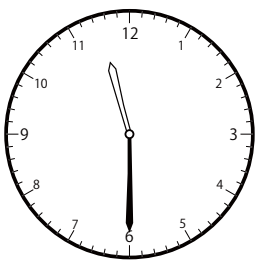


()




()

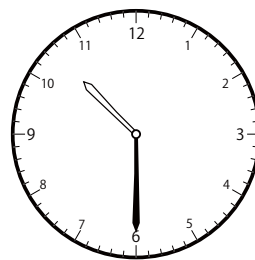
② 9時^じ30分^{ふん}の時計^{とけい}を見つけよう



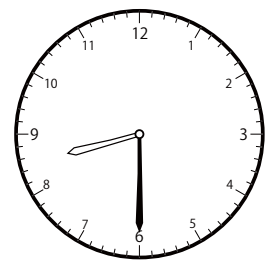
()



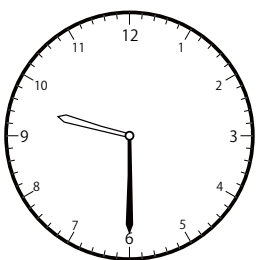
()



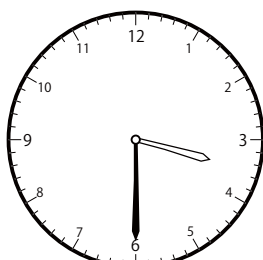
()




()



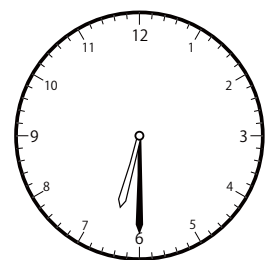
()



()



()

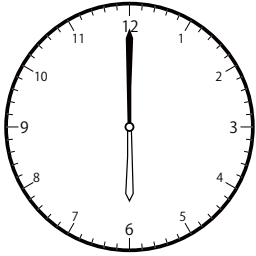


()

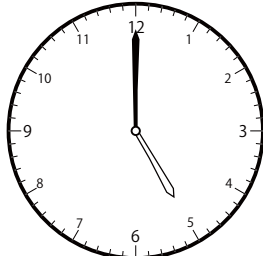
〇〇時^じ30分^{ふん}単位の^{たんい}時計^{とけい}を見つけよう【B1】

問題^{もんだい}と同じ時間^{おなじかん}の時計^{とけい}を見つけて()に〇をつけましょう。

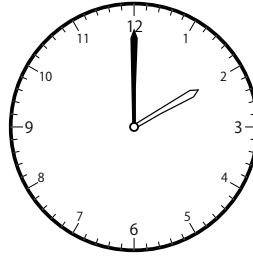
① 6時^じ0分^{ふん}の時計^{とけい}を見つけよう




()



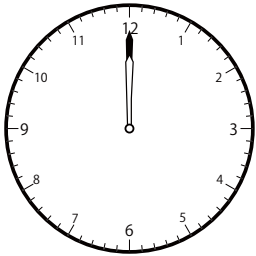
()




()



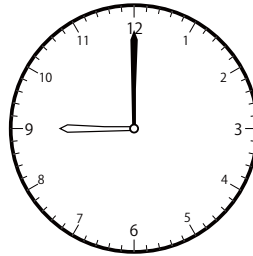
()



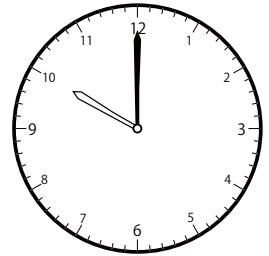
()



()

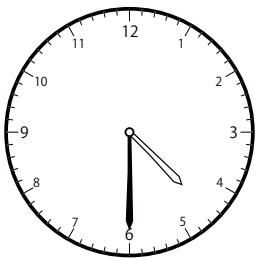


()




()

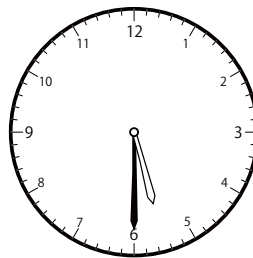
② 2時^じ30分^{ふん}の時計^{とけい}を見つけよう



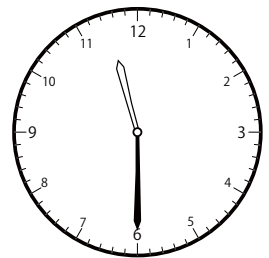
()



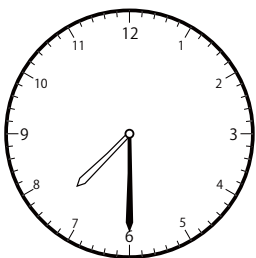
()




()



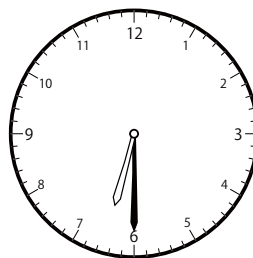
()



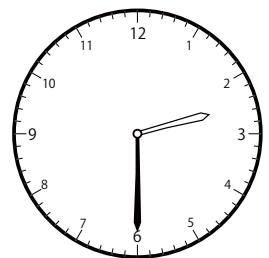
()



()



()




()

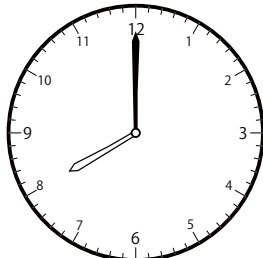
じ ふん たん い とけい み
〇〇時 30分 単位の時計を見つけよう【B1】

もんだい おな じかん とけい み
問題と同じ時間の時計を見つけて()に〇をつけましょう。

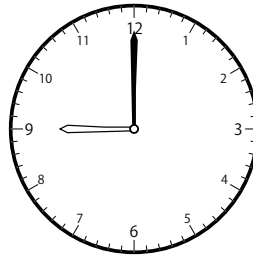
① 8時 0分の時計を見つけよう



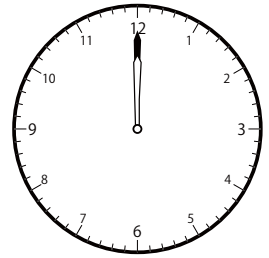
()



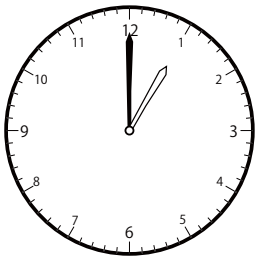
()



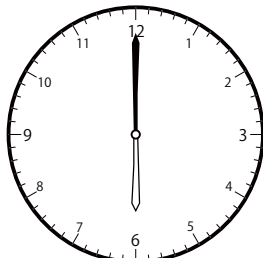
()




()




()



()

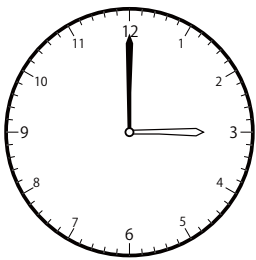


()




()


② 7時 0分の時計を見つけよう




()



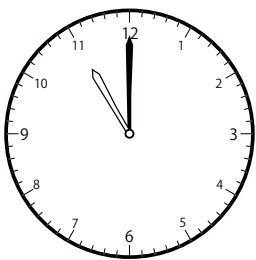
()




()



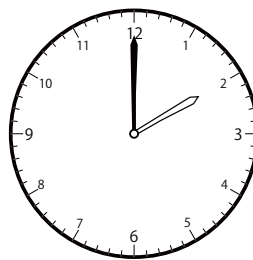
()




()



()



()

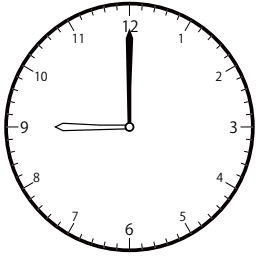


()

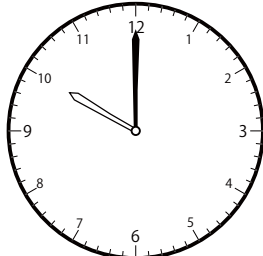
〇〇時^じ30分^{ふん}単位の^{たんい}時計^{とけい}を見つけよう【B1】

問題^{もんだい}と同じ時間^{おなじかん}の時計^{とけい}を見つけ^みて()に〇をつけましょう。

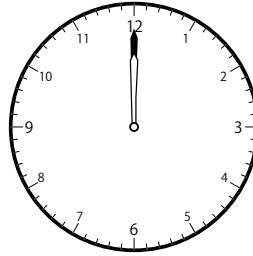
① 5時^じ0分^{ふん}の時計^{とけい}を見つけよう




()




()




()



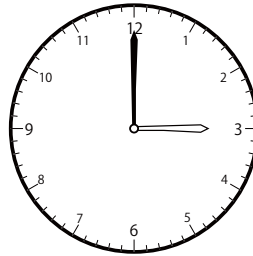
()



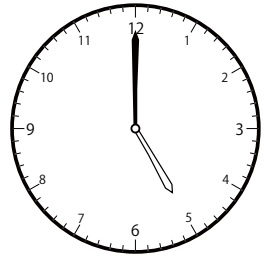
()



()

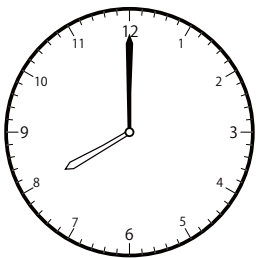


()




()


② 4時^じ0分^{ふん}の時計^{とけい}を見つけよう




()




()



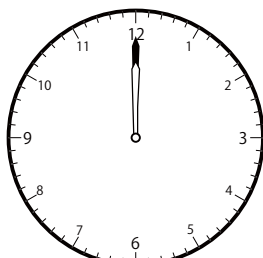
()




()




()



()



()




()

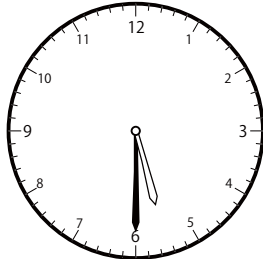
〇〇時^じ30分^{ふん}単位の^{たんい}時計^{とけい}を見つけよう【B1】

問題^{もんだい}と同じ時間^{おなじかん}の時計^{とけい}を見つけて()に〇をつけましょう。

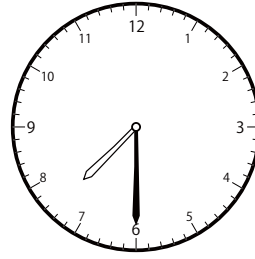
① 8時^じ30分^{ふん}の時計^{とけい}を見つけよう



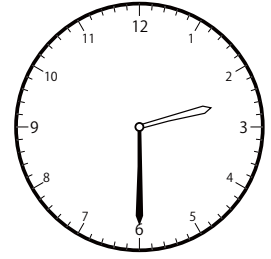
()



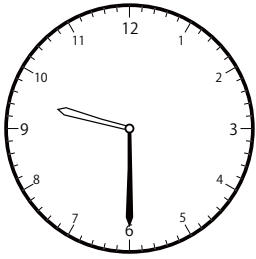
()



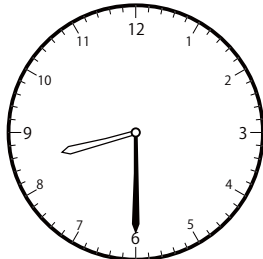
()



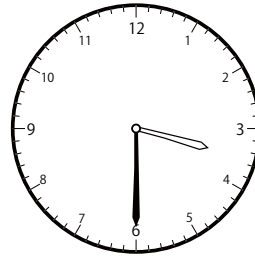
()



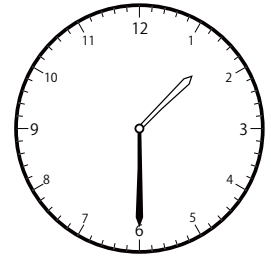
()



()

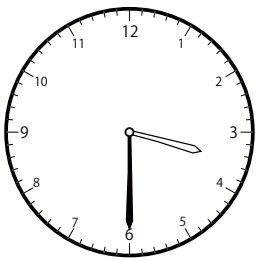


()




()

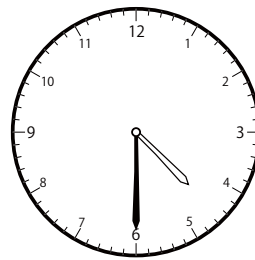
② 12時^じ30分^{ふん}の時計^{とけい}を見つけよう



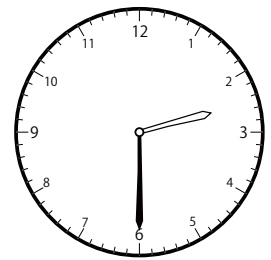
()



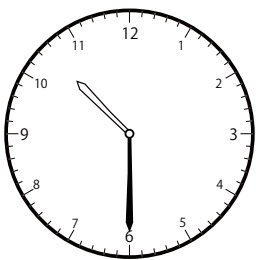
()



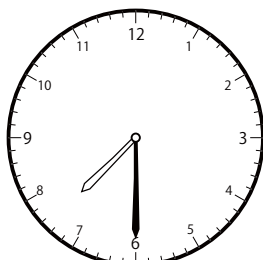
()



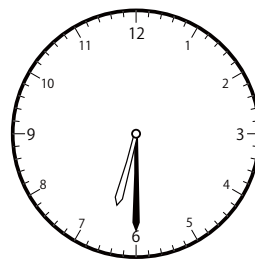
()



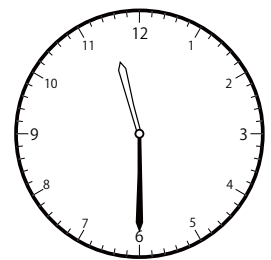
()



()



()




()

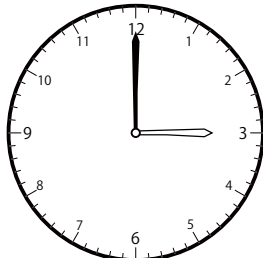
〇〇時^じ30分^{ふん}単位の時計^{とけい}を見つけよう【B1】

問題^{もんだい}と同じ時間^{おなじかん}の時計^{とけい}を見つけて()に〇をつけましょう。


① 11時^じ0分^{ふん}の時計^{とけい}を見つけよう




()




()



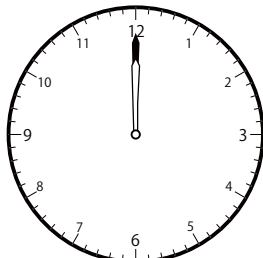
()



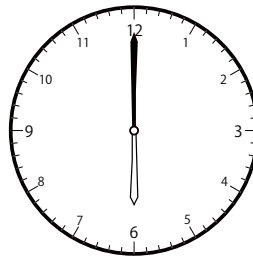
()




()



()




()

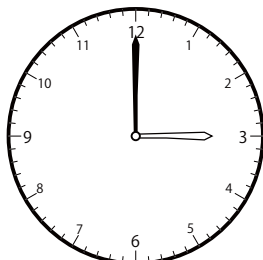


()


② 3時^じ0分^{ふん}の時計^{とけい}を見つけよう




()



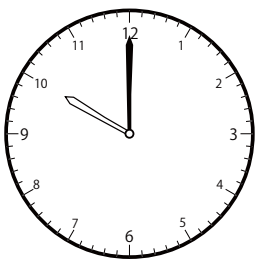
()




()




()




()



()



()

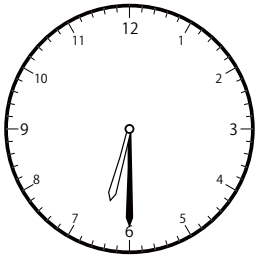


()

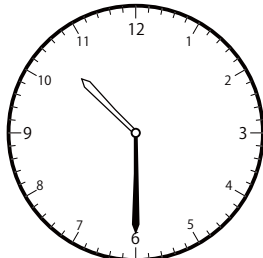
〇〇時^じ30分^{ふん}単位の時計^{とけい}を見つけよう【B1】

問題^{もんだい}と同じ時間^{おなじかん}の時計^{とけい}を見つけて()に〇をつけましょう。

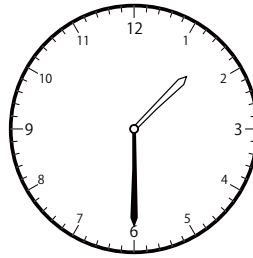
① 6時^じ30分^{ふん}の時計^{とけい}を見つけよう



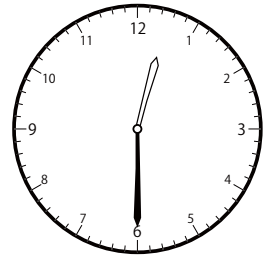
()



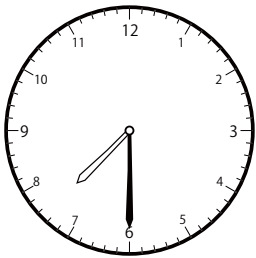
()



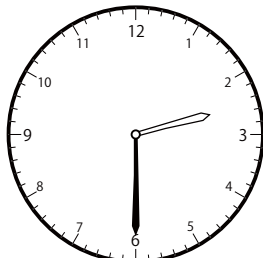
()



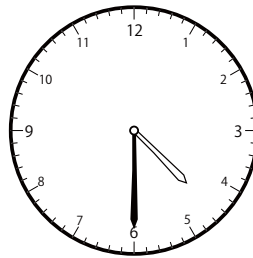
()



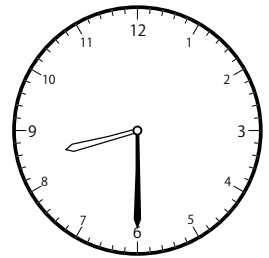
()



()

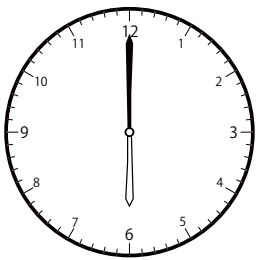


()




()


② 10時^じ0分^{ふん}の時計^{とけい}を見つけよう




()



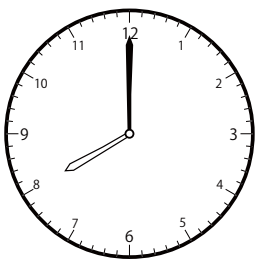
()




()



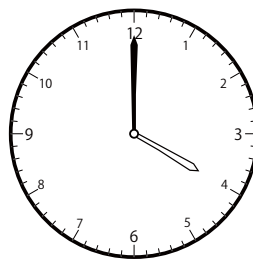
()




()



()



()




()


〇〇時^じ30分^{ふん}単位の^{たんい}時計^{とけい}を見つけよう【B1】

問題^{もんだい}と同じ時間^{おなじかん}の時計^{とけい}を見つけ^みて()に〇をつけましょう。

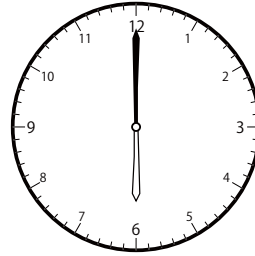
① 2時^じ0分^{ふん}の時計^{とけい}を見つけよう



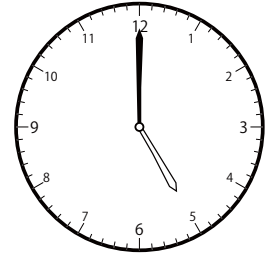
()



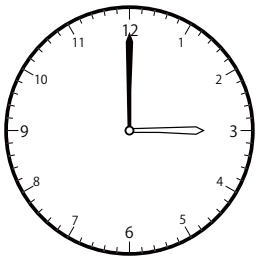
()




()



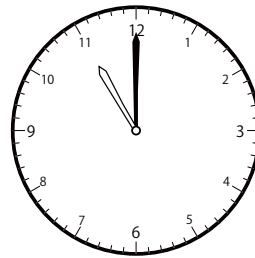
()




()



()

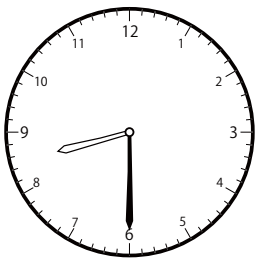


()

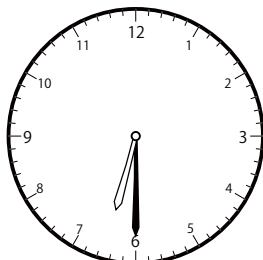


()

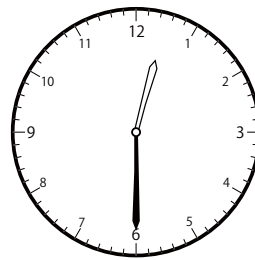
② 4時^じ30分^{ふん}の時計^{とけい}を見つけよう



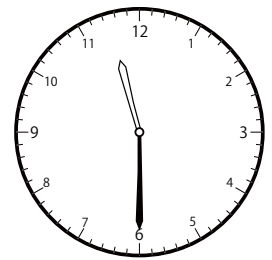
()



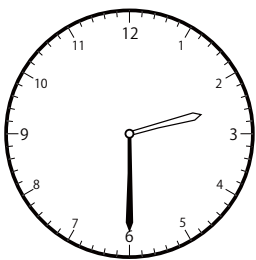
()



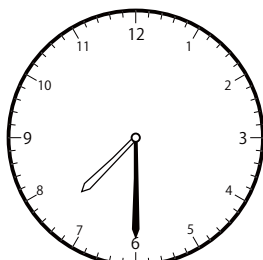
()



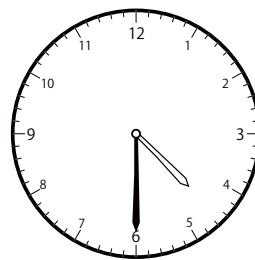
()



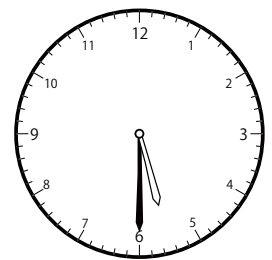
()



()



()



()