


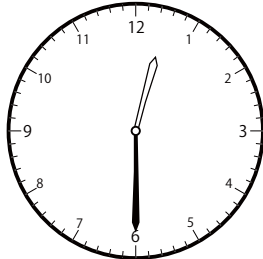
〇〇時<sup>じ</sup>30分<sup>ふん</sup>単位の<sup>たんい</sup>時計<sup>とけい</sup>を見つけよう【B1】

問題<sup>もんだい</sup>と同じ時間<sup>おなじかん</sup>の時計<sup>とけい</sup>を見つけて( )に〇をつけましょう。

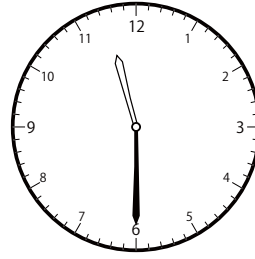
① 1時<sup>じ</sup>30分<sup>ふん</sup>の時計<sup>とけい</sup>を見つけよう



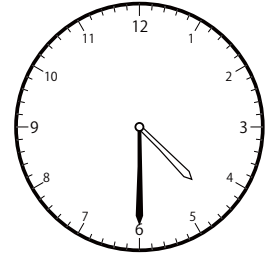
( )



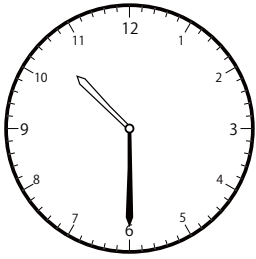
( )



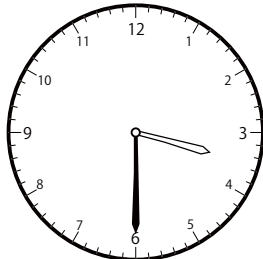
( )



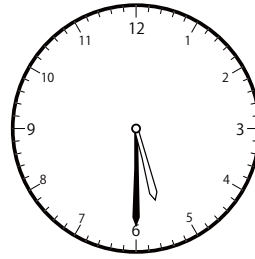
( )



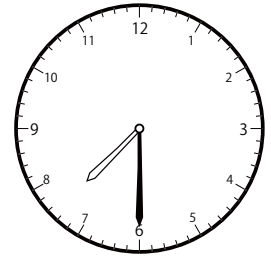
( )



( )

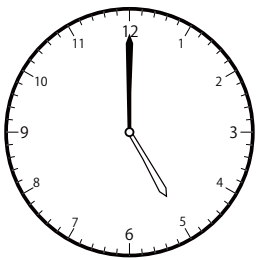


( )

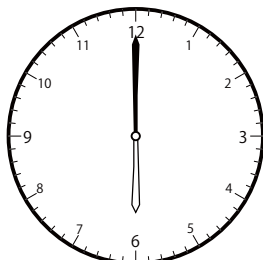


( )


② 2時<sup>じ</sup>0分<sup>ふん</sup>の時計<sup>とけい</sup>を見つけよう



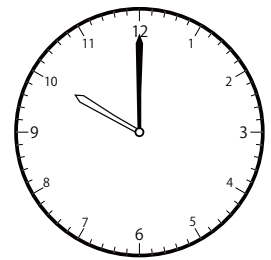
( )



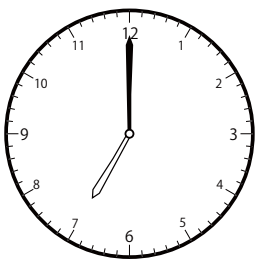
( )




( )



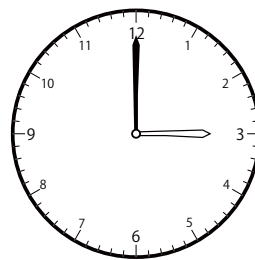
( )




( )



( )



( )

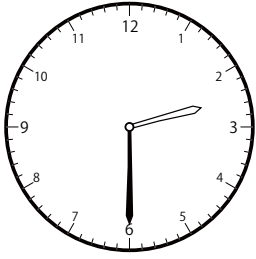


( )

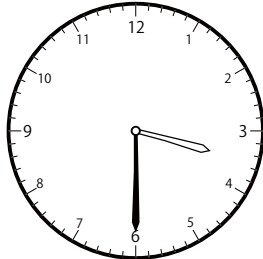
〇〇時<sup>じ</sup>30分<sup>ふん</sup>単位の時計<sup>とけい</sup>を見つけよう【B1】

問題<sup>もんだい</sup>と同じ時間<sup>おなじかん</sup>の時計<sup>とけい</sup>を見つけて( )に〇をつけましょう。

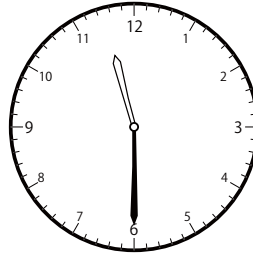
① 2時<sup>じ</sup>30分<sup>ふん</sup>の時計<sup>とけい</sup>を見つけよう



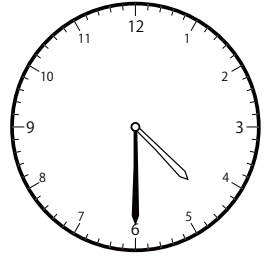
( )



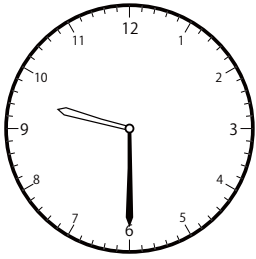
( )



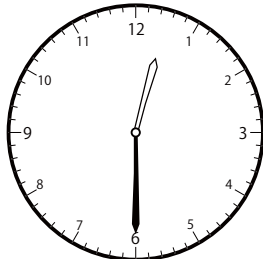
( )



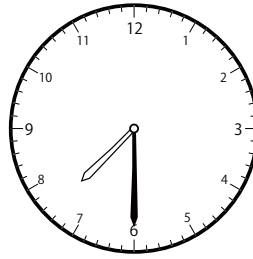
( )



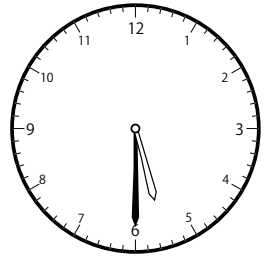
( )



( )

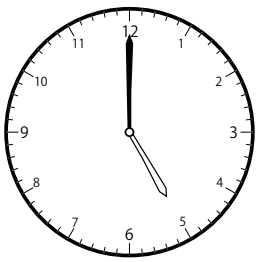


( )

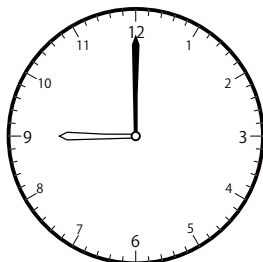


( )

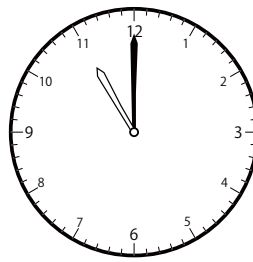
② 3時<sup>じ</sup>0分<sup>ふん</sup>の時計<sup>とけい</sup>を見つけよう




( )



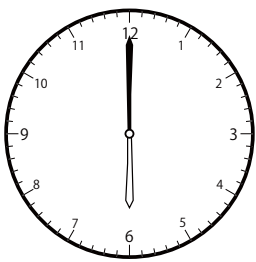
( )




( )



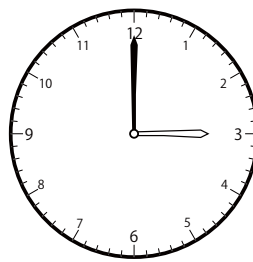
( )




( )



( )



( )

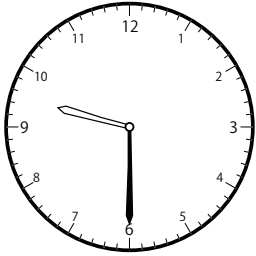


( )

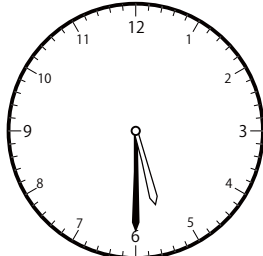
〇〇時<sup>じ</sup>30分<sup>ふん</sup>単位の時計<sup>とけい</sup>を見つけよう【B1】

問題<sup>もんだい</sup>と同じ時間<sup>おなじかん</sup>の時計<sup>とけい</sup>を見つけて( )に〇をつけましょう。


① 3時<sup>じ</sup>30分<sup>ふん</sup>の時計<sup>とけい</sup>を見つけよう



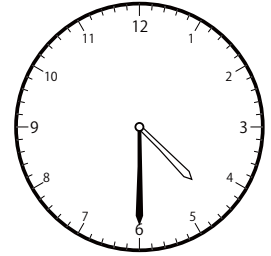
( )



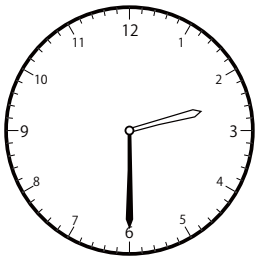
( )




( )




( )



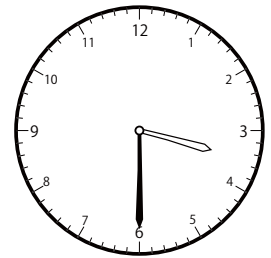
( )



( )

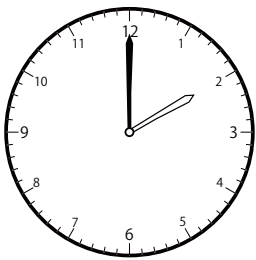


( )




( )

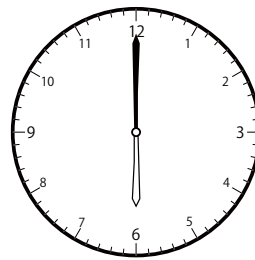
② 4時<sup>じ</sup>0分<sup>ふん</sup>の時計<sup>とけい</sup>を見つけよう




( )



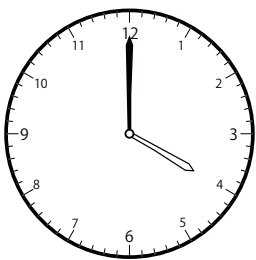
( )




( )




( )



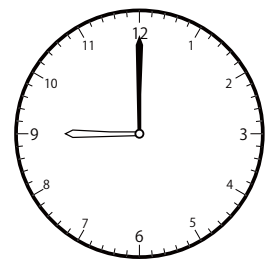
( )



( )



( )

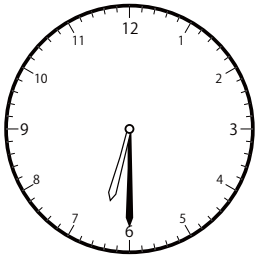


( )

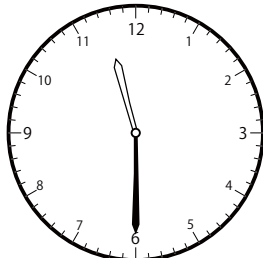
〇〇時<sup>じ</sup>30分<sup>ふん</sup>単位の時計<sup>とけい</sup>を見つけよう【B1】

問題<sup>もんだい</sup>と同じ時間<sup>おなじかん</sup>の時計<sup>とけい</sup>を見つけて( )に〇をつけましょう。

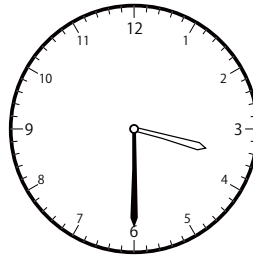
① 4時<sup>じ</sup>30分<sup>ふん</sup>の時計<sup>とけい</sup>を見つけよう



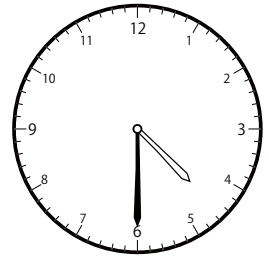
( )




( )



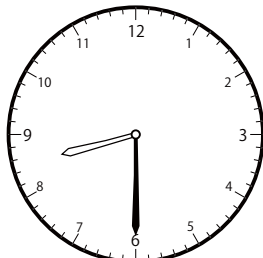
( )



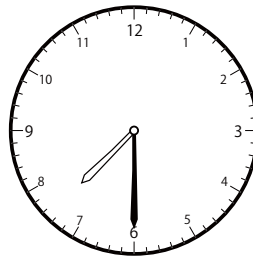
( )



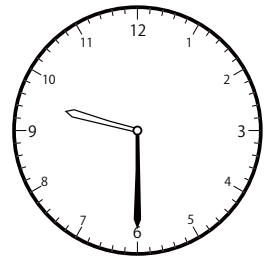
( )



( )

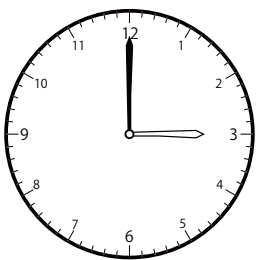


( )

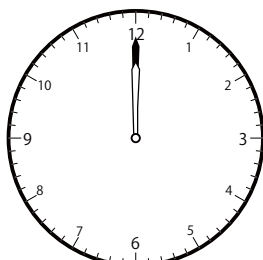


( )


② 5時<sup>じ</sup>0分<sup>ふん</sup>の時計<sup>とけい</sup>を見つけよう




( )




( )




( )




( )




( )



( )



( )




( )

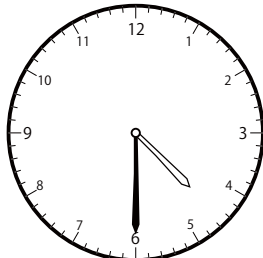
〇〇時<sup>じ</sup>30分<sup>ふん</sup>単位の<sup>たんい</sup>時計<sup>とけい</sup>を見つけよう【B1】

問題<sup>もんだい</sup>と同じ時間<sup>おなじかん</sup>の時計<sup>とけい</sup>を見つけ<sup>み</sup>て( )に〇をつけましょう。


① 5時<sup>じ</sup>30分<sup>ふん</sup>の時計<sup>とけい</sup>を見つけよう



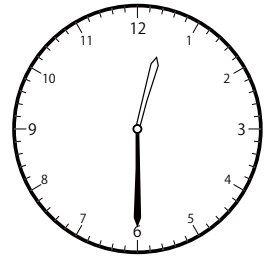
( )



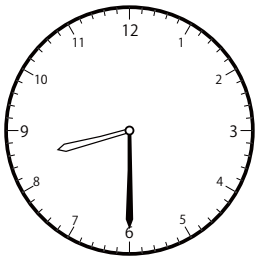
( )



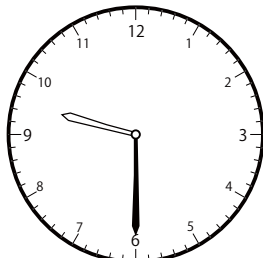
( )



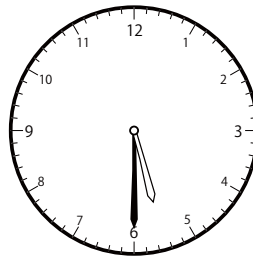
( )




( )



( )

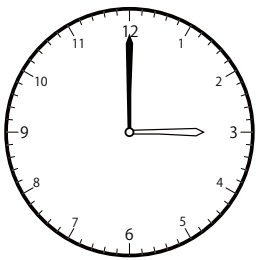


( )




( )


② 6時<sup>じ</sup>0分<sup>ふん</sup>の時計<sup>とけい</sup>を見つけよう




( )



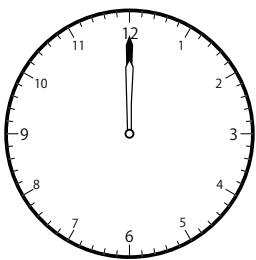
( )




( )



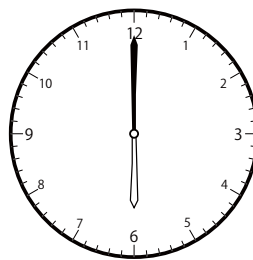
( )




( )



( )



( )

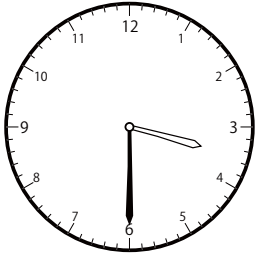


( )

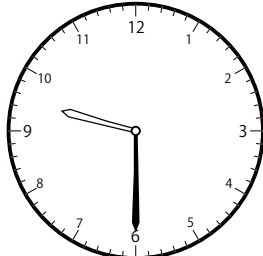
〇〇時<sup>じ</sup>30分<sup>ふん</sup>単位の<sup>たんい</sup>時計<sup>とけい</sup>を見つけよう【B1】

問題<sup>もんだい</sup>と同じ時間<sup>おなじかん</sup>の時計<sup>とけい</sup>を見つけて( )に〇をつけましょう。

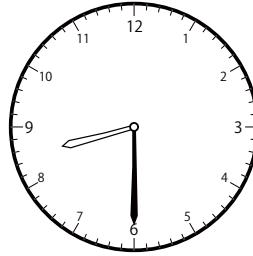
① 6時<sup>じ</sup>30分<sup>ふん</sup>の時計<sup>とけい</sup>を見つけよう



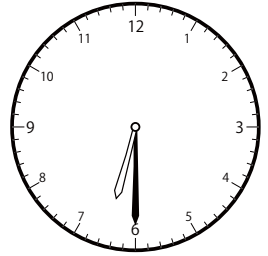
( )



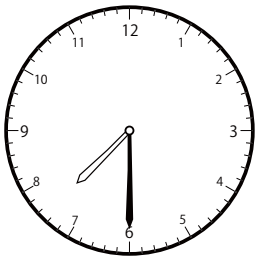
( )




( )



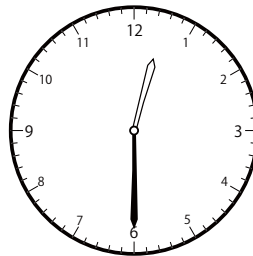
( )



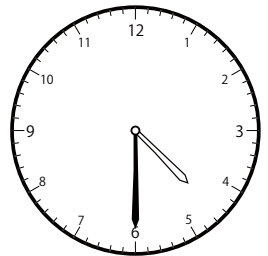
( )



( )

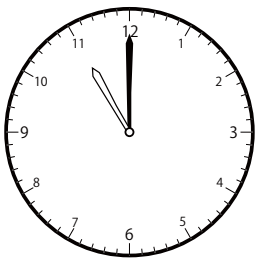


( )




( )


② 7時<sup>じ</sup>0分<sup>ふん</sup>の時計<sup>とけい</sup>を見つけよう




( )




( )




( )



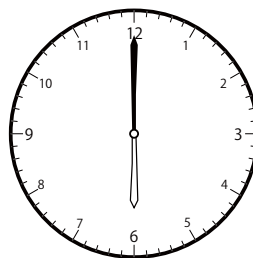
( )




( )



( )



( )

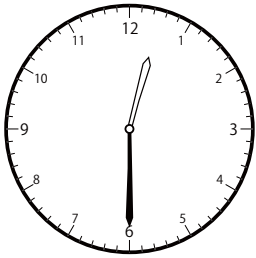


( )

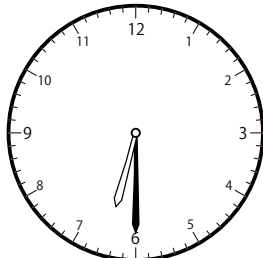
〇〇時<sup>じ</sup>30分<sup>ふん</sup>単位の<sup>たんい</sup>時計<sup>とけい</sup>を見つけよう【B1】

問題<sup>もんだい</sup>と同じ時間<sup>おなじかん</sup>の時計<sup>とけい</sup>を見つけて( )に〇をつけましょう。

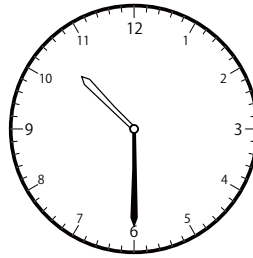
① 7時<sup>じ</sup>30分<sup>ふん</sup>の時計<sup>とけい</sup>を見つけよう



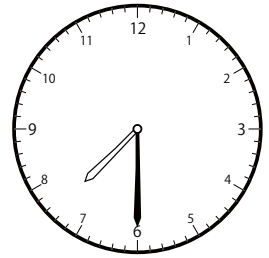
( )



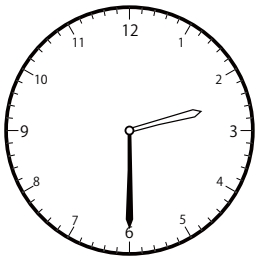
( )



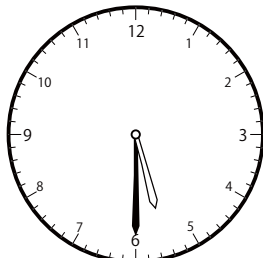
( )



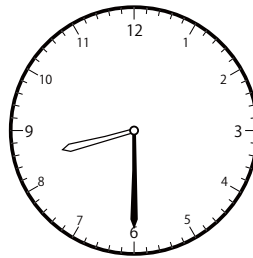
( )



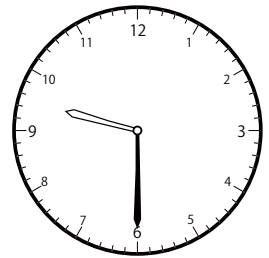
( )



( )




( )




( )


② 8時<sup>じ</sup>0分<sup>ふん</sup>の時計<sup>とけい</sup>を見つけよう



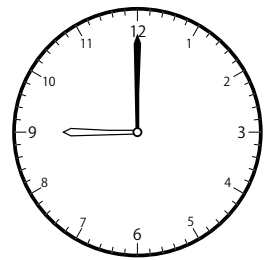
( )



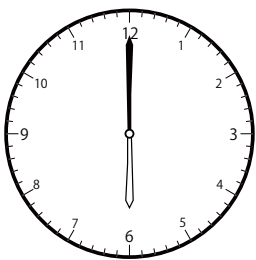
( )




( )



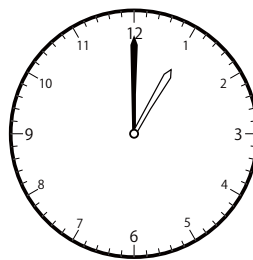
( )




( )



( )



( )

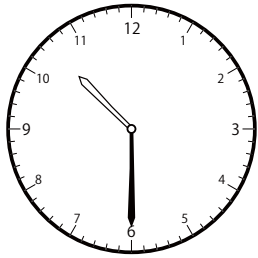


( )

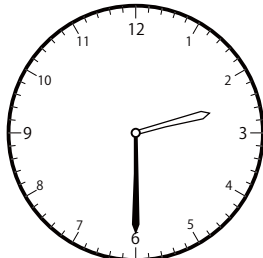
〇〇時<sup>じ</sup>30分<sup>ふん</sup>単位の<sup>たんい</sup>時計<sup>とけい</sup>を見つけよう【B1】

問題<sup>もんだい</sup>と同じ時間<sup>おなじかん</sup>の時計<sup>とけい</sup>を見つけて( )に〇をつけましょう。

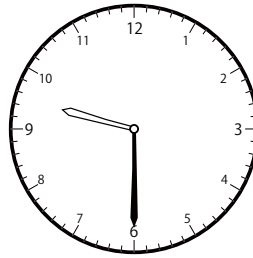
① 8時<sup>じ</sup>30分<sup>ふん</sup>の時計<sup>とけい</sup>を見つけよう



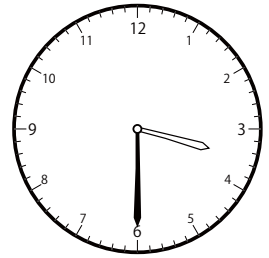
( )



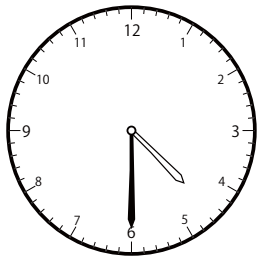
( )




( )




( )



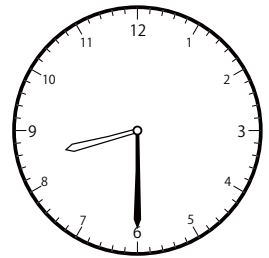
( )



( )

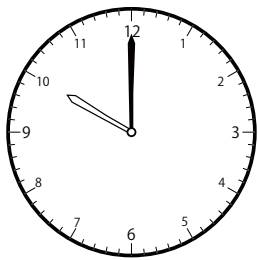


( )




( )

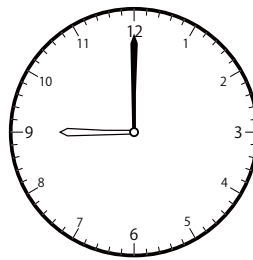
② 9時<sup>じ</sup>0分<sup>ふん</sup>の時計<sup>とけい</sup>を見つけよう




( )



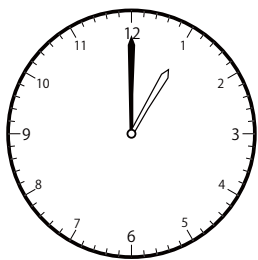
( )



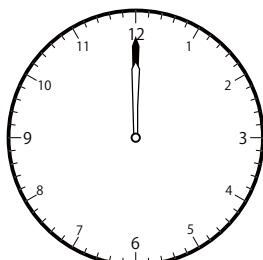
( )



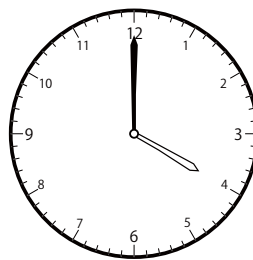
( )




( )



( )



( )



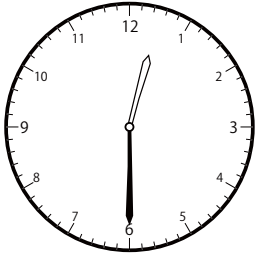
( )



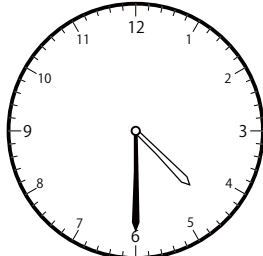
〇〇時<sup>じ</sup>30分<sup>ふん</sup>単位の時計<sup>とけい</sup>を見つけよう【B1】

問題<sup>もんだい</sup>と同じ時間<sup>おなじかん</sup>の時計<sup>とけい</sup>を見つけて( )に〇をつけましょう。

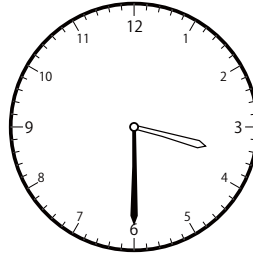
① 9時<sup>じ</sup>30分<sup>ふん</sup>の時計<sup>とけい</sup>を見つけよう




( )



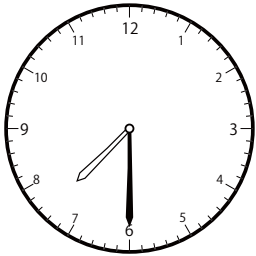
( )



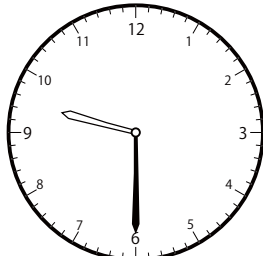
( )



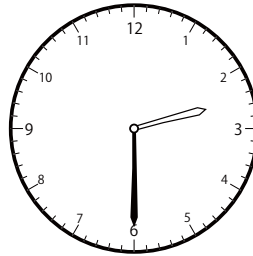
( )



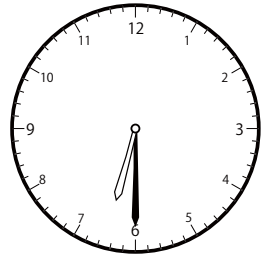
( )



( )




( )




( )


② 10時<sup>じ</sup>0分<sup>ふん</sup>の時計<sup>とけい</sup>を見つけよう




( )




( )




( )




( )



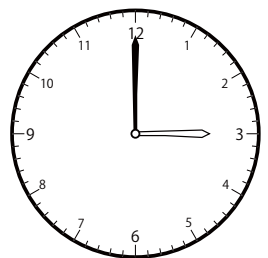
( )



( )



( )

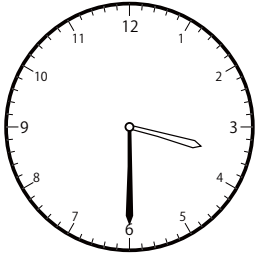


( )

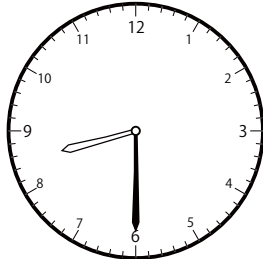
〇〇時<sup>じ</sup>30分<sup>ふん</sup>単位の時計<sup>とけい</sup>を見つけよう【B1】

問題<sup>もんだい</sup>と同じ時間<sup>おなじかん</sup>の時計<sup>とけい</sup>を見つけて( )に〇をつけましょう。

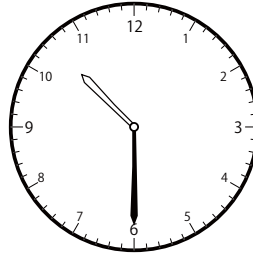
① 10時<sup>じ</sup>30分<sup>ふん</sup>の時計<sup>とけい</sup>を見つけよう



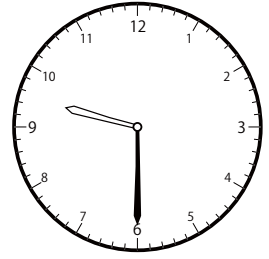
( )



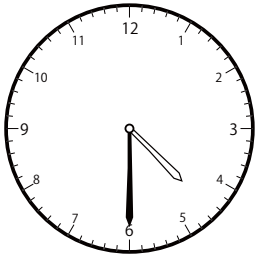
( )



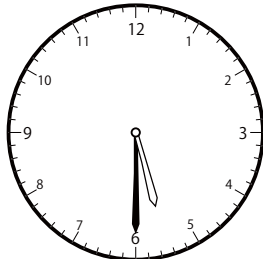
( )



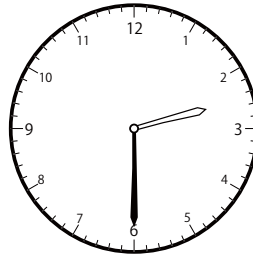
( )



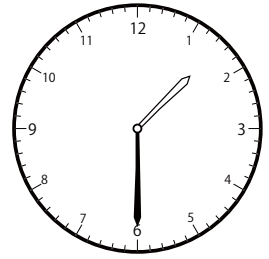
( )



( )

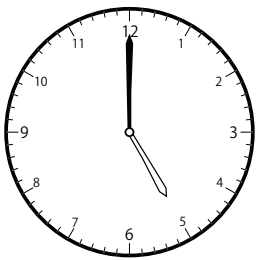


( )




( )


② 11時<sup>じ</sup>0分<sup>ふん</sup>の時計<sup>とけい</sup>を見つけよう




( )



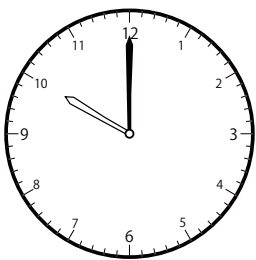
( )




( )



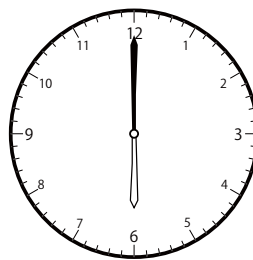
( )




( )



( )



( )

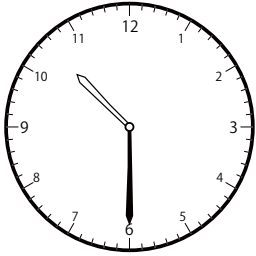


( )

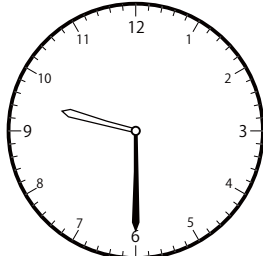
〇〇時<sup>じ</sup>30分<sup>ふん</sup>単位の<sup>たんい</sup>時計<sup>とけい</sup>を見つけよう【B1】

問題<sup>もんだい</sup>と同じ時間<sup>おなじかん</sup>の時計<sup>とけい</sup>を見つけ<sup>み</sup>て( )に〇をつけましょう。

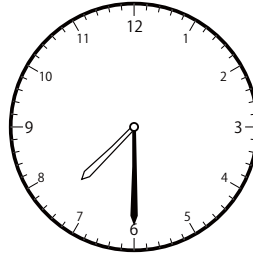
① 11時<sup>じ</sup>30分<sup>ふん</sup>の時計<sup>とけい</sup>を見つけよう



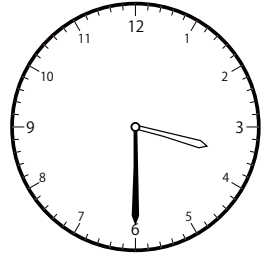
( )



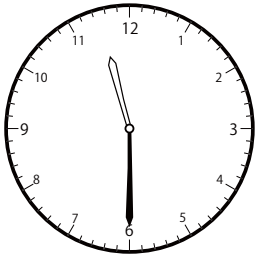
( )



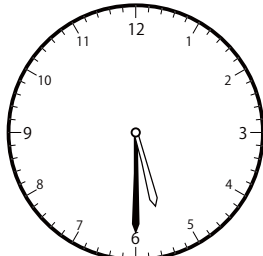
( )



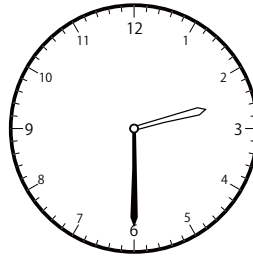
( )



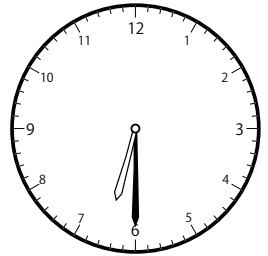
( )



( )

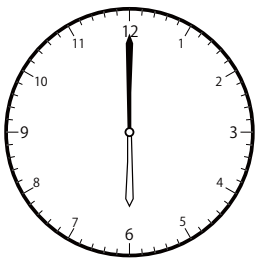


( )

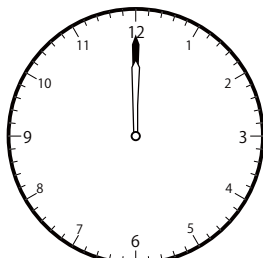


( )

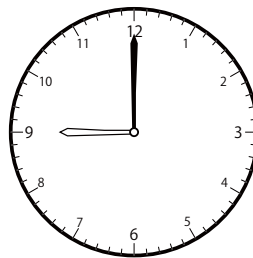
② 12時<sup>じ</sup>0分<sup>ふん</sup>の時計<sup>とけい</sup>を見つけよう




( )




( )




( )




( )




( )



( )



( )

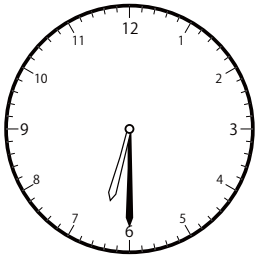


( )

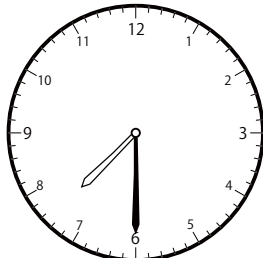
〇〇時<sup>じ</sup>30分<sup>ふん</sup>単位の<sup>たんい</sup>時計<sup>とけい</sup>を見つけよう【B1】

問題<sup>もんだい</sup>と同じ時間<sup>おなじかん</sup>の時計<sup>とけい</sup>を見つけて( )に〇をつけましょう。

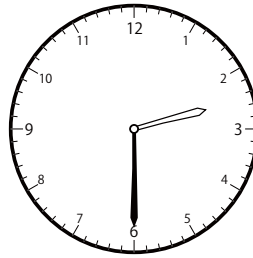
① 12時<sup>じ</sup>30分<sup>ふん</sup>の時計<sup>とけい</sup>を見つけよう



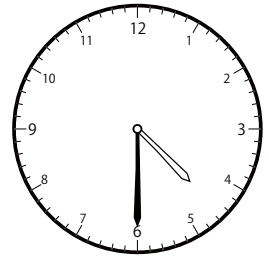
( )



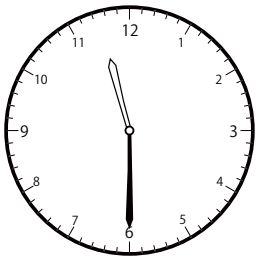
( )




( )



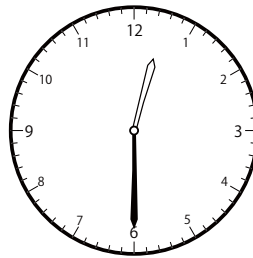
( )



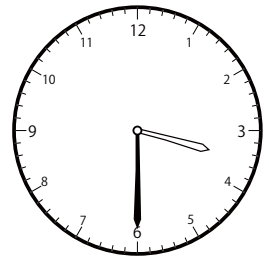
( )



( )

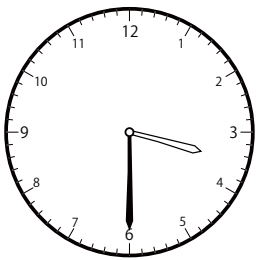


( )




( )

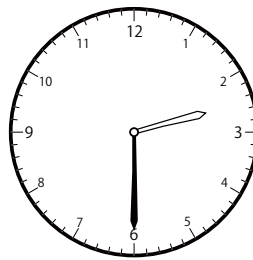
② 1時<sup>じ</sup>30分<sup>ふん</sup>の時計<sup>とけい</sup>を見つけよう



( )



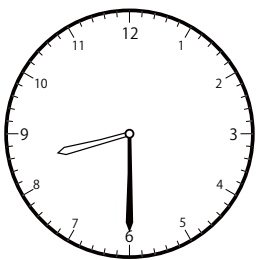
( )




( )



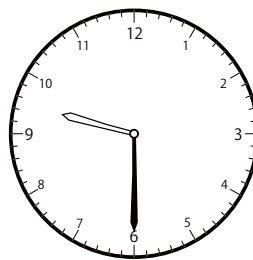
( )



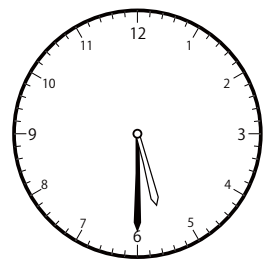
( )



( )



( )




( )

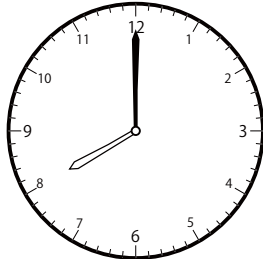
〇〇時<sup>じ</sup>30分<sup>ふん</sup>単位の<sup>たんい</sup>時計<sup>とけい</sup>を見つけよう【B1】

問題<sup>もんだい</sup>と同じ時間<sup>おなじかん</sup>の時計<sup>とけい</sup>を見つけて( )に〇をつけましょう。


① 2時<sup>じ</sup>0分<sup>ふん</sup>の時計<sup>とけい</sup>を見つけよう




( )



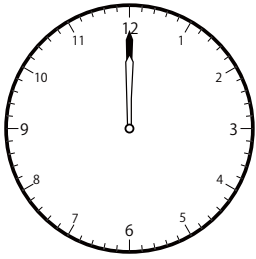
( )



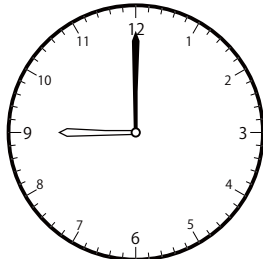
( )




( )



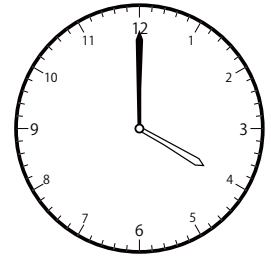
( )



( )

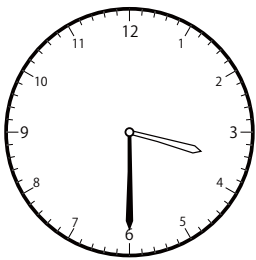


( )




( )

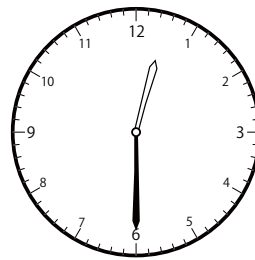
② 2時<sup>じ</sup>30分<sup>ふん</sup>の時計<sup>とけい</sup>を見つけよう



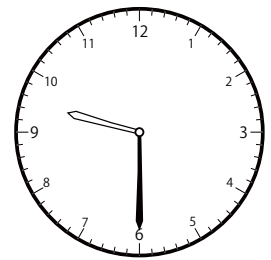
( )



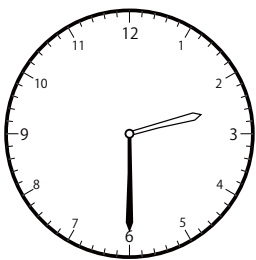
( )



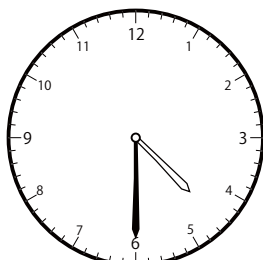
( )



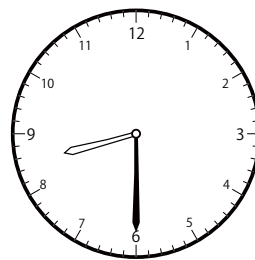
( )



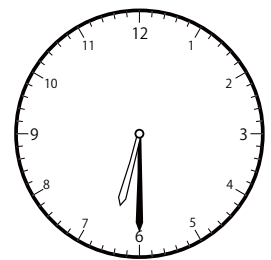
( )



( )



( )

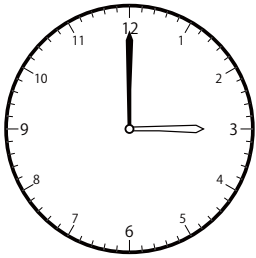


( )

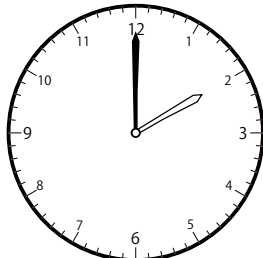
〇〇時<sup>じ</sup>30分<sup>ふん</sup>単位の時計<sup>とけい</sup>を見つけよう【B1】

問題<sup>もんだい</sup>と同じ時間<sup>おなじかん</sup>の時計<sup>とけい</sup>を見つけて( )に〇をつけましょう。


① 3時<sup>じ</sup>0分<sup>ふん</sup>の時計<sup>とけい</sup>を見つけよう




( )




( )



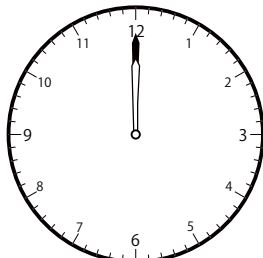
( )




( )



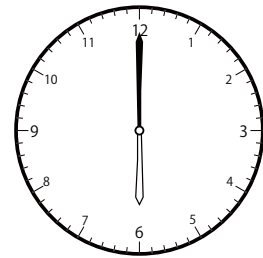
( )



( )




( )

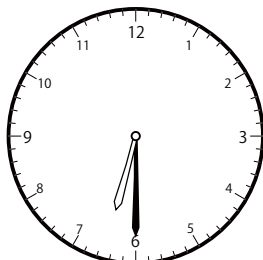


( )


② 3時<sup>じ</sup>30分<sup>ふん</sup>の時計<sup>とけい</sup>を見つけよう



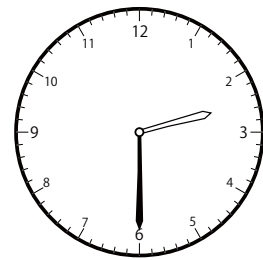
( )



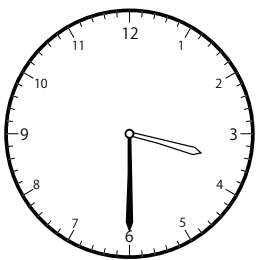
( )



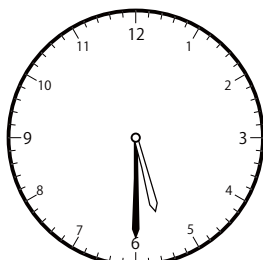
( )



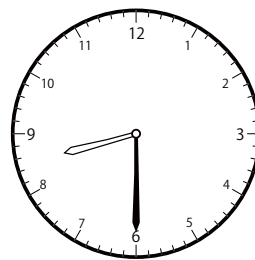
( )



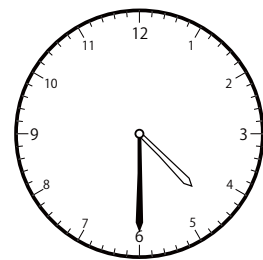
( )



( )



( )




( )


〇〇時<sup>じ</sup>30分<sup>ふん</sup>単位の<sup>たんい</sup>時計<sup>とけい</sup>を見つけよう【B1】

問題<sup>もんだい</sup>と同じ時間<sup>おなじかん</sup>の時計<sup>とけい</sup>を見つけて( )に〇をつけましょう。


① 4時<sup>じ</sup>0分<sup>ふん</sup>の時計<sup>とけい</sup>を見つけよう




( )




( )



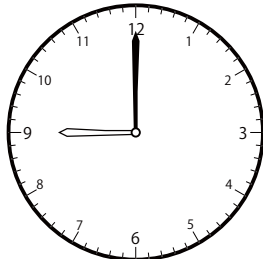
( )



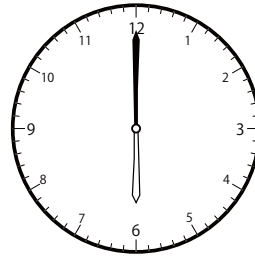
( )



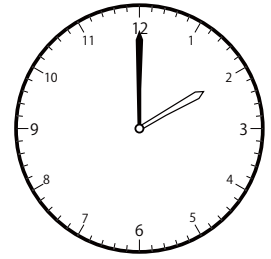
( )



( )




( )




( )

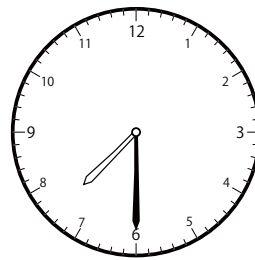
② 4時<sup>じ</sup>30分<sup>ふん</sup>の時計<sup>とけい</sup>を見つけよう



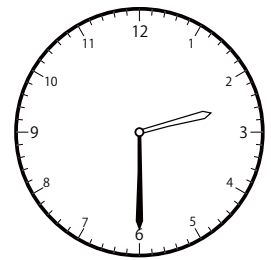
( )



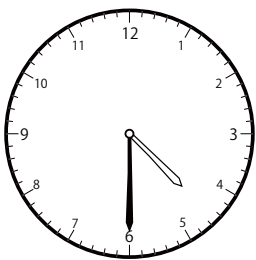
( )




( )



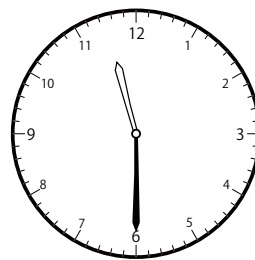
( )



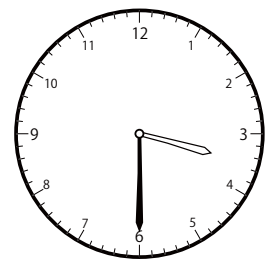
( )



( )



( )




( )


じ ふん たん い とけい み  
〇〇時 30分 単位の時計を見つけよう【B1】

もんだい おなじ じかん とけい み  
問題と同じ時間の時計を見つけて( )に〇をつけましょう。


① 5時 0分の時計を見つけよう




( )



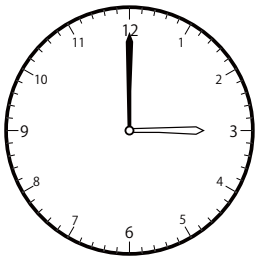
( )




( )



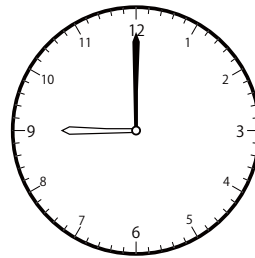
( )




( )



( )




( )




( )

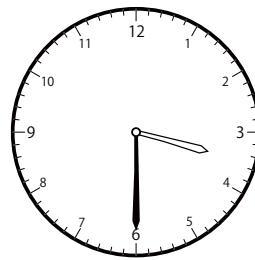
② 5時 30分の時計を見つけよう



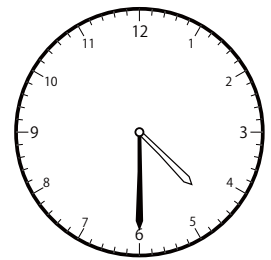
( )



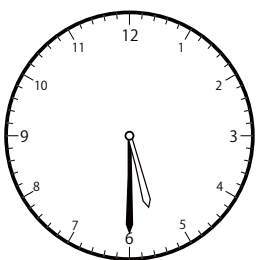
( )



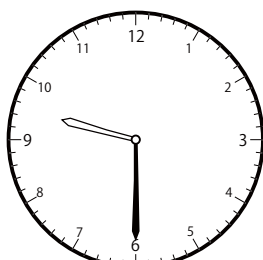
( )



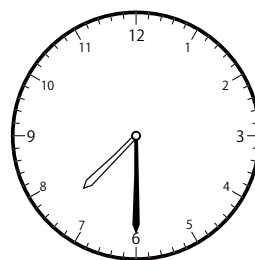
( )



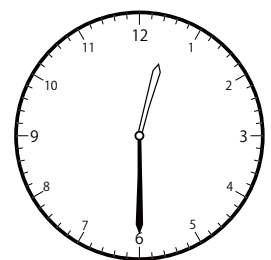
( )



( )



( )




( )



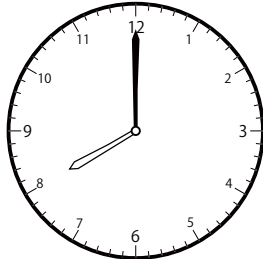
〇〇時<sup>じ</sup>30分<sup>ふん</sup>単位の<sup>たんい</sup>時計<sup>とけい</sup>を見つけよう【B1】

問題<sup>もんだい</sup>と同じ時間<sup>おなじかん</sup>の時計<sup>とけい</sup>を見つけて( )に〇をつけましょう。

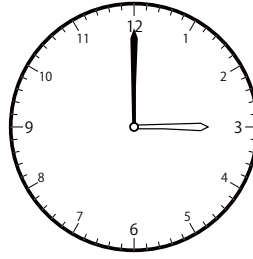
① 6時<sup>じ</sup>0分<sup>ふん</sup>の時計<sup>とけい</sup>を見つけよう




( )




( )



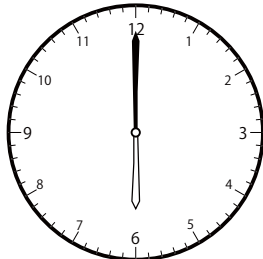
( )




( )




( )



( )

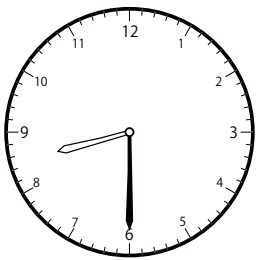


( )

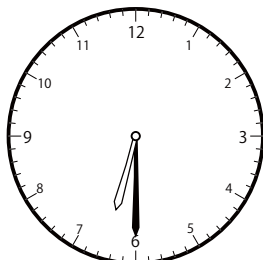


( )

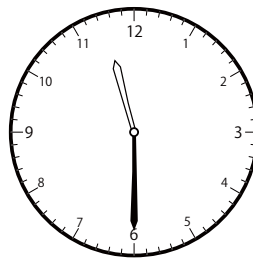
② 6時<sup>じ</sup>30分<sup>ふん</sup>の時計<sup>とけい</sup>を見つけよう




( )



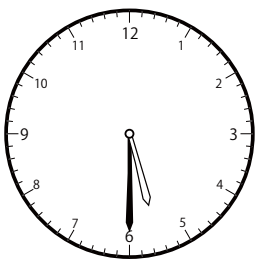
( )




( )



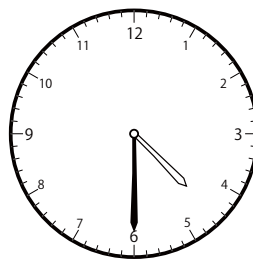
( )



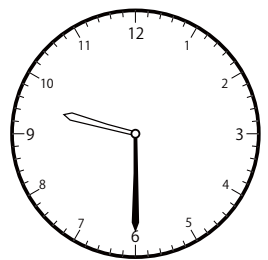
( )



( )



( )




( )

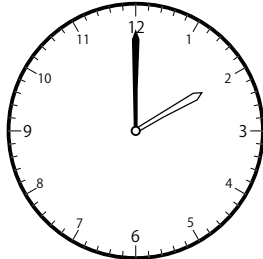
〇〇時<sup>じ</sup>30分<sup>ふん</sup>単位の時計<sup>とけい</sup>を見つけよう【B1】

問題<sup>もんだい</sup>と同じ時間<sup>おなじかん</sup>の時計<sup>とけい</sup>を見つけて( )に〇をつけましょう。

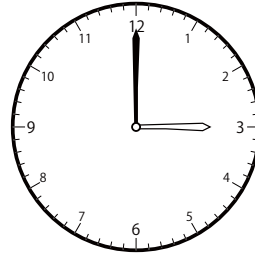
① 7時<sup>じ</sup>0分<sup>ふん</sup>の時計<sup>とけい</sup>を見つけよう



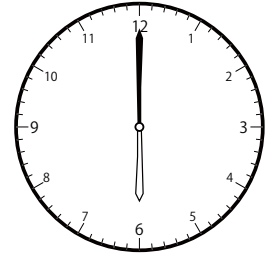
( )




( )



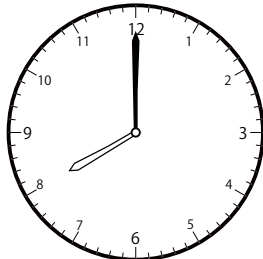
( )




( )



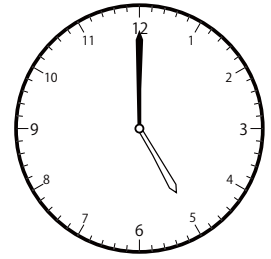
( )



( )

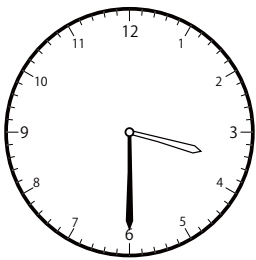


( )




( )

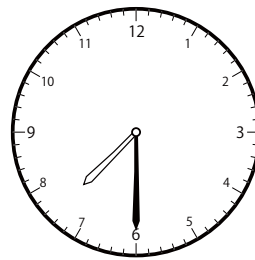
② 7時<sup>じ</sup>30分<sup>ふん</sup>の時計<sup>とけい</sup>を見つけよう



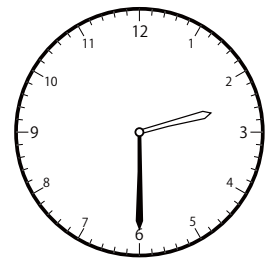
( )



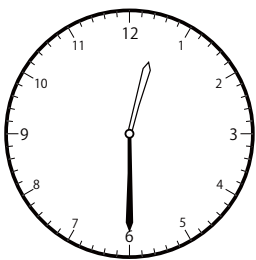
( )




( )



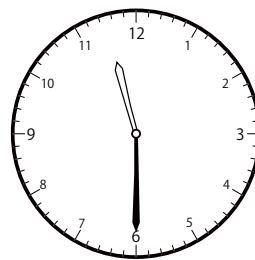
( )



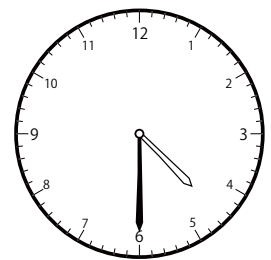
( )



( )



( )




( )

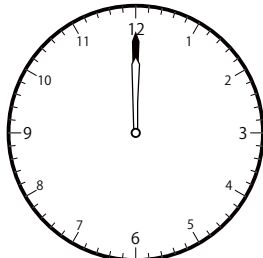
〇〇時<sup>じ</sup>30分<sup>ふん</sup>単位の<sup>たんい</sup>時計<sup>とけい</sup>を見つけよう【B1】

問題<sup>もんだい</sup>と同じ時間<sup>おなじかん</sup>の時計<sup>とけい</sup>を見つけて( )に〇をつけましょう。


① 8時<sup>じ</sup>0分<sup>ふん</sup>の時計<sup>とけい</sup>を見つけよう



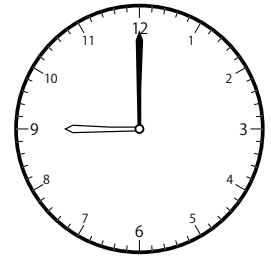
( )



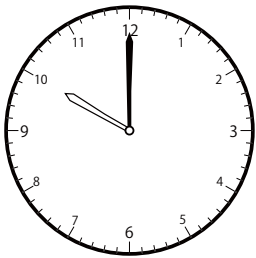
( )



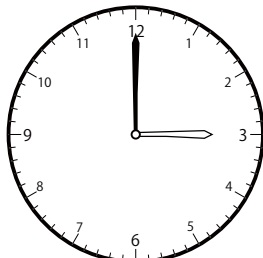
( )



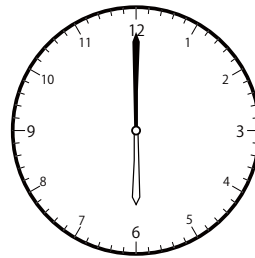
( )




( )



( )




( )

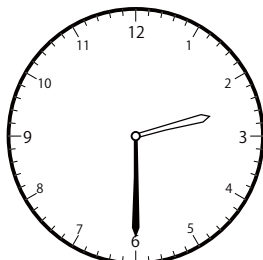


( )

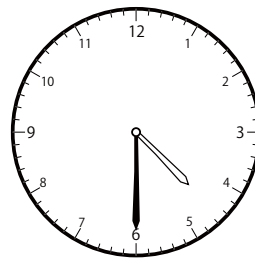
② 8時<sup>じ</sup>30分<sup>ふん</sup>の時計<sup>とけい</sup>を見つけよう



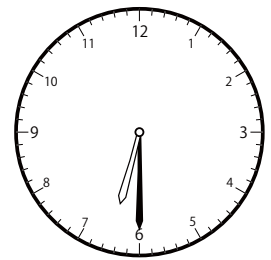
( )



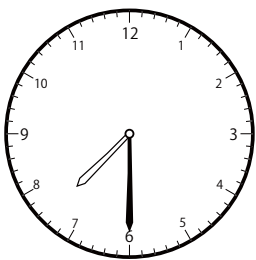
( )




( )




( )




( )



( )



( )

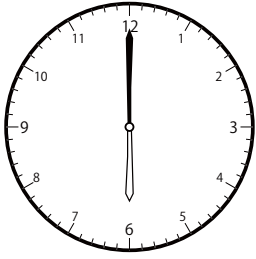


( )

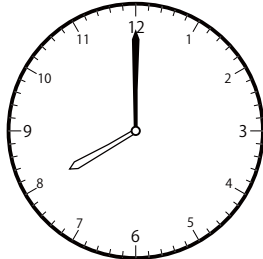
じ ふん たん い とけい み  
〇〇時 30分 単位の時計を見つけよう【B1】

もんだい おな じかん とけい み  
問題と同じ時間の時計を見つけて( )に〇をつけましょう。

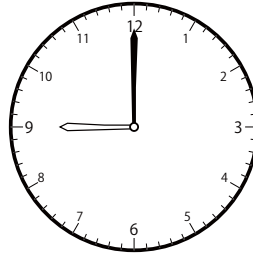
① 9時 0分の時計を見つけよう




( )




( )



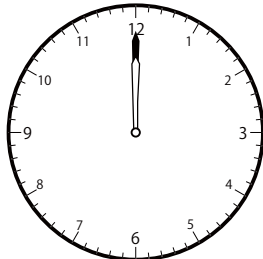
( )




( )




( )



( )

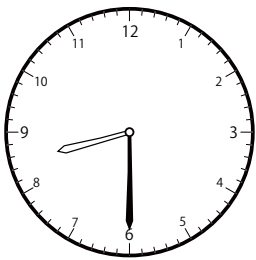


( )

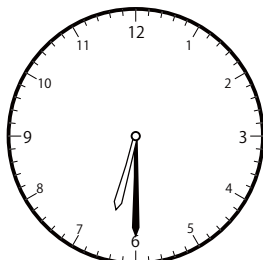


( )

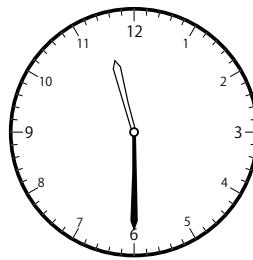
② 9時 30分の時計を見つけよう



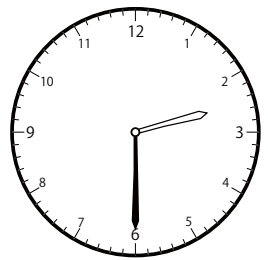
( )



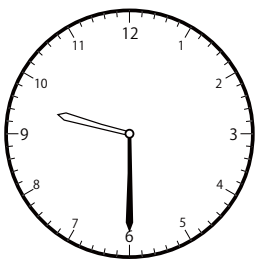
( )




( )



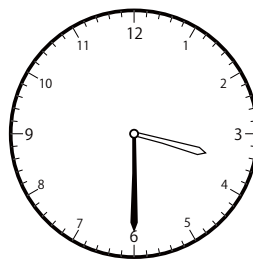
( )




( )



( )



( )




( )

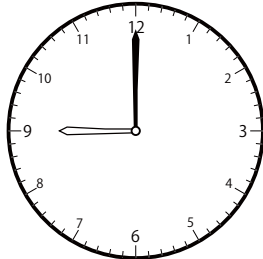
〇〇時<sup>じ</sup>30分<sup>ふん</sup>単位の時計<sup>とけい</sup>を見つけよう【B1】

問題<sup>もんだい</sup>と同じ時間<sup>おなじかん</sup>の時計<sup>とけい</sup>を見つけて( )に〇をつけましょう。

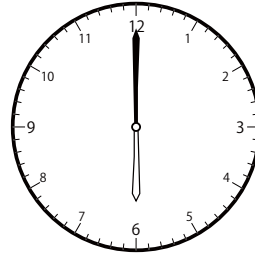
① 10時<sup>じ</sup> 0分<sup>ふん</sup>の時計<sup>とけい</sup>を見つけよう




( )




( )



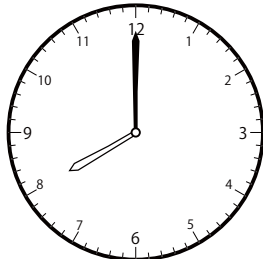
( )



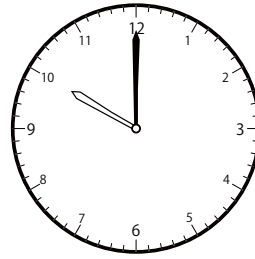
( )



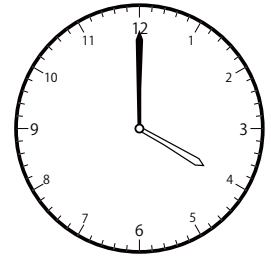
( )



( )




( )

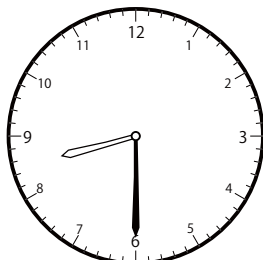


( )

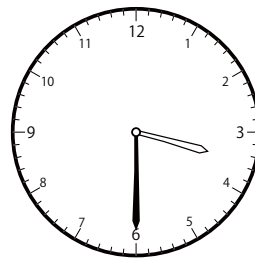
② 10時<sup>じ</sup> 30分<sup>ふん</sup>の時計<sup>とけい</sup>を見つけよう



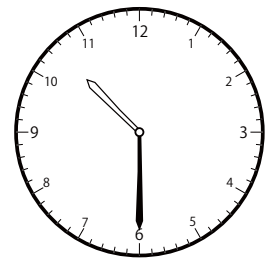
( )



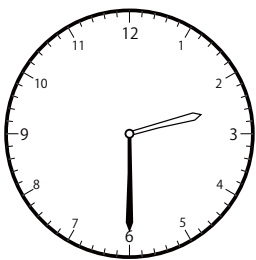
( )



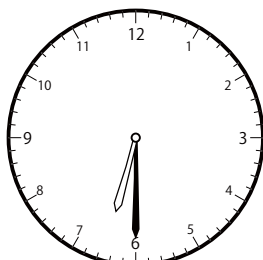
( )



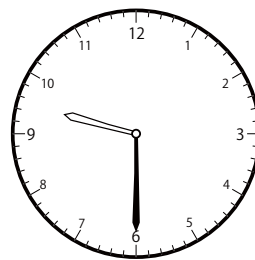
( )



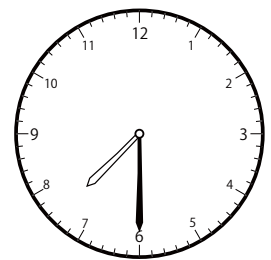
( )



( )



( )

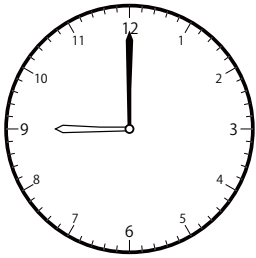


( )

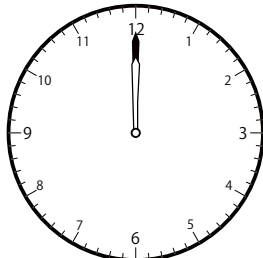
じ ふん たん い とけい み  
〇〇時 30分 単位の時計を見つけよう【B1】

もんだい おな じかん とけい み  
問題と同じ時間の時計を見つけて( )に〇をつけましょう。


① 11時 0分の時計を見つけよう



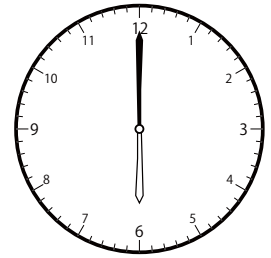
( )




( )




( )




( )




( )



( )

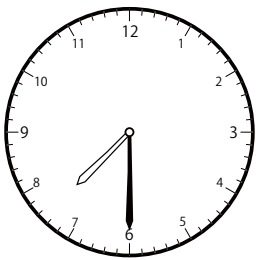


( )

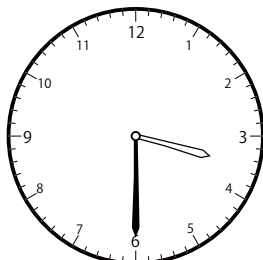


( )

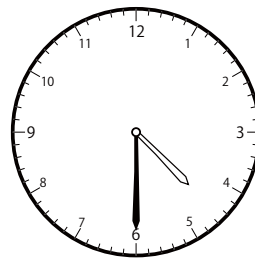
② 11時 30分の時計を見つけよう




( )



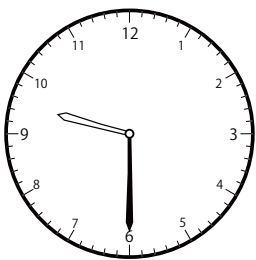
( )




( )



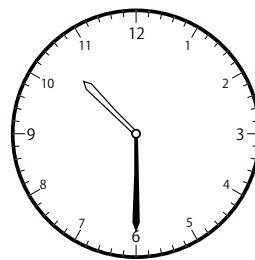
( )



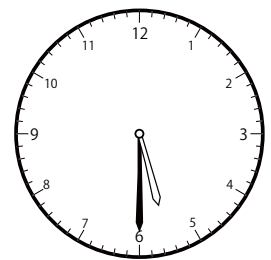
( )



( )



( )




( )

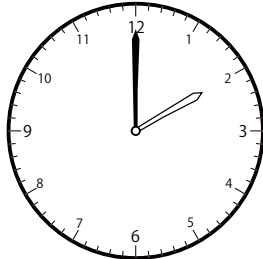
じ ふん たん い とけい み  
〇〇時 30分 単位の時計を見つけよう【B1】

もんだい おな じかん とけい み  
問題と同じ時間の時計を見つけて( )に〇をつけましょう。


① 12時 0分の時計を見つけよう




( )




( )



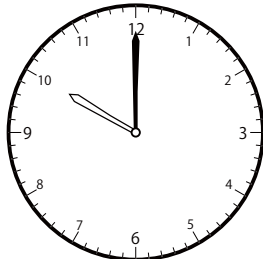
( )




( )



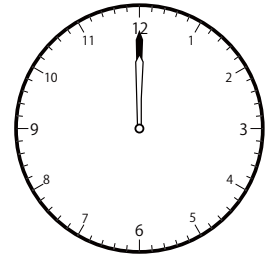
( )



( )




( )




( )

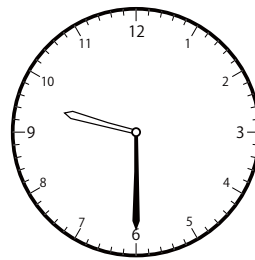
② 12時 30分の時計を見つけよう



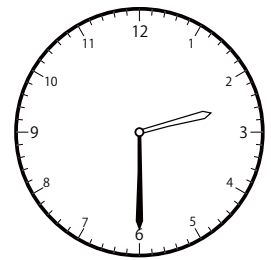
( )



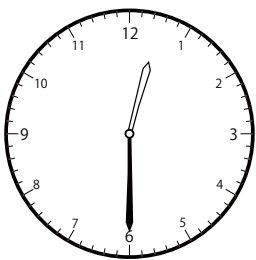
( )



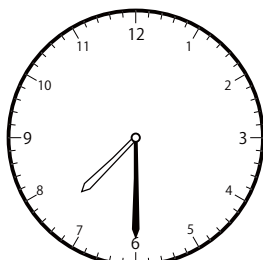
( )



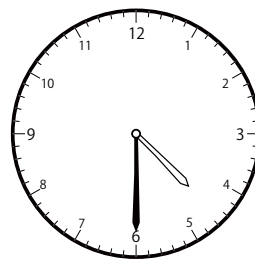
( )



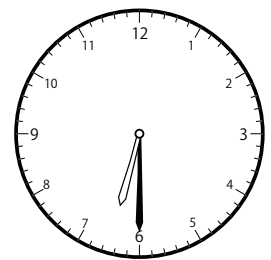
( )



( )



( )




( )

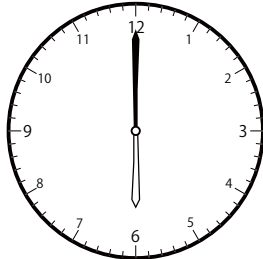
〇〇時<sup>じ</sup>30分<sup>ふん</sup>単位の<sup>たんい</sup>時計<sup>とけい</sup>を見つけよう【B1】

問題<sup>もんだい</sup>と同じ時間<sup>おなじかん</sup>の時計<sup>とけい</sup>を見つけ<sup>み</sup>て( )に〇をつけましょう。

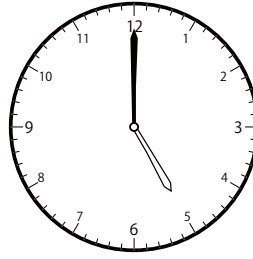
① 8時<sup>じ</sup>0分<sup>ふん</sup>の時計<sup>とけい</sup>を見つけよう




( )



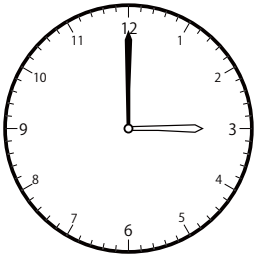
( )




( )



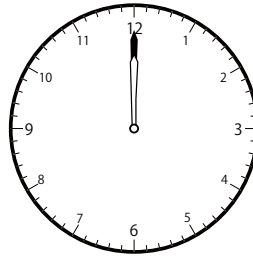
( )




( )



( )




( )




( )


② 2時<sup>じ</sup>0分<sup>ふん</sup>の時計<sup>とけい</sup>を見つけよう




( )



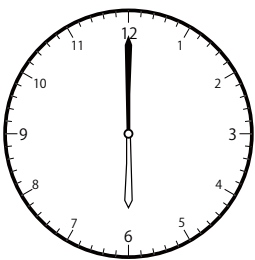
( )




( )



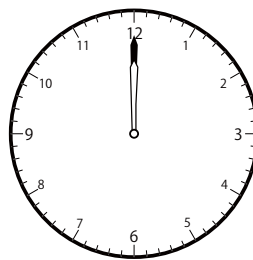
( )




( )



( )



( )



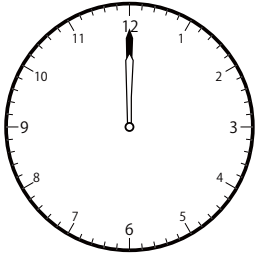
( )



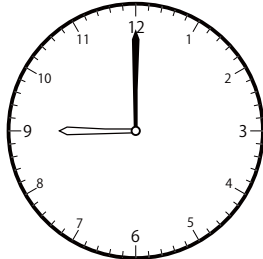
〇〇時<sup>じ</sup>30分<sup>ふん</sup>単位の<sup>たんい</sup>時計<sup>とけい</sup>を見つけよう【B1】

問題<sup>もんだい</sup>と同じ時間<sup>おなじかん</sup>の時計<sup>とけい</sup>を見つけて( )に〇をつけましょう。


① 12時<sup>じ</sup> 0分<sup>ふん</sup>の時計<sup>とけい</sup>を見つけよう




( )




( )



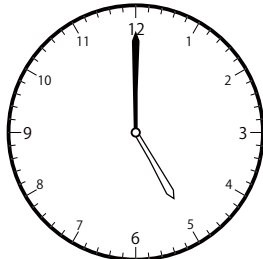
( )



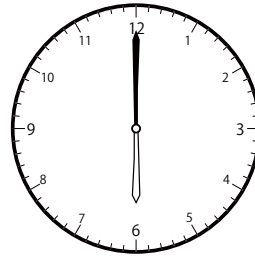
( )




( )



( )

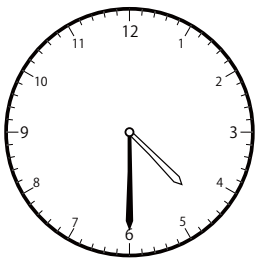


( )

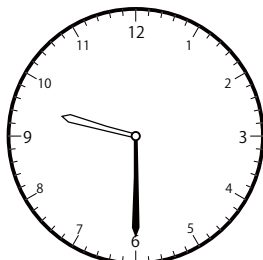


( )

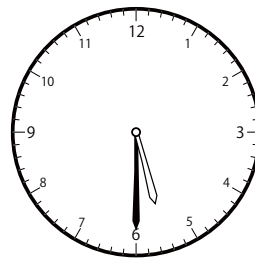
② 11時<sup>じ</sup> 30分<sup>ふん</sup>の時計<sup>とけい</sup>を見つけよう



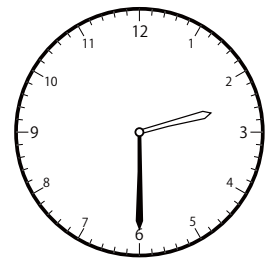
( )



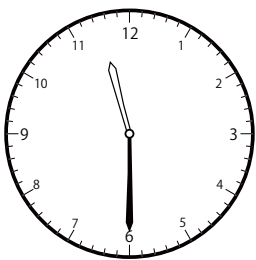
( )



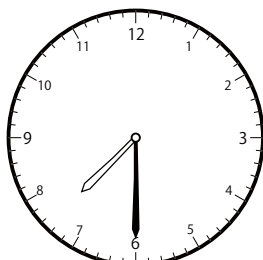
( )



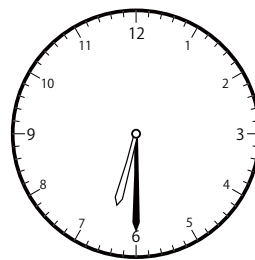
( )



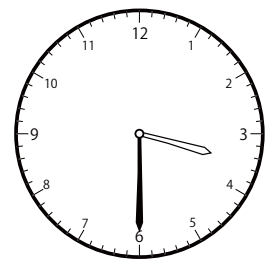
( )



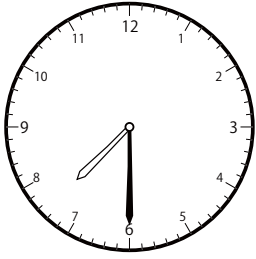
( )



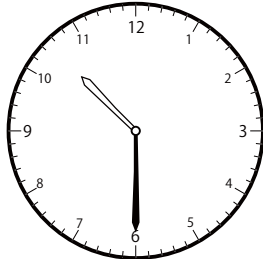
( )



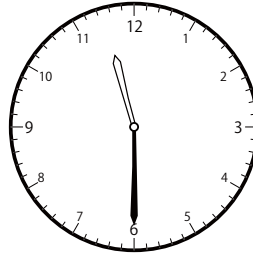
( )

〇〇時<sup>じ</sup>30分<sup>ふん</sup>単位の時計を見つけよう【B1】問題<sup>もんだい</sup>と同じ時間<sup>おなじかん</sup>の時計<sup>とけい</sup>を見つけ<sup>み</sup>て( )に〇をつけましょう。① 7時<sup>じ</sup>30分<sup>ふん</sup>の時計<sup>とけい</sup>を見つけよう


( )



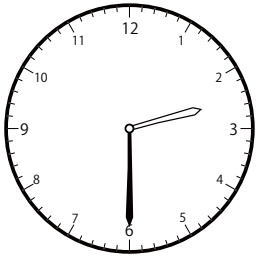
( )



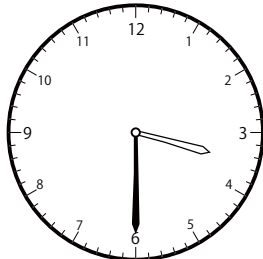
( )



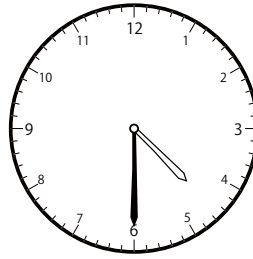
( )



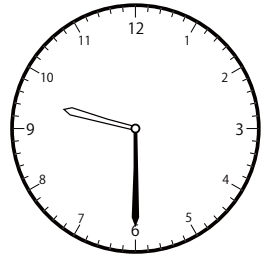
( )



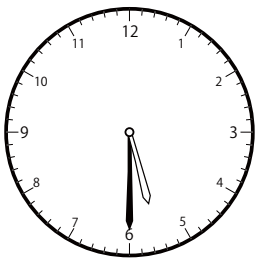
( )



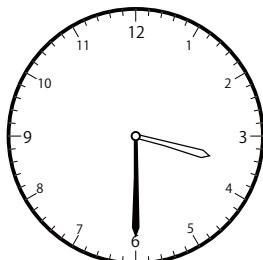
( )



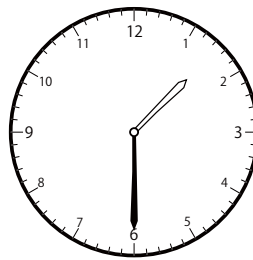
( )

② 3時<sup>じ</sup>30分<sup>ふん</sup>の時計<sup>とけい</sup>を見つけよう


( )



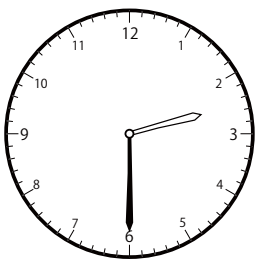
( )



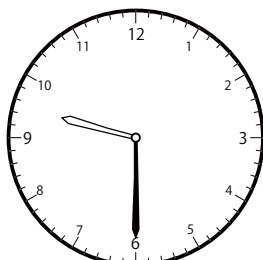
( )



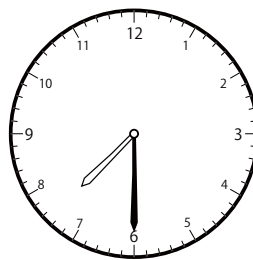
( )




( )



( )



( )

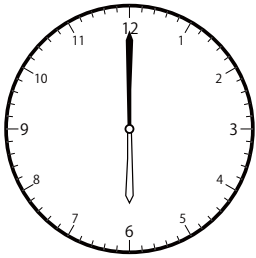


( )

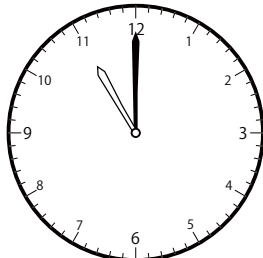
〇〇時<sup>じ</sup>30分<sup>ふん</sup>単位の<sup>たんい</sup>時計<sup>とけい</sup>を見つけよう【B1】

問題<sup>もんだい</sup>と同じ時間<sup>おなじかん</sup>の時計<sup>とけい</sup>を見つけて( )に〇をつけましょう。


① 3時<sup>じ</sup>0分<sup>ふん</sup>の時計<sup>とけい</sup>を見つけよう




( )



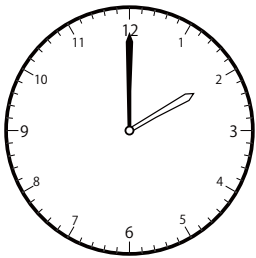
( )




( )



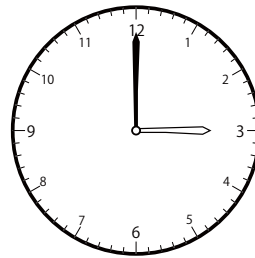
( )




( )



( )

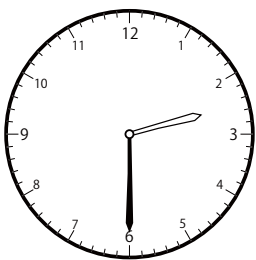


( )




( )

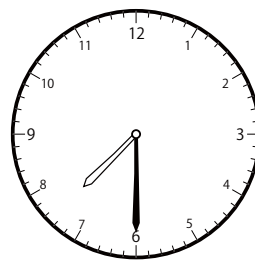
② 4時<sup>じ</sup>30分<sup>ふん</sup>の時計<sup>とけい</sup>を見つけよう



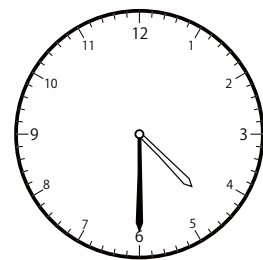
( )



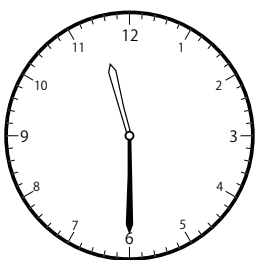
( )



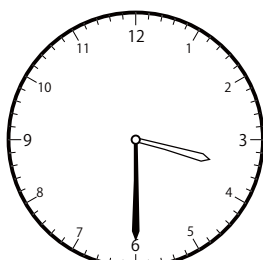
( )




( )



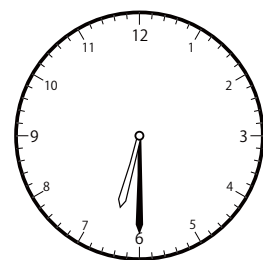
( )



( )



( )

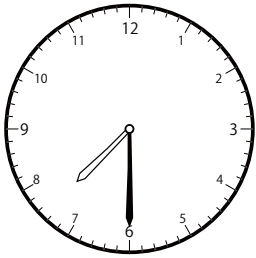


( )

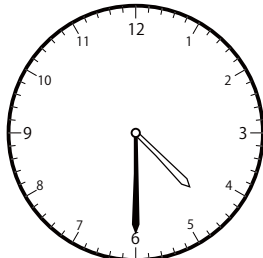
〇〇時<sup>じ</sup>30分<sup>ふん</sup>単位の時計<sup>とけい</sup>を見つけよう【B1】

問題<sup>もんだい</sup>と同じ時間<sup>おなじかん</sup>の時計<sup>とけい</sup>を見つけて( )に〇をつけましょう。

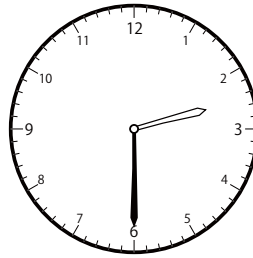
① 8時<sup>じ</sup>30分<sup>ふん</sup>の時計<sup>とけい</sup>を見つけよう



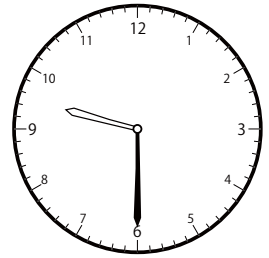
( )



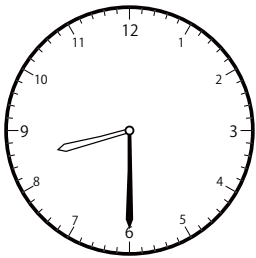
( )



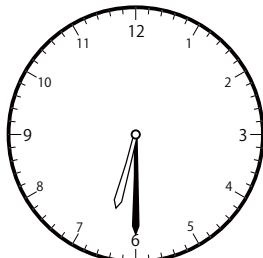
( )



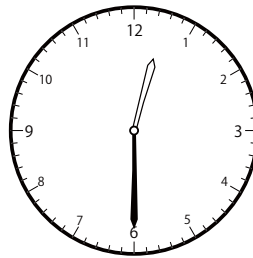
( )




( )



( )

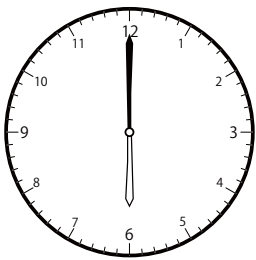


( )




( )


② 10時<sup>じ</sup>0分<sup>ふん</sup>の時計<sup>とけい</sup>を見つけよう




( )



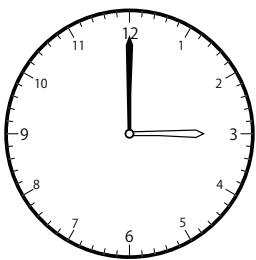
( )




( )



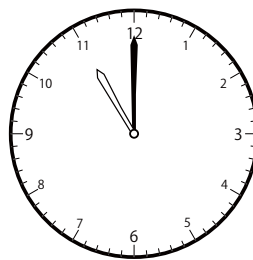
( )




( )



( )



( )




( )

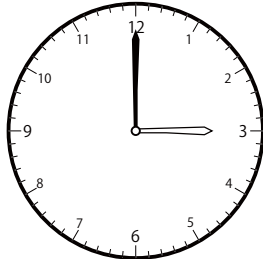
〇〇時<sup>じ</sup>30分<sup>ふん</sup>単位の<sup>たんい</sup>時計<sup>とけい</sup>を見つけよう【B1】

問題<sup>もんだい</sup>と同じ時間<sup>おなじかん</sup>の時計<sup>とけい</sup>を見つけ<sup>み</sup>て( )に〇をつけましょう。

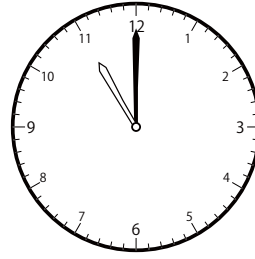
① 11時<sup>じ</sup>0分<sup>ふん</sup>の時計<sup>とけい</sup>を見つけよう




( )



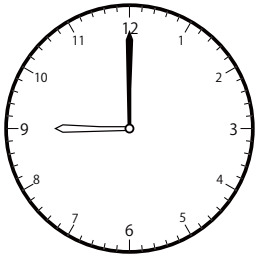
( )




( )



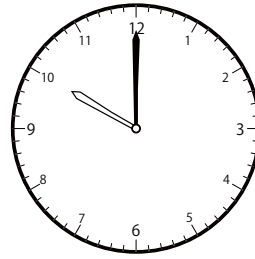
( )



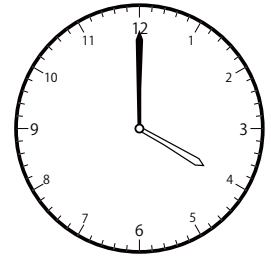
( )



( )

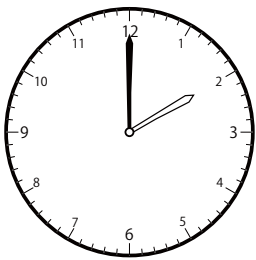


( )

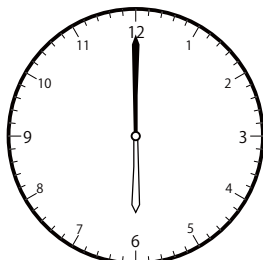


( )


② 5時<sup>じ</sup>0分<sup>ふん</sup>の時計<sup>とけい</sup>を見つけよう



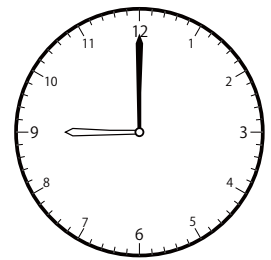
( )



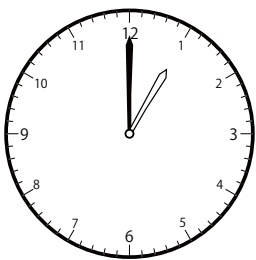
( )




( )




( )




( )



( )



( )

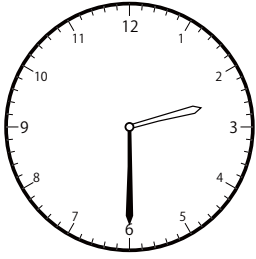


( )

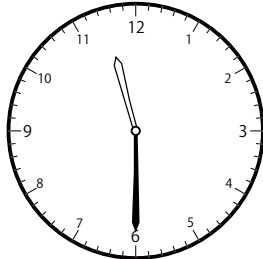
〇〇時<sup>じ</sup>30分<sup>ふん</sup>単位の<sup>たんい</sup>時計<sup>とけい</sup>を見つけよう【B1】

問題<sup>もんだい</sup>と同じ時間<sup>おなじかん</sup>の時計<sup>とけい</sup>を見つけて( )に〇をつけましょう。

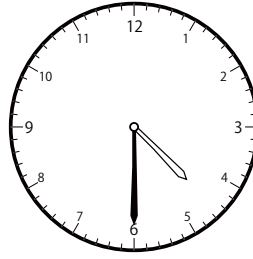
① 2時<sup>じ</sup>30分<sup>ふん</sup>の時計<sup>とけい</sup>を見つけよう




( )



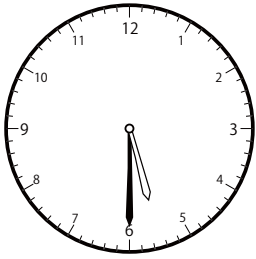
( )



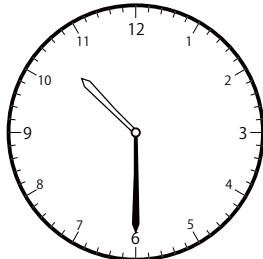
( )




( )



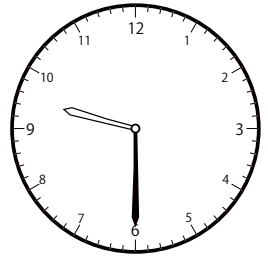
( )



( )

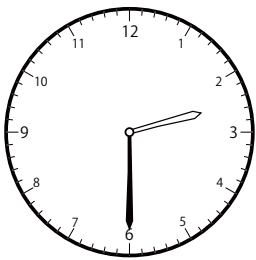


( )




( )

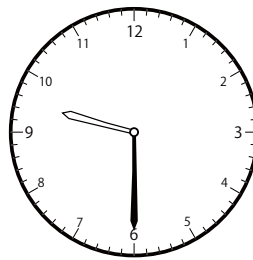
② 5時<sup>じ</sup>30分<sup>ふん</sup>の時計<sup>とけい</sup>を見つけよう



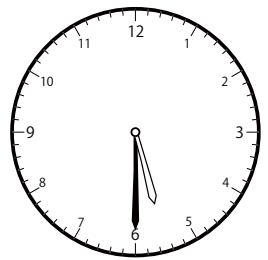
( )



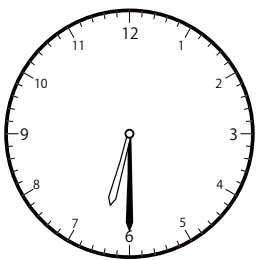
( )




( )



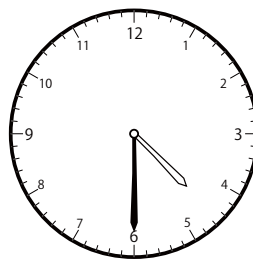
( )




( )



( )



( )

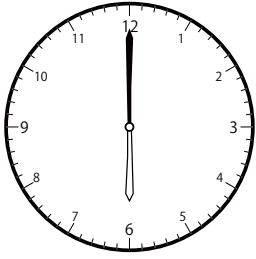


( )

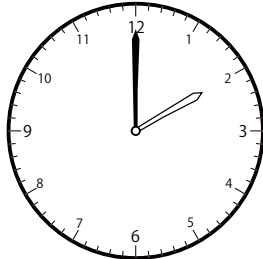
〇〇時<sup>じ</sup>30分<sup>ふん</sup>単位の<sup>たんい</sup>時計<sup>とけい</sup>を見つけよう【B1】

問題<sup>もんだい</sup>と同じ時間<sup>おなじかん</sup>の時計<sup>とけい</sup>を見つけ<sup>み</sup>て( )に〇をつけましょう。

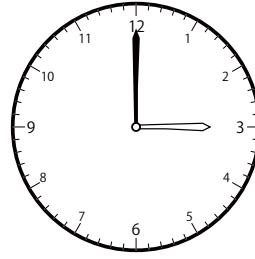
① 7時<sup>じ</sup>0分<sup>ふん</sup>の時計<sup>とけい</sup>を見つけよう




( )




( )



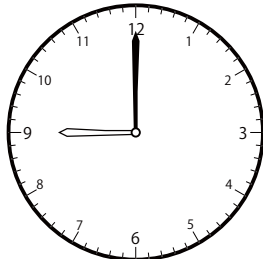
( )



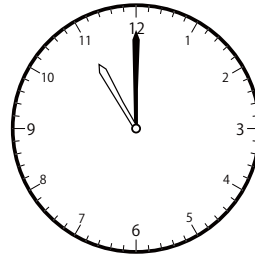
( )




( )



( )

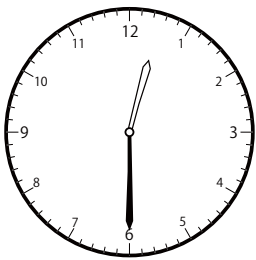


( )

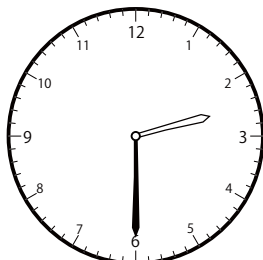


( )

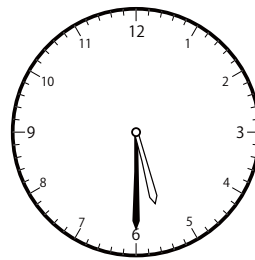
② 9時<sup>じ</sup>30分<sup>ふん</sup>の時計<sup>とけい</sup>を見つけよう



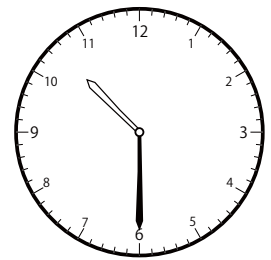
( )



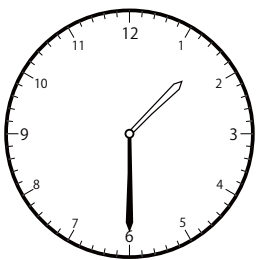
( )



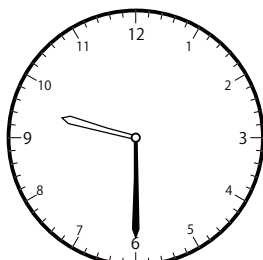
( )



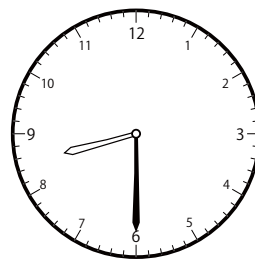
( )



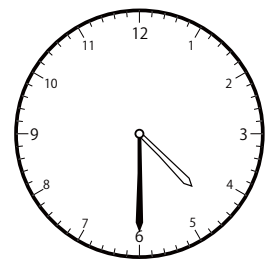
( )



( )



( )

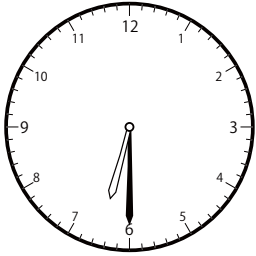


( )

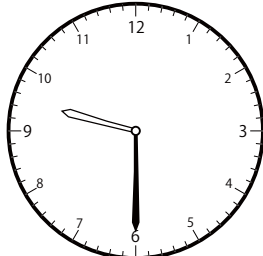
〇〇時<sup>じ</sup>30分<sup>ふん</sup>単位の<sup>たんに</sup>時計<sup>とけい</sup>を見つけよう【B1】

問題<sup>もんだい</sup>と同じ時間<sup>おなじかん</sup>の時計<sup>とけい</sup>を見つけて( )に〇をつけましょう。


① 6時<sup>じ</sup>30分<sup>ふん</sup>の時計<sup>とけい</sup>を見つけよう



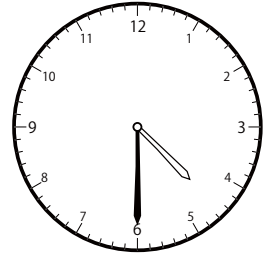
( )



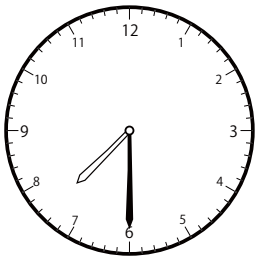
( )




( )



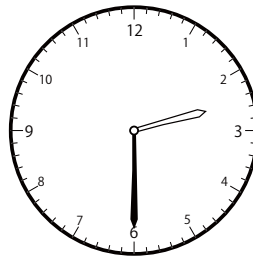
( )




( )



( )

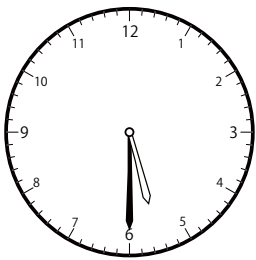


( )

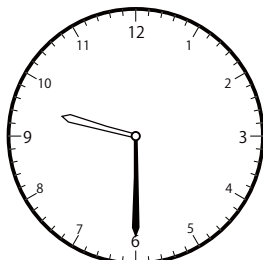


( )

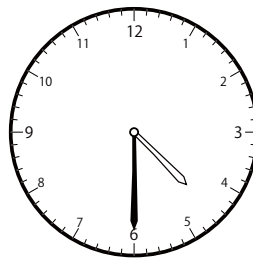
② 1時<sup>じ</sup>30分<sup>ふん</sup>の時計<sup>とけい</sup>を見つけよう




( )



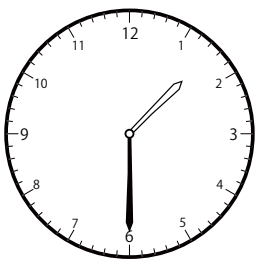
( )



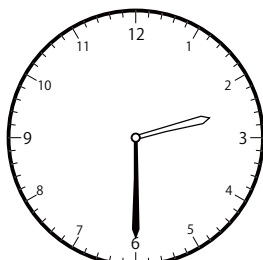
( )



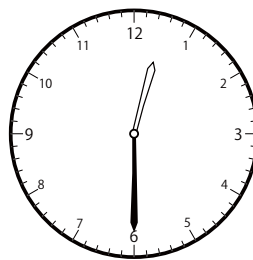
( )



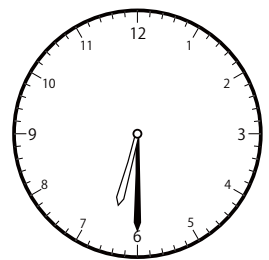
( )



( )



( )




( )



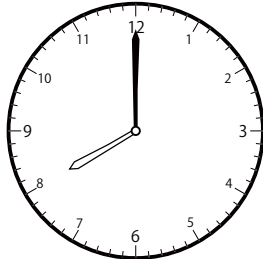
〇〇時<sup>じ</sup>30分<sup>ふん</sup>単位の<sup>たんに</sup>時計<sup>とけい</sup>を見つけよう【B1】

問題<sup>もんだい</sup>と同じ時間<sup>おなじじかん</sup>の時計<sup>とけい</sup>を見つけて( )に〇をつけましょう。

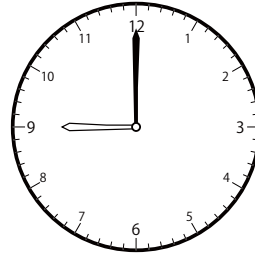
① 9時<sup>じ</sup>0分<sup>ふん</sup>の時計<sup>とけい</sup>を見つけよう




( )



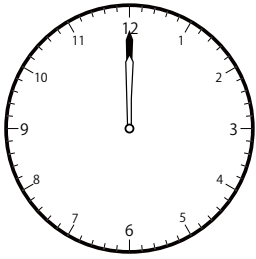
( )



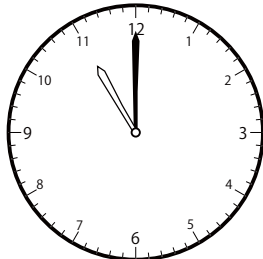
( )



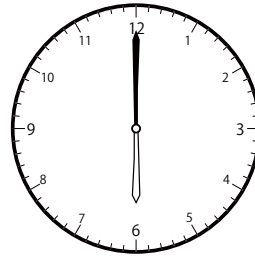
( )




( )



( )

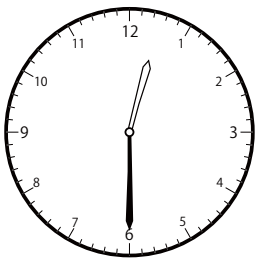


( )

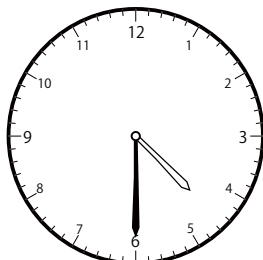


( )

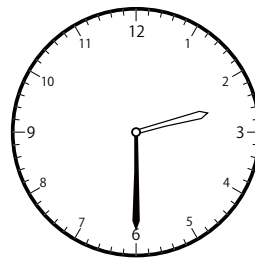
② 12時<sup>じ</sup>30分<sup>ふん</sup>の時計<sup>とけい</sup>を見つけよう



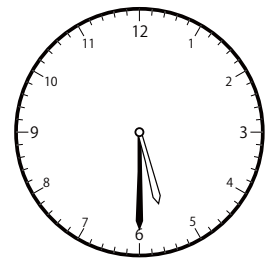
( )



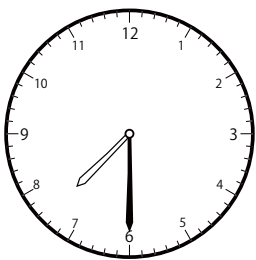
( )




( )



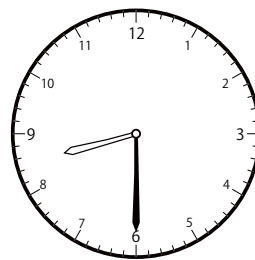
( )



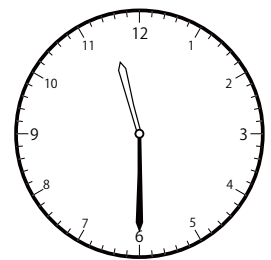
( )



( )



( )




( )

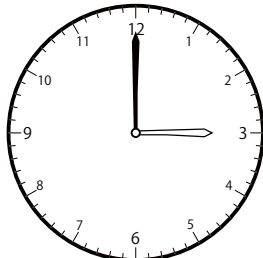
〇〇時<sup>じ</sup>30分<sup>ふん</sup>単位の<sup>たんい</sup>時計<sup>とけい</sup>を見つけよう【B1】

問題<sup>もんだい</sup>と同じ時間<sup>おなじかん</sup>の時計<sup>とけい</sup>を見つけ<sup>み</sup>て( )に〇をつけましょう。


① 6時<sup>じ</sup>0分<sup>ふん</sup>の時計<sup>とけい</sup>を見つけよう




( )



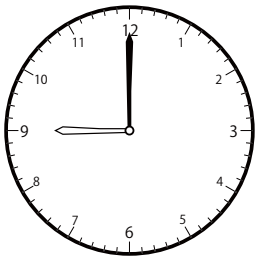
( )



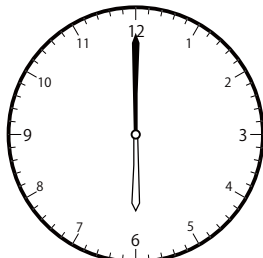
( )



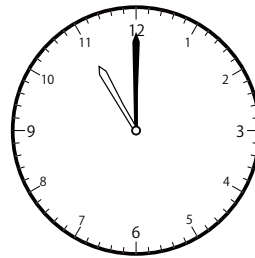
( )



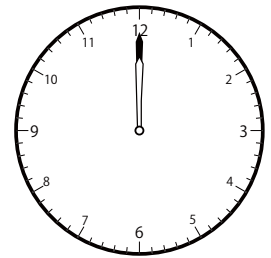
( )



( )




( )




( )

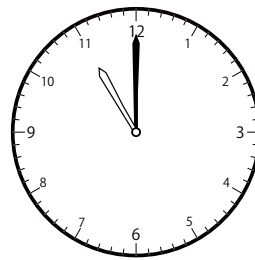
② 4時<sup>じ</sup>0分<sup>ふん</sup>の時計<sup>とけい</sup>を見つけよう



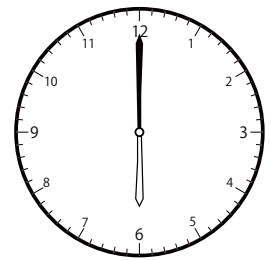
( )



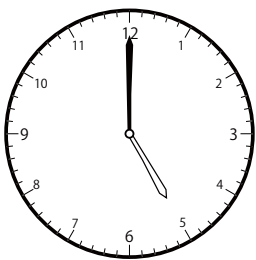
( )




( )



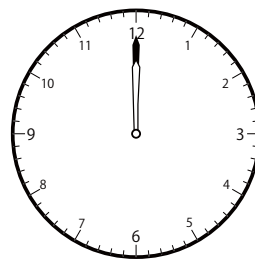
( )




( )



( )



( )




( )

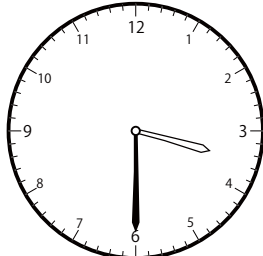
〇〇時<sup>じ</sup>30分<sup>ふん</sup>単位の<sup>たんい</sup>時計<sup>とけい</sup>を見つけよう【B1】

問題<sup>もんだい</sup>と同じ時間<sup>おなじかん</sup>の時計<sup>とけい</sup>を見つけて( )に〇をつけましょう。

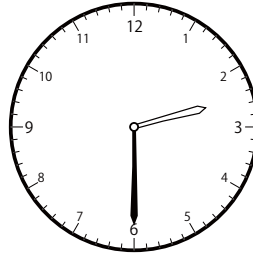
① 10時<sup>じ</sup>30分<sup>ふん</sup>の時計<sup>とけい</sup>を見つけよう



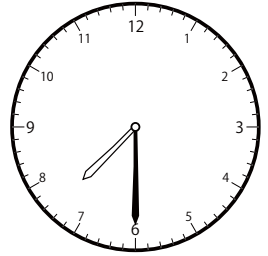
( )




( )




( )



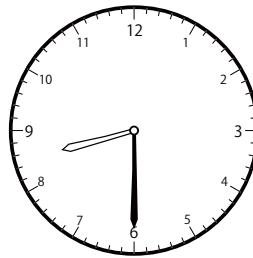
( )



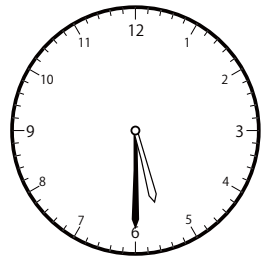
( )



( )

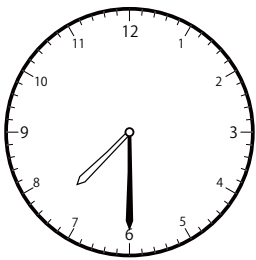


( )




( )

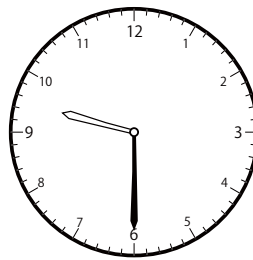
② 7時<sup>じ</sup>30分<sup>ふん</sup>の時計<sup>とけい</sup>を見つけよう




( )



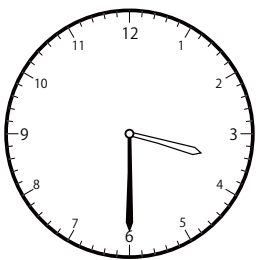
( )



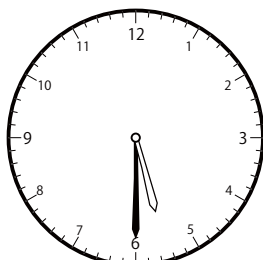
( )



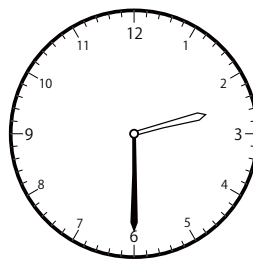
( )



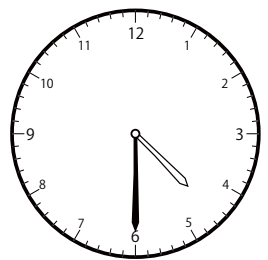
( )



( )



( )




( )

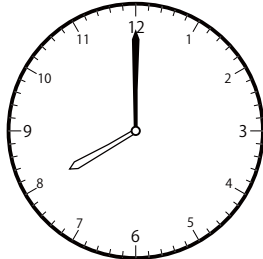
じ ふん たん い とけい み  
〇〇時 30分 単位の時計を見つけよう【B1】

もんだい おな じかん とけい み  
問題と同じ時間の時計を見つけて( )に〇をつけましょう。


① 10時 0分の時計を見つけよう




( )




( )



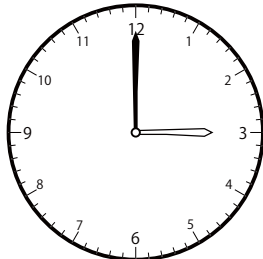
( )



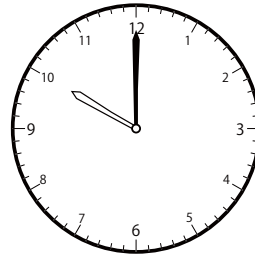
( )



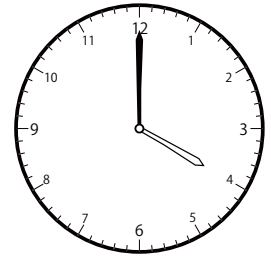
( )



( )

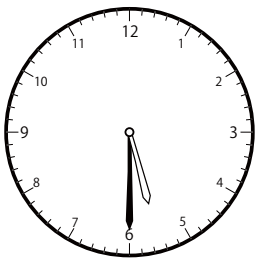


( )




( )

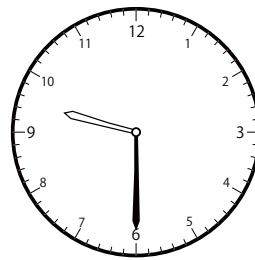
② 10時 30分の時計を見つけよう



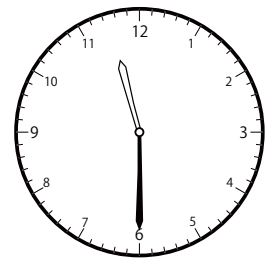
( )



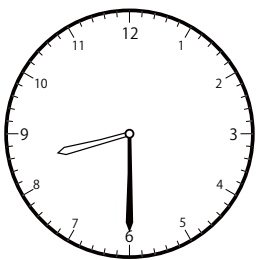
( )



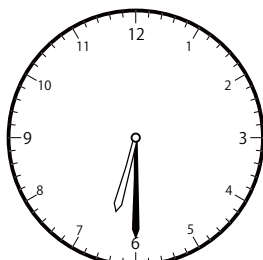
( )



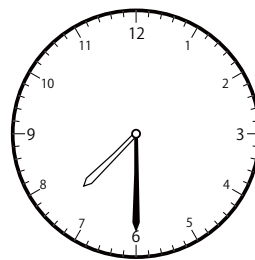
( )



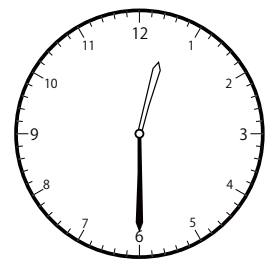
( )



( )



( )

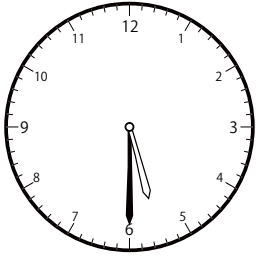


( )

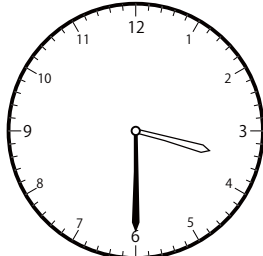
〇〇時<sup>じ</sup>30分<sup>ふん</sup>単位の<sup>たんい</sup>時計<sup>とけい</sup>を見つけよう【B1】

問題<sup>もんだい</sup>と同じ時間<sup>おなじかん</sup>の時計<sup>とけい</sup>を見つけて( )に〇をつけましょう。


① 11時<sup>じ</sup>30分<sup>ふん</sup>の時計<sup>とけい</sup>を見つけよう



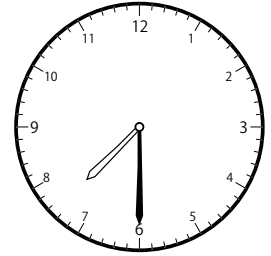
( )



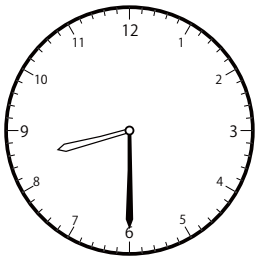
( )



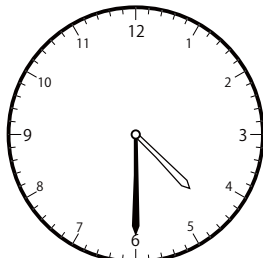
( )




( )



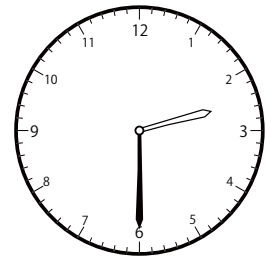
( )



( )

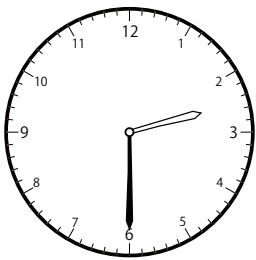


( )




( )

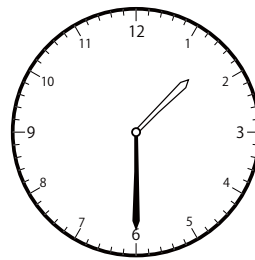
② 12時<sup>じ</sup>30分<sup>ふん</sup>の時計<sup>とけい</sup>を見つけよう




( )



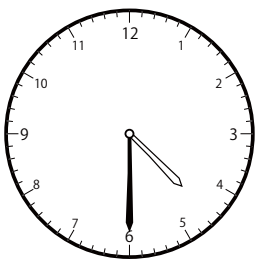
( )



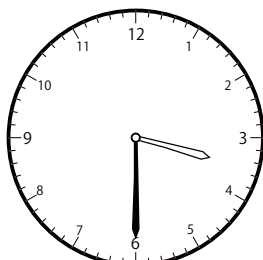
( )



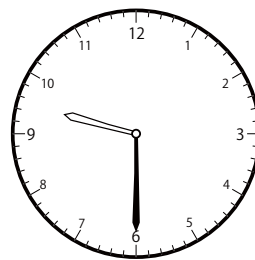
( )



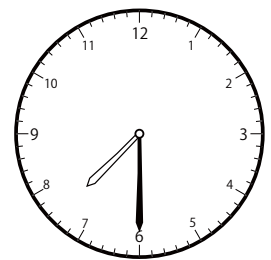
( )



( )



( )




( )

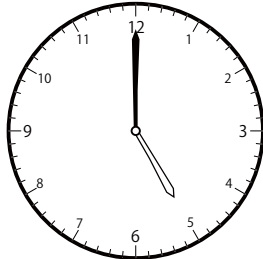
〇〇時<sup>じ</sup>30分<sup>ふん</sup>単位の時計<sup>とけい</sup>を見つけよう【B1】

問題<sup>もんだい</sup>と同じ時間<sup>おなじかん</sup>の時計<sup>とけい</sup>を見つけて( )に〇をつけましょう。

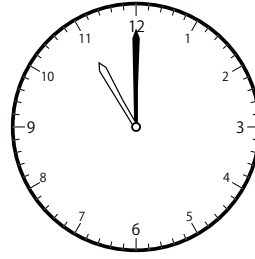
① 3時<sup>じ</sup>0分<sup>ふん</sup>の時計<sup>とけい</sup>を見つけよう




( )



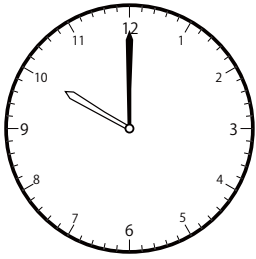
( )



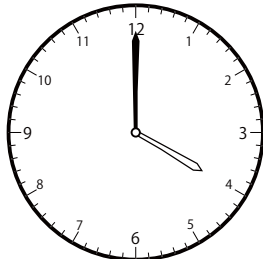
( )




( )




( )



( )




( )




( )

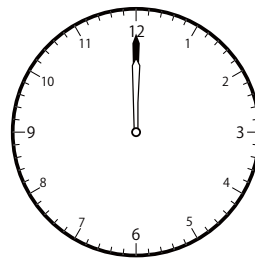
② 9時<sup>じ</sup>0分<sup>ふん</sup>の時計<sup>とけい</sup>を見つけよう




( )



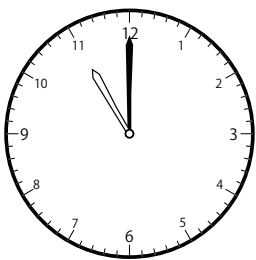
( )




( )



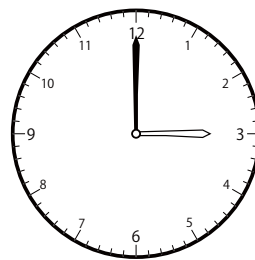
( )



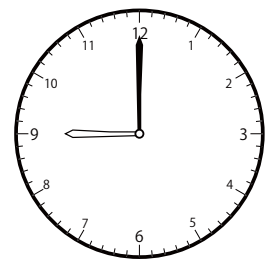
( )



( )



( )




( )

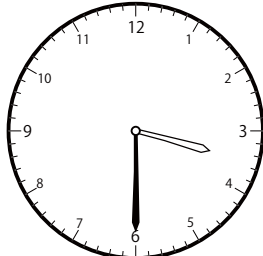
〇〇時<sup>じ</sup>30分<sup>ふん</sup>単位の時計<sup>とけい</sup>を見つけよう【B1】

問題<sup>もんだい</sup>と同じ時間<sup>おなじかん</sup>の時計<sup>とけい</sup>を見つけて( )に〇をつけましょう。

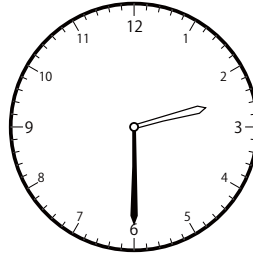
① 4時<sup>じ</sup>30分<sup>ふん</sup>の時計<sup>とけい</sup>を見つけよう




( )



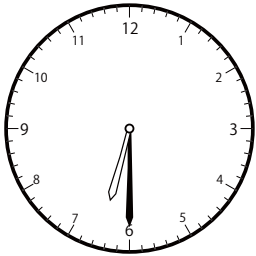
( )



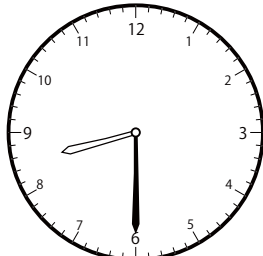
( )



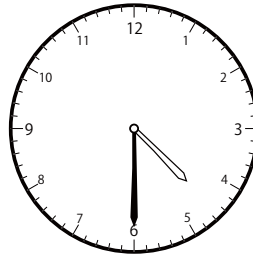
( )



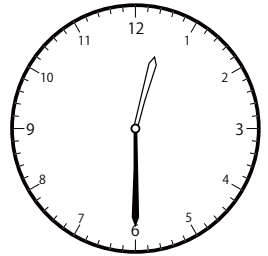
( )



( )

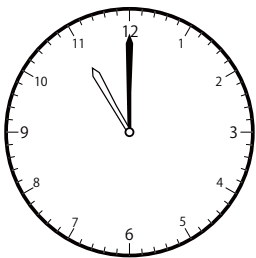


( )




( )


② 11時<sup>じ</sup>0分<sup>ふん</sup>の時計<sup>とけい</sup>を見つけよう



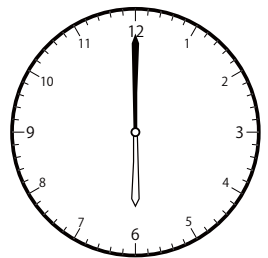
( )




( )




( )




( )



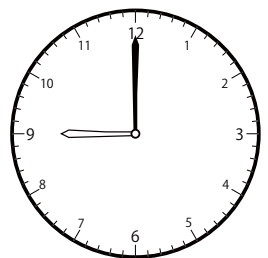
( )



( )



( )




( )

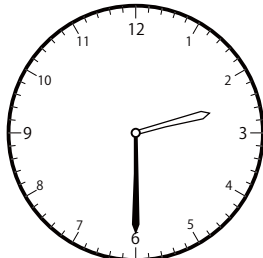
〇〇時<sup>じ</sup>30分<sup>ふん</sup>単位の<sup>たんい</sup>時計<sup>とけい</sup>を見つけよう【B1】

問題<sup>もんだい</sup>と同じ時間<sup>おなじかん</sup>の時計<sup>とけい</sup>を見つけて( )に〇をつけましょう。

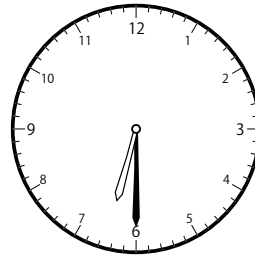
① 3時<sup>じ</sup>30分<sup>ふん</sup>の時計<sup>とけい</sup>を見つけよう



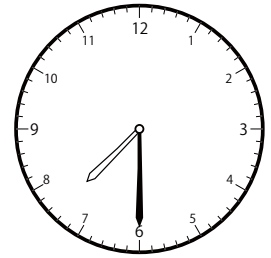
( )



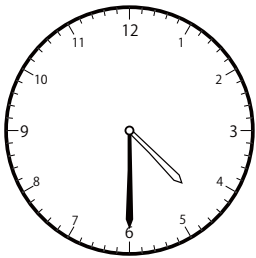
( )



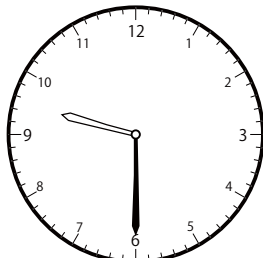
( )



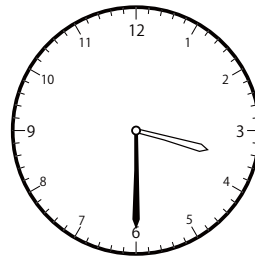
( )



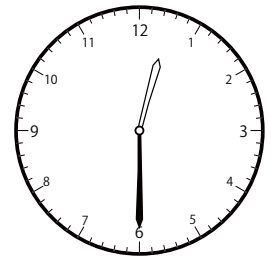
( )



( )

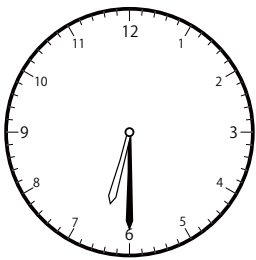


( )

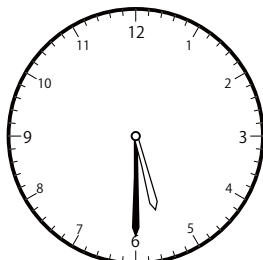


( )

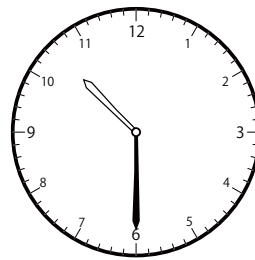
② 6時<sup>じ</sup>30分<sup>ふん</sup>の時計<sup>とけい</sup>を見つけよう



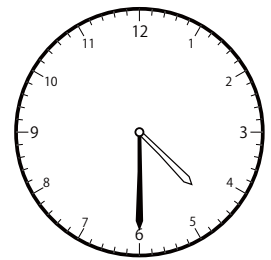
( )



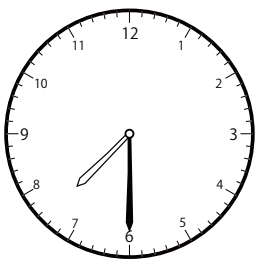
( )




( )




( )



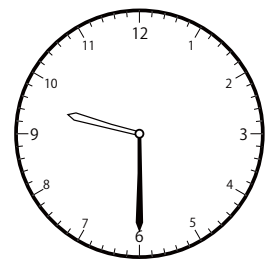
( )



( )



( )



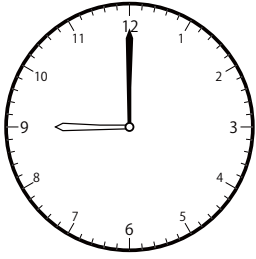
( )



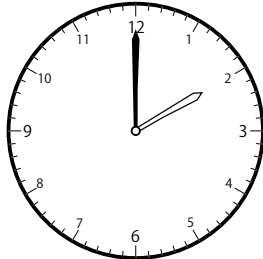
〇〇時<sup>じ</sup>30分<sup>ふん</sup>単位の<sup>たんい</sup>時計<sup>とけい</sup>を見つけよう【B1】

問題<sup>もんだい</sup>と同じ時間<sup>おなじかん</sup>の時計<sup>とけい</sup>を見つけ<sup>み</sup>て( )に〇をつけましょう。

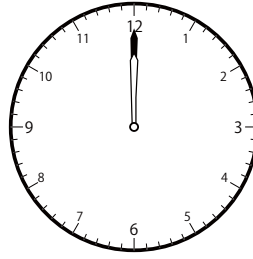
① 12時<sup>じ</sup> 0分<sup>ふん</sup>の時計<sup>とけい</sup>を見つけよう




( )




( )




( )



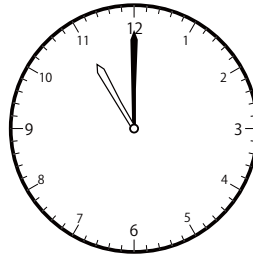
( )




( )



( )




( )

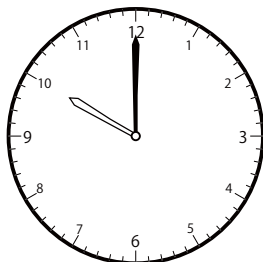


( )


② 2時<sup>じ</sup> 0分<sup>ふん</sup>の時計<sup>とけい</sup>を見つけよう




( )



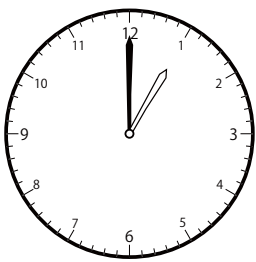
( )




( )




( )




( )



( )



( )

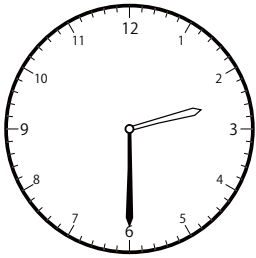


( )

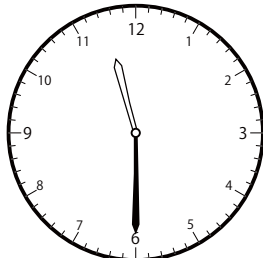
〇〇時<sup>じ</sup>30分<sup>ふん</sup>単位の<sup>たんい</sup>時計<sup>とけい</sup>を見つけよう【B1】

問題<sup>もんだい</sup>と同じ時間<sup>おなじかん</sup>の時計<sup>とけい</sup>を見つけて( )に〇をつけましょう。

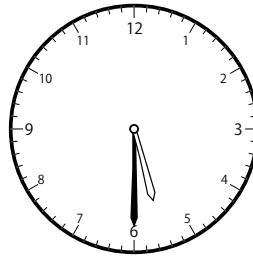
① 5時<sup>じ</sup>30分<sup>ふん</sup>の時計<sup>とけい</sup>を見つけよう



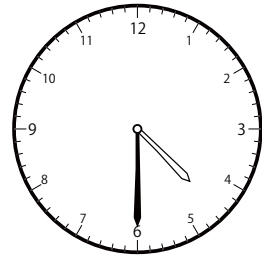
( )




( )




( )



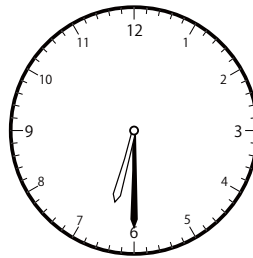
( )



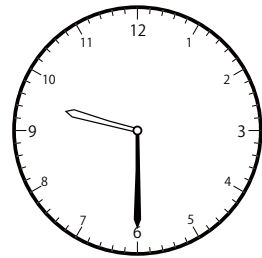
( )



( )

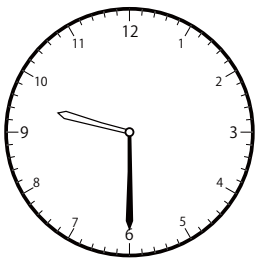


( )

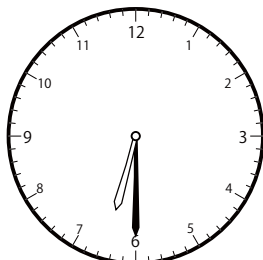


( )

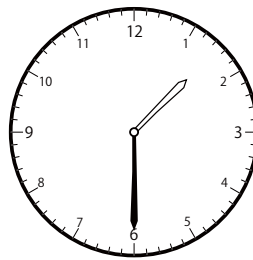
② 1時<sup>じ</sup>30分<sup>ふん</sup>の時計<sup>とけい</sup>を見つけよう



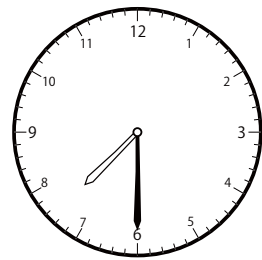
( )



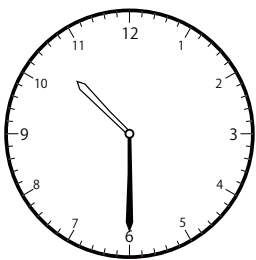
( )




( )



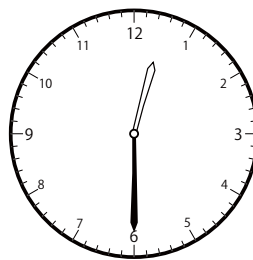
( )



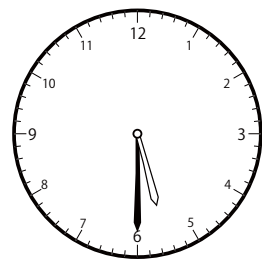
( )



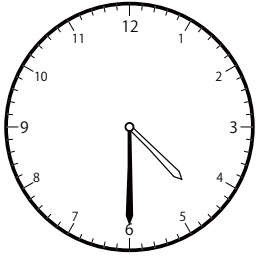
( )



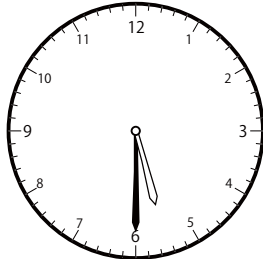
( )



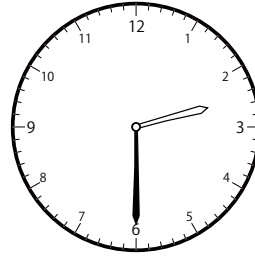
( )

〇〇時<sup>じ</sup>30分<sup>ふん</sup>単位の<sup>たんい</sup>時計<sup>とけい</sup>を見つけよう【B1】問題<sup>もんだい</sup>と同じ時間<sup>おなじかん</sup>の時計<sup>とけい</sup>を見つけ<sup>み</sup>て( )に〇をつけましょう。① 8時<sup>じ</sup>30分<sup>ふん</sup>の時計<sup>とけい</sup>を見つけよう

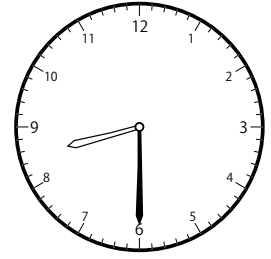
( )



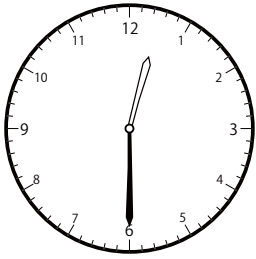
( )



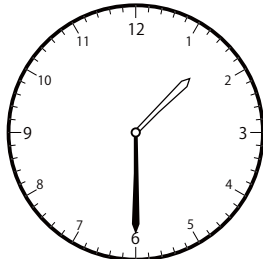
( )



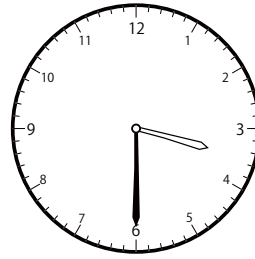
( )



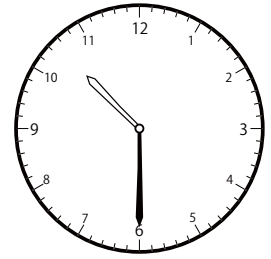
( )




( )




( )



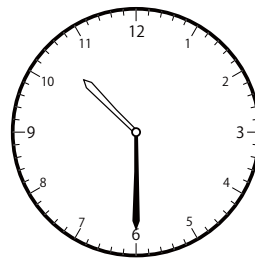
( )

② 9時<sup>じ</sup>30分<sup>ふん</sup>の時計<sup>とけい</sup>を見つけよう

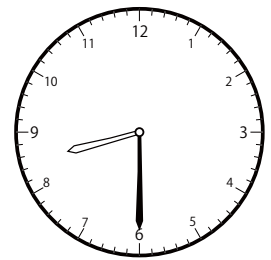
( )



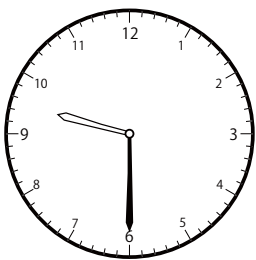
( )



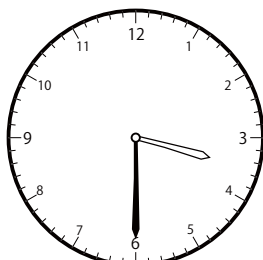
( )



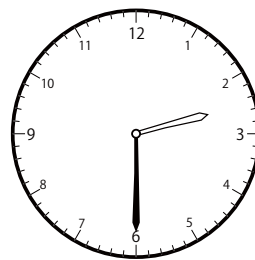
( )



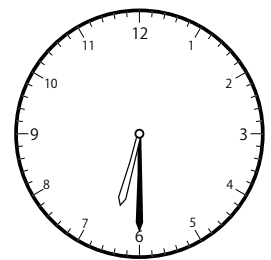
( )



( )



( )

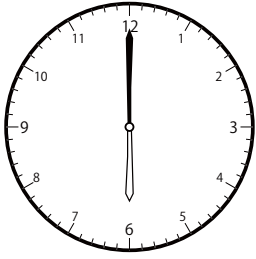


( )

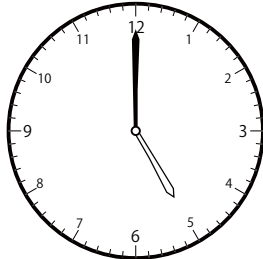
じ ふん たん い とけい み  
〇〇時30分単位の時計を見つけよう【B1】

もんだい おな じかん とけい み  
問題と同じ時間の時計を見つけて( )に〇をつけましょう。

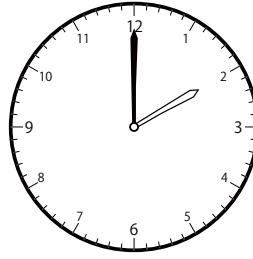
① 6時0分の時計を見つけよう




( )



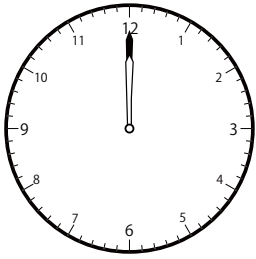
( )



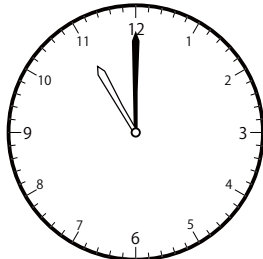
( )



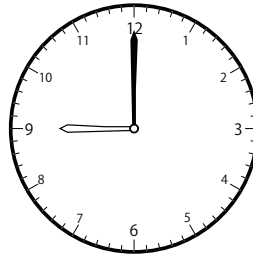
( )




( )



( )

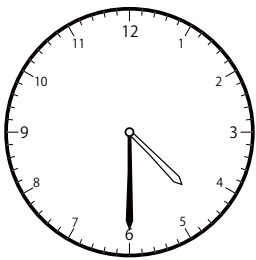


( )




( )

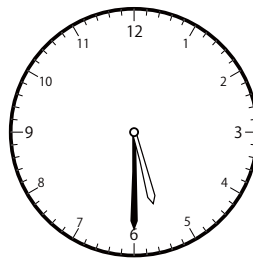
② 2時30分の時計を見つけよう




( )



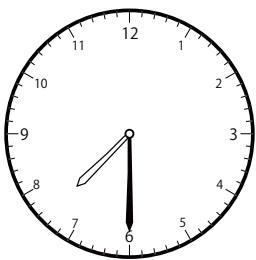
( )




( )



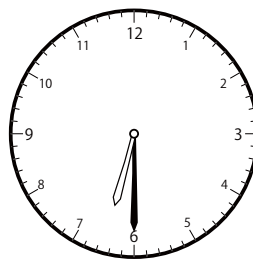
( )



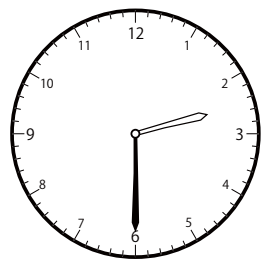
( )



( )



( )




( )

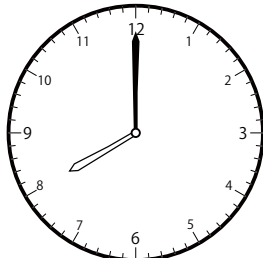
〇〇時<sup>じ</sup>30分<sup>ふん</sup>単位の<sup>たんい</sup>時計<sup>とけい</sup>を見つけよう【B1】

問題<sup>もんだい</sup>と同じ時間<sup>おなじかん</sup>の時計<sup>とけい</sup>を見つけて( )に〇をつけましょう。

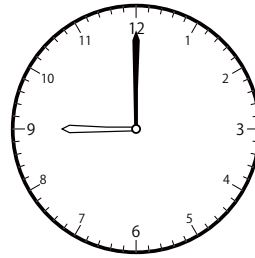
① 8時<sup>じ</sup>0分<sup>ふん</sup>の時計<sup>とけい</sup>を見つけよう



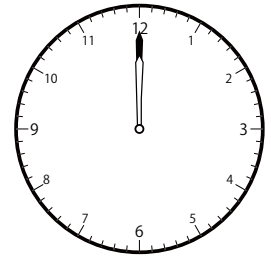
( )



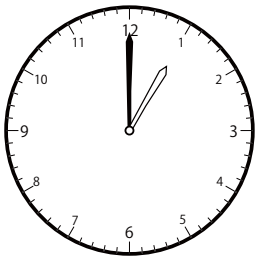
( )



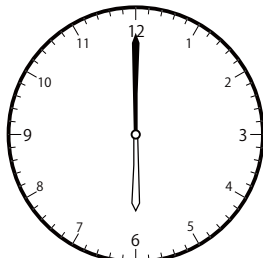
( )




( )




( )



( )

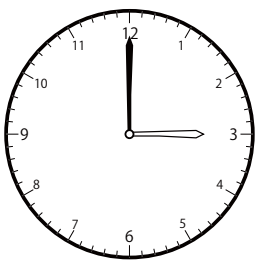


( )




( )


② 7時<sup>じ</sup>0分<sup>ふん</sup>の時計<sup>とけい</sup>を見つけよう




( )




( )




( )




( )




( )



( )



( )

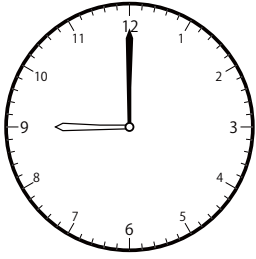


( )

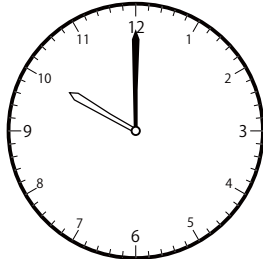
〇〇時<sup>じ</sup>30分<sup>ふん</sup>単位の<sup>たんい</sup>時計<sup>とけい</sup>を見つけよう【B1】

問題<sup>もんだい</sup>と同じ時間<sup>おなじかん</sup>の時計<sup>とけい</sup>を見つけて( )に〇をつけましょう。

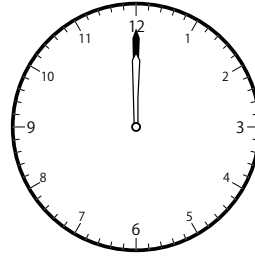
① 5時<sup>じ</sup>0分<sup>ふん</sup>の時計<sup>とけい</sup>を見つけよう




( )




( )




( )



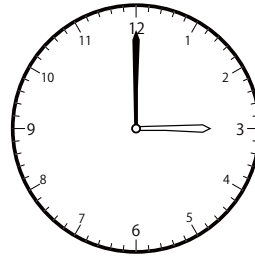
( )



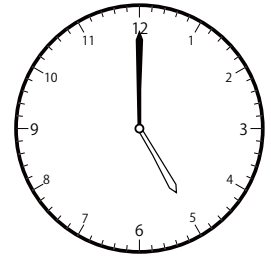
( )



( )




( )




( )


② 4時<sup>じ</sup>0分<sup>ふん</sup>の時計<sup>とけい</sup>を見つけよう



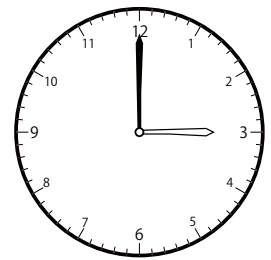
( )



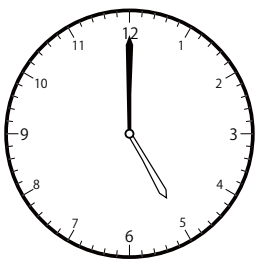
( )



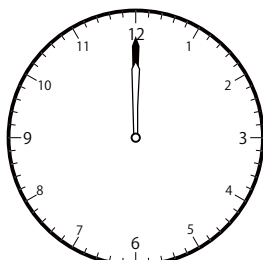
( )




( )




( )



( )



( )




( )

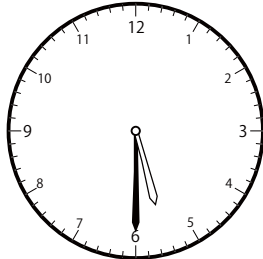
〇〇時<sup>じ</sup>30分<sup>ふん</sup>単位の<sup>たんい</sup>時計<sup>とけい</sup>を見つけよう【B1】

問題<sup>もんだい</sup>と同じ時間<sup>おなじかん</sup>の時計<sup>とけい</sup>を見つけ<sup>み</sup>て( )に〇をつけましょう。

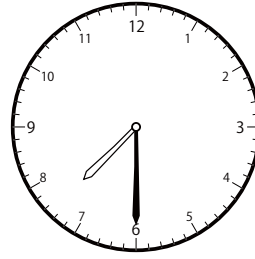
① 8時<sup>じ</sup>30分<sup>ふん</sup>の時計<sup>とけい</sup>を見つけよう



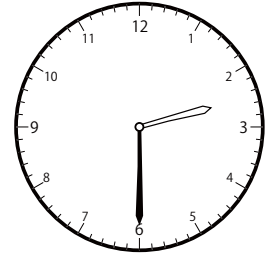
( )



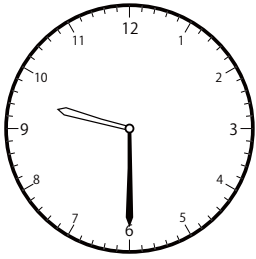
( )



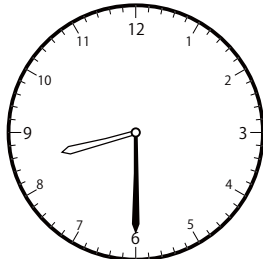
( )



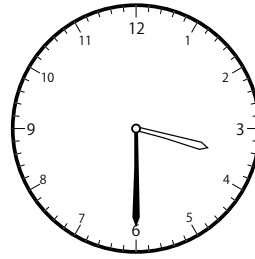
( )



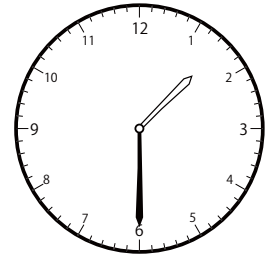
( )



( )

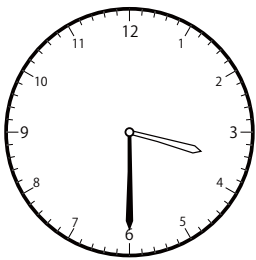


( )




( )

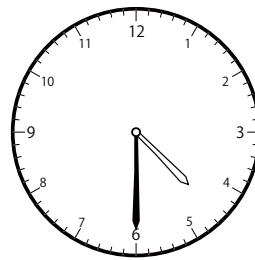
② 12時<sup>じ</sup>30分<sup>ふん</sup>の時計<sup>とけい</sup>を見つけよう



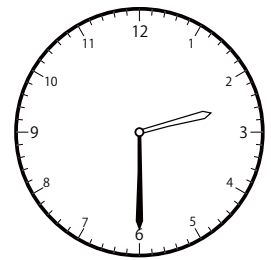
( )



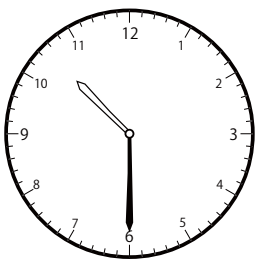
( )



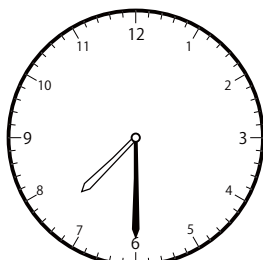
( )



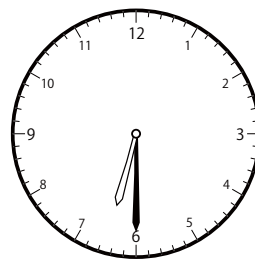
( )



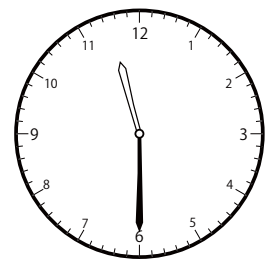
( )



( )



( )




( )

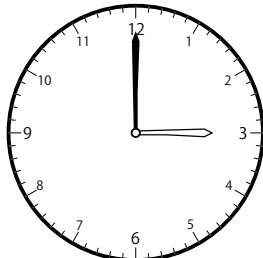
〇〇時<sup>じ</sup>30分<sup>ふん</sup>単位の<sup>たんい</sup>時計<sup>とけい</sup>を見つけよう【B1】

問題<sup>もんだい</sup>と同じ時間<sup>おなじかん</sup>の時計<sup>とけい</sup>を見つけて( )に〇をつけましょう。


① 11時<sup>じ</sup>0分<sup>ふん</sup>の時計<sup>とけい</sup>を見つけよう




( )




( )



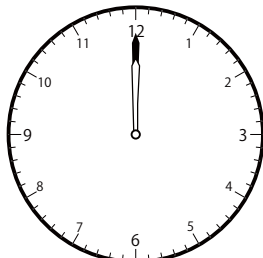
( )



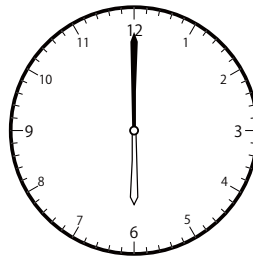
( )




( )



( )




( )

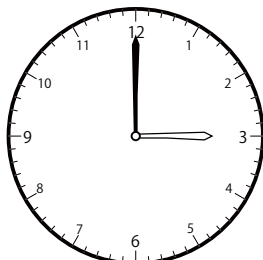


( )


② 3時<sup>じ</sup>0分<sup>ふん</sup>の時計<sup>とけい</sup>を見つけよう




( )



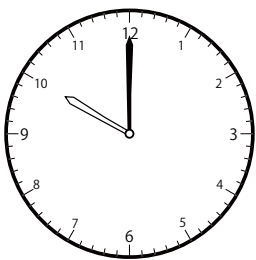
( )




( )




( )




( )



( )



( )



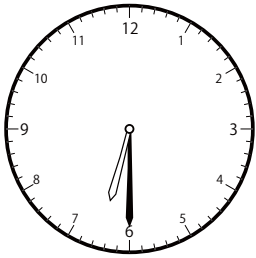
( )



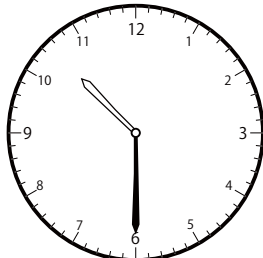
〇〇時<sup>じ</sup>30分<sup>ふん</sup>単位の<sup>たんい</sup>時計<sup>とけい</sup>を見つけよう【B1】

問題<sup>もんだい</sup>と同じ時間<sup>おなじかん</sup>の時計<sup>とけい</sup>を見つけて( )に〇をつけましょう。

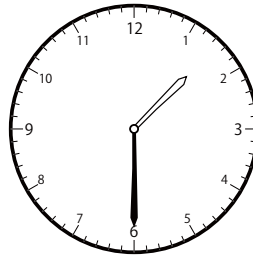
① 6時<sup>じ</sup>30分<sup>ふん</sup>の時計<sup>とけい</sup>を見つけよう



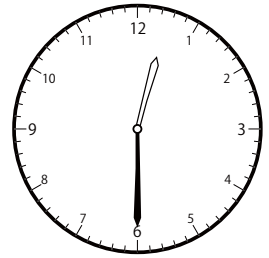
( )



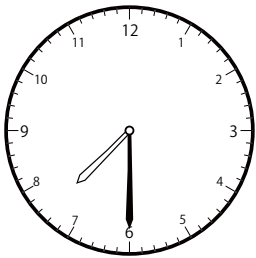
( )



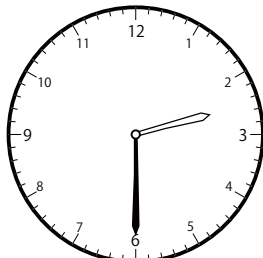
( )



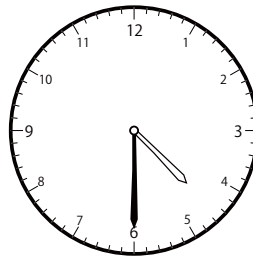
( )



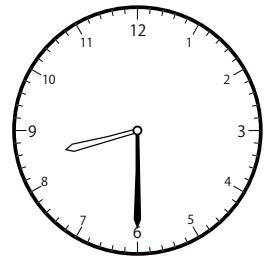
( )



( )

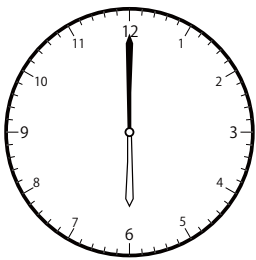


( )




( )


② 10時<sup>じ</sup>0分<sup>ふん</sup>の時計<sup>とけい</sup>を見つけよう




( )



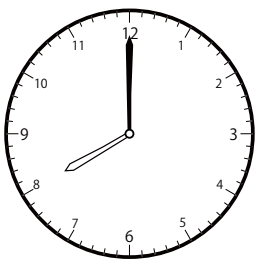
( )




( )



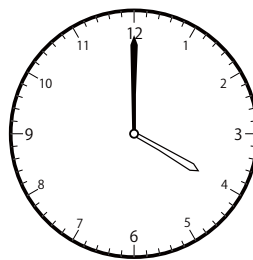
( )




( )



( )



( )




( )


〇〇時<sup>じ</sup>30分<sup>ふん</sup>単位の<sup>たんい</sup>時計<sup>とけい</sup>を見つけよう【B1】

問題<sup>もんだい</sup>と同じ時間<sup>おなじかん</sup>の時計<sup>とけい</sup>を見つけ<sup>み</sup>て( )に〇をつけましょう。

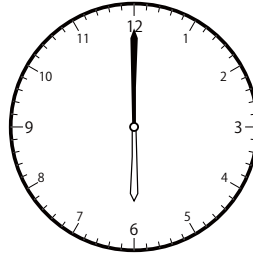
① 2時<sup>じ</sup>0分<sup>ふん</sup>の時計<sup>とけい</sup>を見つけよう




( )




( )



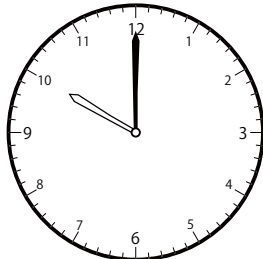
( )



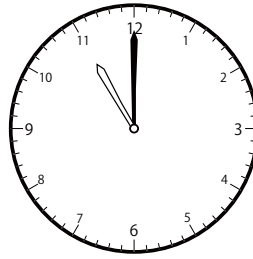
( )




( )



( )

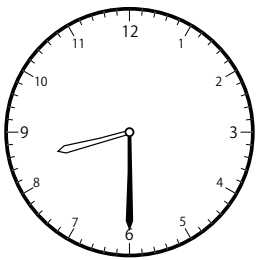


( )

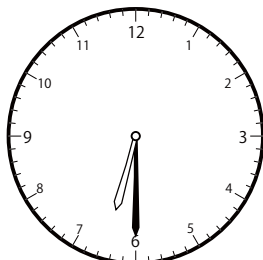


( )

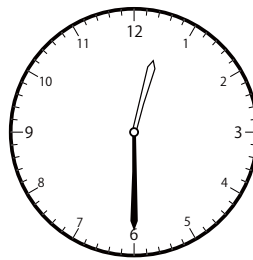
② 4時<sup>じ</sup>30分<sup>ふん</sup>の時計<sup>とけい</sup>を見つけよう




( )



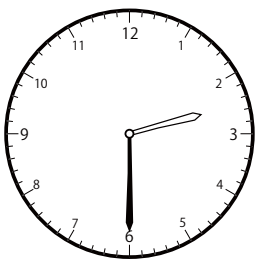
( )



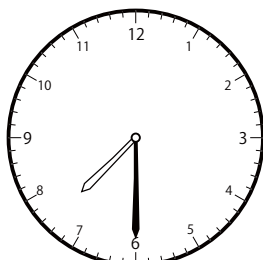
( )



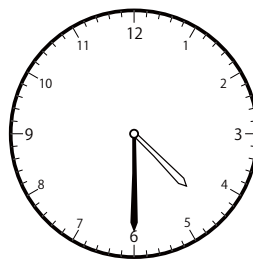
( )



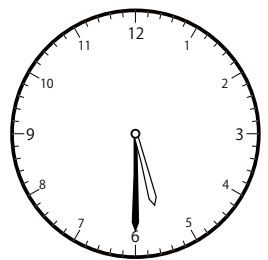
( )



( )



( )



( )