




〇〇時^じ | 分^{ふん} 単位の時計^{とけい}を見つけよう【E3】問題^{もんだい}と同じ時間^{おなじかん}の時計^{とけい}を見つけて()に〇をつけましょう。① 1時^じ 4分^{ふん} の時計^{とけい}を見つけよう


()




()



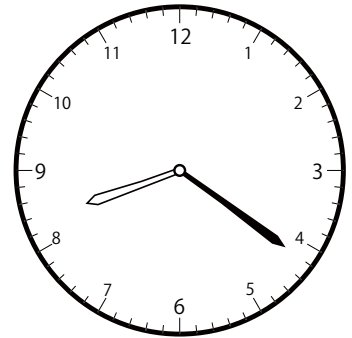
()

② 11時^じ 21分^{ふん} の時計^{とけい}を見つけよう


()



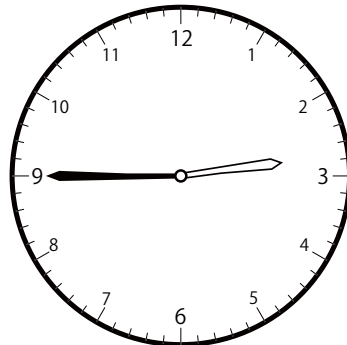
()



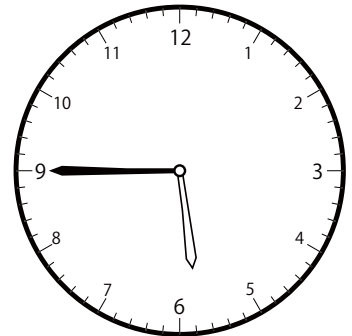
()

③ 2時^じ 45分^{ふん} の時計^{とけい}を見つけよう

()



()




()

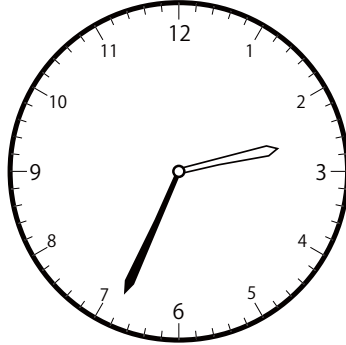
〇〇時^じ | 分^{ふん} 単位の^{たんい} 時計^{とけい} を見^み つけよう 【E3】

問題^{もんだい} と同^{おな} じ時^じ 間^{かん} の時^{とけい} 計^み を見^み つけて () に〇を^{つけ} まし^{よう} 。


① 1時^じ 34分^{ふん} の時^{とけい} 計^み を見^み つけよう



()




()




()

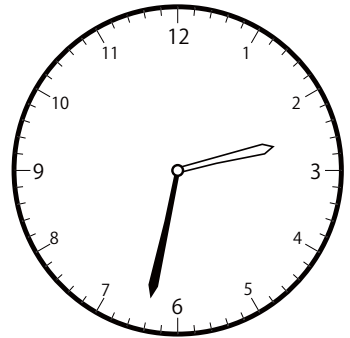
② 12時^じ 32分^{ふん} の時^{とけい} 計^み を見^み つけよう



()

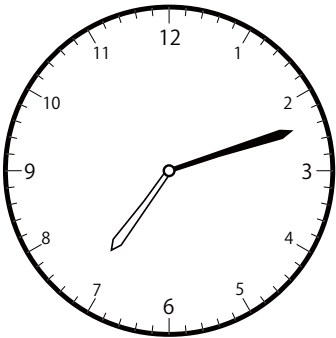


()




()


③ 8時^じ 12分^{ふん} の時^{とけい} 計^み を見^み つけよう



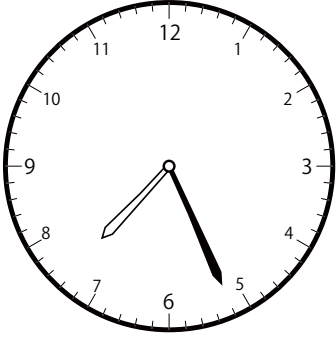
()



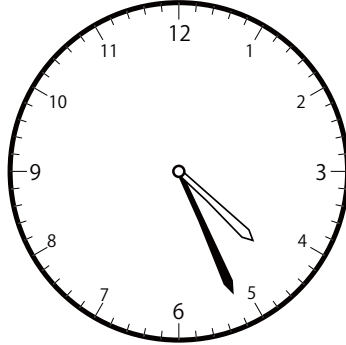
()




()

〇〇時^じ1分^{ふん}単位の時計^{とけい}を見つけよう【E3】問題^{もんだい}と同じ時間^{おなじかん}の時計^{とけい}を見つけて()に〇をつけましょう。① 4時^じ26分^{ふん}の時計^{とけい}を見つけよう


()




()




()

② 4時^じ58分^{ふん}の時計^{とけい}を見つけよう


()



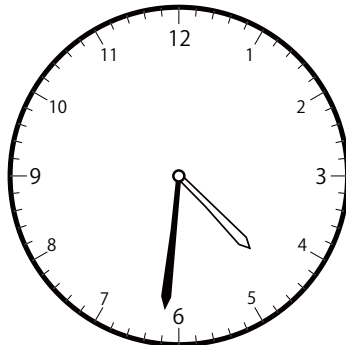
()




()

③ 1時^じ31分^{ふん}の時計^{とけい}を見つけよう

()



()




()


〇〇時^じ | 分^{ふん} 単位の時計^{とけい}を見つけよう【E3】

問題^{もんだい}と同じ時間^{おなじかん}の時計^{とけい}を見つけて()に〇をつけましょう。


① 6時^じ 11分^{ふん} の時計^{とけい}を見つけよう



()




()




()


② 11時^じ 48分^{ふん} の時計^{とけい}を見つけよう



()




()




()


③ 7時^じ 51分^{ふん} の時計^{とけい}を見つけよう




()



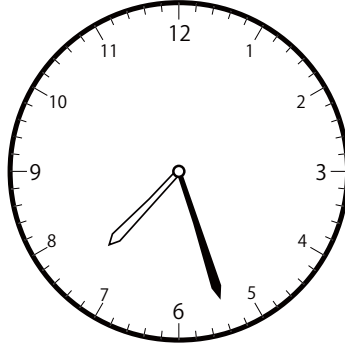
()




()

〇〇時^じ1分^{ふん}単位の時計^{とけい}を見つけよう【E3】問題^{もんだい}と同じ時間^{おなじかん}の時計^{とけい}を見つけて()に〇をつけましょう。① 10時^じ27分^{ふん}の時計^{とけい}を見つけよう


()



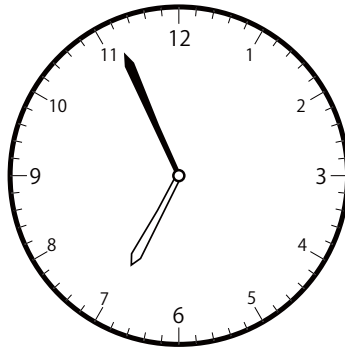
()




()

② 6時^じ56分^{ふん}の時計^{とけい}を見つけよう


()




()




()

③ 10時^じ37分^{ふん}の時計^{とけい}を見つけよう


()




()



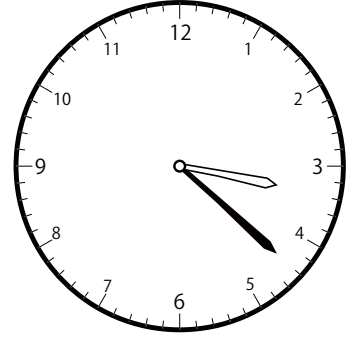
()

〇〇時^じ | 分^{ふん} 単位の時計^{とけい}を見つけよう【E3】問題^{もんだい}と同じ時間^{おなじかん}の時計^{とけい}を見つけ^みて()に〇をつけましょう。① 1時^じ 22分^{ふん}の時計^{とけい}を見つけよう


()



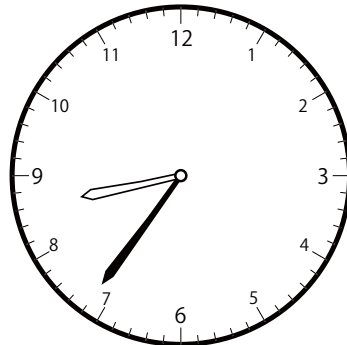
()



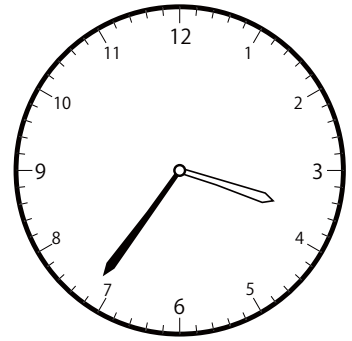
()

② 6時^じ 36分^{ふん}の時計^{とけい}を見つけよう


()



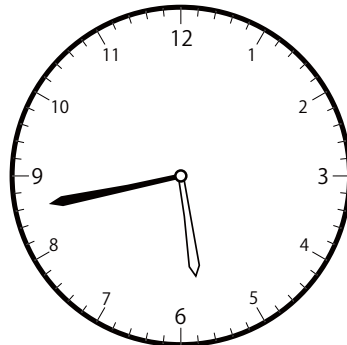
()



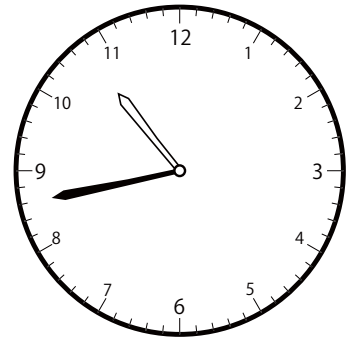
()

③ 7時^じ 43分^{ふん}の時計^{とけい}を見つけよう

()



()

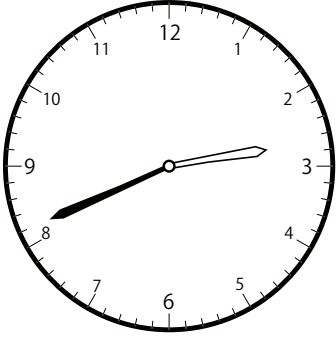


()

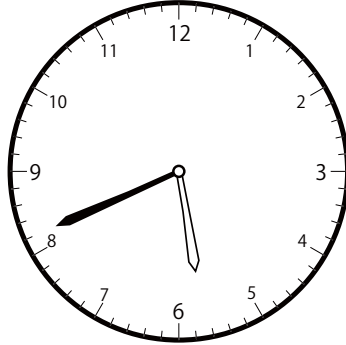
〇〇時^じ1分^{ふん}単位の時計^{とけい}を見つけよう【E3】

問題^{もんだい}と同じ時間^{おなじかん}の時計^{とけい}を見つけて()に〇をつけましょう。


① 2時^じ41分^{ふん}の時計^{とけい}を見つけよう



()

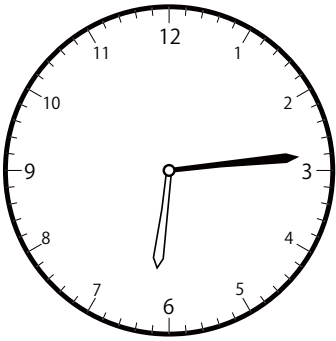


()




()

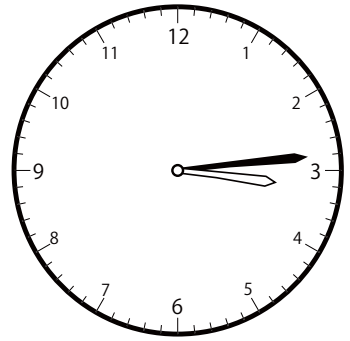
② 6時^じ14分^{ふん}の時計^{とけい}を見つけよう



()




()

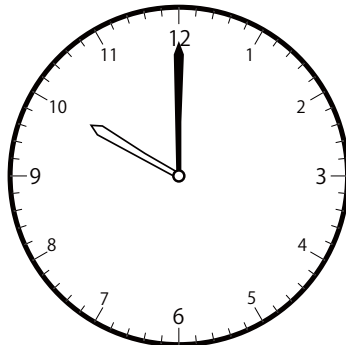


()


③ 11時^じ0分^{ふん}の時計^{とけい}を見つけよう



()



()




()

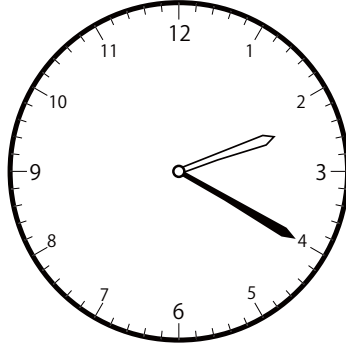
〇〇時^じ | 分^{ぶん} 単位の時計^{とけい}を見つけよう【E3】

問題^{もんだい}と同じ時間^{おなじかん}の時計^{とけい}を見つけて()に〇をつけましょう。

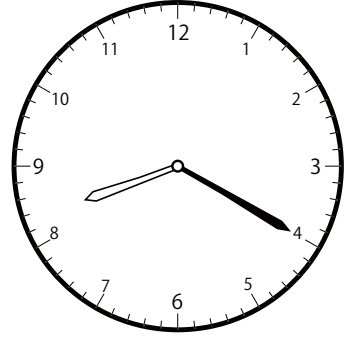
① 11時^じ 20分^{ぶん} の時計^{とけい}を見つけよう



()




()




()


② 1時^じ 53分^{ぶん} の時計^{とけい}を見つけよう



()

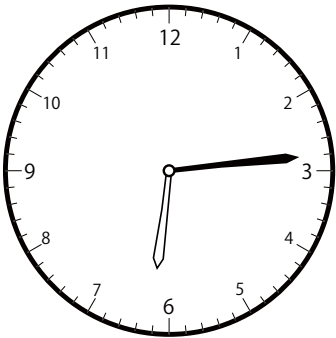


()

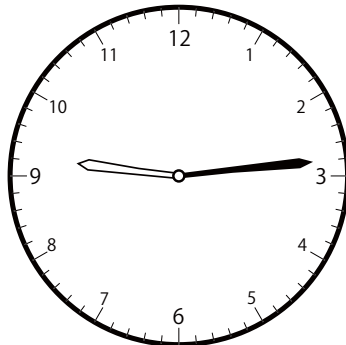


()


③ 8時^じ 14分^{ぶん} の時計^{とけい}を見つけよう




()



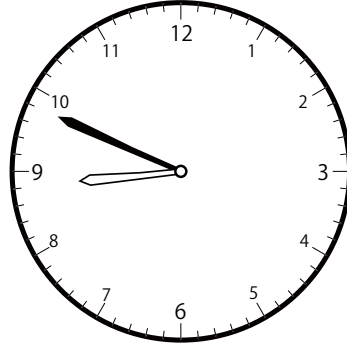
()




()

〇〇時^じ | 分^{ふん} 単位の時計^{とけい}を見つけよう【E3】問題^{もんだい}と同じ時間^{おなじかん}の時計^{とけい}を見つけ^みて()に〇をつけましょう。① 10時^じ 49分^{ふん} の時計^{とけい}を見つけよう


()



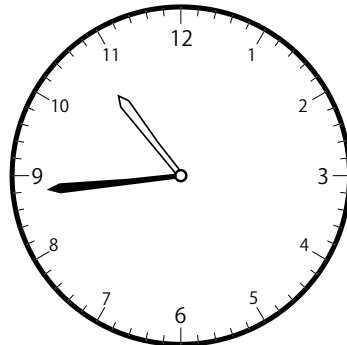
()



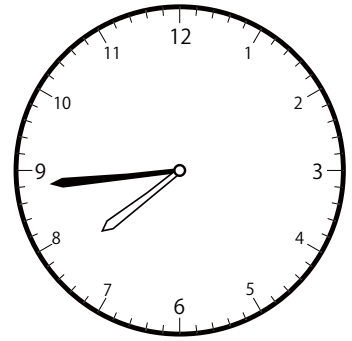
()

② 7時^じ 44分^{ふん} の時計^{とけい}を見つけよう

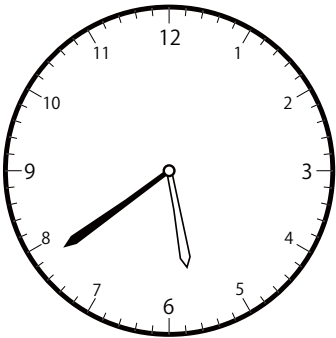
()




()




()

③ 2時^じ 39分^{ふん} の時計^{とけい}を見つけよう

()



()




()


〇〇時^じ1分^{ふん}単位の時計を見つけよう【E3】

問題^{もんだい}と同じ時間^{おなじかん}の時計^{とけい}を見つけて()に〇をつけましょう。


① 1時^じ50分^{ふん}の時計^{とけい}を見つけよう



()




()




()


② 2時^じ50分^{ふん}の時計^{とけい}を見つけよう



()

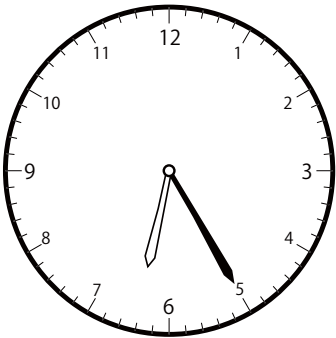


()

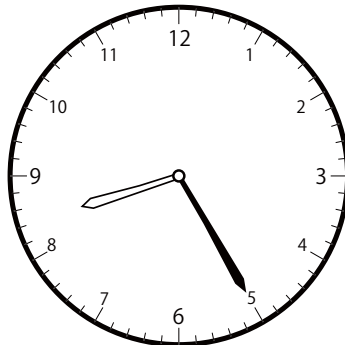


()

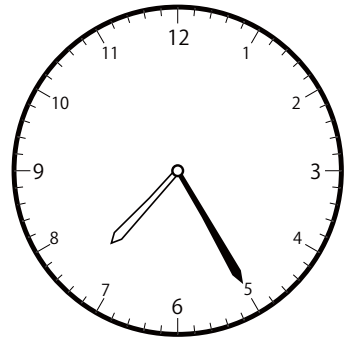
③ 7時^じ25分^{ふん}の時計^{とけい}を見つけよう



()



()




()

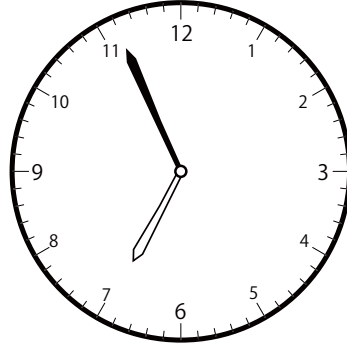
〇〇時^じ 1分^{ふん} 単位の時計^{とけい}を見つけよう【E3】

問題^{もんだい}と同じ時間^{おなじかん}の時計^{とけい}を見つけて()に〇をつけましょう。


① 5時^じ 56分^{ふん}の時計^{とけい}を見つけよう



()




()

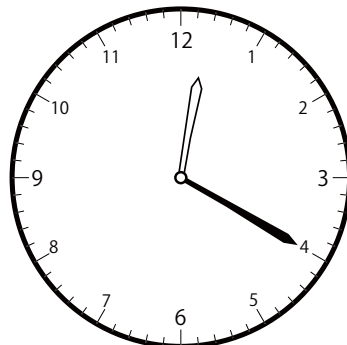


()

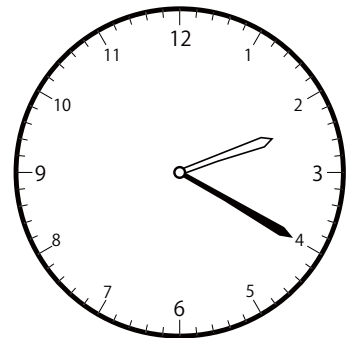
② 1時^じ 20分^{ふん}の時計^{とけい}を見つけよう



()

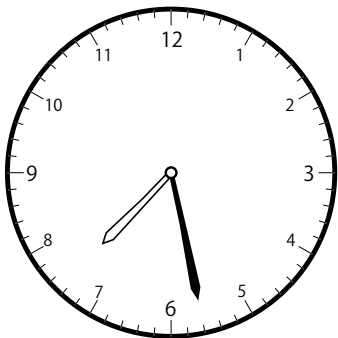


()




()

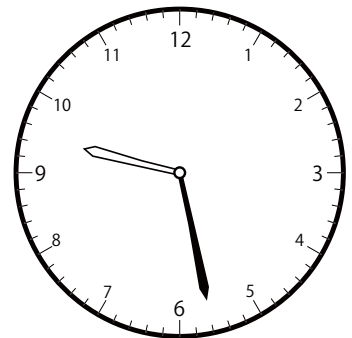
③ 8時^じ 28分^{ふん}の時計^{とけい}を見つけよう




()



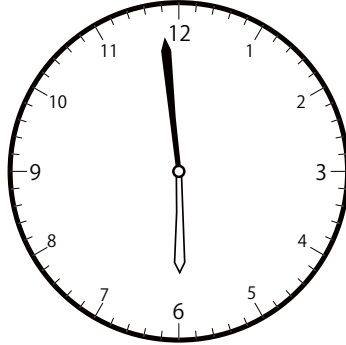
()




()

〇〇時^じ1分^{ふん}単位^{たんい}の時計^{とけい}を見つけよう【E3】問題^{もんだい}と同じ時間^{おなじかん}の時計^{とけい}を見つけ^みて()に〇をつけましょう。① 3時^じ59分^{ふん}の時計^{とけい}を見つけよう

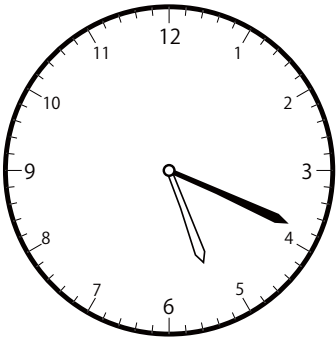
()




()




()

② 2時^じ19分^{ふん}の時計^{とけい}を見つけよう


()




()




()

③ 12時^じ6分^{ふん}の時計^{とけい}を見つけよう

()



()




()


〇〇時^じ 1分^{ふん} 単位の時計^{とけい} を見つけよう【E3】

問題^{もんだい} と同じ時間^{おなじかん} の時計^{とけい} を見つけて () に〇をつけましょう。


① 1時^じ 40分^{ふん} の時計^{とけい} を見つけよう



()




()




()

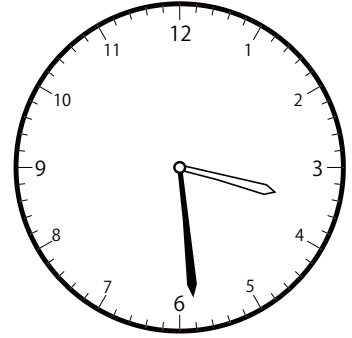
② 1時^じ 29分^{ふん} の時計^{とけい} を見つけよう



()

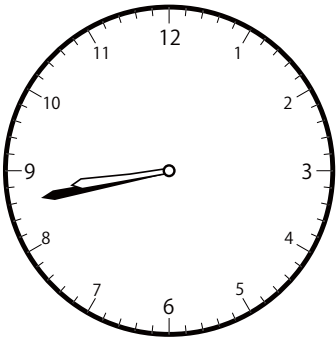


()

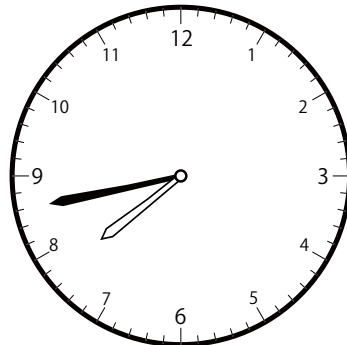


()

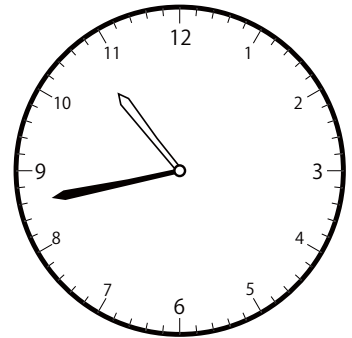
③ 8時^じ 43分^{ふん} の時計^{とけい} を見つけよう




()




()




()

〇〇時^じ1分^{ふん}単位の時計^{とけい}を見つけよう【E3】問題^{もんだい}と同じ時間^{おなじかん}の時計^{とけい}を見つけて()に〇をつけましょう。① 4時^じ8分^{ふん}の時計^{とけい}を見つけよう


()




()




()

② 3時^じ53分^{ふん}の時計^{とけい}を見つけよう


()



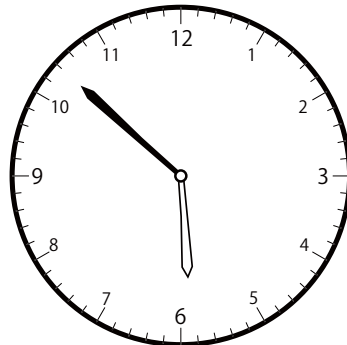
()




()

③ 7時^じ52分^{ふん}の時計^{とけい}を見つけよう


()




()




()

〇〇時^じ1分^{ふん}単位^{たんい}の時計^{とけい}を見つけよう【E3】問題^{もんだい}と同じ時間^{おなじかん}の時計^{とけい}を見つけ^みて()に〇をつけましょう。① 12時^じ52分^{ふん}の時計^{とけい}を見つけよう

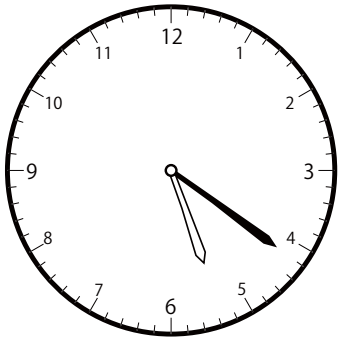
()




()



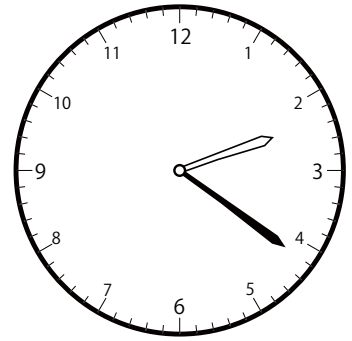
()

② 2時^じ21分^{ふん}の時計^{とけい}を見つけよう


()



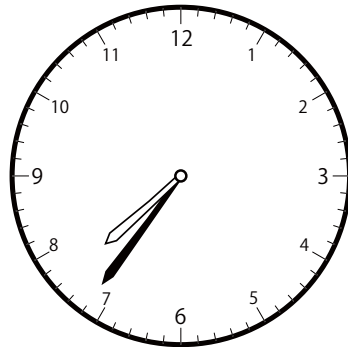
()



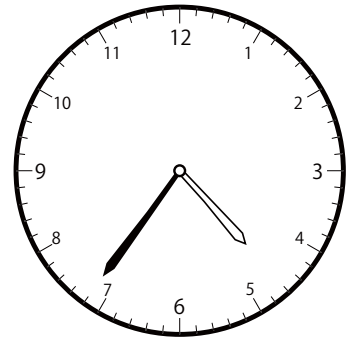
()

③ 4時^じ36分^{ふん}の時計^{とけい}を見つけよう

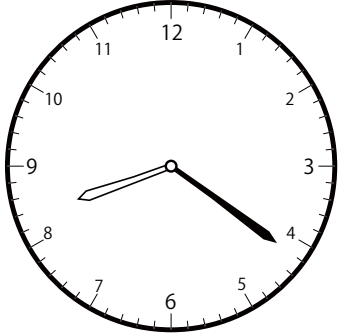
()




()




()

〇〇時^じ1分^{ふん}単位の時計^{とけい}を見つけよう【E3】問題^{もんだい}と同じ時間^{おなじかん}の時計^{とけい}を見つけて()に〇をつけましょう。① 8時^じ21分^{ふん}の時計^{とけい}を見つけよう


()




()



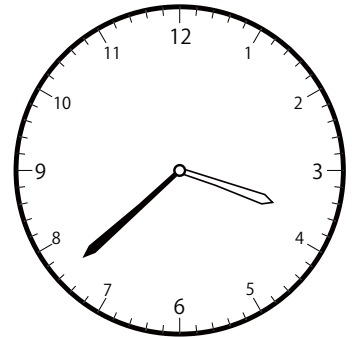
()

② 3時^じ38分^{ふん}の時計^{とけい}を見つけよう


()




()




()

③ 12時^じ37分^{ふん}の時計^{とけい}を見つけよう

()



()



()