



じ ふん たん い とけい み
〇〇時 1 分 単位の時計を見つけよう【E2】

もんだい おな じかん とけい み
問題と同じ時間の時計を見つけて()に○をつけましょう。


① 7 時 40 分の時計を見つけよう



()

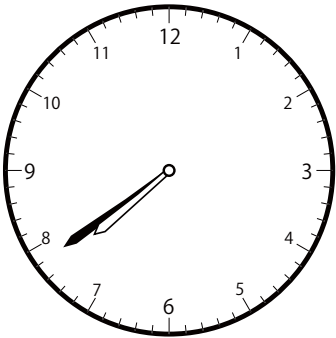


()




()

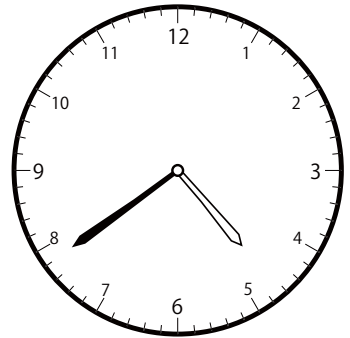
② 4 時 39 分の時計を見つけよう



()




()




()


③ 11 時 5 分の時計を見つけよう



()




()




()


① 12 時 4 分の時計を見つけよう



()




()




()


② 11 時 9 分の時計を見つけよう



()

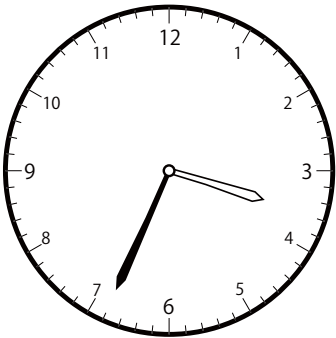


()




()


③ 12 時 34 分の時計を見つけよう



()



()




()

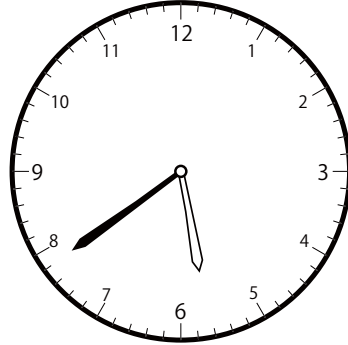
〇〇時^じ1分^{ふん}単位^{たんい}の時計^{とけい}を見つけよう【E2】

問題^{もんだい}と同じ時間^{おなじかん}の時計^{とけい}を見つけ^みて()に〇をつけましょう。

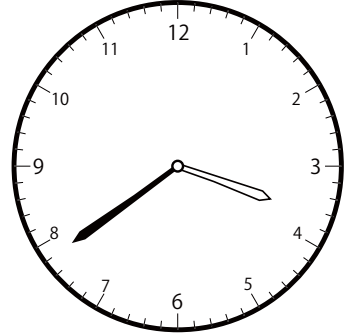
① 3時^じ39分^{ふん}の時計^{とけい}を見つけよう



()




()




()


② 11時^じ50分^{ふん}の時計^{とけい}を見つけよう



()

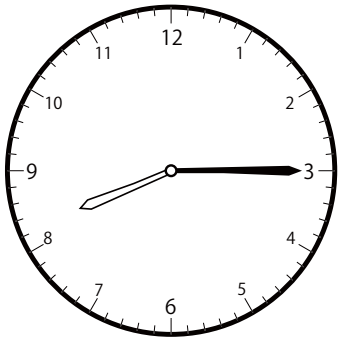


()

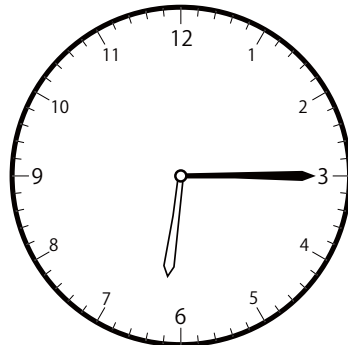


()

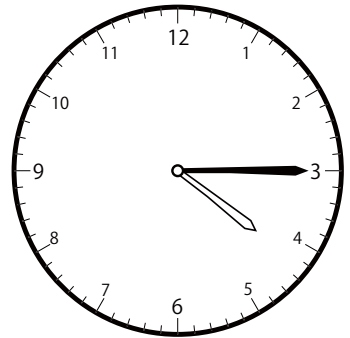
③ 6時^じ15分^{ふん}の時計^{とけい}を見つけよう




()




()




()

〇〇時^じ | 分^{ふん} 単位の時計^{とけい}を見つけよう【E2】問題^{もんだい}と同じ時間^{おなじじかん}の時計^{とけい}を見つけて()に〇をつけましょう。① 10時^じ 25分^{ふん} の時計^{とけい}を見つけよう

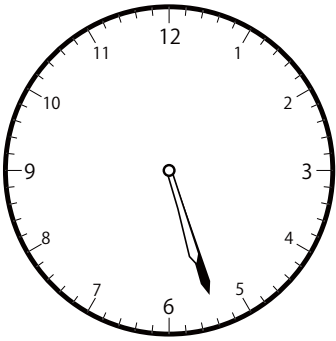
()



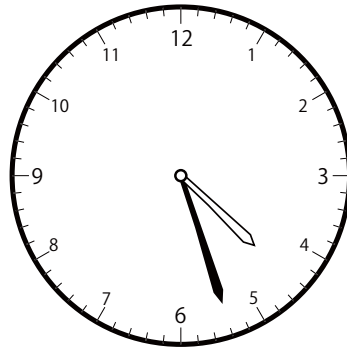
()



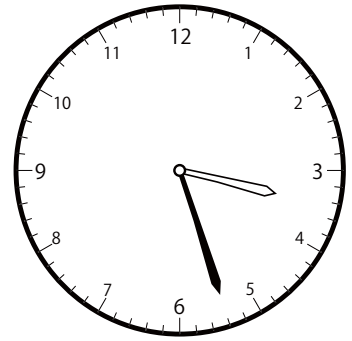
()

② 4時^じ 27分^{ふん} の時計^{とけい}を見つけよう


()



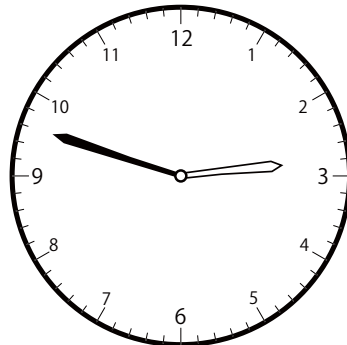
()




()

③ 1時^じ 48分^{ふん} の時計^{とけい}を見つけよう

()



()




()

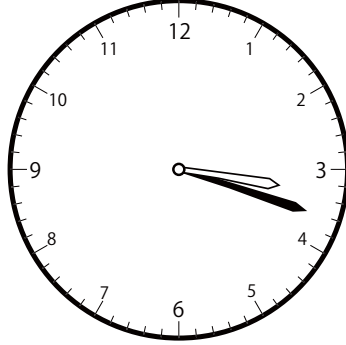
〇〇時 1 分 単位の時計を見つけよう【E2】

問題と同じ時間の時計を見つけて()に○をつけましょう。


① 12 時 18 分の時計を見つけよう



()




()

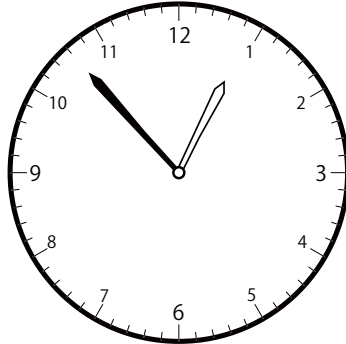


()


② 12 時 53 分の時計を見つけよう



()

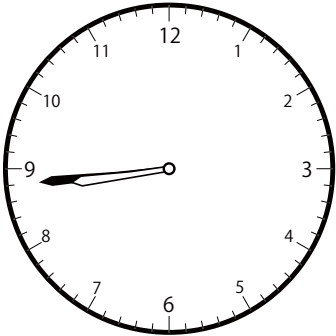


()




()


③ 8 時 44 分の時計を見つけよう



()



()




()


〇〇時^じ1分^{ふん}単位の時計^{とけい}を見つけよう【E2】

問題^{もんだい}と同じ時間^{おなじかん}の時計^{とけい}を見つけて()に〇をつけましょう。


① 8時^じ8分^{ふん}の時計^{とけい}を見つけよう



()

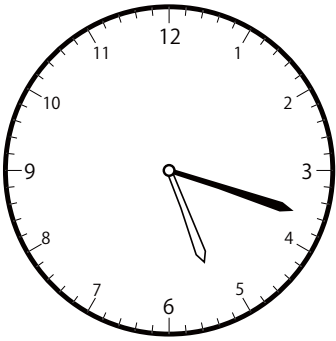


()

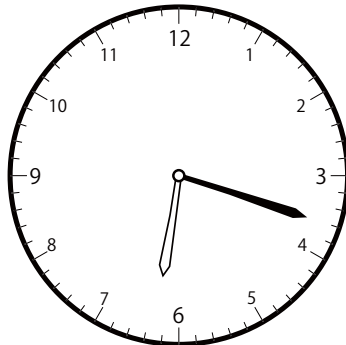


()

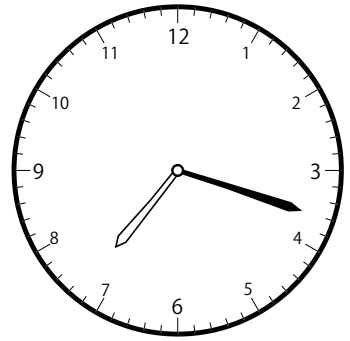
② 6時^じ18分^{ふん}の時計^{とけい}を見つけよう



()




()




()

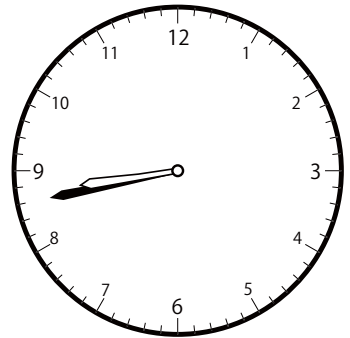
③ 6時^じ43分^{ふん}の時計^{とけい}を見つけよう



()



()




()


〇〇時 1 分 単位の時計を見つけよう【E2】

問題と同じ時間の時計を見つけて()に○をつけましょう。


① 8 時 9 分の時計を見つけよう



()




()




()


② 9 時 59 分の時計を見つけよう



()

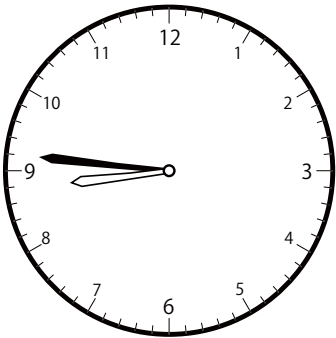


()




()

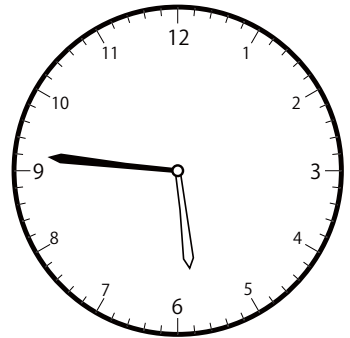
③ 5 時 46 分の時計を見つけよう



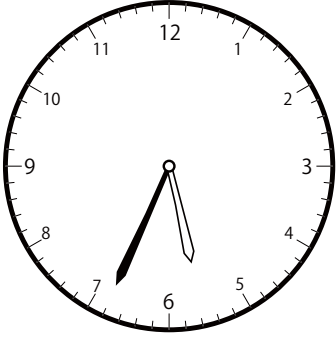
()



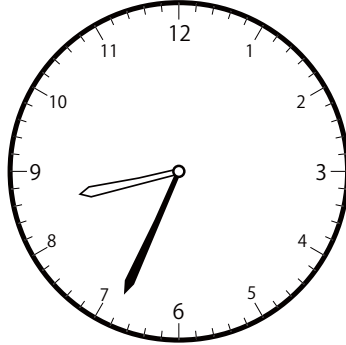
()



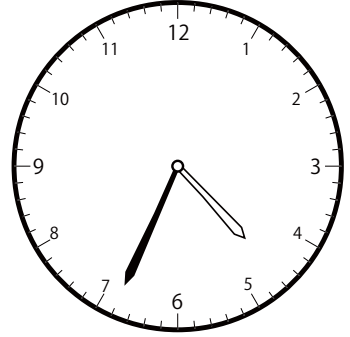
()

〇〇時^じ1分^{ふん}単位^{たんい}の時計^{とけい}を見つけよう【E2】問題^{もんだい}と同じ時間^{おなじかん}の時計^{とけい}を見つけ^みて()に○をつけましょう。① 5時^じ34分^{ふん}の時計^{とけい}を見つけよう

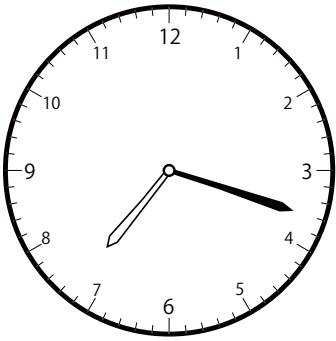
()



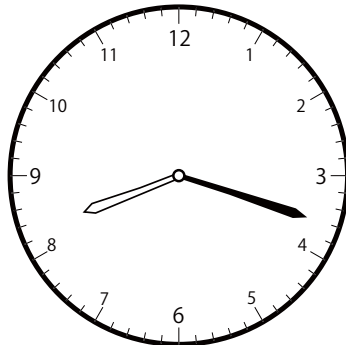
()



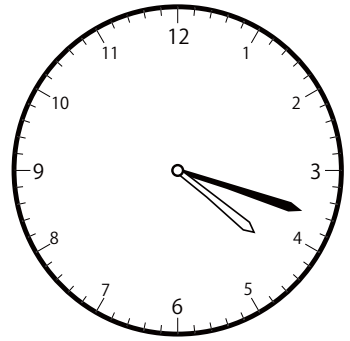
()

② 7時^じ18分^{ふん}の時計^{とけい}を見つけよう


()




()




()

③ 6時^じ53分^{ふん}の時計^{とけい}を見つけよう

()




()




()


① 7時^じ33分^{ふん}の時計^{とけい}を見つけよう



()




()

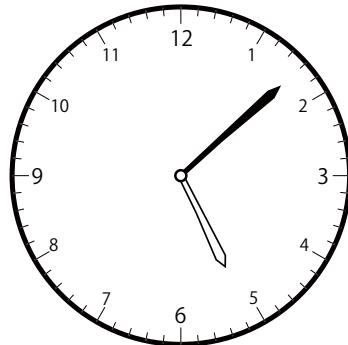


()


② 5時^じ8分^{ふん}の時計^{とけい}を見つけよう



()




()




()

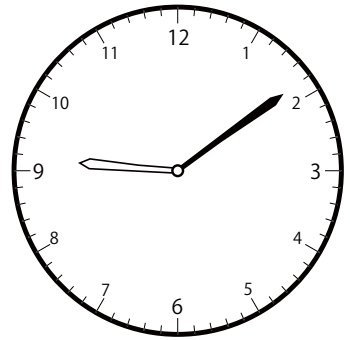
③ 9時^じ9分^{ふん}の時計^{とけい}を見つけよう



()



()

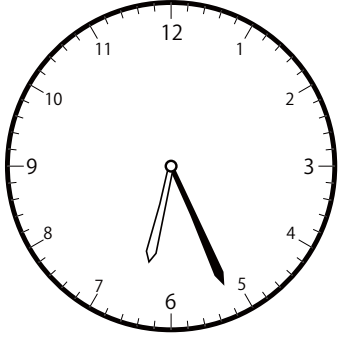


()


〇〇時 1 分 単位の時計を見つけよう【E2】

問題と同じ時間の時計を見つけて () に〇をつけましょう。

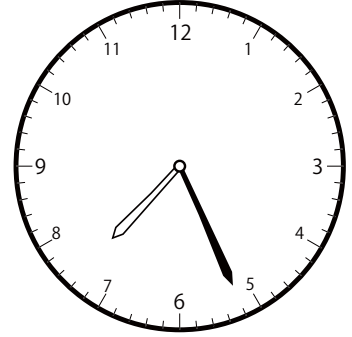
① 7 時 26 分の時計を見つけよう



()




()

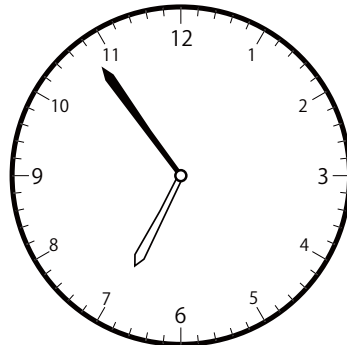


()


② 6 時 54 分の時計を見つけよう



()



()

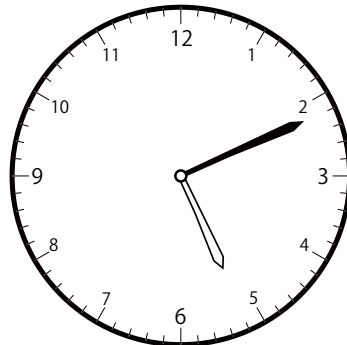


()

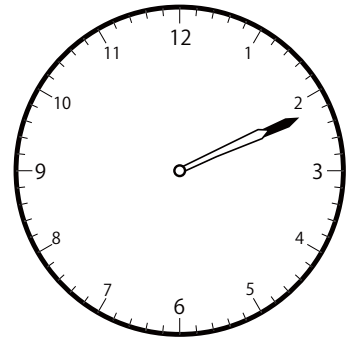
③ 2 時 11 分の時計を見つけよう



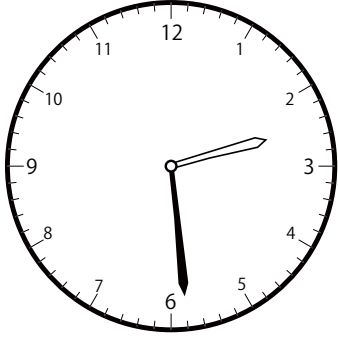
()



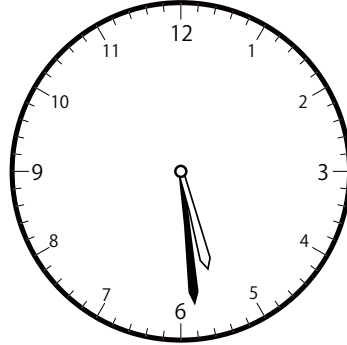
()




()

〇〇時^じ1分^{ふん}単位の時計^{とけい}を見つけよう【E2】問題^{もんだい}と同じ時間^{おなじかん}の時計^{とけい}を見つけて()に〇をつけましょう。① 2時^じ29分^{ふん}の時計^{とけい}を見つけよう


()




()



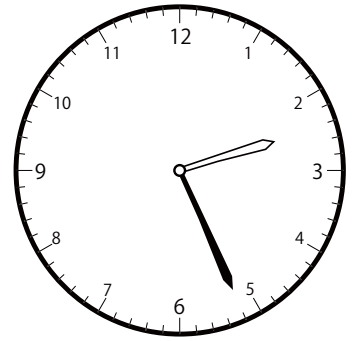
()

② 1時^じ26分^{ふん}の時計^{とけい}を見つけよう

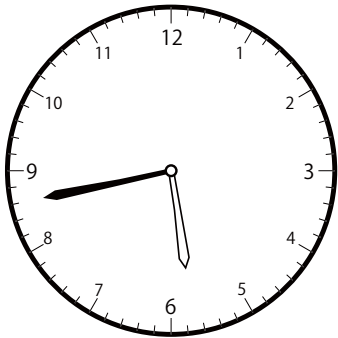
()




()



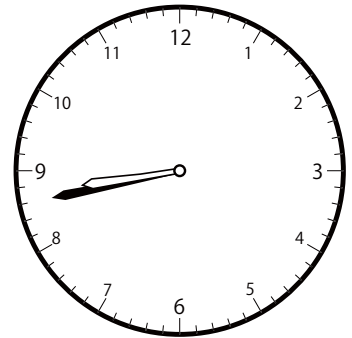
()

③ 5時^じ43分^{ふん}の時計^{とけい}を見つけよう

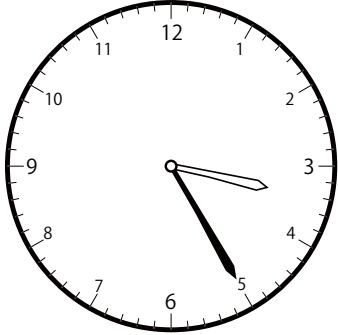
()



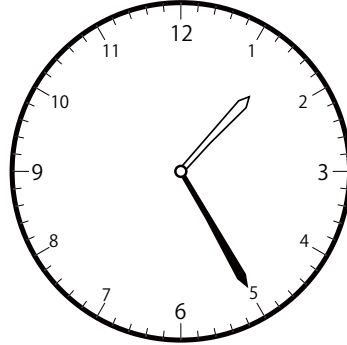
()




()

〇〇時^じ1分^{ふん}単位の時計^{とけい}を見つけよう【E2】問題^{もんだい}と同じ時間^{おなじかん}の時計^{とけい}を見つけて()に〇をつけましょう。① 1時^じ25分^{ふん}の時計^{とけい}を見つけよう


()




()



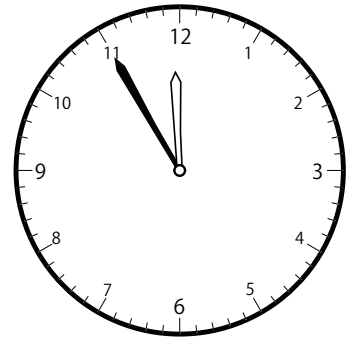
()

② 12時^じ55分^{ふん}の時計^{とけい}を見つけよう

()



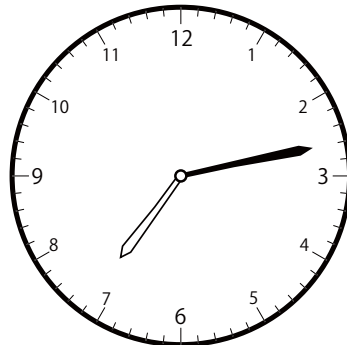
()



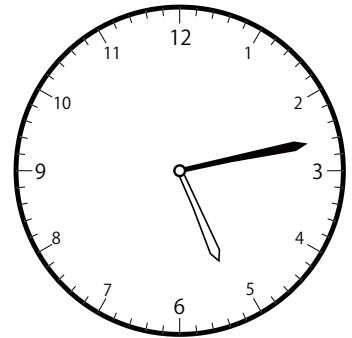
()

③ 7時^じ13分^{ふん}の時計^{とけい}を見つけよう

()



()




()

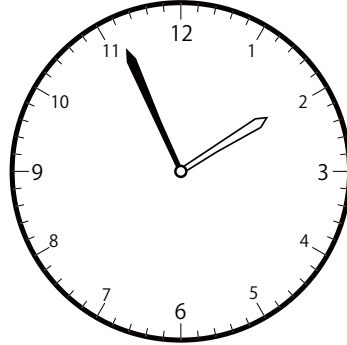
〇〇時 1 分 単位の時計を見つけよう【E2】

問題と同じ時間の時計を見つけて () に〇をつけましょう。


① 4 時 56 分の時計を見つけよう



()




()




()


② 1 時 13 分の時計を見つけよう



()




()




()


③ 12 時 17 分の時計を見つけよう



()



()

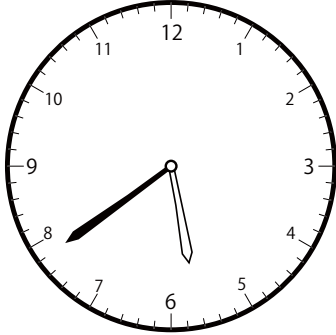


()


〇〇時^じ1分^{ふん}単位の時計^{とけい}を見つけよう【E2】

問題^{もんだい}と同じ時間^{おなじかん}の時計^{とけい}を見つけて()に〇をつけましょう。


① 6時^じ39分^{ふん}の時計^{とけい}を見つけよう



()

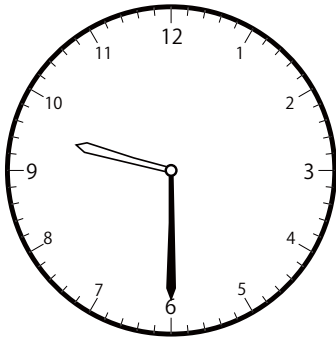


()

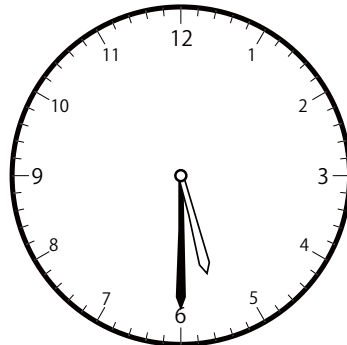


()

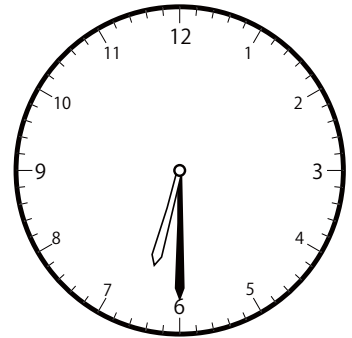
② 6時^じ30分^{ふん}の時計^{とけい}を見つけよう



()

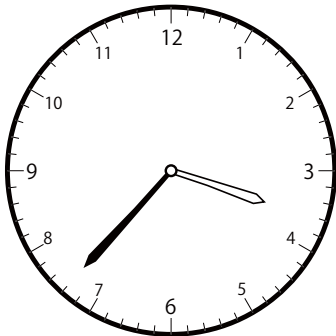


()




()

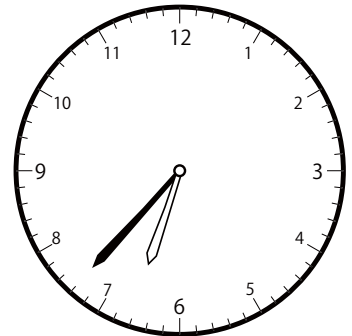
③ 6時^じ37分^{ふん}の時計^{とけい}を見つけよう



()




()

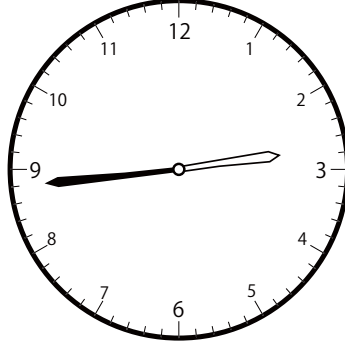


()


① 1時^じ 44分^{ふん}の時計^{とけい}を見つけよう



()




()




()


② 1時^じ 41分^{ふん}の時計^{とけい}を見つけよう



()




()




()


③ 3時^じ 52分^{ふん}の時計^{とけい}を見つけよう



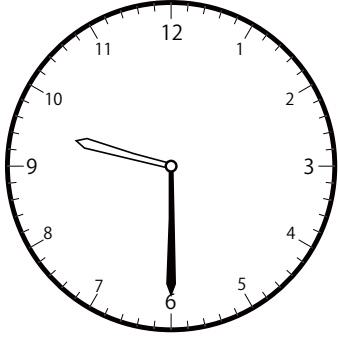
()



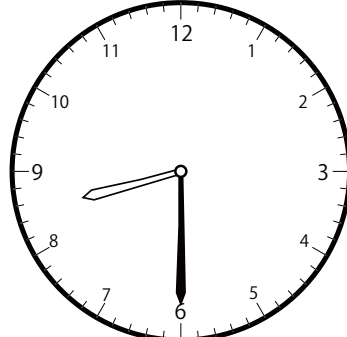
()



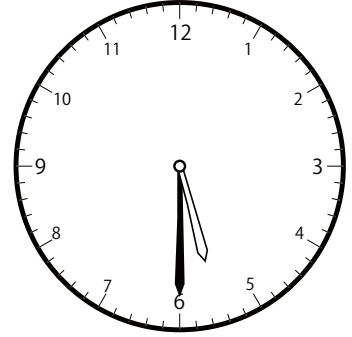
()

〇〇時^じ | 分^{ふん} 単位の^{たんい} 時計^{とけい} を見^み つけよう【E2】問題^{もんだい} と同^{おな} じ時^じ 間^{かん} の時^{とけい} 計^み を見^み つけ^て () に〇を^{つけ} まし^{ょう} 。① 8時^じ 30分^{ふん} の時^{とけい} 計^み を見^み つけよう

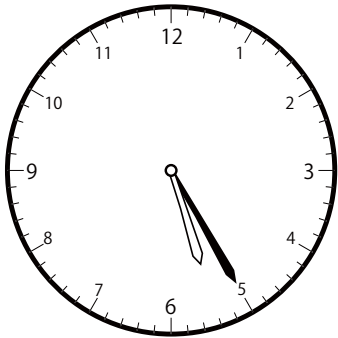
()




()



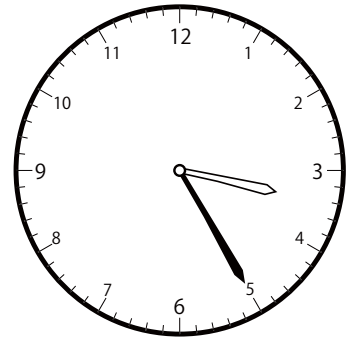
()

② 3時^じ 25分^{ふん} の時^{とけい} 計^み を見^み つけよう

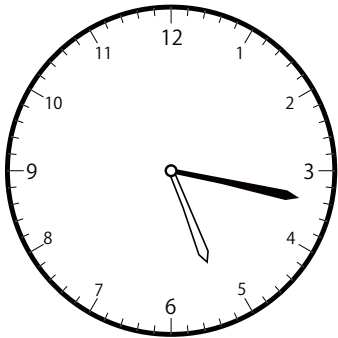
()




()



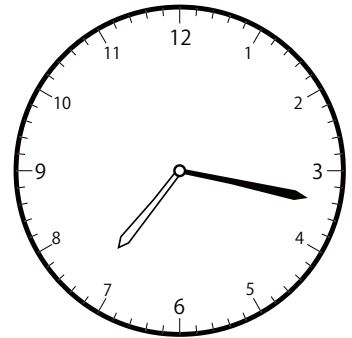
()

③ 7時^じ 17分^{ふん} の時^{とけい} 計^み を見^み つけよう

()



()



()