



〇〇時^じ1分^{ふん}単位^{たんい}の時計^{とけい}を見つけよう【E1】

問題^{もんだい}と同じ時間^{おなじかん}の時計^{とけい}を見つけ^みて()に〇をつけましよう。

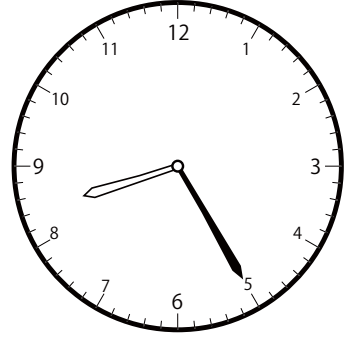
① 8時^じ25分^{ふん}の時計^{とけい}を見つけよう



()

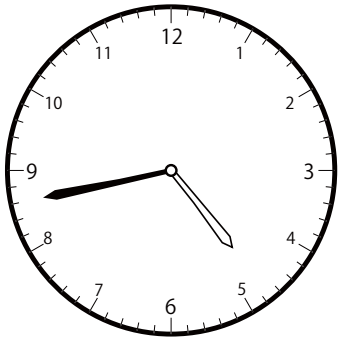


()




()


② 4時^じ43分^{ふん}の時計^{とけい}を見つけよう



()




()




()


③ 11時^じ29分^{ふん}の時計^{とけい}を見つけよう



()



()




()

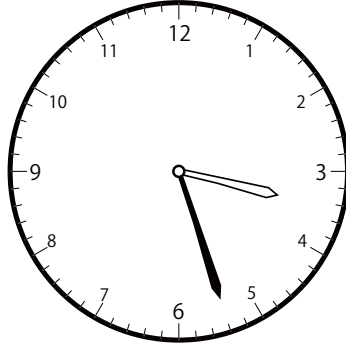
〇〇時^じ1分^{ふん}単位^{たんい}の時計^{とけい}を見つけよう【E1】

問題^{もんだい}と同じ時間^{おなじかん}の時計^{とけい}を見つけて()に〇をつけましょう。


① 1時^じ27分^{ふん}の時計^{とけい}を見つけよう



()




()

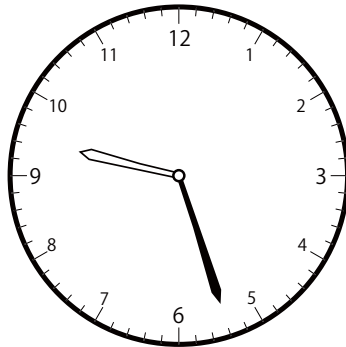


()

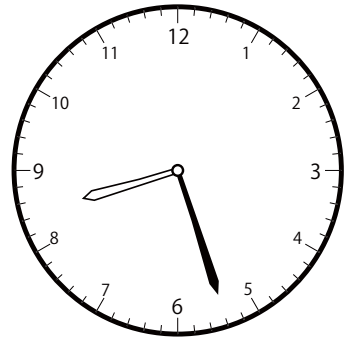
② 9時^じ27分^{ふん}の時計^{とけい}を見つけよう



()




()




()

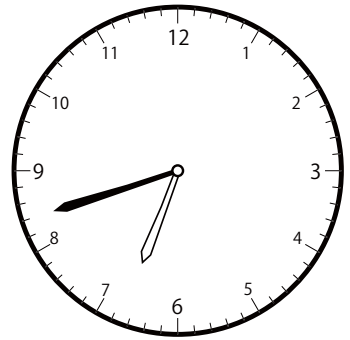
③ 7時^じ42分^{ふん}の時計^{とけい}を見つけよう



()



()




()


〇〇時^じ 1分^{ふん} 単位の時計^{とけい}を見つけよう【E1】

問題^{もんだい}と同じ時間^{おなじかん}の時計^{とけい}を見つけて()に〇をつけましょう。


① 9時^じ 4分^{ふん} の時計^{とけい}を見つけよう



()




()

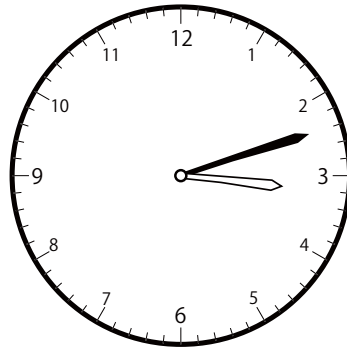


()


② 1時^じ 12分^{ふん} の時計^{とけい}を見つけよう



()

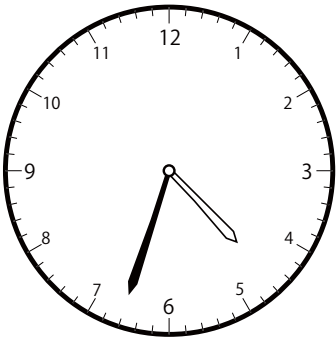


()




()

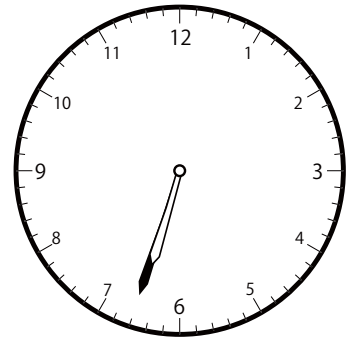
③ 6時^じ 33分^{ふん} の時計^{とけい}を見つけよう



()

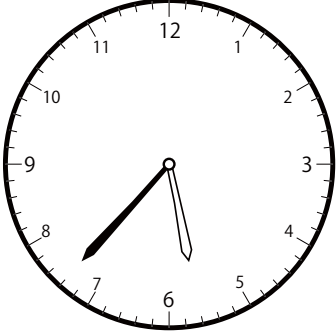


()




()

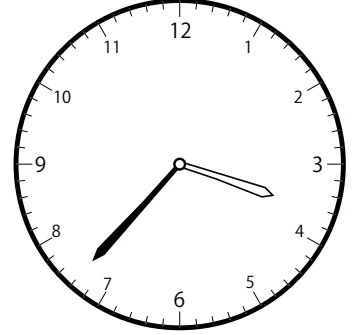
① 5時^じ37分^{ふん}の時計^{とけい}を見つけよう



()




()

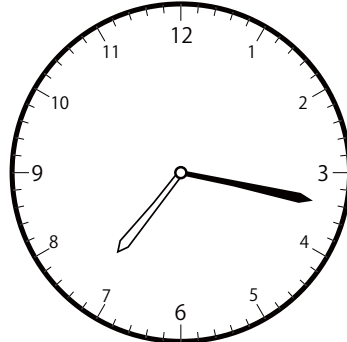


()


② 10時^じ17分^{ふん}の時計^{とけい}を見つけよう



()




()




()


③ 5時^じ50分^{ふん}の時計^{とけい}を見つけよう



()



()

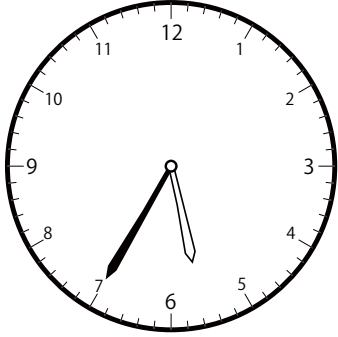


()


じ ふん たん い とけい み
〇〇時 1 分 単位の時計を見つけよう【E1】

もんだい おな じかん とけい み
問題と同じ時間の時計を見つけて()に○をつけましょう。

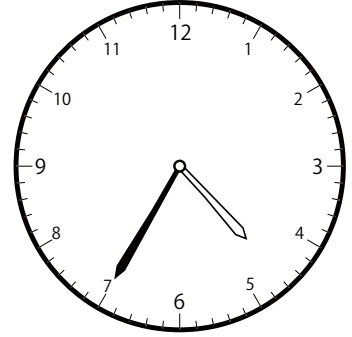
① 5 時 35 分の時計を見つけよう



()

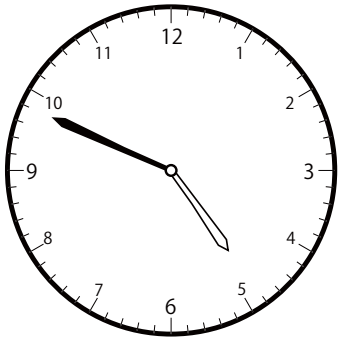


()




()

② 1 時 49 分の時計を見つけよう



()

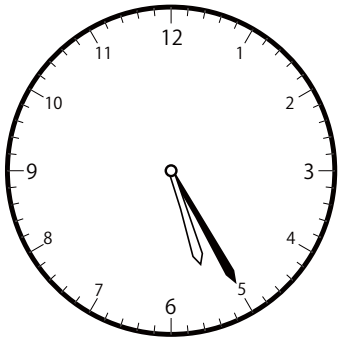


()

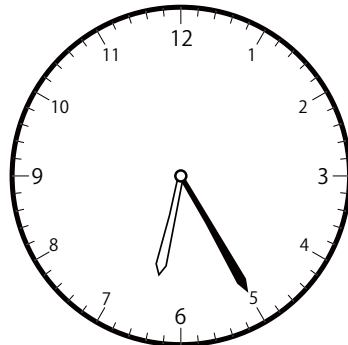


()

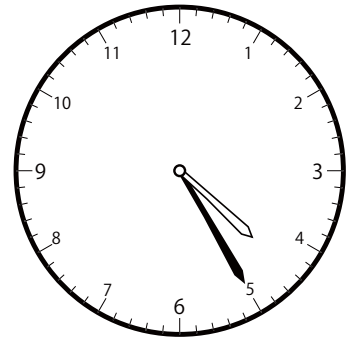
③ 5 時 25 分の時計を見つけよう



()



()




()

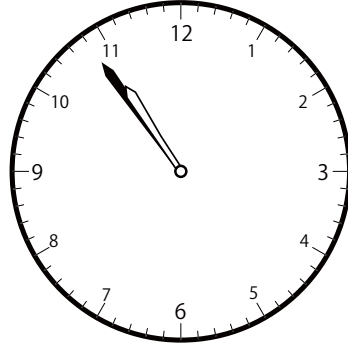
〇〇時^じ1分^{ふん}単位の時計^{とけい}を見つけよう【E1】

問題^{もんだい}と同じ時間^{おなじかん}の時計^{とけい}を見つけて()に〇をつけましょう。


① 7時^じ54分^{ふん}の時計^{とけい}を見つけよう



()

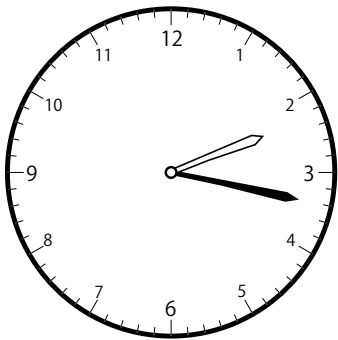


()

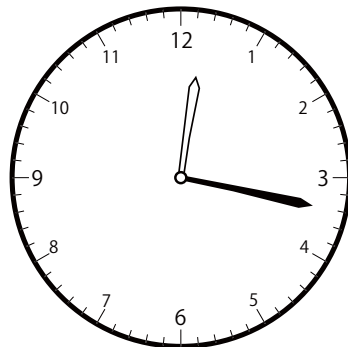


()

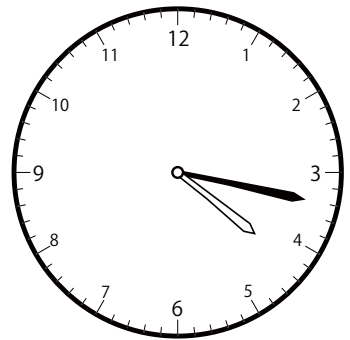
② 2時^じ17分^{ふん}の時計^{とけい}を見つけよう



()




()




()


③ 5時^じ51分^{ふん}の時計^{とけい}を見つけよう



()



()




()


〇〇時^じ1分^{ふん}単位^{たんい}の時計^{とけい}を見つけよう【E1】

問題^{もんだい}と同じ時間^{おなじかん}の時計^{とけい}を見つけ^みて()に〇をつけましょう。


① 12時^じ56分^{ふん}の時計^{とけい}を見つけよう



()




()

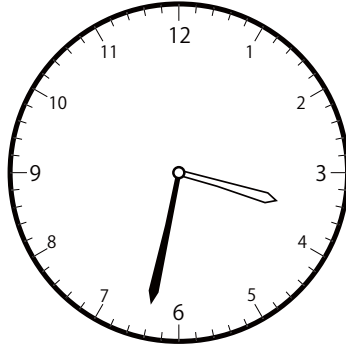


()

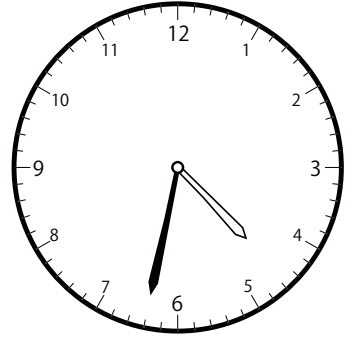
② 3時^じ32分^{ふん}の時計^{とけい}を見つけよう



()




()




()


③ 9時^じ5分^{ふん}の時計^{とけい}を見つけよう




()




()




()

〇〇時^じ | 分^{ふん} 単位の^{たんい} 時計^{とけい} を見^み つけよう【E1】問題^{もんだい} と同^{おな} じ時^じ 間^{かん} の時^{とけい} 計^み を見^み つけ^て () に〇を^{つけ} まし^{ょう} 。① 8時^じ 31分^{ふん} の時^{とけい} 計^み を見^み つけよう

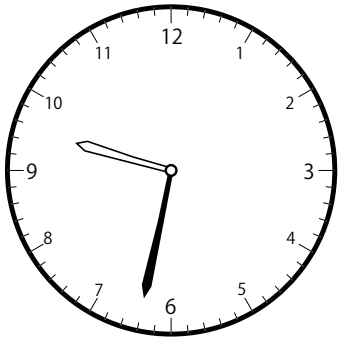
()




()




()

② 10時^じ 32分^{ふん} の時^{とけい} 計^み を見^み つけよう

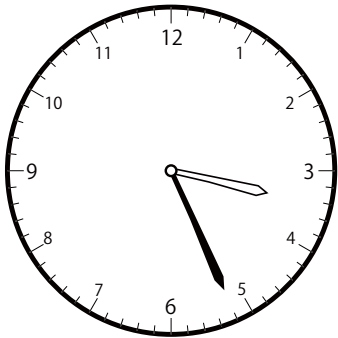
()




()



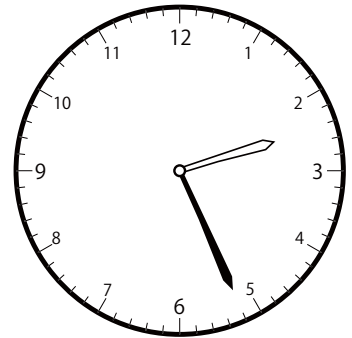
()

③ 3時^じ 26分^{ふん} の時^{とけい} 計^み を見^み つけよう


()




()




()

〇〇時^じ1分^{ふん}単位の時計^{とけい}を見つけよう【E1】問題^{もんだい}と同じ時間^{おなじかん}の時計^{とけい}を見つけて()に〇をつけましょう。① 11時^じ37分^{ふん}の時計^{とけい}を見つけよう


()




()



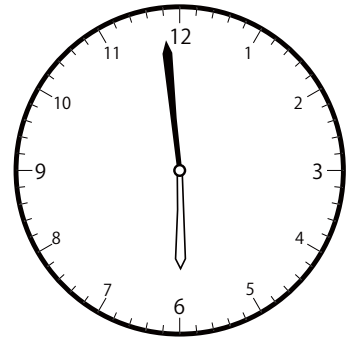
()

② 6時^じ59分^{ふん}の時計^{とけい}を見つけよう

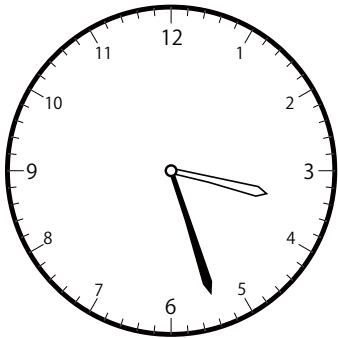
()



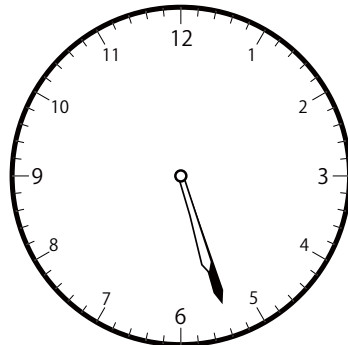
()



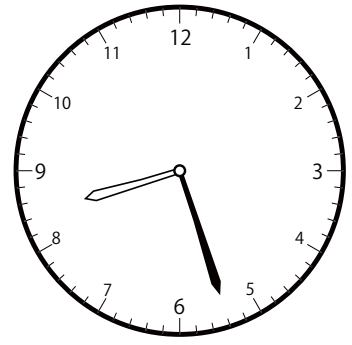
()

③ 5時^じ27分^{ふん}の時計^{とけい}を見つけよう

()



()




()


〇〇時^じ1分^{ふん}単位^{たんい}の時計^{とけい}を見つけよう【E1】

問題^{もんだい}と同じ時間^{おなじかん}の時計^{とけい}を見つけ^みて()に〇をつけましょう。


① 4時^じ6分^{ふん}の時計^{とけい}を見つけよう



()




()

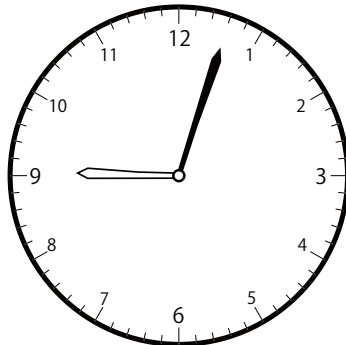


()


② 8時^じ3分^{ふん}の時計^{とけい}を見つけよう



()




()

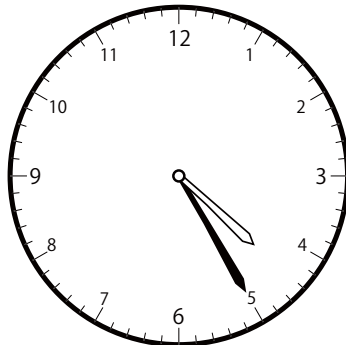


()


③ 2時^じ25分^{ふん}の時計^{とけい}を見つけよう



()



()

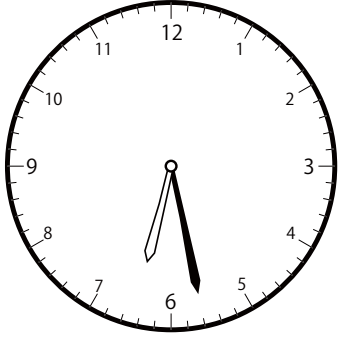


()


〇〇時^じ1分^{ふん}単位の時計^{たにい}を見つけよう【E1】

問題^{もんだい}と同じ時間^{おなじかん}の時計^{とけい}を見つけて()に〇をつけましょう。


① 4時^じ28分^{ふん}の時計^{とけい}を見つけよう



()




()




()


② 10時^じ13分^{ふん}の時計^{とけい}を見つけよう



()




()




()


③ 9時^じ39分^{ふん}の時計^{とけい}を見つけよう




()




()




()

〇〇時^じ | 分^{ぶん} 単位の時計^{とけい}を見つけよう【E1】問題^{もんだい}と同じ時間^{おなじかん}の時計^{とけい}を見つけて()に〇をつけましょう。① 1時^じ 47分^{ぶん}の時計^{とけい}を見つけよう

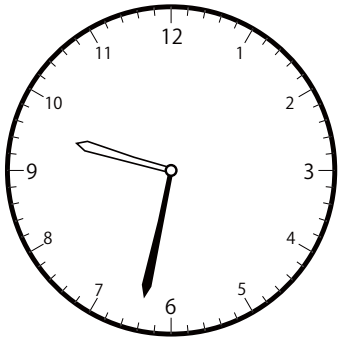
()




()



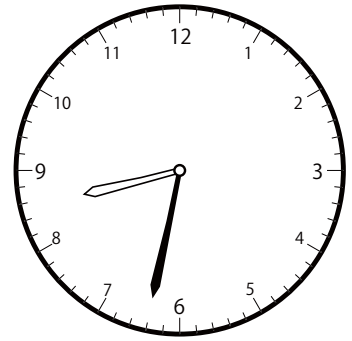
()

② 8時^じ 32分^{ぶん}の時計^{とけい}を見つけよう


()



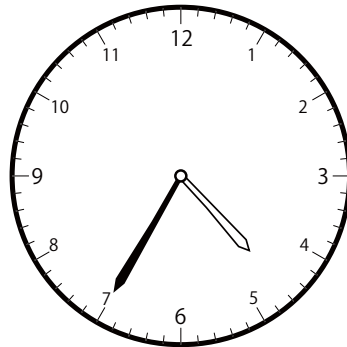
()



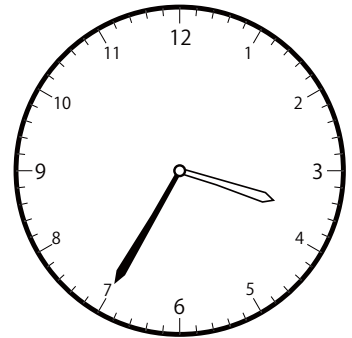
()

③ 3時^じ 35分^{ぶん}の時計^{とけい}を見つけよう

()



()




()


じ ふん たん い とけい み
〇〇時 1 分 単位の時計を見つけよう【E1】

もんだい おな じかん とけい み
問題と同じ時間の時計を見つけて()に○をつけましょう。

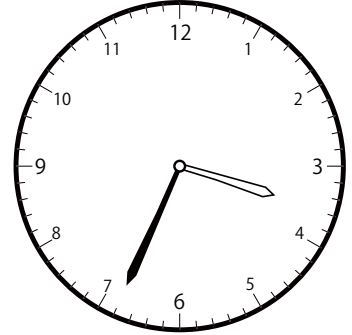
① 6 時 34 分の時計を見つけよう



()

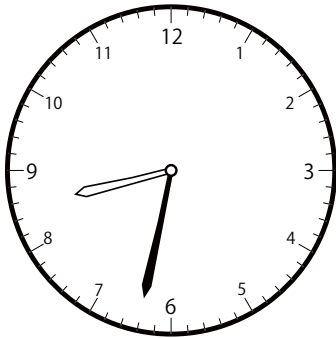


()

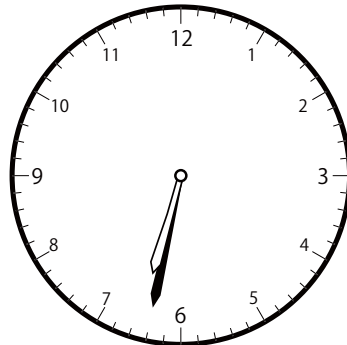


()

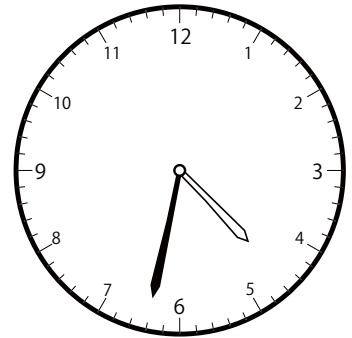
② 6 時 32 分の時計を見つけよう



()




()

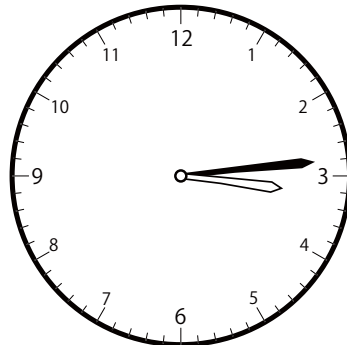


()


③ 12 時 14 分の時計を見つけよう



()



()

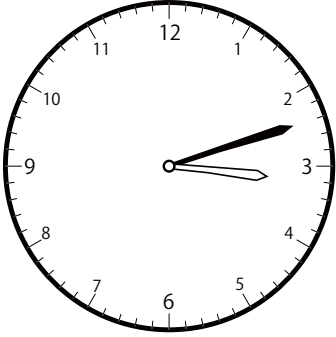


()

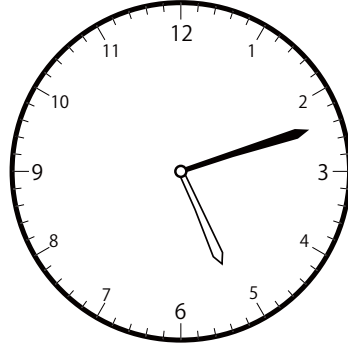
じ ふん たん い とけい み
〇〇時 1 分 単位の時計を見つけよう【E1】

もんだい おな じかん とけい み
問題と同じ時間の時計を見つけて()に○をつけましょう。


① 5 時 12 分の時計を見つけよう



()




()




()


② 8 時 11 分の時計を見つけよう



()




()




()

③ 3 時 51 分の時計を見つけよう



()



()




()

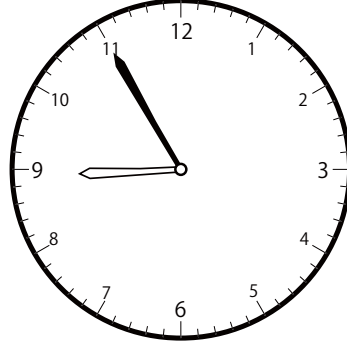
〇〇時^じ1分^{ふん}単位^{たんい}の時計^{とけい}を見つけよう【E1】

問題^{もんだい}と同じ時間^{おなじかん}の時計^{とけい}を見つけ^みて()に〇をつけましょう。


① 5時^じ55分^{ふん}の時計^{とけい}を見つけよう



()




()

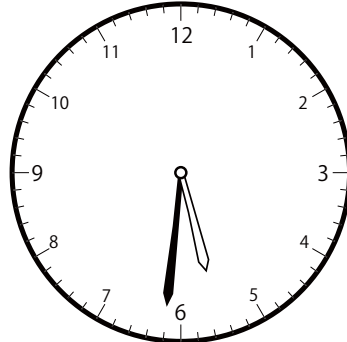


()

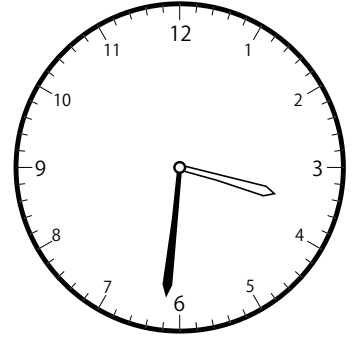
② 4時^じ31分^{ふん}の時計^{とけい}を見つけよう



()




()




()


③ 10時^じ53分^{ふん}の時計^{とけい}を見つけよう



()



()




()


〇〇時^じ1分^{ふん}単位^{たんい}の時計^{とけい}を見つけよう【E1】

問題^{もんだい}と同じ時間^{おなじかん}の時計^{とけい}を見つけ^みて()に〇をつけましよう。


① 6時^じ7分^{ふん}の時計^{とけい}を見つけよう



()




()

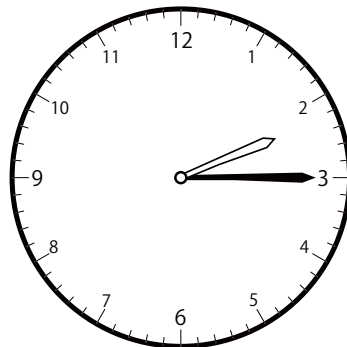


()

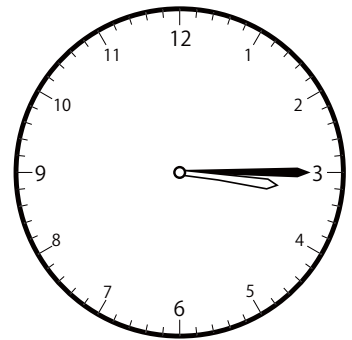
② 2時^じ15分^{ふん}の時計^{とけい}を見つけよう



()




()




()


③ 12時^じ47分^{ふん}の時計^{とけい}を見つけよう



()



()



()