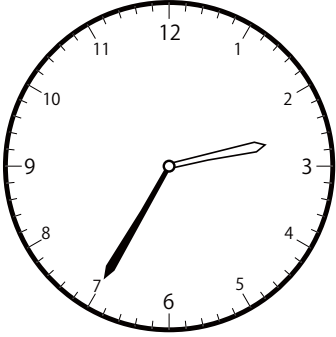



〇〇時<sup>じ</sup>5分<sup>ふん</sup>単位の<sup>たんい</sup>時計<sup>とけい</sup>を見つけよう【D2】  
問題<sup>もんだい</sup>と同じ時間<sup>おなじかん</sup>の時計<sup>とけい</sup>を見つけ( )に〇をつけましょう。


① 1時<sup>じ</sup>0分<sup>ふん</sup>の時計<sup>とけい</sup>を見つけよう



( )

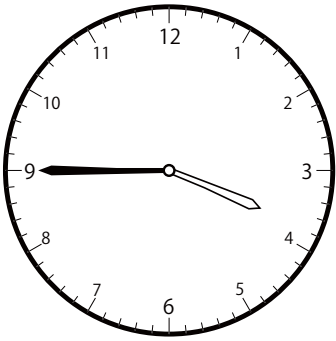


( )

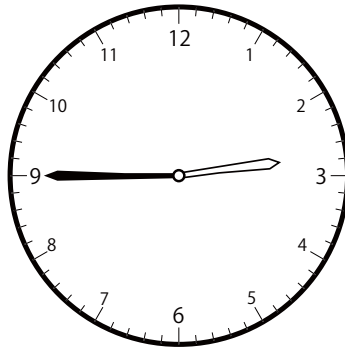


( )

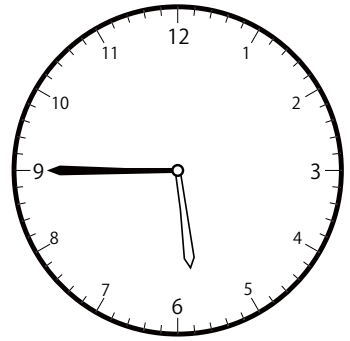
② 3時<sup>じ</sup>45分<sup>ふん</sup>の時計<sup>とけい</sup>を見つけよう



( )




( )

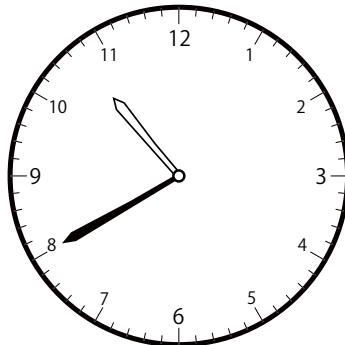


( )

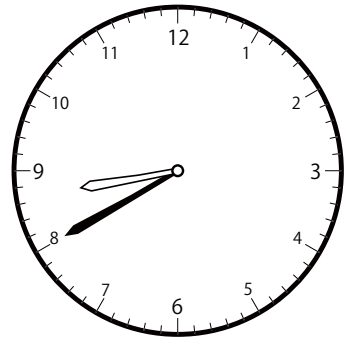
③ 8時<sup>じ</sup>40分<sup>ふん</sup>の時計<sup>とけい</sup>を見つけよう



( )




( )




( )

〇〇時<sup>じ</sup>5分<sup>ぶん</sup>単<sup>たん</sup>位<sup>い</sup>の時<sup>と</sup>計<sup>けい</sup>を見<sup>み</sup>つけよう【D2】  
問<sup>もん</sup>題<sup>だい</sup>と<sup>おな</sup>じ<sup>じ</sup>時<sup>じ</sup>間<sup>かん</sup>の時<sup>と</sup>計<sup>けい</sup>を見<sup>み</sup>つけ<sup>て</sup>( )に〇をつけましょ<sup>う</sup>。


① 11時<sup>じ</sup> 0分<sup>ぶん</sup>の時<sup>と</sup>計<sup>けい</sup>を見<sup>み</sup>つけよう



( )

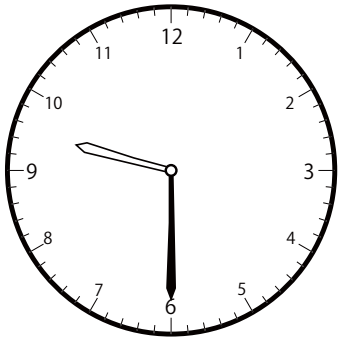


( )

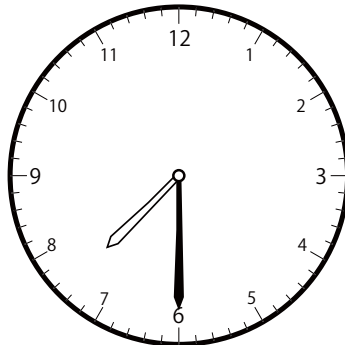


( )

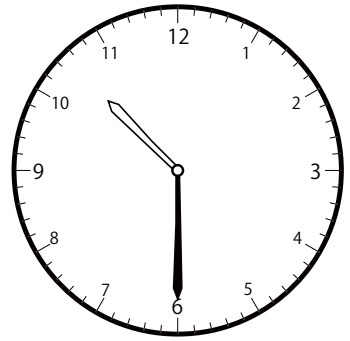
② 9時<sup>じ</sup> 30分<sup>ぶん</sup>の時<sup>と</sup>計<sup>けい</sup>を見<sup>み</sup>つけよう



( )




( )



( )


③ 2時<sup>じ</sup> 0分<sup>ぶん</sup>の時<sup>と</sup>計<sup>けい</sup>を見<sup>み</sup>つけよう



( )




( )




( )

〇〇時<sup>じ</sup>5分<sup>ふん</sup>単位<sup>たんい</sup>の時計<sup>とけい</sup>を見つけよう【D2】  
 問題<sup>もんだい</sup>と同じ時間<sup>おなじかん</sup>の時計<sup>とけい</sup>を見つけ( )に〇をつけましょう。


① 11時<sup>じ</sup>20分<sup>ふん</sup>の時計<sup>とけい</sup>を見つけよう



( )




( )

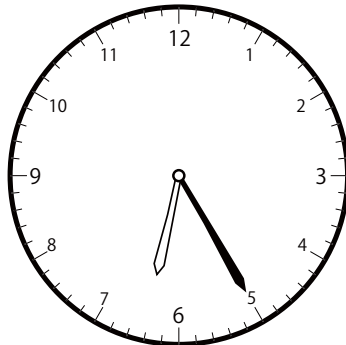


( )


② 9時<sup>じ</sup>25分<sup>ふん</sup>の時計<sup>とけい</sup>を見つけよう



( )




( )




( )


③ 9時<sup>じ</sup>5分<sup>ふん</sup>の時計<sup>とけい</sup>を見つけよう



( )




( )



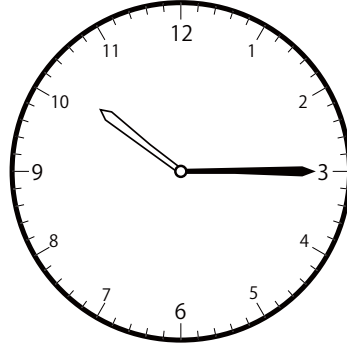
( )

〇〇時<sup>じ</sup>5分<sup>ぶん</sup>単位<sup>たんい</sup>の時計<sup>とけい</sup>を見つけよう【D2】  
問題<sup>もんだい</sup>と同じ時間<sup>おなじかん</sup>の時計<sup>とけい</sup>を見つけ<sup>み</sup>て( )に〇をつけましよう。

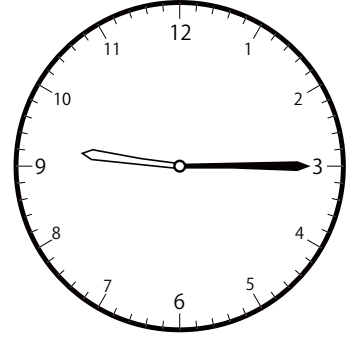
① 10時<sup>じ</sup> 15分<sup>ぶん</sup>の時計<sup>とけい</sup>を見つけよう



( )




( )

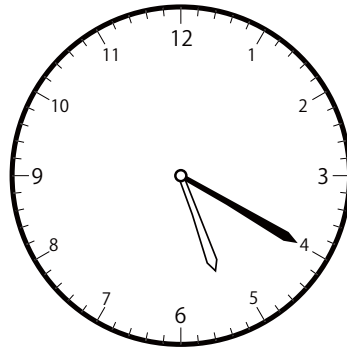


( )

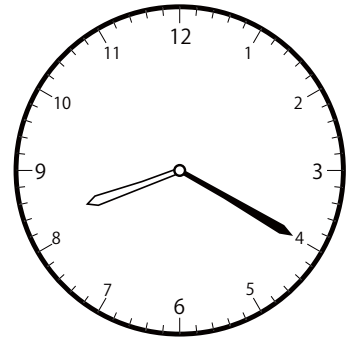
② 8時<sup>じ</sup> 20分<sup>ぶん</sup>の時計<sup>とけい</sup>を見つけよう



( )

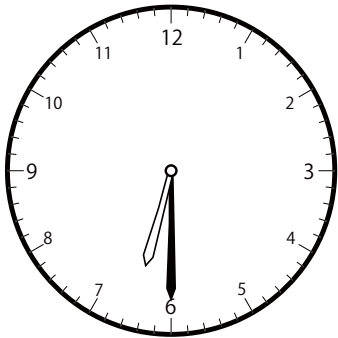


( )

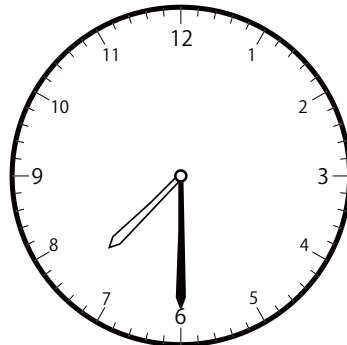


( )

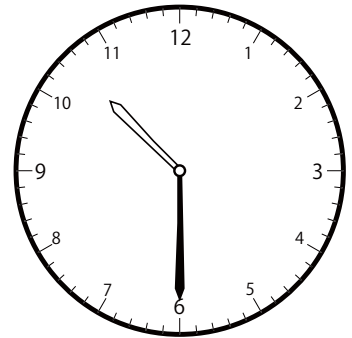
③ 7時<sup>じ</sup> 30分<sup>ぶん</sup>の時計<sup>とけい</sup>を見つけよう



( )




( )



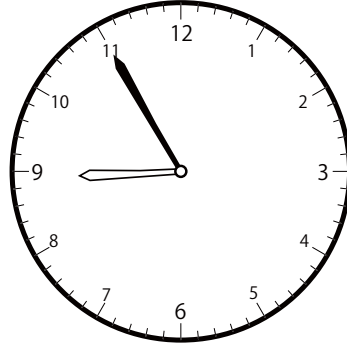
( )

〇〇時<sup>じ</sup>5分<sup>ぶん</sup>単<sup>たん</sup>位<sup>い</sup>の時<sup>と</sup>計<sup>けい</sup>を見<sup>み</sup>つけよう【D2】  
問<sup>もん</sup>題<sup>だい</sup>と<sup>おな</sup>じ<sup>じ</sup>時<sup>じ</sup>間<sup>かん</sup>の時<sup>と</sup>計<sup>けい</sup>を見<sup>み</sup>つけ<sup>て</sup>( )に〇をつけましょ<sup>う</sup>。


① 8時<sup>じ</sup>55分<sup>ぶん</sup>の時<sup>と</sup>計<sup>けい</sup>を見<sup>み</sup>つけよう



( )

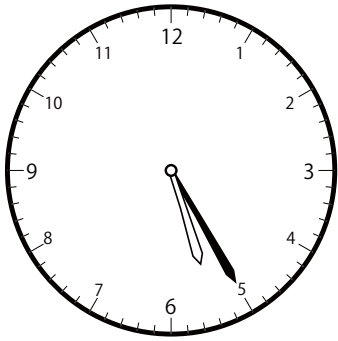


( )

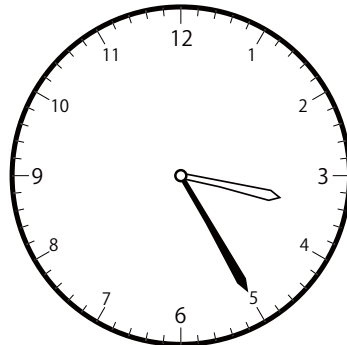


( )

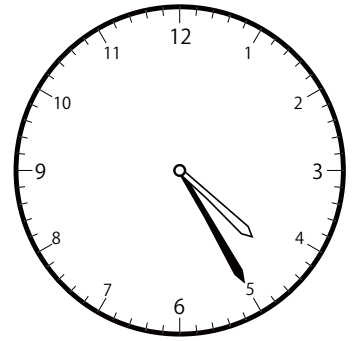
② 4時<sup>じ</sup>25分<sup>ぶん</sup>の時<sup>と</sup>計<sup>けい</sup>を見<sup>み</sup>つけよう



( )




( )

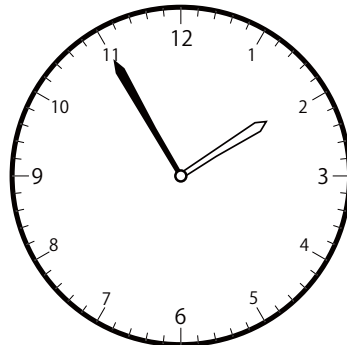


( )

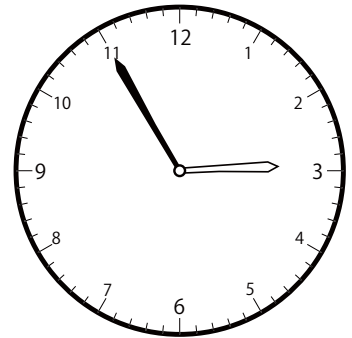
③ 1時<sup>じ</sup>55分<sup>ぶん</sup>の時<sup>と</sup>計<sup>けい</sup>を見<sup>み</sup>つけよう



( )




( )




( )

〇〇時<sup>じ</sup>5分<sup>ふん</sup>単位<sup>たんい</sup>の時計<sup>とけい</sup>を見つけよう【D2】  
 問題<sup>もんだい</sup>と同じ時間<sup>おなじかん</sup>の時計<sup>とけい</sup>を見つけ<sup>み</sup>て( )に〇をつけましよう。


① 6時<sup>じ</sup>10分<sup>ふん</sup>の時計<sup>とけい</sup>を見つけよう



( )

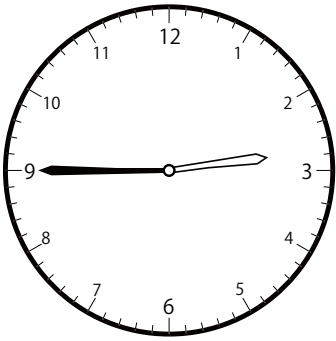


( )

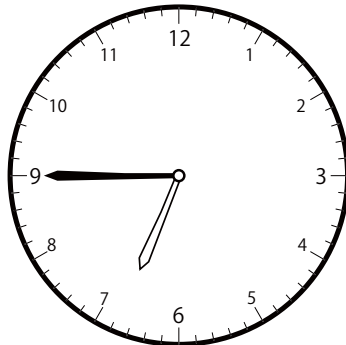


( )

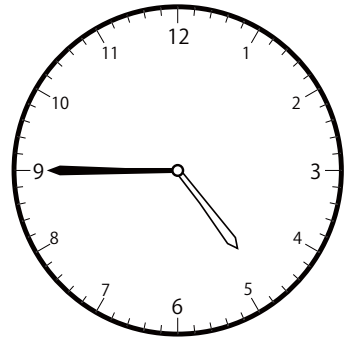
② 4時<sup>じ</sup>45分<sup>ふん</sup>の時計<sup>とけい</sup>を見つけよう



( )




( )




( )


③ 10時<sup>じ</sup>0分<sup>ふん</sup>の時計<sup>とけい</sup>を見つけよう



( )



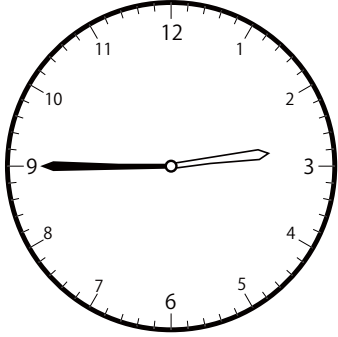
( )



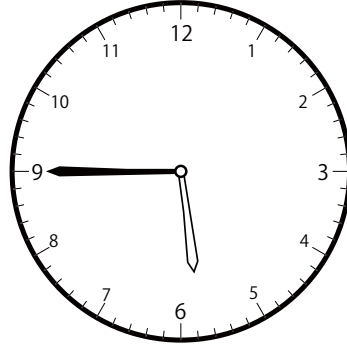
( )

〇〇時<sup>じ</sup>5分<sup>ふん</sup>単位の<sup>たんい</sup>時計<sup>とけい</sup>を見つけよう【D2】  
問題<sup>もんだい</sup>と同じ時間<sup>おなじかん</sup>の時計<sup>とけい</sup>を見つけ<sup>み</sup>て( )に〇をつけましよう。

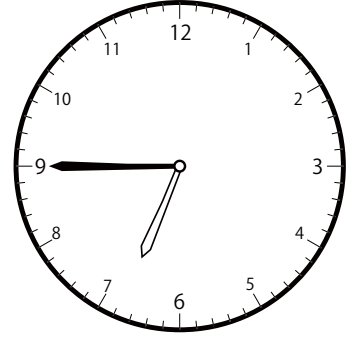
① 5時<sup>じ</sup>45分<sup>ふん</sup>の時計<sup>とけい</sup>を見つけよう



( )




( )




( )


② 4時<sup>じ</sup>5分<sup>ふん</sup>の時計<sup>とけい</sup>を見つけよう



( )




( )

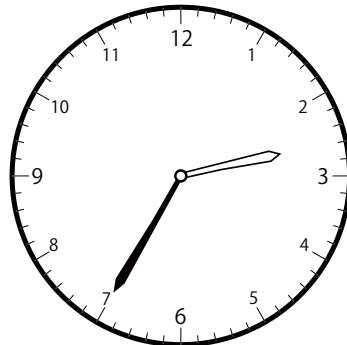


( )

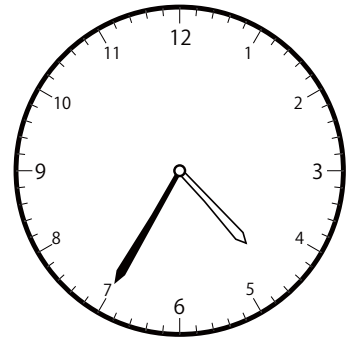
③ 2時<sup>じ</sup>35分<sup>ふん</sup>の時計<sup>とけい</sup>を見つけよう



( )




( )



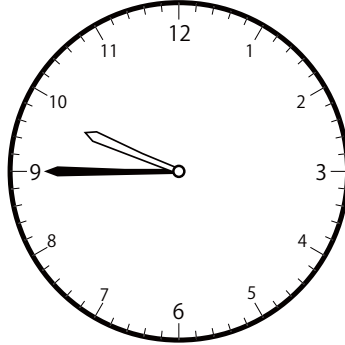
( )

〇〇時<sup>じ</sup>5分<sup>ふん</sup>単位<sup>たんい</sup>の時計<sup>とけい</sup>を見つけよう【D2】  
問題<sup>もんだい</sup>と同じ時間<sup>おなじかん</sup>の時計<sup>とけい</sup>を見つけ( )に〇をつけましょう。


① 7時<sup>じ</sup>45分<sup>ふん</sup>の時計<sup>とけい</sup>を見つけよう



( )




( )

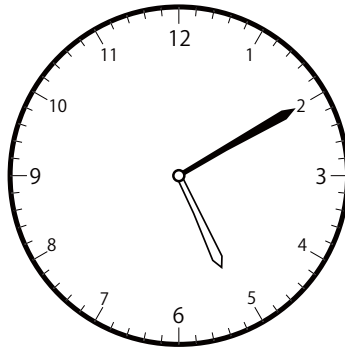


( )


② 5時<sup>じ</sup>10分<sup>ふん</sup>の時計<sup>とけい</sup>を見つけよう



( )




( )

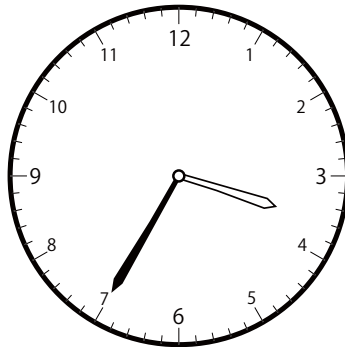


( )


③ 12時<sup>じ</sup>35分<sup>ふん</sup>の時計<sup>とけい</sup>を見つけよう



( )



( )




( )

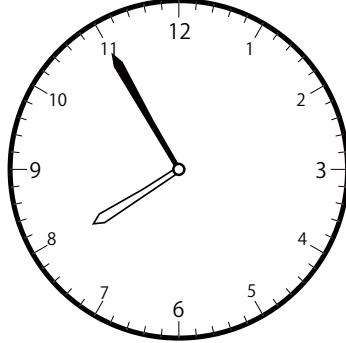


〇〇時5分単位の時計を見つけよう【D2】  
問題と同じ時間の時計を見つけて( )に○をつけましょう。


① 7時55分の時計を見つけよう



( )




( )




( )


② 1時10分の時計を見つけよう



( )




( )




( )


③ 1時5分の時計を見つけよう



( )




( )



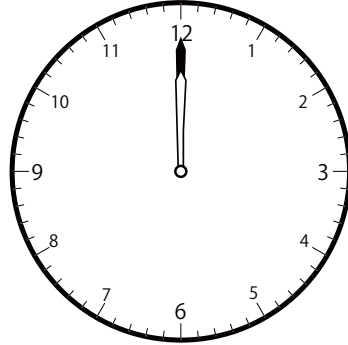
( )

〇〇時<sup>じ</sup>5分<sup>ぶん</sup>単位<sup>たんい</sup>の時計<sup>とけい</sup>を見つけよう【D2】  
問題<sup>もんだい</sup>と同じ時間<sup>おなじかん</sup>の時計<sup>とけい</sup>を見つけ( )に〇をつけましょう。


① 12時<sup>じ</sup> 0分<sup>ぶん</sup>の時計<sup>とけい</sup>を見つけよう



( )

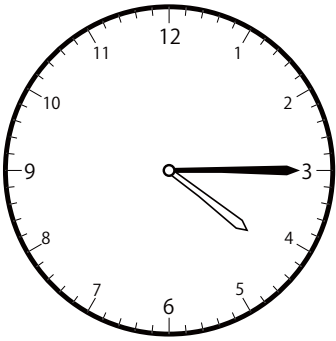


( )




( )

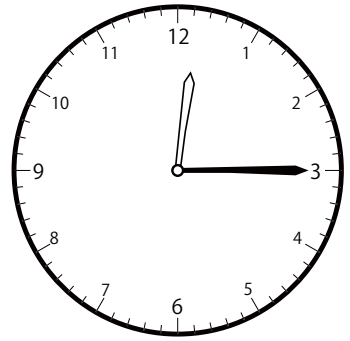
② 1時<sup>じ</sup> 15分<sup>ぶん</sup>の時計<sup>とけい</sup>を見つけよう



( )

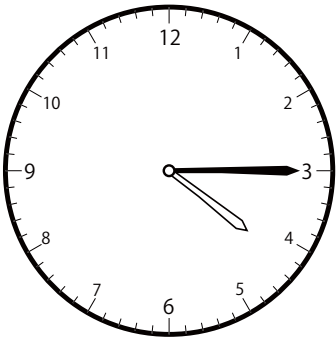


( )

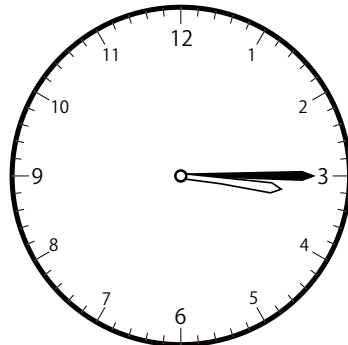


( )

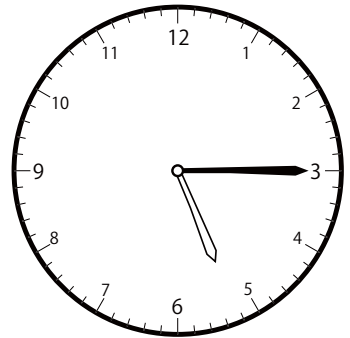
③ 4時<sup>じ</sup> 15分<sup>ぶん</sup>の時計<sup>とけい</sup>を見つけよう



( )




( )



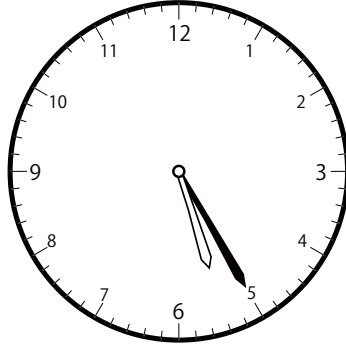
( )

〇〇時<sup>じ</sup>5分<sup>ふん</sup>単位<sup>たんい</sup>の時計<sup>とけい</sup>を見つけよう【D2】  
 問題<sup>もんだい</sup>と同じ時間<sup>おなじかん</sup>の時計<sup>とけい</sup>を見つけ<sup>み</sup>て( )に〇をつけましよう。

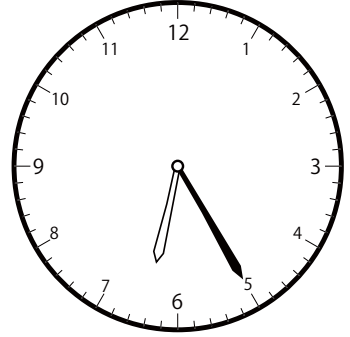
① 6時<sup>じ</sup>25分<sup>ふん</sup>の時計<sup>とけい</sup>を見つけよう



( )




( )




( )


② 12時<sup>じ</sup>55分<sup>ふん</sup>の時計<sup>とけい</sup>を見つけよう



( )

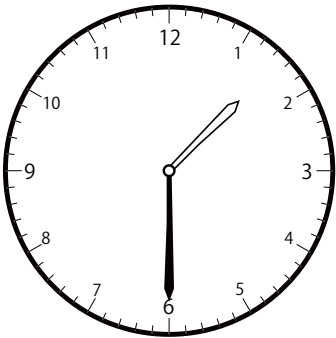


( )




( )

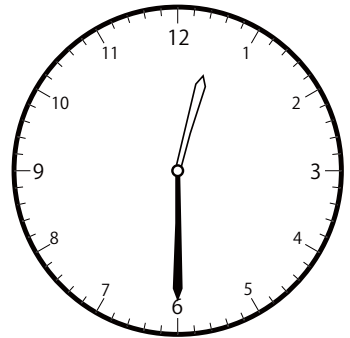
③ 12時<sup>じ</sup>30分<sup>ふん</sup>の時計<sup>とけい</sup>を見つけよう



( )



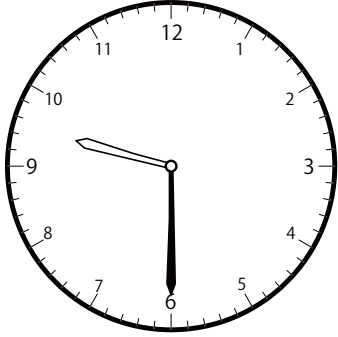
( )



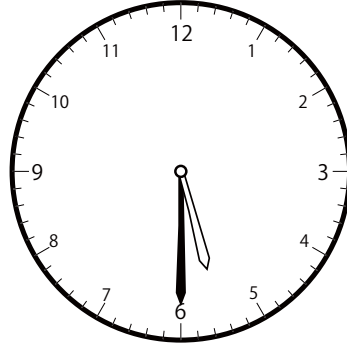
( )

〇〇時<sup>じ</sup>5分<sup>ふん</sup>単位の<sup>たんい</sup>時計<sup>とけい</sup>を見つけよう【D2】  
問題<sup>もんだい</sup>と同じ時間<sup>おなじかん</sup>の時計<sup>とけい</sup>を見つけ<sup>み</sup>て( )に〇をつけましよう。

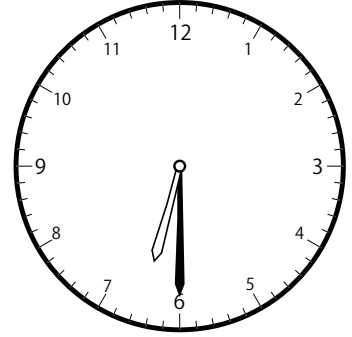
① 6時<sup>じ</sup>30分<sup>ふん</sup>の時計<sup>とけい</sup>を見つけよう



( )




( )

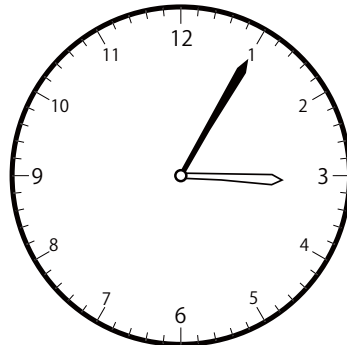


( )


② 3時<sup>じ</sup>5分<sup>ふん</sup>の時計<sup>とけい</sup>を見つけよう



( )




( )




( )


③ 7時<sup>じ</sup>0分<sup>ふん</sup>の時計<sup>とけい</sup>を見つけよう



( )




( )



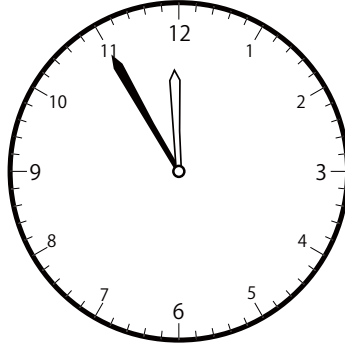
( )

〇〇時<sup>じ</sup>5分<sup>ぶん</sup>単位<sup>たんい</sup>の時計<sup>とけい</sup>を見つけよう【D2】  
問題<sup>もんだい</sup>と同じ時間<sup>おなじかん</sup>の時計<sup>とけい</sup>を見つけ<sup>み</sup>て( )に〇をつけましよう。


① 9時<sup>じ</sup>55分<sup>ぶん</sup>の時計<sup>とけい</sup>を見つけよう



( )

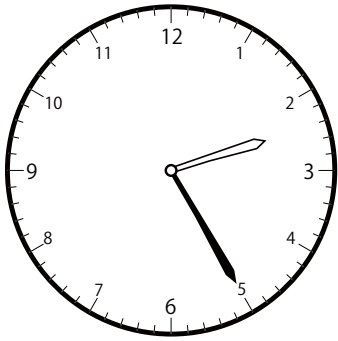


( )

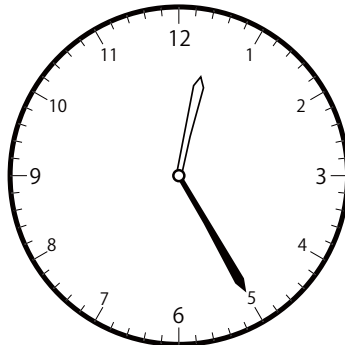


( )


② 12時<sup>じ</sup>25分<sup>ぶん</sup>の時計<sup>とけい</sup>を見つけよう



( )




( )




( )


③ 12時<sup>じ</sup>40分<sup>ぶん</sup>の時計<sup>とけい</sup>を見つけよう



( )




( )



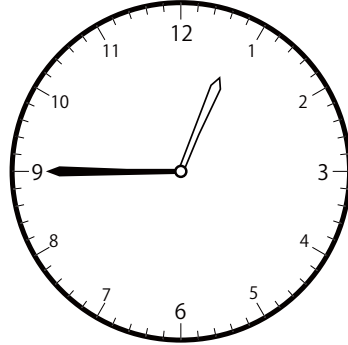
( )

〇〇時<sup>じ</sup>5分<sup>ぶん</sup>単位の<sup>たんい</sup>時計<sup>とけい</sup>を見つけよう【D2】  
問題<sup>もんだい</sup>と同じ<sup>おな</sup>時間<sup>じかん</sup>の時計<sup>とけい</sup>を見つけ<sup>み</sup>て( )に〇をつけ<sup>つけ</sup>ましょう。


① 12時<sup>じ</sup>45分<sup>ぶん</sup>の時計<sup>とけい</sup>を見つけよう



( )




( )




( )


② 8時<sup>じ</sup>0分<sup>ぶん</sup>の時計<sup>とけい</sup>を見つけよう



( )




( )




( )

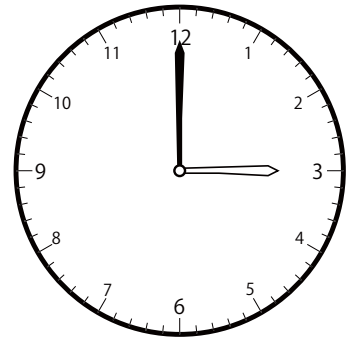
③ 3時<sup>じ</sup>0分<sup>ぶん</sup>の時計<sup>とけい</sup>を見つけよう



( )




( )




( )

〇〇時<sup>じ</sup>5分<sup>ぶん</sup>単位の<sup>たんい</sup>時計<sup>とけい</sup>を見つけよう【D2】  
問題<sup>もんだい</sup>と同じ時間<sup>おなじかん</sup>の時計<sup>とけい</sup>を見つけ<sup>み</sup>て( )に〇をつけましよう。


① 7時<sup>じ</sup>10分<sup>ぶん</sup>の時計<sup>とけい</sup>を見つけよう



( )




( )




( )


② 1時<sup>じ</sup>20分<sup>ぶん</sup>の時計<sup>とけい</sup>を見つけよう



( )




( )

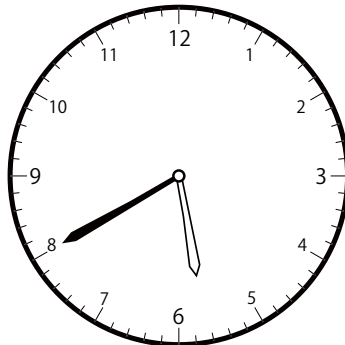


( )


③ 5時<sup>じ</sup>40分<sup>ぶん</sup>の時計<sup>とけい</sup>を見つけよう



( )



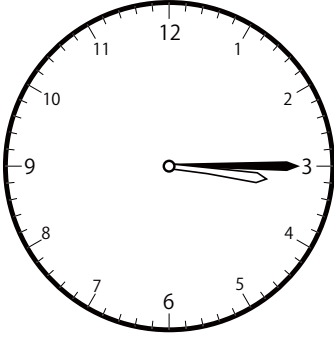
( )



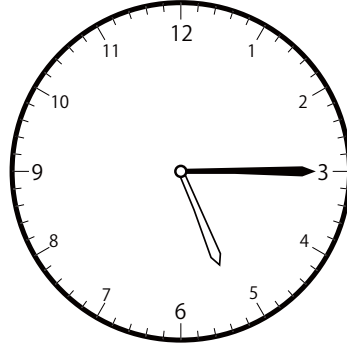
( )

〇〇時<sup>じ</sup>5分<sup>ふん</sup>単位<sup>たんい</sup>の時計<sup>とけい</sup>を見つけよう【D2】  
 問題<sup>もんだい</sup>と同じ時間<sup>おなじかん</sup>の時計<sup>とけい</sup>を見つけて( )に〇をつけましょう。

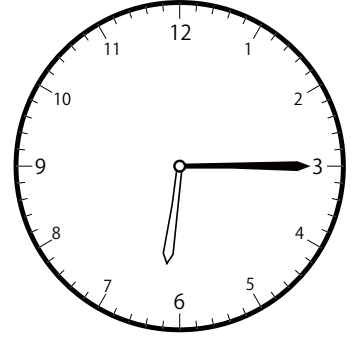
① 5時<sup>じ</sup>15分<sup>ふん</sup>の時計<sup>とけい</sup>を見つけよう



( )




( )




( )

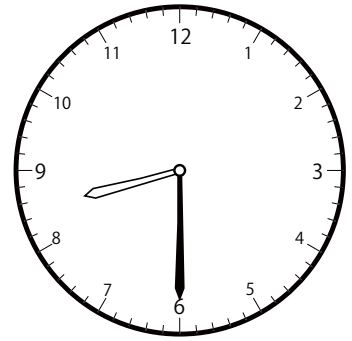
② 10時<sup>じ</sup>30分<sup>ふん</sup>の時計<sup>とけい</sup>を見つけよう



( )




( )




( )


③ 6時<sup>じ</sup>50分<sup>ふん</sup>の時計<sup>とけい</sup>を見つけよう



( )



( )




( )




〇〇時<sup>じ</sup>5分<sup>ぶん</sup>単<sup>たん</sup>位<sup>い</sup>の時<sup>と</sup>計<sup>けい</sup>を見<sup>み</sup>つけよう【D2】  
問<sup>もん</sup>題<sup>だい</sup>と<sup>おな</sup>同<sup>じ</sup>じ<sup>じ</sup>間<sup>かん</sup>の時<sup>と</sup>計<sup>けい</sup>を見<sup>み</sup>つけ<sup>て</sup>( )に〇をつけま<sup>し</sup>ょう。


① 10時<sup>じ</sup> 40分<sup>ぶん</sup>の時<sup>と</sup>計<sup>けい</sup>を見<sup>み</sup>つけよう



( )




( )

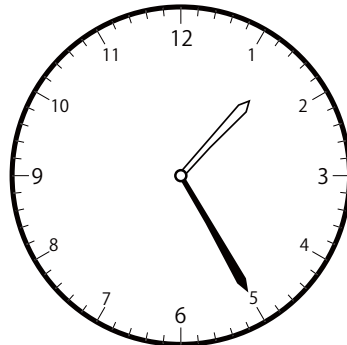


( )


② 11時<sup>じ</sup> 25分<sup>ぶん</sup>の時<sup>と</sup>計<sup>けい</sup>を見<sup>み</sup>つけよう



( )

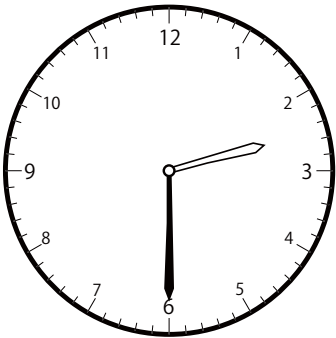


( )

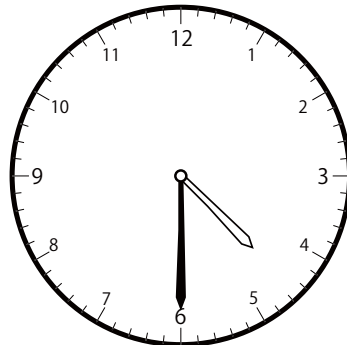


( )

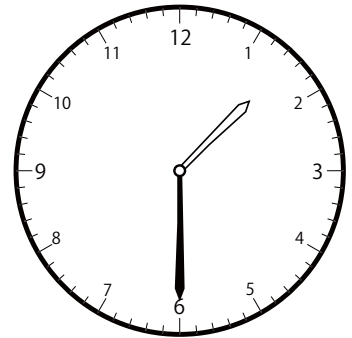
③ 2時<sup>じ</sup> 30分<sup>ぶん</sup>の時<sup>と</sup>計<sup>けい</sup>を見<sup>み</sup>つけよう



( )




( )




( )

〇〇時<sup>じ</sup>5分<sup>ふん</sup>単位の<sup>たんい</sup>時計<sup>とけい</sup>を見つけよう【D2】  
問題<sup>もんだい</sup>と同じ時間<sup>おなじかん</sup>の時計<sup>とけい</sup>を見つけ<sup>み</sup>て( )に〇をつけましよう。


① 12時<sup>じ</sup> 15分<sup>ふん</sup>の時計<sup>とけい</sup>を見つけよう



( )




( )

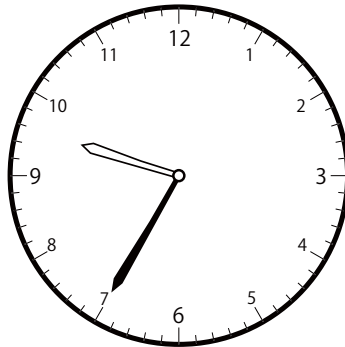


( )

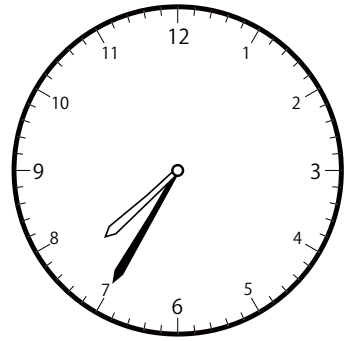
② 8時<sup>じ</sup> 35分<sup>ふん</sup>の時計<sup>とけい</sup>を見つけよう



( )




( )



( )


③ 2時<sup>じ</sup> 5分<sup>ふん</sup>の時計<sup>とけい</sup>を見つけよう



( )




( )



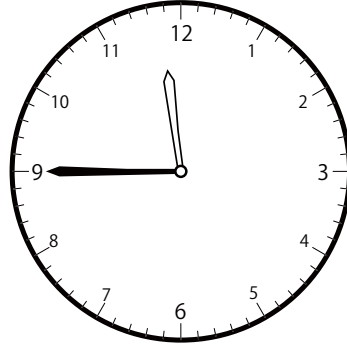
( )

〇〇時<sup>じ</sup>5分<sup>ふん</sup>単位の<sup>たんい</sup>時計<sup>とけい</sup>を見つけよう【D2】  
問題<sup>もんだい</sup>と同じ時間<sup>おなじかん</sup>の時計<sup>とけい</sup>を見つけ<sup>み</sup>て( )に〇をつけましよう。

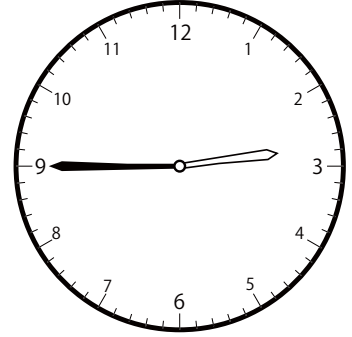
① 11時<sup>じ</sup>45分<sup>ふん</sup>の時計<sup>とけい</sup>を見つけよう



( )

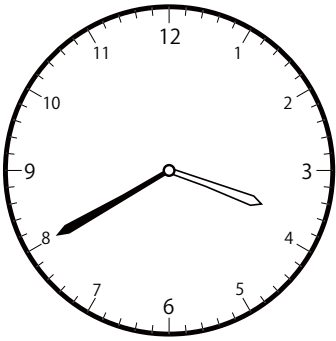


( )




( )

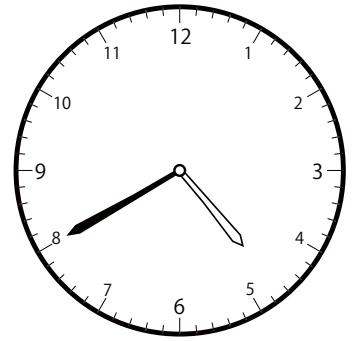
② 3時<sup>じ</sup>40分<sup>ふん</sup>の時計<sup>とけい</sup>を見つけよう



( )

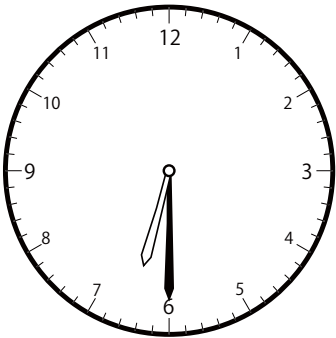


( )

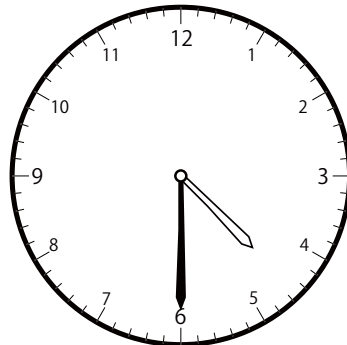


( )

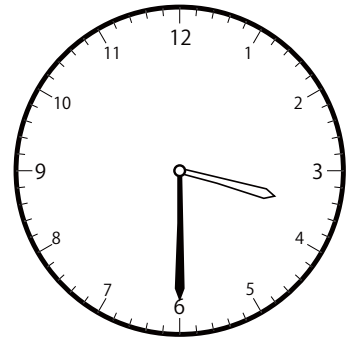
③ 4時<sup>じ</sup>30分<sup>ふん</sup>の時計<sup>とけい</sup>を見つけよう



( )



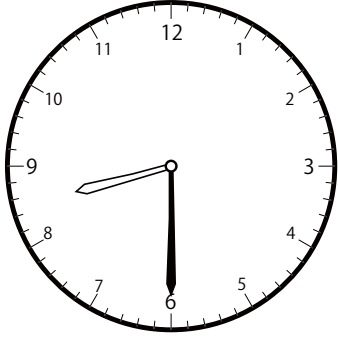
( )




( )

〇〇時<sup>じ</sup>5分<sup>ふん</sup>単位<sup>たんい</sup>の時計<sup>とけい</sup>を見つけよう【D2】  
問題<sup>もんだい</sup>と同じ時間<sup>おなじかん</sup>の時計<sup>とけい</sup>を見つけて( )に〇をつけましょう。

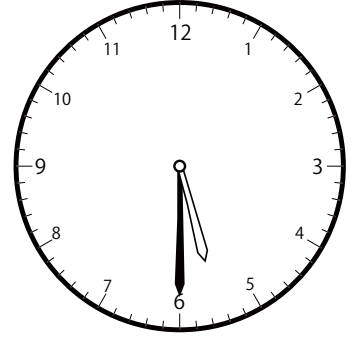
① 8時<sup>じ</sup>30分<sup>ふん</sup>の時計<sup>とけい</sup>を見つけよう



( )




( )




( )

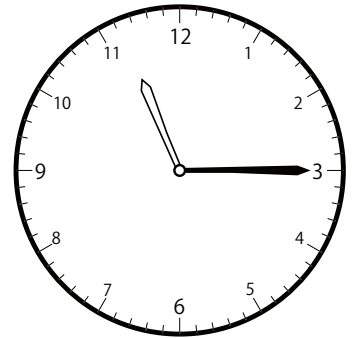
② 11時<sup>じ</sup>15分<sup>ふん</sup>の時計<sup>とけい</sup>を見つけよう



( )




( )




( )


③ 10時<sup>じ</sup>5分<sup>ふん</sup>の時計<sup>とけい</sup>を見つけよう



( )




( )



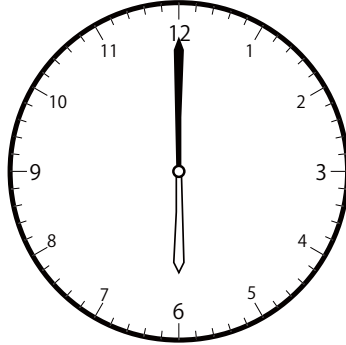
( )

〇〇時<sup>じ</sup>5分<sup>ぶん</sup>単位の<sup>たんい</sup>時計<sup>とけい</sup>を見つけよう【D2】  
問題<sup>もんだい</sup>と同じ時間<sup>おなじかん</sup>の時計<sup>とけい</sup>を見つけ<sup>み</sup>て( )に〇をつけましよう。


① 6時<sup>じ</sup>0分<sup>ぶん</sup>の時計<sup>とけい</sup>を見つけよう



( )

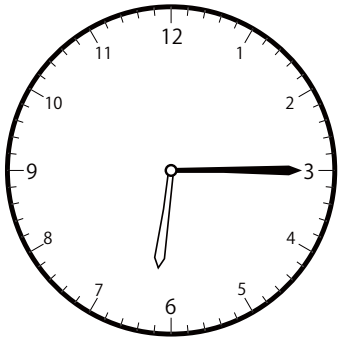


( )




( )

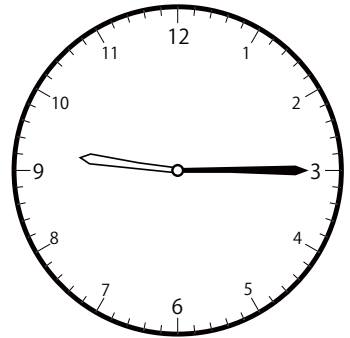
② 9時<sup>じ</sup>15分<sup>ぶん</sup>の時計<sup>とけい</sup>を見つけよう



( )




( )

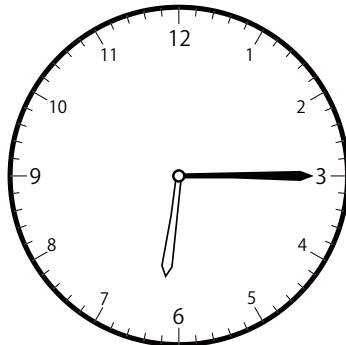


( )

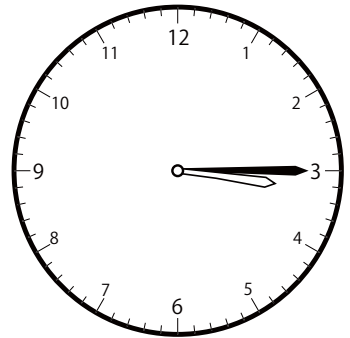
③ 3時<sup>じ</sup>15分<sup>ぶん</sup>の時計<sup>とけい</sup>を見つけよう




( )




( )




( )

〇〇時<sup>じ</sup>5分<sup>ふん</sup>単位の<sup>たんい</sup>時計<sup>とけい</sup>を見つけよう【D2】問題<sup>もんだい</sup>と同じ時間<sup>おなじかん</sup>の時計<sup>とけい</sup>を見つけて( )に〇をつけましょう。① 5時<sup>じ</sup>0分<sup>ふん</sup>の時計<sup>とけい</sup>を見つけよう

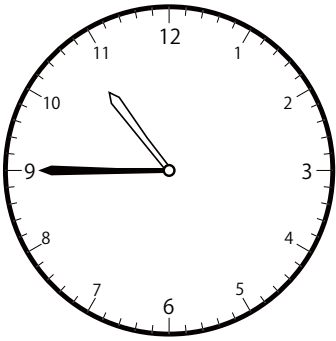
( )



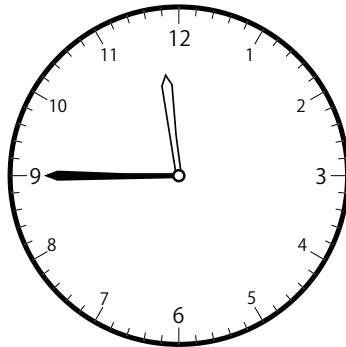
( )




( )

② 10時<sup>じ</sup>45分<sup>ふん</sup>の時計<sup>とけい</sup>を見つけよう

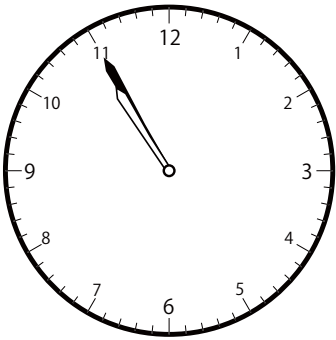
( )




( )




( )

③ 10時<sup>じ</sup>55分<sup>ふん</sup>の時計<sup>とけい</sup>を見つけよう


( )




( )




( )

〇〇時<sup>じ</sup>5分<sup>ふん</sup>単<sup>たん</sup>位<sup>い</sup>の時<sup>と</sup>計<sup>けい</sup>を見<sup>み</sup>つけよう【D2】問<sup>もん</sup>題<sup>だい</sup>と<sup>おな</sup>同<sup>じ</sup>じ<sup>じ</sup>間<sup>かん</sup>の時<sup>と</sup>計<sup>けい</sup>を見<sup>み</sup>つけ<sup>て</sup>( )に〇をつけま<sup>し</sup>ょう。① 2時<sup>じ</sup>10分<sup>ふん</sup>の時<sup>と</sup>計<sup>けい</sup>を見<sup>み</sup>つけよう


( )




( )



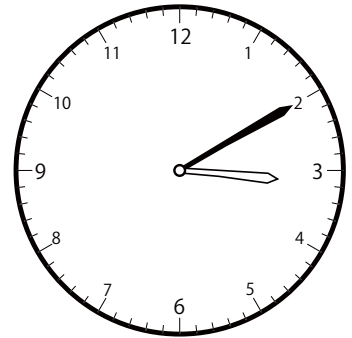
( )

② 12時<sup>じ</sup>10分<sup>ふん</sup>の時<sup>と</sup>計<sup>けい</sup>を見<sup>み</sup>つけよう

( )



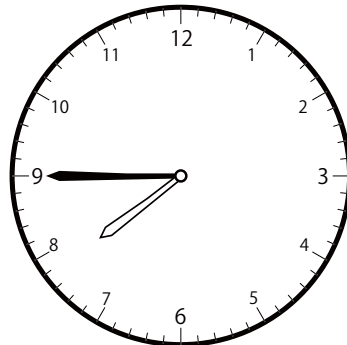
( )



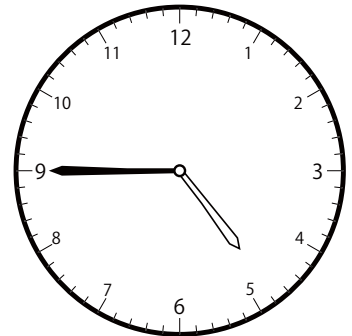
( )

③ 6時<sup>じ</sup>45分<sup>ふん</sup>の時<sup>と</sup>計<sup>けい</sup>を見<sup>み</sup>つけよう

( )




( )




( )

〇〇時<sup>じ</sup>5分<sup>ふん</sup>単<sup>たん</sup>位<sup>い</sup>の時<sup>と</sup>計<sup>けい</sup>を見<sup>み</sup>つけよう【D2】  
問<sup>もん</sup>題<sup>だい</sup>と<sup>おな</sup>じ<sup>じ</sup>時<sup>じ</sup>間<sup>かん</sup>の時<sup>と</sup>計<sup>けい</sup>を見<sup>み</sup>つけて( )に〇をつけましよう。


① 1時<sup>じ</sup>50分<sup>ふん</sup>の時<sup>と</sup>計<sup>けい</sup>を見<sup>み</sup>つけよう



( )

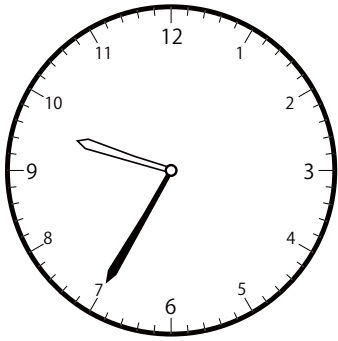


( )




( )

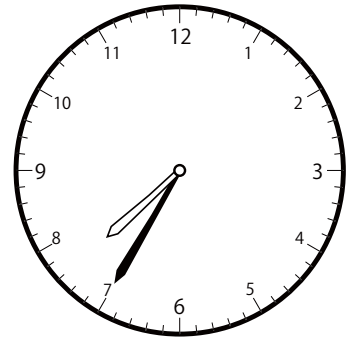
② 9時<sup>じ</sup>35分<sup>ふん</sup>の時<sup>と</sup>計<sup>けい</sup>を見<sup>み</sup>つけよう



( )




( )




( )

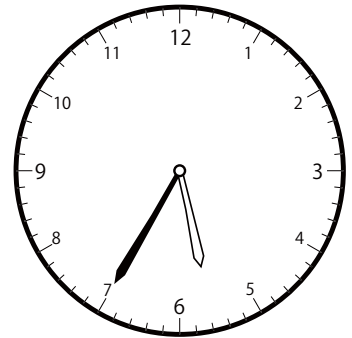
③ 7時<sup>じ</sup>35分<sup>ふん</sup>の時<sup>と</sup>計<sup>けい</sup>を見<sup>み</sup>つけよう



( )



( )

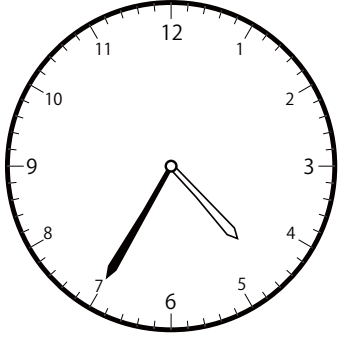


( )

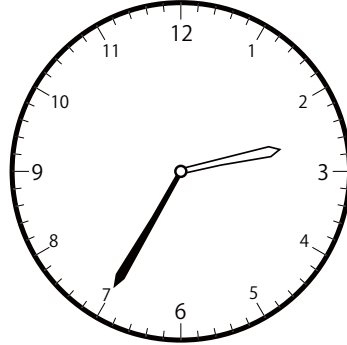


〇〇時<sup>じ</sup>5分<sup>ぶん</sup>単<sup>たん</sup>位<sup>い</sup>の時<sup>と</sup>計<sup>けい</sup>を見<sup>み</sup>つけよう【D2】  
問<sup>もん</sup>題<sup>だい</sup>と<sup>おな</sup>じ<sup>じ</sup>時<sup>じ</sup>間<sup>かん</sup>の時<sup>と</sup>計<sup>けい</sup>を見<sup>み</sup>つけ<sup>て</sup>( )に〇をつけましょ<sup>う</sup>。

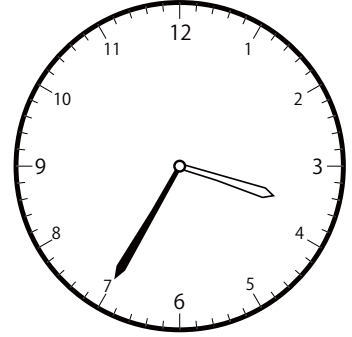
① 3時<sup>じ</sup>35分<sup>ぶん</sup>の時<sup>と</sup>計<sup>けい</sup>を見<sup>み</sup>つけよう



( )




( )




( )

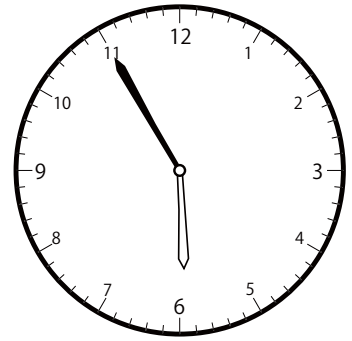
② 3時<sup>じ</sup>55分<sup>ぶん</sup>の時<sup>と</sup>計<sup>けい</sup>を見<sup>み</sup>つけよう



( )

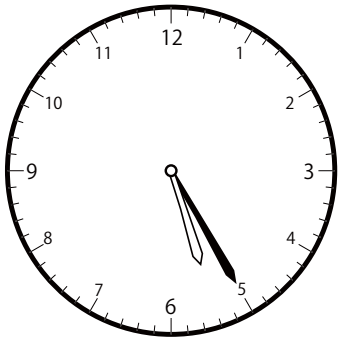


( )

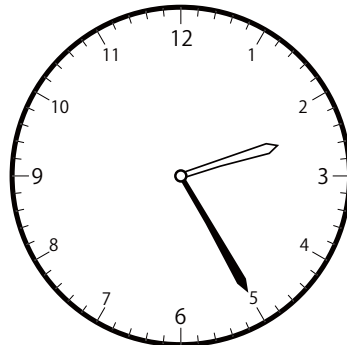


( )

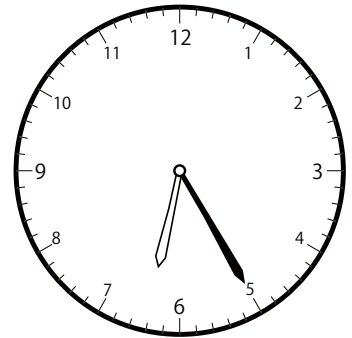
③ 5時<sup>じ</sup>25分<sup>ぶん</sup>の時<sup>と</sup>計<sup>けい</sup>を見<sup>み</sup>つけよう



( )




( )




( )

〇〇時<sup>じ</sup>5分<sup>ふん</sup>単位<sup>たんい</sup>の時計<sup>とけい</sup>を見つけよう【D2】  
問題<sup>もんだい</sup>と同じ時間<sup>おなじかん</sup>の時計<sup>とけい</sup>を見つけ<sup>み</sup>て( )に〇をつけましよう。


① 2時<sup>じ</sup>50分<sup>ふん</sup>の時計<sup>とけい</sup>を見つけよう



( )

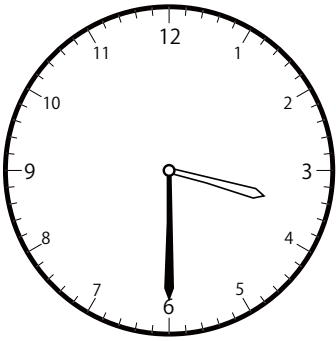


( )

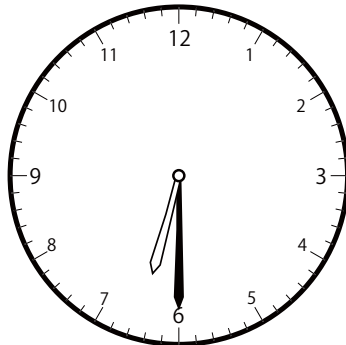


( )

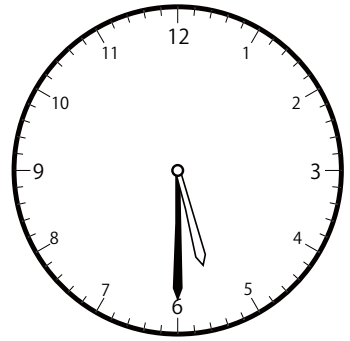
② 5時<sup>じ</sup>30分<sup>ふん</sup>の時計<sup>とけい</sup>を見つけよう



( )

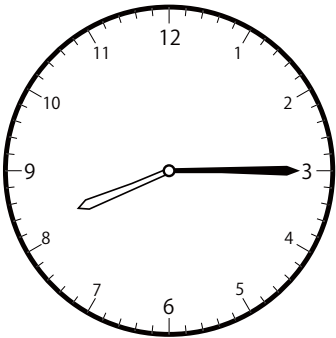


( )

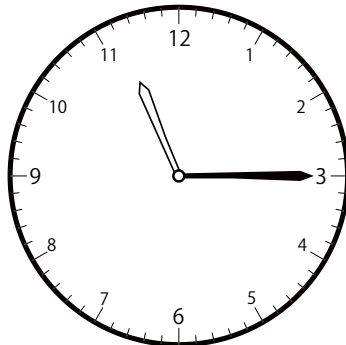


( )

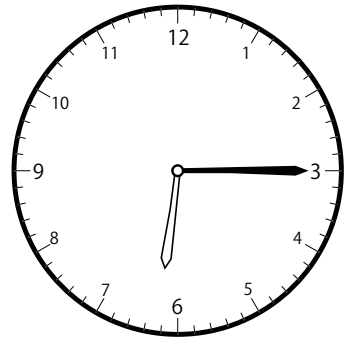
③ 8時<sup>じ</sup>15分<sup>ふん</sup>の時計<sup>とけい</sup>を見つけよう



( )




( )



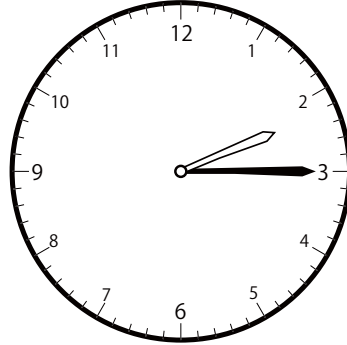
( )

〇〇時<sup>じ</sup>5分<sup>ぶん</sup>単位<sup>たんい</sup>の時計<sup>とけい</sup>を見つけよう【D2】  
 問題<sup>もんだい</sup>と同じ時間<sup>おなじかん</sup>の時計<sup>とけい</sup>を見つけ( )に〇をつけましょう。


① 2時<sup>じ</sup>15分<sup>ぶん</sup>の時計<sup>とけい</sup>を見つけよう



( )

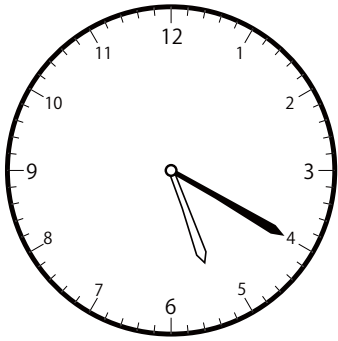


( )

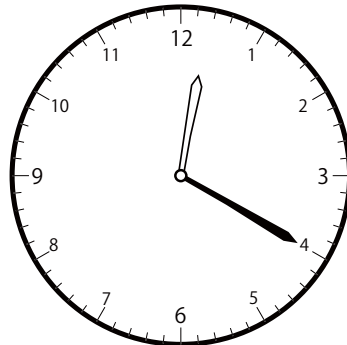


( )

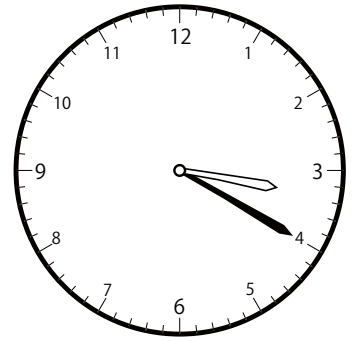
② 3時<sup>じ</sup>20分<sup>ぶん</sup>の時計<sup>とけい</sup>を見つけよう



( )




( )

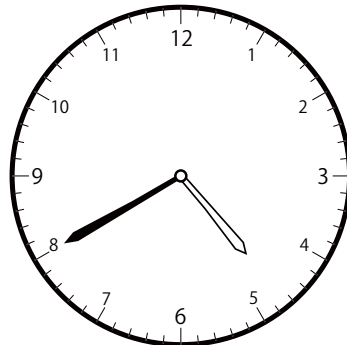


( )


③ 7時<sup>じ</sup>40分<sup>ぶん</sup>の時計<sup>とけい</sup>を見つけよう



( )




( )



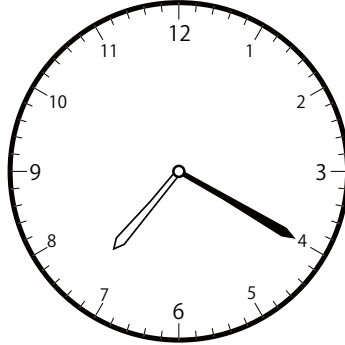
( )

〇〇時<sup>じ</sup>5分<sup>ふん</sup>単位<sup>たんい</sup>の時計<sup>とけい</sup>を見つけよう【D2】  
問題<sup>もんだい</sup>と同じ時間<sup>おなじかん</sup>の時計<sup>とけい</sup>を見つけ<sup>み</sup>て( )に〇をつけましよう。


① 7時<sup>じ</sup>20分<sup>ふん</sup>の時計<sup>とけい</sup>を見つけよう



( )




( )




( )


② 8時<sup>じ</sup>10分<sup>ふん</sup>の時計<sup>とけい</sup>を見つけよう



( )

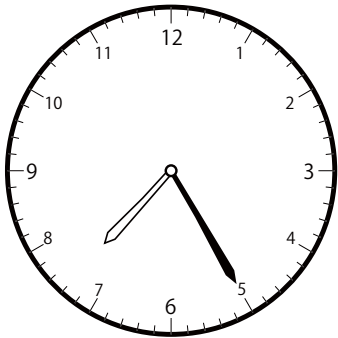


( )




( )

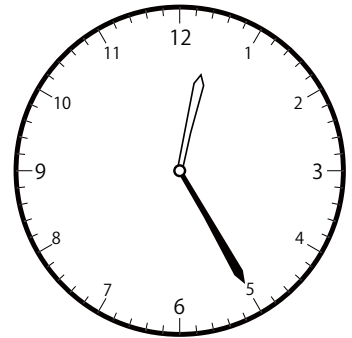
③ 10時<sup>じ</sup>25分<sup>ふん</sup>の時計<sup>とけい</sup>を見つけよう




( )




( )




( )

〇〇時<sup>じ</sup>5分<sup>ふん</sup>単位の<sup>たんい</sup>時計<sup>とけい</sup>を見つけよう【D2】問題<sup>もんだい</sup>と同じ時間<sup>おなじかん</sup>の時計<sup>とけい</sup>を見つけ<sup>み</sup>て( )に〇をつけましよう。① 12時<sup>じ</sup> 5分<sup>ふん</sup>の時計<sup>とけい</sup>を見つけよう

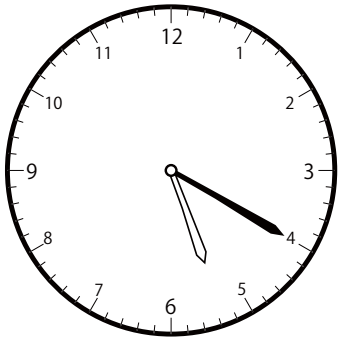
( )




( )




( )

② 2時<sup>じ</sup> 20分<sup>ふん</sup>の時計<sup>とけい</sup>を見つけよう

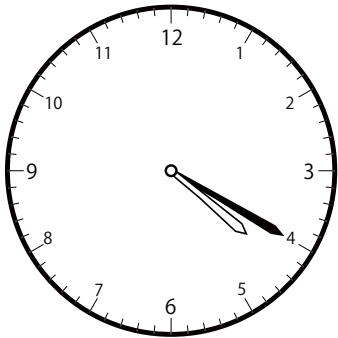
( )



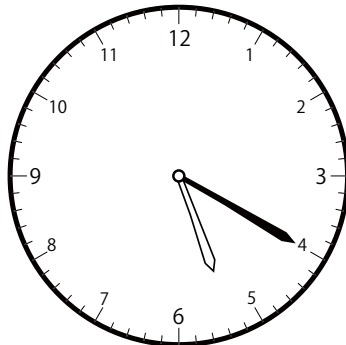
( )



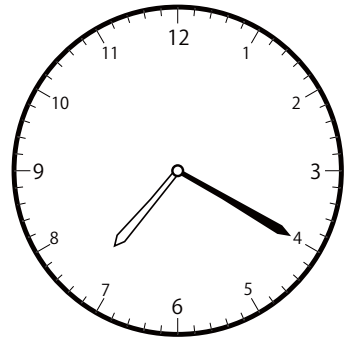
( )

③ 5時<sup>じ</sup> 20分<sup>ふん</sup>の時計<sup>とけい</sup>を見つけよう

( )




( )



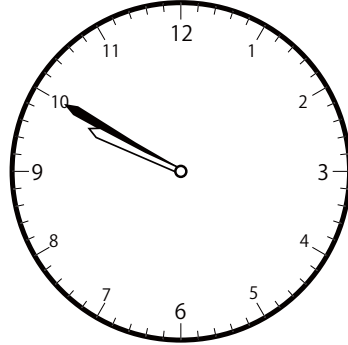
( )

〇〇時<sup>じ</sup>5分<sup>ふん</sup>単<sup>たん</sup>位<sup>い</sup>の時<sup>と</sup>計<sup>けい</sup>を見<sup>み</sup>つけよう【D2】  
問<sup>もん</sup>題<sup>だい</sup>と<sup>おな</sup>じ<sup>じ</sup>時<sup>じ</sup>間<sup>かん</sup>の時<sup>と</sup>計<sup>けい</sup>を見<sup>み</sup>つけて( )に〇をつけましよう。


① 7時<sup>じ</sup>50分<sup>ふん</sup>の時<sup>と</sup>計<sup>けい</sup>を見<sup>み</sup>つけよう



( )

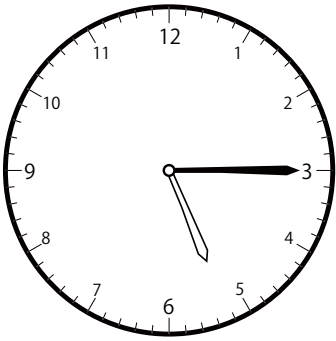


( )

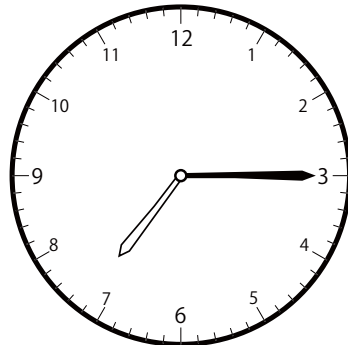


( )

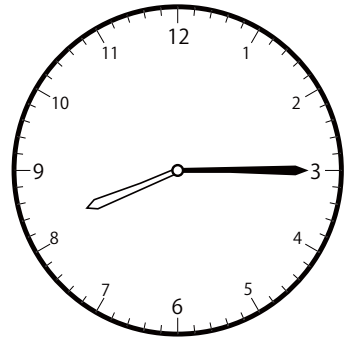
② 7時<sup>じ</sup>15分<sup>ふん</sup>の時<sup>と</sup>計<sup>けい</sup>を見<sup>み</sup>つけよう



( )

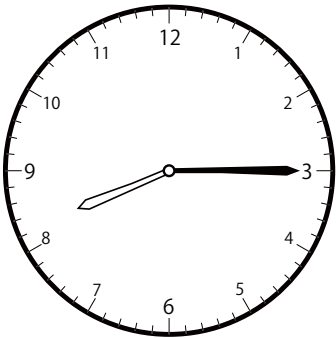


( )

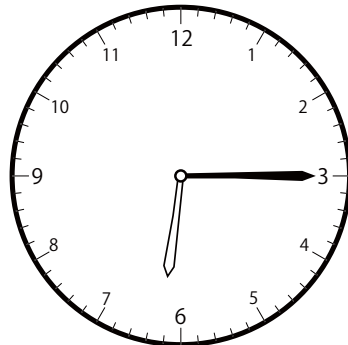


( )

③ 6時<sup>じ</sup>15分<sup>ふん</sup>の時<sup>と</sup>計<sup>けい</sup>を見<sup>み</sup>つけよう



( )




( )



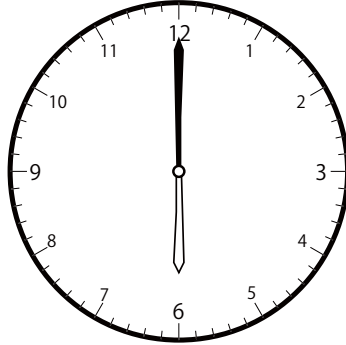
( )

〇〇時<sup>じ</sup>5分<sup>ぶん</sup>単位の<sup>たんい</sup>時計<sup>とけい</sup>を見つけよう【D2】  
問題<sup>もんだい</sup>と同じ時間<sup>おなじかん</sup>の時計<sup>とけい</sup>を見つけ<sup>み</sup>て( )に〇をつけましよう。


① 4時<sup>じ</sup>0分<sup>ぶん</sup>の時計<sup>とけい</sup>を見つけよう



( )




( )




( )


② 2時<sup>じ</sup>55分<sup>ぶん</sup>の時計<sup>とけい</sup>を見つけよう



( )




( )




( )

③ 5時<sup>じ</sup>50分<sup>ぶん</sup>の時計<sup>とけい</sup>を見つけよう



( )



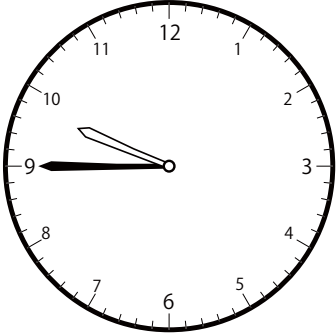
( )



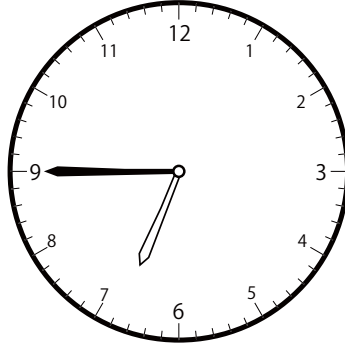
( )

〇〇時<sup>じ</sup>5分<sup>ふん</sup>単位の<sup>たんい</sup>時計<sup>とけい</sup>を見つけよう【D2】  
問題<sup>もんだい</sup>と同じ時間<sup>おなじかん</sup>の時計<sup>とけい</sup>を見つけて( )に〇をつけましょう。


① 9時<sup>じ</sup>45分<sup>ふん</sup>の時計<sup>とけい</sup>を見つけよう



( )




( )




( )


② 11時<sup>じ</sup>5分<sup>ふん</sup>の時計<sup>とけい</sup>を見つけよう



( )




( )

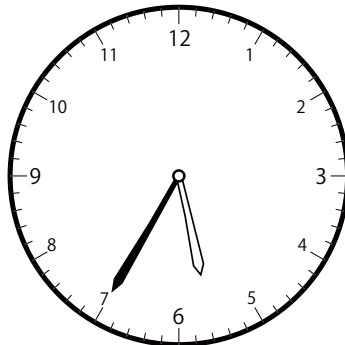


( )


③ 6時<sup>じ</sup>35分<sup>ふん</sup>の時計<sup>とけい</sup>を見つけよう



( )



( )




( )




〇〇時<sup>じ</sup>5分<sup>ふん</sup>単位<sup>たんい</sup>の時計<sup>とけい</sup>を見つけよう【D2】  
 問題<sup>もんだい</sup>と同じ時間<sup>おなじかん</sup>の時計<sup>とけい</sup>を見つけ( )に〇をつけましょう。


① 12時<sup>じ</sup>20分<sup>ふん</sup>の時計<sup>とけい</sup>を見つけよう



( )




( )




( )


② 6時<sup>じ</sup>5分<sup>ふん</sup>の時計<sup>とけい</sup>を見つけよう



( )

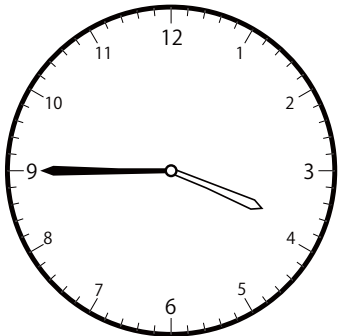


( )

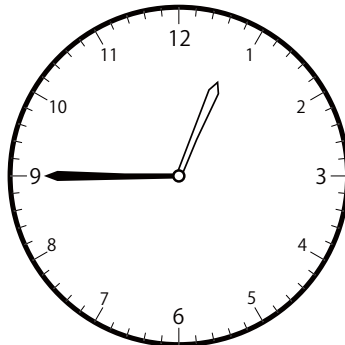


( )

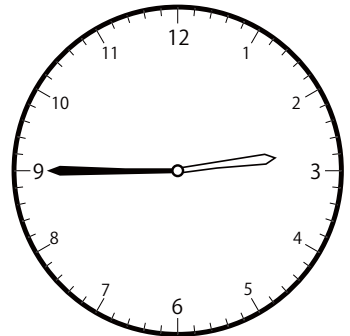
③ 2時<sup>じ</sup>45分<sup>ふん</sup>の時計<sup>とけい</sup>を見つけよう



( )




( )



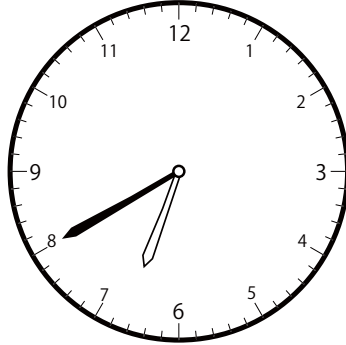
( )

〇〇時<sup>じ</sup>5分<sup>ぶん</sup>単位<sup>たんい</sup>の時計<sup>とけい</sup>を見つけよう【D2】  
問題<sup>もんだい</sup>と同じ時間<sup>おなじかん</sup>の時計<sup>とけい</sup>を見つけ<sup>み</sup>て( )に〇をつけましよう。


① 9時<sup>じ</sup>40分<sup>ぶん</sup>の時計<sup>とけい</sup>を見つけよう



( )




( )




( )


② 4時<sup>じ</sup>55分<sup>ぶん</sup>の時計<sup>とけい</sup>を見つけよう



( )




( )




( )


③ 10時<sup>じ</sup>10分<sup>ぶん</sup>の時計<sup>とけい</sup>を見つけよう



( )




( )




( )

〇〇時<sup>じ</sup>5分<sup>ぶん</sup>単位<sup>たんい</sup>の時計<sup>とけい</sup>を見つけよう【D2】  
問題<sup>もんだい</sup>と同じ時間<sup>おなじかん</sup>の時計<sup>とけい</sup>を見つけ<sup>み</sup>て( )に〇をつけましよう。


① 3時<sup>じ</sup>50分<sup>ぶん</sup>の時計<sup>とけい</sup>を見つけよう



( )




( )




( )

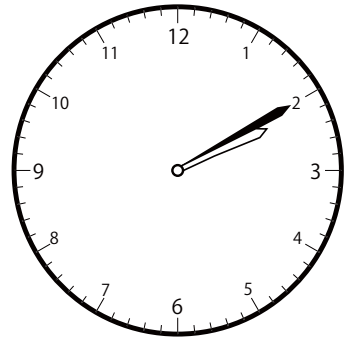
② 3時<sup>じ</sup>10分<sup>ぶん</sup>の時計<sup>とけい</sup>を見つけよう



( )

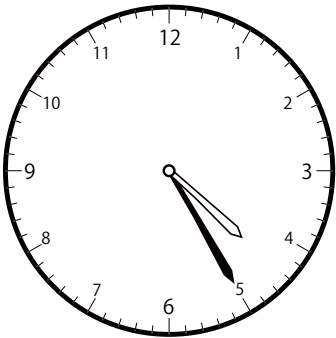


( )

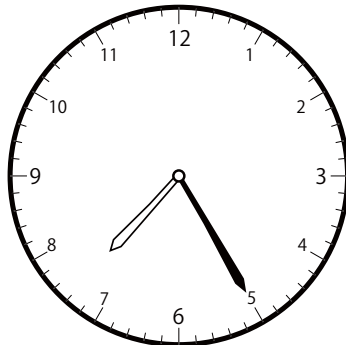


( )

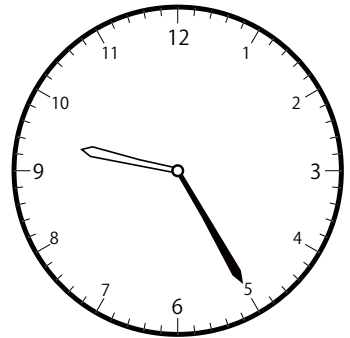
③ 7時<sup>じ</sup>25分<sup>ぶん</sup>の時計<sup>とけい</sup>を見つけよう



( )




( )



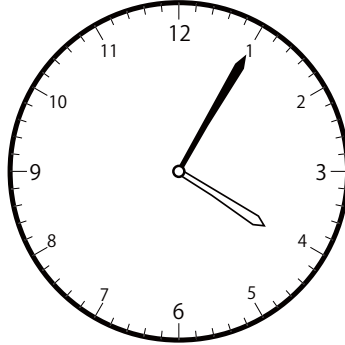
( )

〇〇時<sup>じ</sup>5分<sup>ふん</sup>単位の<sup>たんい</sup>時計<sup>とけい</sup>を見つけよう【D2】  
問題<sup>もんだい</sup>と同じ時間<sup>おなじかん</sup>の時計<sup>とけい</sup>を見つけ<sup>み</sup>て( )に〇をつけましよう。


① 7時<sup>じ</sup>5分<sup>ふん</sup>の時計<sup>とけい</sup>を見つけよう



( )

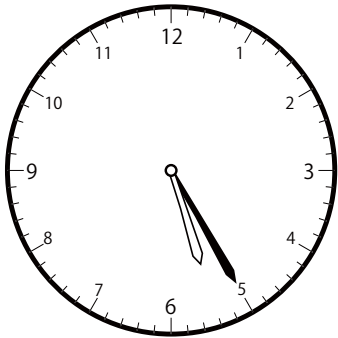


( )

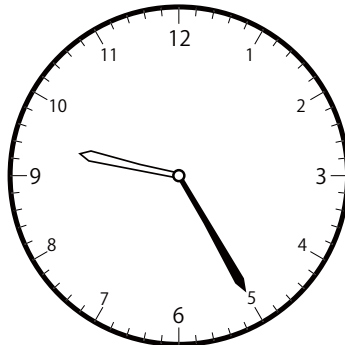


( )

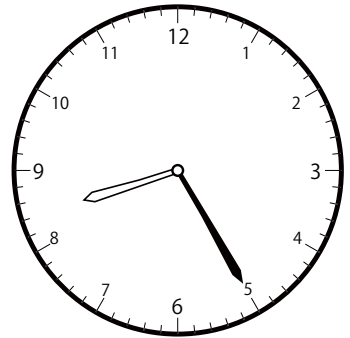
② 8時<sup>じ</sup>25分<sup>ふん</sup>の時計<sup>とけい</sup>を見つけよう



( )




( )




( )

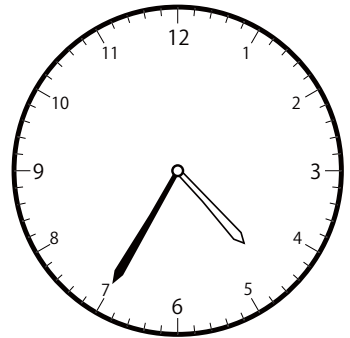
③ 1時<sup>じ</sup>35分<sup>ふん</sup>の時計<sup>とけい</sup>を見つけよう



( )




( )




( )

〇〇時<sup>じ</sup>5分<sup>ぶん</sup>単位<sup>たんい</sup>の時計<sup>とけい</sup>を見つけよう【D2】  
問題<sup>もんだい</sup>と同じ時間<sup>おなじかん</sup>の時計<sup>とけい</sup>を見つけ<sup>み</sup>て( )に〇をつけましよう。


① 10時<sup>じ</sup>50分<sup>ぶん</sup>の時計<sup>とけい</sup>を見つけよう



( )




( )




( )


② 9時<sup>じ</sup>10分<sup>ぶん</sup>の時計<sup>とけい</sup>を見つけよう



( )




( )

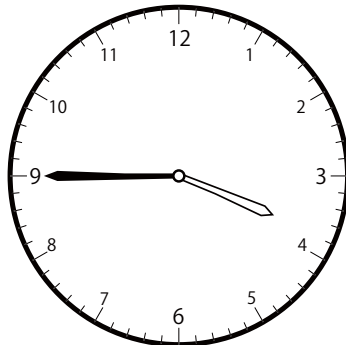


( )


③ 1時<sup>じ</sup>45分<sup>ぶん</sup>の時計<sup>とけい</sup>を見つけよう



( )




( )




( )

〇〇時<sup>じ</sup>5分<sup>ふん</sup>単位<sup>たんい</sup>の時計<sup>とけい</sup>を見つけよう【D2】  
 問題<sup>もんだい</sup>と同じ時間<sup>おなじかん</sup>の時計<sup>とけい</sup>を見つけ<sup>み</sup>て( )に〇をつけましよう。


① 2時<sup>じ</sup>40分<sup>ふん</sup>の時計<sup>とけい</sup>を見つけよう



( )




( )

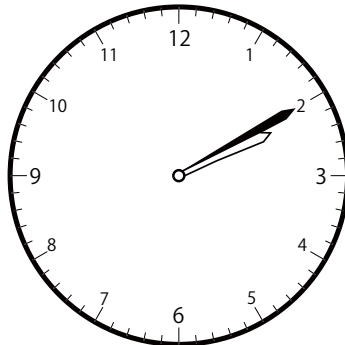


( )


② 11時<sup>じ</sup>10分<sup>ふん</sup>の時計<sup>とけい</sup>を見つけよう



( )

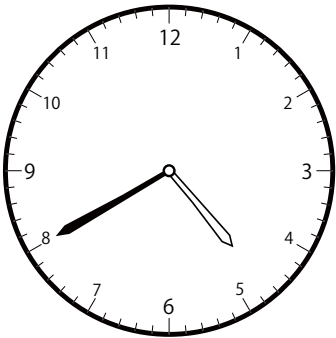


( )




( )


③ 4時<sup>じ</sup>40分<sup>ふん</sup>の時計<sup>とけい</sup>を見つけよう



( )



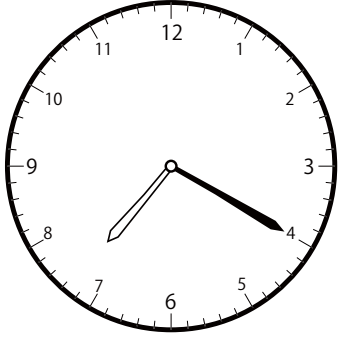
( )




( )

〇〇時<sup>じ</sup>5分<sup>ぶん</sup>単位<sup>たんい</sup>の時計<sup>とけい</sup>を見つけよう【D2】  
問題<sup>もんだい</sup>と同じ時間<sup>おなじかん</sup>の時計<sup>とけい</sup>を見つけ<sup>み</sup>て( )に〇をつけましよう。


① 10時<sup>じ</sup> 20分<sup>ぶん</sup>の時計<sup>とけい</sup>を見つけよう



( )

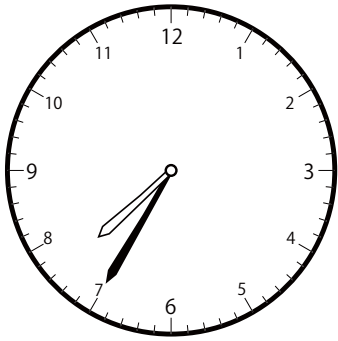


( )

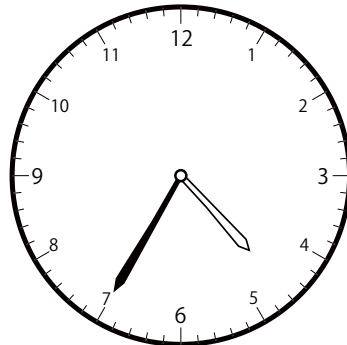


( )

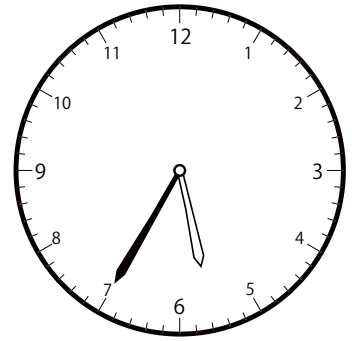
② 5時<sup>じ</sup> 35分<sup>ぶん</sup>の時計<sup>とけい</sup>を見つけよう



( )

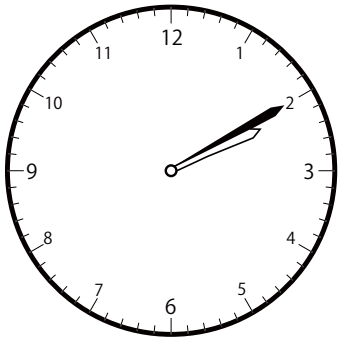


( )

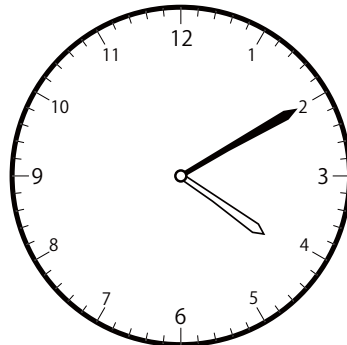


( )


③ 4時<sup>じ</sup> 10分<sup>ぶん</sup>の時計<sup>とけい</sup>を見つけよう




( )



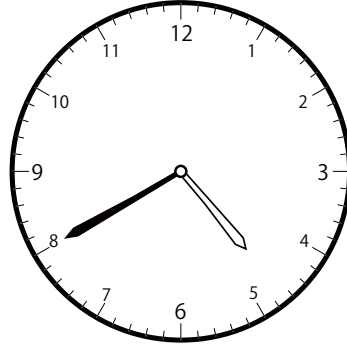
( )




( )

〇〇時<sup>じ</sup>5分<sup>ふん</sup>単位の<sup>たんい</sup>時計<sup>とけい</sup>を見つけよう【D2】問題<sup>もんだい</sup>と同じ時間<sup>おなじかん</sup>の時計<sup>とけい</sup>を見つけ<sup>み</sup>て( )に〇をつけましょう。① 6時<sup>じ</sup>40分<sup>ふん</sup>の時計<sup>とけい</sup>を見つけよう


( )




( )




( )

② 8時<sup>じ</sup>50分<sup>ふん</sup>の時計<sup>とけい</sup>を見つけよう


( )




( )




( )

③ 4時<sup>じ</sup>50分<sup>ふん</sup>の時計<sup>とけい</sup>を見つけよう

( )



( )

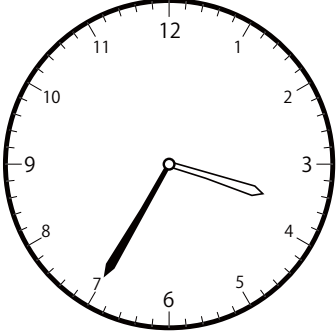


( )




〇〇時<sup>じ</sup>5分<sup>ふん</sup>単位の<sup>たんい</sup>時計<sup>とけい</sup>を見つけよう【D2】  
 問題<sup>もんだい</sup>と同じ<sup>おな</sup>時間<sup>じかん</sup>の時計<sup>とけい</sup>を見つけ<sup>み</sup>て( )に〇をつけましよう。

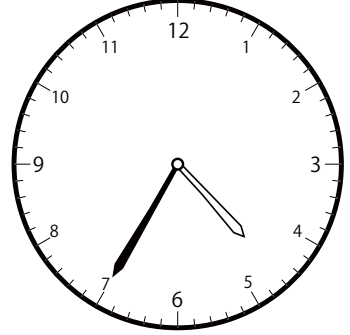
① 4時<sup>じ</sup>35分<sup>ふん</sup>の時計<sup>とけい</sup>を見つけよう



( )




( )

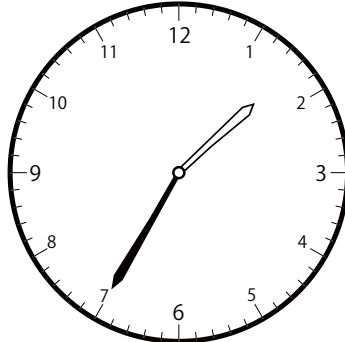


( )


② 11時<sup>じ</sup>35分<sup>ふん</sup>の時計<sup>とけい</sup>を見つけよう



( )




( )




( )


③ 9時<sup>じ</sup>0分<sup>ふん</sup>の時計<sup>とけい</sup>を見つけよう



( )




( )




( )

〇〇時<sup>じ</sup>5分<sup>ふん</sup>単位の<sup>たんい</sup>時計<sup>とけい</sup>を見つけよう【D2】  
問題<sup>もんだい</sup>と同じ時間<sup>おなじかん</sup>の時計<sup>とけい</sup>を見つけ<sup>み</sup>て( )に〇をつけましよう。


① 11時<sup>じ</sup>40分<sup>ふん</sup>の時計<sup>とけい</sup>を見つけよう



( )




( )




( )


② 8時<sup>じ</sup>5分<sup>ふん</sup>の時計<sup>とけい</sup>を見つけよう



( )




( )

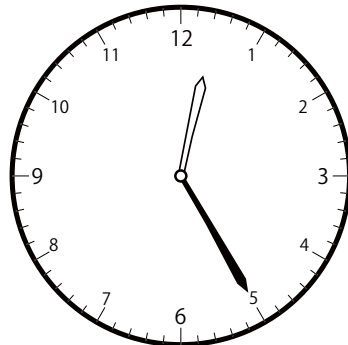


( )

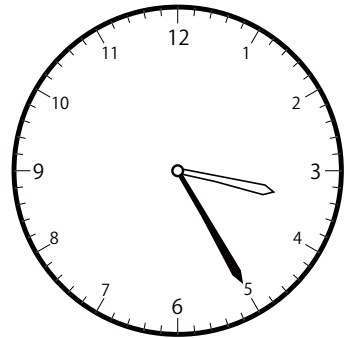
③ 2時<sup>じ</sup>25分<sup>ふん</sup>の時計<sup>とけい</sup>を見つけよう



( )



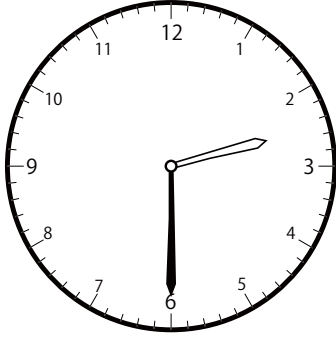
( )




( )

〇〇時<sup>じ</sup>5分<sup>ふん</sup>単位の<sup>たんい</sup>時計<sup>とけい</sup>を見つけよう【D2】  
問題<sup>もんだい</sup>と同じ時間<sup>おなじかん</sup>の時計<sup>とけい</sup>を見つけ( )に〇をつけましょう。

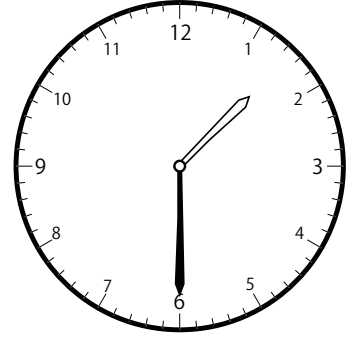
① 1時<sup>じ</sup>30分<sup>ふん</sup>の時計<sup>とけい</sup>を見つけよう



( )

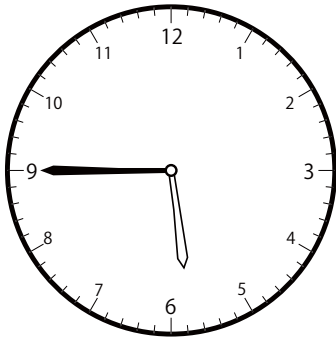


( )

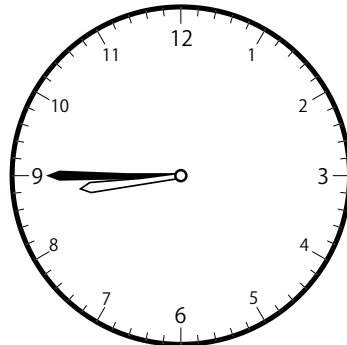


( )

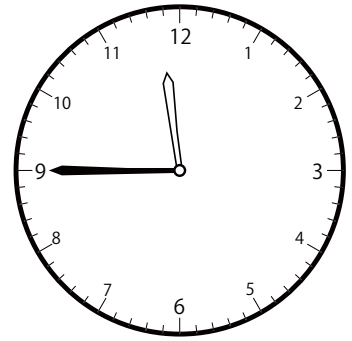
② 8時<sup>じ</sup>45分<sup>ふん</sup>の時計<sup>とけい</sup>を見つけよう



( )

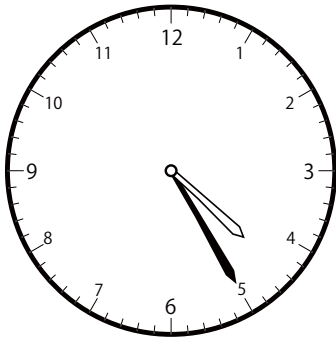


( )

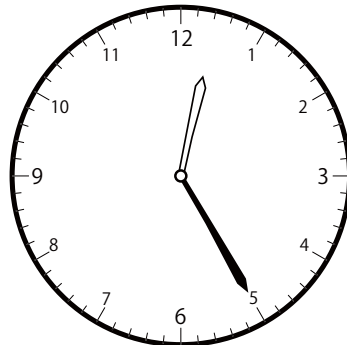


( )

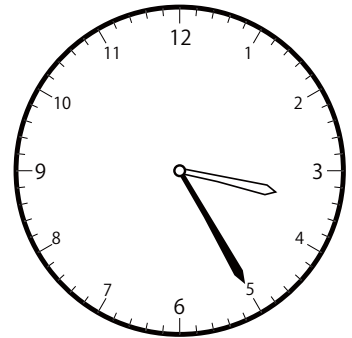
③ 3時<sup>じ</sup>25分<sup>ふん</sup>の時計<sup>とけい</sup>を見つけよう



( )




( )



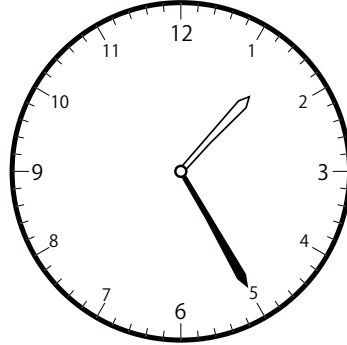
( )

〇〇時<sup>じ</sup>5分<sup>ふん</sup>単<sup>たん</sup>位<sup>い</sup>の時<sup>と</sup>計<sup>けい</sup>を見<sup>み</sup>つけよう【D2】  
問<sup>もん</sup>題<sup>だい</sup>と<sup>おな</sup>じ<sup>じ</sup>時<sup>じ</sup>間<sup>かん</sup>の時<sup>と</sup>計<sup>けい</sup>を見<sup>み</sup>つけて( )に〇をつけましよう。

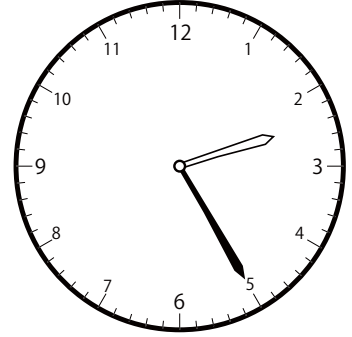
① 1時<sup>じ</sup>25分<sup>ふん</sup>の時<sup>と</sup>計<sup>けい</sup>を見<sup>み</sup>つけよう



( )

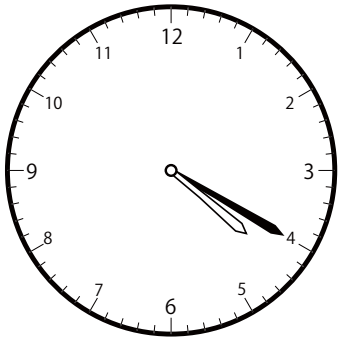


( )

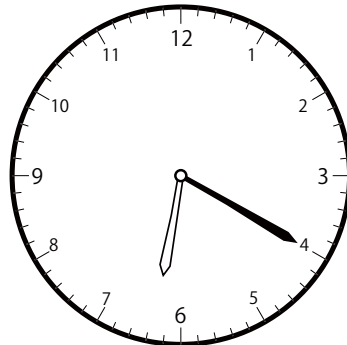


( )

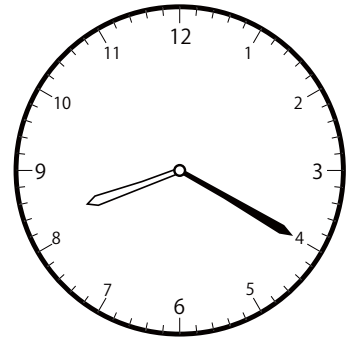
② 6時<sup>じ</sup>20分<sup>ふん</sup>の時<sup>と</sup>計<sup>けい</sup>を見<sup>み</sup>つけよう



( )




( )

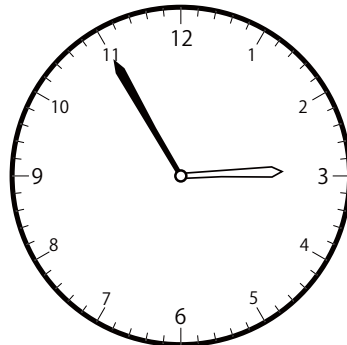


( )


③ 5時<sup>じ</sup>55分<sup>ふん</sup>の時<sup>と</sup>計<sup>けい</sup>を見<sup>み</sup>つけよう




( )




( )




( )

〇〇時<sup>じ</sup>5分<sup>ぶん</sup>単位<sup>たんい</sup>の時計<sup>とけい</sup>を見つけよう【D2】問題<sup>もんだい</sup>と同じ時間<sup>おなじかん</sup>の時計<sup>とけい</sup>を見つけ<sup>み</sup>て( )に〇をつけましよう。① 6時<sup>じ</sup>55分<sup>ぶん</sup>の時計<sup>とけい</sup>を見つけよう


( )




( )




( )

② 9時<sup>じ</sup>50分<sup>ぶん</sup>の時計<sup>とけい</sup>を見つけよう

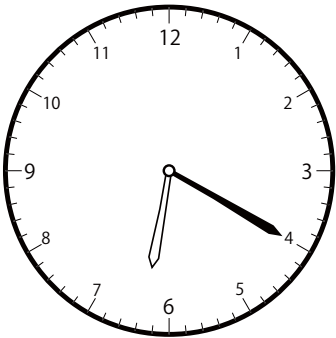
( )




( )




( )

③ 9時<sup>じ</sup>20分<sup>ぶん</sup>の時計<sup>とけい</sup>を見つけよう

( )




( )




( )

〇〇時<sup>じ</sup>5分<sup>ふん</sup>単位<sup>たんい</sup>の時計<sup>とけい</sup>を見つけよう【D2】  
問題<sup>もんだい</sup>と同じ時間<sup>おなじかん</sup>の時計<sup>とけい</sup>を見つけ( )に〇をつけましょう。


① 12時<sup>じ</sup>50分<sup>ふん</sup>の時計<sup>とけい</sup>を見つけよう



( )

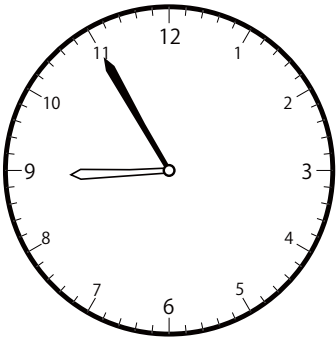


( )

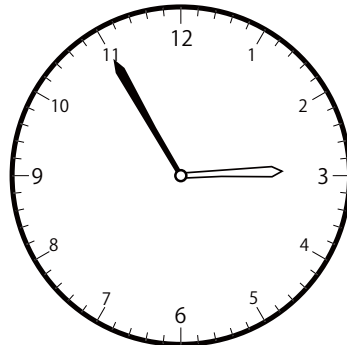


( )


② 11時<sup>じ</sup>55分<sup>ふん</sup>の時計<sup>とけい</sup>を見つけよう



( )




( )

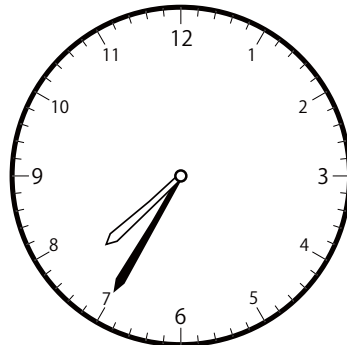


( )


③ 10時<sup>じ</sup>35分<sup>ふん</sup>の時計<sup>とけい</sup>を見つけよう



( )




( )




( )

〇〇時<sup>じ</sup>5分<sup>ふん</sup>単位の<sup>たんい</sup>時計<sup>とけい</sup>を見つけよう【D2】  
問題<sup>もんだい</sup>と同じ時間<sup>おなじかん</sup>の時計<sup>とけい</sup>を見つけ( )に〇をつけましょう。


① 5時<sup>じ</sup>5分<sup>ふん</sup>の時計<sup>とけい</sup>を見つけよう



( )



( )




( )


② 11時<sup>じ</sup>50分<sup>ふん</sup>の時計<sup>とけい</sup>を見つけよう



( )




( )

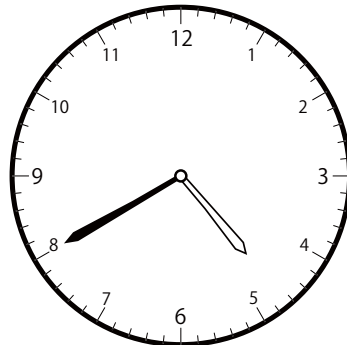


( )


③ 1時<sup>じ</sup>40分<sup>ふん</sup>の時計<sup>とけい</sup>を見つけよう




( )



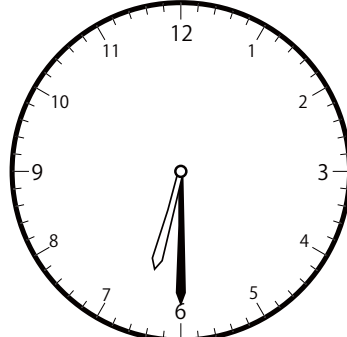
( )



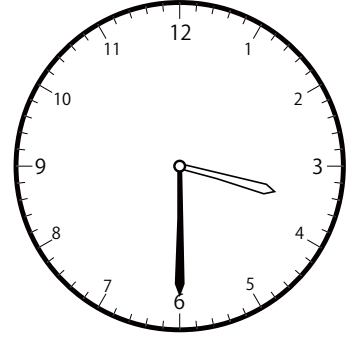
( )

〇〇時<sup>じ</sup>5分<sup>ふん</sup>単<sup>たん</sup>位<sup>い</sup>の時<sup>と</sup>計<sup>けい</sup>を見<sup>み</sup>つけよう【D2】問<sup>もん</sup>題<sup>だい</sup>と<sup>おな</sup>同<sup>じ</sup>じ<sup>じ</sup>間<sup>かん</sup>の時<sup>と</sup>計<sup>けい</sup>を見<sup>み</sup>つけ<sup>て</sup>( )に〇をつけま<sup>し</sup>ょう。① 3時<sup>じ</sup>30分<sup>ふん</sup>の時<sup>と</sup>計<sup>けい</sup>を見<sup>み</sup>つけよう


( )




( )



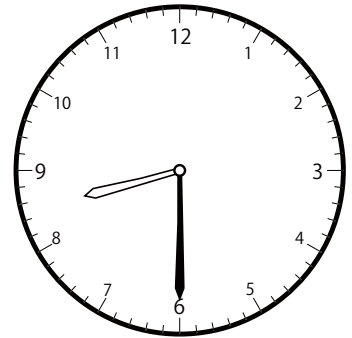
( )

② 11時<sup>じ</sup>30分<sup>ふん</sup>の時<sup>と</sup>計<sup>けい</sup>を見<sup>み</sup>つけよう

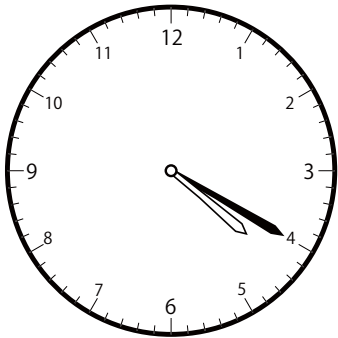
( )




( )



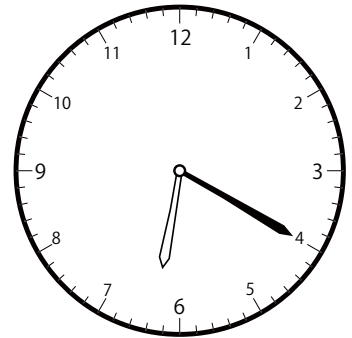
( )

③ 4時<sup>じ</sup>20分<sup>ふん</sup>の時<sup>と</sup>計<sup>けい</sup>を見<sup>み</sup>つけよう

( )



( )



( )