



〇〇時5分単位の時計を見つけよう【D1】

問題と同じ時間の時計を見つけて()に〇をつけましょう。

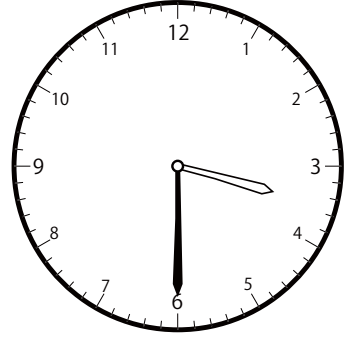
① 1時0分の時計を見つけよう



()




()




()


② 1時5分の時計を見つけよう



()




()




()


③ 1時10分の時計を見つけよう




()



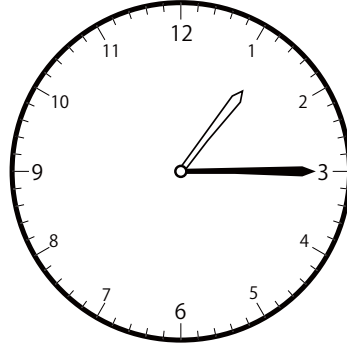
()



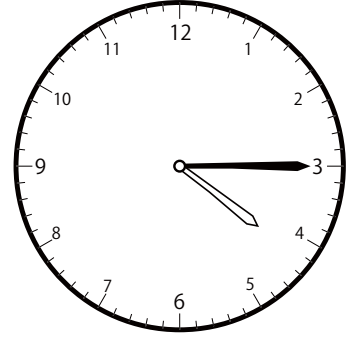
()

〇〇時^じ5分^{ふん}単位^{たんい}の時計^{とけい}を見つけよう【D1】問題^{もんだい}と同じ時間^{おなじかん}の時計^{とけい}を見つけ^みて()に○をつけましょう。① 1時^じ15分^{ふん}の時計^{とけい}を見つけよう


()



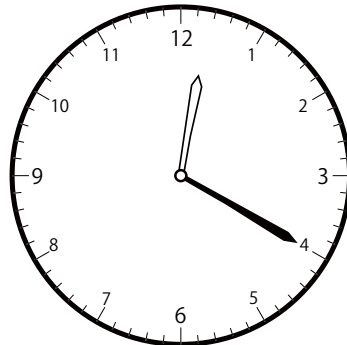
()




()

② 1時^じ20分^{ふん}の時計^{とけい}を見つけよう


()



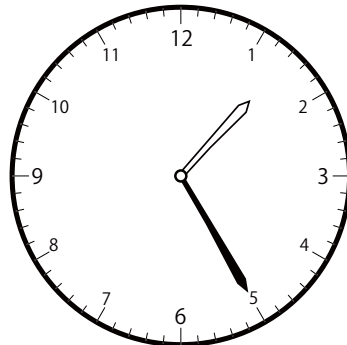
()



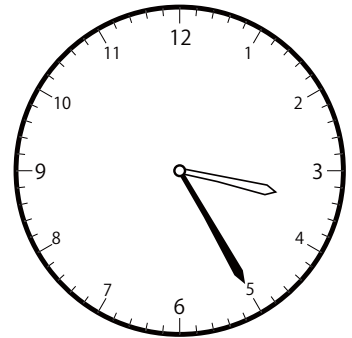
()

③ 1時^じ25分^{ふん}の時計^{とけい}を見つけよう

()



()




()


〇〇時5分単位の時計を見つけよう【D1】

問題と同じ時間の時計を見つけて()に○をつけましょう。

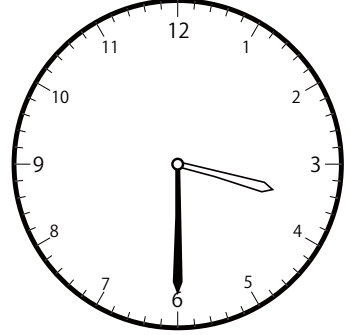
① 1時30分の時計を見つけよう



()




()




()

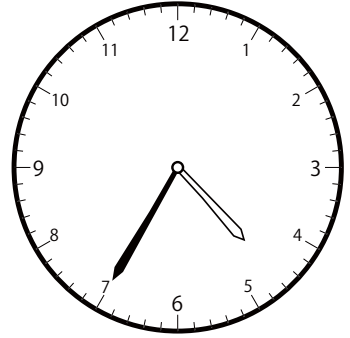
② 1時35分の時計を見つけよう



()




()




()

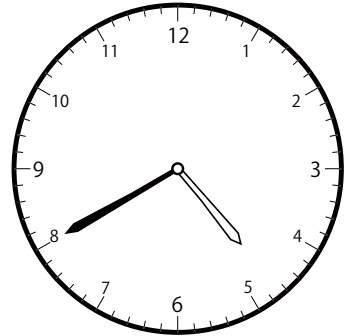
③ 1時40分の時計を見つけよう



()



()




()


〇〇時5分単位の時計を見つけよう【D1】

問題と同じ時間の時計を見つけて()に○をつけましょう。


① 1時45分の時計を見つけよう



()




()




()


② 1時50分の時計を見つけよう



()




()




()


③ 1時55分の時計を見つけよう



()



()




()


じ ふん たん い とけい み
〇〇時5分単位の時計を見つけよう【D1】

もんだい おな じかん とけい み
問題と同じ時間の時計を見つけて()に○をつけましょう。

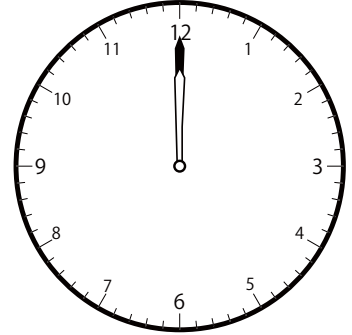
① 2時0分の時計を見つけよう



()




()

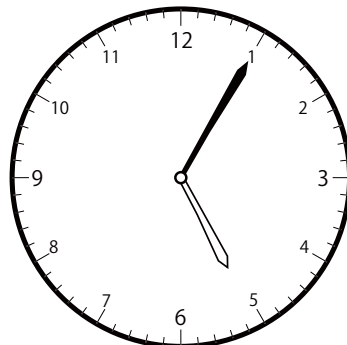


()


② 2時5分の時計を見つけよう



()




()




()

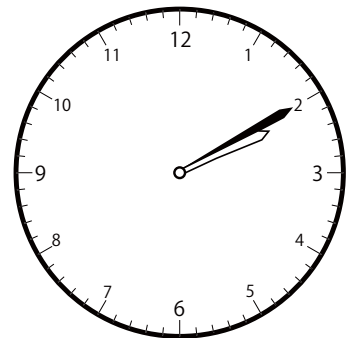
③ 2時10分の時計を見つけよう




()



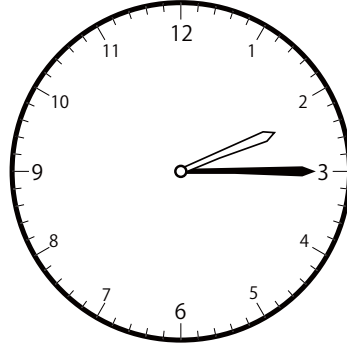
()



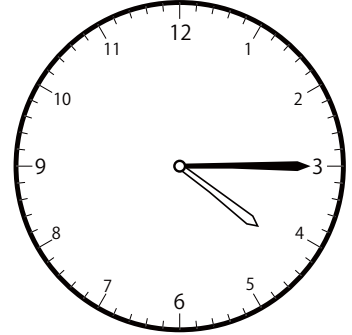
()

〇〇時^じ5分^{ふん}単位の時計^{とけい}を見つけよう【D1】問題^{もんだい}と同じ時間^{おなじかん}の時計^{とけい}を見つけて()に〇をつけましょう。① 2時^じ15分^{ふん}の時計^{とけい}を見つけよう

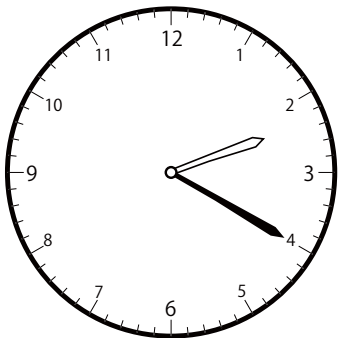
()




()



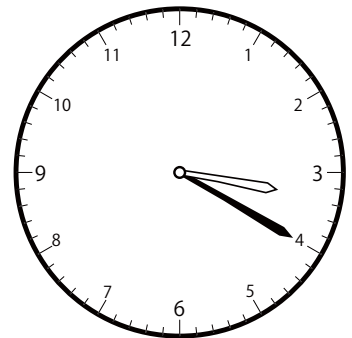
()

② 2時^じ20分^{ふん}の時計^{とけい}を見つけよう

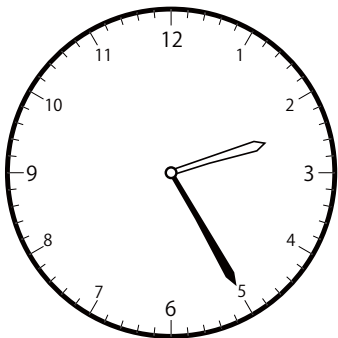
()




()



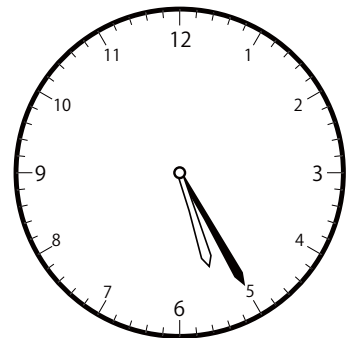
()

③ 2時^じ25分^{ふん}の時計^{とけい}を見つけよう

()



()

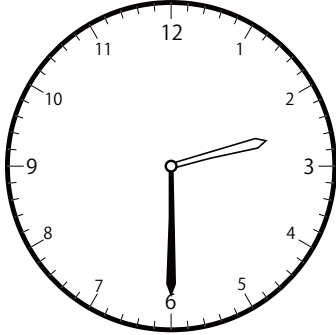


()


〇〇時5分単位の時計を見つけよう【D1】

問題と同じ時間の時計を見つけて()に○をつけましょう。

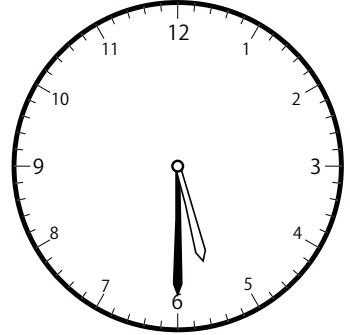
① 2時30分の時計を見つけよう



()




()

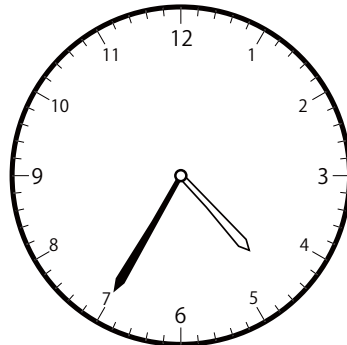


()

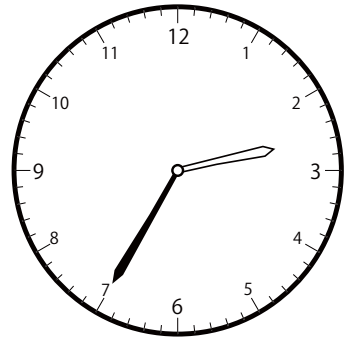
② 2時35分の時計を見つけよう



()




()

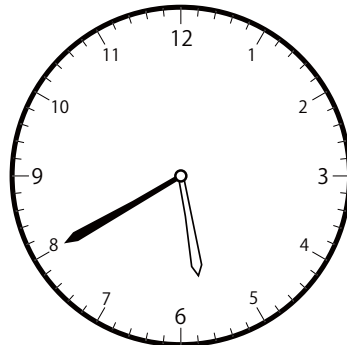


()


③ 2時40分の時計を見つけよう



()



()




()

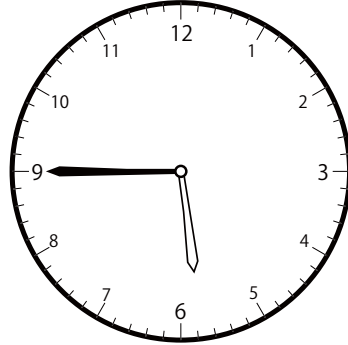
じ ふん たん い とけい み
〇〇時5分単位の時計を見つけよう【D1】

もんだい おな じかん とけい み
問題と同じ時間の時計を見つけて()に○をつけましょう。

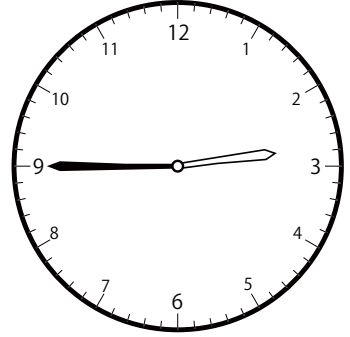
① 2時45分の時計を見つけよう



()




()




()


② 2時50分の時計を見つけよう



()




()




()


③ 2時55分の時計を見つけよう



()



()




()

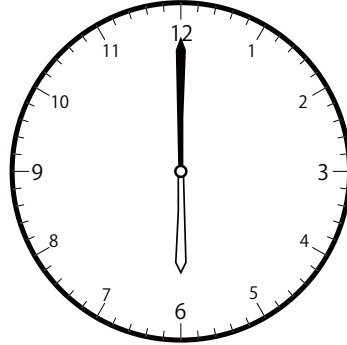
〇〇時^じ5分^{ふん}単位^{たんい}の時計^{とけい}を見つけよう【D1】

問題^{もんだい}と同じ時間^{おなじかん}の時計^{とけい}を見つけて()に〇をつけましょう。


① 3時^じ0分^{ふん}の時計^{とけい}を見つけよう



()




()




()


② 3時^じ5分^{ふん}の時計^{とけい}を見つけよう



()

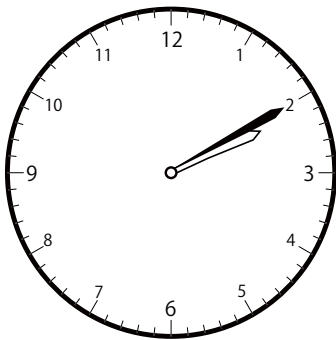


()




()


③ 3時^じ10分^{ふん}の時計^{とけい}を見つけよう



()



()




()

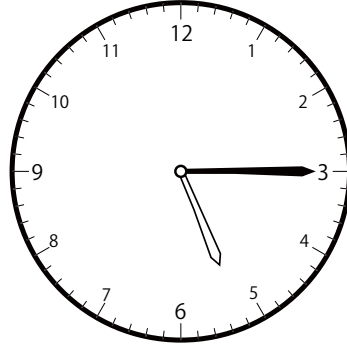
〇〇時5分単位の時計を見つけよう【DI】

問題と同じ時間の時計を見つけて()に○をつけましょう。

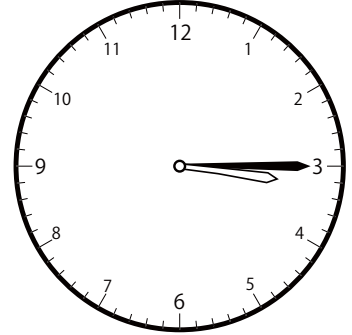
① 3時15分の時計を見つけよう



()




()

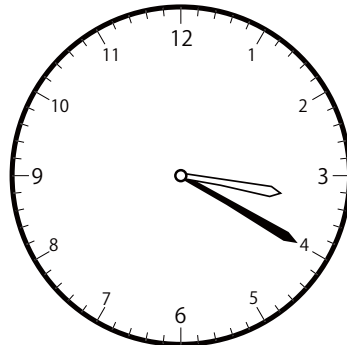


()

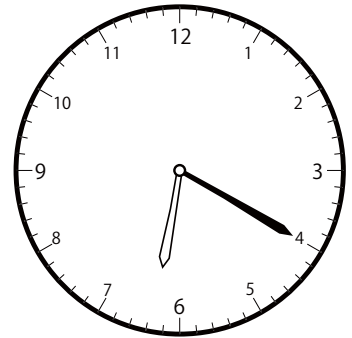
② 3時20分の時計を見つけよう



()

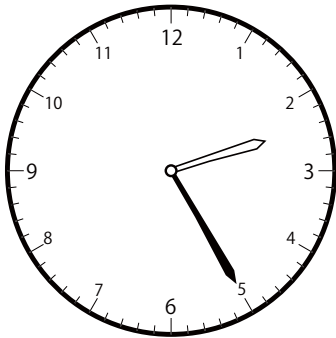


()

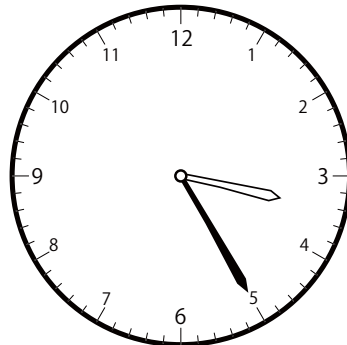


()

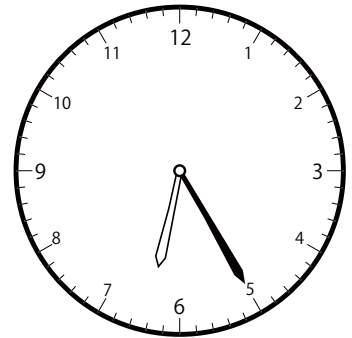
③ 3時25分の時計を見つけよう



()



()




()

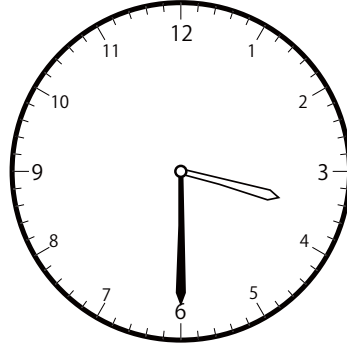
〇〇時5分単位の時計を見つけよう【D1】

問題と同じ時間の時計を見つけて()に○をつけましょう。

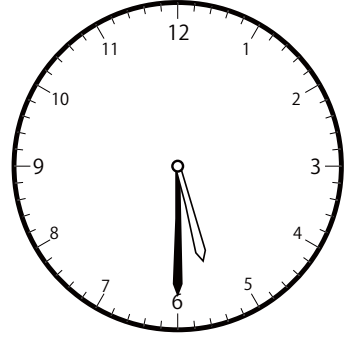
① 3時30分の時計を見つけよう



()




()

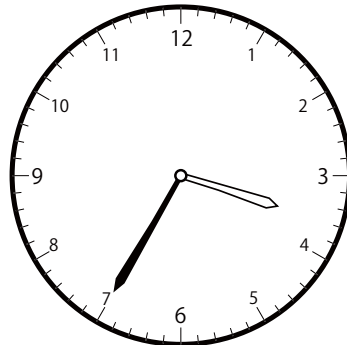


()

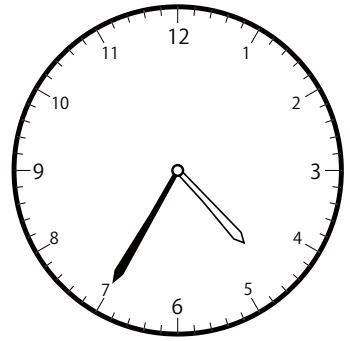
② 3時35分の時計を見つけよう



()

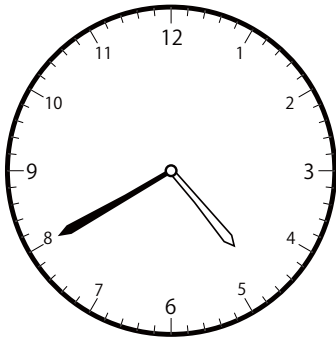


()

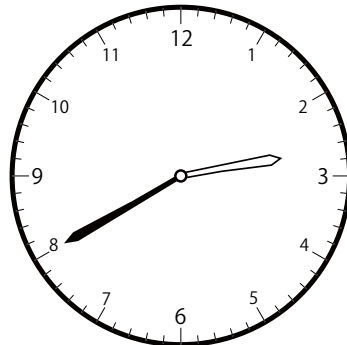


()

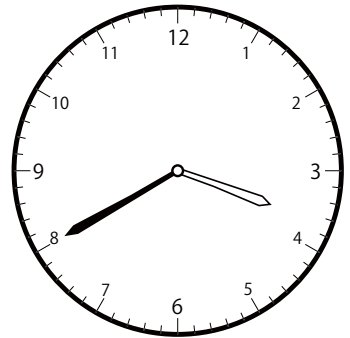
③ 3時40分の時計を見つけよう



()



()

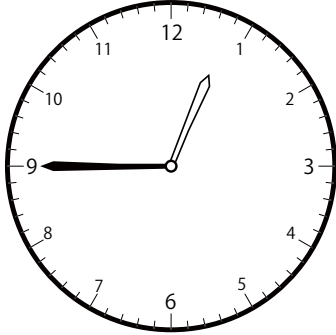


()

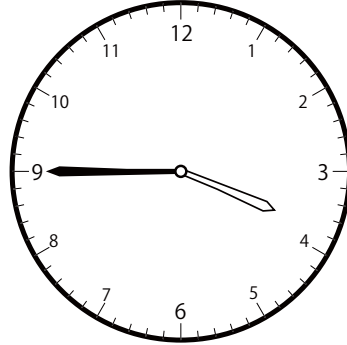
〇〇時5分単位の時計を見つけよう【D1】

問題と同じ時間の時計を見つけて()に○をつけましょう。


① 3時45分の時計を見つけよう



()




()




()


② 3時50分の時計を見つけよう



()




()




()


③ 3時55分の時計を見つけよう




()




()




()

〇〇時^じ5分^{ふん}単位の時計^{とけい}を見つけよう【DI】問題^{もんだい}と同じ時間^{おなじかん}の時計^{とけい}を見つけて()に〇をつけましょう。① 4時^じ0分^{ふん}の時計^{とけい}を見つけよう


()




()




()

② 4時^じ5分^{ふん}の時計^{とけい}を見つけよう

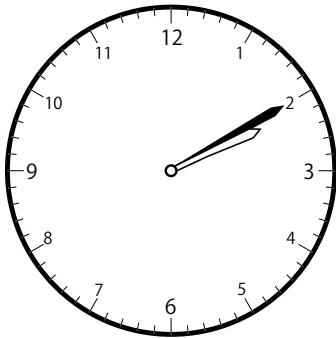
()




()



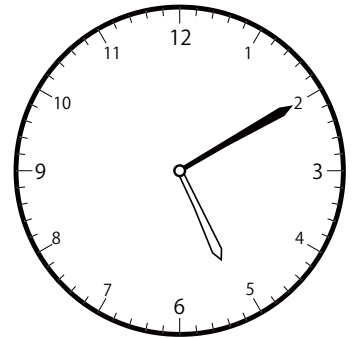
()

③ 4時^じ10分^{ふん}の時計^{とけい}を見つけよう

()



()

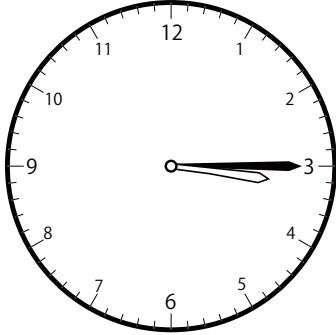


()

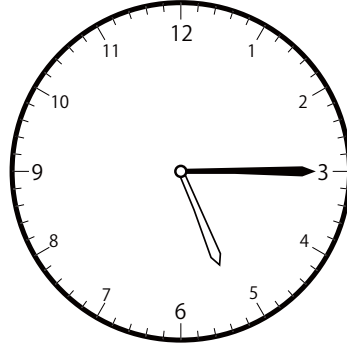
じ ふん たん い とけい み
〇〇時5分単位の時計を見つけよう【DI】

もんだい おな じかん とけい み
問題と同じ時間の時計を見つけて()に○をつけましょう。

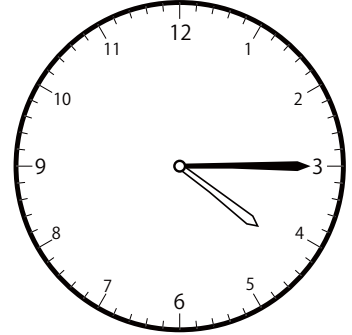
① 4時15分の時計を見つけよう



()

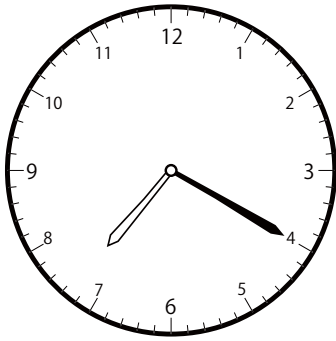


()

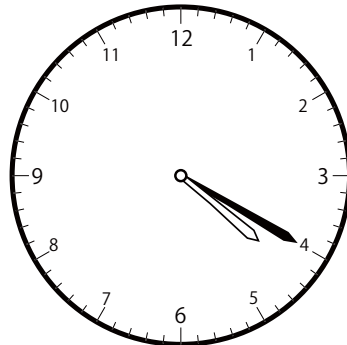


()


② 4時20分の時計を見つけよう



()

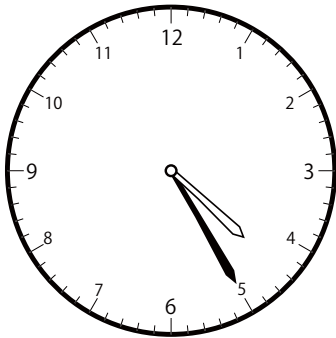


()

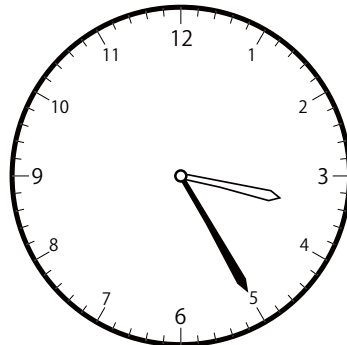


()

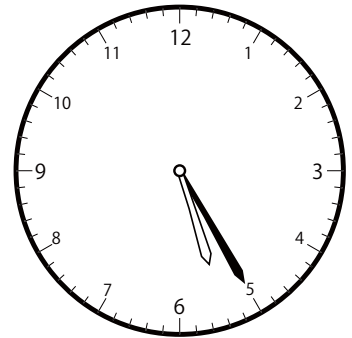
③ 4時25分の時計を見つけよう



()

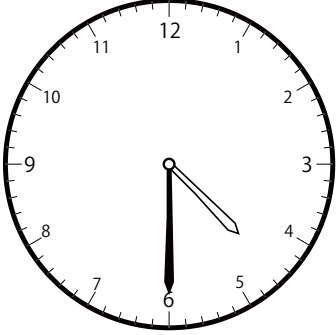


()

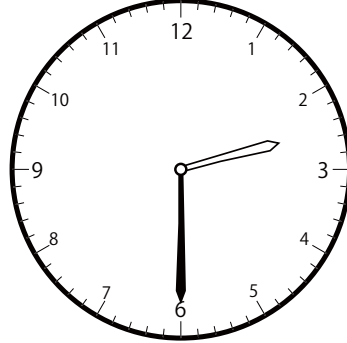


()

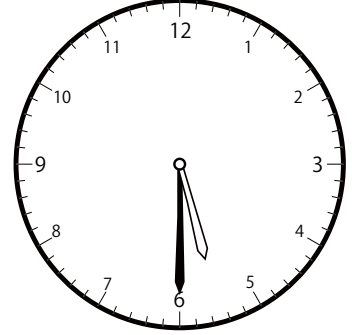
① 4時30分の時計を見つけよう



()

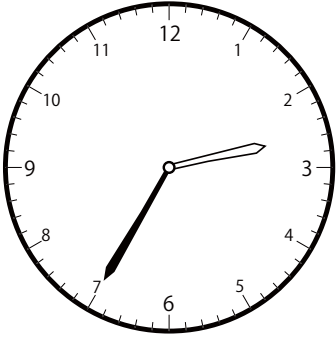


()

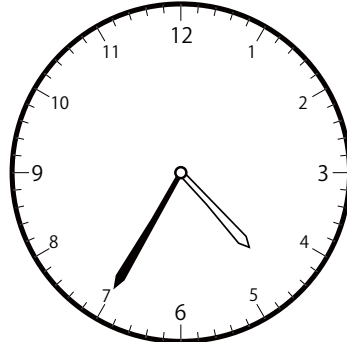


()

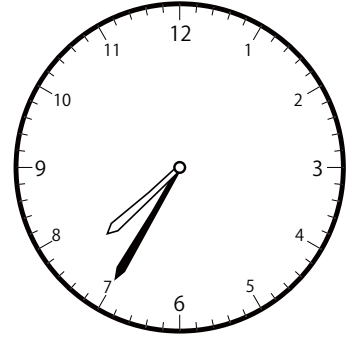
② 4時35分の時計を見つけよう



()




()

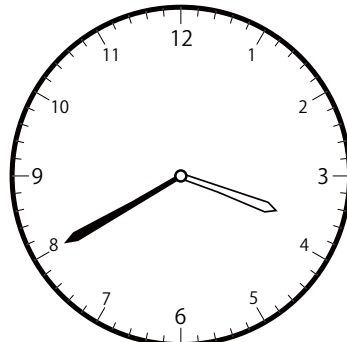


()

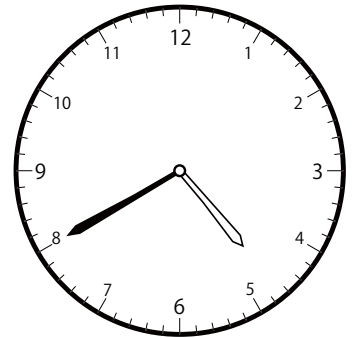
③ 4時40分の時計を見つけよう



()



()




()

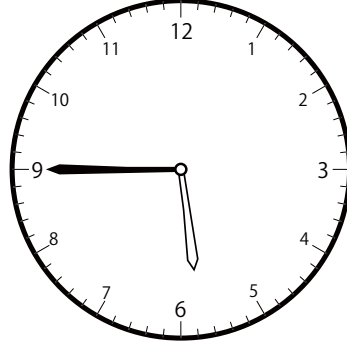
〇〇時5分単位の時計を見つけよう【D1】

問題と同じ時間の時計を見つけて()に○をつけましょう。


① 4時45分の時計を見つけよう



()




()




()

② 4時50分の時計を見つけよう



()




()




()


③ 4時55分の時計を見つけよう




()




()




()

〇〇時^じ5分^{ふん}単位の^{たんい}時計^{とけい}を見つけよう【D1】問題^{もんだい}と同じ時間^{おなじかん}の時計^{とけい}を見つけて()に〇をつけましょう。① 5時^じ0分^{ふん}の時計^{とけい}を見つけよう


()




()



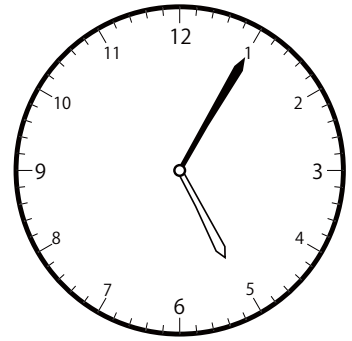
()

② 5時^じ5分^{ふん}の時計^{とけい}を見つけよう


()



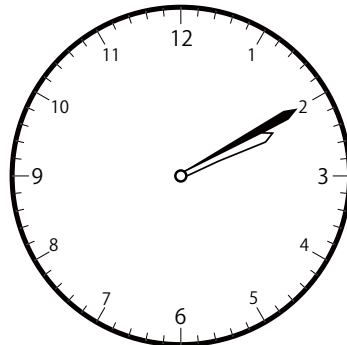
()



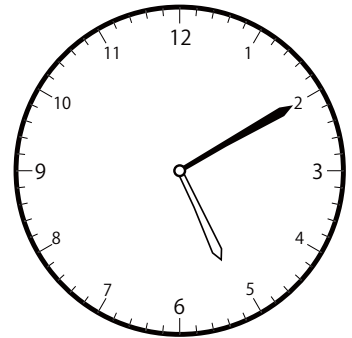
()

③ 5時^じ10分^{ふん}の時計^{とけい}を見つけよう

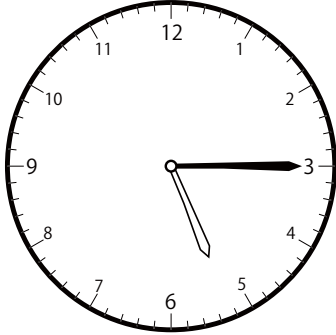
()



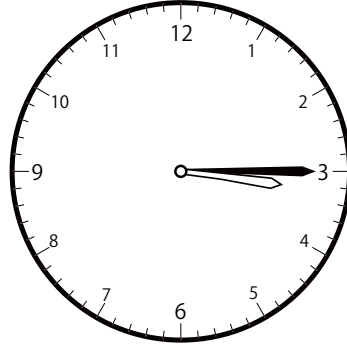
()



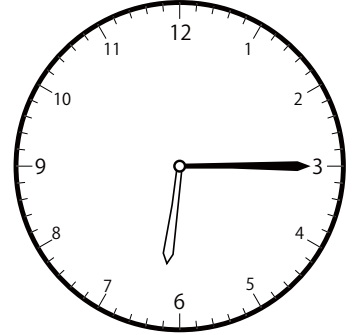
()

〇〇時^じ5分^{ふん}単位の時計^{とけい}を見つけよう【DI】問題^{もんだい}と同じ時間^{おなじかん}の時計^{とけい}を見つけて()に〇をつけましょう。① 5時^じ15分^{ふん}の時計^{とけい}を見つけよう

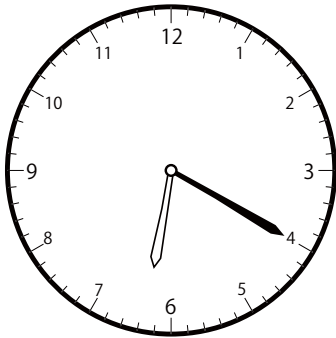
()



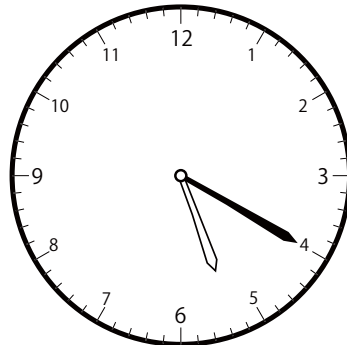
()



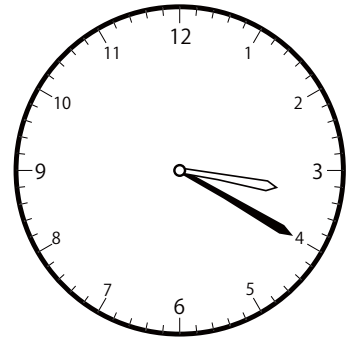
()

② 5時^じ20分^{ふん}の時計^{とけい}を見つけよう

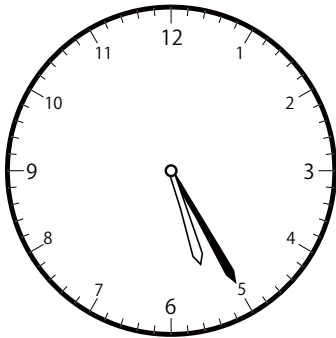
()



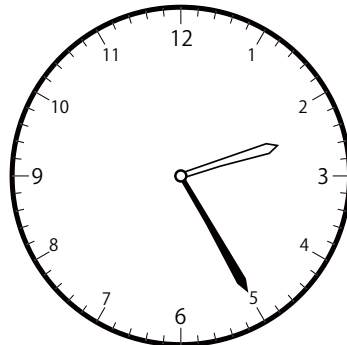
()



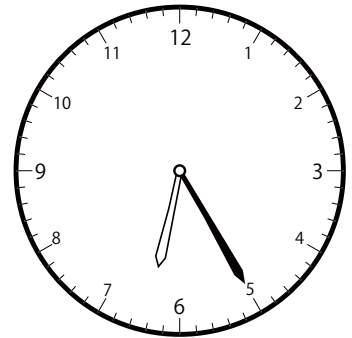
()

③ 5時^じ25分^{ふん}の時計^{とけい}を見つけよう

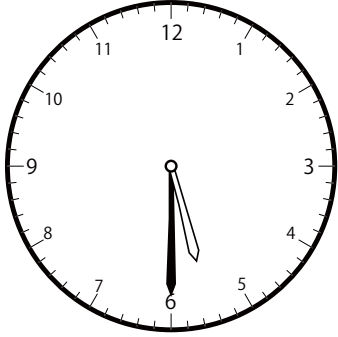
()




()



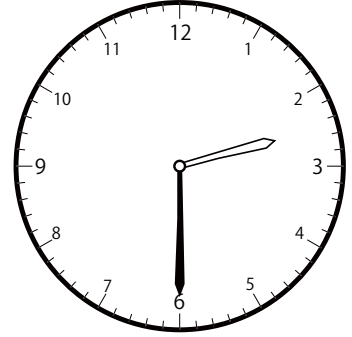
()

〇〇時^じ5分^{ふん}単位の時計^{とけい}を見つけよう【D1】問題^{もんだい}と同じ時間^{おなじかん}の時計^{とけい}を見つけて()に〇をつけましょう。① 5時^じ30分^{ふん}の時計^{とけい}を見つけよう

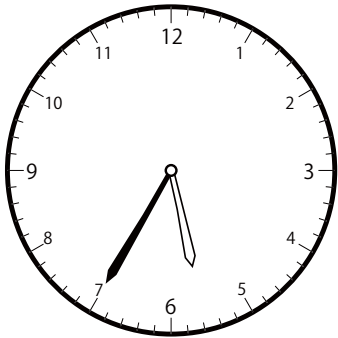
()




()



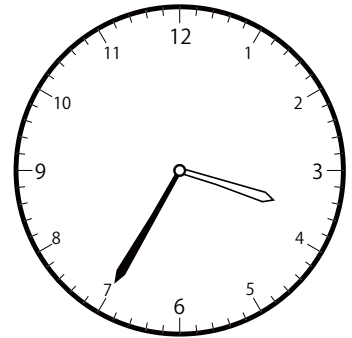
()

② 5時^じ35分^{ふん}の時計^{とけい}を見つけよう

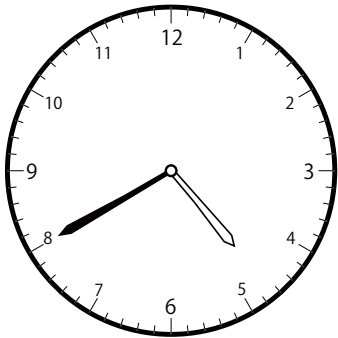
()



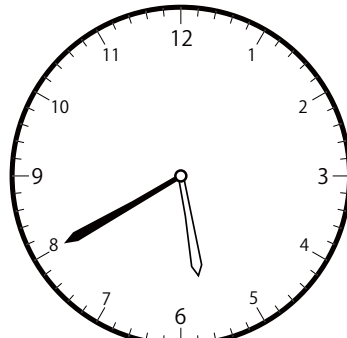
()



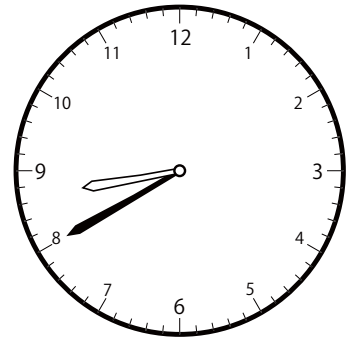
()

③ 5時^じ40分^{ふん}の時計^{とけい}を見つけよう

()



()

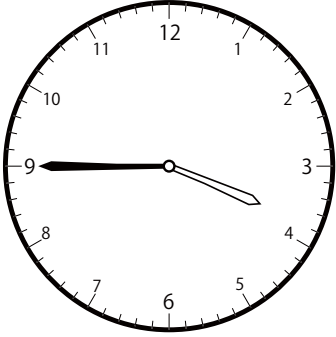


()

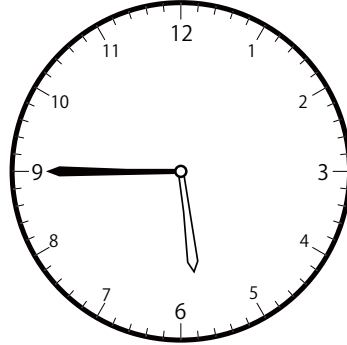
〇〇時^じ5分^{ふん}単位^{たんい}の時計^{とけい}を見つけよう【D1】

問題^{もんだい}と同じ時間^{おなじかん}の時計^{とけい}を見つけて()に〇をつけましょう。


① 5時^じ45分^{ふん}の時計^{とけい}を見つけよう



()



()




()


② 5時^じ50分^{ふん}の時計^{とけい}を見つけよう



()




()

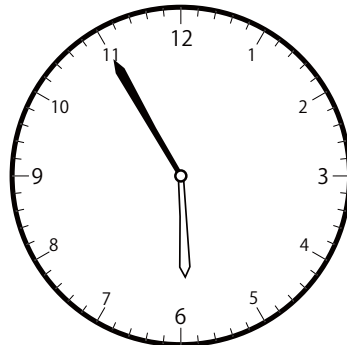


()


③ 5時^じ55分^{ふん}の時計^{とけい}を見つけよう



()



()




()


じ ふん たん い とけい み
〇〇時5分単位の時計を見つけよう【D1】

もんだい おな じかん とけい み
問題と同じ時間の時計を見つけて()に○をつけましょう。


① 6時0分の時計を見つけよう



()




()




()

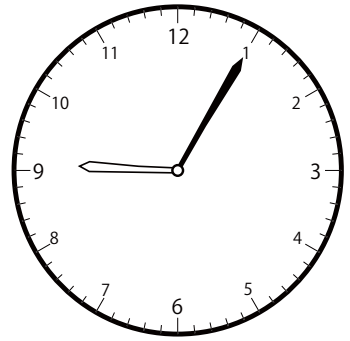
② 6時5分の時計を見つけよう



()




()




()


③ 6時10分の時計を見つけよう



()



()

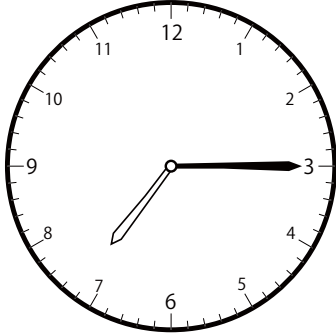


()

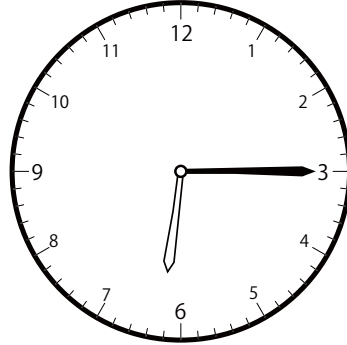
じ ふん たん い とけい み
〇〇時5分単位の時計を見つけよう【DI】

もんだい おな じかん とけい み
問題と同じ時間の時計を見つけて()に○をつけましょう。

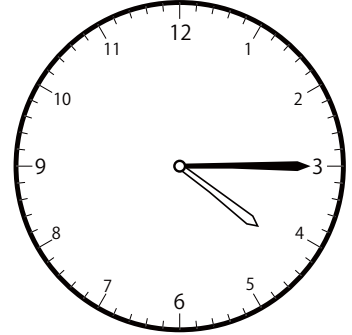
① 6時15分の時計を見つけよう



()




()

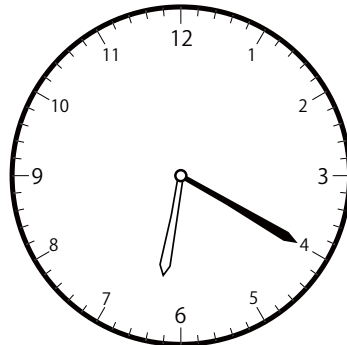


()

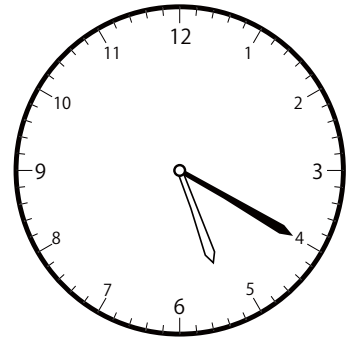
② 6時20分の時計を見つけよう



()

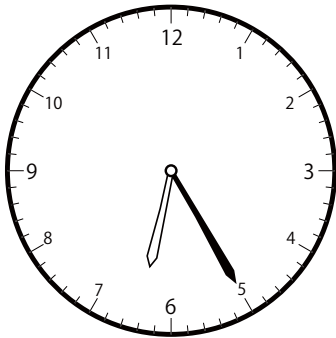


()

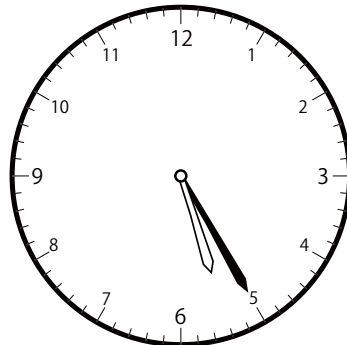


()

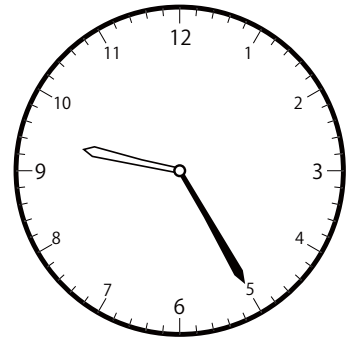
③ 6時25分の時計を見つけよう



()



()

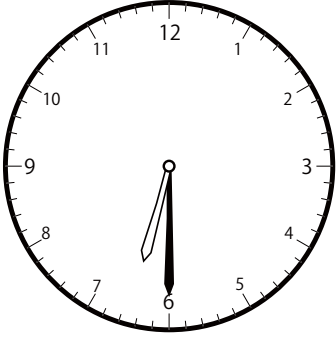


()

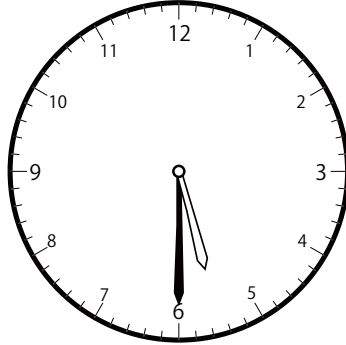
〇〇時5分単位の時計を見つけよう【D1】

問題と同じ時間の時計を見つけて()に○をつけましょう。

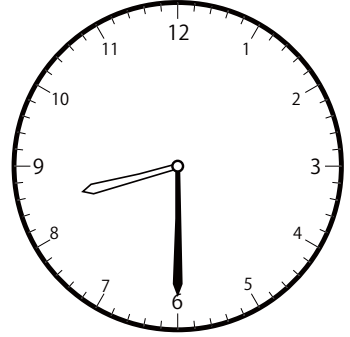
① 6時30分の時計を見つけよう



()




()

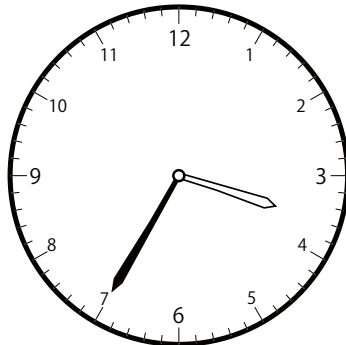


()

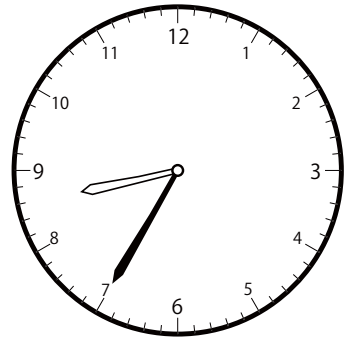
② 6時35分の時計を見つけよう



()




()

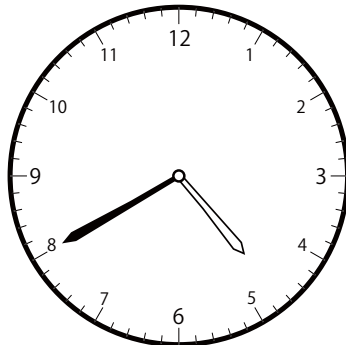


()


③ 6時40分の時計を見つけよう



()



()




()


〇〇時5分単位の時計を見つけよう【D1】

問題と同じ時間の時計を見つけて()に○をつけましょう。

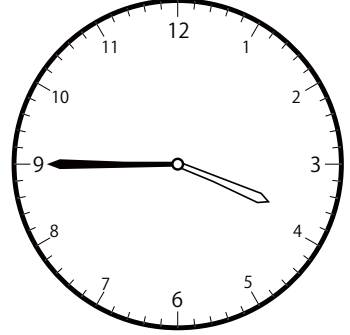
① 6時45分の時計を見つけよう



()




()




()


② 6時50分の時計を見つけよう



()




()

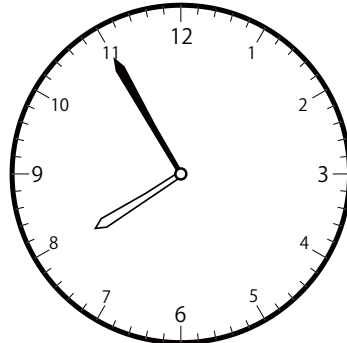


()

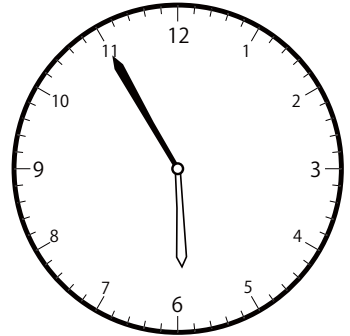
③ 6時55分の時計を見つけよう



()



()




()


〇〇時5分単位の時計を見つけよう【D1】

問題と同じ時間の時計を見つけて()に○をつけましょう。


① 7時0分の時計を見つけよう



()




()

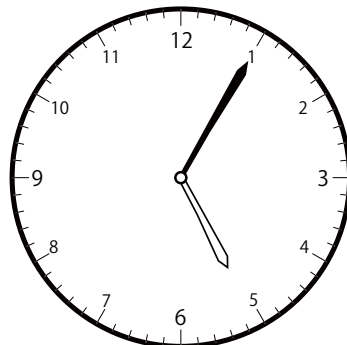


()

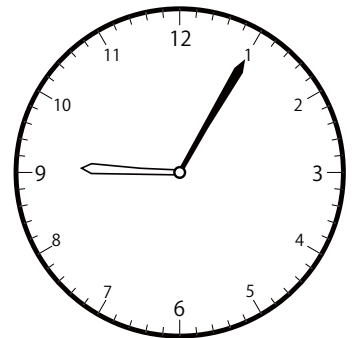
② 7時5分の時計を見つけよう



()




()




()


③ 7時10分の時計を見つけよう



()



()

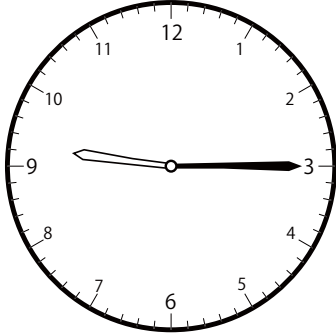


()

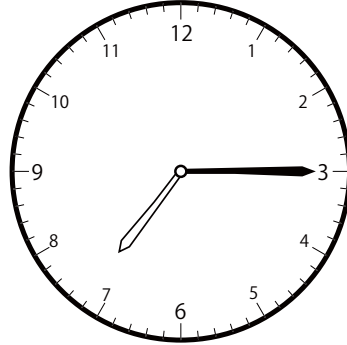
じ ふん たん い とけい み
〇〇時5分単位の時計を見つけよう【DI】

もんだい おな じかん とけい み
問題と同じ時間の時計を見つけて()に○をつけましょう。

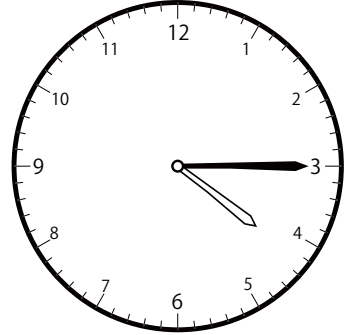
① 7時15分の時計を見つけよう



()




()

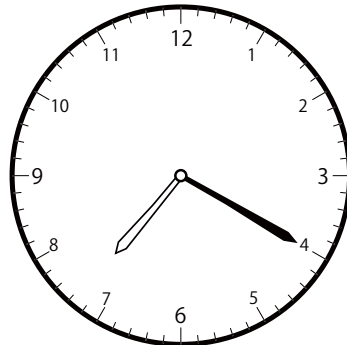


()

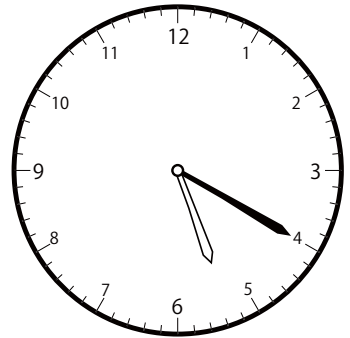
② 7時20分の時計を見つけよう



()

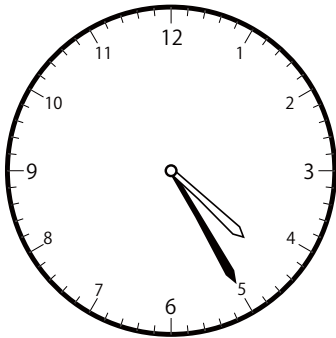


()

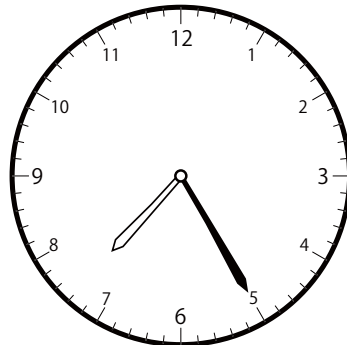


()


③ 7時25分の時計を見つけよう



()



()




()

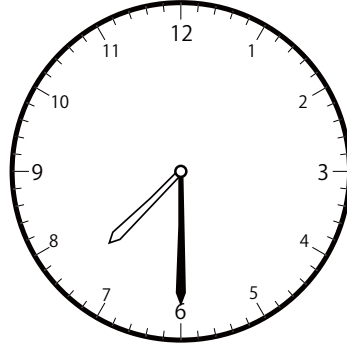
〇〇時^じ5分^{ふん}単位の時計^{とけい}を見つけよう【D1】

問題^{もんだい}と同じ時間^{おなじかん}の時計^{とけい}を見つけて()に〇をつけましょう。

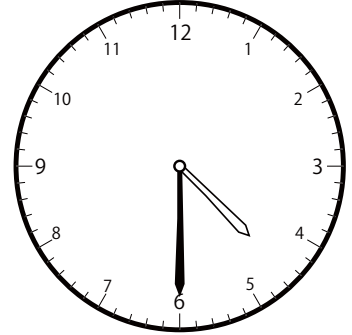
① 7時^じ30分^{ふん}の時計^{とけい}を見つけよう



()

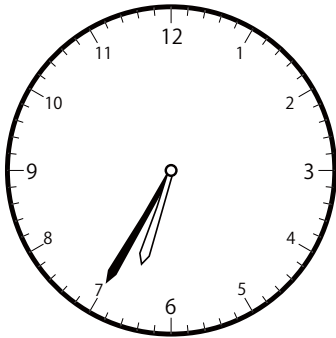


()

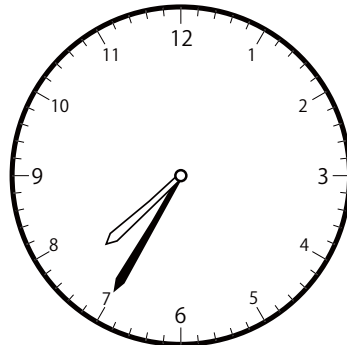


()

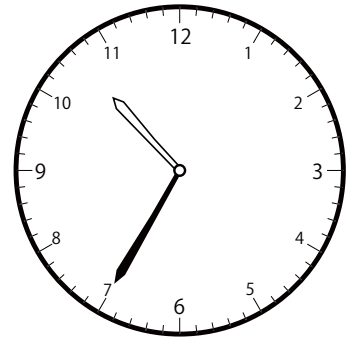
② 7時^じ35分^{ふん}の時計^{とけい}を見つけよう



()

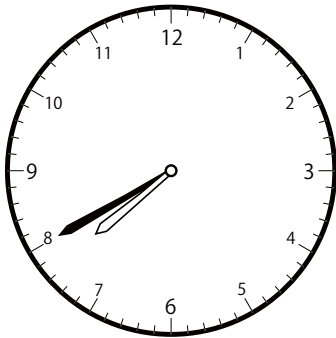


()

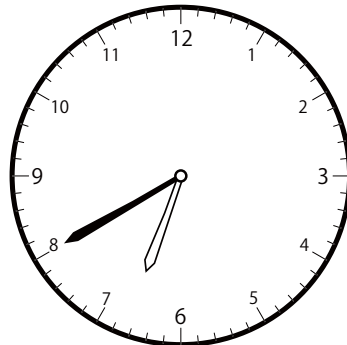


()


③ 7時^じ40分^{ふん}の時計^{とけい}を見つけよう



()



()

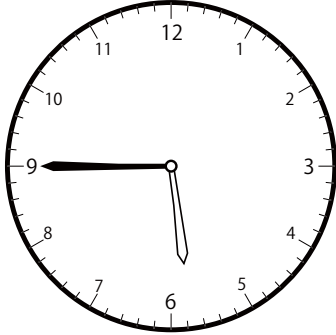


()


〇〇時5分単位の時計を見つけよう【D1】

問題と同じ時間の時計を見つけて()に○をつけましょう。


① 7時45分の時計を見つけよう



()




()




()


② 7時50分の時計を見つけよう



()

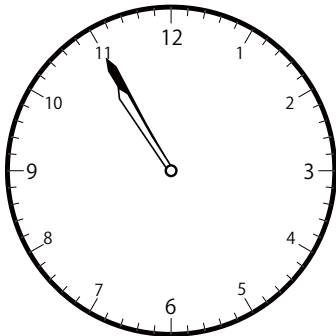


()

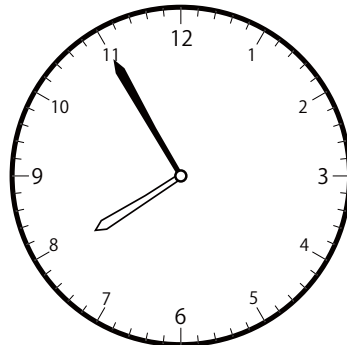


()


③ 7時55分の時計を見つけよう



()



()




()


〇〇時5分単位の時計を見つけよう【D1】

問題と同じ時間の時計を見つけて()に○をつけましょう。


① 8時0分の時計を見つけよう



()




()




()

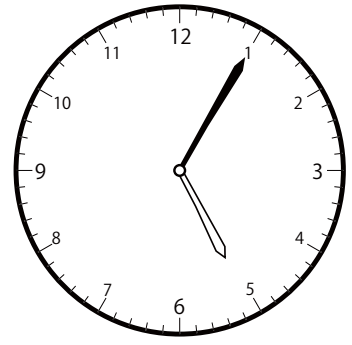
② 8時5分の時計を見つけよう



()




()

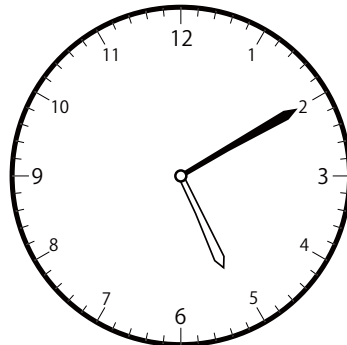


()


③ 8時10分の時計を見つけよう



()



()

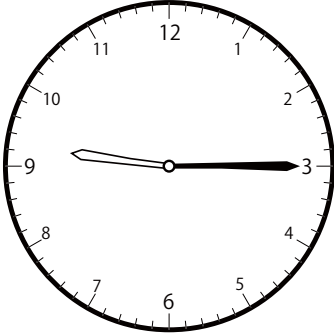


()

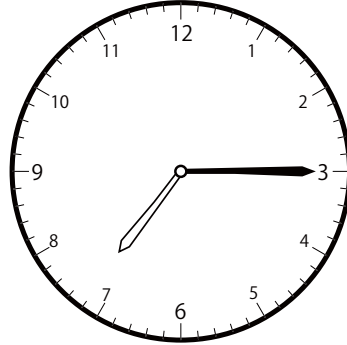
〇〇時5分単位の時計を見つけよう【DI】

問題と同じ時間の時計を見つけて()に○をつけましょう。

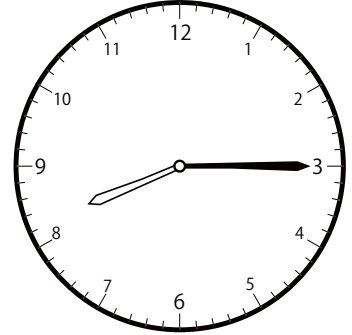
① 8時15分の時計を見つけよう



()




()

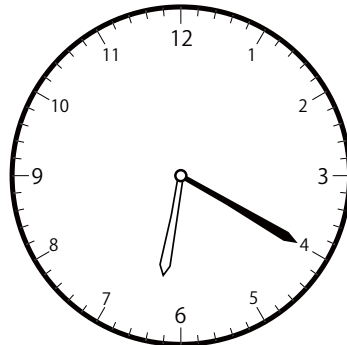


()

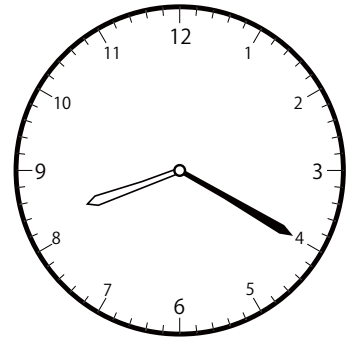
② 8時20分の時計を見つけよう



()

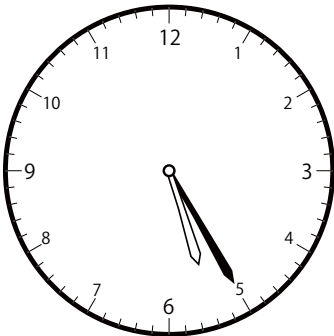


()

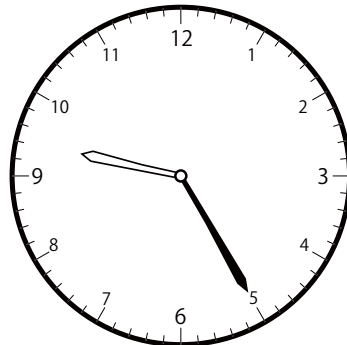


()

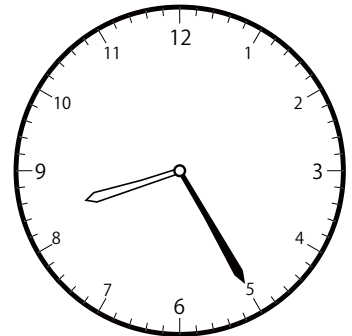
③ 8時25分の時計を見つけよう



()



()




()

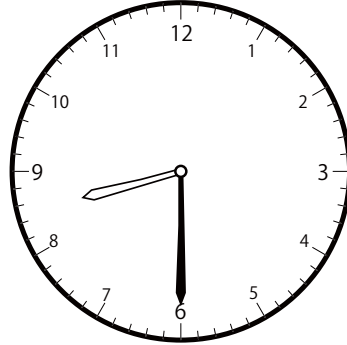
じ ふん たん い とけい み
〇〇時5分単位の時計を見つけよう【D1】

もんだい おな じかん とけい み
問題と同じ時間の時計を見つけて()に○をつけましょう。


① 8時30分の時計を見つけよう



()




()

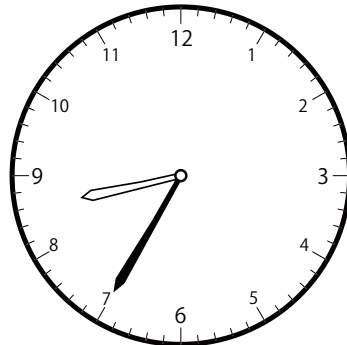


()


② 8時35分の時計を見つけよう



()




()

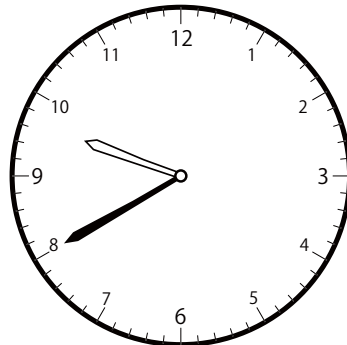


()

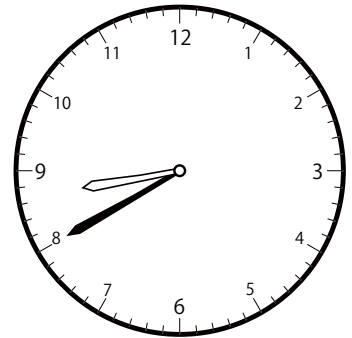
③ 8時40分の時計を見つけよう



()



()




()

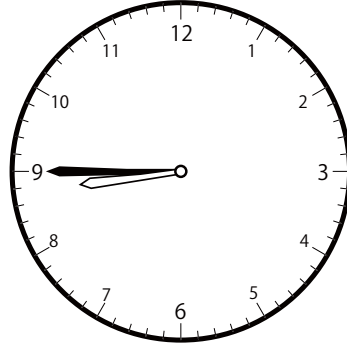
〇〇時5分単位の時計を見つけよう【D1】

問題と同じ時間の時計を見つけて()に○をつけましょう。


① 8時45分の時計を見つけよう



()




()




()


② 8時50分の時計を見つけよう



()

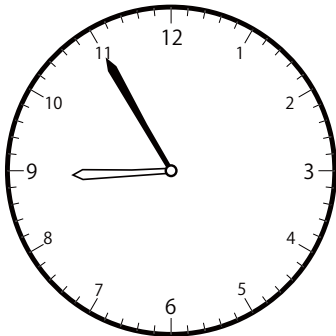


()

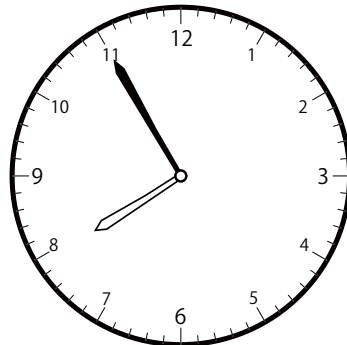


()


③ 8時55分の時計を見つけよう




()




()



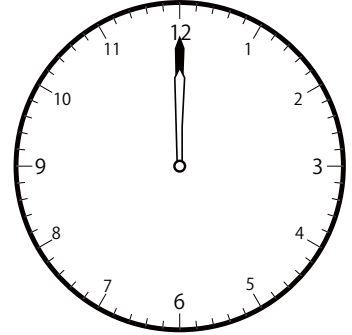
()

〇〇時^じ5分^{ふん}単位の時計^{とけい}を見つけよう【D1】問題^{もんだい}と同じ時間^{おなじかん}の時計^{とけい}を見つけて()に〇をつけましょう。① 9時^じ0分^{ふん}の時計^{とけい}を見つけよう


()




()




()

② 9時^じ5分^{ふん}の時計^{とけい}を見つけよう


()




()




()

③ 9時^じ10分^{ふん}の時計^{とけい}を見つけよう

()



()




()

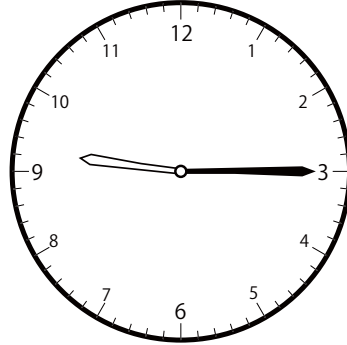
〇〇時5分単位の時計を見つけよう【DI】

問題と同じ時間の時計を見つけて()に○をつけましょう。

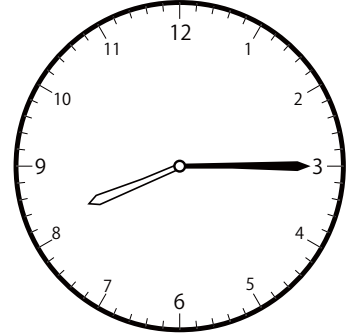
① 9時15分の時計を見つけよう



()




()

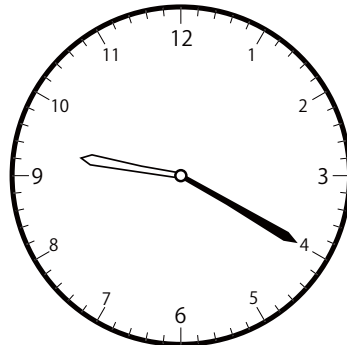


()

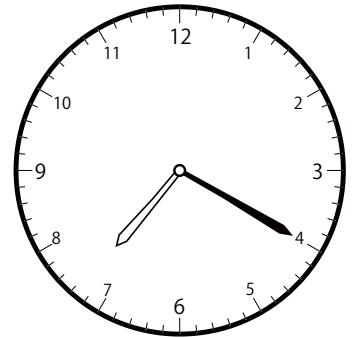
② 9時20分の時計を見つけよう



()

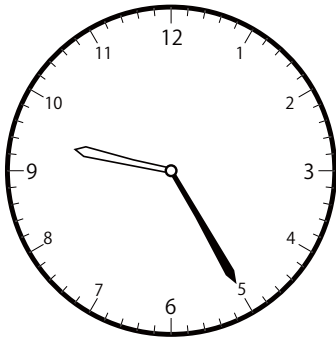


()

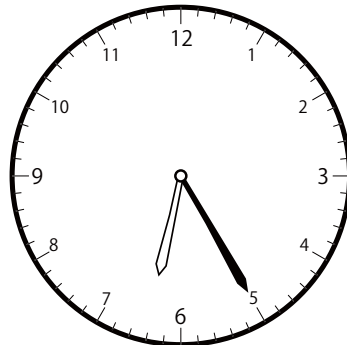


()


③ 9時25分の時計を見つけよう



()



()




()

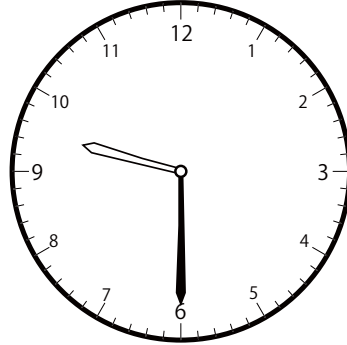
〇〇時5分単位の時計を見つけよう【D1】

問題と同じ時間の時計を見つけて()に○をつけましょう。


① 9時30分の時計を見つけよう



()




()




()

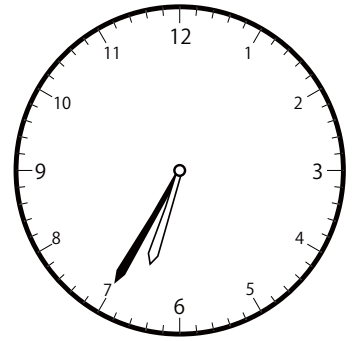
② 9時35分の時計を見つけよう



()




()

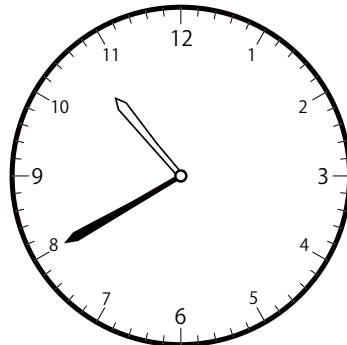


()

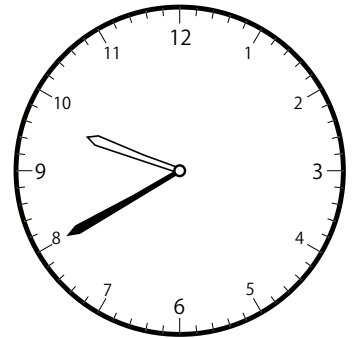
③ 9時40分の時計を見つけよう



()



()




()

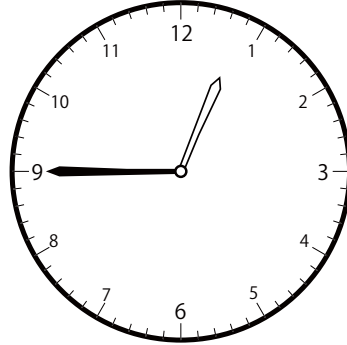
〇〇時5分単位の時計を見つけよう【D1】

問題と同じ時間の時計を見つけて()に○をつけましょう。

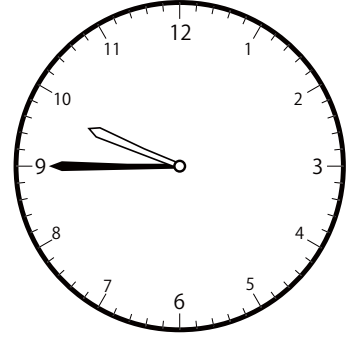
① 9時45分の時計を見つけよう



()




()




()

② 9時50分の時計を見つけよう



()




()

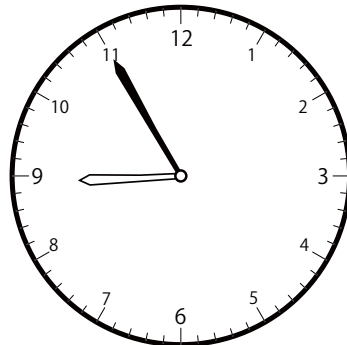


()


③ 9時55分の時計を見つけよう



()



()




()


〇〇時5分単位の時計を見つけよう【D1】

問題と同じ時間の時計を見つけて()に○をつけましょう。


① 10時 0分の時計を見つけよう



()




()




()


② 10時 5分の時計を見つけよう



()




()




()


③ 10時 10分の時計を見つけよう




()



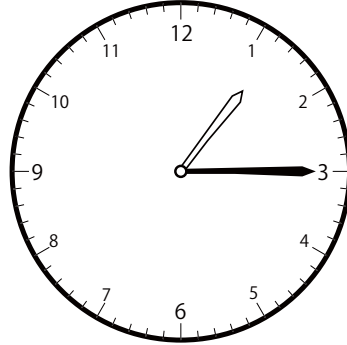
()



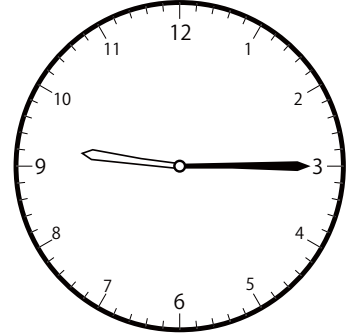
()

〇〇時^じ5分^{ふん}単位の時計^{とけい}を見つけよう【DI】問題^{もんだい}と同じ時間^{おなじかん}の時計^{とけい}を見つけ^みて()に〇をつけましょう。① 10時^じ 15分^{ふん}の時計^{とけい}を見つけよう


()




()




()

② 10時^じ 20分^{ふん}の時計^{とけい}を見つけよう


()



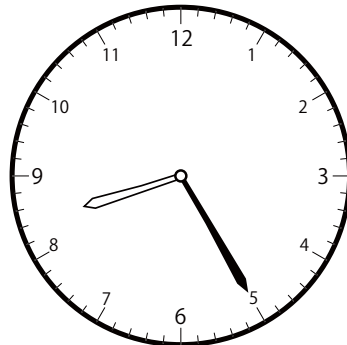
()




()

③ 10時^じ 25分^{ふん}の時計^{とけい}を見つけよう


()




()




()

〇〇時^じ5分^{ふん}単位の時計^{とけい}を見つけよう【D1】問題^{もんだい}と同じ時間^{おなじかん}の時計^{とけい}を見つけて()に〇をつけましょう。① 10時^じ30分^{ふん}の時計^{とけい}を見つけよう


()




()




()

② 10時^じ35分^{ふん}の時計^{とけい}を見つけよう


()




()




()

③ 10時^じ40分^{ふん}の時計^{とけい}を見つけよう

()



()




()

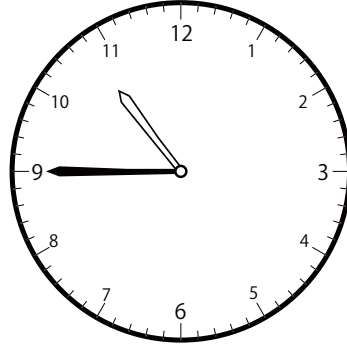
〇〇時^じ5分^{ふん}単位^{たんい}の時計^{とけい}を見つけよう【D1】

問題^{もんだい}と同じ時間^{おなじかん}の時計^{とけい}を見つけて()に〇をつけましょう。

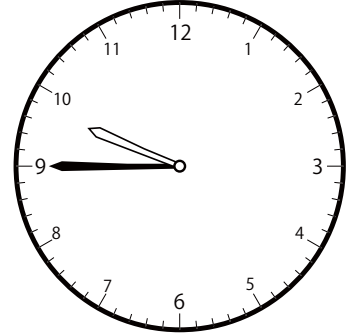
① 10時^じ45分^{ふん}の時計^{とけい}を見つけよう



()




()




()


② 10時^じ50分^{ふん}の時計^{とけい}を見つけよう



()




()

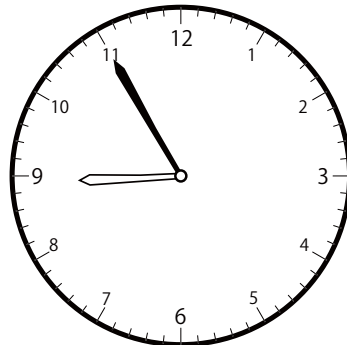


()

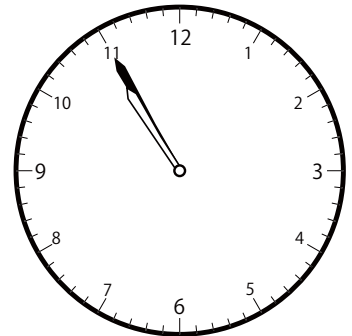
③ 10時^じ55分^{ふん}の時計^{とけい}を見つけよう



()



()




()

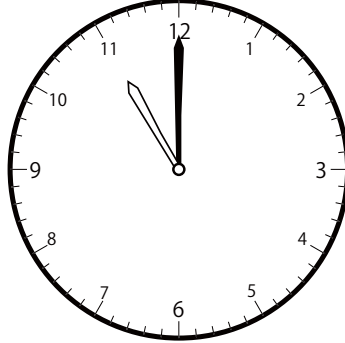
〇〇時5分単位の時計を見つけよう【D1】

問題と同じ時間の時計を見つけて()に○をつけましょう。


① 11時0分の時計を見つけよう



()




()




()


② 11時5分の時計を見つけよう



()




()

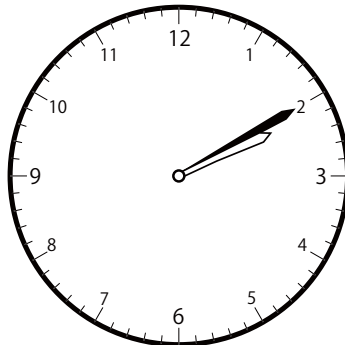


()


③ 11時10分の時計を見つけよう



()



()




()

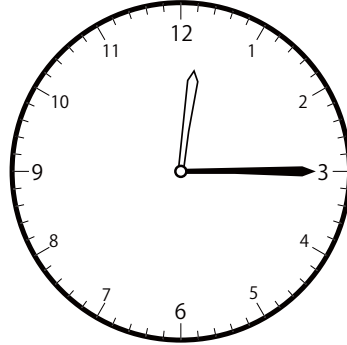
じ ふん たん い とけい み
〇〇時5分単位の時計を見つけよう【D1】

もんだい おな じかん とけい み
問題と同じ時間の時計を見つけて()に○をつけましょう。


① 11時15分の時計を見つけよう



()




()




()

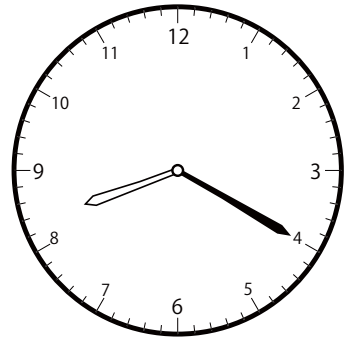
② 11時20分の時計を見つけよう



()




()

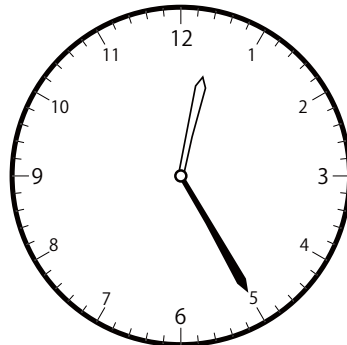


()


③ 11時25分の時計を見つけよう



()



()




()

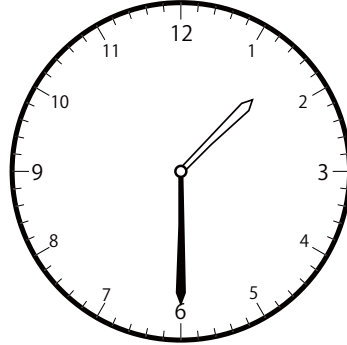
〇〇時^じ5分^{ふん}単位^{たんい}の時計^{とけい}を見つけよう【D1】

問題^{もんだい}と同じ時間^{おなじかん}の時計^{とけい}を見つけて()に〇をつけましょう。


① 11時^じ30分^{ふん}の時計^{とけい}を見つけよう



()

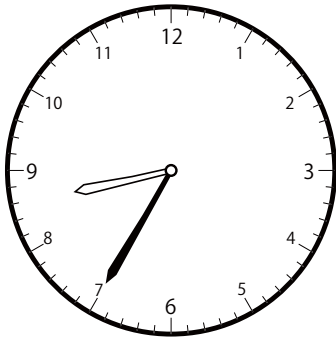


()




()

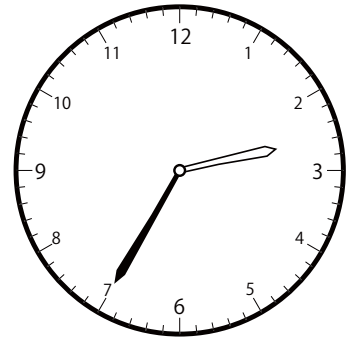
② 11時^じ35分^{ふん}の時計^{とけい}を見つけよう



()




()




()


③ 11時^じ40分^{ふん}の時計^{とけい}を見つけよう



()



()




()

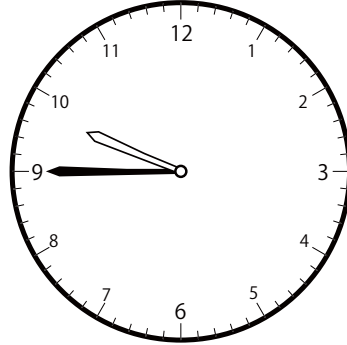
〇〇時5分単位の時計を見つけよう【D1】

問題と同じ時間の時計を見つけて()に○をつけましょう。

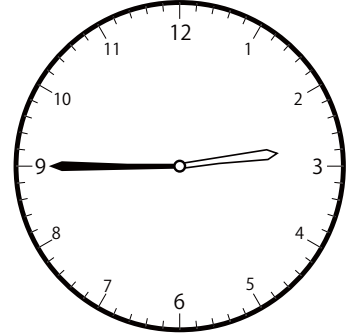
① 11時45分の時計を見つけよう



()




()




()

② 11時50分の時計を見つけよう



()




()

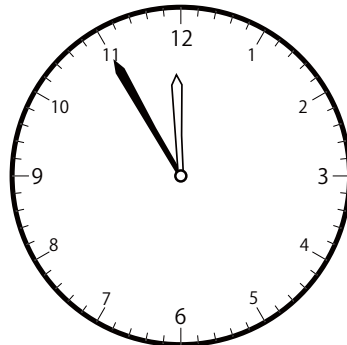


()


③ 11時55分の時計を見つけよう




()




()



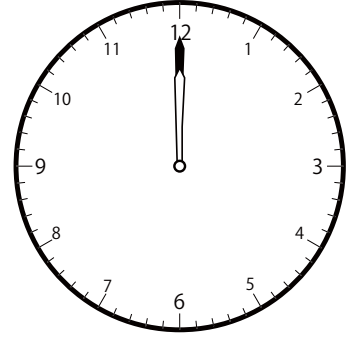
()

〇〇時^じ5分^{ふん}単位の時計^{とけい}を見つけよう【D1】問題^{もんだい}と同じ時間^{おなじかん}の時計^{とけい}を見つけ^みて()に〇をつけましょう。① 12時^じ 0分^{ふん}の時計^{とけい}を見つけよう


()




()




()

② 12時^じ 5分^{ふん}の時計^{とけい}を見つけよう


()




()



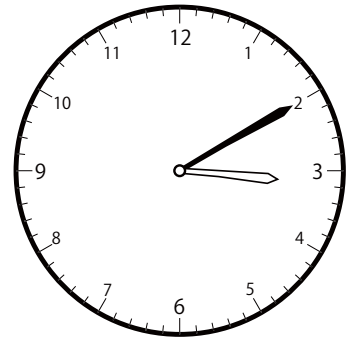
()

③ 12時^じ 10分^{ふん}の時計^{とけい}を見つけよう


()



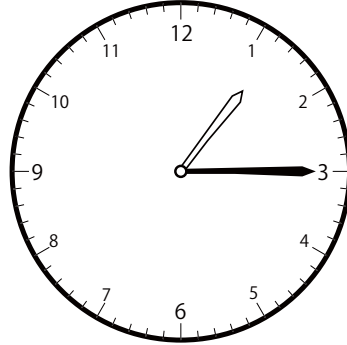
()




()

〇〇時^じ5分^{ふん}単位の時計^{とけい}を見つけよう【D1】問題^{もんだい}と同じ時間^{おなじかん}の時計^{とけい}を見つけて()に〇をつけましょう。① 12時^じ 15分^{ふん}の時計^{とけい}を見つけよう


()



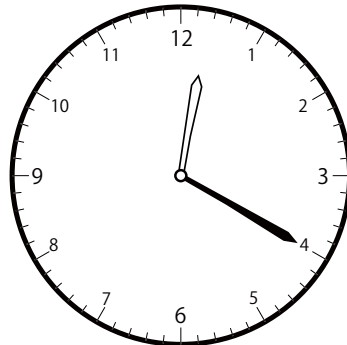
()




()

② 12時^じ 20分^{ふん}の時計^{とけい}を見つけよう


()



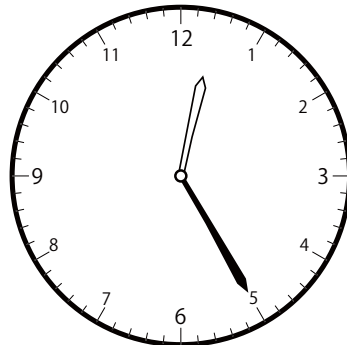
()



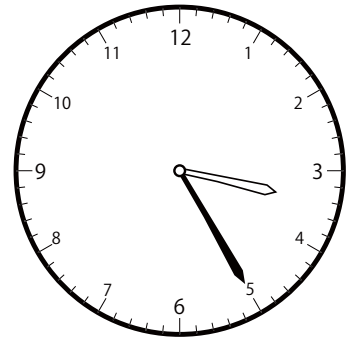
()

③ 12時^じ 25分^{ふん}の時計^{とけい}を見つけよう

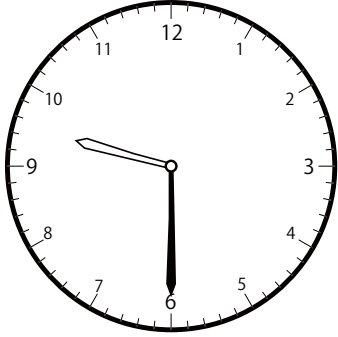
()




()



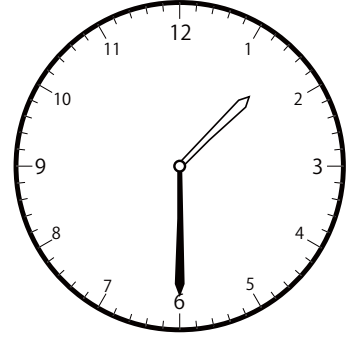
()

〇〇時^じ5分^{ふん}単位の時計^{とけい}を見つけよう【D1】問題^{もんだい}と同じ時間^{おなじかん}の時計^{とけい}を見つけ^みて()に〇をつけましょう。① 12時^じ30分^{ふん}の時計^{とけい}を見つけよう


()




()



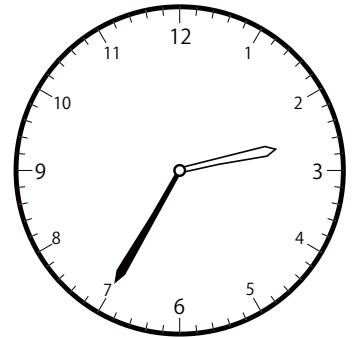
()

② 12時^じ35分^{ふん}の時計^{とけい}を見つけよう


()




()




()

③ 12時^じ40分^{ふん}の時計^{とけい}を見つけよう

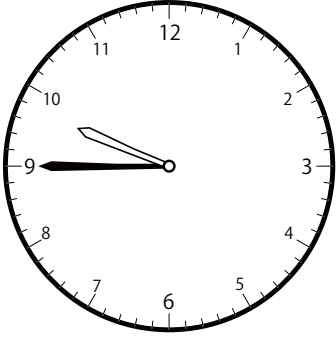
()



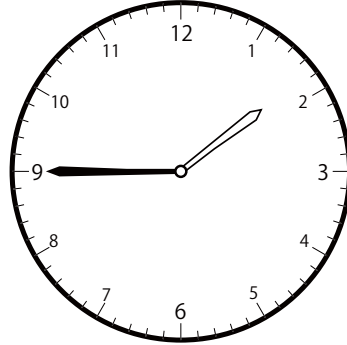
()



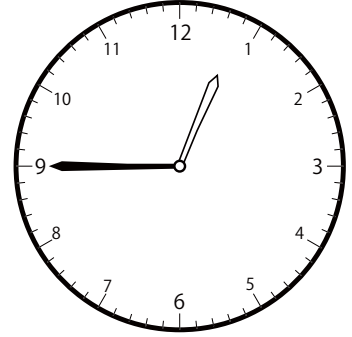
()

〇〇時^じ5分^{ふん}単位^{たんい}の時計^{とけい}を見つけよう【D1】問題^{もんだい}と同じ時間^{おなじかん}の時計^{とけい}を見つけ^みて()に〇をつけましょう。① 12時^じ45分^{ふん}の時計^{とけい}を見つけよう


()




()




()

② 12時^じ50分^{ふん}の時計^{とけい}を見つけよう


()




()




()

③ 12時^じ55分^{ふん}の時計^{とけい}を見つけよう

()



()



()