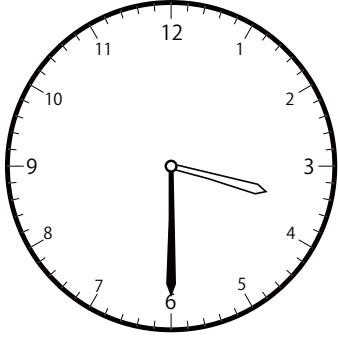



〇〇時<sup>じ</sup>30分<sup>ふん</sup>単位の<sup>たんい</sup>時計<sup>とけい</sup>を見つけよう【B1】  
問題<sup>もんだい</sup>と同じ時間<sup>おなじかん</sup>の時計<sup>とけい</sup>を見つけ<sup>み</sup>て( )に〇をつけましょう。


① 1時<sup>じ</sup>30分<sup>ふん</sup>の時計<sup>とけい</sup>を見つけよう



( )

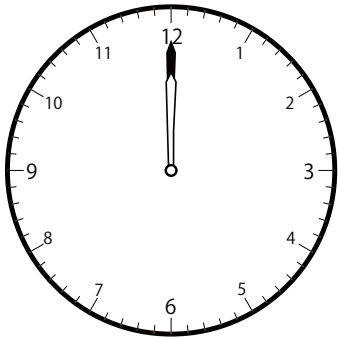


(  )




( )


② 2時<sup>じ</sup>0分<sup>ふん</sup>の時計<sup>とけい</sup>を見つけよう



( )

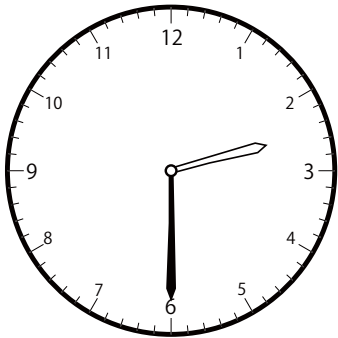


( )




(  )

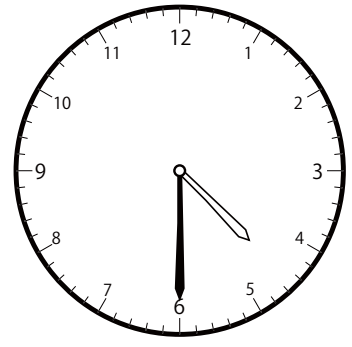
③ 2時<sup>じ</sup>30分<sup>ふん</sup>の時計<sup>とけい</sup>を見つけよう



(  )




( )




( )

〇〇時<sup>じ</sup>30分<sup>ふん</sup>単位の<sup>たんい</sup>時計<sup>とけい</sup>を見つけよう【B1】  
問題<sup>もんだい</sup>と同じ時間<sup>おなじかん</sup>の時計<sup>とけい</sup>を見つけて( )に〇をつけましょう。


① 3時<sup>じ</sup>0分<sup>ふん</sup>の時計<sup>とけい</sup>を見つけよう



( )




( )

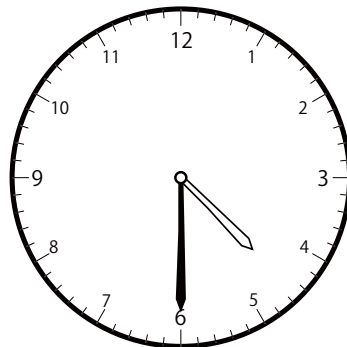


(  )

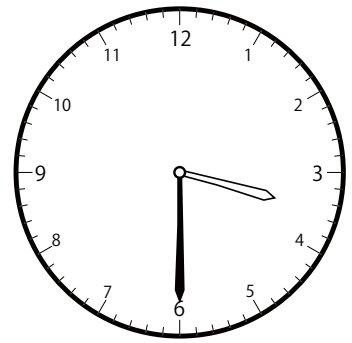
② 3時<sup>じ</sup>30分<sup>ふん</sup>の時計<sup>とけい</sup>を見つけよう



( )

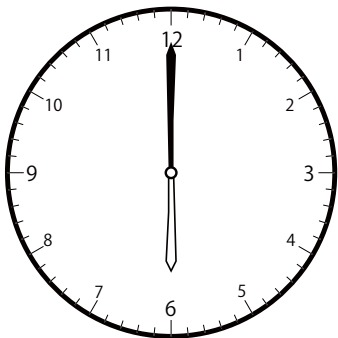


( )




(  )

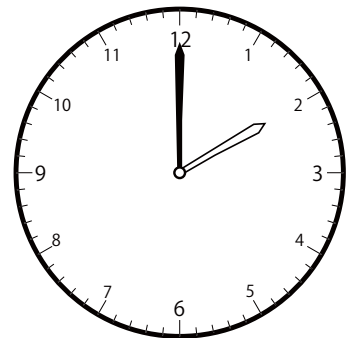
③ 4時<sup>じ</sup>0分<sup>ふん</sup>の時計<sup>とけい</sup>を見つけよう



( )



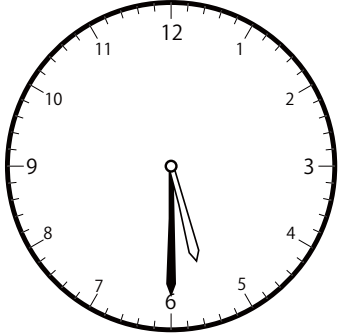
(  )



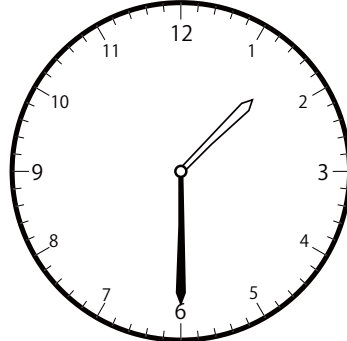
( )

〇〇時<sup>じ</sup>30分<sup>ふん</sup>単位の時計<sup>とけい</sup>を見つけよう【B1】  
問題<sup>もんだい</sup>と同じ時間<sup>おなじじかん</sup>の時計<sup>とけい</sup>を見つけて( )に〇をつけましょう。

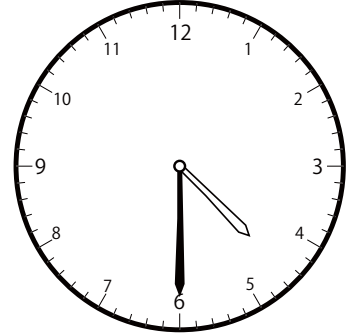
① 4時<sup>じ</sup>30分<sup>ふん</sup>の時計<sup>とけい</sup>を見つけよう



( )




( )




(  )

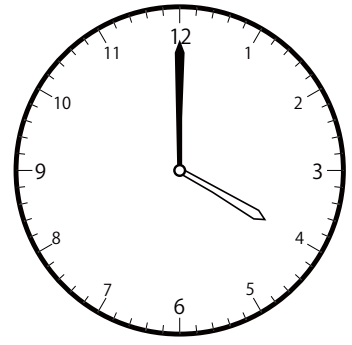
② 5時<sup>じ</sup>0分<sup>ふん</sup>の時計<sup>とけい</sup>を見つけよう



( )

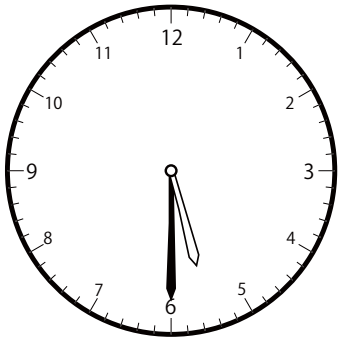


(  )

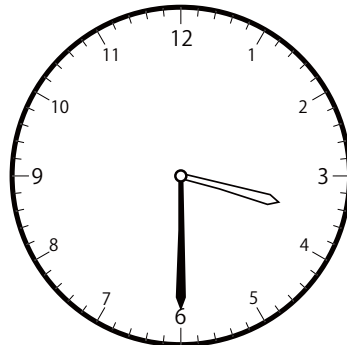


( )

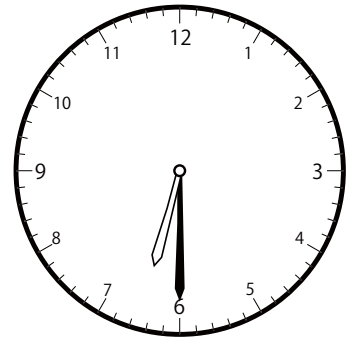
③ 5時<sup>じ</sup>30分<sup>ふん</sup>の時計<sup>とけい</sup>を見つけよう



(  )




( )



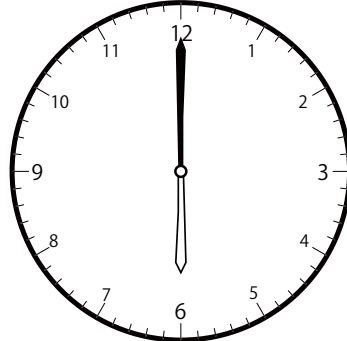

( )

〇〇時<sup>じ</sup>30分<sup>ふん</sup>単位の<sup>たんい</sup>時計<sup>とけい</sup>を見つけよう【B1】  
問題<sup>もんだい</sup>と同じ時間<sup>おなじかん</sup>の時計<sup>とけい</sup>を見つけて( )に〇をつけましょう。

① 6時<sup>じ</sup>0分<sup>ふん</sup>の時計<sup>とけい</sup>を見つけよう

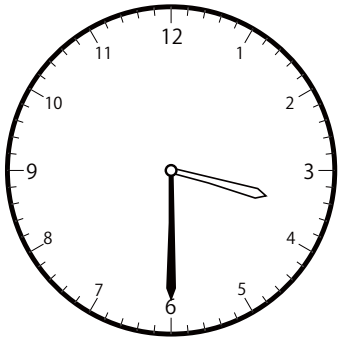


( )

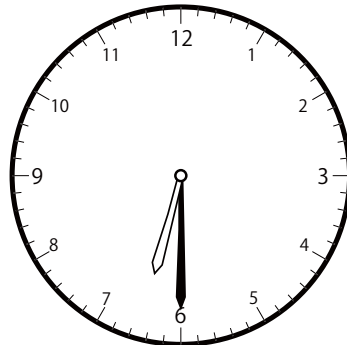
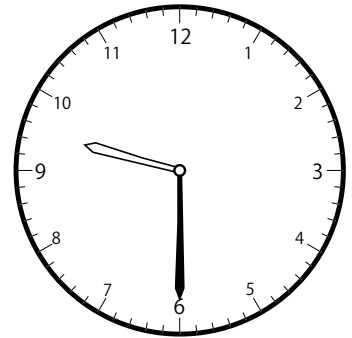
(  )

( )

② 6時<sup>じ</sup>30分<sup>ふん</sup>の時計<sup>とけい</sup>を見つけよう


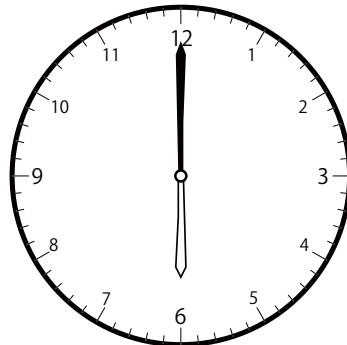


( )


(  )

( )

③ 7時<sup>じ</sup>0分<sup>ふん</sup>の時計<sup>とけい</sup>を見つけよう

(  )

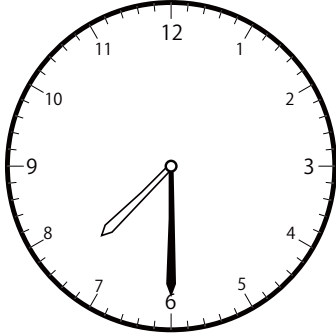
( )



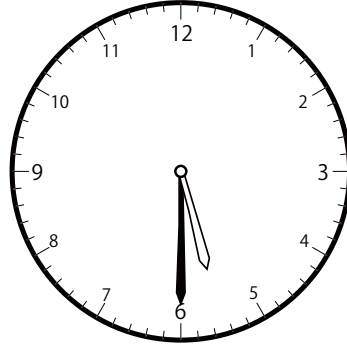
( )

〇〇時<sup>じ</sup>30分<sup>ふん</sup>単位の<sup>たんい</sup>時計<sup>とけい</sup>を見つけよう【B1】  
問題<sup>もんだい</sup>と同じ時間<sup>おなじかん</sup>の時計<sup>とけい</sup>を見つけ<sup>み</sup>て( )に〇をつけましょう。


① 7時<sup>じ</sup>30分<sup>ふん</sup>の時計<sup>とけい</sup>を見つけよう



(  )




( )




( )

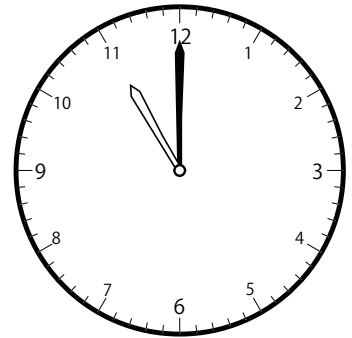
② 8時<sup>じ</sup>0分<sup>ふん</sup>の時計<sup>とけい</sup>を見つけよう



(  )

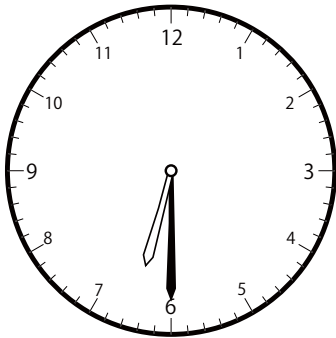


( )

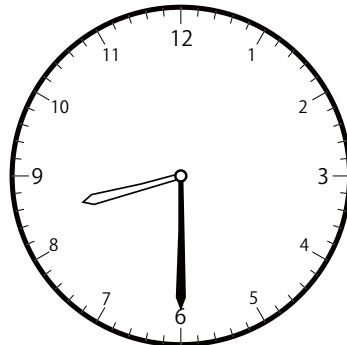


( )

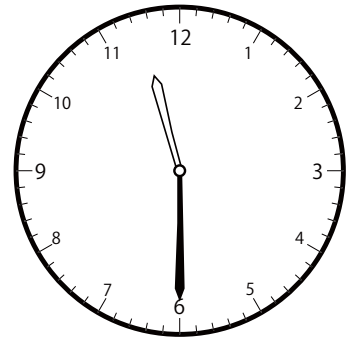
③ 8時<sup>じ</sup>30分<sup>ふん</sup>の時計<sup>とけい</sup>を見つけよう



( )




(  )



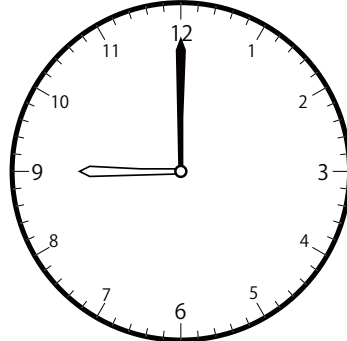
( )

〇〇時<sup>じ</sup>30分<sup>ふん</sup>単位の時計<sup>たんい とけい</sup>を見つけよう【B1】  
問題<sup>もんだい</sup>と同じ時間<sup>おなじかん</sup>の時計<sup>とけい</sup>を見つけ<sup>み</sup>て( )に〇をつけましょう。


① 9時<sup>じ</sup>0分<sup>ふん</sup>の時計<sup>とけい</sup>を見つけよう



( )

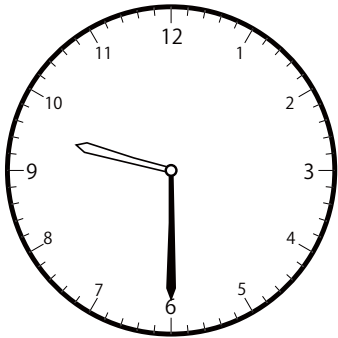


(  )

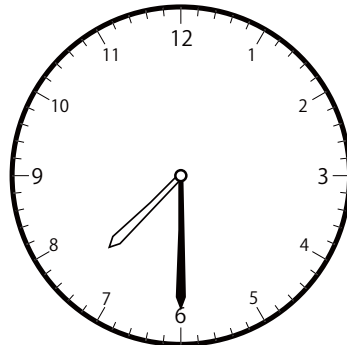


( )

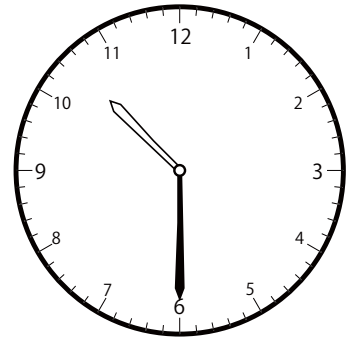
② 9時<sup>じ</sup>30分<sup>ふん</sup>の時計<sup>とけい</sup>を見つけよう



(  )




( )




( )

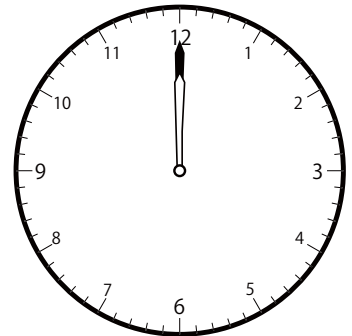
③ 10時<sup>じ</sup>0分<sup>ふん</sup>の時計<sup>とけい</sup>を見つけよう



( )




(  )




( )

〇〇時<sup>じ</sup>30分<sup>ふん</sup>単位の<sup>たんい</sup>時計<sup>とけい</sup>を見つけよう【B1】  
問題<sup>もんだい</sup>と同じ時間<sup>おなじかん</sup>の時計<sup>とけい</sup>を見つけ<sup>み</sup>て( )に〇をつけましょう。


① 10時<sup>じ</sup>30分<sup>ふん</sup>の時計<sup>とけい</sup>を見つけよう



(  )




( )




( )

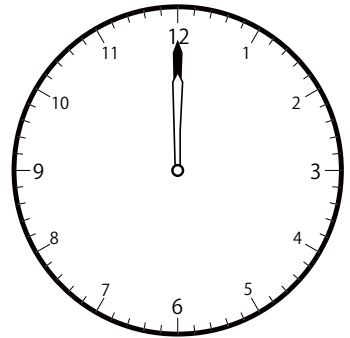
② 11時<sup>じ</sup>0分<sup>ふん</sup>の時計<sup>とけい</sup>を見つけよう



(  )

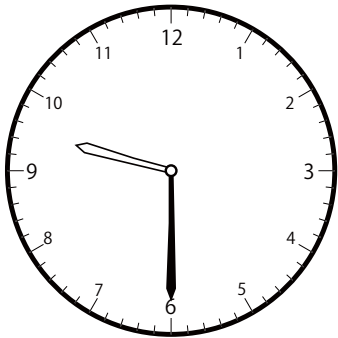


( )




( )

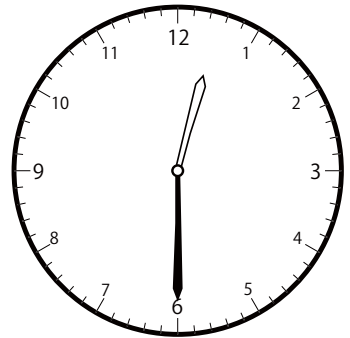
③ 11時<sup>じ</sup>30分<sup>ふん</sup>の時計<sup>とけい</sup>を見つけよう



( )




(  )



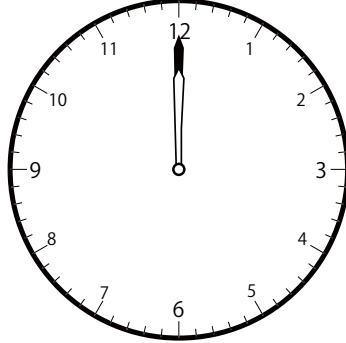
( )

〇〇時<sup>じ</sup>30分<sup>ふん</sup>単位の<sup>たんい</sup>時計<sup>とけい</sup>を見つけよう【B1】  
 問題<sup>もんだい</sup>と同じ<sup>おな</sup>時間<sup>じかん</sup>の時計<sup>とけい</sup>を見つけ<sup>み</sup>て( )に〇をつけましょう。


① 12時<sup>じ</sup> 0分<sup>ふん</sup>の時計<sup>とけい</sup>を見つけよう



( )

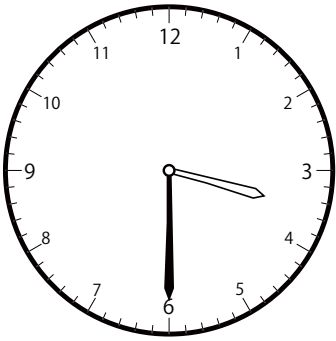


(  )




( )

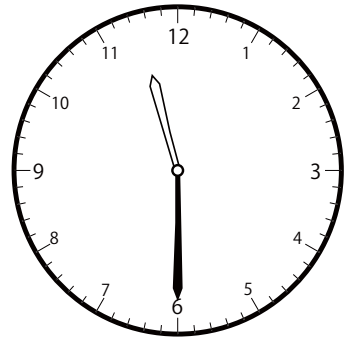
② 12時<sup>じ</sup> 30分<sup>ふん</sup>の時計<sup>とけい</sup>を見つけよう



( )

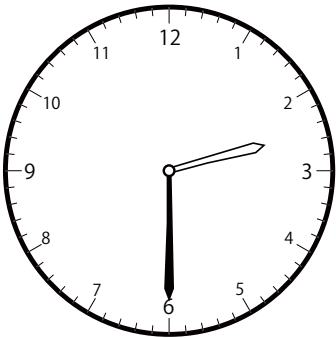


(  )




( )

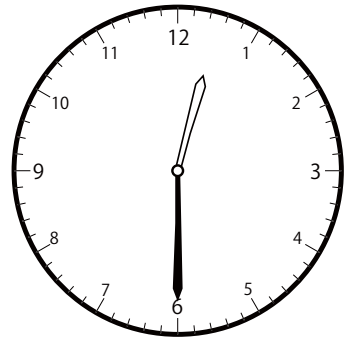
③ 1時<sup>じ</sup> 30分<sup>ふん</sup>の時計<sup>とけい</sup>を見つけよう



( )



(  )

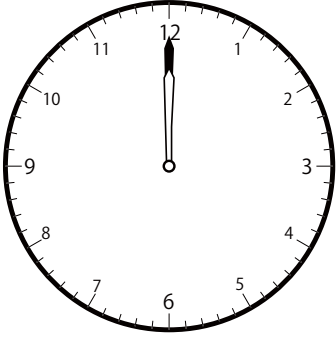


( )




〇〇時<sup>じ</sup>30分<sup>ふん</sup>単位の時計<sup>たんい とけい み</sup>を見つけよう【B1】  
問題<sup>もんだい</sup>と同じ時間<sup>おなじかん</sup>の時計<sup>とけい み</sup>を見つけて( )に〇をつけましょう。


① 2時<sup>じ</sup>0分<sup>ふん</sup>の時計<sup>とけい み</sup>を見つけよう



( )

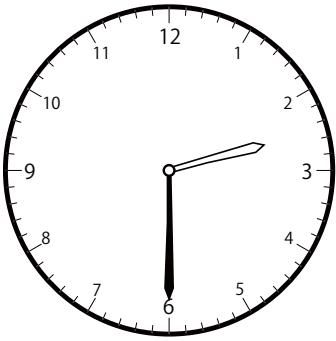


( )

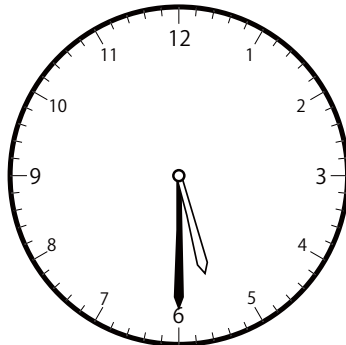


(  )

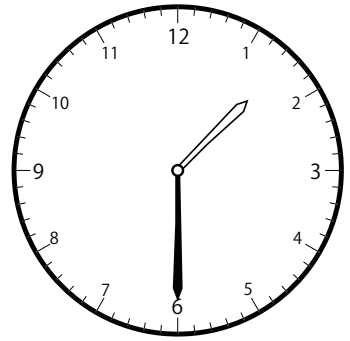
② 2時<sup>じ</sup>30分<sup>ふん</sup>の時計<sup>とけい み</sup>を見つけよう



(  )




( )




( )


③ 3時<sup>じ</sup>0分<sup>ふん</sup>の時計<sup>とけい み</sup>を見つけよう



(  )



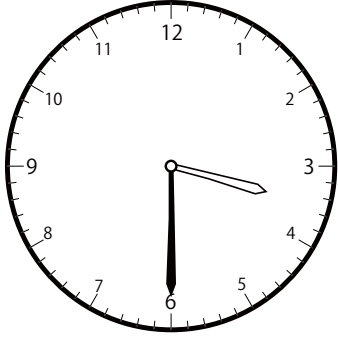
( )



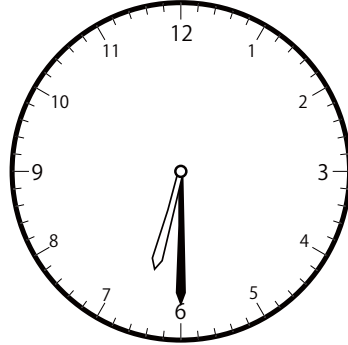
( )

〇〇時<sup>じ</sup>30分<sup>ふん</sup>単位の時計<sup>とけい</sup>を見つけよう【B1】  
問題<sup>もんだい</sup>と同じ時間<sup>おなじじかん</sup>の時計<sup>とけい</sup>を見つけて( )に〇をつけましょう。

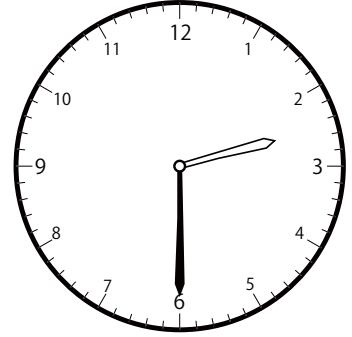
① 3時<sup>じ</sup>30分<sup>ふん</sup>の時計<sup>とけい</sup>を見つけよう



(  )




( )




( )


② 4時<sup>じ</sup>0分<sup>ふん</sup>の時計<sup>とけい</sup>を見つけよう



( )

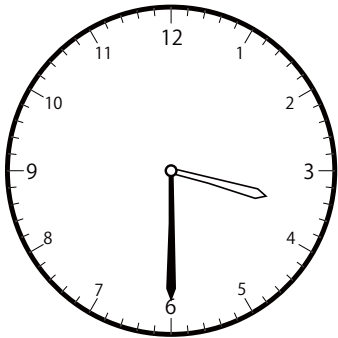


( )

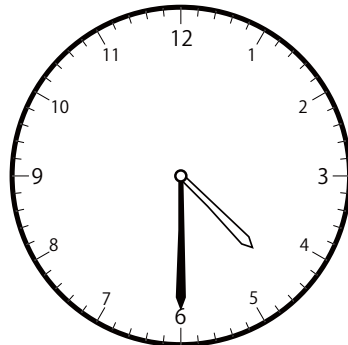


(  )

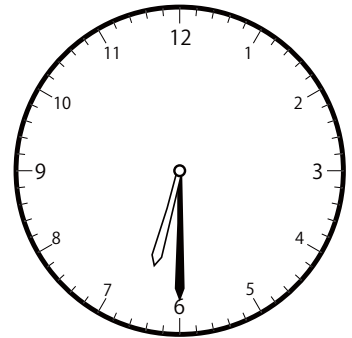
③ 4時<sup>じ</sup>30分<sup>ふん</sup>の時計<sup>とけい</sup>を見つけよう



( )




(  )




( )

〇〇時<sup>じ</sup>30分<sup>ふん</sup>単位の<sup>たんい</sup>時計<sup>とけい</sup>を見つけよう【B1】  
問題<sup>もんだい</sup>と同じ時間<sup>おなじかん</sup>の時計<sup>とけい</sup>を見つけ<sup>み</sup>て( )に〇をつけましょう。


① 5時<sup>じ</sup>0分<sup>ふん</sup>の時計<sup>とけい</sup>を見つけよう



( )

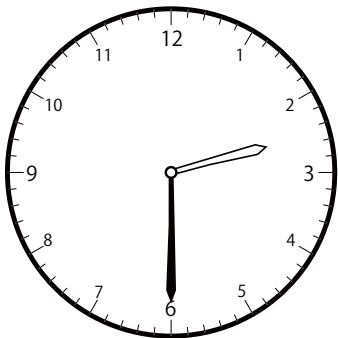


(  )

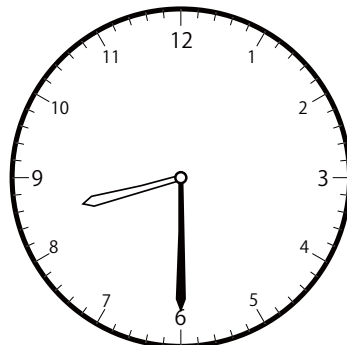


( )

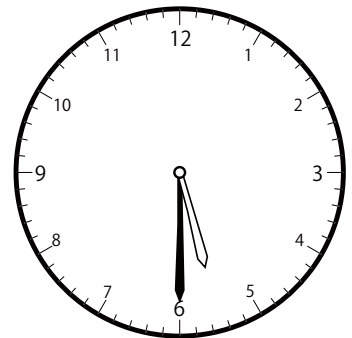
② 5時<sup>じ</sup>30分<sup>ふん</sup>の時計<sup>とけい</sup>を見つけよう



( )

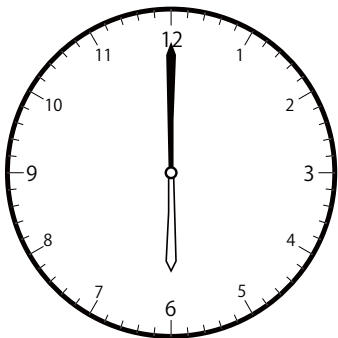


( )




(  )

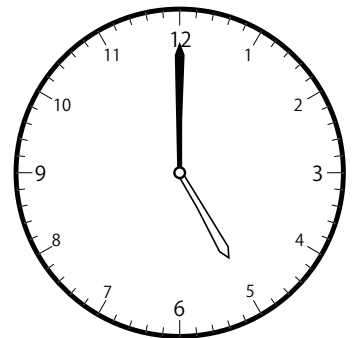
③ 6時<sup>じ</sup>0分<sup>ふん</sup>の時計<sup>とけい</sup>を見つけよう



(  )



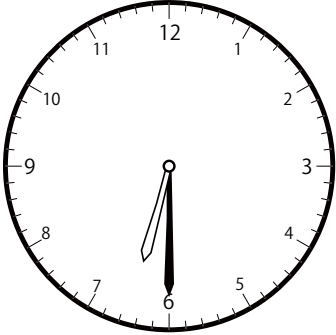
( )



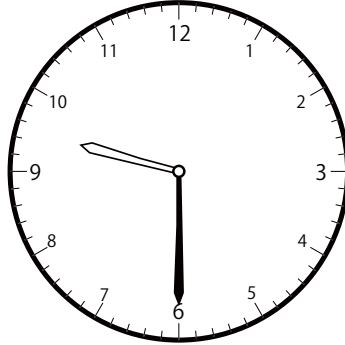
( )

〇〇時<sup>じ</sup>30分<sup>ふん</sup>単位の<sup>たんい</sup>時計<sup>とけい</sup>を見つけよう【B1】  
問題<sup>もんだい</sup>と同じ時間<sup>おなじかん</sup>の時計<sup>とけい</sup>を見つけて( )に〇をつけましょう。

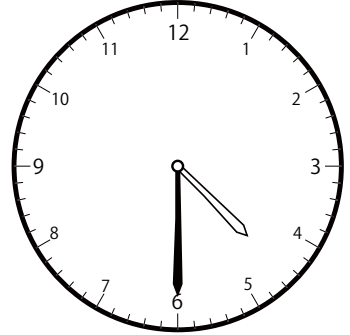
① 6時<sup>じ</sup>30分<sup>ふん</sup>の時計<sup>とけい</sup>を見つけよう



(  )




( )




( )


② 7時<sup>じ</sup>0分<sup>ふん</sup>の時計<sup>とけい</sup>を見つけよう



(  )

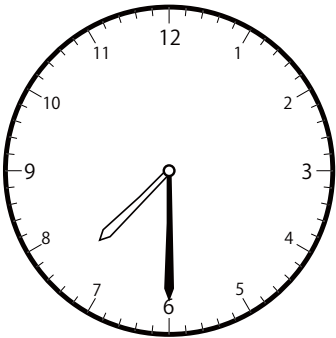


( )

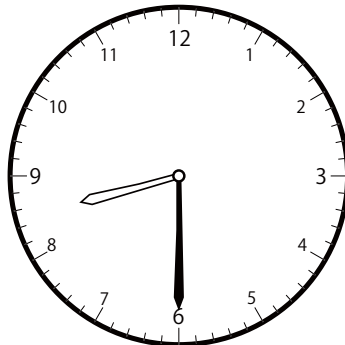


( )

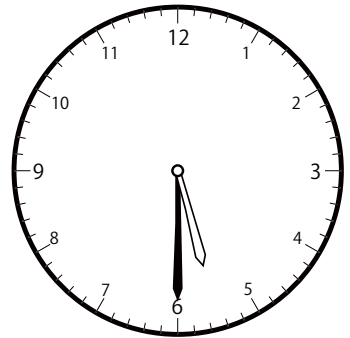
③ 7時<sup>じ</sup>30分<sup>ふん</sup>の時計<sup>とけい</sup>を見つけよう



(  )




( )

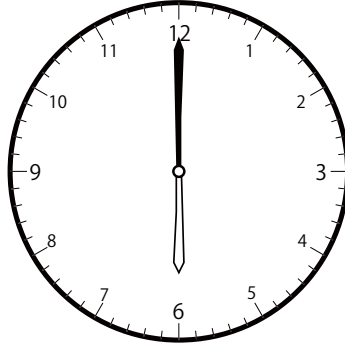


( )


① 8時 0分の時計を見つけよう



(  )

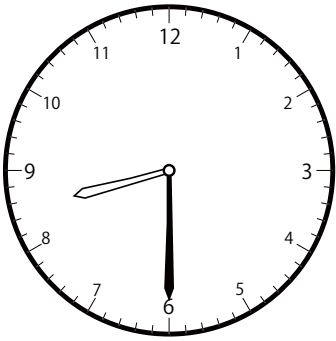


( )

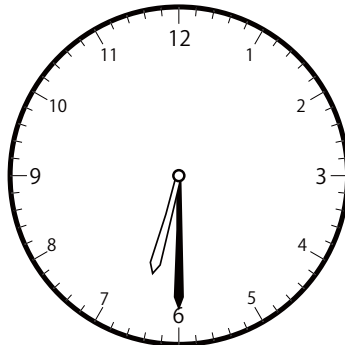


( )

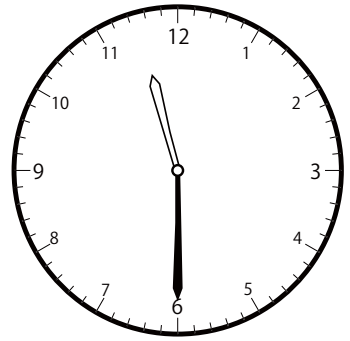
② 8時 30分の時計を見つけよう



(  )

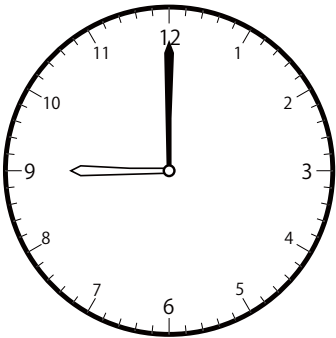


( )

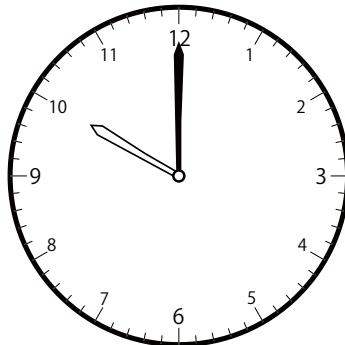


( )


③ 9時 0分の時計を見つけよう



(  )




( )



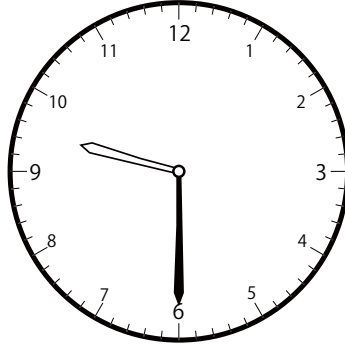
( )

〇〇時<sup>じ</sup>30分<sup>ふん</sup>単位の<sup>たんい</sup>時計<sup>とけい</sup>を見つけよう【BI】  
 問題<sup>もんだい</sup>と同じ時間<sup>おなじかん</sup>の時計<sup>とけい</sup>を見つけて( )に〇をつけましょう。

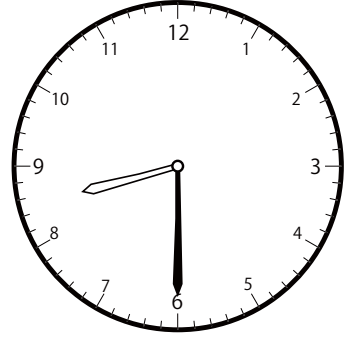
① 9時<sup>じ</sup>30分<sup>ふん</sup>の時計<sup>とけい</sup>を見つけよう



( )




(  )




( )

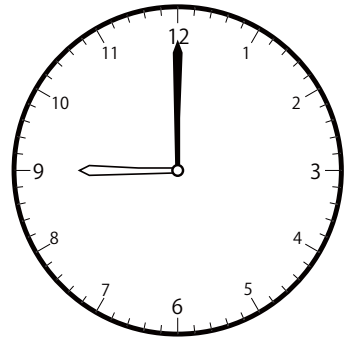
② 10時<sup>じ</sup>0分<sup>ふん</sup>の時計<sup>とけい</sup>を見つけよう



( )




(  )

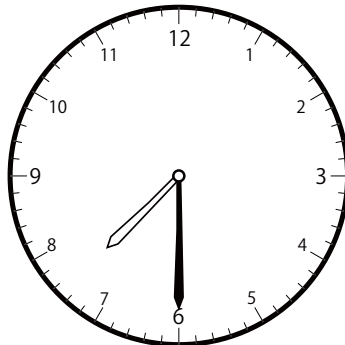


( )

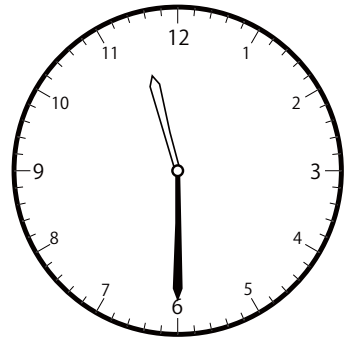
③ 10時<sup>じ</sup>30分<sup>ふん</sup>の時計<sup>とけい</sup>を見つけよう



(  )




( )




( )


① 11時 0分の時計を見つけよう



(  )

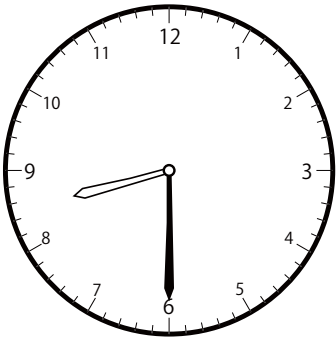


( )




( )

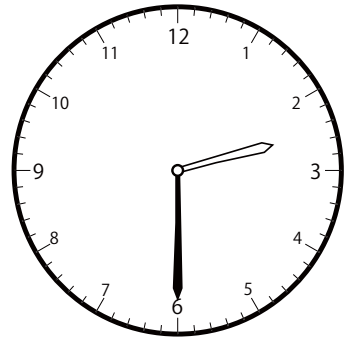
② 11時 30分の時計を見つけよう



( )




(  )

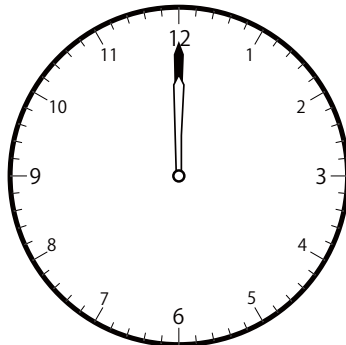


( )


③ 12時 0分の時計を見つけよう



( )



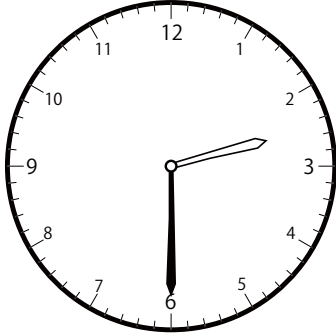
(  )




( )

〇〇時<sup>じ</sup>30分<sup>ふん</sup>単位の<sup>たんい</sup>時計<sup>とけい</sup>を見つけよう【B1】  
問題<sup>もんだい</sup>と同じ時間<sup>おなじかん</sup>の時計<sup>とけい</sup>を見つけて( )に〇をつけましょう。


① 12時<sup>じ</sup>30分<sup>ふん</sup>の時計<sup>とけい</sup>を見つけよう



( )

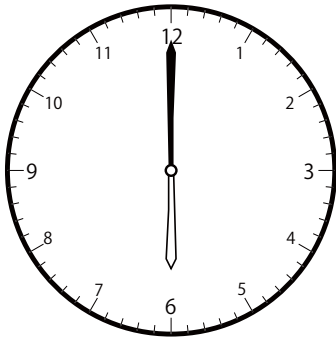


( ○ )




( )

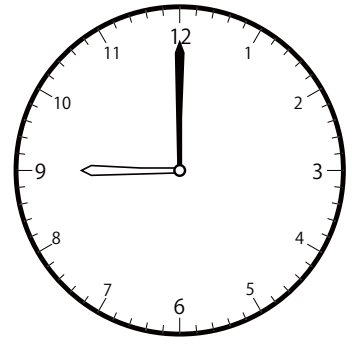
② 8時<sup>じ</sup>0分<sup>ふん</sup>の時計<sup>とけい</sup>を見つけよう



( )




( ○ )

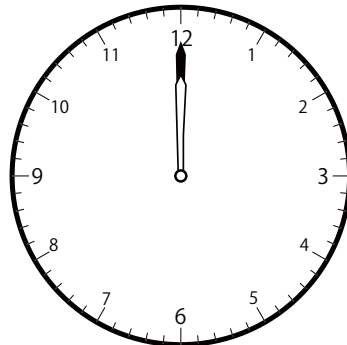


( )


③ 2時<sup>じ</sup>0分<sup>ふん</sup>の時計<sup>とけい</sup>を見つけよう



( ○ )




( )



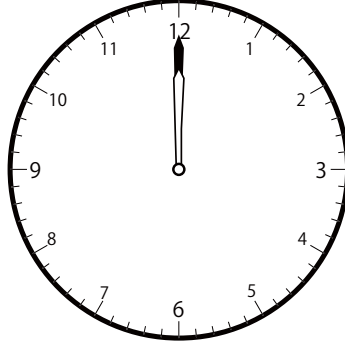
( )




① 12時 0分の時計を見つけよう



( )

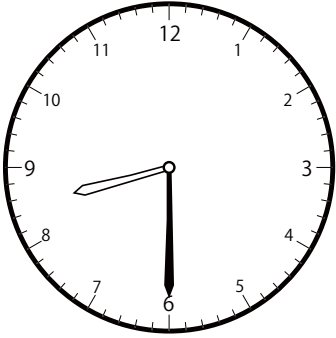


(  )

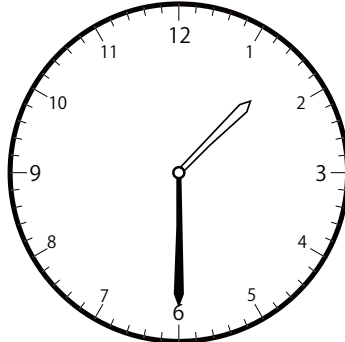


( )


② 11時 30分の時計を見つけよう



( )

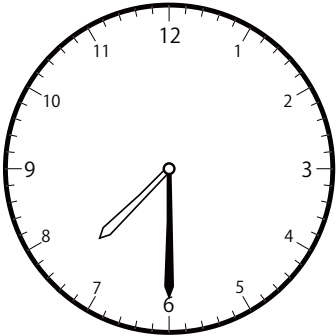


( )

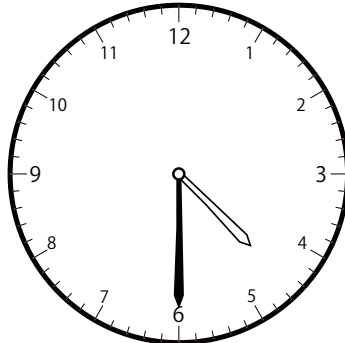


(  )

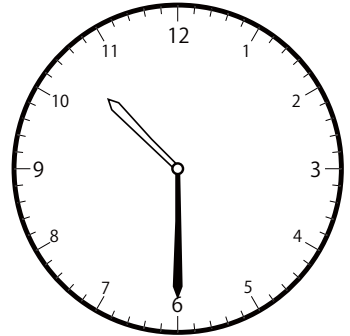
③ 7時 30分の時計を見つけよう



(  )



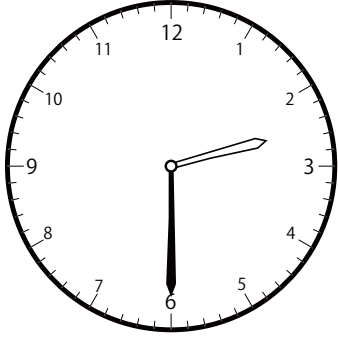
( )



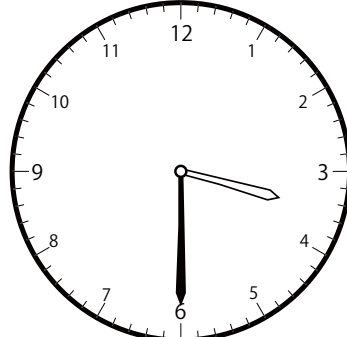
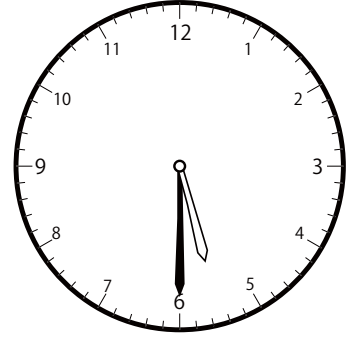
( )

〇〇時<sup>じ</sup>30分<sup>ふん</sup>単位の時計<sup>とけい</sup>を見つけよう【B1】  
問題<sup>もんだい</sup>と同じ時間<sup>おなじかん</sup>の時計<sup>とけい</sup>を見つけて( )に〇をつけましょう。

① 3時<sup>じ</sup>30分<sup>ふん</sup>の時計<sup>とけい</sup>を見つけよう

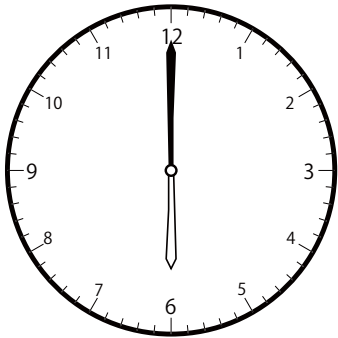


( )


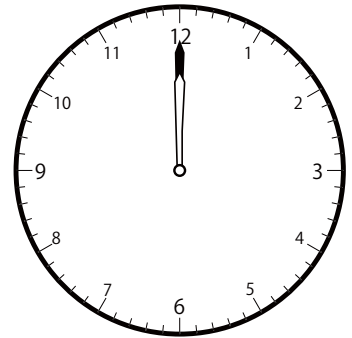
(  )

( )

② 3時<sup>じ</sup>0分<sup>ふん</sup>の時計<sup>とけい</sup>を見つけよう

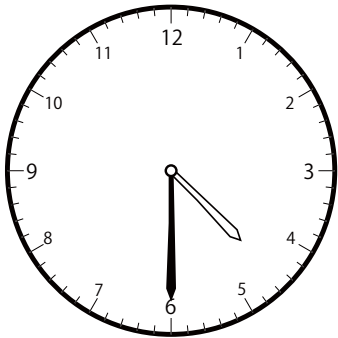



( )

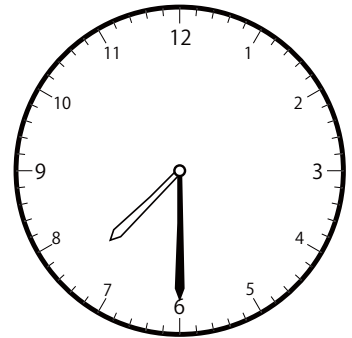
(  )

( )

③ 4時<sup>じ</sup>30分<sup>ふん</sup>の時計<sup>とけい</sup>を見つけよう

(  )

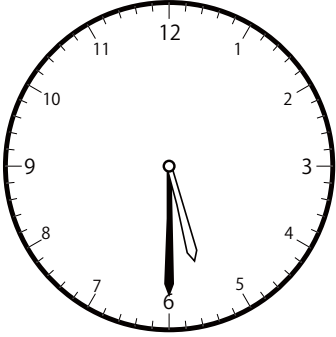
( )



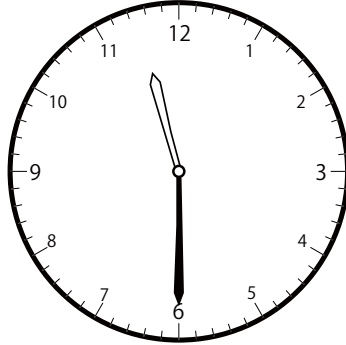
( )

〇〇時<sup>じ</sup>30分<sup>ふん</sup>単位の<sup>たんい</sup>時計<sup>とけい</sup>を見つけよう【B1】  
問題<sup>もんだい</sup>と同じ時間<sup>おなじかん</sup>の時計<sup>とけい</sup>を見つけて( )に〇をつけましょう。

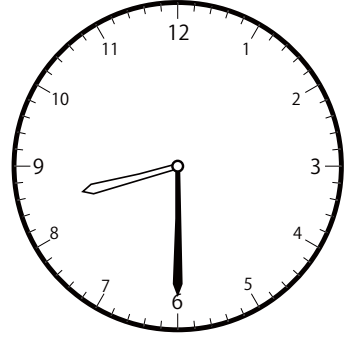
① 8時<sup>じ</sup>30分<sup>ふん</sup>の時計<sup>とけい</sup>を見つけよう



( )




( )




(  )


② 10時<sup>じ</sup>0分<sup>ふん</sup>の時計<sup>とけい</sup>を見つけよう



( )




( )




(  )


③ 11時<sup>じ</sup>0分<sup>ふん</sup>の時計<sup>とけい</sup>を見つけよう



( )




(  )



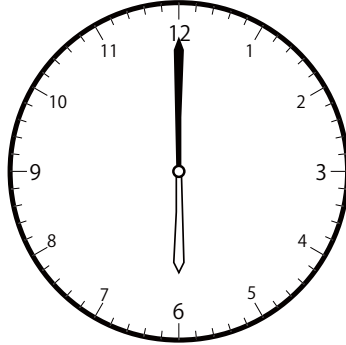
( )

〇〇時<sup>じ</sup>30分<sup>ふん</sup>単位の<sup>たんい</sup>時計<sup>とけい</sup>を見つけよう【B1】  
問題<sup>もんだい</sup>と同じ時間<sup>おなじじかん</sup>の時計<sup>とけい</sup>を見つけて( )に〇をつけましょう。


① 5時<sup>じ</sup>0分<sup>ふん</sup>の時計<sup>とけい</sup>を見つけよう



(  )




(     )

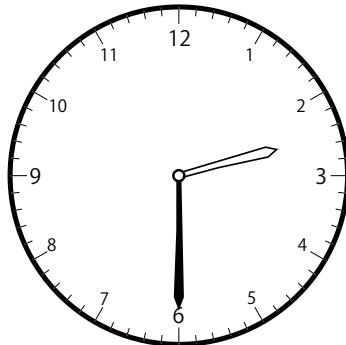


(     )

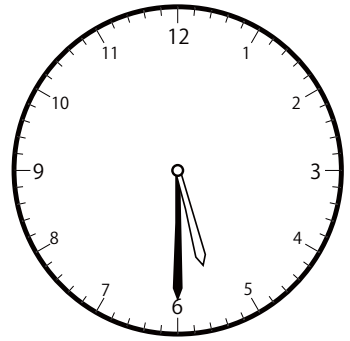
② 2時<sup>じ</sup>30分<sup>ふん</sup>の時計<sup>とけい</sup>を見つけよう



(     )

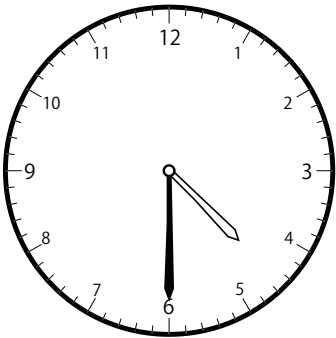


(  )

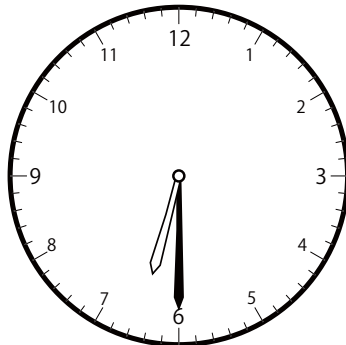


(     )

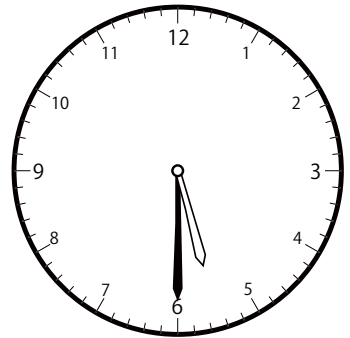
③ 5時<sup>じ</sup>30分<sup>ふん</sup>の時計<sup>とけい</sup>を見つけよう



(     )




(     )



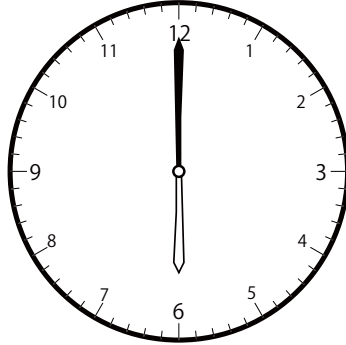
(  )

〇〇時<sup>じ</sup>30分<sup>ふん</sup>単位の<sup>たんい</sup>時計<sup>とけい</sup>を見つけよう【BI】  
問題<sup>もんだい</sup>と同じ時間<sup>おなじかん</sup>の時計<sup>とけい</sup>を見つけ<sup>み</sup>て( )に〇をつけましょう。


① 7時<sup>じ</sup>0分<sup>ふん</sup>の時計<sup>とけい</sup>を見つけよう



( )

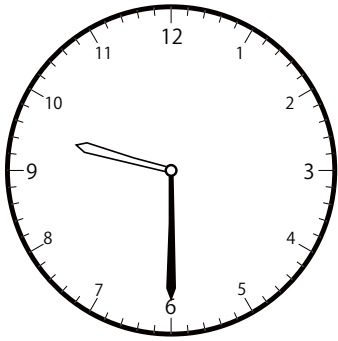


( )

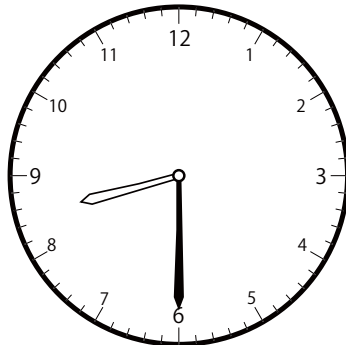


(  )

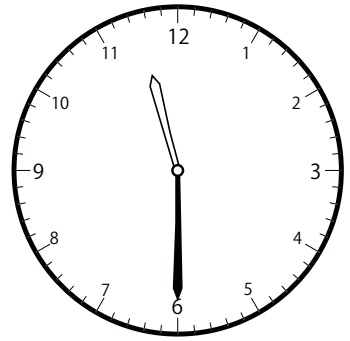
② 9時<sup>じ</sup>30分<sup>ふん</sup>の時計<sup>とけい</sup>を見つけよう



(  )

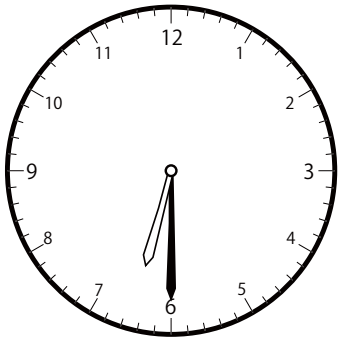


( )

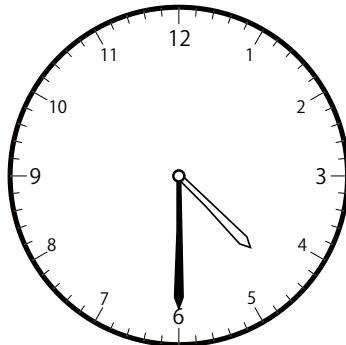


( )

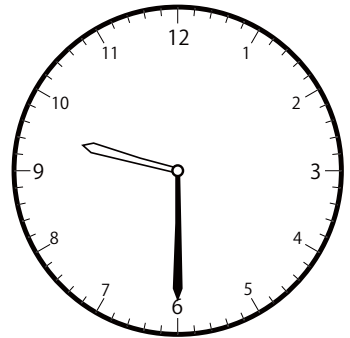
③ 6時<sup>じ</sup>30分<sup>ふん</sup>の時計<sup>とけい</sup>を見つけよう



(  )




( )




( )

〇〇時<sup>じ</sup>30分<sup>ふん</sup>単位の<sup>たんい</sup>時計<sup>とけい</sup>を見つけよう【B1】  
問題<sup>もんだい</sup>と同じ時間<sup>おなじかん</sup>の時計<sup>とけい</sup>を見つけて( )に〇をつけましょう。

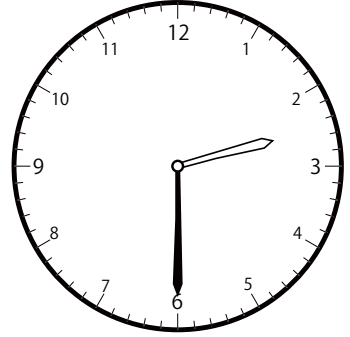
① 1時<sup>じ</sup>30分<sup>ふん</sup>の時計<sup>とけい</sup>を見つけよう



(  )




( )




( )

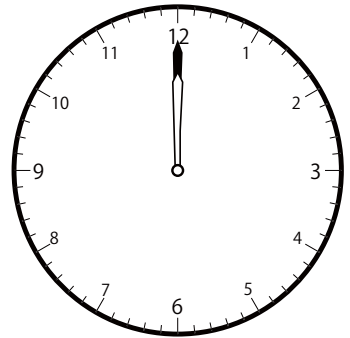
② 9時<sup>じ</sup>0分<sup>ふん</sup>の時計<sup>とけい</sup>を見つけよう



(  )

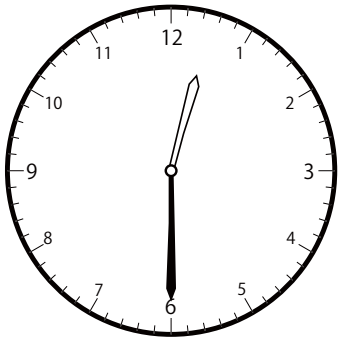


( )




( )

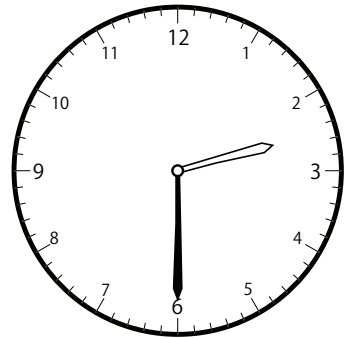
③ 12時<sup>じ</sup>30分<sup>ふん</sup>の時計<sup>とけい</sup>を見つけよう



(  )




( )



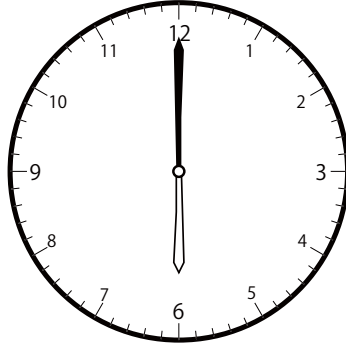

( )

〇〇時<sup>じ</sup>30分<sup>ふん</sup>単位の<sup>たんい</sup>時計<sup>とけい</sup>を見つけよう【B1】  
問題<sup>もんだい</sup>と同じ時間<sup>おなじかん</sup>の時計<sup>とけい</sup>を見つけ<sup>み</sup>て( )に〇をつけましよう。

① 6時<sup>じ</sup>0分<sup>ふん</sup>の時計<sup>とけい</sup>を見つけよう




( )


(  )

( )


② 4時<sup>じ</sup>0分<sup>ふん</sup>の時計<sup>とけい</sup>を見つけよう



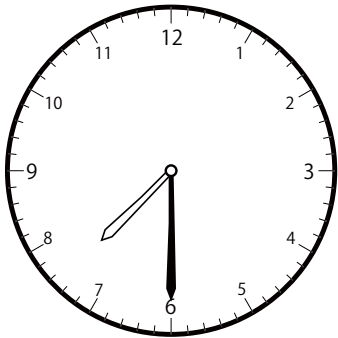
( )




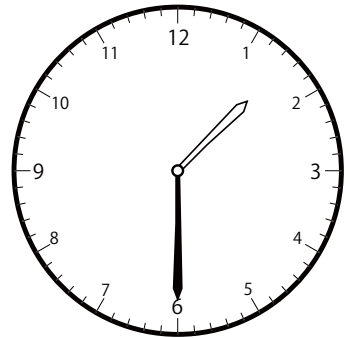
( )

(  )

③ 10時<sup>じ</sup>30分<sup>ふん</sup>の時計<sup>とけい</sup>を見つけよう



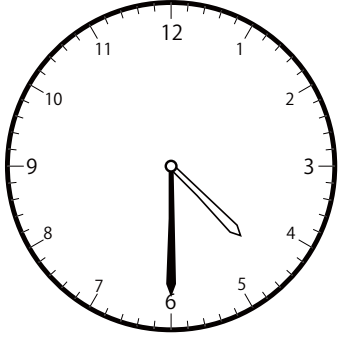
( )

(  )

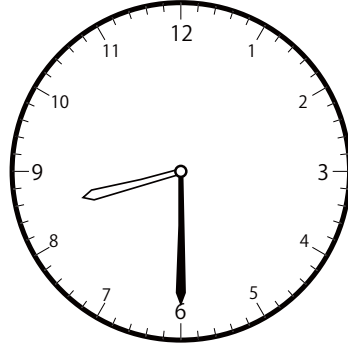
( )

〇〇時<sup>じ</sup>30分<sup>ふん</sup>単位の時計<sup>とけい</sup>を見つけよう【B1】  
問題<sup>もんだい</sup>と同じ時間<sup>おなじかん</sup>の時計<sup>とけい</sup>を見つけて( )に〇をつけましょう。


① 7時<sup>じ</sup>30分<sup>ふん</sup>の時計<sup>とけい</sup>を見つけよう



( )




( )




(  )


② 10時<sup>じ</sup>0分<sup>ふん</sup>の時計<sup>とけい</sup>を見つけよう



( )




( )




(  )

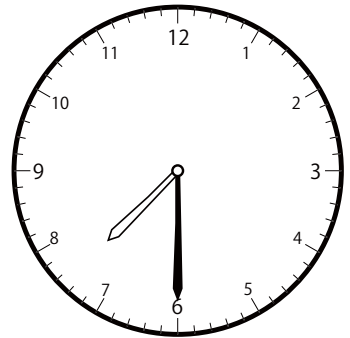
③ 10時<sup>じ</sup>30分<sup>ふん</sup>の時計<sup>とけい</sup>を見つけよう



(  )



( )

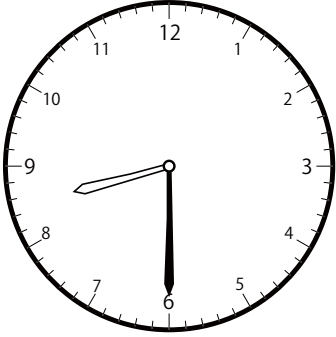


( )

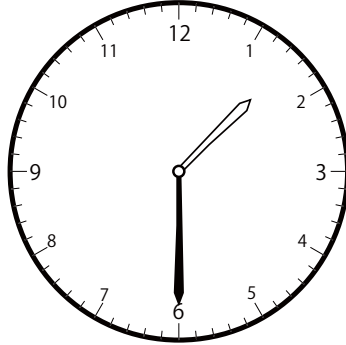


〇〇時<sup>じ</sup>30分<sup>ふん</sup>単位の<sup>たんい</sup>時計<sup>とけい</sup>を見つけよう【B1】  
 問題<sup>もんだい</sup>と同じ時間<sup>おなじかん</sup>の時計<sup>とけい</sup>を見つけ<sup>み</sup>て( )に〇をつけましよう。


① 11時<sup>じ</sup>30分<sup>ふん</sup>の時計<sup>とけい</sup>を見つけよう



( )




( )




(  )

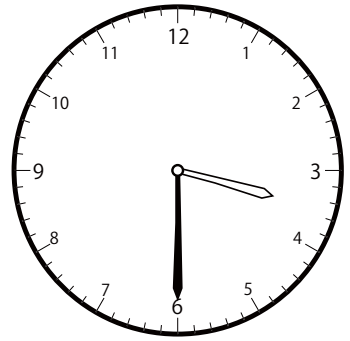
② 12時<sup>じ</sup>30分<sup>ふん</sup>の時計<sup>とけい</sup>を見つけよう



( )




(  )

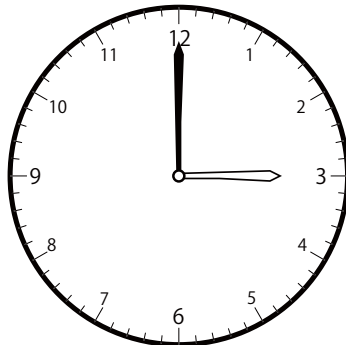


( )


③ 3時<sup>じ</sup>0分<sup>ふん</sup>の時計<sup>とけい</sup>を見つけよう



( )




(  )




( )

〇〇時 30分 単位の時計を見つけよう【B1】  
問題と同じ時間の時計を見つけて( )に〇をつけましょう。


① 9時 0分の時計を見つけよう



(  )




( )

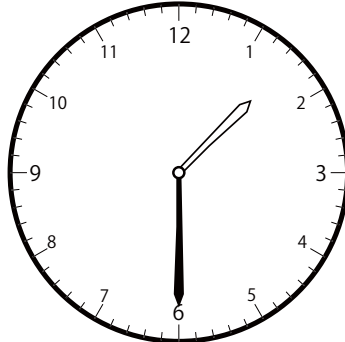


( )

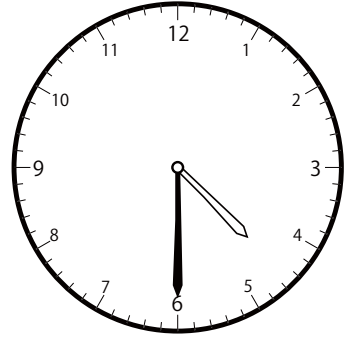
② 4時 30分の時計を見つけよう



( )




( )




(  )


③ 11時 0分の時計を見つけよう



( )



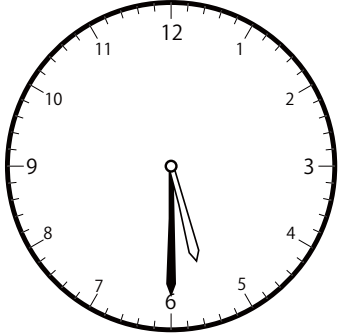
( )



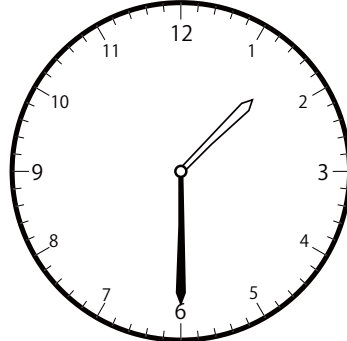
(  )

〇〇時<sup>じ</sup>30分<sup>ふん</sup>単位の時計<sup>とけい</sup>を見つけよう【B1】  
問題<sup>もんだい</sup>と同じ時間<sup>おなじかん</sup>の時計<sup>とけい</sup>を見つけて( )に〇をつけましょう。

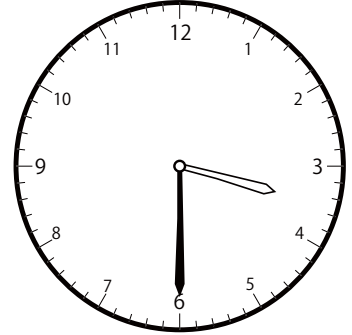
① 3時<sup>じ</sup>30分<sup>ふん</sup>の時計<sup>とけい</sup>を見つけよう



( )

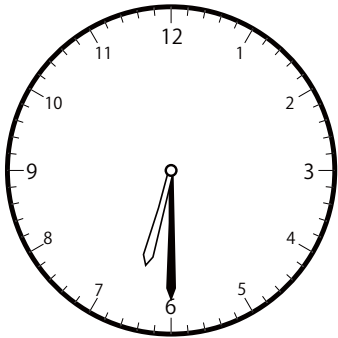


( )

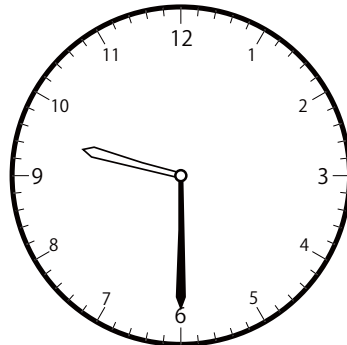


(  )

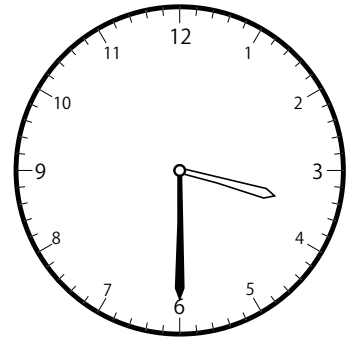
② 6時<sup>じ</sup>30分<sup>ふん</sup>の時計<sup>とけい</sup>を見つけよう



(  )




( )




( )

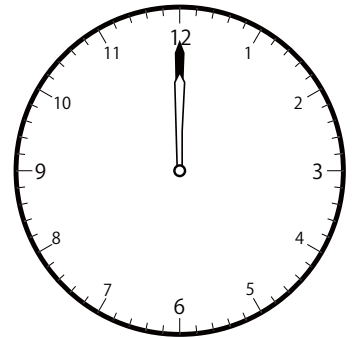
③ 12時<sup>じ</sup>0分<sup>ふん</sup>の時計<sup>とけい</sup>を見つけよう



( )




( )



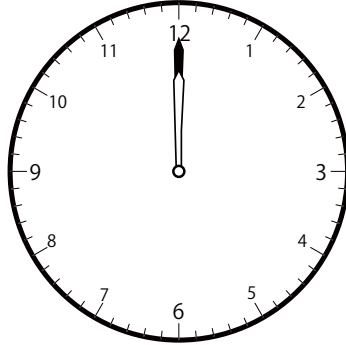
(  )

〇〇時<sup>じ</sup>30分<sup>ふん</sup>単位の<sup>たんい</sup>時計<sup>とけい</sup>を見つけよう【B1】  
問題<sup>もんだい</sup>と同じ時間<sup>おなじかん</sup>の時計<sup>とけい</sup>を見つけ<sup>み</sup>て( )に〇をつけましょう。


① 2時<sup>じ</sup>0分<sup>ふん</sup>の時計<sup>とけい</sup>を見つけよう



(  )

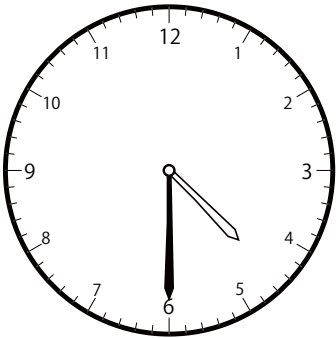


( )

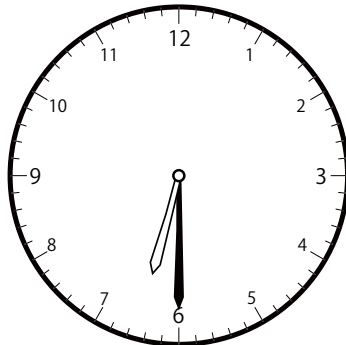


( )

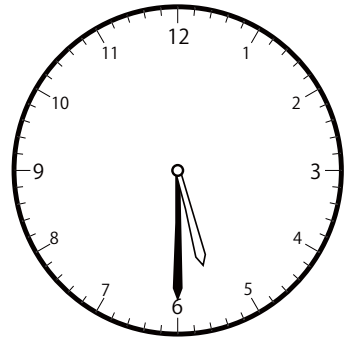
② 5時<sup>じ</sup>30分<sup>ふん</sup>の時計<sup>とけい</sup>を見つけよう



( )

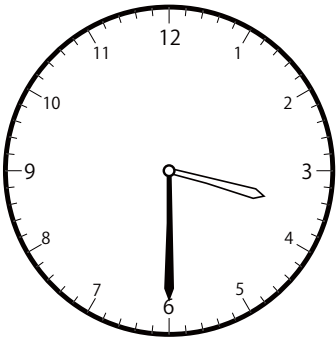


( )




(  )

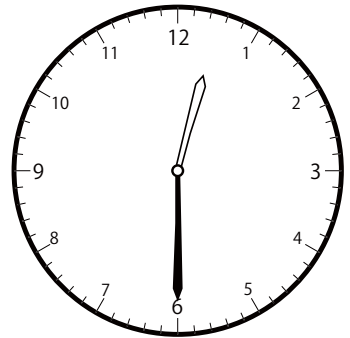
③ 1時<sup>じ</sup>30分<sup>ふん</sup>の時計<sup>とけい</sup>を見つけよう



( )




(  )



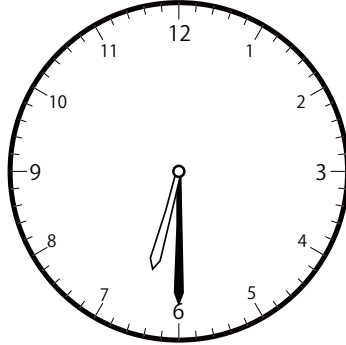
( )

〇〇時<sup>じ</sup>30分<sup>ふん</sup>単位の<sup>たんい</sup>時計<sup>とけい</sup>を見つけよう【B1】  
 問題<sup>もんだい</sup>と同じ時間<sup>おなじかん</sup>の時計<sup>とけい</sup>を見つけて( )に〇をつけましょう。

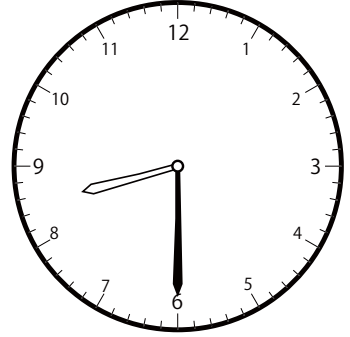
① 8時<sup>じ</sup>30分<sup>ふん</sup>の時計<sup>とけい</sup>を見つけよう



( )

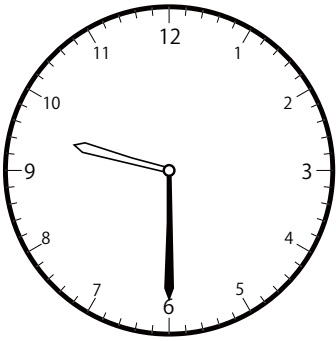


( )

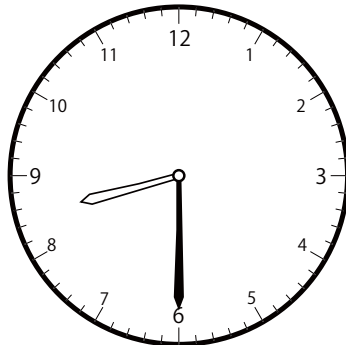


(  )


② 9時<sup>じ</sup>30分<sup>ふん</sup>の時計<sup>とけい</sup>を見つけよう



(  )




( )

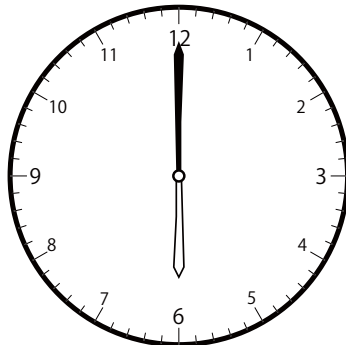


( )


③ 6時<sup>じ</sup>0分<sup>ふん</sup>の時計<sup>とけい</sup>を見つけよう



( )



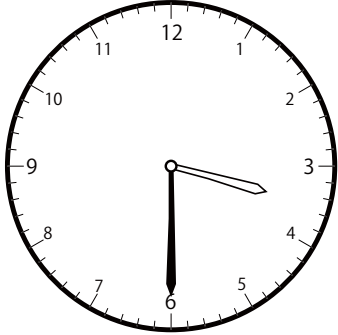
(  )



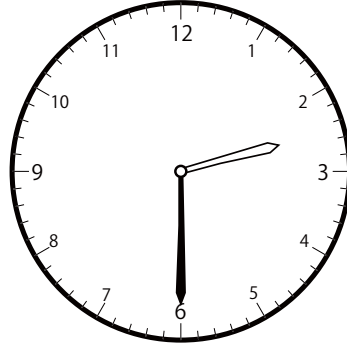
( )

〇〇時<sup>じ</sup>30分<sup>ふん</sup>単位の<sup>たんい</sup>時計<sup>とけい</sup>を見つけよう【B1】  
問題<sup>もんだい</sup>と同じ時間<sup>おなじかん</sup>の時計<sup>とけい</sup>を見つけ<sup>み</sup>て( )に〇をつけましょう。


① 2時<sup>じ</sup>30分<sup>ふん</sup>の時計<sup>とけい</sup>を見つけよう



( )

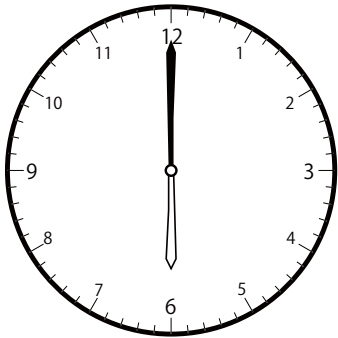


(  )

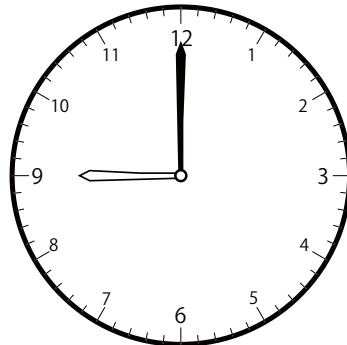


( )


② 8時<sup>じ</sup>0分<sup>ふん</sup>の時計<sup>とけい</sup>を見つけよう



( )




( )




(  )


③ 7時<sup>じ</sup>0分<sup>ふん</sup>の時計<sup>とけい</sup>を見つけよう



( )



(  )



( )