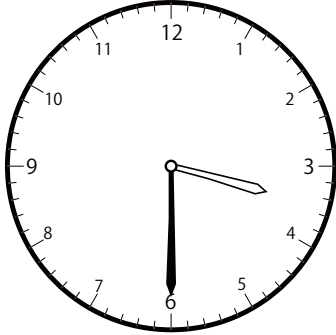


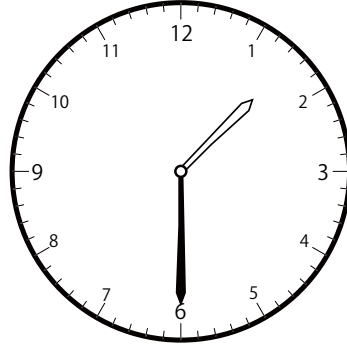
〇〇時^じ30分^{ふん}単位の^{たんい}時計^{とけい}を見つけよう【B1】

問題^{もんだい}と同じ時間^{おなじじかん}の時計^{とけい}を見つけて()に〇をつけましょう。


① 1時^じ30分^{ふん}の時計^{とけい}を見つけよう



()

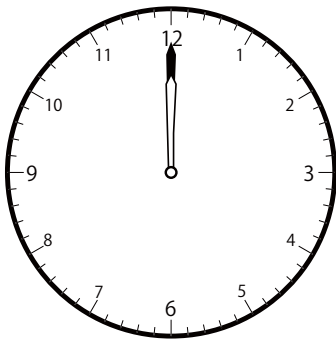


()




()

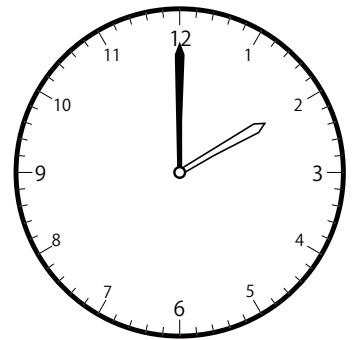
② 2時^じ0分^{ふん}の時計^{とけい}を見つけよう



()

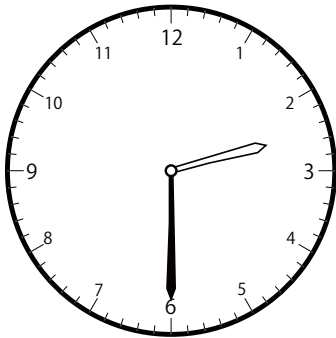


()

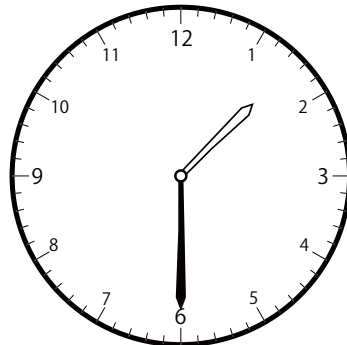


()

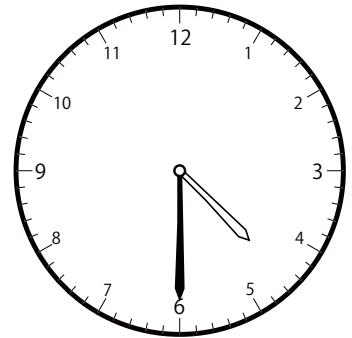
③ 2時^じ30分^{ふん}の時計^{とけい}を見つけよう



()



()




()


〇〇時^じ30分^{ふん}単位の^{たんい}時計^{とけい}を見つけよう【B1】

問題^{もんだい}と同じ時間^{おなじじかん}の時計^{とけい}を見つけて()に〇をつけましょう。


① 3時^じ0分^{ふん}の時計^{とけい}を見つけよう



()




()

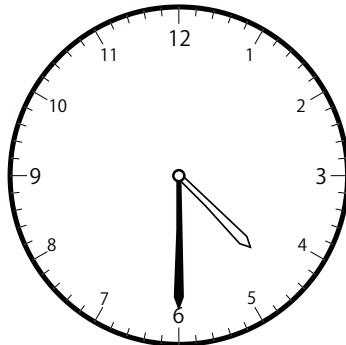


()

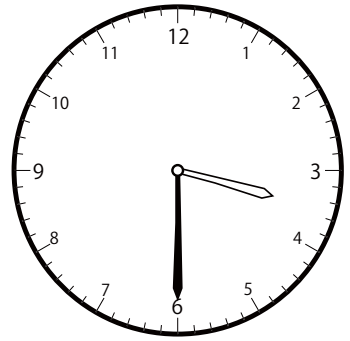
② 3時^じ30分^{ふん}の時計^{とけい}を見つけよう



()

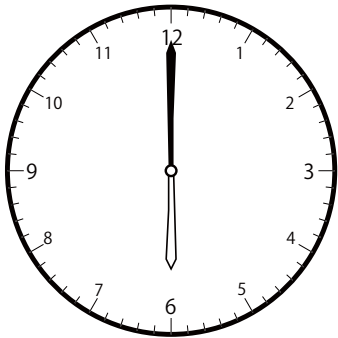


()




()


③ 4時^じ0分^{ふん}の時計^{とけい}を見つけよう



()



()

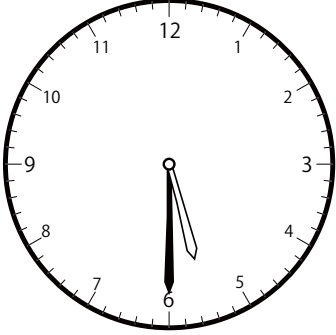


()

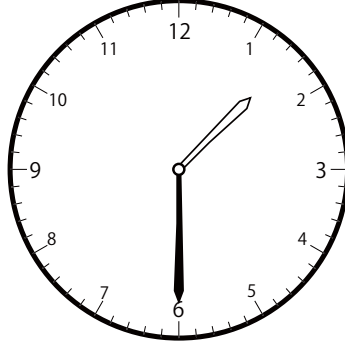
〇〇時^じ30分^{ふん}単位の^{たんい}時計^{とけい}を見つけよう【B1】

問題^{もんだい}と同じ時間^{おなじじかん}の時計^{とけい}を見つけて()に〇をつけましょう。

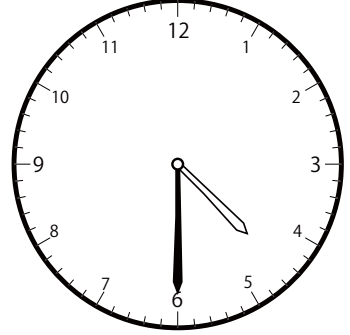
① 4時^じ30分^{ふん}の時計^{とけい}を見つけよう



()




()




()


② 5時^じ0分^{ふん}の時計^{とけい}を見つけよう



()

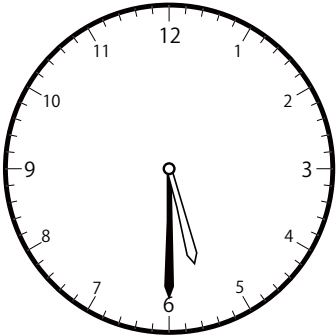


()

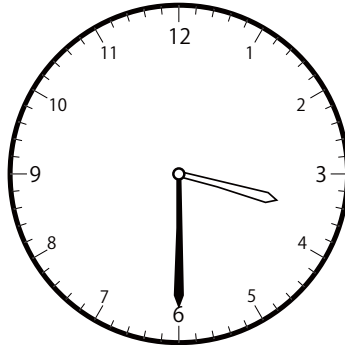


()

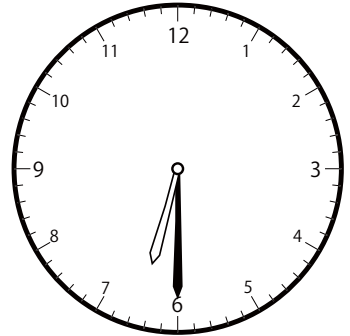
③ 5時^じ30分^{ふん}の時計^{とけい}を見つけよう



()



()




()

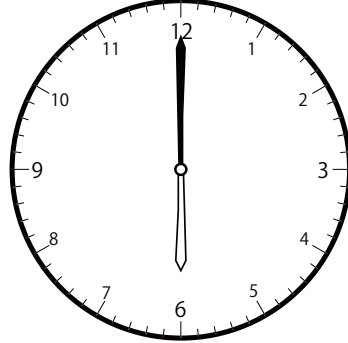
〇〇時^じ30分^{ふん}単位の^{たんい}時計^{とけい}を見つけよう【B1】

問題^{もんだい}と同じ時間^{おなじじかん}の時計^{とけい}を見つけて()に〇をつけましょう。


① 6時^じ0分^{ふん}の時計^{とけい}を見つけよう



()

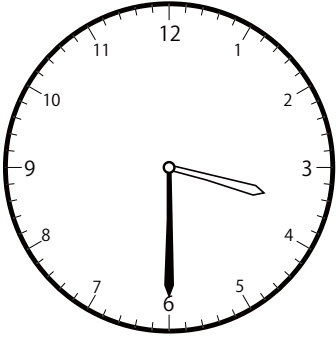


()

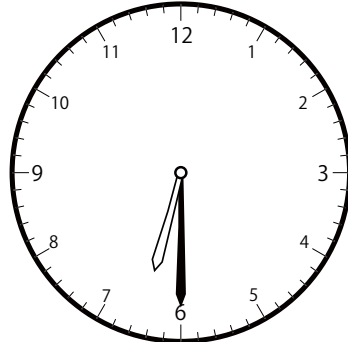


()

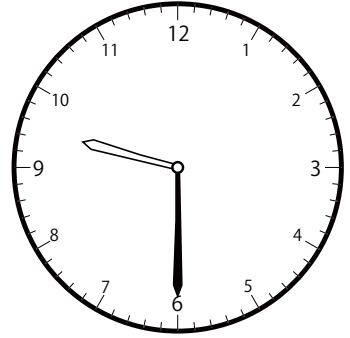
② 6時^じ30分^{ふん}の時計^{とけい}を見つけよう



()




()

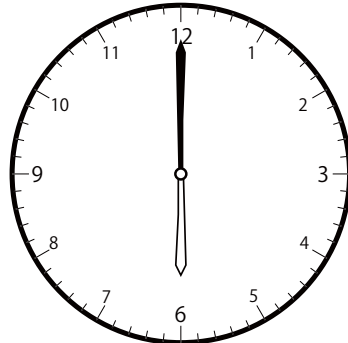


()


③ 7時^じ0分^{ふん}の時計^{とけい}を見つけよう



()



()




()

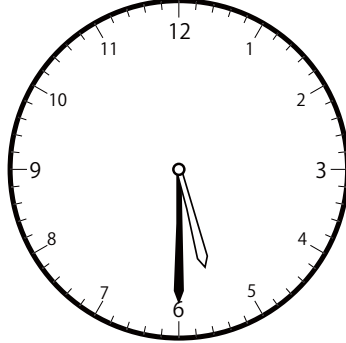
〇〇時^じ30分^{ふん}単位の^{たんい}時計^{とけい}を見つけよう【B1】

問題^{もんだい}と同じ時間^{おなじじかん}の時計^{とけい}を見つけ^みて()に〇をつけましょう。


① 7時^じ30分^{ふん}の時計^{とけい}を見つけよう



()




()




()


② 8時^じ0分^{ふん}の時計^{とけい}を見つけよう



()

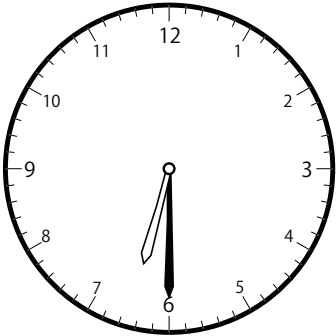


()

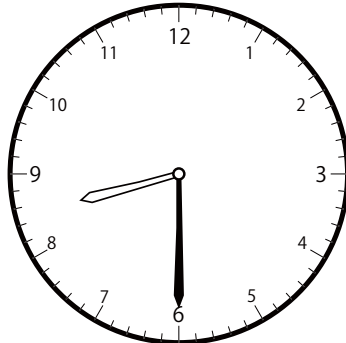


()

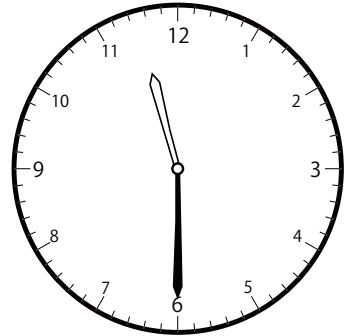
③ 8時^じ30分^{ふん}の時計^{とけい}を見つけよう



()



()




()

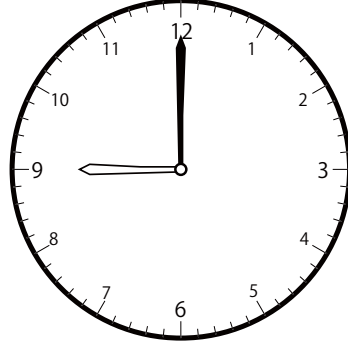
〇〇時^じ30分^{ふん}単位の^{たんい}時計^{とけい}を見つけよう【B1】

問題^{もんだい}と同じ時間^{おなじかん}の時計^{とけい}を見つけて()に〇をつけましょう。

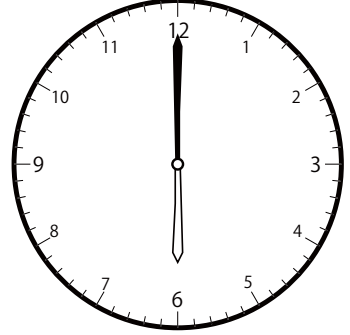
① 9時^じ0分^{ふん}の時計^{とけい}を見つけよう



()

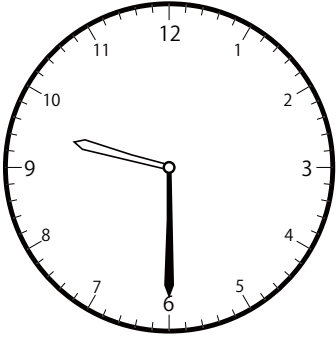


()

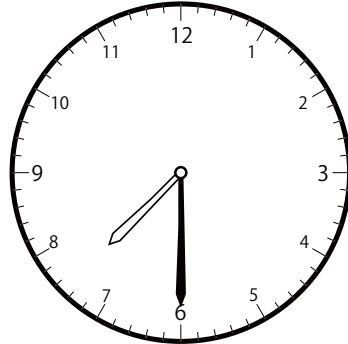


()


② 9時^じ30分^{ふん}の時計^{とけい}を見つけよう



()




()




()

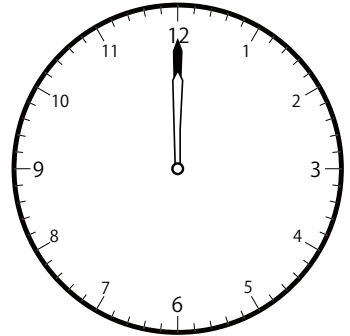
③ 10時^じ0分^{ふん}の時計^{とけい}を見つけよう




()




()



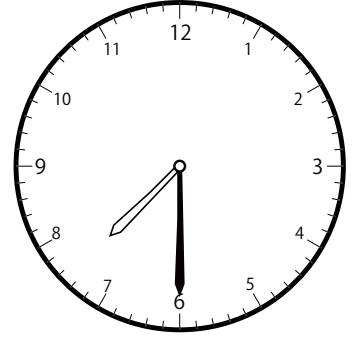
()

〇〇時^じ30分^{ふん}単位の^{たんい}時計^{とけい}を見つけよう【B1】問題^{もんだい}と同じ時間^{おなじじかん}の時計^{とけい}を見つけ^みて()に〇をつけましょう。① 10時^じ30分^{ふん}の時計^{とけい}を見つけよう


()




()



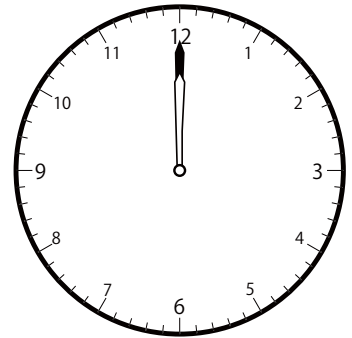
()

② 11時^じ0分^{ふん}の時計^{とけい}を見つけよう

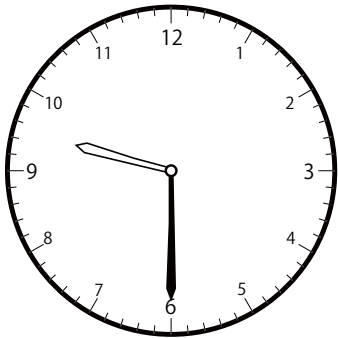
()




()



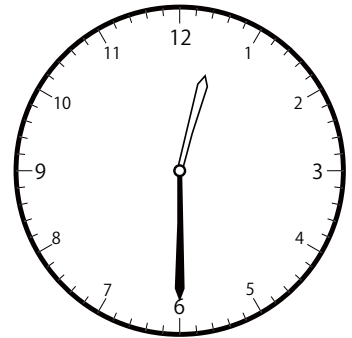
()

③ 11時^じ30分^{ふん}の時計^{とけい}を見つけよう


()



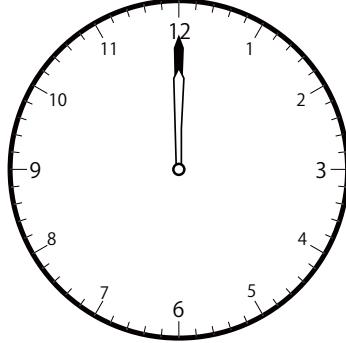
()




()

〇〇時^じ30分^{ふん}単位の^{たんい}時計^{とけい}を見つけよう【B1】問題^{もんだい}と同じ時間^{おなじかん}の時計^{とけい}を見つけ^みて()に〇をつけましょう。① 12時^じ 0分^{ふん}の時計^{とけい}を見つけよう

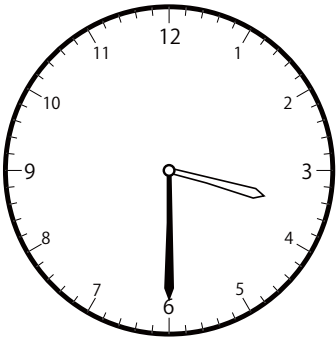
()




()



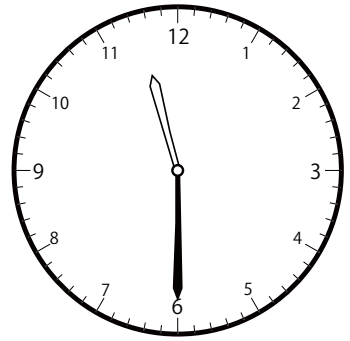
()

② 12時^じ 30分^{ふん}の時計^{とけい}を見つけよう

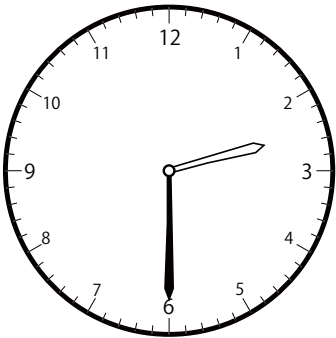
()



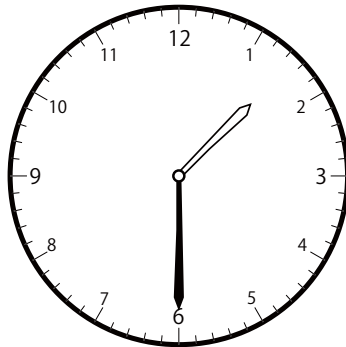
()



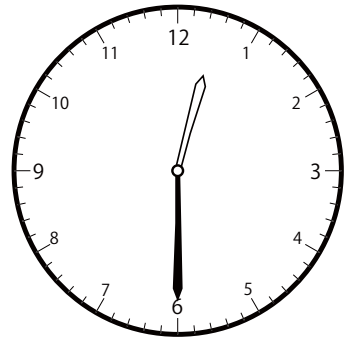
()

③ 1時^じ 30分^{ふん}の時計^{とけい}を見つけよう

()



()

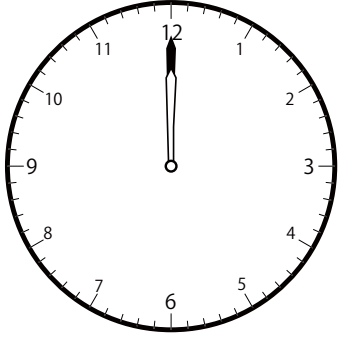


()


〇〇時^じ30分^{ふん}単位の^{たんい}時計^{とけい}を見つけよう【B1】

問題^{もんだい}と同じ時間^{おなじじかん}の時計^{とけい}を見つけて()に〇をつけましょう。


① 2時^じ0分^{ふん}の時計^{とけい}を見つけよう



()

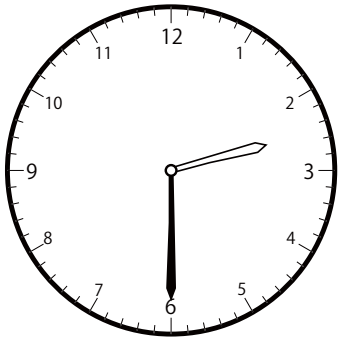


()

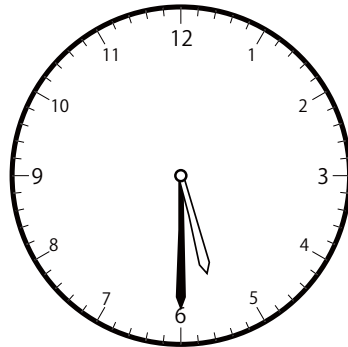


()

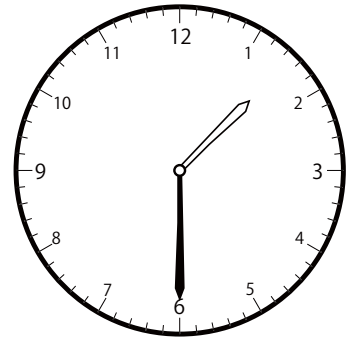
② 2時^じ30分^{ふん}の時計^{とけい}を見つけよう



()




()




()

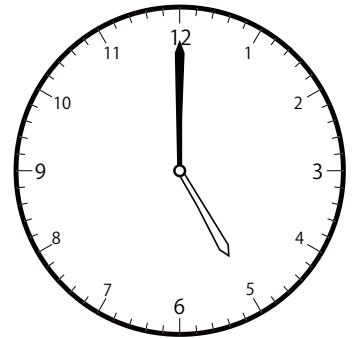
③ 3時^じ0分^{ふん}の時計^{とけい}を見つけよう



()



()

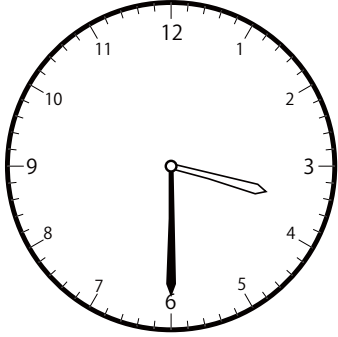


()

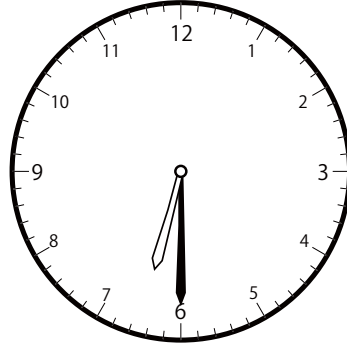
〇〇時^じ30分^{ふん}単位の^{たんい}時計^{とけい}を見つけよう【B1】

問題^{もんだい}と同じ時間^{おなじじかん}の時計^{とけい}を見つけて()に〇をつけましょう。

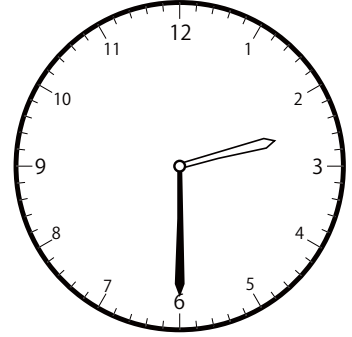
① 3時^じ30分^{ふん}の時計^{とけい}を見つけよう



()




()




()


② 4時^じ0分^{ふん}の時計^{とけい}を見つけよう



()

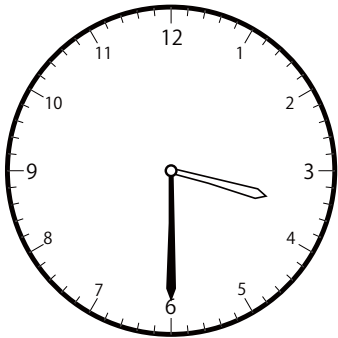


()

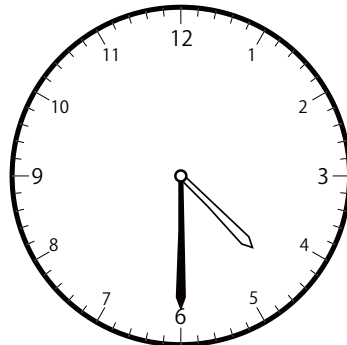


()

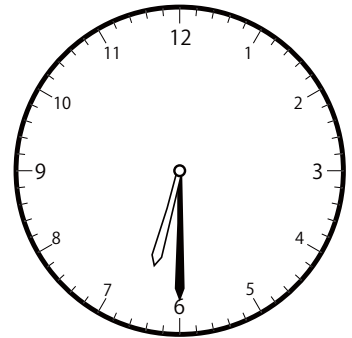
③ 4時^じ30分^{ふん}の時計^{とけい}を見つけよう




()




()




()

〇〇時^じ30分^{ふん}単位の^{たんい}時計^{とけい}を見つけよう【B1】問題^{もんだい}と同じ時間^{おなじかん}の時計^{とけい}を見つけ^みて()に〇をつけましょう。① 5時^じ0分^{ふん}の時計^{とけい}を見つけよう

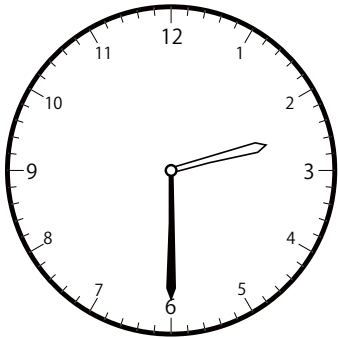
()




()



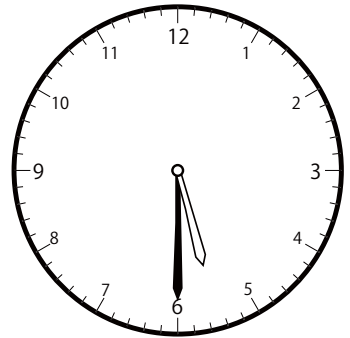
()

② 5時^じ30分^{ふん}の時計^{とけい}を見つけよう


()




()




()

③ 6時^じ0分^{ふん}の時計^{とけい}を見つけよう

()



()

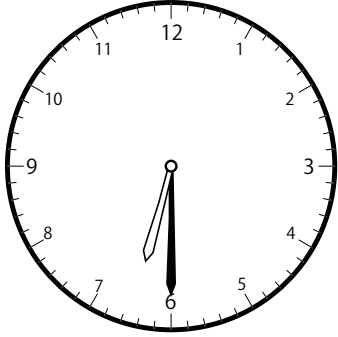


()

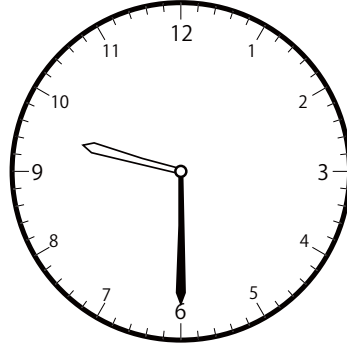
〇〇時^じ30分^{ふん}単位の^{たんい}時計^{とけい}を見つけよう【B1】

問題^{もんだい}と同じ時間^{おなじじかん}の時計^{とけい}を見つけて()に〇をつけましょう。

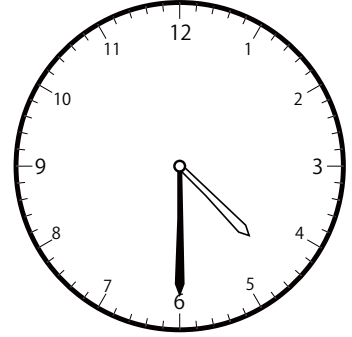
① 6時^じ30分^{ふん}の時計^{とけい}を見つけよう



()




()




()

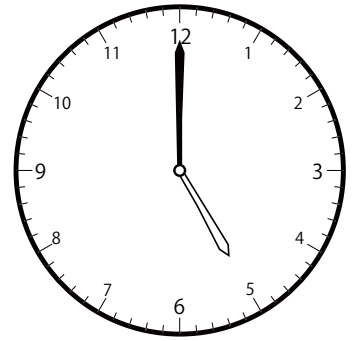
② 7時^じ0分^{ふん}の時計^{とけい}を見つけよう



()

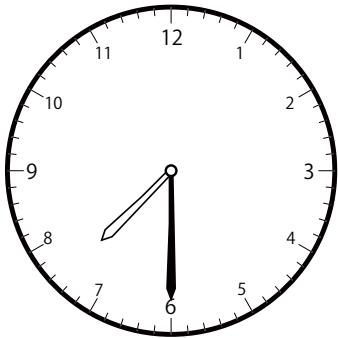


()

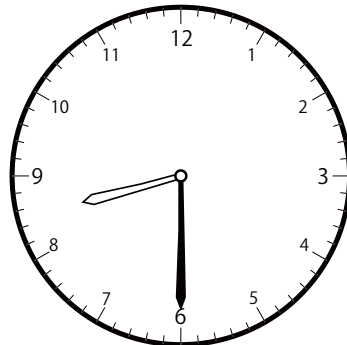


()

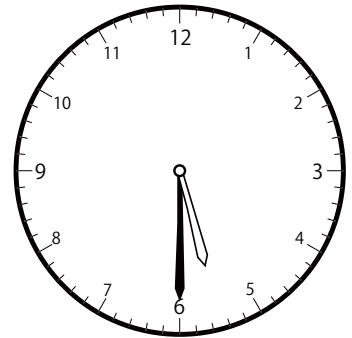
③ 7時^じ30分^{ふん}の時計^{とけい}を見つけよう




()




()




()

〇〇時^じ30分^{ふん}単位の^{たんい}時計^{とけい}を見つけよう【B1】問題^{もんだい}と同じ時間^{おなじかん}の時計^{とけい}を見つけて()に〇をつけましょう。① 8時^じ0分^{ふん}の時計^{とけい}を見つけよう

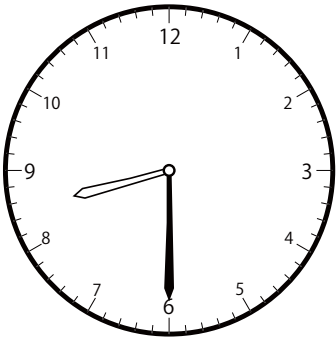
()



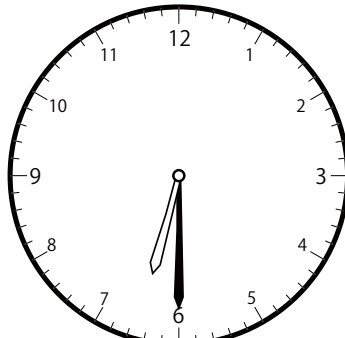
()



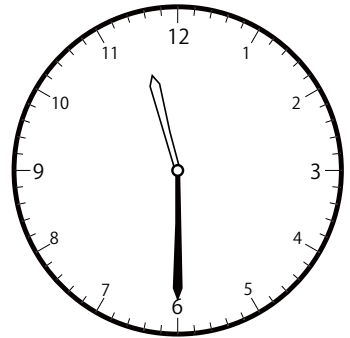
()

② 8時^じ30分^{ふん}の時計^{とけい}を見つけよう


()




()




()

③ 9時^じ0分^{ふん}の時計^{とけい}を見つけよう

()



()




()

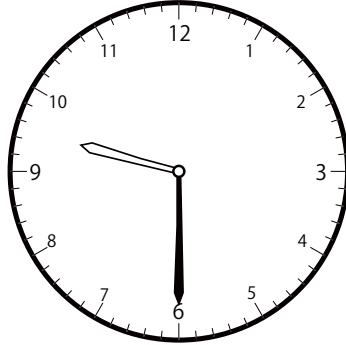
〇〇時^じ30分^{ふん}単位の^{たんい}時計^{とけい}を見つけよう【B1】

問題^{もんだい}と同じ時間^{おなじじかん}の時計^{とけい}を見つけて()に〇をつけましょう。

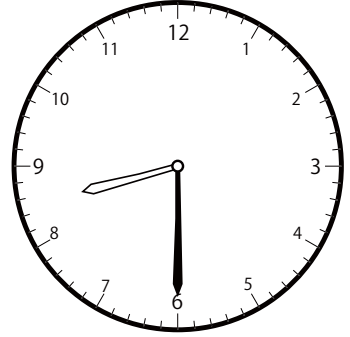
① 9時^じ30分^{ふん}の時計^{とけい}を見つけよう



()




()

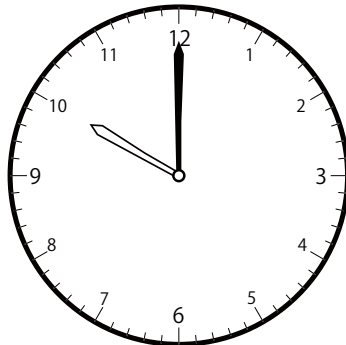


()

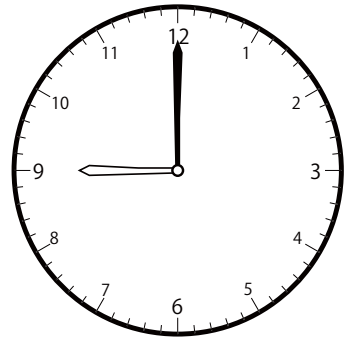
② 10時^じ0分^{ふん}の時計^{とけい}を見つけよう



()




()

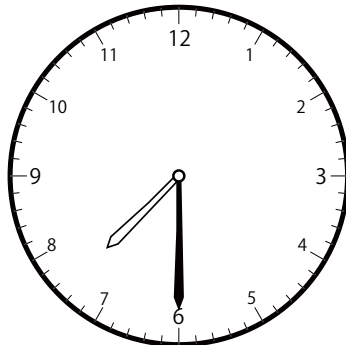


()

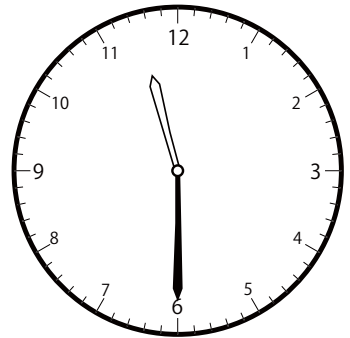
③ 10時^じ30分^{ふん}の時計^{とけい}を見つけよう



()



()




()


〇〇時^じ30分^{ふん}単位の^{たんい}時計^{とけい}を見つけよう【B1】

問題^{もんだい}と同じ時間^{おなじかん}の時計^{とけい}を見つけて()に〇をつけましょう。


① 11時^じ0分^{ふん}の時計^{とけい}を見つけよう



()

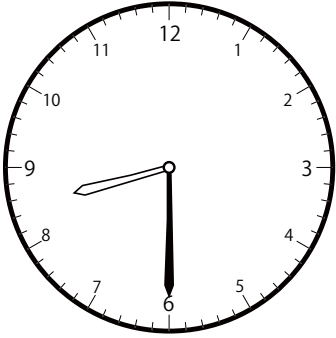


()

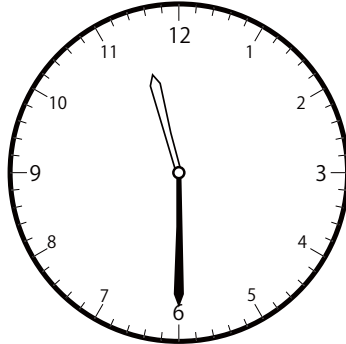


()

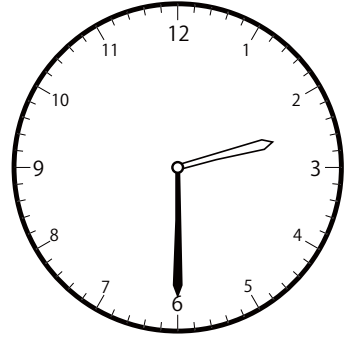
② 11時^じ30分^{ふん}の時計^{とけい}を見つけよう



()




()

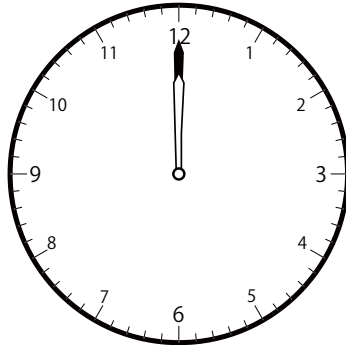


()

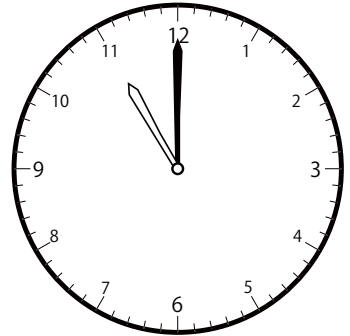
③ 12時^じ0分^{ふん}の時計^{とけい}を見つけよう



()



()

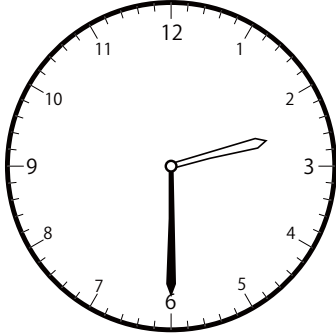


()


〇〇時^じ30分^{ふん}単位の^{たんい}時計^{とけい}を見つけよう【B1】

問題^{もんだい}と同じ時間^{おなじじかん}の時計^{とけい}を見つけて()に〇をつけましょう。


① 12時^じ30分^{ふん}の時計^{とけい}を見つけよう



()

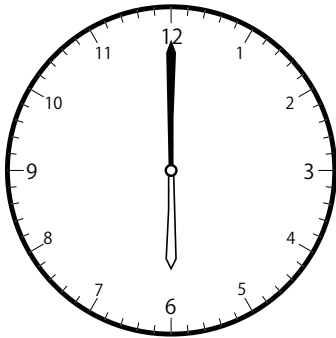


()




()

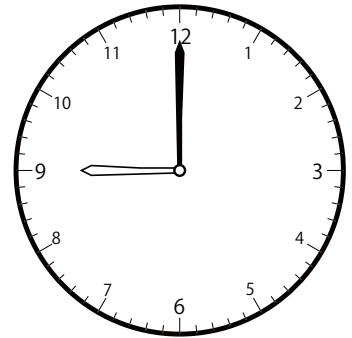
② 8時^じ0分^{ふん}の時計^{とけい}を見つけよう



()




()

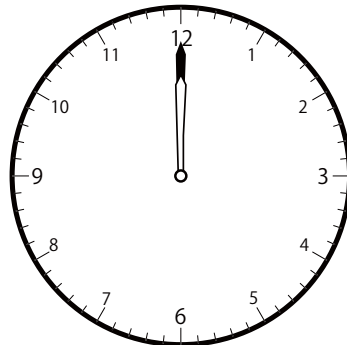


()

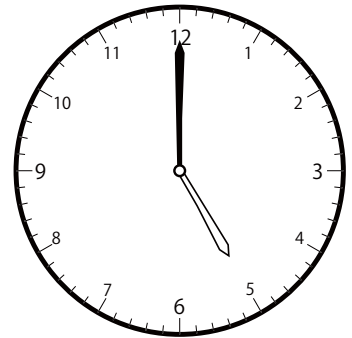
③ 2時^じ0分^{ふん}の時計^{とけい}を見つけよう



()



()




()

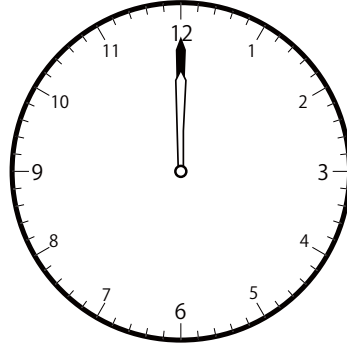
〇〇時^じ30分^{ふん}単位^{たんい}の時計^{とけい}を見つけよう【B1】

問題^{もんだい}と同じ時間^{おなじじかん}の時計^{とけい}を見つけて()に〇をつけましょう。


① 12時^じ 0分^{ふん}の時計^{とけい}を見つけよう



()

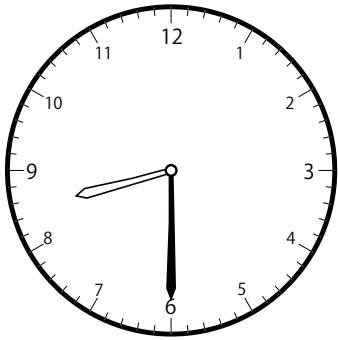


()

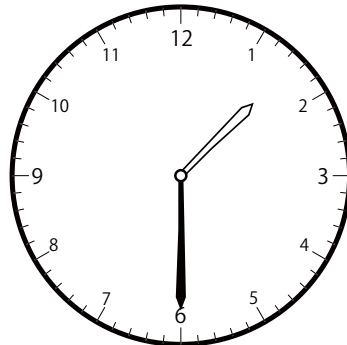


()

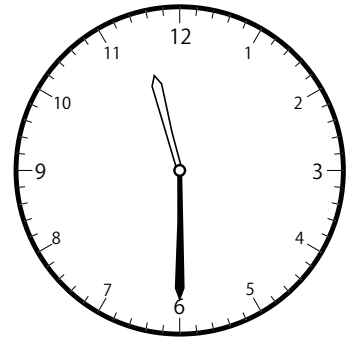
② 11時^じ 30分^{ふん}の時計^{とけい}を見つけよう



()

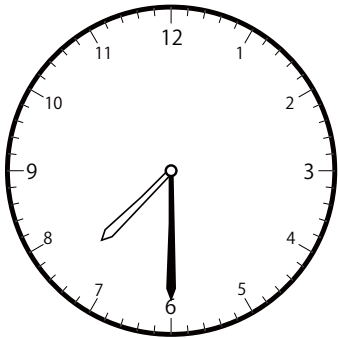


()

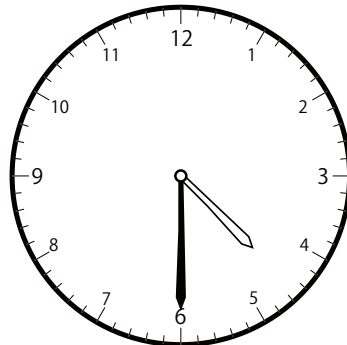


()

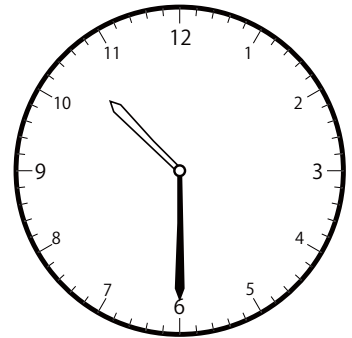
③ 7時^じ 30分^{ふん}の時計^{とけい}を見つけよう



()



()

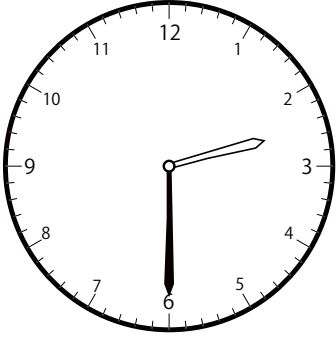


()

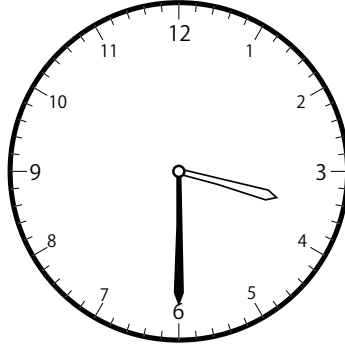
〇〇時^じ30分^{ふん}単位の時計^{とけい}を見つけよう【B1】

問題^{もんだい}と同じ時間^{おなじじかん}の時計^{とけい}を見つけて()に〇をつけましょう。

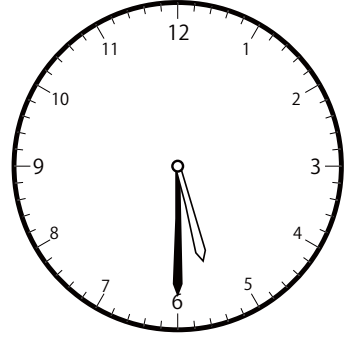
① 3時^じ30分^{ふん}の時計^{とけい}を見つけよう



()

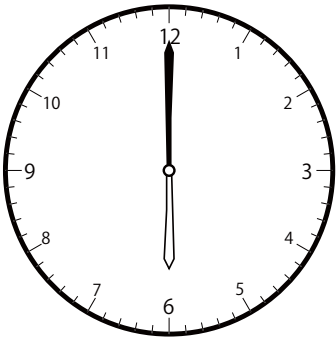


()

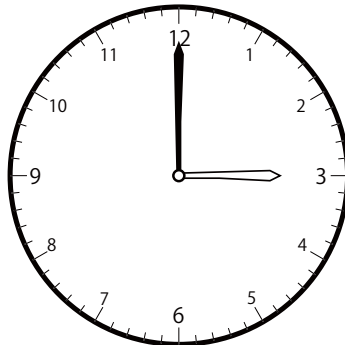


()

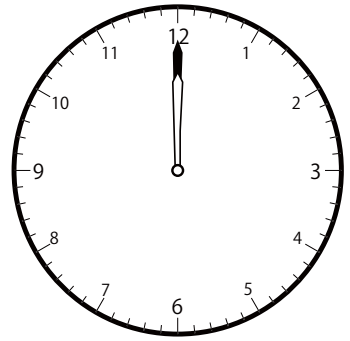
② 3時^じ0分^{ふん}の時計^{とけい}を見つけよう



()

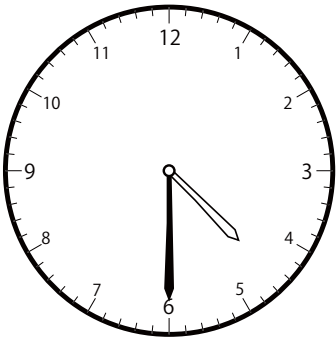


()

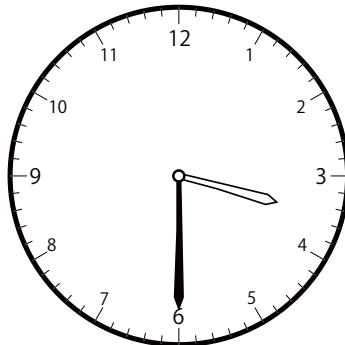


()

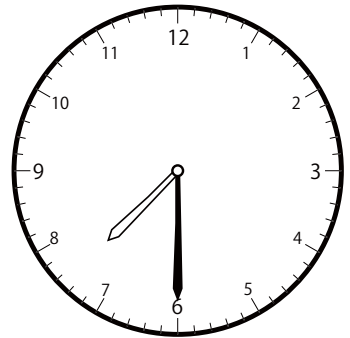
③ 4時^じ30分^{ふん}の時計^{とけい}を見つけよう



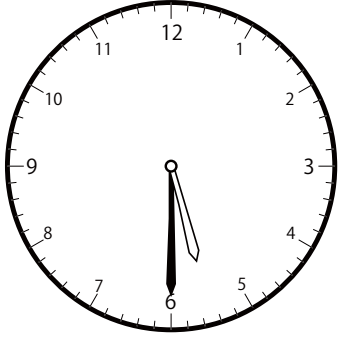
()




()



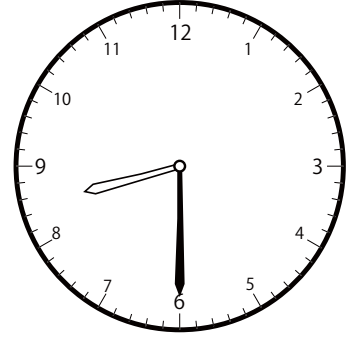
()

〇〇時^じ30分^{ふん}単位の^たんい^いの時計^{とけい}を見つけよう【B1】問題^{もんだい}と同じ時間^{おなじかん}の時計^{とけい}を見つけて()に〇をつけましょう。① 8時^じ30分^{ふん}の時計^{とけい}を見つけよう


()




()




()

② 10時^じ0分^{ふん}の時計^{とけい}を見つけよう


()




()



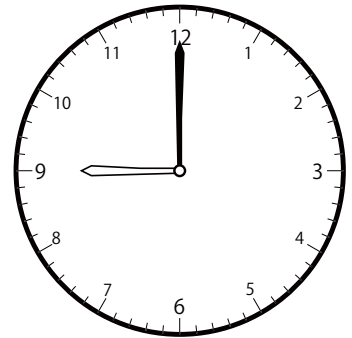
()

③ 11時^じ0分^{ふん}の時計^{とけい}を見つけよう

()



()




()

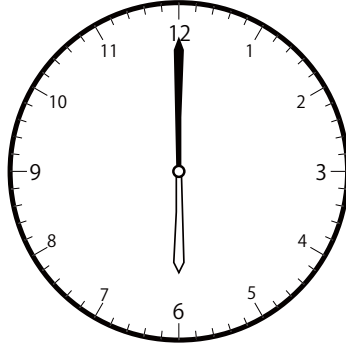
〇〇時^じ30分^{ふん}単位の^{たんい}時計^{とけい}を見つけよう【B1】

問題^{もんだい}と同じ時間^{おなじじかん}の時計^{とけい}を見つけて()に〇をつけましょう。


① 5時^じ0分^{ふん}の時計^{とけい}を見つけよう



()




()

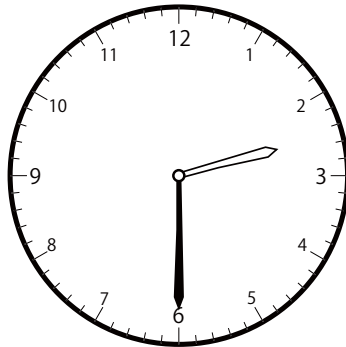


()

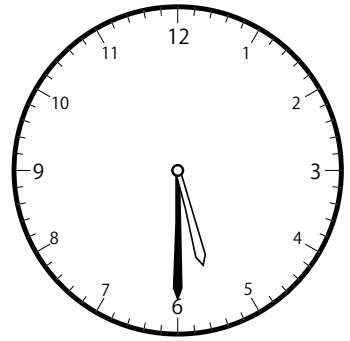
② 2時^じ30分^{ふん}の時計^{とけい}を見つけよう



()

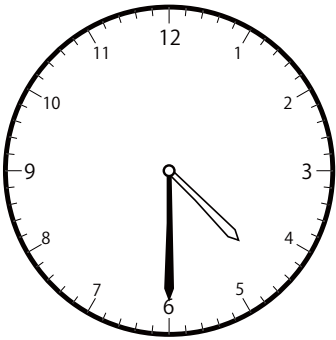


()

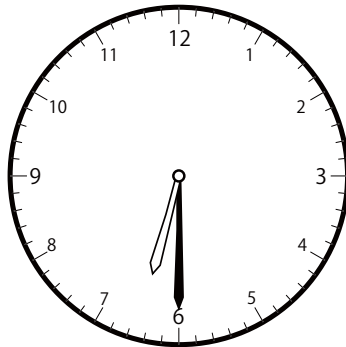


()

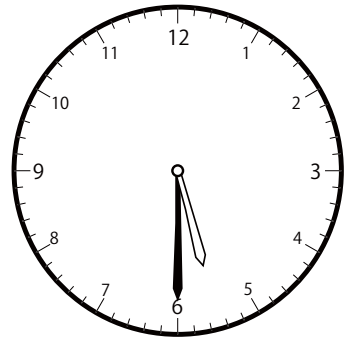
③ 5時^じ30分^{ふん}の時計^{とけい}を見つけよう




()



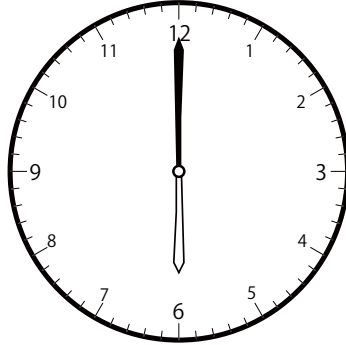
()




()

〇〇時^じ30分^{ふん}単位の^{たんい}時計^{とけい}を見つけよう【B1】問題^{もんだい}と同じ^{おな}時間^{じかん}の時計^{とけい}を見つけ^みて()に〇をつけましょう。① 7時^じ0分^{ふん}の時計^{とけい}を見つけよう

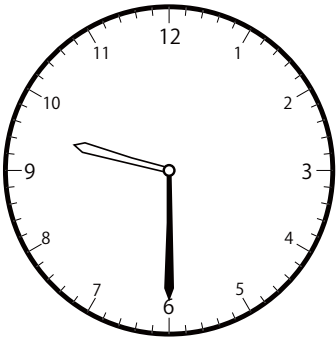
()



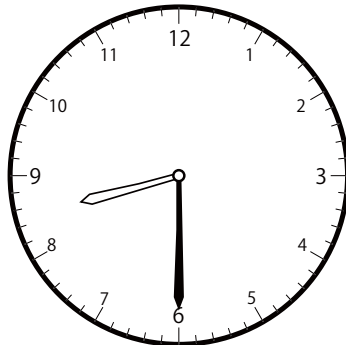
()



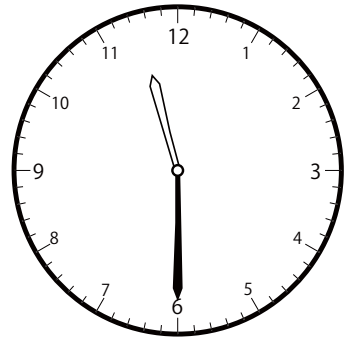
()

② 9時^じ30分^{ふん}の時計^{とけい}を見つけよう

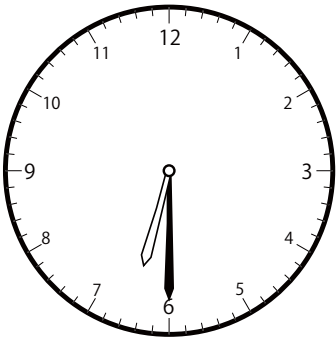
()



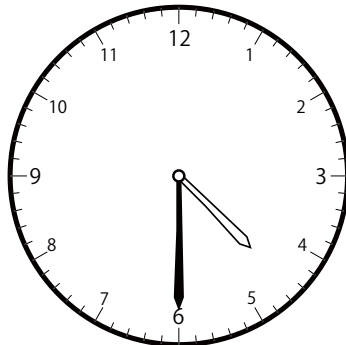
()



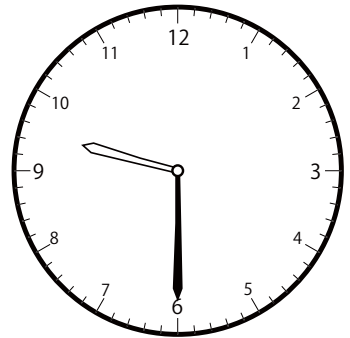
()

③ 6時^じ30分^{ふん}の時計^{とけい}を見つけよう

()



()




()


〇〇時^じ30分^{ふん}単位の^{たんい}時計^{とけい}を見つけよう【B1】

問題^{もんだい}と同じ時間^{おなじかん}の時計^{とけい}を見つけ^みて()に〇をつけましょう。

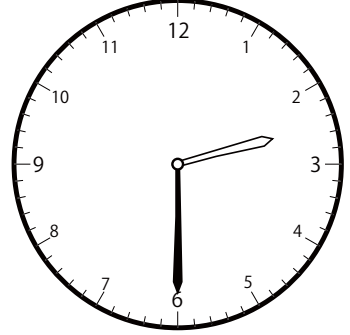
① 1時^じ30分^{ふん}の時計^{とけい}を見つけよう



()

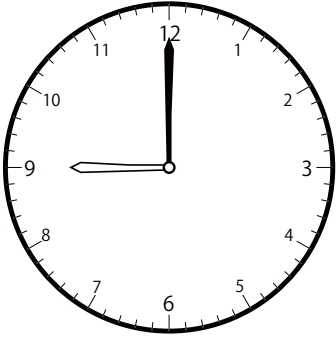


()




()

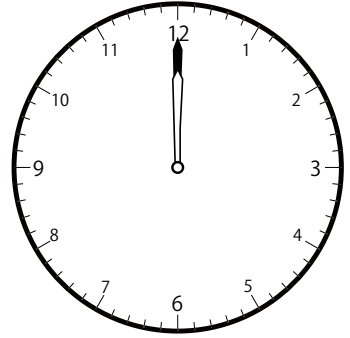
② 9時^じ0分^{ふん}の時計^{とけい}を見つけよう



()

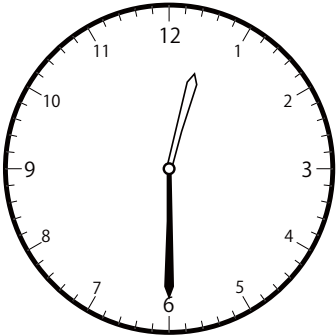


()




()

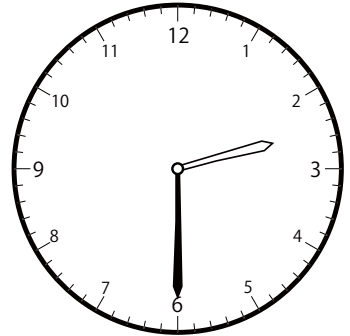
③ 12時^じ30分^{ふん}の時計^{とけい}を見つけよう



()



()




()

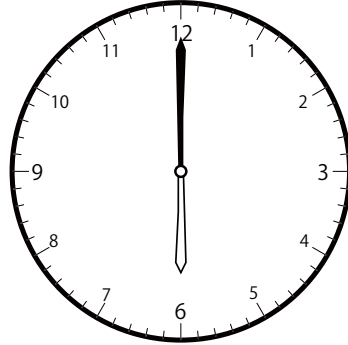
〇〇時^じ30分^{ふん}単位の^{たんい}時計^{とけい}を見つけよう【B1】

問題^{もんだい}と同じ時間^{おなじじかん}の時計^{とけい}を見つけて()に〇をつけましょう。


① 6時^じ0分^{ふん}の時計^{とけい}を見つけよう



()




()




()


② 4時^じ0分^{ふん}の時計^{とけい}を見つけよう



()

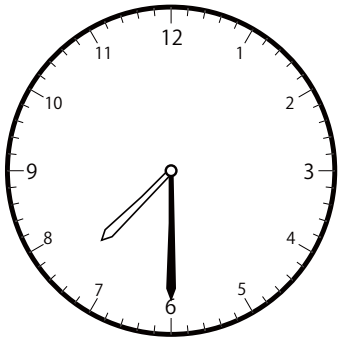


()




()

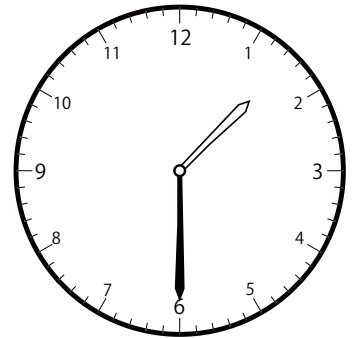
③ 10時^じ30分^{ふん}の時計^{とけい}を見つけよう



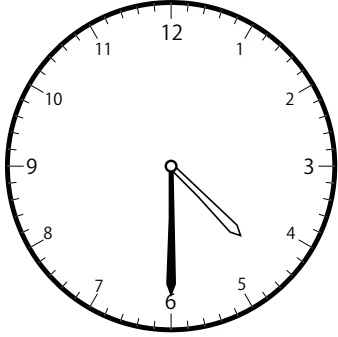
()



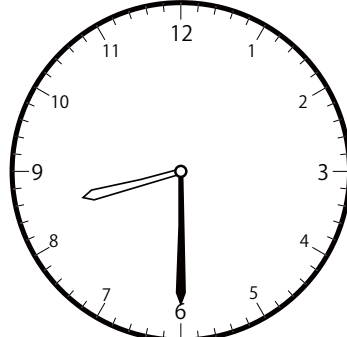
()



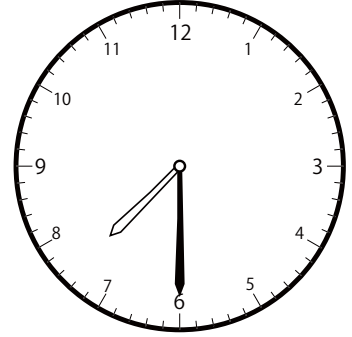
()

〇〇時^じ30分^{ふん}単位の^{たんい}時計^{とけい}を見つけよう【B1】問題^{もんだい}と同じ時間^{おなじかん}の時計^{とけい}を見つけて()に〇をつけましょう。① 7時^じ30分^{ふん}の時計^{とけい}を見つけよう


()




()




()

② 10時^じ0分^{ふん}の時計^{とけい}を見つけよう


()




()



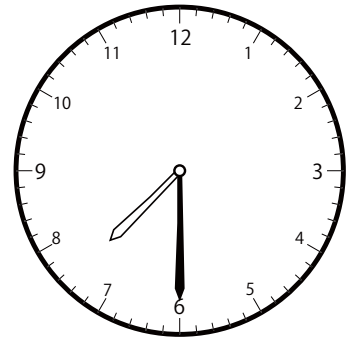
()

③ 10時^じ30分^{ふん}の時計^{とけい}を見つけよう

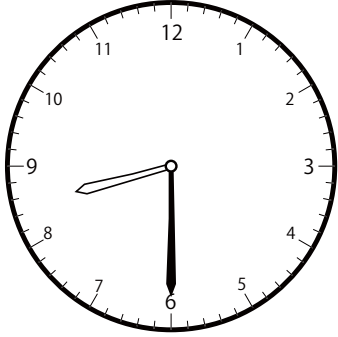
()




()




()

〇〇時^じ30分^{ふん}単位の時計^{とけい}を見つけよう【B1】問題^{もんだい}と同じ時間^{おなじかん}の時計^{とけい}を見つけて()に〇をつけましょう。① 11時^じ30分^{ふん}の時計^{とけい}を見つけよう

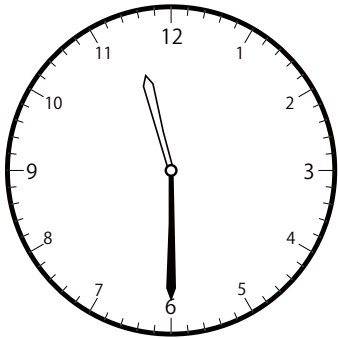
()




()



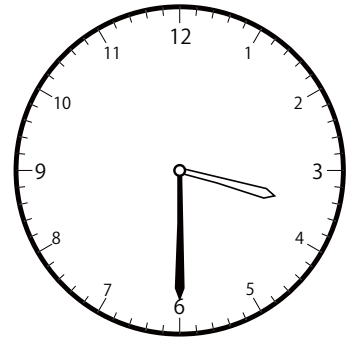
()

② 12時^じ30分^{ふん}の時計^{とけい}を見つけよう


()




()




()

③ 3時^じ0分^{ふん}の時計^{とけい}を見つけよう

()



()




()


〇〇時 30分 単位の時計を見つけよう【B1】

問題と同じ時間の時計を見つけて()に〇をつけましょう。


① 9時 0分の時計を見つけよう



()

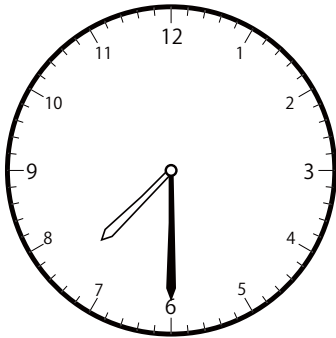


()

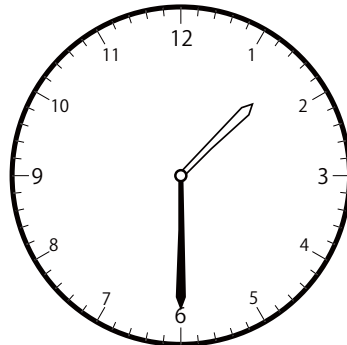


()

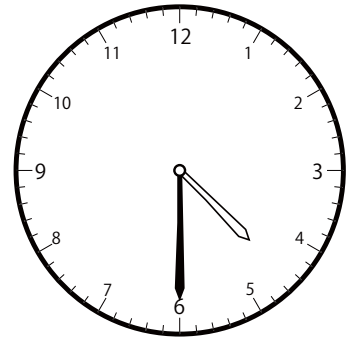
② 4時 30分の時計を見つけよう



()




()




()


③ 11時 0分の時計を見つけよう



()



()

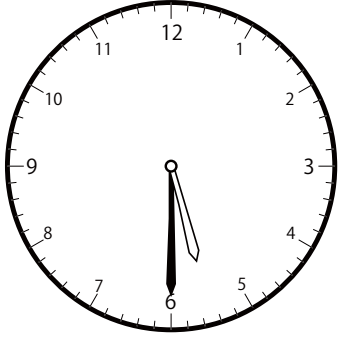


()

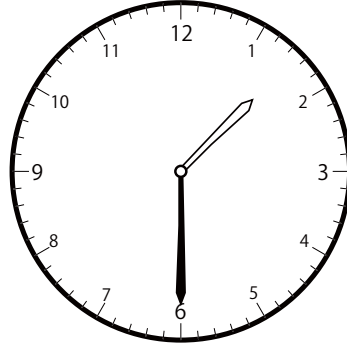
〇〇時^じ30分^{ふん}単位の^{たんい}時計^{とけい}を見つけよう【B1】

問題^{もんだい}と同じ時間^{おなじじかん}の時計^{とけい}を見つけ^みて()に〇をつけましょう。

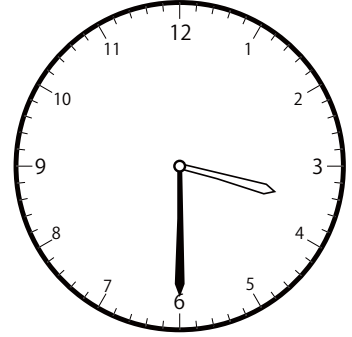
① 3時^じ30分^{ふん}の時計^{とけい}を見つけよう



()

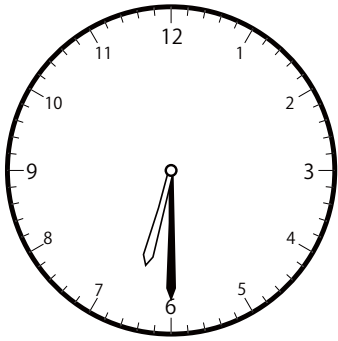


()

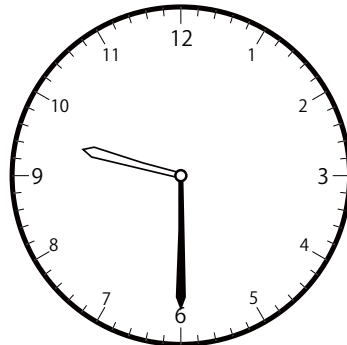


()

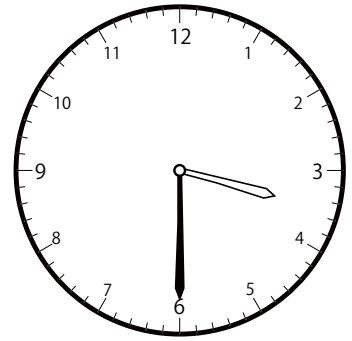
② 6時^じ30分^{ふん}の時計^{とけい}を見つけよう



()




()




()

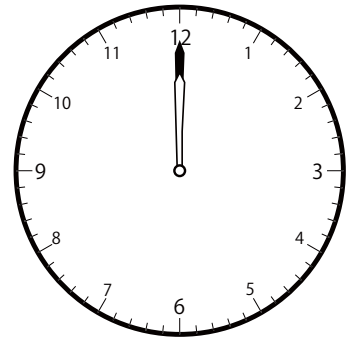
③ 12時^じ0分^{ふん}の時計^{とけい}を見つけよう



()



()




()

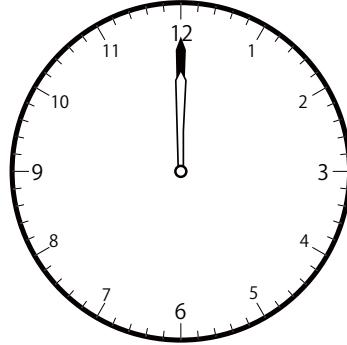
〇〇時^じ30分^{ふん}単位の^{たんい}時計^{とけい}を見つけよう【B1】

問題^{もんだい}と同じ時間^{おなじじかん}の時計^{とけい}を見つけて()に〇をつけましょう。


① 2時^じ0分^{ふん}の時計^{とけい}を見つけよう



()

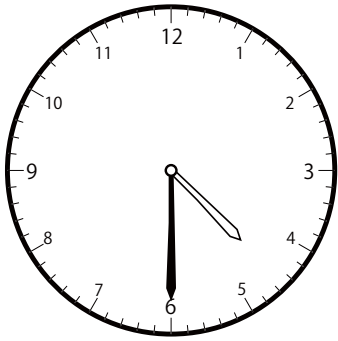


()

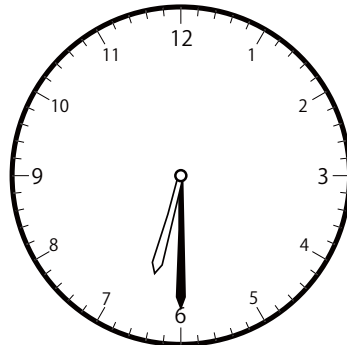


()

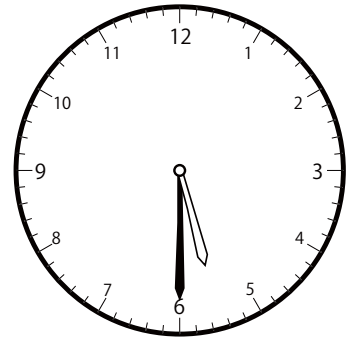
② 5時^じ30分^{ふん}の時計^{とけい}を見つけよう



()

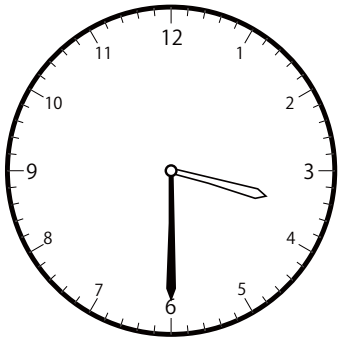


()

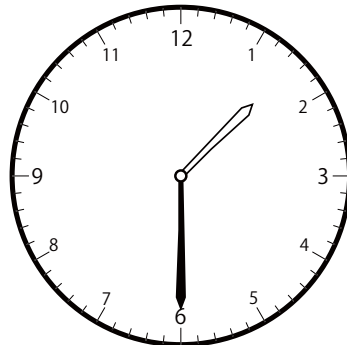


()

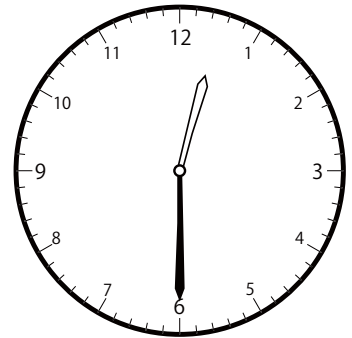
③ 1時^じ30分^{ふん}の時計^{とけい}を見つけよう




()



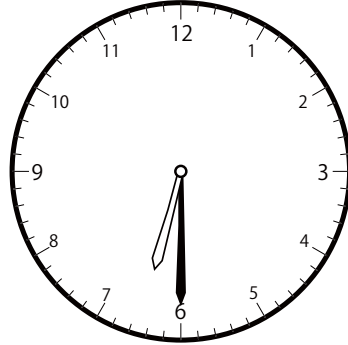
()



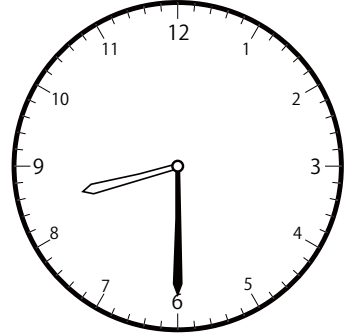
()

〇〇時^じ30分^{ふん}単位の^{たんい}時計^{とけい}を見つけよう【B1】問題^{もんだい}と同じ時間^{おなじかん}の時計^{とけい}を見つけ^みて()に〇をつけましょう。① 8時^じ30分^{ふん}の時計^{とけい}を見つけよう

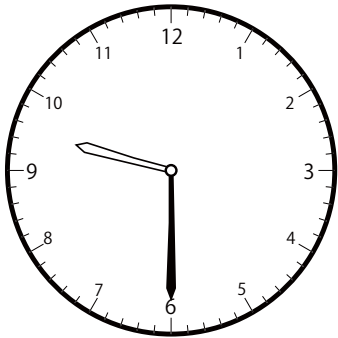
()



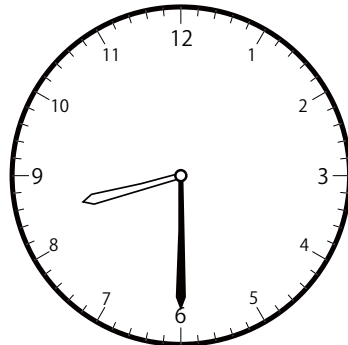
()



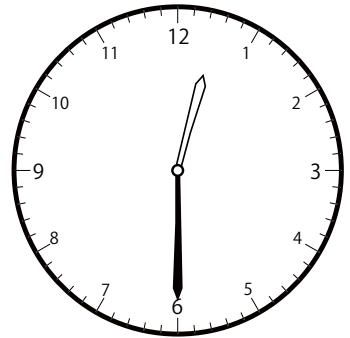
()

② 9時^じ30分^{ふん}の時計^{とけい}を見つけよう


()



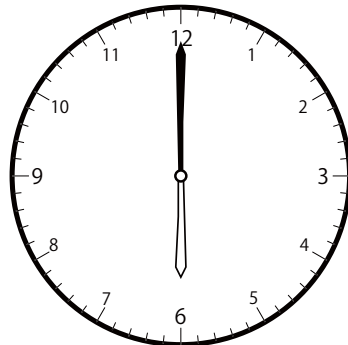
()




()

③ 6時^じ0分^{ふん}の時計^{とけい}を見つけよう

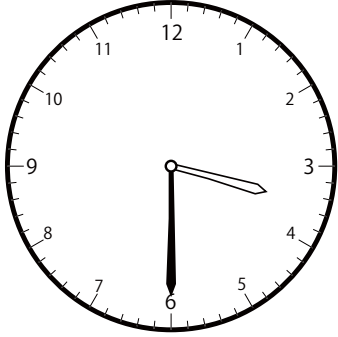
()



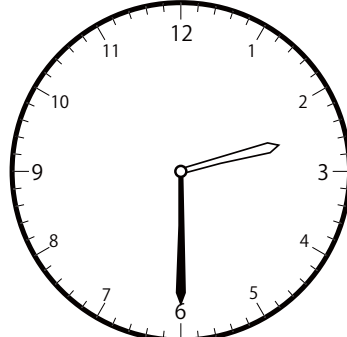
()




()

〇〇時^じ30分^{ふん}単位の時計^{とけい}を見つけよう【B1】問題^{もんだい}と同じ時間^{おなじじかん}の時計^{とけい}を見つけて()に〇をつけましょう。① 2時^じ30分^{ふん}の時計^{とけい}を見つけよう

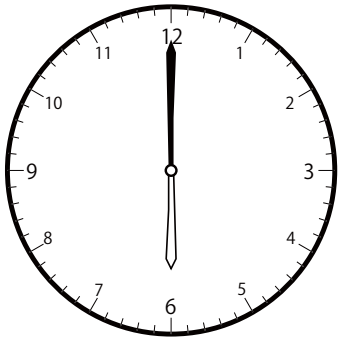
()




()




()

② 8時^じ0分^{ふん}の時計^{とけい}を見つけよう


()




()




()

③ 7時^じ0分^{ふん}の時計^{とけい}を見つけよう

()



()



()