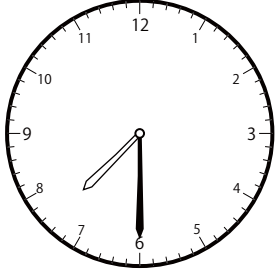


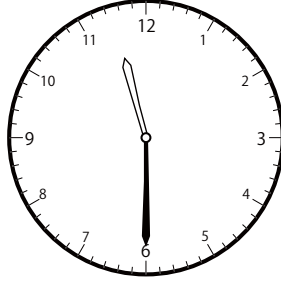
じ ふん たん い とけい み
〇〇時30分単位の時計を見つけよう【B1】

もんだい おな じかん とけい み
問題と同じ時間の時計を見つけて()に○をつけましょう。

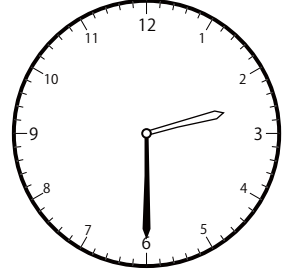
① 1時30分の時計を見つけよう



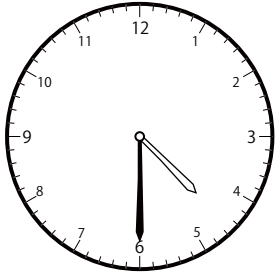
()



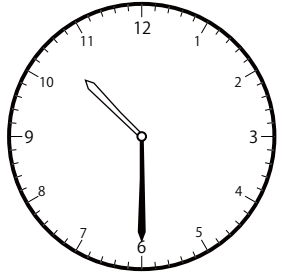
()




()



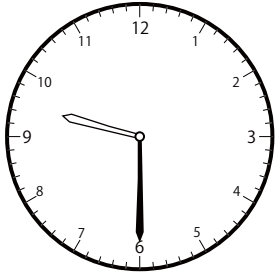
()



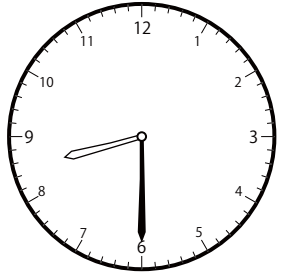
()



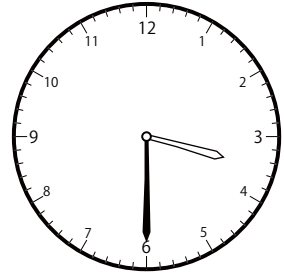
()



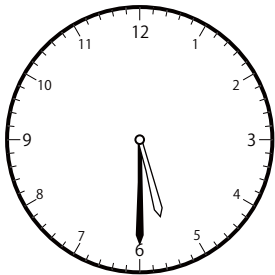
()



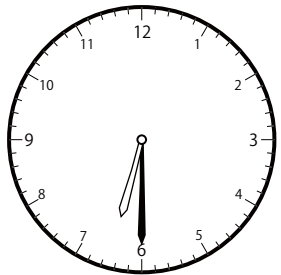
()



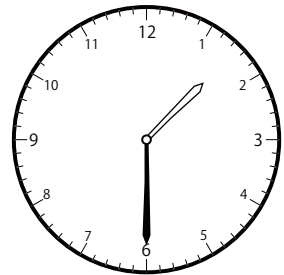
()



()



()

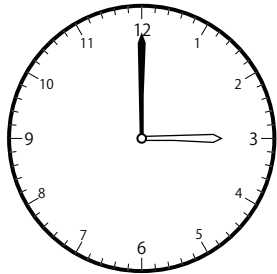


()

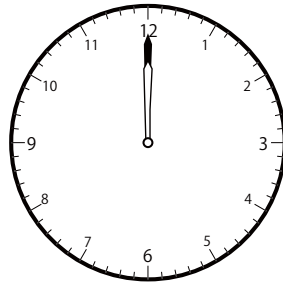
〇〇時^じ30分^{ふん}単位の^{たんい}時計^{とけい}を見つけよう【B1】

問題^{もんだい}と同じ時間^{おなじかん}の時計^{とけい}を見つけて()に〇をつけましょう。

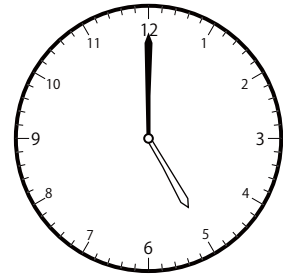
① 2時^じ0分^{ふん}の時計^{とけい}を見つけよう



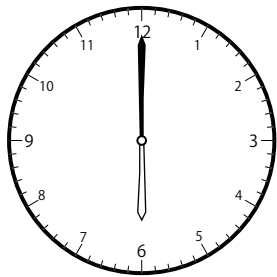
()



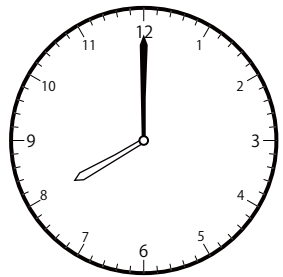
()




()



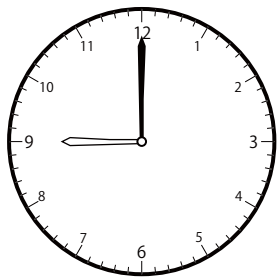
()




()



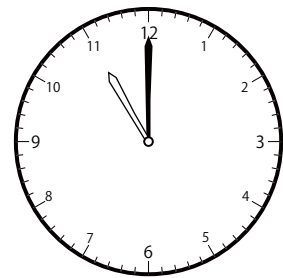
()



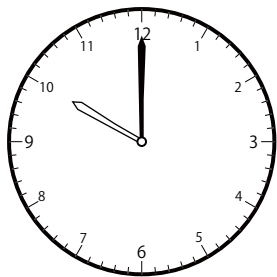
()




()




()



()



()

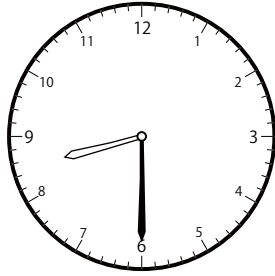


()

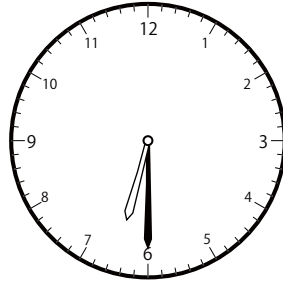
じ ふん たん い とけい み
〇〇時30分単位の時計を見つけよう【B1】

もんだい おな じかん とけい み
問題と同じ時間の時計を見つけて()に○をつけましょう。

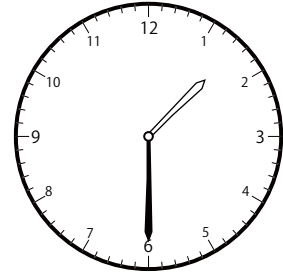
① 2時30分の時計を見つけよう



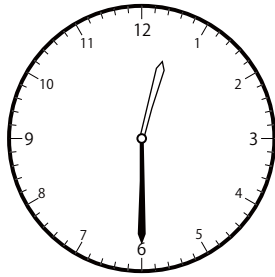
()



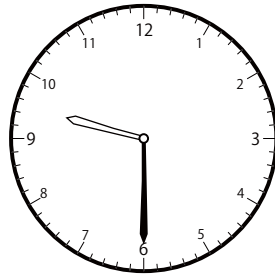
()




()



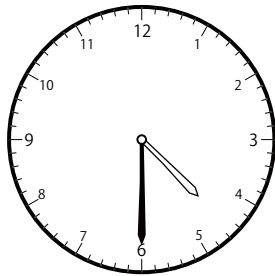
()



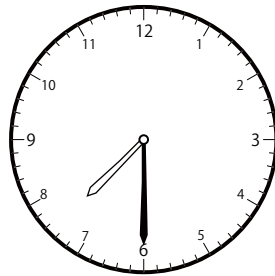
()



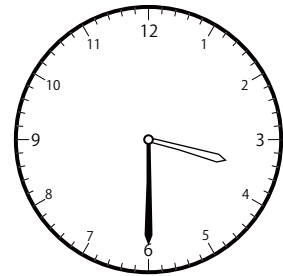
()



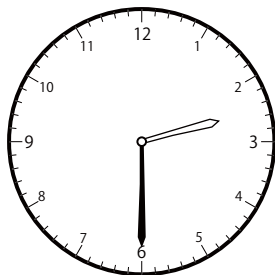
()



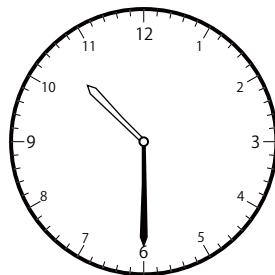
()



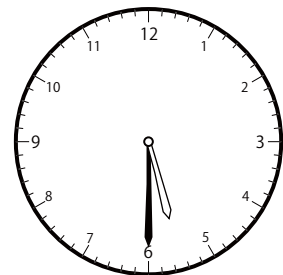
()



()



()

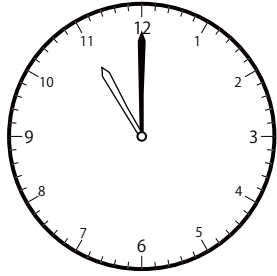


()

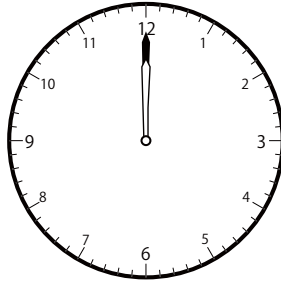
〇〇時^じ30分^{ふん}単位の^{たんい}時計^{とけい}を見つけよう【B1】

問題^{もんだい}と同じ時間^{おなじかん}の時計^{とけい}を見つけて()に〇をつけましょう。


① 3時^じ0分^{ふん}の時計^{とけい}を見つけよう




()




()




()



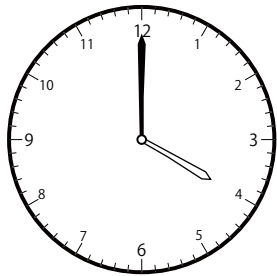
()




()




()



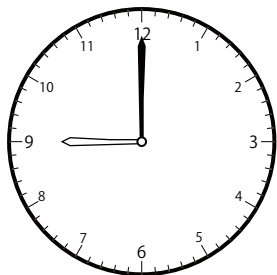
()



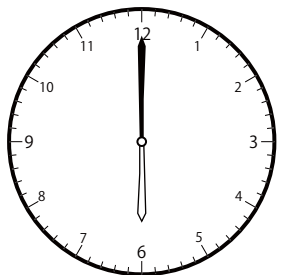
()




()



()



()

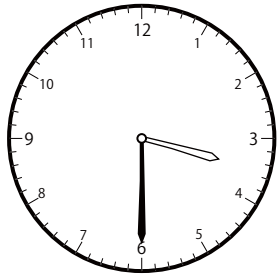


()

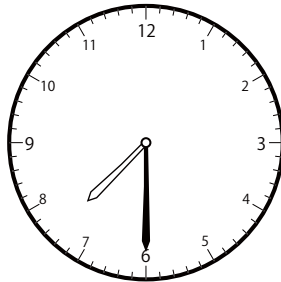
〇〇時^じ30分^{ふん}単位の^{たんい}時計^{とけい}を見つけよう【B1】

問題^{もんだい}と同じ時間^{おなじかん}の時計^{とけい}を見つけて()に〇をつけましょう。

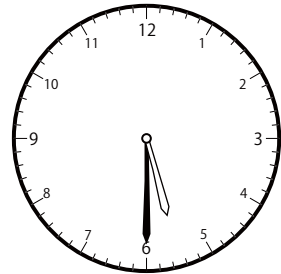
① 3時^じ30分^{ふん}の時計^{とけい}を見つけよう



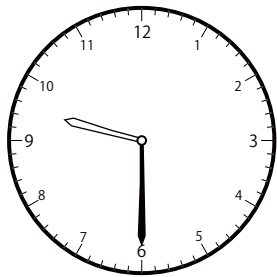
()




()




()



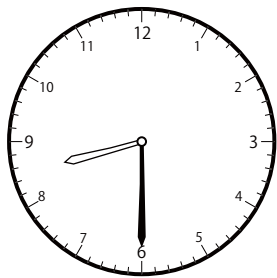
()




()



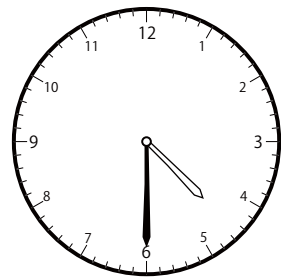
()



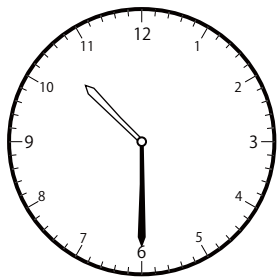
()



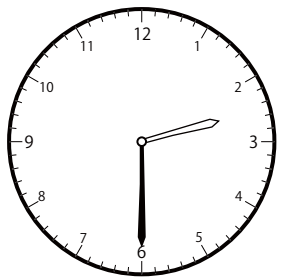
()



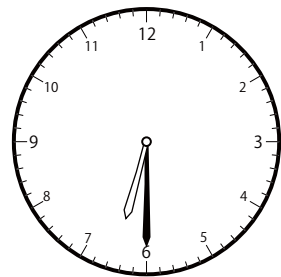
()



()



()

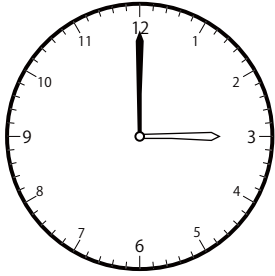


()


じ ふん たん い とけい み
〇〇時 30分 単位の時計を見つけよう【B1】

もんだい おな じかん とけい み
問題と同じ時間の時計を見つけて()に〇をつけましょう。


① 4時 0分の時計を見つけよう



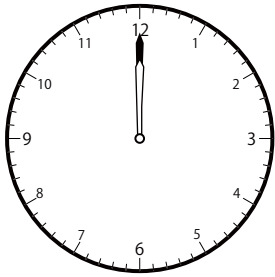
()




()




()




()




()




()



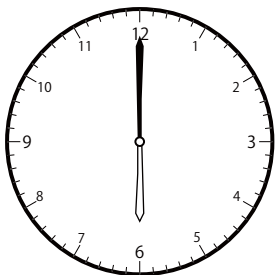
()



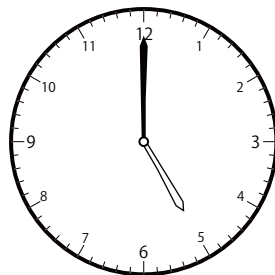
()



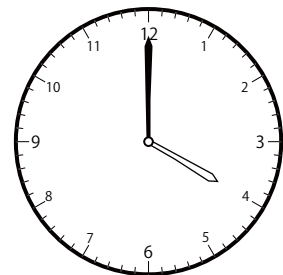
()



()



()

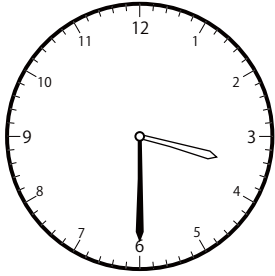


()


〇〇時^じ30分^{ふん}単位の^{たんい}時計^{とけい}を見つけよう【B1】

問題^{もんだい}と同じ時間^{おなじかん}の時計^{とけい}を見つけて()に〇をつけましょう。

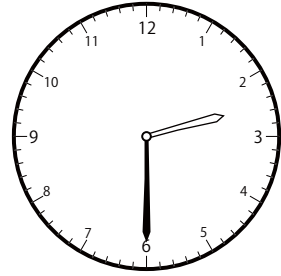
① 4時^じ30分^{ふん}の時計^{とけい}を見つけよう



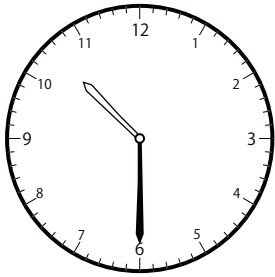
()



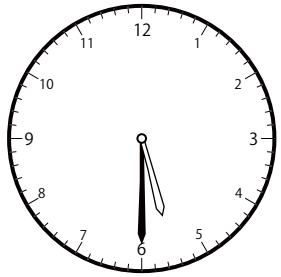
()



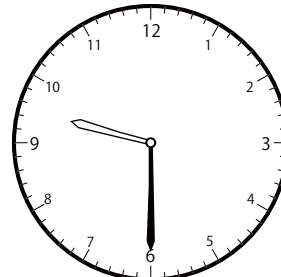
()



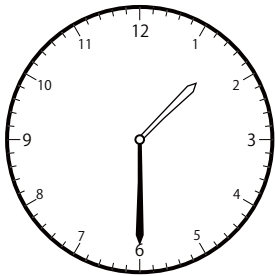
()



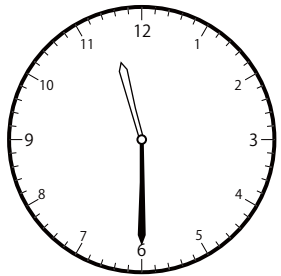
()



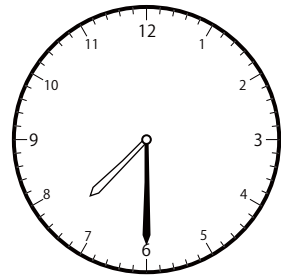
()



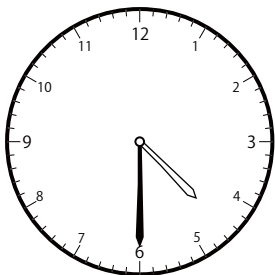
()



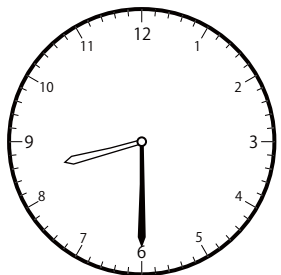
()



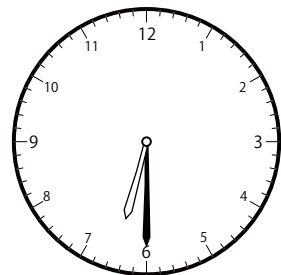
()



()



()

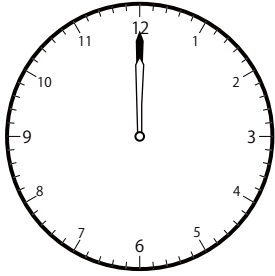


()


〇〇時^じ30分^{ふん}単位の^{たんい}時計^{とけい}を見つけよう【B1】

問題^{もんだい}と同じ時間^{おなじかん}の時計^{とけい}を見つけて()に〇をつけましょう。

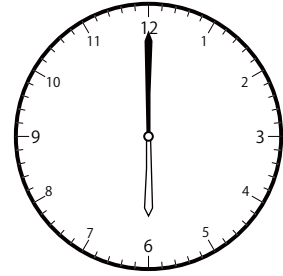
① 5時^じ0分^{ふん}の時計^{とけい}を見つけよう



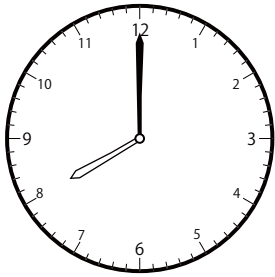
()




()




()



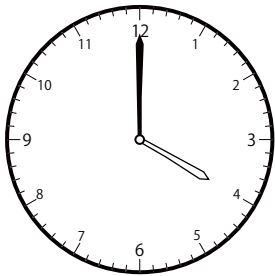
()




()




()




()




()




()



()



()

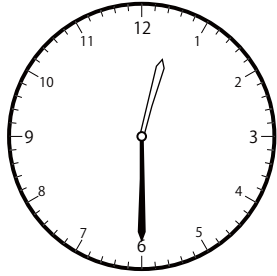


()

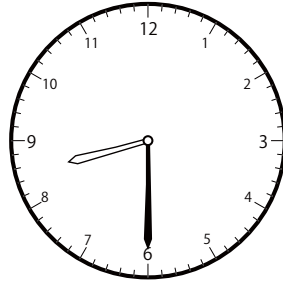
〇〇時^じ30分^{ふん}単位の^{たんい}時計^{とけい}を見つけよう【B1】

問題^{もんだい}と同じ時間^{おなじかん}の時計^{とけい}を見つけて()に〇をつけましょう。

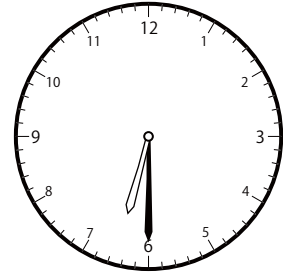
① 5時^じ30分^{ふん}の時計^{とけい}を見つけよう



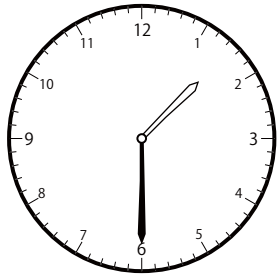
()



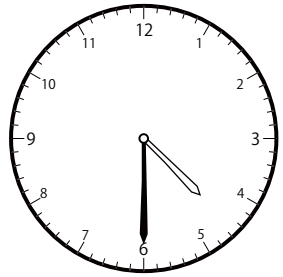
()




()



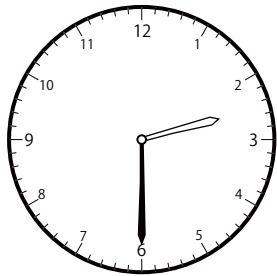
()



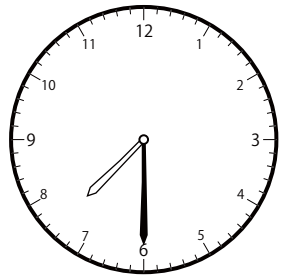
()



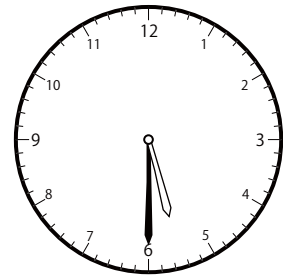
()



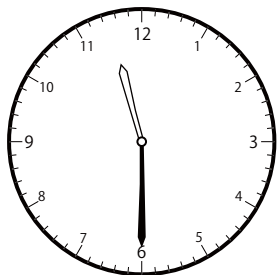
()



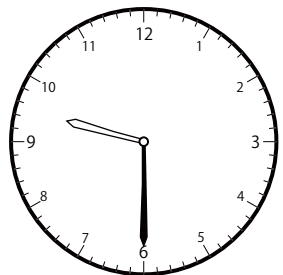
()



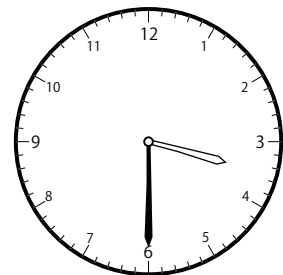
()



()



()

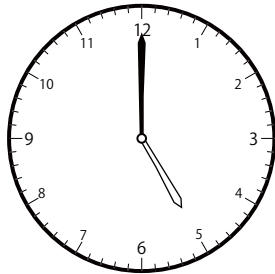


()


じ ふん たん い とけい み
〇〇時 30分 単位の時計を見つけよう【B1】

もんだい おな じかん とけい み
問題と同じ時間の時計を見つけて()に○をつけましょう。


① 6時 0 分の時計を見つけよう



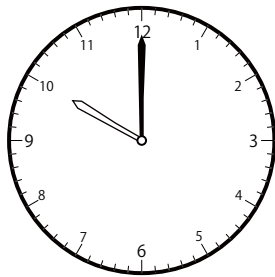
()




()



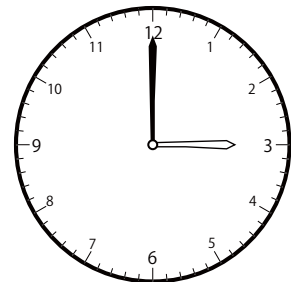
()



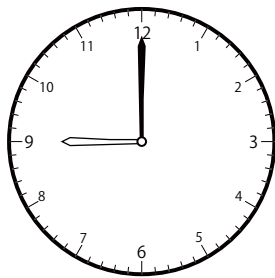
()




()



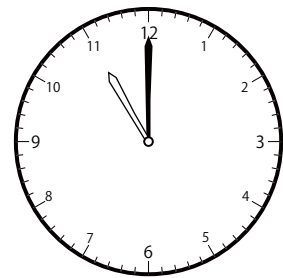
()



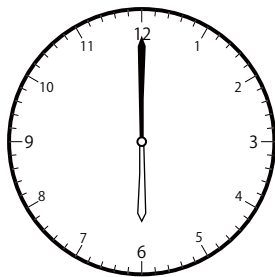
()



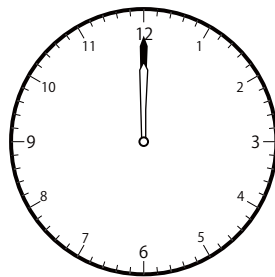
()




()



()



()

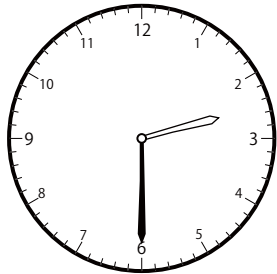


()


じ ふん たん い とけい み
〇〇時 30分 単位の時計を見つけよう【B1】

もんだい おな じかん とけい み
問題と同じ時間の時計を見つけて()に○をつけましょう。

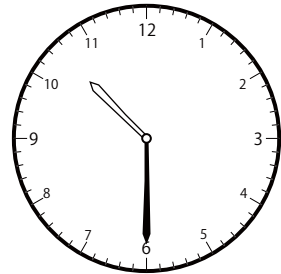
① 6時 30分の時計を見つけよう



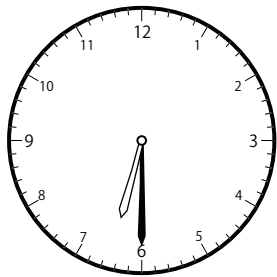
()



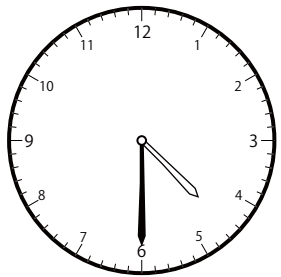
()




()



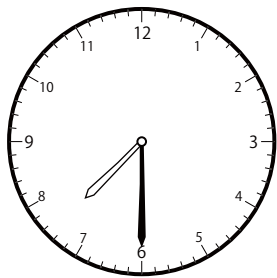
()




()



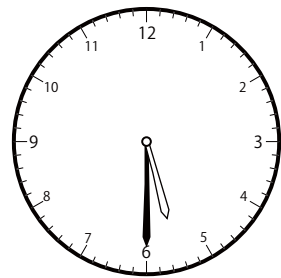
()



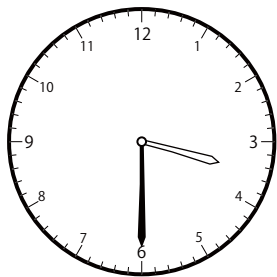
()



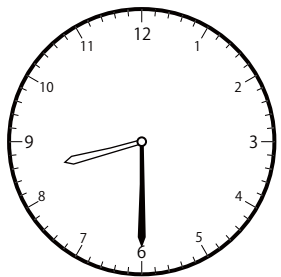
()



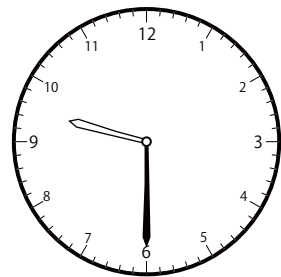
()



()



()




()


じ ふん たん い とけい み
〇〇時 30分 単位の時計を見つけよう【B1】

もんだい おな じかん とけい み
問題と同じ時間の時計を見つけて()に○をつけましょう。


① 7時 0分の時計を見つけよう



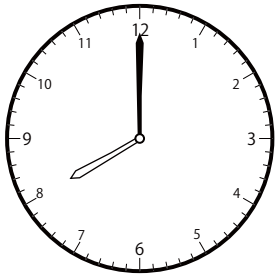
()




()




()




()




()



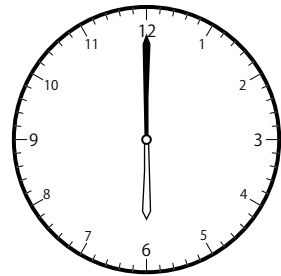
()



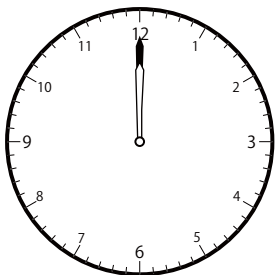
()




()



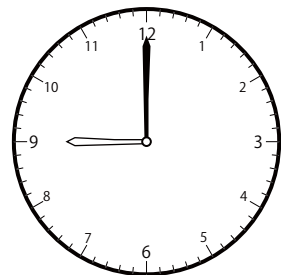
()



()



()

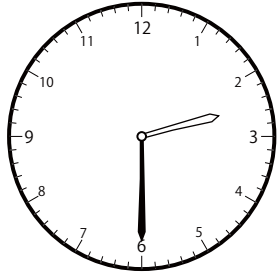


()

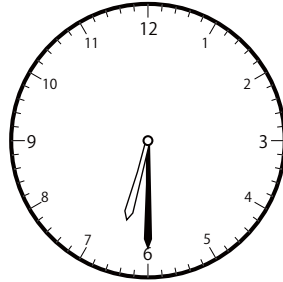
〇〇時^じ30分^{ふん}単位の^{たんい}時計^{とけい}を見つけよう【B1】

問題^{もんだい}と同じ時間^{おなじかん}の時計^{とけい}を見つけて()に〇をつけましょう。

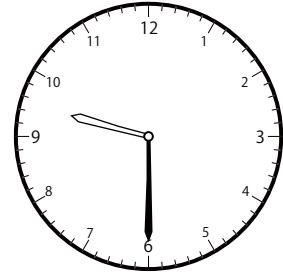
① 7時^じ30分^{ふん}の時計^{とけい}を見つけよう



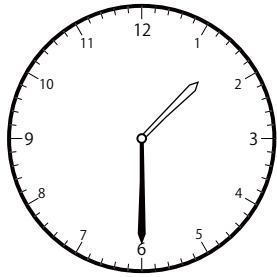
()



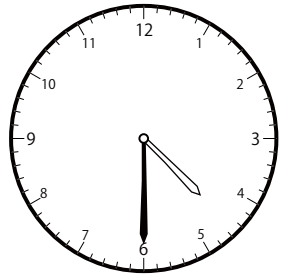
()




()



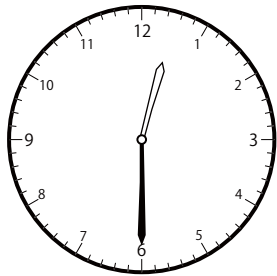
()



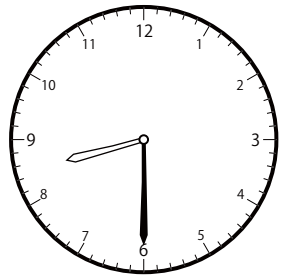
()



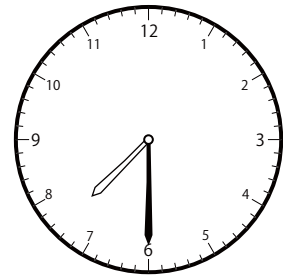
()



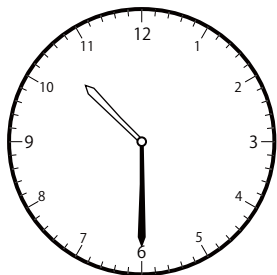
()



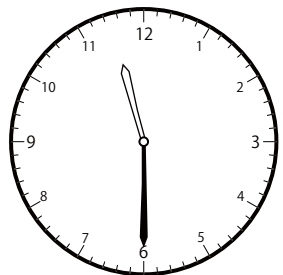
()



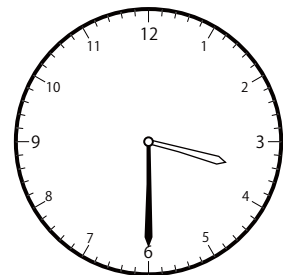
()



()



()

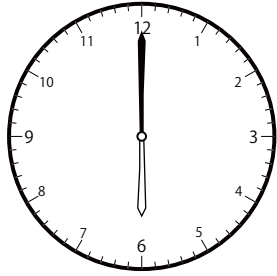


()


〇〇時^じ30分^{ふん}単位の^{たんい}時計^{とけい}を見つけよう【B1】

問題^{もんだい}と同じ時間^{おなじかん}の時計^{とけい}を見つけて()に〇をつけましょう。

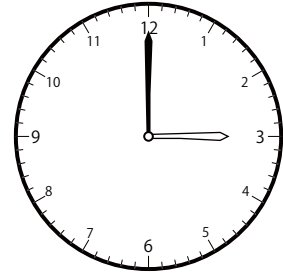
① 8時^じ0分^{ふん}の時計^{とけい}を見つけよう



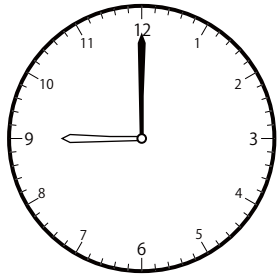
()




()




()




()



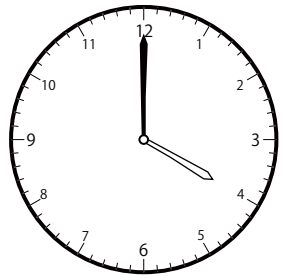
()



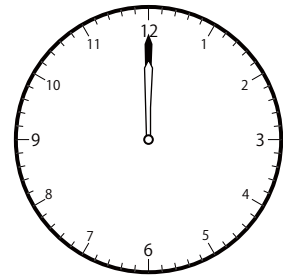
()



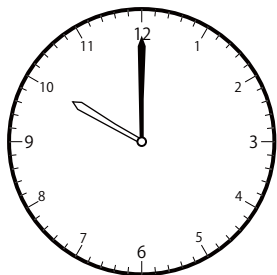
()




()




()



()



()

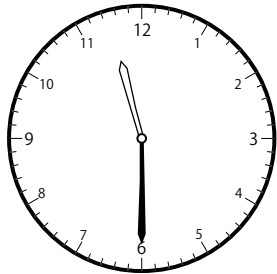


()

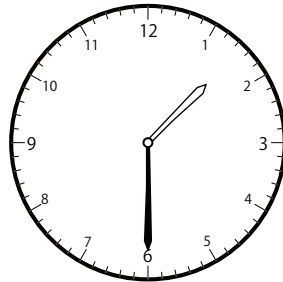
〇〇時^じ30分^{ふん}単位の^{たんい}時計^{とけい}を見つけよう【B1】

問題^{もんだい}と同じ時間^{おなじかん}の時計^{とけい}を見つけて()に〇をつけましょう。

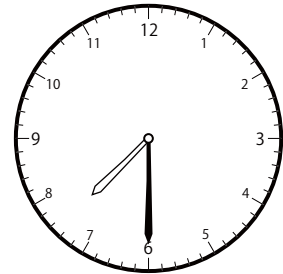
① 8時^じ30分^{ふん}の時計^{とけい}を見つけよう



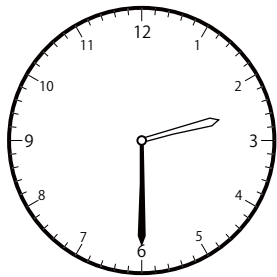
()




()




()



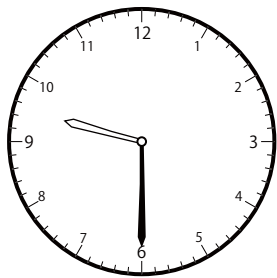
()



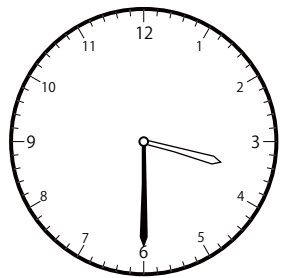
()



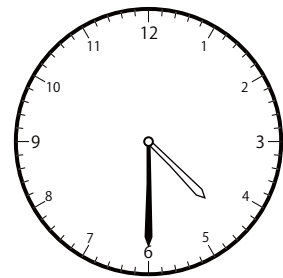
()



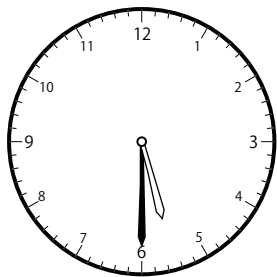
()



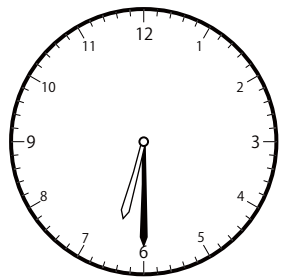
()



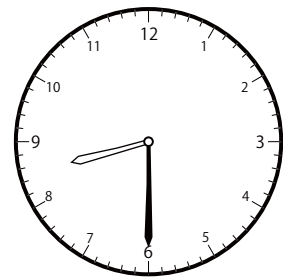
()



()



()




()


じ ふん たん い とけい み
〇〇時 30分 単位の時計を見つけよう【B1】

もんだい おな じかん とけい み
問題と同じ時間の時計を見つけて()に〇をつけましょう。

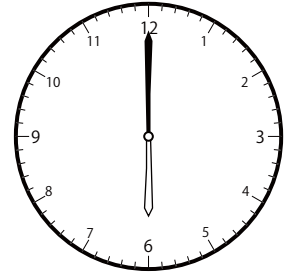
① 9時 0分の時計を見つけよう




()




()



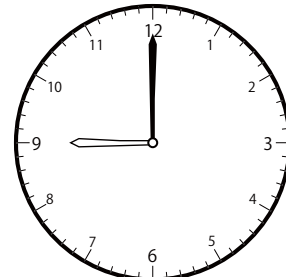
()




()




()



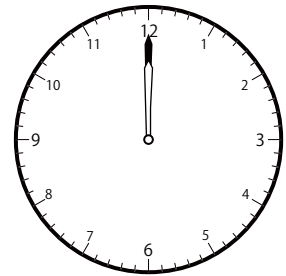
()



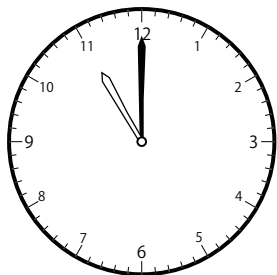
()




()



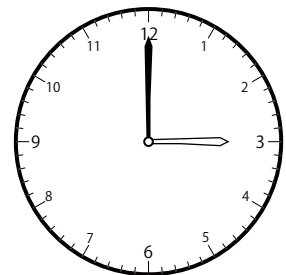
()



()



()

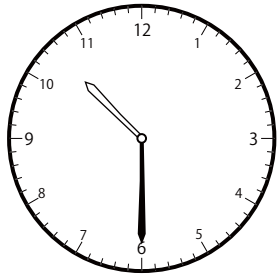


()

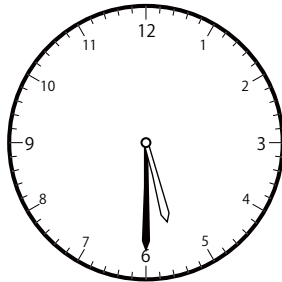
〇〇時^じ30分^{ふん}単位の^{たんい}時計^{とけい}を見つけよう【B1】

問題^{もんだい}と同じ時間^{おなじかん}の時計^{とけい}を見つけて()に〇をつけましょう。


① 9時^じ30分^{ふん}の時計^{とけい}を見つけよう



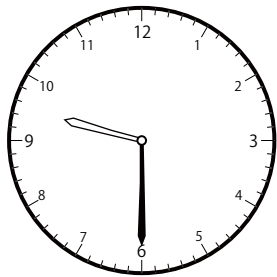
()



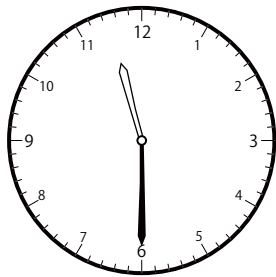
()



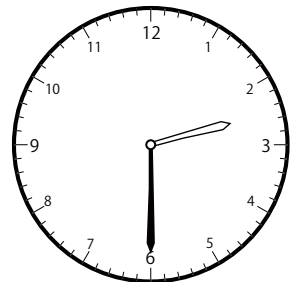
()



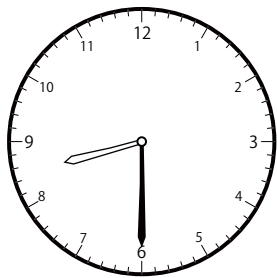
()



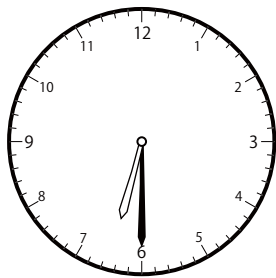
()



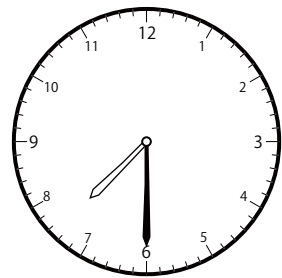
()



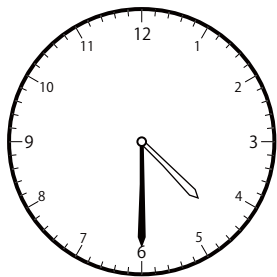
()



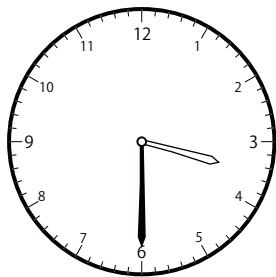
()



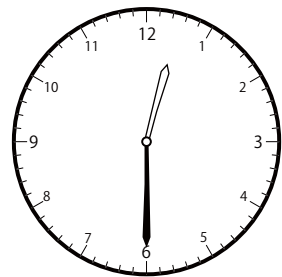
()



()



()




()


じ ふん たん い とけい み
〇〇時 30分 単位の時計を見つけよう【B1】

もんだい おな じかん とけい み
問題と同じ時間の時計を見つけて()に○をつけましょう。


① 10時 0分の時計を見つけよう




()



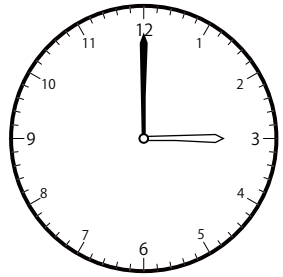
()



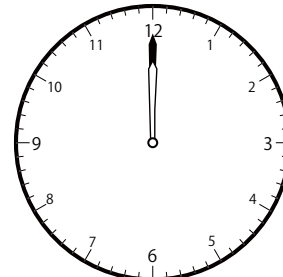
()



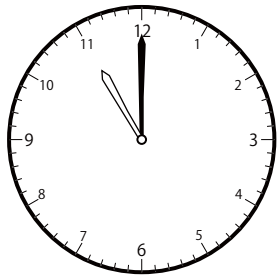
()



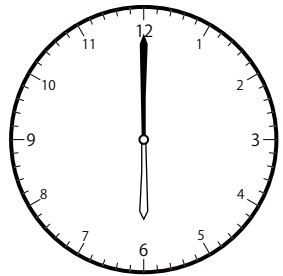
()




()



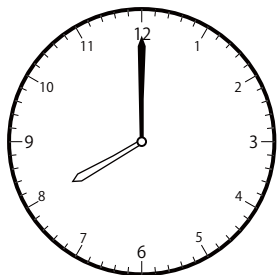
()




()




()



()



()

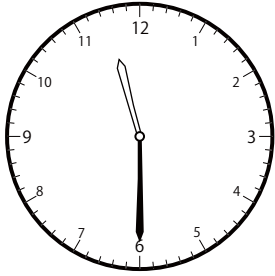


()

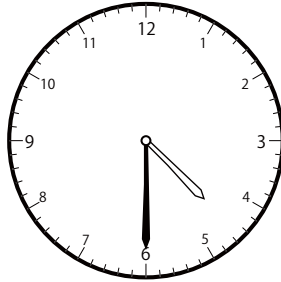
〇〇時^じ30分^{ふん}単位の^{たんい}時計^{とけい}を見つけよう【B1】

問題^{もんだい}と同じ時間^{おなじかん}の時計^{とけい}を見つけて()に〇をつけましょう。

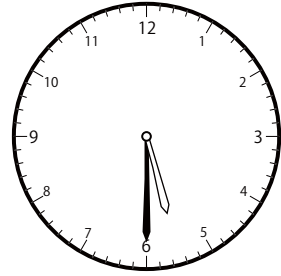
① 10時^じ30分^{ふん}の時計^{とけい}を見つけよう



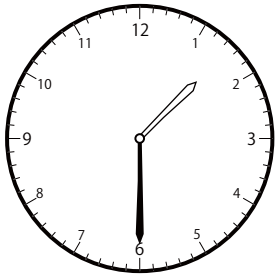
()



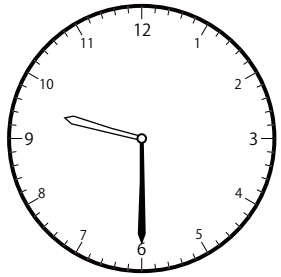
()



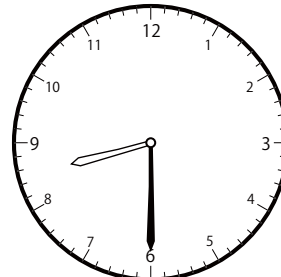
()



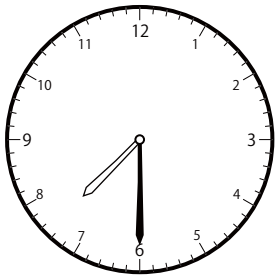
()



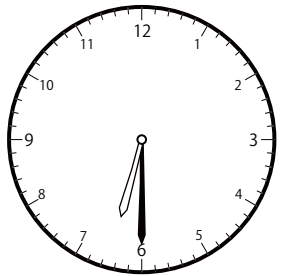
()



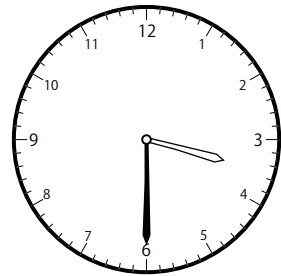
()



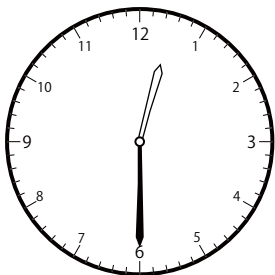
()



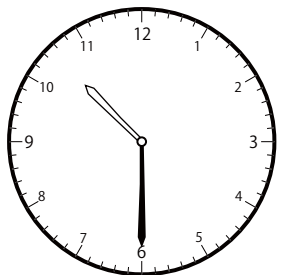
()



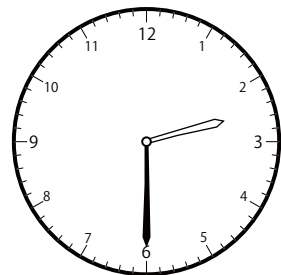
()



()



()

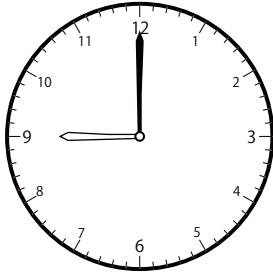


()

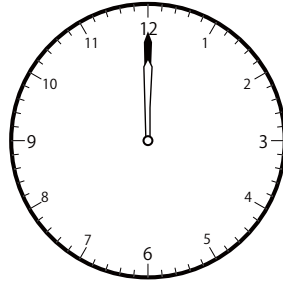
じ ふん たん い とけい み
〇〇時 30分 単位の時計を見つけよう【B1】

もんだい おな じかん とけい み
問題と同じ時間の時計を見つけて()に〇をつけましょう。


① 11時 0分の時計を見つけよう



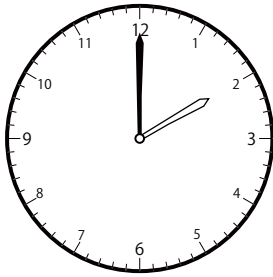
()




()



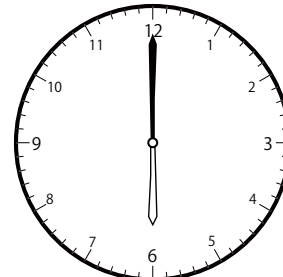
()



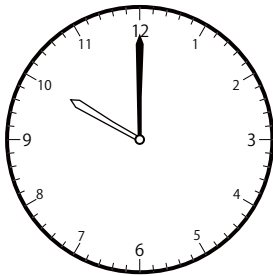
()



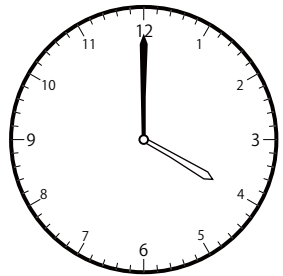
()




()



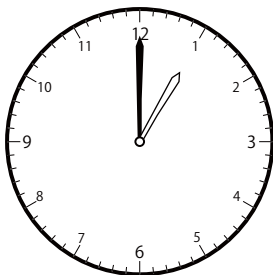
()




()




()



()



()

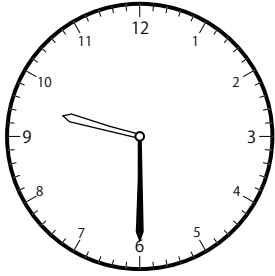


()

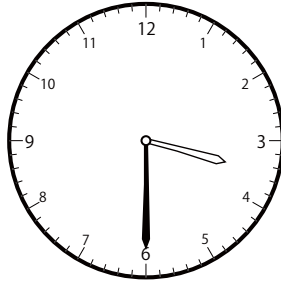
〇〇時^じ30分^{ふん}単位の^{たんい}時計^{とけい}を見つけよう【B1】

問題^{もんだい}と同じ時間^{おなじかん}の時計^{とけい}を見つけて()に〇をつけましょう。

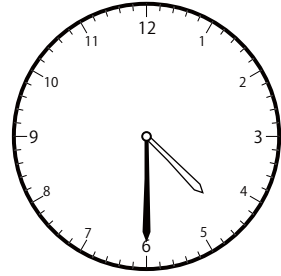
① 11時^じ30分^{ふん}の時計^{とけい}を見つけよう



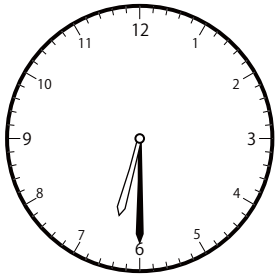
()




()




()



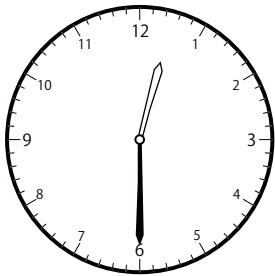
()



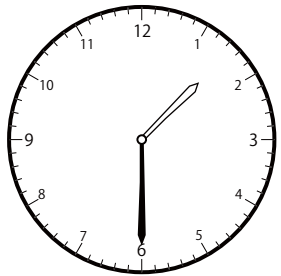
()



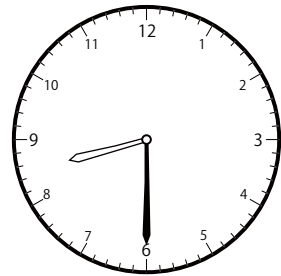
()



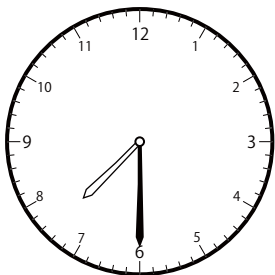
()



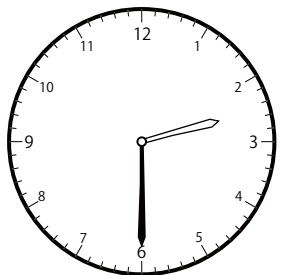
()



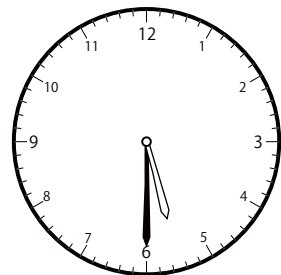
()



()



()




()


じ ふん たん い とけい み
〇〇時 30分 単位の時計を見つけよう【B1】

もんだい おな じかん とけい み
問題と同じ時間の時計を見つけて()に〇をつけましょう。

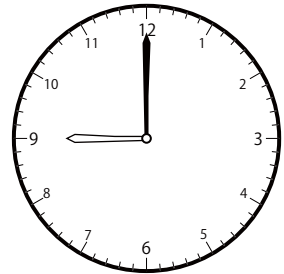
① 12時 0分の時計を見つけよう




()



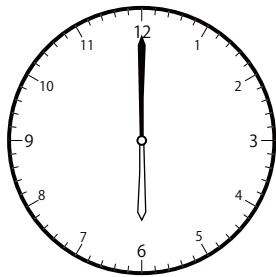
()



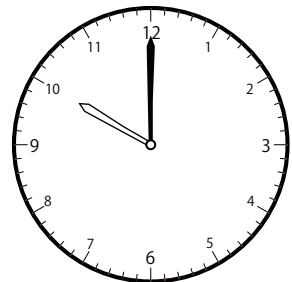
()



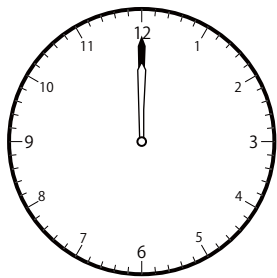
()



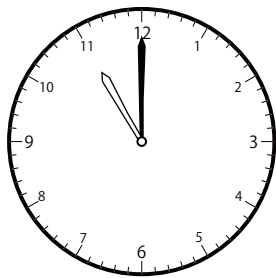
()



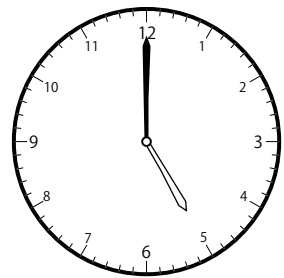
()



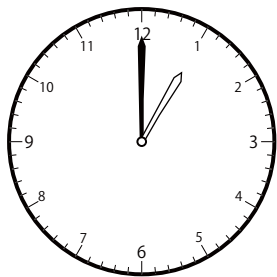
()




()




()



()



()

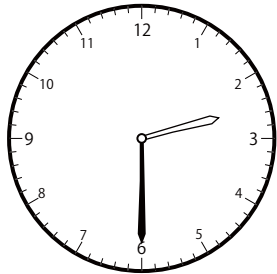


()


〇〇時^じ30分^{ふん}単位の^{たんい}時計^{とけい}を見つけよう【B1】

問題^{もんだい}と同じ時間^{おなじかん}の時計^{とけい}を見つけて()に〇をつけましょう。

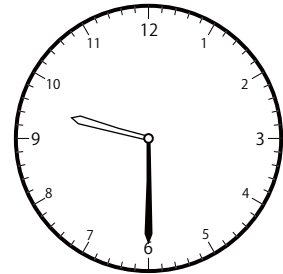
① 12時^じ30分^{ふん}の時計^{とけい}を見つけよう



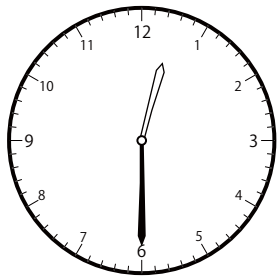
()



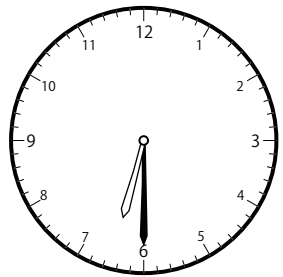
()




()



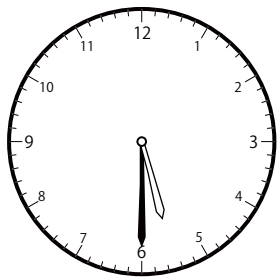
()



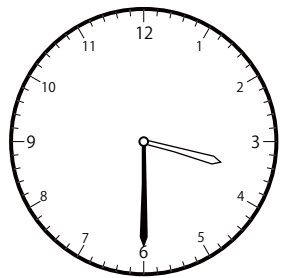
()



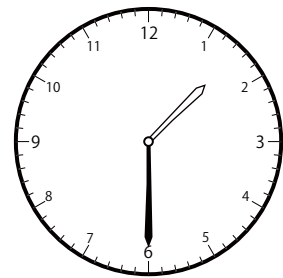
()



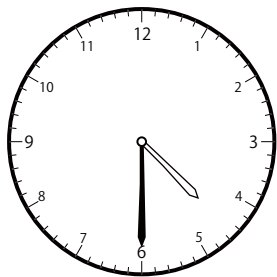
()



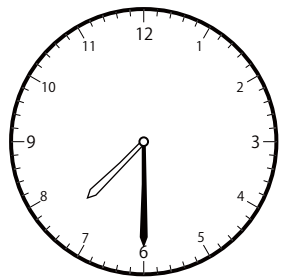
()



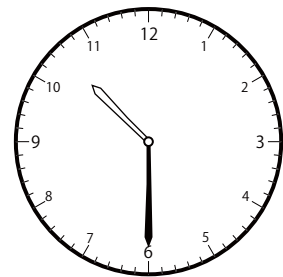
()



()



()

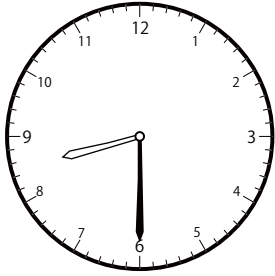


()

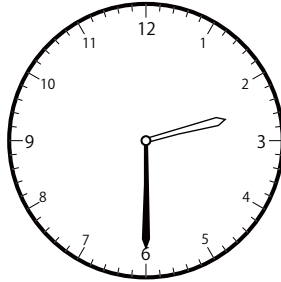
〇〇時^じ30分^{ふん}単位^{たんい}の時計^{とけい}を見つけよう【B1】

問題^{もんだい}と同じ時間^{おなじかん}の時計^{とけい}を見つけて()に〇をつけましょう。

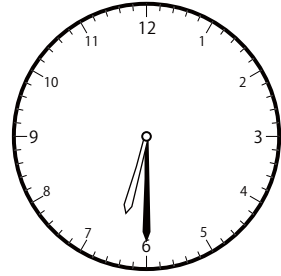
① 1時^じ30分^{ふん}の時計^{とけい}を見つけよう



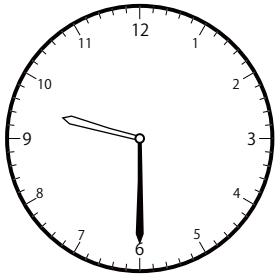
()




()




()



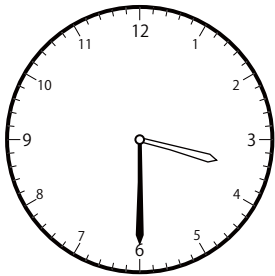
()



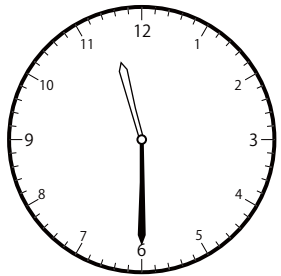
()




()



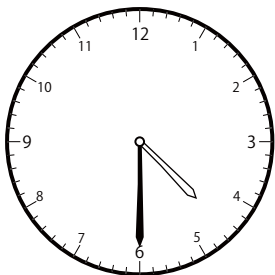
()



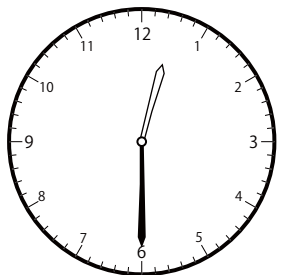
()



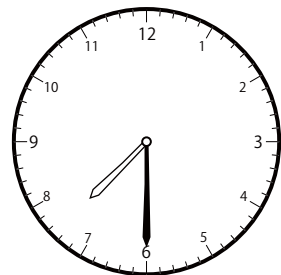
()



()



()




()


〇〇時^じ30分^{ふん}単位の^{たんい}時計^{とけい}を見つけよう【B1】

問題^{もんだい}と同じ時間^{おなじかん}の時計^{とけい}を見つけて()に〇をつけましょう。


① 2時^じ0分^{ふん}の時計^{とけい}を見つけよう



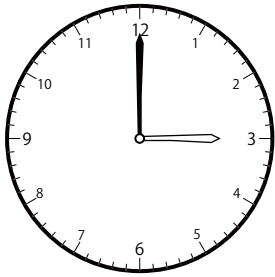
()




()




()



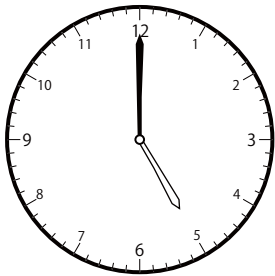
()




()




()




()



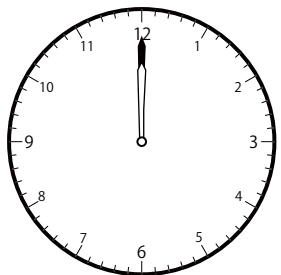
()



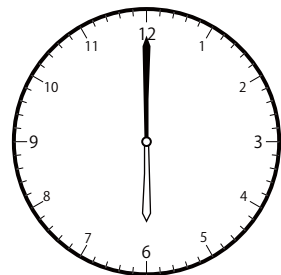
()



()



()

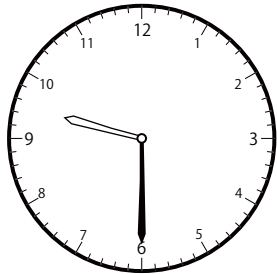


()

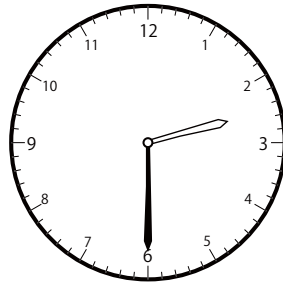
じ ふん たん い とけい み
〇〇時 30分 単位の時計を見つけよう【B1】

もんだい おな じかん とけい み
問題と同じ時間の時計を見つけて()に○をつけましょう。

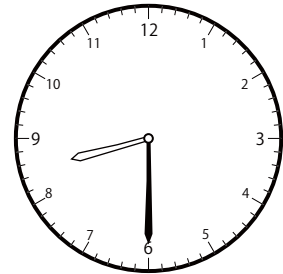
① 2時 30分の時計を見つけよう



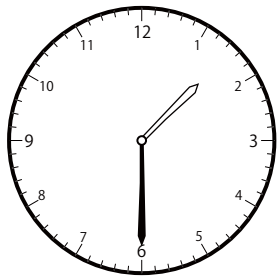
()



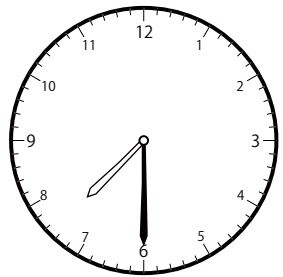
()




()



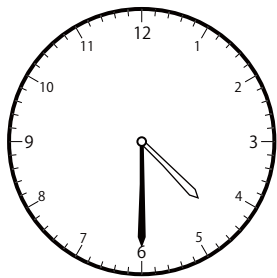
()



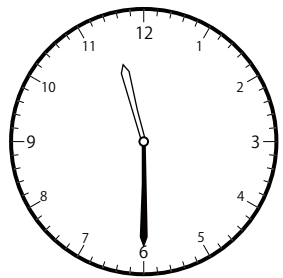
()




()



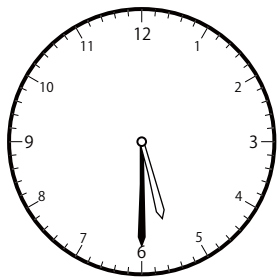
()



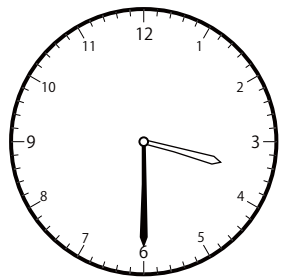
()



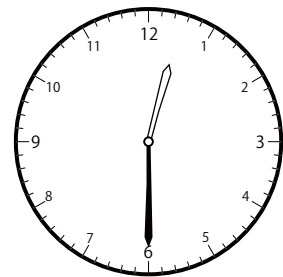
()



()



()




()


〇〇時^じ30分^{ふん}単位^{たんい}の時計^{とけい}を見つけよう【B1】

問題^{もんだい}と同じ時間^{おなじかん}の時計^{とけい}を見つけて()に〇をつけましょう。


① 3時^じ0分^{ふん}の時計^{とけい}を見つけよう



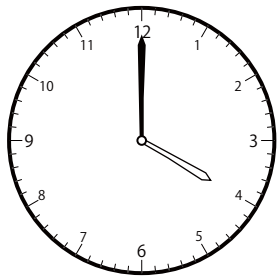
()



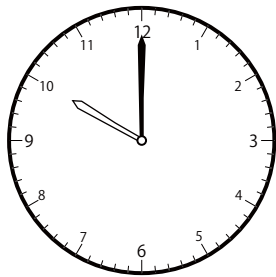
()



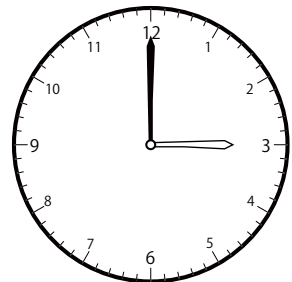
()



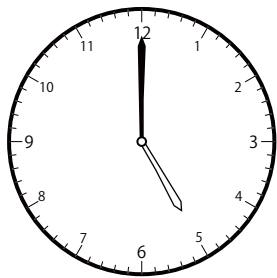
()



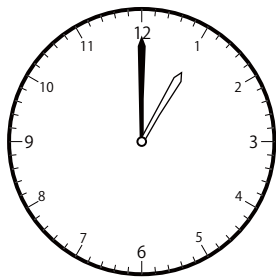
()



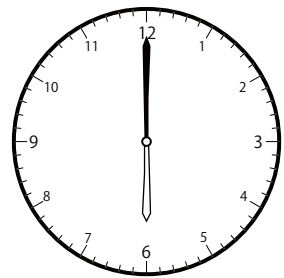
()



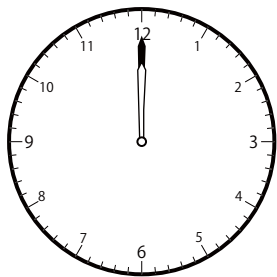
()



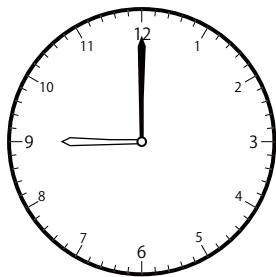
()



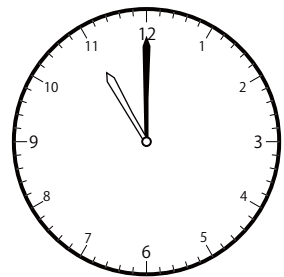
()



()



()

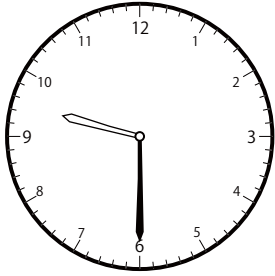


()


〇〇時^じ30分^{ふん}単位の^{たんい}時計^{とけい}を見つけよう【B1】

問題^{もんだい}と同じ時間^{おなじかん}の時計^{とけい}を見つけて()に〇をつけましょう。

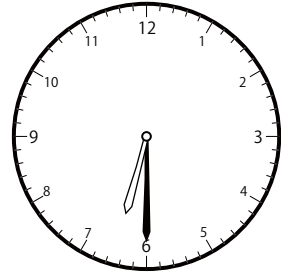
① 3時^じ30分^{ふん}の時計^{とけい}を見つけよう



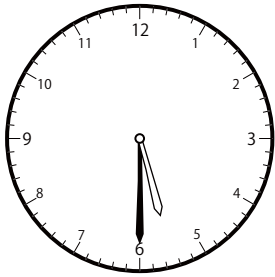
()



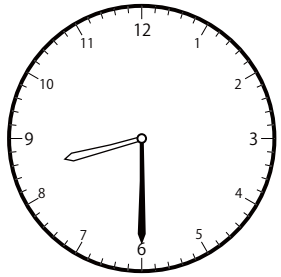
()



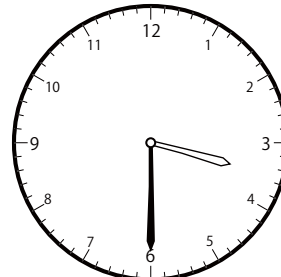
()



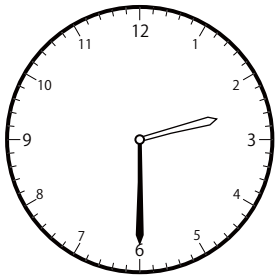
()



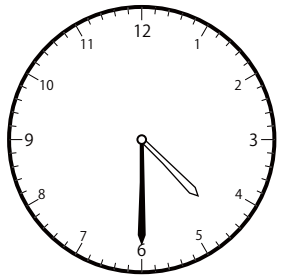
()




()



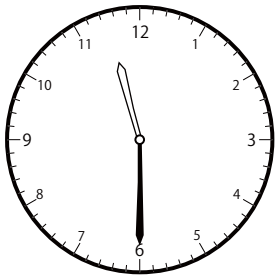
()



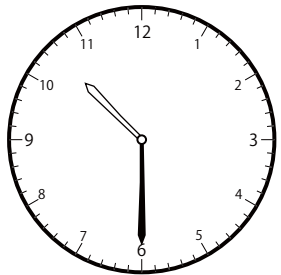
()



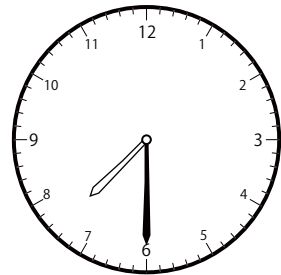
()



()



()




()


じ ふん たん い とけい み
〇〇時 30分 単位の時計を見つけよう【B1】

もんだい おな じかん とけい み
問題と同じ時間の時計を見つけて()に〇をつけましょう。

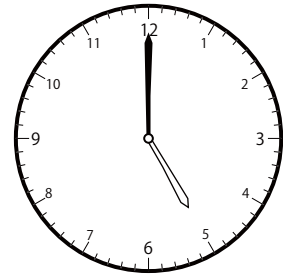
① 4時 0分の時計を見つけよう



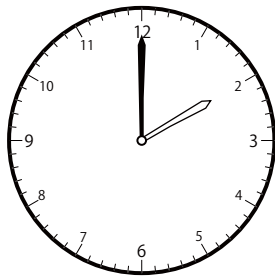
()



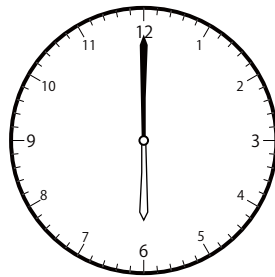
()




()



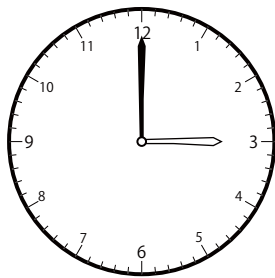
()



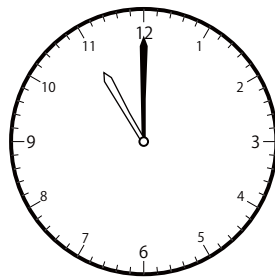
()




()




()



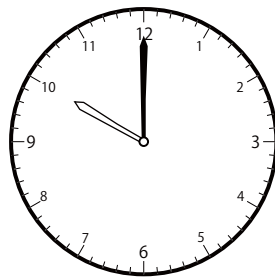
()



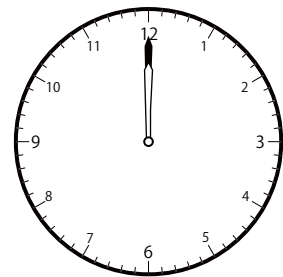
()



()



()

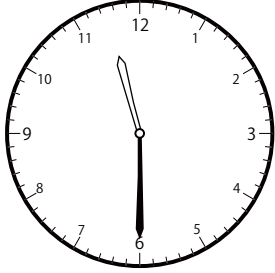


()

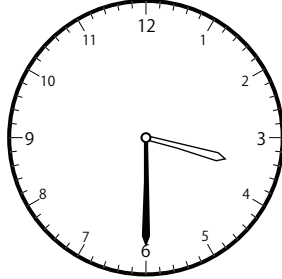
〇〇時^じ30分^{ふん}単位の^{たんい}時計^{とけい}を見つけよう【B1】

問題^{もんだい}と同じ時間^{おなじかん}の時計^{とけい}を見つけて()に〇をつけましょう。

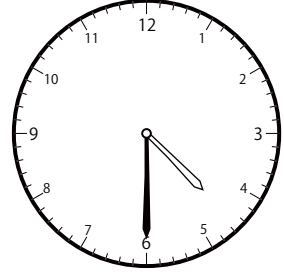
① 4時^じ30分^{ふん}の時計^{とけい}を見つけよう



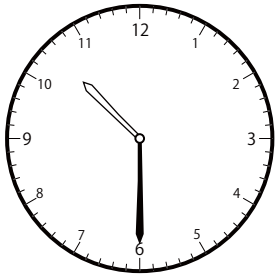
()



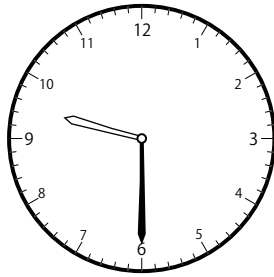
()



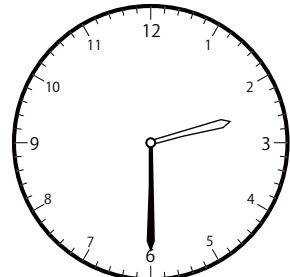
()



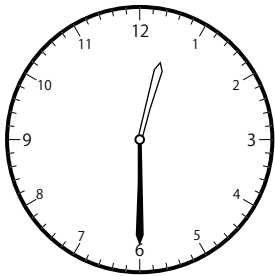
()




()



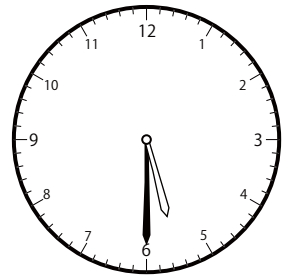
()



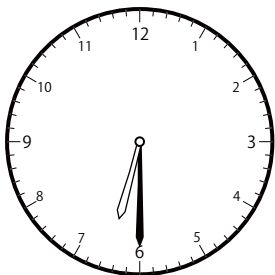
()



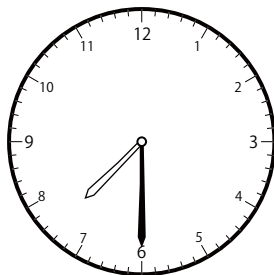
()



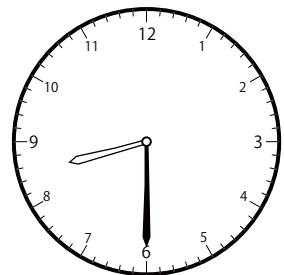
()



()



()

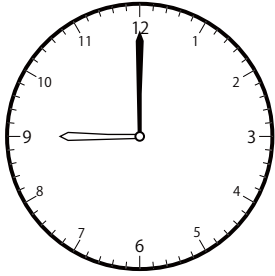


()


じ ふん たん い とけい み
〇〇時 30分 単位の時計を見つけよう【B1】

もんだい おな じかん とけい み
問題と同じ時間の時計を見つけて()に〇をつけましょう。


① 5時 0分の時計を見つけよう



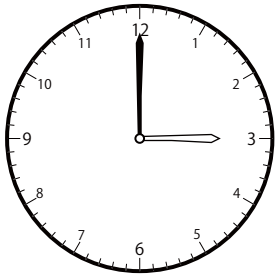
()



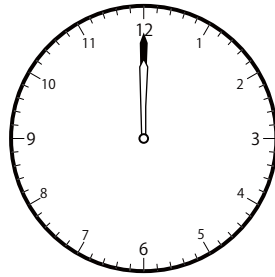
()



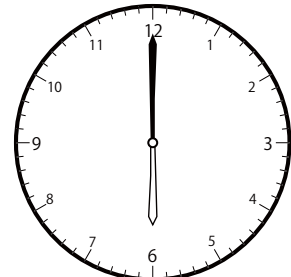
()



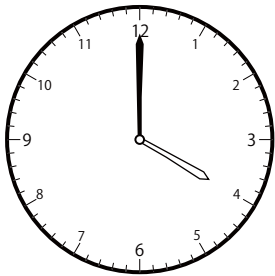
()




()




()




()




()



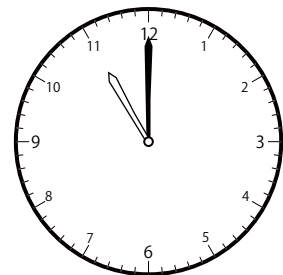
()



()



()

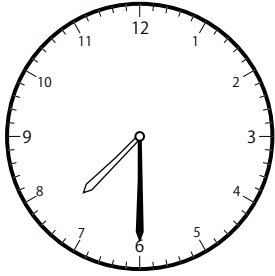


()

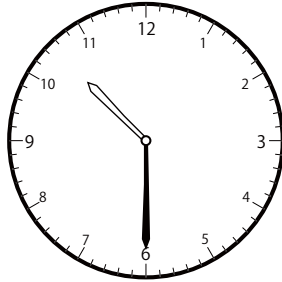
〇〇時^じ30分^{ふん}単位の^{たんい}時計^{とけい}を見つけよう【B1】

問題^{もんだい}と同じ時間^{おなじかん}の時計^{とけい}を見つけて()に〇をつけましょう。

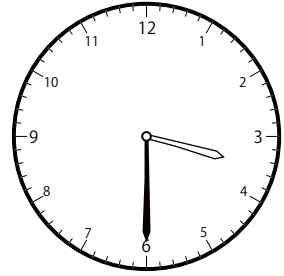
① 5時^じ30分^{ふん}の時計^{とけい}を見つけよう



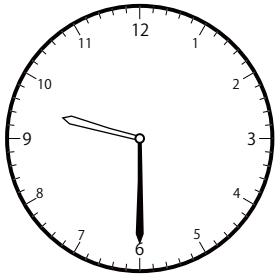
()



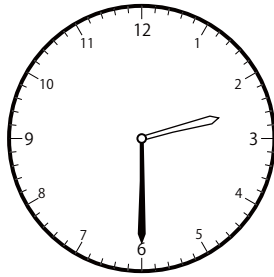
()




()



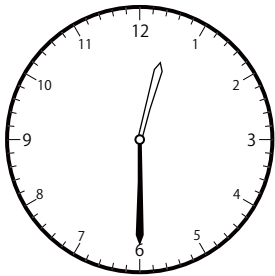
()




()



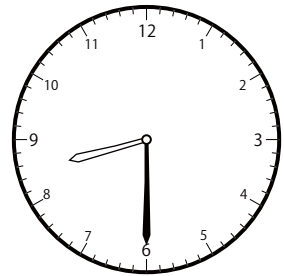
()



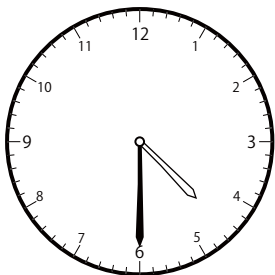
()



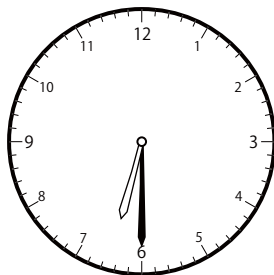
()



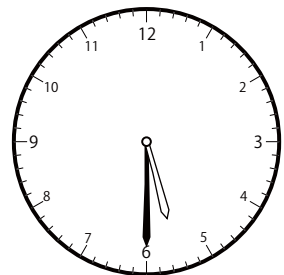
()



()



()




()

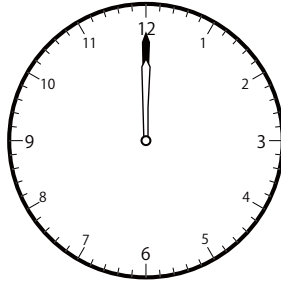
じ ふん たん い とけい み
〇〇時 30分 単位の時計を見つけよう【B1】

もんだい おな じかん とけい み
問題と同じ時間の時計を見つけて()に○をつけましょう。

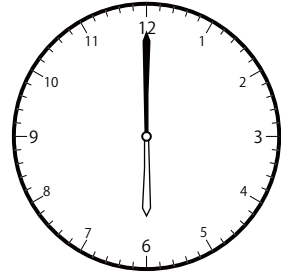
① 6時 0分の時計を見つけよう



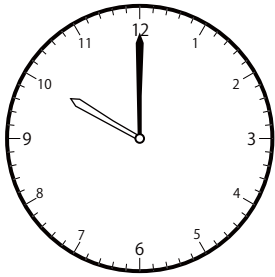
()




()




()



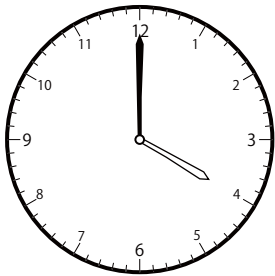
()




()




()




()




()



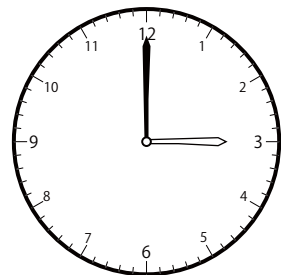
()



()



()

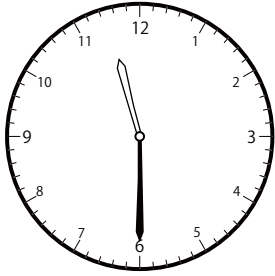


()

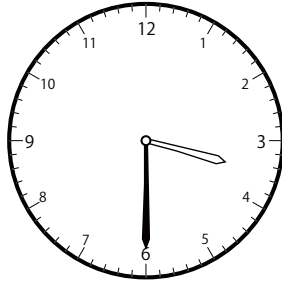
〇〇時^じ30分^{ふん}単位の^{たんい}時計^{とけい}を見つけよう【B1】

問題^{もんだい}と同じ時間^{おなじかん}の時計^{とけい}を見つけて()に〇をつけましょう。

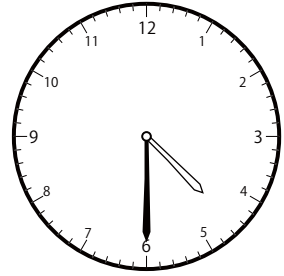
① 6時^じ30分^{ふん}の時計^{とけい}を見つけよう



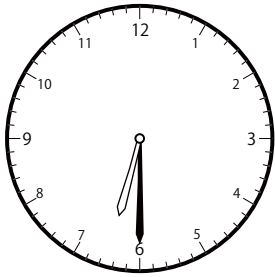
()



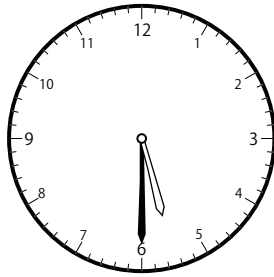
()



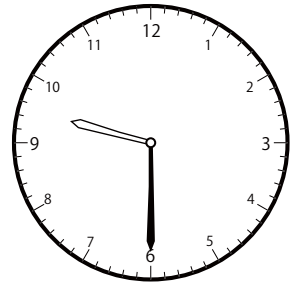
()



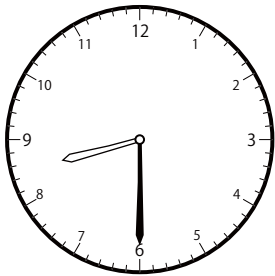
()



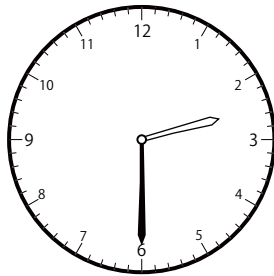
()



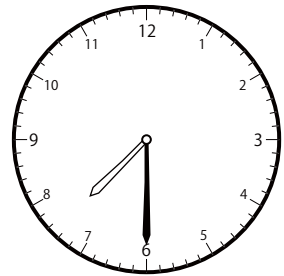
()



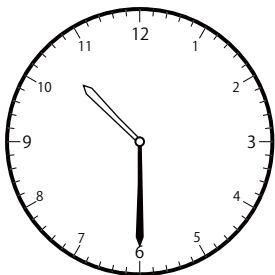
()



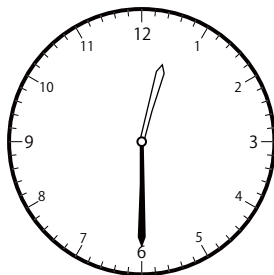
()



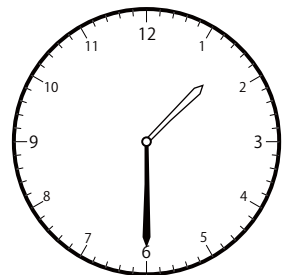
()



()



()




()

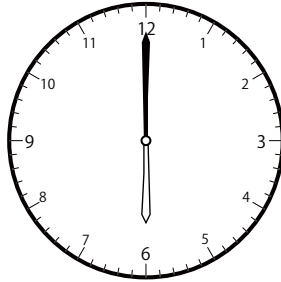
じ ふん たん い とけい み
〇〇時 30分 単位の時計を見つけよう【B1】

もんだい おな じかん とけい み
問題と同じ時間の時計を見つけて()に〇をつけましょう。

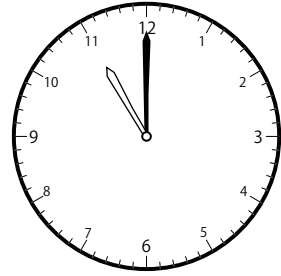
① 7時 0分の時計を見つけよう



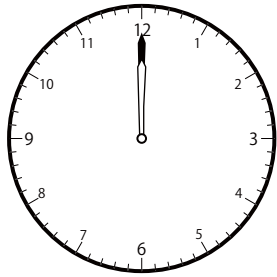
()




()




()



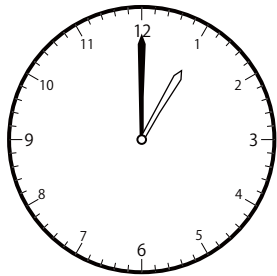
()




()




()



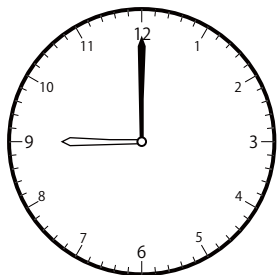
()




()



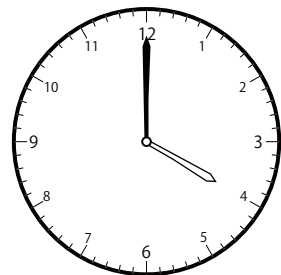
()



()



()

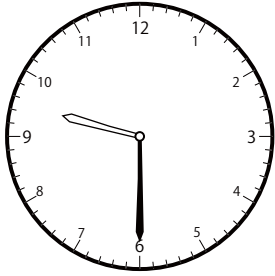


()

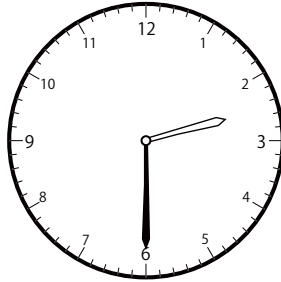
〇〇時^じ30分^{ふん}単位の^{たんい}時計^{とけい}を見つけよう【B1】

問題^{もんだい}と同じ時間^{おなじかん}の時計^{とけい}を見つけて()に〇をつけましょう。


① 7時^じ30分^{ふん}の時計^{とけい}を見つけよう



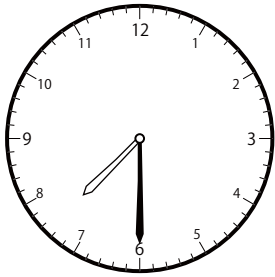
()



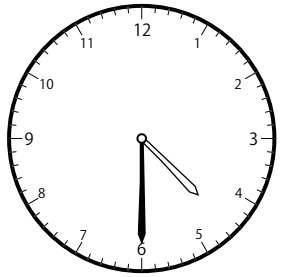
()



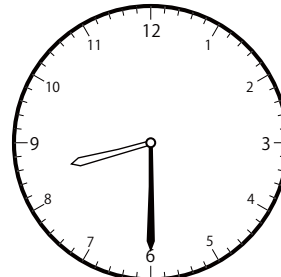
()



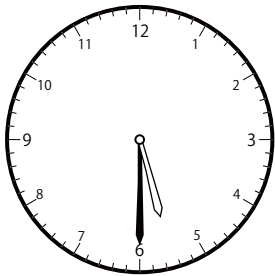
()



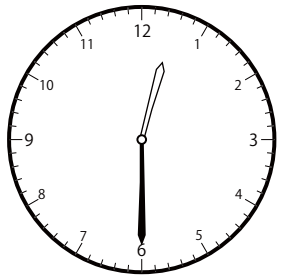
()



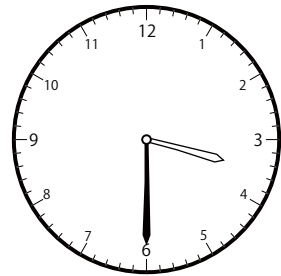
()



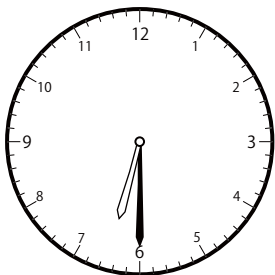
()



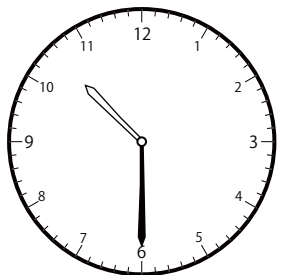
()



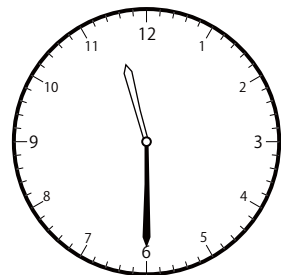
()



()



()

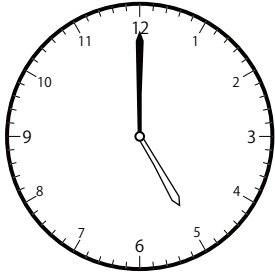


()


じ ふん たん い とけい み
〇〇時 30分 単位の時計を見つけよう【B1】

もんだい おな じかん とけい み
問題と同じ時間の時計を見つけて()に〇をつけましょう。

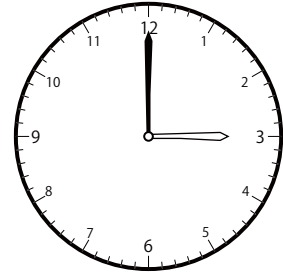
① 8時 0分の時計を見つけよう



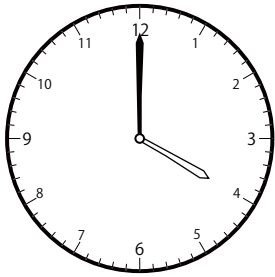
()




()



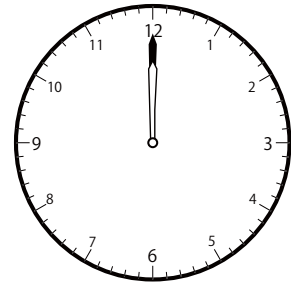
()



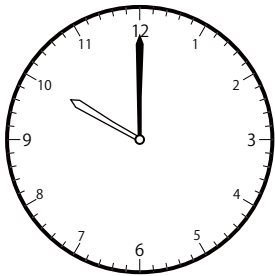
()




()



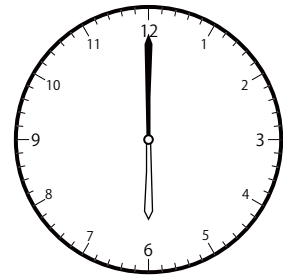
()




()




()



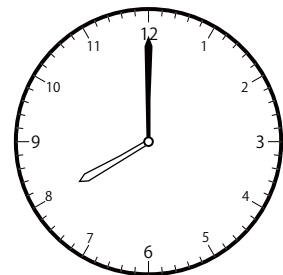
()



()



()

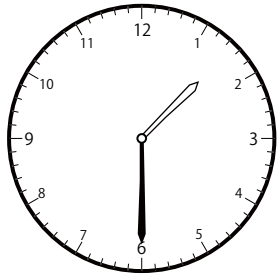


()

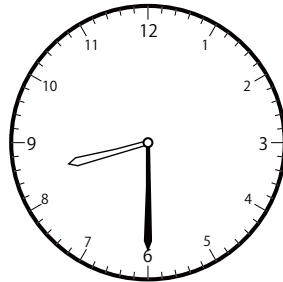
〇〇時^じ30分^{ふん}単位の^{たんい}時計^{とけい}を見つけよう【B1】

問題^{もんだい}と同じ時間^{おなじかん}の時計^{とけい}を見つけて()に〇をつけましょう。

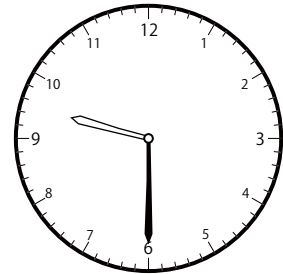
① 8時^じ30分^{ふん}の時計^{とけい}を見つけよう



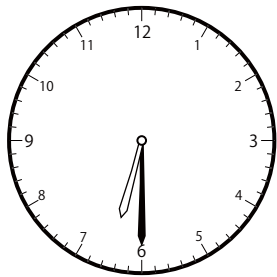
()



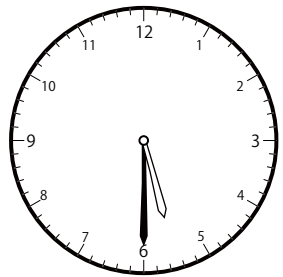
()



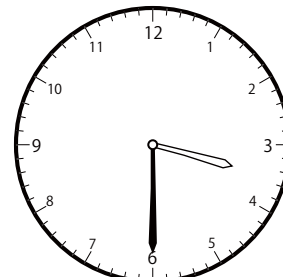
()




()



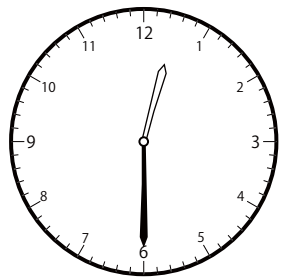
()



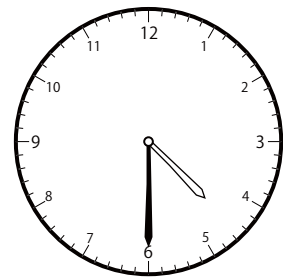
()



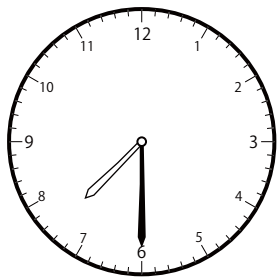
()



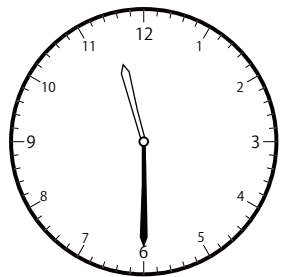
()



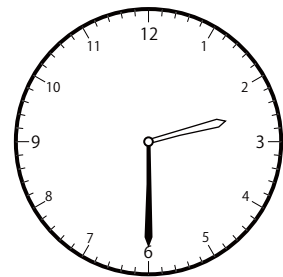
()



()



()

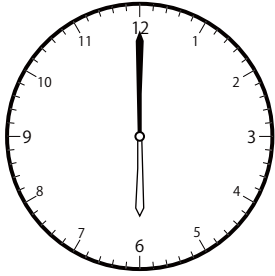


()


じ ふん たん い とけい み
〇〇時 30分 単位の時計を見つけよう【B1】

もんだい おな じかん とけい み
問題と同じ時間の時計を見つけて()に〇をつけましょう。


① 9時 0分の時計を見つけよう



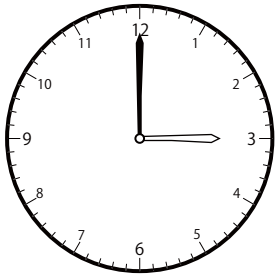
()




()



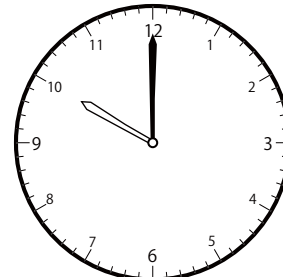
()




()



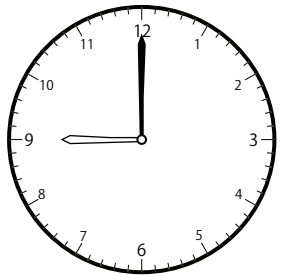
()



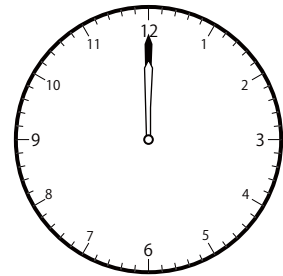
()




()




()



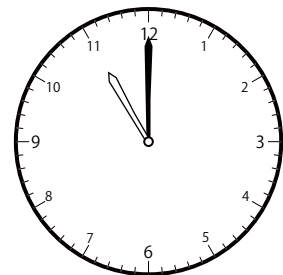
()



()



()

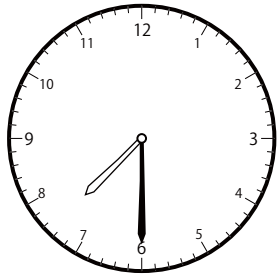


()


じ ふん たん い とけい み
〇〇時30分単位の時計を見つけよう【B1】

もんだい おな じかん とけい み
問題と同じ時間の時計を見つけて()に○をつけましょう。

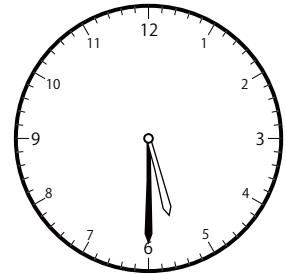
① 9時30分の時計を見つけよう



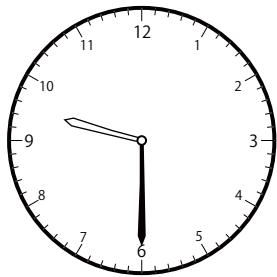
()



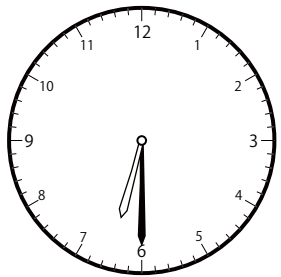
()



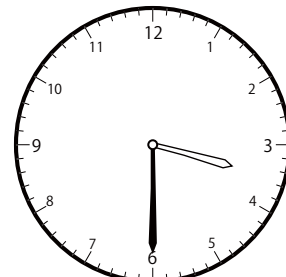
()



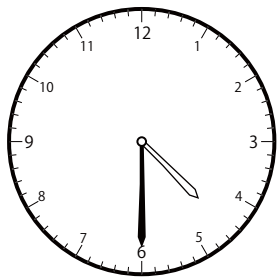
()



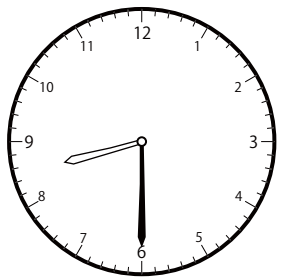
()



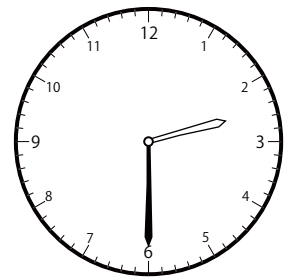
()



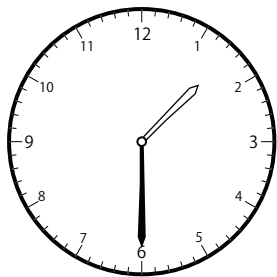
()




()



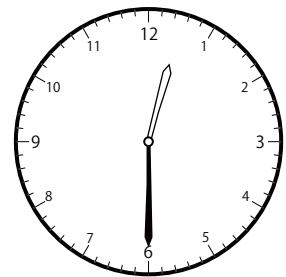
()



()



()




()


じ ふん たん い とけい み
〇〇時 30分 単位の時計を見つけよう【B1】

もんだい おな じかん とけい み
問題と同じ時間の時計を見つけて()に〇をつけましょう。

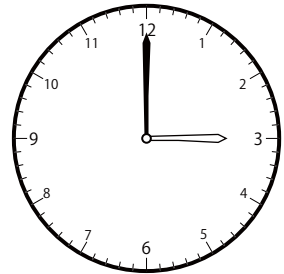
① 10時 0分の時計を見つけよう



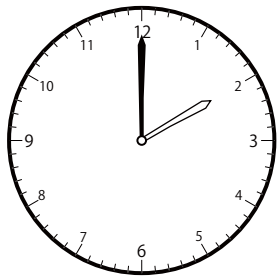
()



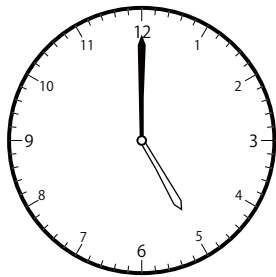
()



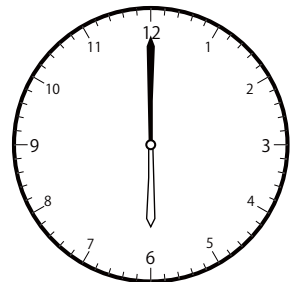
()




()



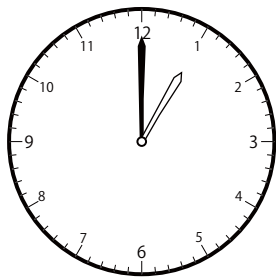
()



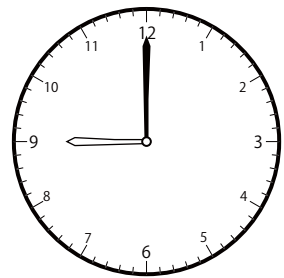
()



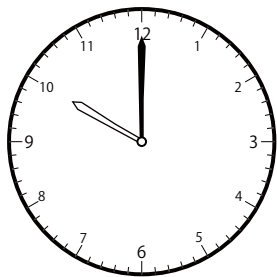
()



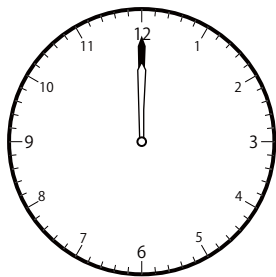
()




()



()



()

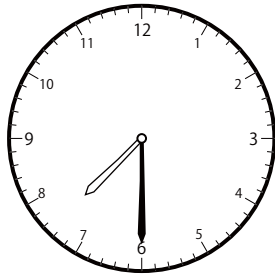


()

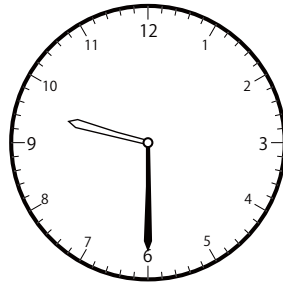
〇〇時^じ30分^{ふん}単位の^{たんい}時計^{とけい}を見つけよう【B1】

問題^{もんだい}と同じ時間^{おなじかん}の時計^{とけい}を見つけて()に〇をつけましょう。

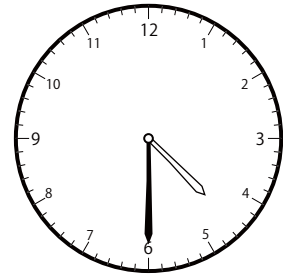
① 10時^じ30分^{ふん}の時計^{とけい}を見つけよう



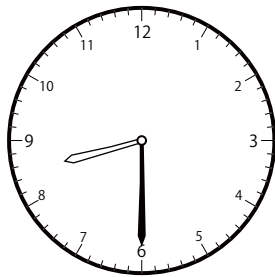
()



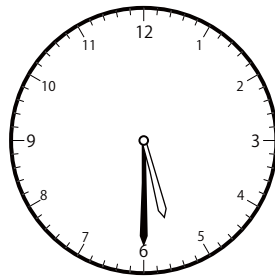
()



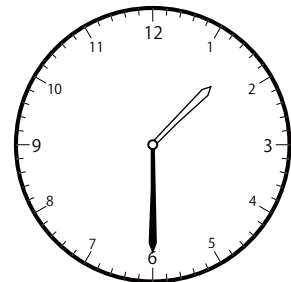
()



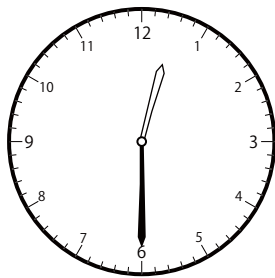
()



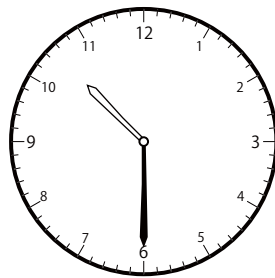
()



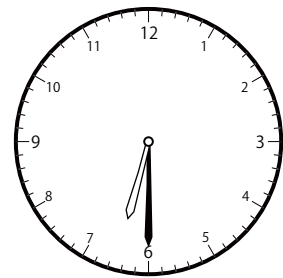
()



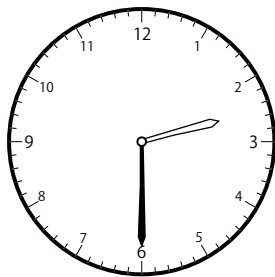
()



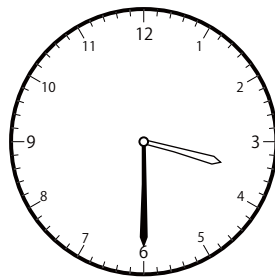
()




()



()



()




()


じ ふん たん い とけい み
〇〇時 30分 単位の時計を見つけよう【B1】

もんだい おな じかん とけい み
問題と同じ時間の時計を見つけて()に〇をつけましょう。


① 11時 0分の時計を見つけよう



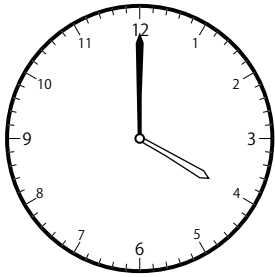
()




()



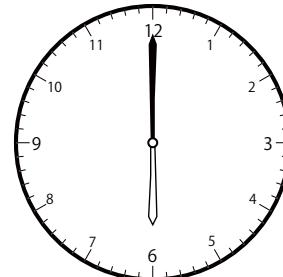
()



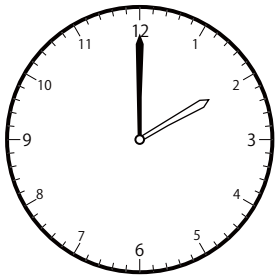
()




()




()




()




()



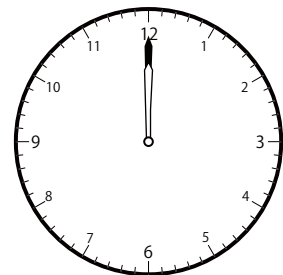
()



()



()

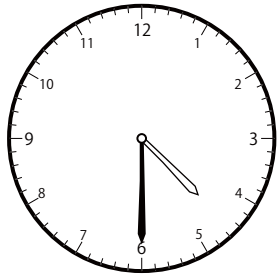


()


〇〇時^じ30分^{ふん}単位の^{たんい}時計^{とけい}を見つけよう【B1】

問題^{もんだい}と同じ時間^{おなじかん}の時計^{とけい}を見つけて()に〇をつけましょう。

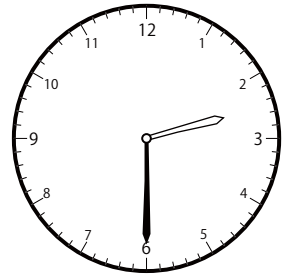
① 11時^じ30分^{ふん}の時計^{とけい}を見つけよう



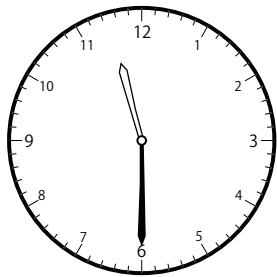
()



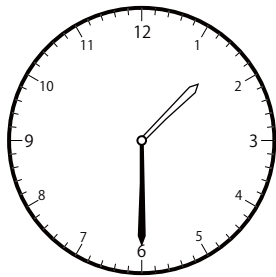
()



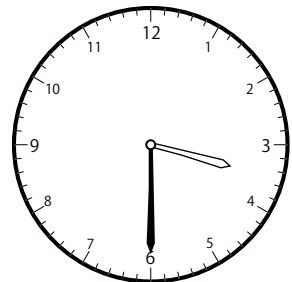
()



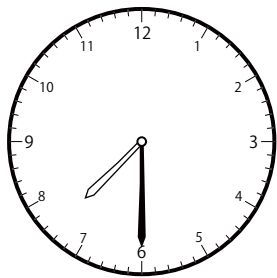
()



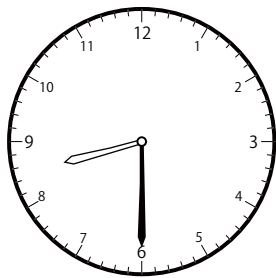
()



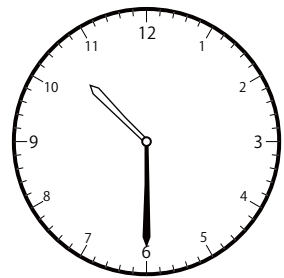
()



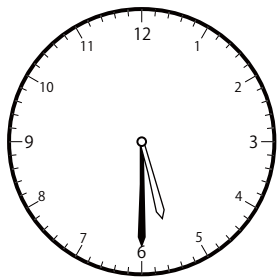
()



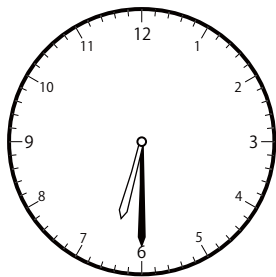
()



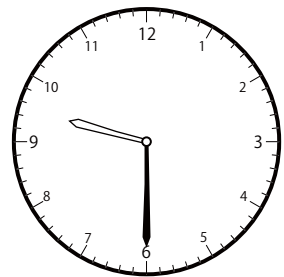
()



()



()

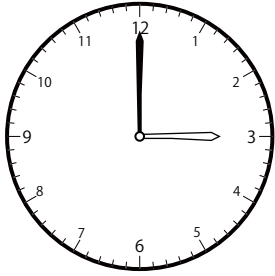


()


じ ふん たん い とけい み
〇〇時 30分 単位の時計を見つけよう【B1】

もんだい おな じかん とけい み
問題と同じ時間の時計を見つけて()に〇をつけましょう。

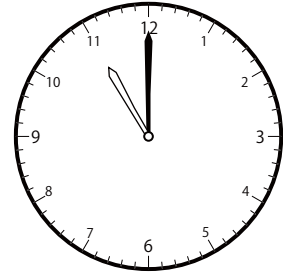
① 12時 0分の時計を見つけよう



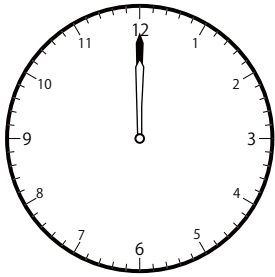
()




()



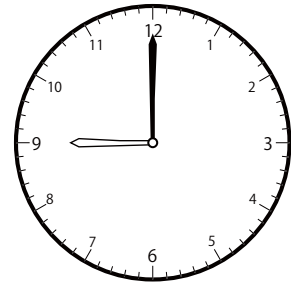
()



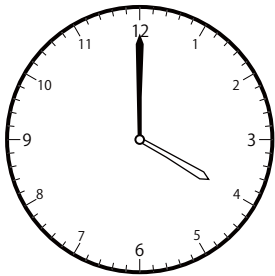
()




()




()




()



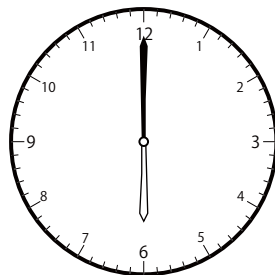
()



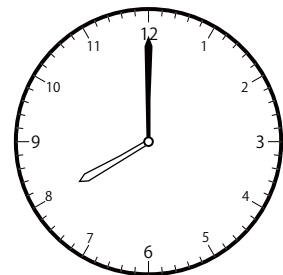
()



()



()

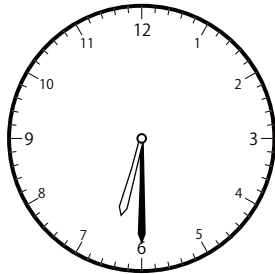


()

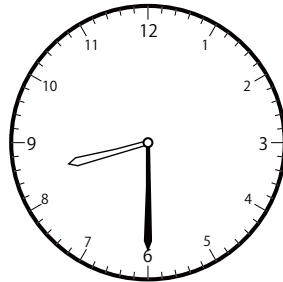
じ ふん たん い とけい み
〇〇時 30分 単位の時計を見つけよう【B1】

もんだい おな じかん とけい み
問題と同じ時間の時計を見つけて()に○をつけましょう。


① 12時 30分の時計を見つけよう



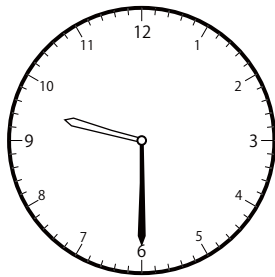
()



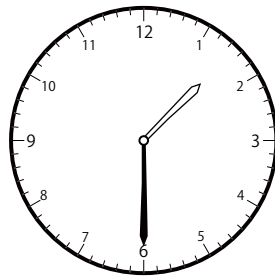
()



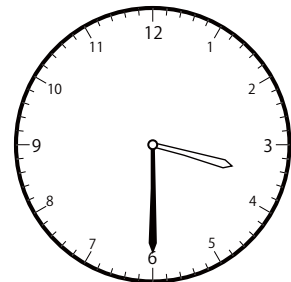
()



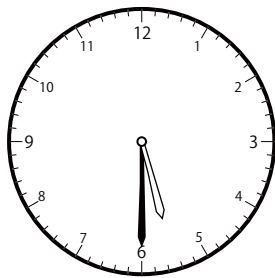
()



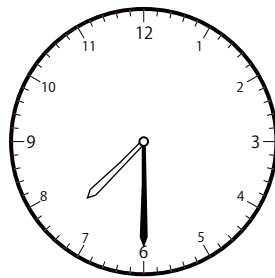
()




()



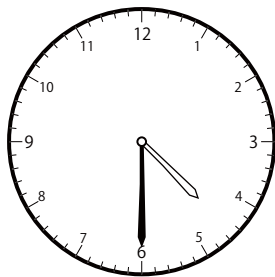
()



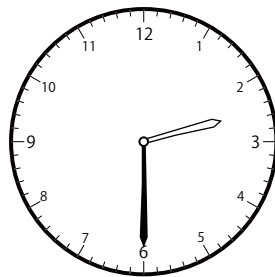
()




()



()



()

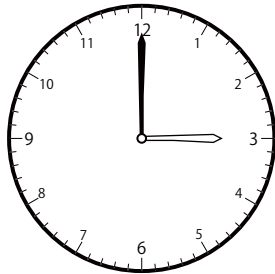


()


じ ふん たん い とけい み
〇〇時30分単位の時計を見つけよう【B1】

もんだい おな じかん とけい み
問題と同じ時間の時計を見つけて()に○をつけましょう。

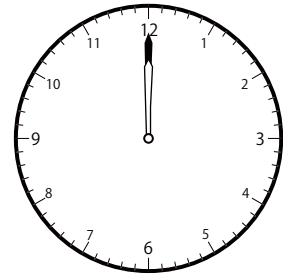
① 8時 0 分の時計を見つけよう



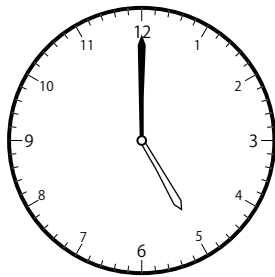
()




()




()



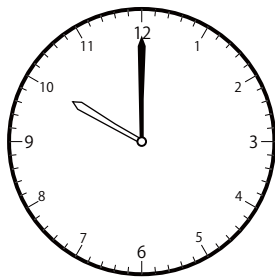
()




()



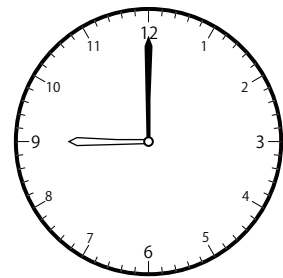
()



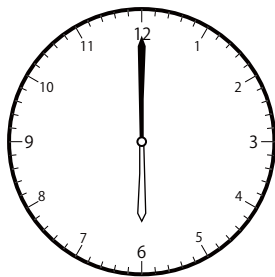
()




()



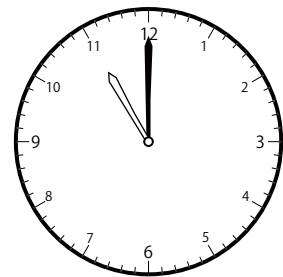
()



()



()

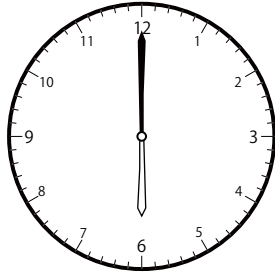


()


〇〇時^じ30分^{ふん}単位の^{たんい}時計^{とけい}を見つけよう【B1】

問題^{もんだい}と同じ時間^{おなじかん}の時計^{とけい}を見つけて()に〇をつけましょう。


① 2時^じ0分^{ふん}の時計^{とけい}を見つけよう



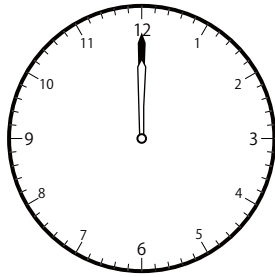
()




()



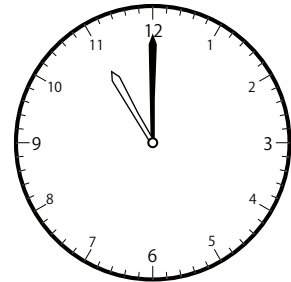
()



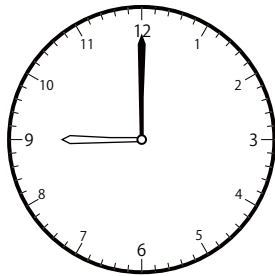
()




()




()




()




()



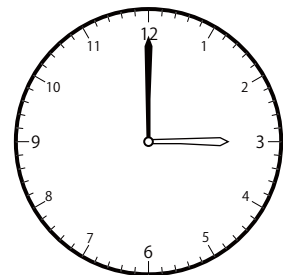
()



()



()

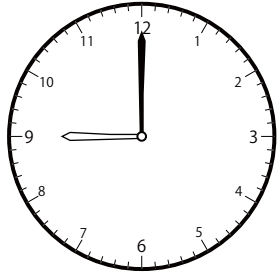


()


〇〇時^じ30分^{ふん}単位の^{たんい}時計^{とけい}を見つけよう【B1】

問題^{もんだい}と同じ時間^{おなじかん}の時計^{とけい}を見つけて()に〇をつけましょう。

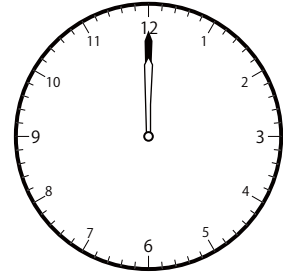
① 12時^じ 0分^{ふん}の時計^{とけい}を見つけよう




()



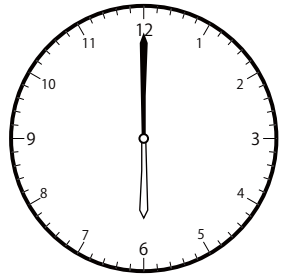
()




()




()



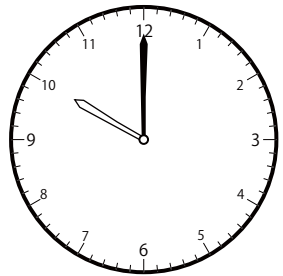
()




()



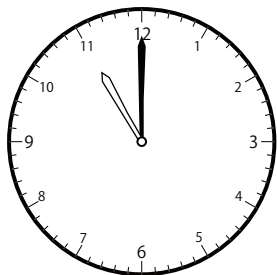
()




()




()



()



()

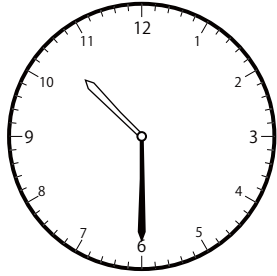


()

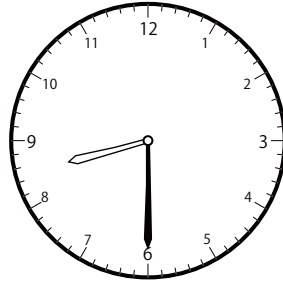
〇〇時^じ30分^{ふん}単位の^{たんい}時計^{とけい}を見つけよう【B1】

問題^{もんだい}と同じ時間^{おなじかん}の時計^{とけい}を見つけて()に〇をつけましょう。

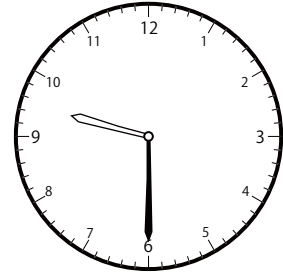
① 9時^じ30分^{ふん}の時計^{とけい}を見つけよう



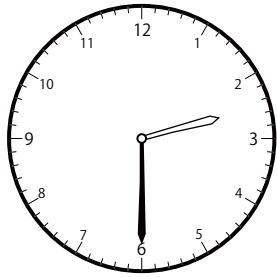
()



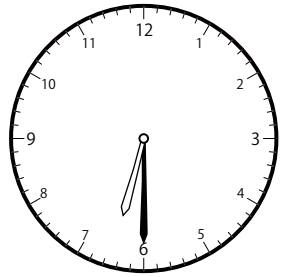
()




()



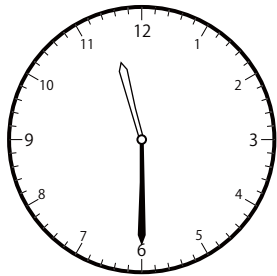
()



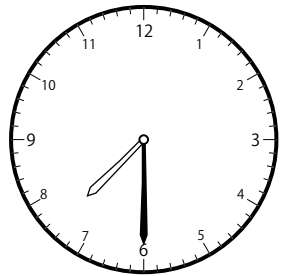
()



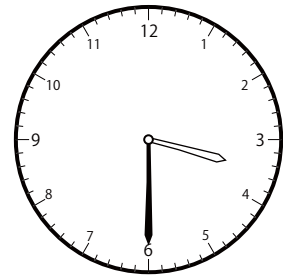
()



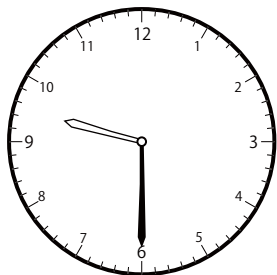
()



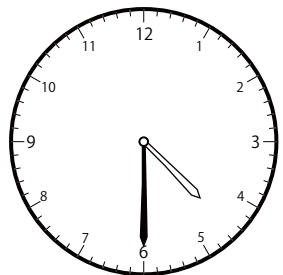
()



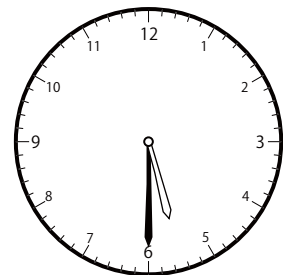
()



()



()



()