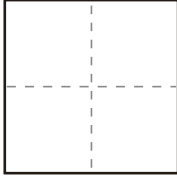



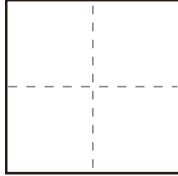
ひき算


さくらんぼ計算 (繰り下がりのあるひき算) A

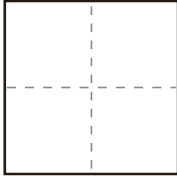
つぎの計算をしましょう。


① $13 - 7 =$ 

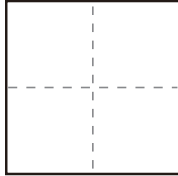



⑥ $11 - 4 =$ 

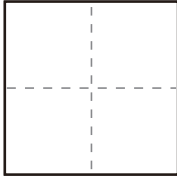



② $13 - 6 =$ 

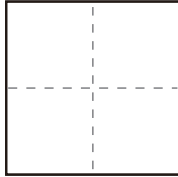



⑦ $11 - 2 =$ 

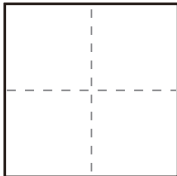



③ $17 - 9 =$ 

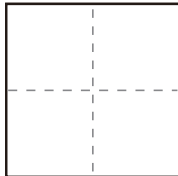



⑧ $11 - 7 =$ 

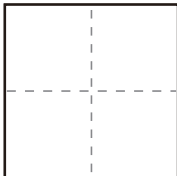



④ $12 - 5 =$ 

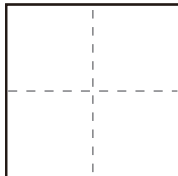



⑨ $11 - 3 =$ 



⑤ $12 - 5 =$ 



⑩ $16 - 7 =$ 



ひき算

さくらんぼ計算 (繰り下がりのあるひき算) A

つぎの計算をしましょう。

① $18 - 9 =$

⑥ $12 - 9 =$

② $11 - 9 =$

⑦ $14 - 9 =$

③ $11 - 9 =$

⑧ $11 - 9 =$

④ $13 - 4 =$

⑨ $11 - 9 =$

⑤ $12 - 6 =$

⑩ $17 - 8 =$

ひき算

さくらんぼ計算 (繰り下がりのあるひき算) A

つぎの計算をしましょう。

① $15 - 9 =$

⑥ $11 - 7 =$

② $15 - 7 =$

⑦ $11 - 8 =$

③ $14 - 5 =$

⑧ $13 - 7 =$

④ $13 - 9 =$

⑨ $11 - 9 =$

⑤ $13 - 8 =$

⑩ $18 - 9 =$

ひき算

さくらんぼ計算 (繰り下がりのあるひき算) A

つぎの計算をしましょう。

① $12 - 5 =$

⑥ $12 - 9 =$

② $11 - 9 =$

⑦ $11 - 8 =$

③ $16 - 9 =$

⑧ $11 - 7 =$

④ $14 - 9 =$

⑨ $12 - 9 =$

⑤ $18 - 9 =$

⑩ $13 - 4 =$

ひき算

さくらんぼ計算 (繰り下がりのあるひき算) A

つぎの計算をしましょう。

① $12 - 7 =$

⑥ $11 - 7 =$

② $13 - 4 =$

⑦ $11 - 8 =$

③ $15 - 9 =$

⑧ $12 - 8 =$

④ $11 - 7 =$

⑨ $15 - 8 =$

⑤ $11 - 9 =$

⑩ $12 - 3 =$

ひき算

さくらんぼ計算 (繰り下がりのあるひき算) A

つぎの計算をしましょう。

① $14 - 5 =$

⑥ $14 - 9 =$

② $11 - 5 =$

⑦ $12 - 9 =$

③ $16 - 9 =$

⑧ $14 - 9 =$

④ $11 - 9 =$

⑨ $12 - 5 =$

⑤ $12 - 6 =$

⑩ $14 - 5 =$

ひき算

さくらんぼ計算 (繰り下がりのあるひき算) A

つぎの計算をしましょう。

① $12 - 9 =$

⑥ $16 - 7 =$

② $12 - 9 =$

⑦ $11 - 3 =$

③ $11 - 5 =$

⑧ $11 - 8 =$

④ $13 - 9 =$

⑨ $14 - 5 =$

⑤ $11 - 8 =$

⑩ $17 - 8 =$

ひき算

さくらんぼ計算 (繰り下がりのあるひき算) A

つぎの計算をしましょう。

① $18 - 9 =$

⑥ $11 - 4 =$

② $17 - 8 =$

⑦ $12 - 9 =$

③ $15 - 7 =$

⑧ $13 - 8 =$

④ $12 - 8 =$

⑨ $11 - 4 =$

⑤ $11 - 6 =$

⑩ $16 - 7 =$

ひき算

さくらんぼ計算 (繰り下がりのあるひき算) A

つぎの計算をしましょう。

① $11 - 2 =$

⑥ $11 - 7 =$

② $11 - 9 =$

⑦ $11 - 6 =$

③ $12 - 6 =$

⑧ $15 - 9 =$

④ $17 - 9 =$

⑨ $11 - 9 =$

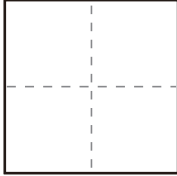
⑤ $12 - 8 =$


⑩ $18 - 9 =$

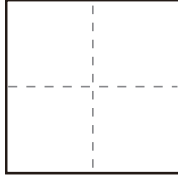
ひき算


さくらんぼ計算 (繰り下がりのあるひき算) A

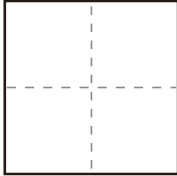
つぎの計算をしましょう。


① $13 - 9 =$ 

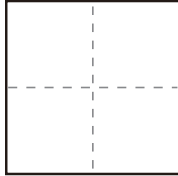



⑥ $11 - 4 =$ 

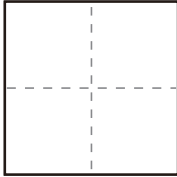



② $14 - 5 =$ 

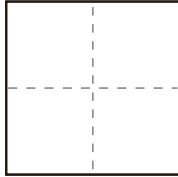



⑦ $17 - 8 =$ 

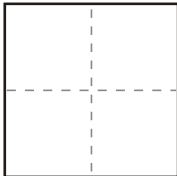



③ $13 - 6 =$ 

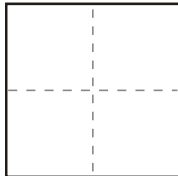



⑧ $14 - 9 =$ 

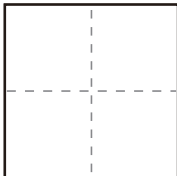



④ $16 - 7 =$ 



⑨ $12 - 5 =$ 



⑤ $16 - 8 =$ 



⑩ $14 - 5 =$ 