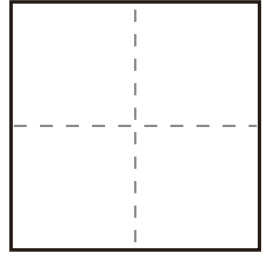



かず  
数

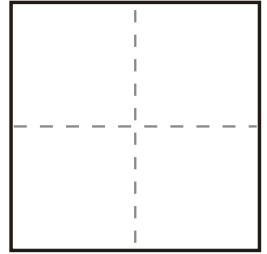

くろまる かぞ かず か  
黒丸を数えて数を書く (STEP1)

かず かぞ  
数を数えて その数を書きましょう。

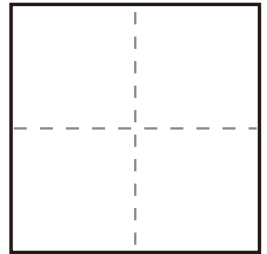
問1



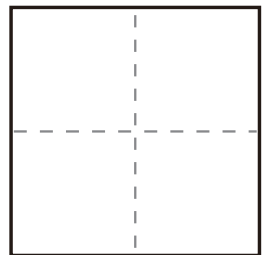
問2



問3



問4



問5

