


# いくつ積み木を減らすか考える問題C

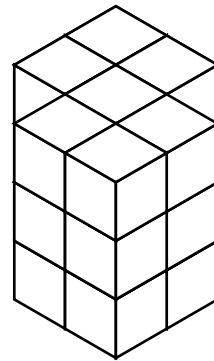

ひだり つ き へ  
左の積み木から いくつ積み木を減らすと

みぎ つみ き かたち へ かず  
右の積み木の形になりますか？ 減らす数を ( ) に答えましょう。


1



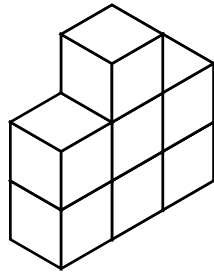

( ) 減らす




2



( ) 減らす



3



( ) 減らす

