


# いくつ積み木を減らすか考える問題C

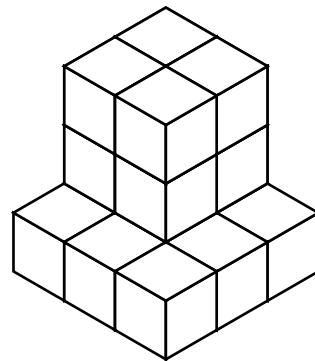

ひだり つき き へ  
左の積み木からいくつ積み木を減らすと

みぎ つみ き かたち へ かず  
右の積み木の形になりますか？ 減らす数を ( ) に答えましょう。


1



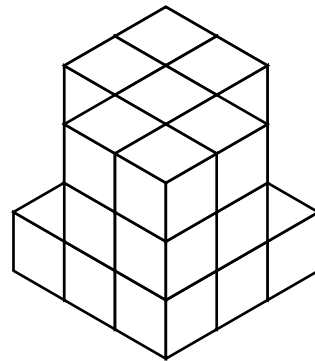

( ) へ 減らす




2



( ) へ 減らす



3



( ) へ 減らす

