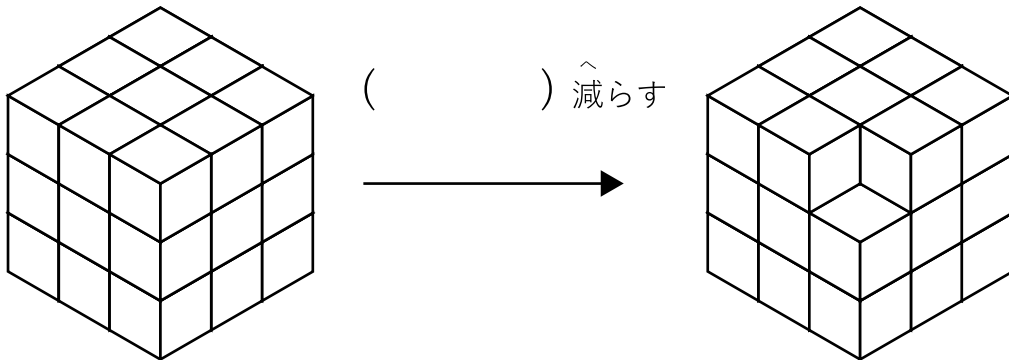


いくつ積み木を減らすか考える問題C

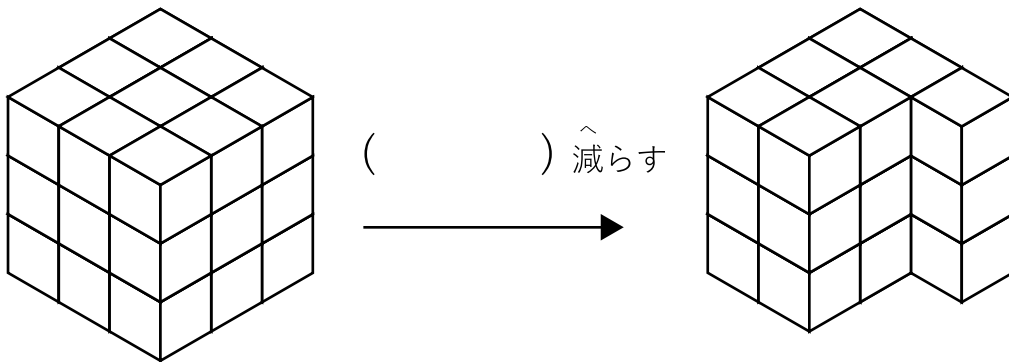
ひだり つき き から いくつ つき き を へ 減らすと

みぎ つみ き かたち 右の積み木の形になりますか？ へ 減らす かず を () に 答え まし ょう。

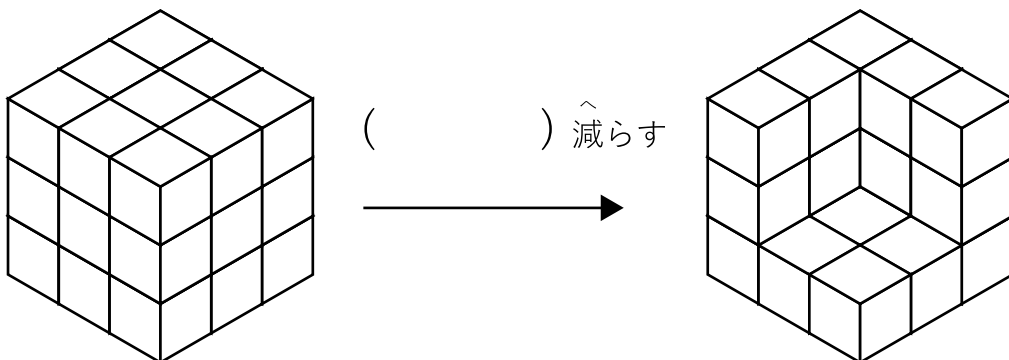
1



2



3




いくつ積み木を減らすか考える問題C

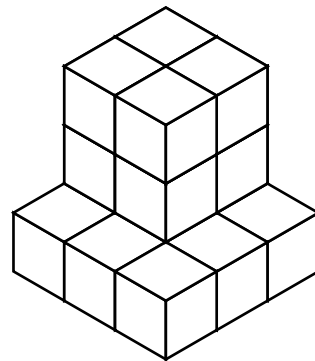

ひだり つき き から いくつ つき き を へ 減らすと

みぎ つみ き かたち 右の積み木の形になりますか？ へ 減らす かず を () に 答え まし ょう。


1



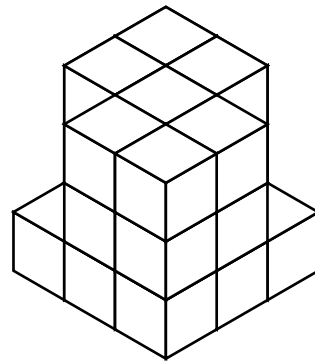

() へ 減らす




2



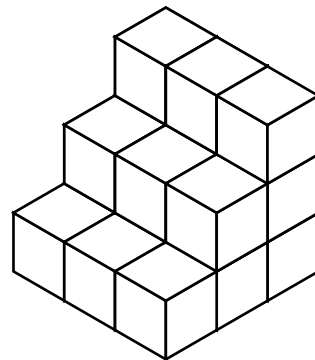

() へ 減らす



3



() へ 減らす




いくつ積み木を減らすか考える問題C



ひだり つき き から いくつ つき き を へ たらすと
左の積み木からいくつ積み木を減らすと

みぎ つみ き かたち へ たらす かず を () に こと 答えましょう。


1



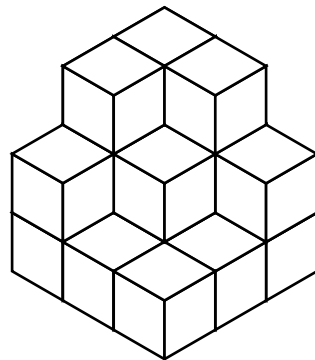

() へ たらす




2



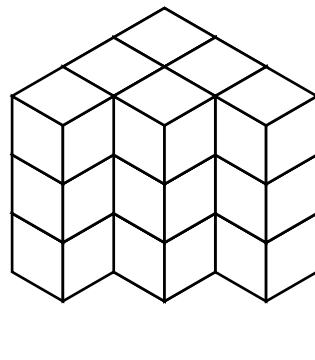

() へ たらす



3



() へ たらす




いくつ積み木を減らすか考える問題C

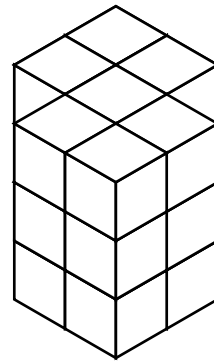

ひだり つ き へ
左の積み木から いくつ積み木を減らすと

みぎ つみ き かたち へ かず
右の積み木の形になりますか？ 減らす数を () に答えましょう。


1



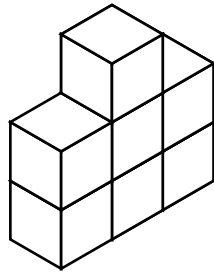
() 減らす




2



() 減らす



3



() 減らす

