

いくつ積み木を減らすか考える問題

(答え)

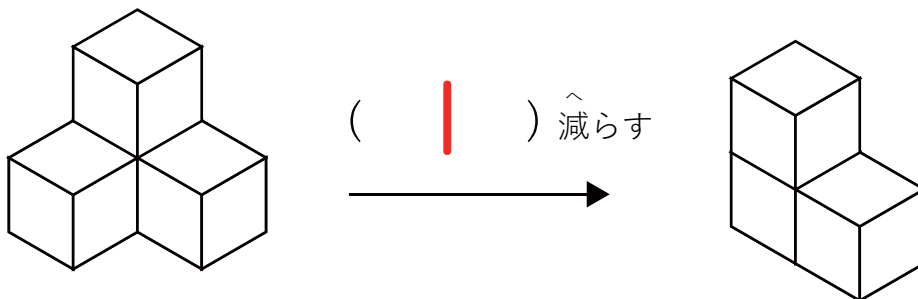
左の積み木からいくつ積み木を減らすと

右の積み木の形になりますか？ 減らす数を ( ) に答えましょう。

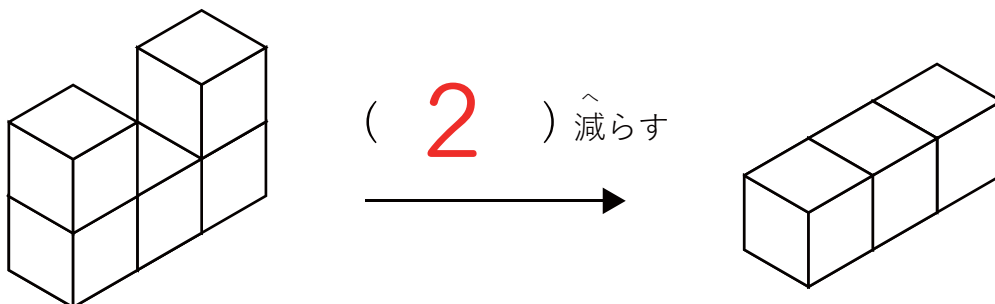
1



2



3

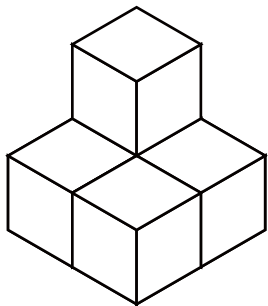


いくつ積み木を減らすか考える問題 (答え)

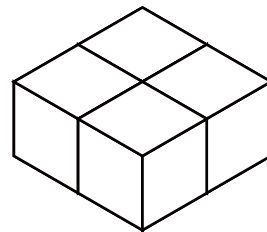
左の積み木からいくつ積み木を減らすと

右の積み木の形になりますか？ 減らす数を ( ) に答えましょう。

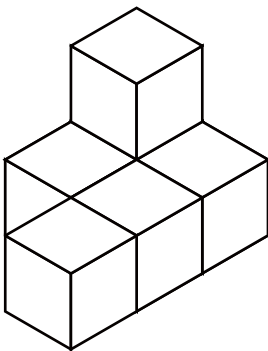
1



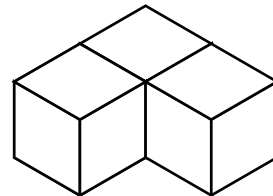

( 1 ) 減らす



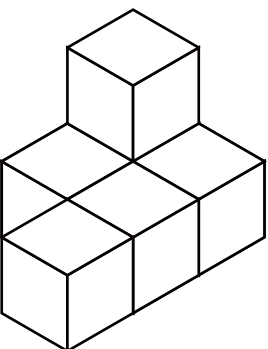
2



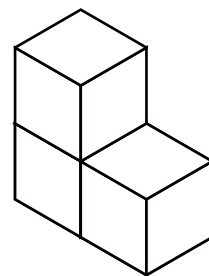
( 3 ) 減らす



3



( 3 ) 減らす



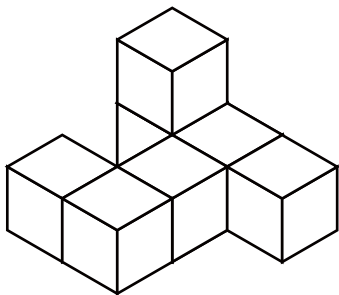
いくつ積み木を減らすか考える問題

(答え)

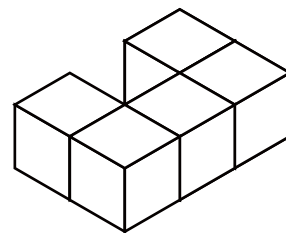
左の積み木からいくつ積み木を減らすと

右の積み木の形になりますか？ 減らす数を ( ) に答えましょう。

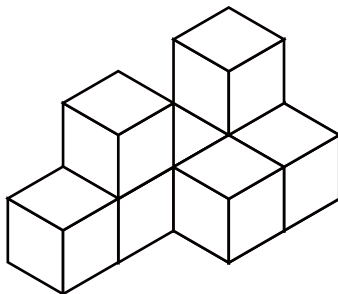
1



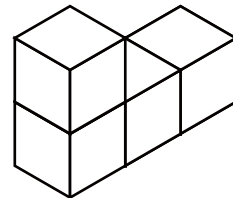
( 2 ) 減らす



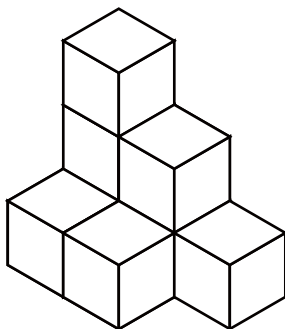
2



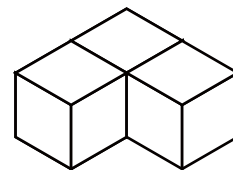
( 4 ) 減らす



3



( 5 ) 減らす



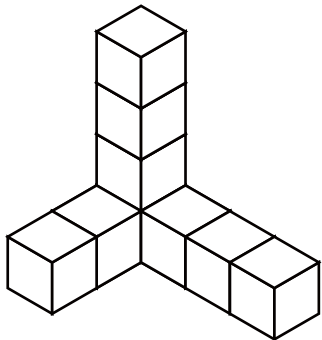
# いくつ積み木を減らすか考える問題

(答え)

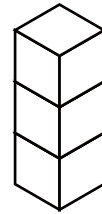
左の積み木からいくつ積み木を減らすと

右の積み木の形になりますか？ 減らす数を ( ) に答えましょう。

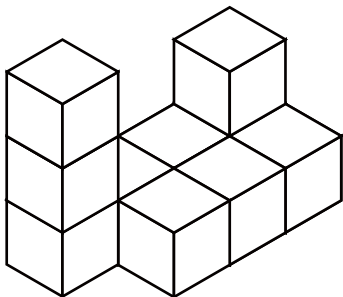
1



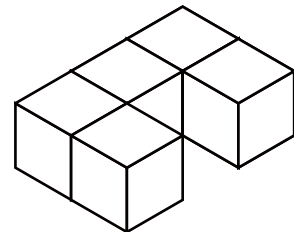
( 6 ) 減らす




2



( 5 ) 減らす



3



( 7 ) 減らす

