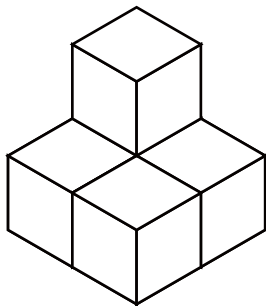


いくつ積み木を減らすか考える問題

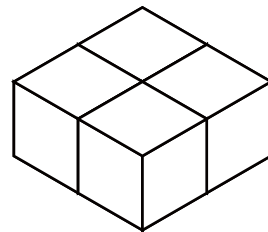
ひだり つき き から いくつ つき き を 減らすと

右の積み木の形になりますか？ 減らす数を () に答えましょう。

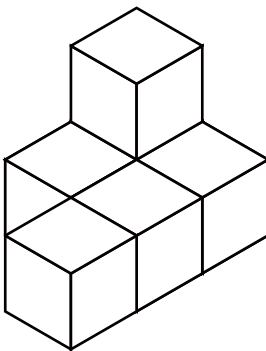
1



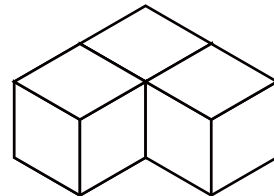

() 減らす



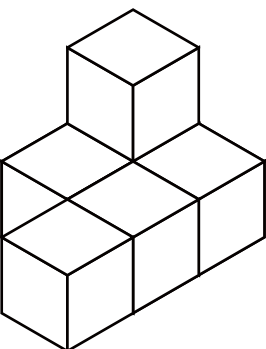
2



() 減らす



3



() 減らす

