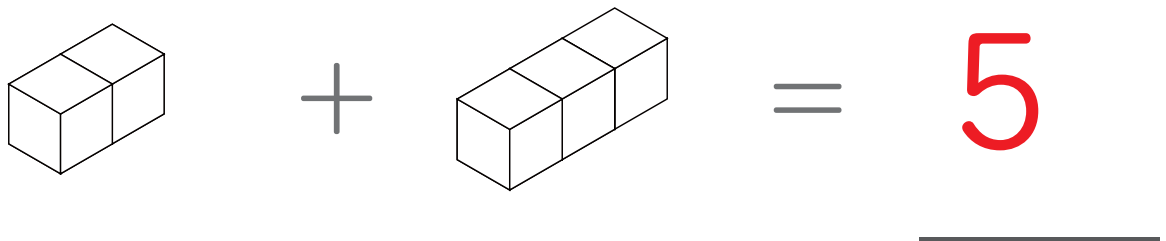


つ き けいさんもんだい
積み木の計算問題① (た ざん) (こた 答え)

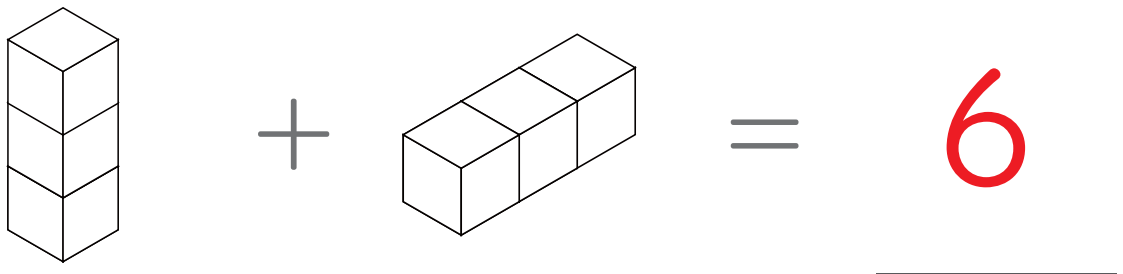
みぎ ひだり つ き
右と左の積み木をあわせるといくつの積み木になりますか。

1



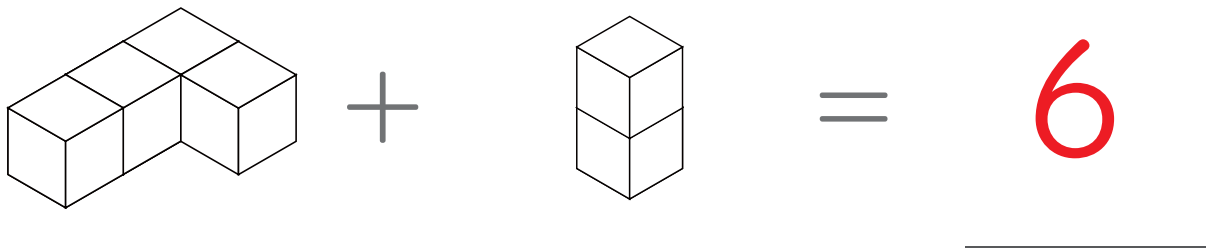
A diagram showing a 2x1 block of cubes on the left, followed by a plus sign, then a 1x3 block of cubes, followed by an equals sign, and the number 5. The number 5 is written in red and has a horizontal line underneath it.

2



A diagram showing a 3x1 block of cubes on the left, followed by a plus sign, then a 1x3 block of cubes, followed by an equals sign, and the number 6. The number 6 is written in red and has a horizontal line underneath it.

3

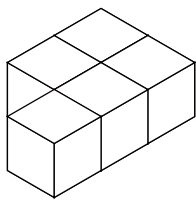
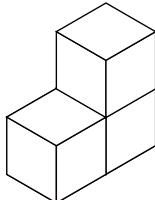


A diagram showing a 2x2 block of cubes on the left, followed by a plus sign, then a 2x1 block of cubes, followed by an equals sign, and the number 6. The number 6 is written in red and has a horizontal line underneath it.

つ き けいさんもんだい
積み木の計算問題① (た ざん 足し算) (こた 答え)

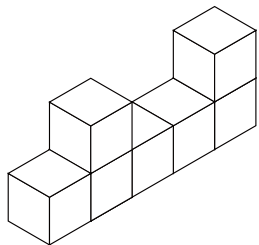

みぎ ひだり つ き
右と左の積み木をあわせるといくつの積み木になりますか。

1

 $+$  $=$

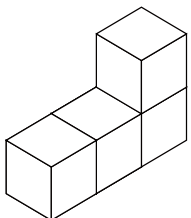
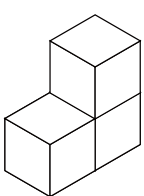
9

2

 $+$  $=$

8

3

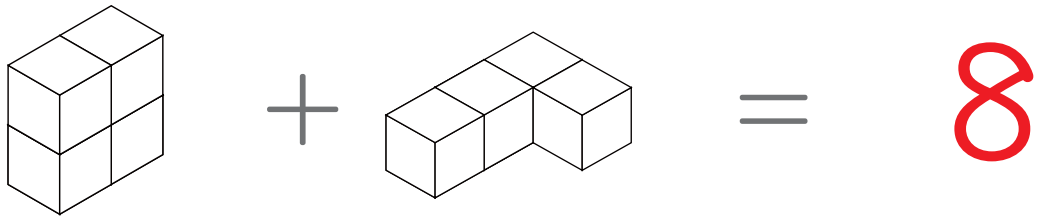
 $+$  $=$

7

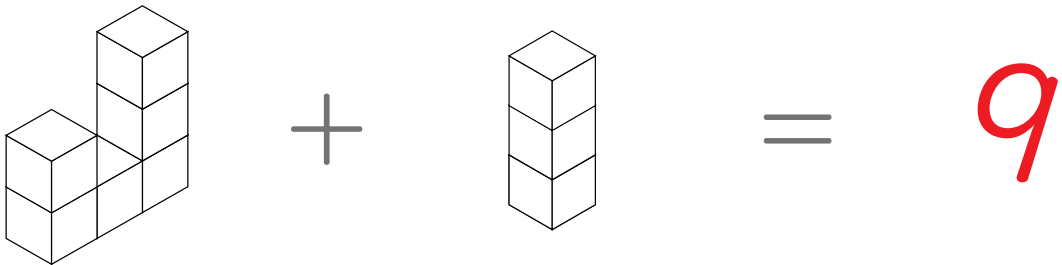
つ き けいさんもんだい
積み木の計算問題① (た ざん) (こた 答え)

みぎ ひだり つ き
右と左の積み木をあわせるといくつの積み木になりますか。

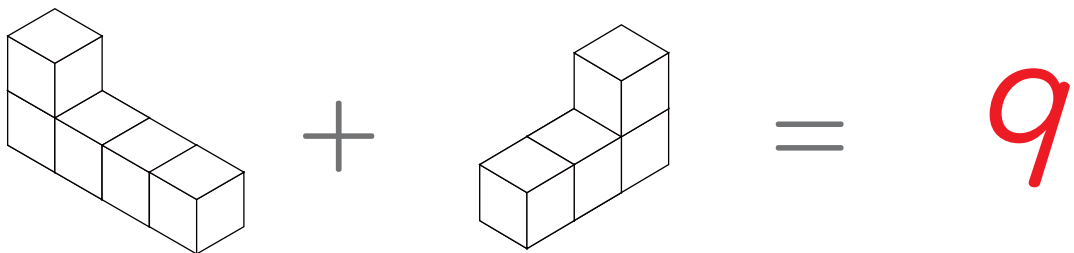
1



2



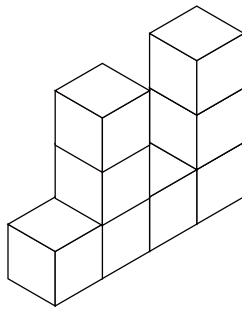
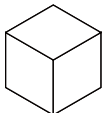
3



つ き けいさんもんだい
積み木の計算問題① (足し算) (答え)

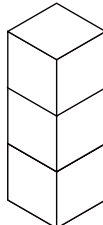
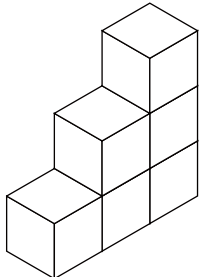
みぎ ひだり つ き
右と左の積み木をあわせるといくつの積み木になりますか。

1

 $+$  $=$

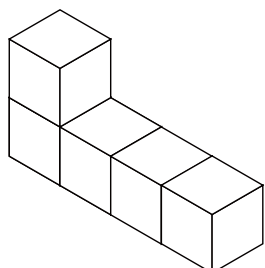
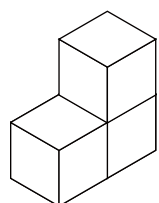
9

2

 $+$  $=$

9

3

 $+$  $=$

8
