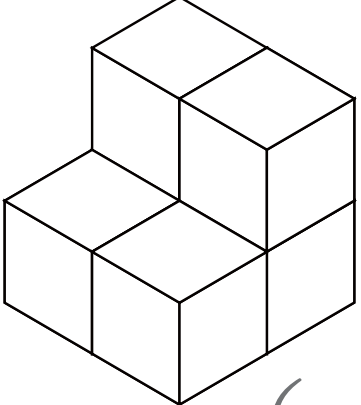
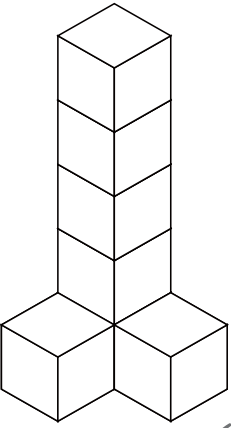

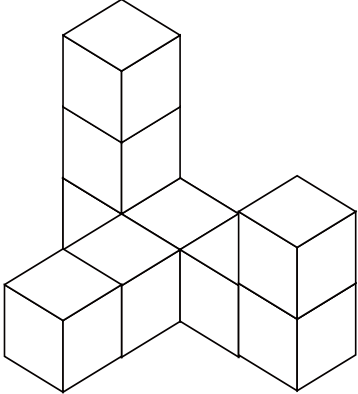
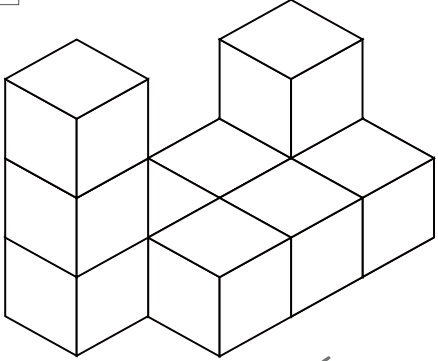



つ き かぞ もんだい  
積み木を数える問題 ①

つ き おな おお かぞ か  
積み木 (同じ大きさのブロック) を数えて ( ) に数を書きましょう。

<p>1</p>  <p>( )</p>	<p>2</p>  <p>( )</p>
<p>3</p>  <p>( )</p>	<p>4</p>  <p>( )</p>
<p>5</p>  <p>( )</p>	<p>6</p>  <p>( )</p>