
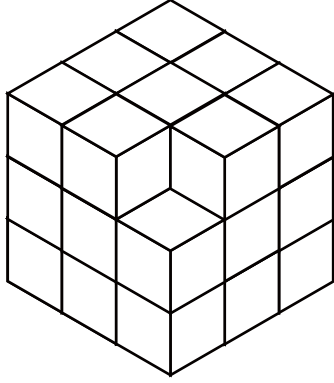
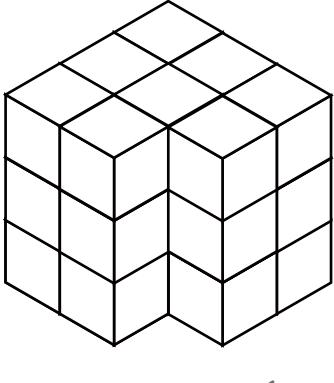
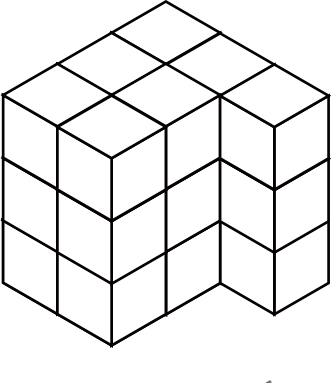
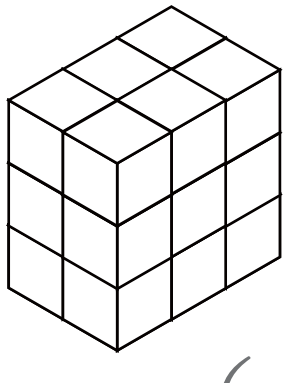
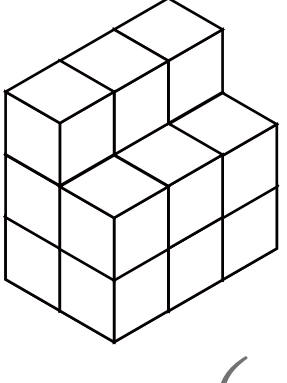


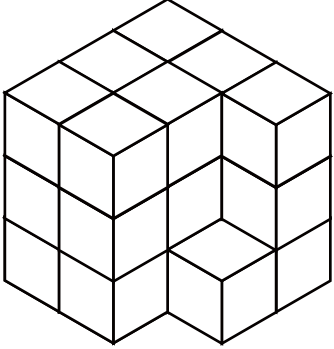
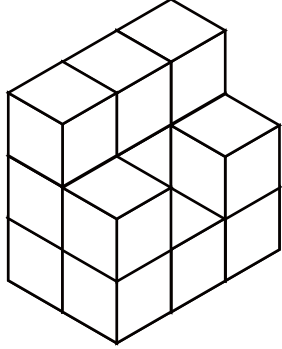
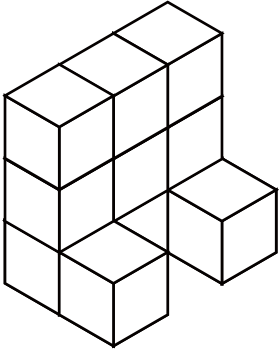

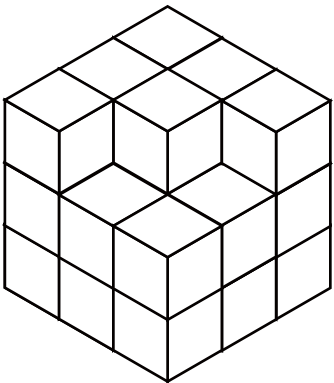
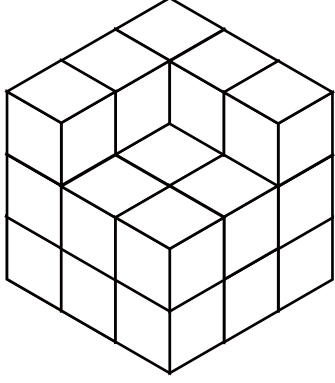
こいじょう つ き かぞ もんだい
 10個以上の積み木を数える問題② (答え)

積み木 (同じ大きさのブロック) を数えて () に数を書きましょう。

<p>1</p>  <p>(27)</p>	<p>2</p>  <p>(26)</p>
<p>3</p>  <p>(24)</p>	<p>4</p>  <p>(21)</p>
<p>5</p>  <p>(18)</p>	<p>6</p>  <p>(15)</p>

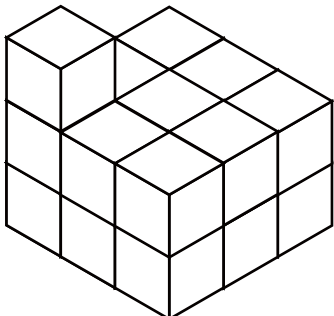
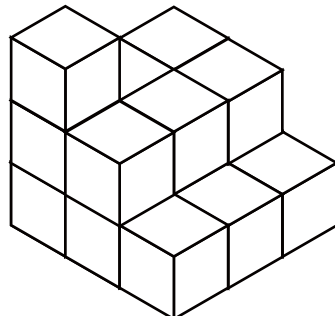
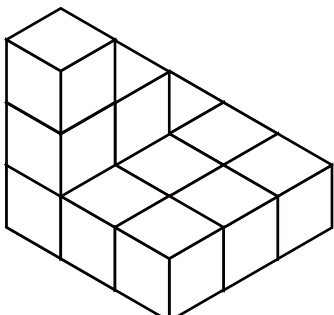
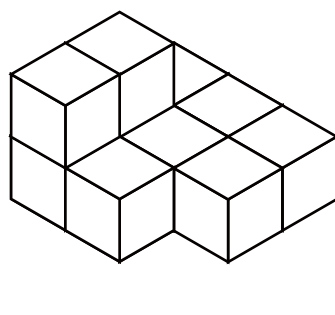
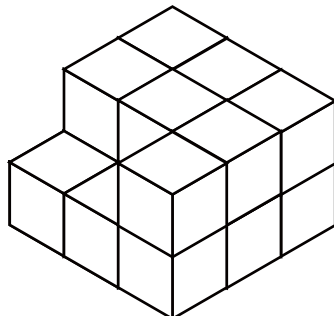
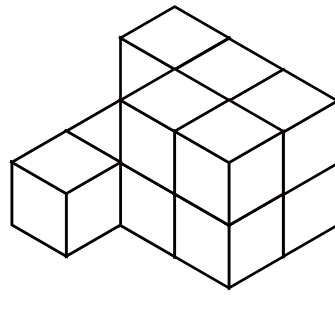
こいじょう つ き かぞ もんだい
 10個以上の積み木を数える問題② (答え)

積み木 (同じ大きさのブロック) を数えて () に数を書きましょう。

<p>1</p>  <p>(22)</p>	<p>2</p>  <p>(14)</p>
<p>3</p>  <p>(11)</p>	<p>4</p>  <p>(24)</p>
<p>5</p>  <p>(24)</p>	<p>6</p>  <p>(23)</p>

こいじょう つ き かぞ もんだい
 10個以上の積み木を数える問題② (答え)

積み木 (同じ大きさのブロック) を数えて () に数を書きましょう。

<p>1</p>  <p>(19)</p>	<p>2</p>  <p>(16)</p>
<p>3</p>  <p>(12)</p>	<p>4</p>  <p>(10)</p>
<p>5</p>  <p>(16)</p>	<p>6</p>  <p>(12)</p>