
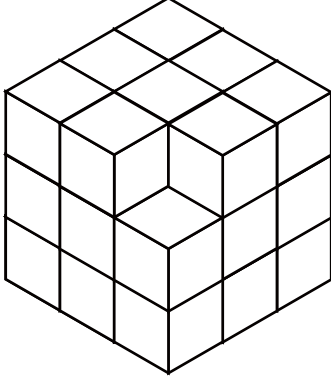
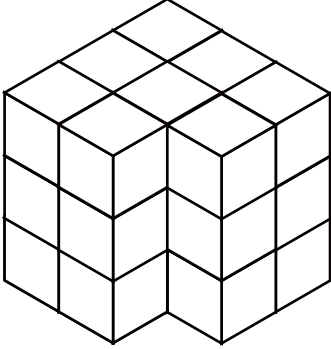
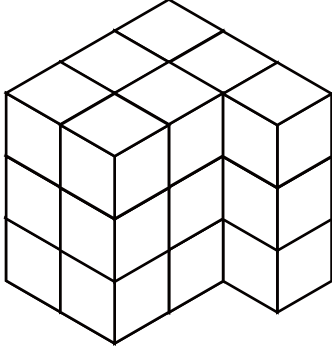

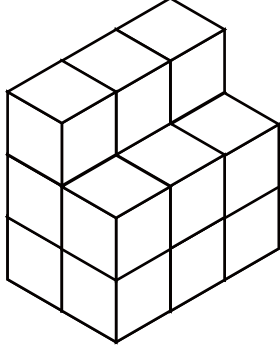


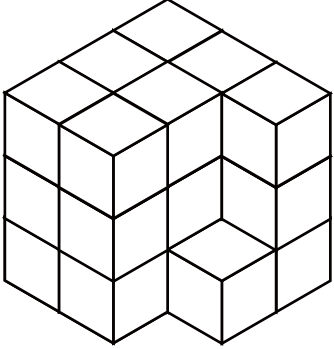
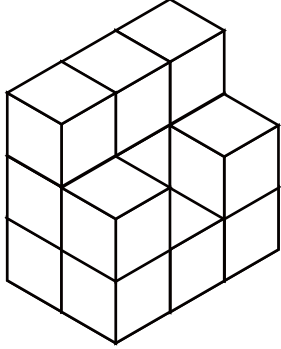
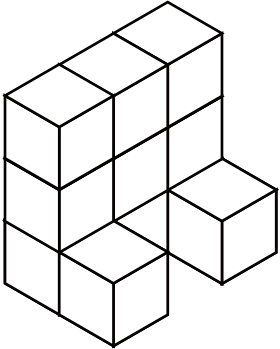

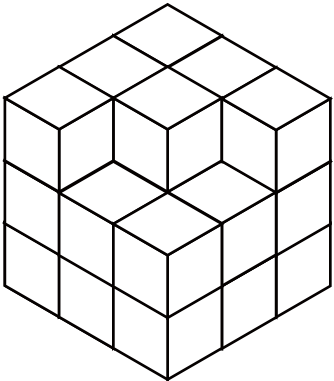
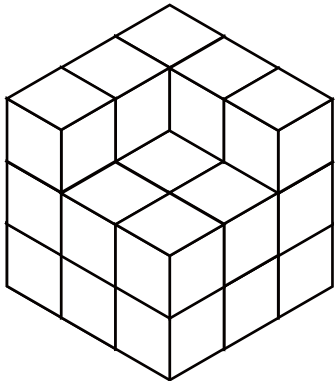
こいじょう つ き かぞ もんだい
 10個以上の積み木を数える問題 ②

積み木 (同じ大きさのブロック) を数えて () に数を書きましょう。

| | |
|---|--|
| <p>1</p>  <p>()</p> | <p>2</p>  <p>()</p> |
| <p>3</p>  <p>()</p> | <p>4</p>  <p>()</p> |
| <p>5</p>  <p>()</p> | <p>6</p>  <p>()</p> |

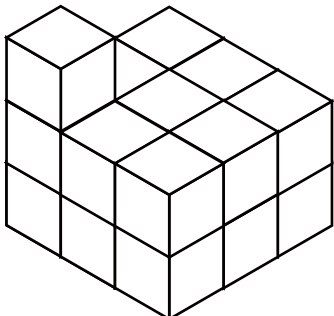
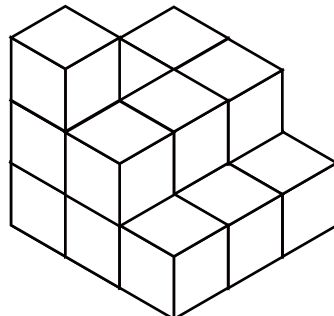
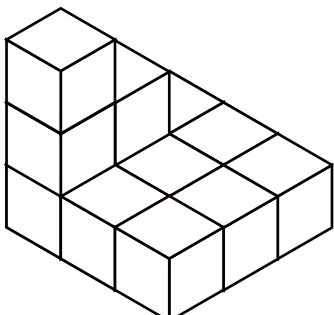
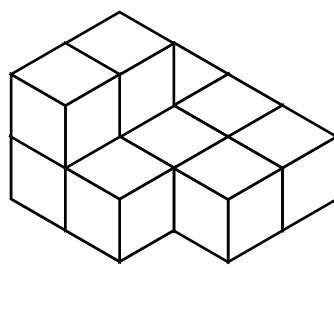
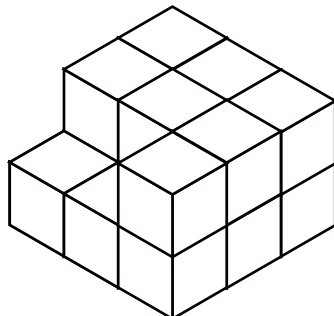
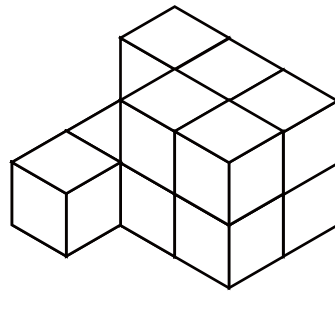
こいじょう つ き かぞ もんだい
 10個以上の積み木を数える問題 ②

積み木 (同じ大きさのブロック) を数えて () に数を書きましょう。

| | |
|---|--|
| <p>1</p>  <p>()</p> | <p>2</p>  <p>()</p> |
| <p>3</p>  <p>()</p> | <p>4</p>  <p>()</p> |
| <p>5</p>  <p>()</p> | <p>6</p>  <p>()</p> |

こいじょう つ き かぞ もんだい
 10個以上の積み木を数える問題②

積み木 (同じ大きさのブロック) を数えて () に数を書きましょう。

| | |
|---|--|
| <p>1</p>  <p>()</p> | <p>2</p>  <p>()</p> |
| <p>3</p>  <p>()</p> | <p>4</p>  <p>()</p> |
| <p>5</p>  <p>()</p> | <p>6</p>  <p>()</p> |