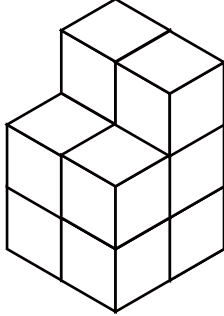

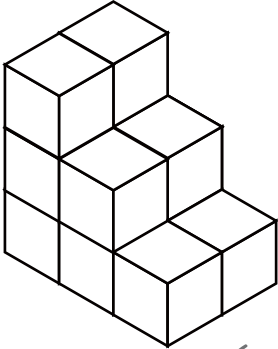
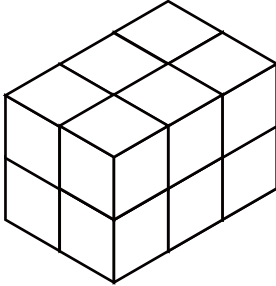

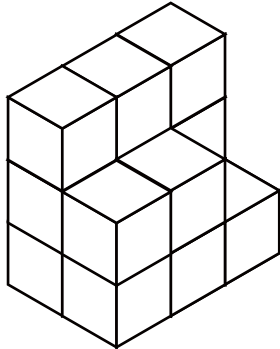



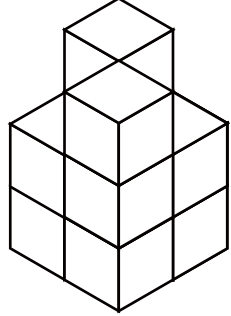

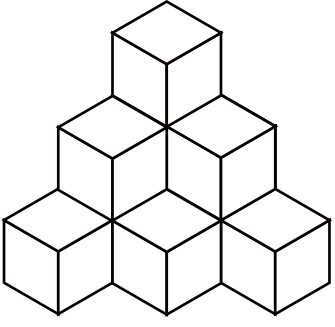
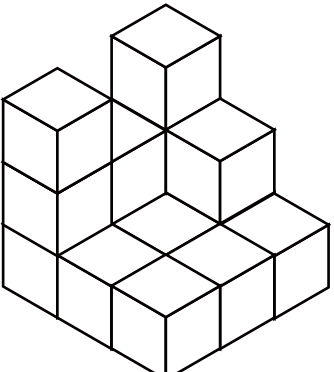
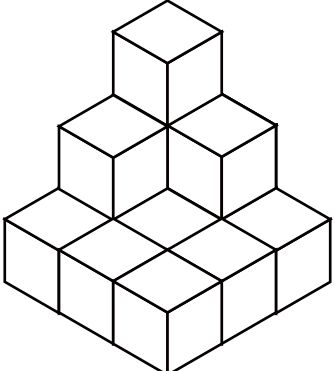
こいじょう つ き かぞ もんだい 10個以上の積み木を数える問題 ①

積み木 (同じ大きさのブロック) を数えて () に数を書きましょう。

<p>1</p>  <p>()</p>	<p>2</p>  <p>()</p>
<p>3</p>  <p>()</p>	<p>4</p>  <p>()</p>
<p>5</p>  <p>()</p>	<p>6</p>  <p>()</p>

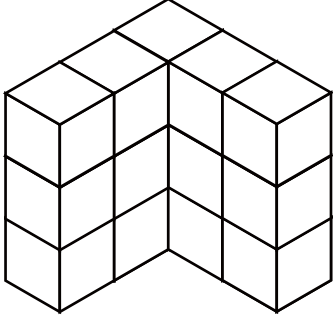

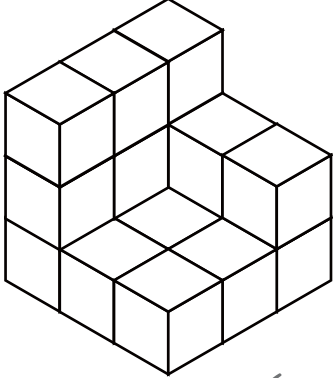
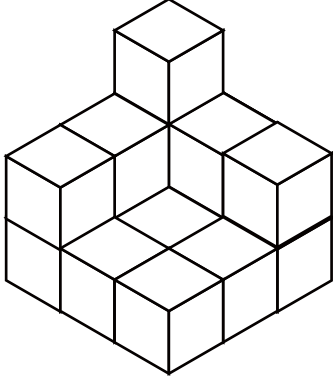
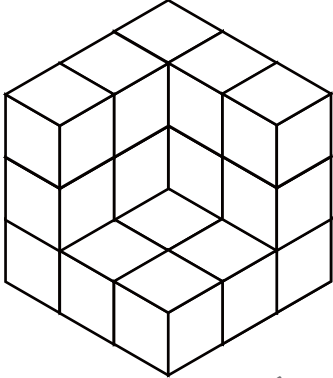
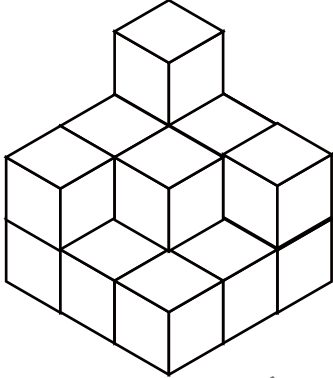
こいじょう つ き かぞ もんだい 10個以上の積み木を数える問題 ①

積み木 (同じ大きさのブロック) を数えて () に数を書きましょう。

<p>1</p>  <p>()</p>	<p>2</p>  <p>()</p>
<p>3</p>  <p>()</p>	<p>4</p>  <p>()</p>
<p>5</p>  <p>()</p>	<p>6</p>  <p>()</p>

こいじょう つ き かぞ もんだい
 10個以上の積み木を数える問題 ①

積み木 (同じ大きさのブロック) を数えて () に数を書きましょう。

<p>1</p>  <p>()</p>	<p>2</p>  <p>()</p>
<p>3</p>  <p>()</p>	<p>4</p>  <p>()</p>
<p>5</p>  <p>()</p>	<p>6</p>  <p>()</p>