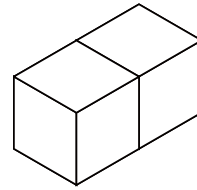
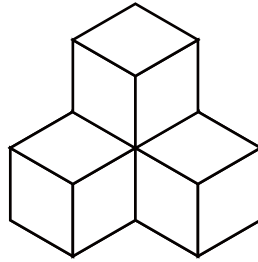
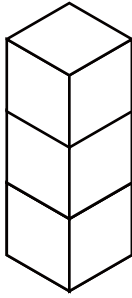


つ き あ かぞ もんだい
積み木を合わせて数える問題 ②

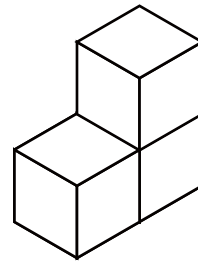
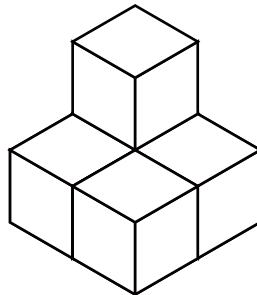
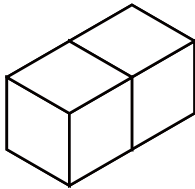
つ き あ かぞ こた
積み木を合わせて数えるといくつになるか () に答えましょう。

1



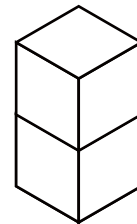
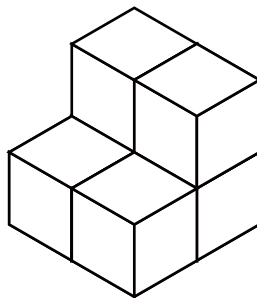
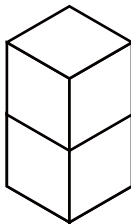
()

2



()

3



()