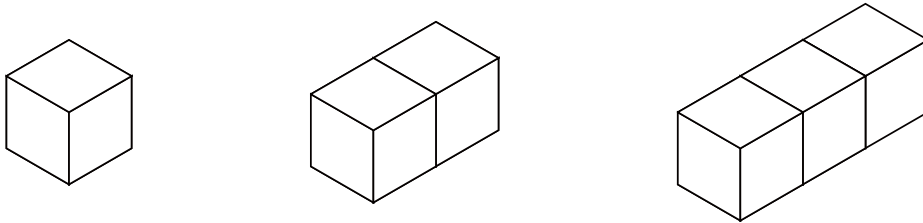


つ き あ かぞ もんだい
積み木を合わせて数える問題 ① (答え)

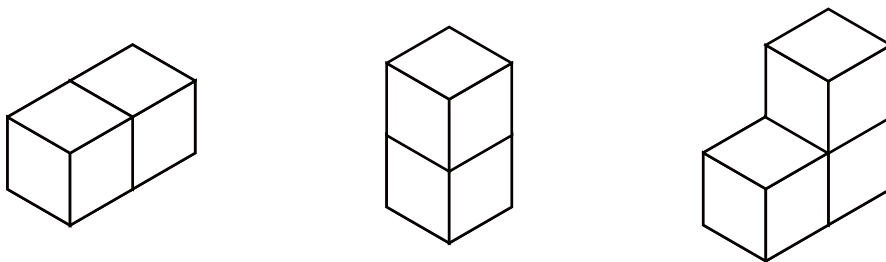
つ き あ かぞ こた
積み木を合わせて数えるといくつになるか () に答えましょう。

1



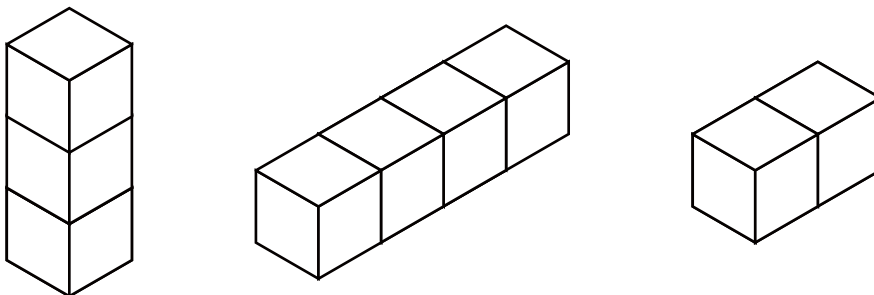
(6)

2



(7)

3

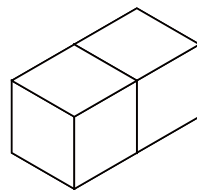
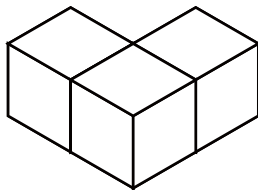
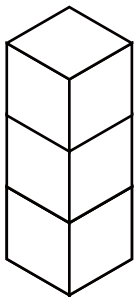


(9)

積み木を合わせて数える問題 ① (答え)

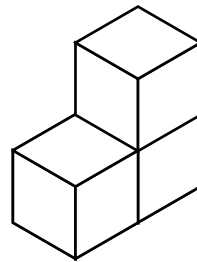
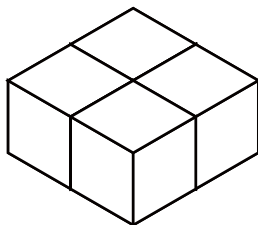
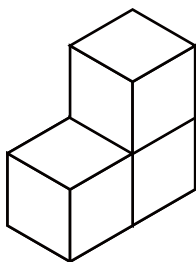
積み木を合わせて数えるといくつになるか () に答えましょう。

1



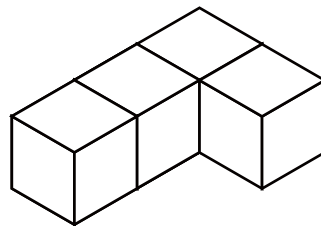
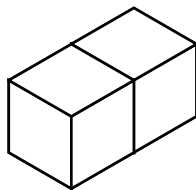
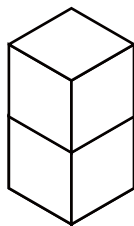
(8)

2



(10)

3



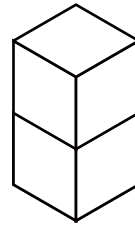
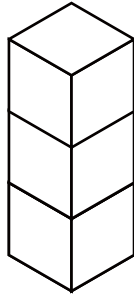
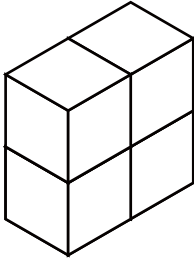
(8)

つ き あ かぞ もんだい
積み木を合わせて数える問題 ①

こた
(答え)

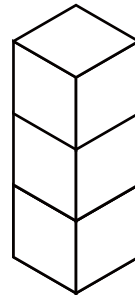
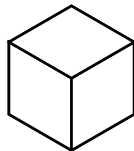
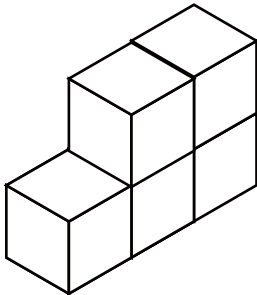
つ き あ かぞ こた
積み木を合わせて数えるといくつになるか () に答えましょう。

1



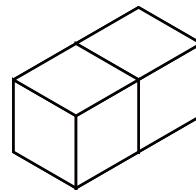
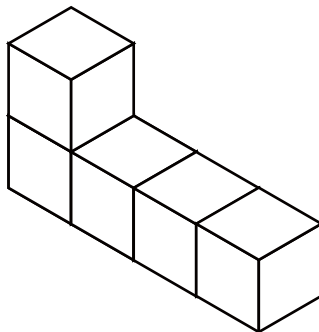
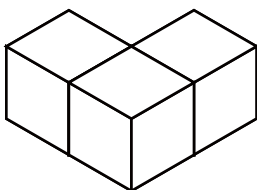
(9)

2



(7)

3

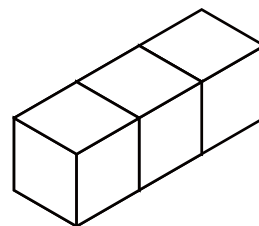
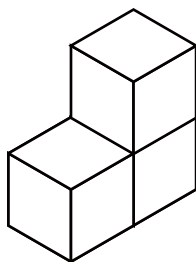
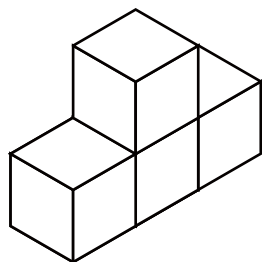


(10)

積み木を合わせて数える問題 ① (答え)

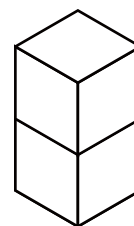
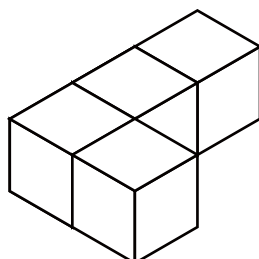
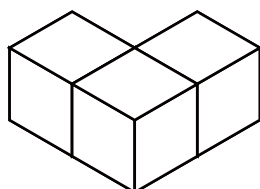
積み木を合わせて数えるといくつになるか () に答えましょう。

1



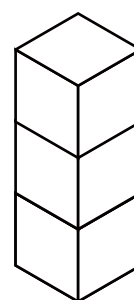
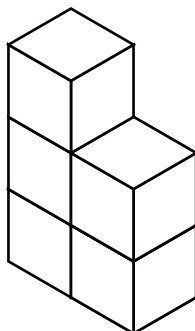
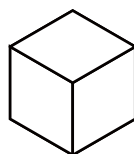
(10)

2



(9)

3



(9)