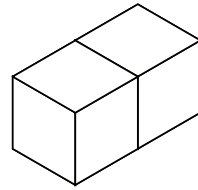
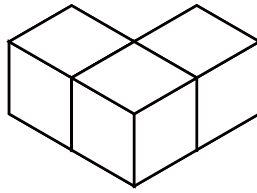
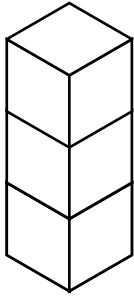


つ き あ かぞ もんだい  
積み木を合わせて数える問題 ①

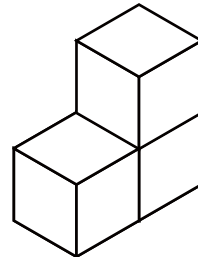
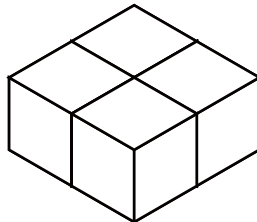
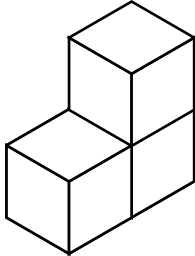
つ き あ かぞ こた  
積み木を合わせて数えるといくつになるか ( ) に答えましょう。

1



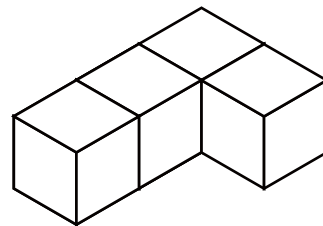
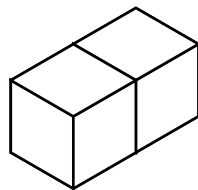
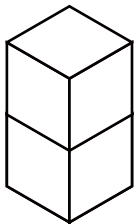
( )

2



( )

3



( )