



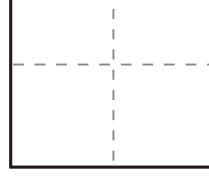
かず
数

くろまる 黒丸ヒント付きの足し算 (STEP3)

くろまる 黒丸をヒントに次の計算をしましょう。



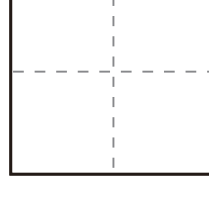
(1)

$$9 + 3 = \square$$



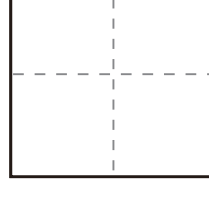
(2)

$$8 + 4 = \square$$



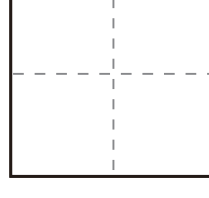
(3)

$$4 + 7 = \square$$

(4)

$$9 + 9 = \square$$

(5)

$$5 + 6 = \square$$

