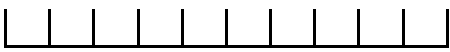
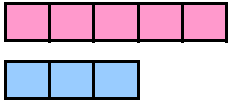


タイルを使ったたしざん

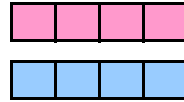
がつ にち

なまえ

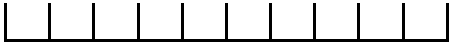
$$5 + 3 =$$



$$4 + 4 =$$



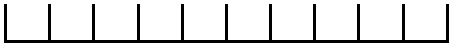
$$2 + 5 =$$



$$5 + 1 =$$



$$3 + 5 =$$



$$1 + 5 =$$



$$4 + 3 =$$



$$2 + 4 =$$

