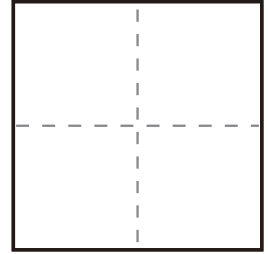
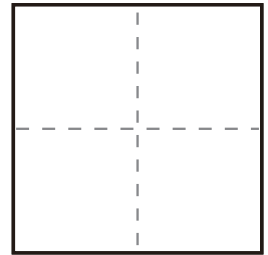


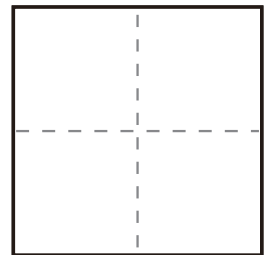
$$\textcircled{1} \quad 5 + 3 =$$



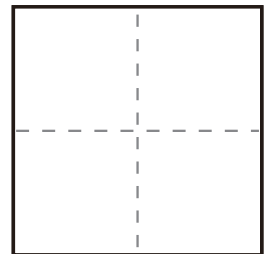
$$\textcircled{2} \quad 7 + 0 =$$



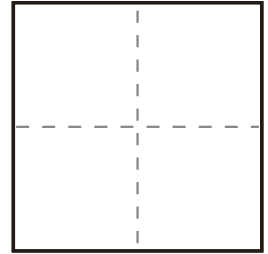
$$\textcircled{3} \quad 2 + 0 =$$



$$\textcircled{4} \quad 7 + 1 =$$



$$\textcircled{5} \quad 2 + 1 =$$



$$\textcircled{6} \quad 1 + 7 =$$

