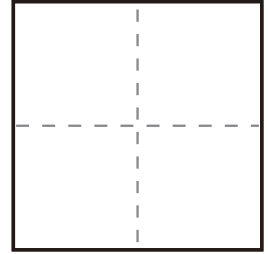
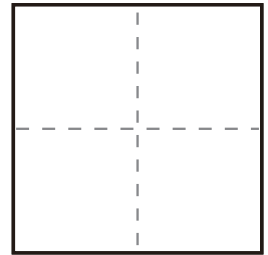


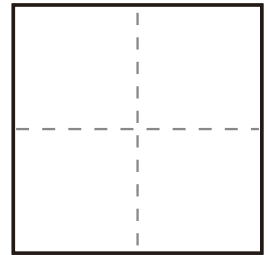
$$\textcircled{1} \quad 2 + 1 =$$



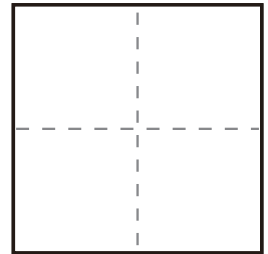
$$\textcircled{2} \quad 6 + 2 =$$



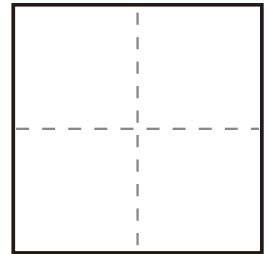
$$\textcircled{3} \quad 5 + 4 =$$



$$\textcircled{4} \quad 0 + 6 =$$



$$\textcircled{5} \quad 4 + 0 =$$



$$\textcircled{6} \quad 3 + 2 =$$

