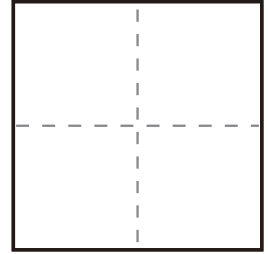
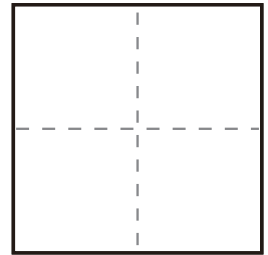


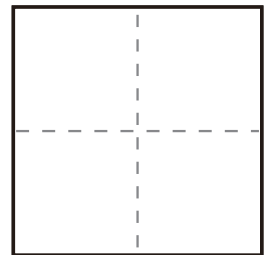
$$\textcircled{1} \quad 2 + 3 =$$



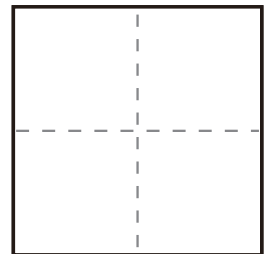
$$\textcircled{2} \quad 1 + 2 =$$



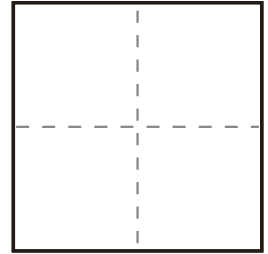
$$\textcircled{3} \quad 1 + 0 =$$



$$\textcircled{4} \quad 2 + 7 =$$



$$\textcircled{5} \quad 5 + 0 =$$



$$\textcircled{6} \quad 8 + 1 =$$

